

D 101.11: 11-684/992

TM 11-684

DEPARTMENT OF THE ARMY TECHNICAL MANUAL

UNIVERSITY OF VIRGINIA

APR 27 '93 193-0179

ALDERMAN-GOV'T DOCUMENTS

PRINCIPLES AND APPLICATIONS OF MATHEMATICS FOR COMMUNICATIONS-ELECTRONICS

This copy is a reprint which includes current
pages from Change 1.

*HEADQUARTERS, DEPARTMENT OF THE ARMY
OCTOBER 1961*

University of Virginia Library
D 101.11:11-684/992
ADOC Principles and applications of



UX 002 247 182

CHANGE }
No. 1 }

HEADQUARTERS
DEPARTMENT OF THE ARMY
WASHINGTON, D. C., 24 July 1967

PRINCIPLES AND APPLICATIONS
OF MATHEMATICS FOR
COMMUNICATIONS-ELECTRONICS

TM 11-684, 6 October 1961, is changed as follows:

TAGS 1100A

Page	Paragraph	Line	Manual now reads --	Change to read --
4	5, <u>Example 1</u>	4	6.25	.625
6	12g (10)		$1\frac{7}{8}$	$\frac{7}{8}$
12	24j	9	from 1 to 100	from 1 to 1,000
17	31	2	arithmetic (ch. 5).	arithmetic.
18	Caption of figure 6		(-1 and -5).	(-2 and -3).
21	42k, <u>Example 2</u>	4	$-(s^2 - 2s^2 - s + 1)$	$-(s^2 + 2s^2 + s - 1)$
22	45, <u>Example 1</u>	2	$(5^2)^4 = 5^{2 \cdot 4} = 5^8$	$(5^2)^4 = 5^2 \cdot 4 = 5^8$
22	45, <u>Example 2</u>	3	or $2^1 \cdot 3^1 \cdot 4^1 \cdot 5^1 = 2 \cdot 3 \cdot 4 \cdot 5$	or $2^1 \cdot 3^1 \cdot 4^1 \cdot 5^1 = 2 \cdot 3 \cdot 4 \cdot 5$
22	45, <u>Example 3</u>	2	$(6s^2)^3 = 6^3 \cdot 3s^2 \cdot 3 = 6^3 s^6$	$(6s^2)^3 = 6^3 \cdot 3s^2 \cdot 3 = 6^3 s^6$
22	45, <u>Example 4</u>	2	$[(s^2)^3]^4 = [s^2 \cdot 3]^4 = [s^6]^4 = s^{24}$	$[(s^2)^3]^4 = [s^2 \cdot 3]^4 = [s^6]^4 = s^{24}$

Page	Paragraph	Lines	Manual now reads —	Change to read —
22	45, <u>Example 5</u>	2	$\left(\frac{2^5}{x^2}\right) = \frac{2^{1 \cdot 5}}{x^{2 \cdot 5}} = \frac{2^5}{x^{10}} = \frac{32}{x^{10}}$	$\left(\frac{2^5}{x^2}\right) = \frac{2^1 \cdot 5}{x^2 \cdot 5} = \frac{2^5}{x^{10}} = \frac{32}{x^{10}}$
24	49b, <u>Example 3</u>	1	Divide 6a	Divide 6a ²
25	50f (5)		$(3x^2 - 2xy - 5y^2)(3x^2 + 2xy - 5y^2)$	$(3x^2 - 2xy + 5y^2)(3x^2 + 2xy - 5y^2)$
26	56g, <u>Example 3</u>	2	$2ax^2 - 4bx^2 + 6cx^2 = 2x^2(a - 2b + 3c)$	$2ax^2 - 4bx^2 + 6cx^2 = 2x^2(a - 2b + 3c)$
30	59g	6	$zb + xb + ab$	$zb + ab$
32	61c (8)		$\sqrt[3]{-x^9}$	$\sqrt[3]{-x^3}$
32	61d (9)		$\frac{2}{\pi} \frac{1}{1} + \pi \frac{2}{2}$	$\pi r_1^2 + \pi r_2^2$
33	63c	3	$-\frac{(x-y)(x-2y)}{x+y} = \frac{(x+y)(x-2y)(y-x)(x-2y)}{x+y}$	$-\frac{(x-y)(x-2y)}{x+y} = \frac{(x+y)(x-2y)(y-x)(x-2y)}{x+y}$
36	68g, <u>Example 1</u>	4	$\frac{6ab}{7x} \cdot \frac{21x^2y}{21ab} = \frac{3xy}{4}$	$\frac{6ab}{7x} \cdot \frac{21x^2y}{21ab} = \frac{3xy}{4}$

Page	Paragraph	Line	Manual now reads —	Change to read —
37	69b (7)	2	denominator is 2PR.	denominator is $6\pi r^2c$.
38	72a	8	$\sqrt{2 \cdot 5^4} = 5^2\sqrt{2} = 25\sqrt{2}$	$\sqrt{2 \cdot 5^4} = 5^2\sqrt{2} = 25\sqrt{2}$
38	72a, <u>Example 1</u>	2 & 3	$\sqrt{50} = \sqrt{25 \cdot 2} = \sqrt{25} \cdot \sqrt{2}$	$\sqrt{50} = \sqrt{25 \cdot 2} = \sqrt{25} \cdot \sqrt{2}$
40	73, <u>Example 3</u>	3	$= (4r)^{\frac{2}{3}} - 4(4r)^{\frac{1}{3}} + (4r)^{\frac{5}{6}}$	$= (4r)^{\frac{2}{3}} - r(4r)^{\frac{1}{3}} + (4r)^{\frac{5}{6}}$
40	73, <u>Example 4</u>		$2\sqrt{6} + 9\sqrt{\frac{2}{3}} - \sqrt[4]{36}$	$2\sqrt{6} + 9\sqrt{\frac{2}{3}} - \sqrt[4]{36}$
			$= 2\sqrt{6} + 9\sqrt{\frac{2 \cdot 3}{3 \cdot 3}} - \sqrt[4]{6 \cdot 6}$	$= 2\sqrt{6} + 9\sqrt{\frac{2}{3}} - \sqrt[4]{6 \cdot 6}$
			$= 2\sqrt{6} + \frac{9}{3}\sqrt{6} - \sqrt[4]{6^2}$	$= 2\sqrt{6} + \frac{9}{3}\sqrt{6} - \sqrt[4]{6^2}$
			$= 2\sqrt{6} + 3\sqrt{6} - \sqrt{6}$	$= 2\sqrt{6} + 3\sqrt{6} - \sqrt{6}$
			$= 4\sqrt{6}$	$= 4\sqrt{6}$
41	76a, <u>Example 1</u>	2	$\frac{\sqrt{16}}{\sqrt{5}} = \sqrt{\frac{5}{16}} = \sqrt{5}$	$\frac{\sqrt{16}}{\sqrt{5}} = \sqrt{\frac{16}{5}} = \sqrt{5}$

Page	Paragraph	Line	Manual now reads —	Change to read —
43	76 ₂ , Example 2	2	$\frac{\sqrt{1+z} - \sqrt{1-z}}{\sqrt{1+z} + \sqrt{1-z}}$ $\frac{\sqrt{1+z} - \sqrt{1-z}}{\sqrt{1+z} + \sqrt{1-z}}$ $\frac{\sqrt{1+z} - \sqrt{1-z}}{\sqrt{1+z} + \sqrt{1-z}}$ $\frac{\sqrt{1+z} - \sqrt{1-z}}{\sqrt{1+z} + \sqrt{1-z}}$	$\frac{\sqrt{1+z} - \sqrt{1-z}}{\sqrt{1+z} + \sqrt{1-z}} =$ $\frac{\sqrt{1+z} - \sqrt{1-z}}{\sqrt{1+z} + \sqrt{1-z}}$ $\frac{\sqrt{1+z} - \sqrt{1-z}}{\sqrt{1+z} + \sqrt{1-z}}$ $\frac{\sqrt{1+z} - \sqrt{1-z}}{\sqrt{1+z} + \sqrt{1-z}}$
43	76 ₂ (9)		$(2r_1 + r_2)^{\frac{1}{2}}$	$(2r_1 + 2r_2)^{\frac{1}{2}}$
43	76 ₂ (10)		$5i + 3$ $\sqrt{(i+3)^2}$	$i + 3$ $\sqrt{(i+3)^2}$
43	76 ₂ (4)		$\frac{257}{\sqrt{25}}$	$\frac{257}{\sqrt{57}}$
43	76 ₂ (5)		$\frac{2}{\sqrt{6-2}}$	$\frac{2}{\sqrt{6-2}}$
43	76 ₂ (9)		$\frac{\sqrt{e^2 + f^2 + f}}{\sqrt{e^2 + f^2 - f}}$	$\frac{\sqrt{e^2 + f^2 + f}}{\sqrt{e^2 + f^2 - f}}$

Page	Paragraph	Line	Manual now reads —	Change to read —
44	77b	7	$j^7 = j \cdot j \cdot j \cdot j \cdot j \cdot j \cdot j = j^4 \cdot j \cdot j = \sqrt{-1}$	$j^7 = j \cdot j \cdot j \cdot j \cdot j \cdot j \cdot j = j^4 \cdot j \cdot j = \sqrt{-1}$
44	77c <u>Example 2</u>	2-5	$6\sqrt{-2} + 5\sqrt{-8} + 8\sqrt{-18}$ $= j^3\sqrt{2} + j^3\sqrt{8} + j^3\sqrt{18}$ $= j^3\sqrt{2} + j(5 \cdot 2)\sqrt{2} + j(8 \cdot 3)\sqrt{2}$ $= (j^3 + j^5 + j^6)\sqrt{2}$ $= j^{10}\sqrt{2}$	$6\sqrt{-2} + 5\sqrt{-8} + 8\sqrt{-18}$ $= j^6\sqrt{2} + j^5\sqrt{8} + j^8\sqrt{18}$ $= j^6\sqrt{2} + j(5 \cdot 2)\sqrt{2} + j(8 \cdot 3)\sqrt{2}$ $= (j^6 + j^{10} + j^{24})\sqrt{2}$ $= j^{40}\sqrt{2}$
44	77c. <u>Example 3</u>	2	$\sqrt{-36} - \sqrt{-64} = j^3 - j^3 = -j^3$	$\sqrt{-36} - \sqrt{-64} = j^6 - j^8 = -j^2$
44	77c. <u>Example 4</u>	3 & 4	$= (j^{10} - j^3)\sqrt{2}$ $= j^{10}\sqrt{2}$	$= (j^{18} - j^8)\sqrt{2}$ $= j^{10}\sqrt{2}$
45	77d. <u>Example 1</u>	2	$\sqrt{-16} \cdot \sqrt{-4} = j^4 \cdot j^2 = j^8 = -8$	$\sqrt{-16} \cdot \sqrt{-4} = j^4 \cdot j^2 = j^8 = -8$ $(-1)8 = -8$
45	77d. <u>Example 2</u>	2	$\sqrt{-81} \cdot \sqrt{-25} \cdot \sqrt{-49}$ $= j^3 \cdot j^3 \cdot j^3$ $= j^9$ $= (-j)^3$ $= -j^3$	$\sqrt{-81} \cdot \sqrt{-25} \cdot \sqrt{-49}$ $= j^9 \cdot j^6 \cdot j^7$ $= j^{21}$ $= (-j)^3$ $= -j^3$

Page	Paragraph	Line	Manual now reads—	Change to read—
45	77b <u>Example 4</u>	2	$\frac{6}{j} = \frac{6}{j} \cdot \frac{j}{j} = \frac{j6}{j^2} =$ $\frac{j6}{-1} = -j6$	$\frac{6}{j} = \frac{6}{j} \cdot \frac{j}{j} = \frac{j6}{j^2} =$ $\frac{j6}{-1} = -j6$
47	78b <u>Example 1</u>	4	$= \frac{8 + j - (1 - 1)4}{1 - (-1)}$	$= \frac{8 + j - (-1)4}{1 - (-1)}$
62	84j (9)	2	$\frac{3}{z} + \frac{1}{y} = 1\frac{3}{5}$	$\frac{3}{z} - \frac{1}{y} = 1\frac{3}{5}$
62	102g (4)	1	$f(z) = j^2 - 6z + 12$	$f(z) = s^2 - 6s + 12$
70	118, <u>Example 2</u> <u>Step 3</u>	5	.0021	.00121
71	119, <u>Example 2</u>	1	6.7166 - 10	6.8166 - 10
71	119, <u>Example 2</u> <u>Step 6</u>	4	6.7166 - 10	6.8166 - 10
84	140b <u>Example 2</u>	10	$D = \sqrt[3]{\frac{A}{v}}$	$D = 2\sqrt{\frac{A}{v}}$

Page	Paragraph	Lines	Manual now reads —	Change to read —
84	140g, <u>Example 2</u>	12 & 13	$D = \sqrt[2]{\frac{78.54}{3.1416}}$ $D = \sqrt[2]{25}$	$D = 2\sqrt{\frac{78.54}{3.1416}}$ $D = 2\sqrt{25}$
89	147, <u>Example 1</u>	1	Given the right triangle ABC (fig. 28):	Given the right triangle ABC (fig. 34):
90	147, <u>Example 2</u>	1	Given the right triangle ABC (fig. 28): side A is $\sqrt{5}$;	Given the right triangle ABC (fig. 34): side a is $\sqrt{5}$;
91	148, <u>Example 1</u>	15	$\cos A = \frac{\sqrt{6}}{30} = \frac{1}{5}$	$\cos A = \frac{6}{30} = \frac{1}{5}$
95	152d, <u>Example 1</u>	3	$3\sqrt{71^\circ 22' 21''}$	$3\sqrt{71^\circ 22' 21''}$
95	152d, <u>Example 2</u>	3	$6\sqrt{166^\circ 17' 36''}$	$6\sqrt{166^\circ 17' 36''}$
105	164g (4)	1	Side B	Side b
107	165	1	An oblique triangle is one in which one of	An oblique triangle is one in which none of
122	175g	4	$40^\circ = \frac{1}{4} \pi$ radians	$45^\circ = \frac{1}{4} \pi$ radians

Page	Paragraph	Line	Manual new reads --	Change to read --
185	182j	4	cut c	cut A
189	204j			Delete the first sentence and insert the following: A 300-volt, 60-cycle ac generator is connected in series with a 6-ohm resistance, and 8-ohm inductive reactance, and a 16-ohm capacitive reactance.
179	224	25	(par. 257).	(par. 223).
202	21j	2	2,567 pounds	2,567 pounds
202	42g (3)		$\frac{3}{35}$	$-\frac{3}{35}$
202	42j (5)		$-\frac{2}{3}$ ampere	$\frac{2}{3}$ ampere
202	50g (1)		$4e^4 - 4e^{10} + 4e^4$	$6e^4 - 4e^{10} + 4e^4$
202	50j (2)		$\frac{1}{r^2e^4}$	$\frac{1}{r^2e^4}$
202	50j (6)		$\frac{e - e}{es}$	$\frac{e - e}{es}$

Page	Paragraph	Line	Manual now reads --	Change to read --
223	61 ₂ (2)		- 8	8
223	61 ₂ (5)		- 10ab ²	± 10ab ²
223	61 ₂ (7)		14 ² xy	14xy ²
223	60 ₂ (4)		$z = -1 \frac{1}{12}$	$z = -1 \frac{13}{16}$
223	60 ₂ (7)		$\frac{y}{c^2 - e^2} \frac{z(c+d)}{c^2 - e^2}$	$\frac{y}{c^2 - e^2} \frac{z(c+d)}{c^2 - e^2}$
223	60 ₂ (4)		$\frac{6(c^2 - 2)}{x^2 - 5x^2 + 14}$	$\frac{6(x^2 - 2)}{x^2 - 5x^2 + 4}$
223	60 ₂ (5)		$\frac{9c + 2ad + 12d}{12x^2e^2}$	$\frac{9x^2 + 2ad - 12d^2}{12x^2e^2}$
223	60 ₂ (10)		$\frac{3z + 4y}{12x^2}$	$\frac{3z + 4y}{12x^2}$
223	76 ₂ (4)		2 $\sqrt{27}$	2 $\sqrt{27}$
223	76 ₂ (5)		5 $\sqrt{3}$	5 $\sqrt{3}$

Page	Paragraph	Line	Manual now reads—	Change to read—
223	702 (6)		$\sqrt[4]{c^2b}$	$\sqrt[4]{c^2a}$
223	702 (8)		$\sqrt[3]{2b^2c}$	$\sqrt[3]{2b^2a}$
223	702 (3)		$\frac{\sqrt{2a}}{3}$	$\frac{2\sqrt{2a}}{3}$
224	702 (9)		$\frac{c^2 + b^2 + 2\sqrt{c^2 + b^2}}{c^2}$	$\frac{c^2 + 2b^2 + 2\sqrt{c^2 + b^2}}{c^2}$
224	702 (7)		$\sqrt{b} + 3\sqrt{2}$	$\sqrt{b} + 3\sqrt{2}$
224	702 (4)		$4 + j10$	$44 + j10$
224	702 (7)		$b^2 + j10 - a^2$	$b^2 + 2j10 - a^2$
224	702 (5)		$\frac{a^2 + j^2xy - y^2}{a^2y^2}$	$\frac{a^2 + 2jxy - y^2}{a^2 + y^2}$
224	702 (10)		$\frac{b^2 + j10 - b^2}{b^2}$	$\frac{b^2 + j10 - b^2}{b^2 + b^2}$

Page	Paragraph	Line	Manual now reads—	Change to read—
234	86 _g (5)		28 — 9	24 9
235	94 _g (4)		3, 4 — 2 3	3, 4 — 2 3
235	127 _f (4)		83. 28	33. 37
235	153 _h (1)		$\tan A = \frac{4}{\sqrt{33}}$	$\tan A = \frac{4}{33} \sqrt{33}$
236	164 _g (11)		32. 9	30.9
236	164 _g (12)		side opposite 60° / 5. 196 inches, side opposite 30° / 3 inches.	side opposite / 60° 5.196 inches, side opposite / 30° 3 inches.

By Order of the Secretary of the Army:

HAROLD K. JOHNSON,
General, United States Army,
Chief of Staff.

Official:

KENNETH G. WICKHAM,
Major General, United States Army,
The Adjutant General.

Distribution:

Active Army:

USASA (5)
DCSLOG (10)
ACSI (10)
DCSPER (2)
ACSFOR (10)
CORC (10)
CRD (5)
COA (5)
CINFO (10)
CNGB (10)
TSG (5)
USACDCCEA (10)
USACDC (10)
USCONARC (25)
ARADCOM (10)
ARADCOM Rgn (2)
LOGCOMD (5)
Armies (25)
Corps (15)
Div (10)
USAECFB (25)
Instl (2)
USAINTC (5)
Br Svc Sch (2) except
TJAGSA (5)
MFSS (10)
USAADS (50)
USAAMS (50)
USAARMS (50)
USACHS (5)
USACMLCS (5)
USAES (50)
USAINTS (25)
USAIS (50)
USAMPS (50)

USAOC&S (50)
USASESS (50)
USATSCH (5)
USASWS (10)
USAECOM (10)
DASA (5)
MDW (1)
USATC AD (2)
USATC Armor (2)
USATCFLW (2)
USATC FA (2)
USATC Inf (2)
Svc Colleges (2)
AFIP (1)
WRAMC (1)
USAMECOM (1)
POE (1)
AMS (1)
Sig FLDMS (2)
Army Pic Cen (2)
JBUSMC (2)
Units org under fol TOE:
(2 copies each UNOINDC)
11-7
11-16
11-57
11-98
11-117
11-155
11-500 (AA-AE) (4)
11-557
11-587
11-592
11-597

NG: State AG (3); units—same as active Army except allowance is one copy to each unit.

USAR: Same as active Army except allowance is one copy to each unit.

For explanation of abbreviations used, see AR 390-50.

PRINCIPLES AND APPLICATIONS OF MATHEMATICS FOR
 COMMUNICATIONS-ELECTRONICS

	Paragraphs	Page
PART I. MATHEMATICAL PRINCIPLES ESSENTIAL TO COMMUNICATIONS-ELECTRONICS		
CHAPTER 1. INTRODUCTION	1, 2	3
2. PERCENTAGE	3-12	4
3. RATIO AND PROPORTION		
Section I. Ratio	13-15	8
II. Proportion	16-21	8
CHAPTER 4. POWERS AND ROOTS	22-25	12
5. ALGEBRA		
Section I. Introduction	26-31	16
II. Positive and negative numbers	32-42	17
III. Fundamental operations	43-50	21
IV. Factoring	51-61	25
V. Algebraic fractions	62-69	32
VI. Exponents and radicals	70-76	38
VII. Imaginary and complex numbers	77-79	43
VIII. Equations	80-86	48
IX. Quadratic equations	87-94	53
CHAPTER 6. GRAPHS		
Section I. Basic characteristics of graphs	95-99	58
II. Graphing equations	100-103	59
CHAPTER 7. POWERS OF TEN	104-111	65
8. LOGARITHMS	112-127	68
9. PLANE GEOMETRY	128-142	77
10. TRIGONOMETRY		
Section I. Basic trigonometric theory	143-153	87
II. Natural trigonometric functions	154-164	96
III. Trigonometric laws	165-173	107
CHAPTER 11. RADIANS	174-176	120
12. VECTORS	177-181	123

	Paragraphs	Page
PART II. APPLICATIONS OF MATHEMATICAL PRINCIPLES TO COMMON COMMUNICATIONS-ELECTRONICS PROBLEMS		
CHAPTER 13. INTRODUCTION	182-184	126
14. PROBLEMS IN DC ELECTRICITY	185-192	128
15. PROBLEMS IN AC ELECTRICITY	193-204	139
16. APPLICATIONS OF LOGARITHMS TO TRANSMISSION PROBLEMS	205-208	162
17. MISCELLANEOUS ELECTRICAL PROBLEMS	209-217	164
18. GRAPHICAL REPRESENTATION AND SOLUTION OF ELECTRICAL PROBLEMS.	218-220	172
19. BINARY NUMBERS	221-234	177
APPENDIX I. BASIC SLIDE RULE OPERATIONS		184
II. SYSTEMS OF MEASUREMENT		188
III. TABLES		200
ANSWERS TO PROBLEMS		232
INDEX		238

PART I
MATHEMATICAL PRINCIPLES ESSENTIAL TO COMMUNICATIONS-ELECTRONICS

CHAPTER 1
INTRODUCTION

1. Purpose and Scope

a. Purpose. This manual provides the basic mathematics required by communications-electronics personnel.

b. Scope. This manual covers those principles and applications of arithmetic, algebra, logarithms, geometry, and trigonometry that are required for a practical understanding of electricity and electronics. The manual is divided into two parts:

- (1) Part I is a review of the mathematical principles essential to communications-electronics.
- (2) Part II covers the application of the

mathematical principles to common communications-electronics problems.

2. Mathematics and Electronics

Skill in the use of mathematics, particularly arithmetic, algebra, and trigonometry, is essential in the fields of electricity and electronics. Most of our basic ideas of electrical phenomena are based on mathematical reasoning and are stated in mathematical terms. Therefore, a thorough knowledge of mathematics and of the specific applications of mathematics to the field of electricity will serve as a foundation for the technical knowledge needed by communications-electronics personnel.

CHAPTER 2 PERCENTAGE

3. General

a. *Definition.* Percentage is the process of computation in which the basis of comparison is a *hundred*. The term *percent*—from *per*, by, and *centum*, hundred—means *by* or *on the hundred*. Thus, 2 percent of a quantity means two parts of every hundred parts of the quantity.

b. *Symbol.* The symbol of percentage is %. Percent may also be indicated by a fraction or a decimal. Thus, $5\% = \frac{5}{100} = .05$. Figure 1 shows the relationship between fractions, decimals, and percentage.

c. *Base, Rate, and Percentage.*

- (1) The *base* is the number on which the percentage is computed.
- (2) The *rate* is the amount (in hundredths) of the base to be estimated.
- (3) The *percentage* is a part or proportion of a whole expressed as so many per hundred. Percentage is the portion of the base determined by the rate.

4. Conversion of Decimal to Percent

To change a decimal to percent, move the decimal point two places to the right and add the percent symbol.

Example: Change .375 to percent.
Move decimal point two places to right: 37.5
Add percent symbol: 37.5%

5. Conversion of Fraction to Percent

To convert a fraction to percent, divide the numerator by the denominator and convert to a decimal. Then, convert the decimal to percent (par. 4).

Example: Change fraction $\frac{5}{8}$ to percent.

Divide numerator by denominator: $5 \div 8 = .625$

Convert decimal to percent: $6.25 = 62.5\%$

Thus, $\frac{5}{8} = 62.5\%$.

6. Conversion of Percent to Decimal

To change a percent to a decimal, omit the percent symbol and move the decimal point two places to the left.

Example 1: Change 15% to a decimal.

Omit percent symbol: 15% becomes 15

Move decimal point two places to the left: 15 becomes .15

Thus, $15\% = .15$.

Example 2: Change 110% to a decimal.

Omit percent symbol: 110% becomes 110

Move the decimal point two places to the left: 110 becomes 1.10.

Thus, $110\% = 1.10$.

7. Conversion of Percent to Fraction

To change a percent to a fraction, first change the percent to a decimal (par. 6) and then to a fraction. Reduce the fraction to its lowest terms.

Example 1: Change 25% to a fraction.

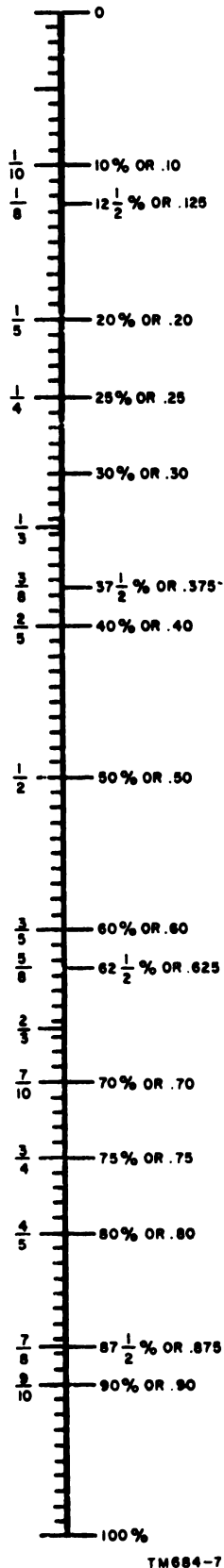
Change to a decimal: $25\% = .25$

Change to a fraction: $.25 = \frac{25}{100}$

Reduce fraction to lowest terms:

$$\frac{25}{100} = \frac{1}{4}$$

Thus, $25\% = \frac{1}{4}$.



TM684-7

Figure 1. Relationship between fractions, decimals, and percentages.

Example 2: Change 37.5% to a fraction.

Change to a decimal: $37.5\% = .375$

Change to a fraction:

$$.375 = \frac{375}{1000}$$

Reduce fraction to lowest terms:

$$\frac{375}{1000} = \frac{3}{8}$$

Thus, $37.5\% = \frac{3}{8}$.

8. Finding Percentage

a. General. To find the percent of a number, write the percent as a decimal and multiply the number by this decimal. In this case, the *base* and *rate* are given. The problem is to find the percentage.

Example 1: Find 5% of 140 (140 is the base, 5% is the rate, and the product is the percentage).

$$5\% \text{ of } 140 = .05 \times 140 = 7$$

Example 2: Find 5.2% of 140.

$$5.2\% \text{ of } 140 = .052 \times 140 = 7.28$$

Example 3: Find 150% of 36.

$$150\% \text{ of } 36 = 1.50 \times 36 = 54$$

Example 4: Find $\frac{1}{2}\%$ of 840.

$$\frac{1}{2}\% = .5\%$$

$$.5\% \text{ of } 840 = .005 \times 840 = 4.20$$

Thus, $\frac{1}{2}\%$ of 840 = 4.20.

b. Application of Percentage. In communications-electronics, typical applications of percentage computation are used in determining tolerance values of resistors (par. 206) or in determining the efficiencies of motors and generators (par. 209).

9. Finding Rate

To find the percent one number is of another, write the problem as a fraction, change the fraction to a decimal, and write the decimal as a percent. In this case, the *percentage* and *base* are given. The problem is to find the *rate*.

Example 1: 3 is what percent of 8? (3 is the percentage, 8 is the base, and the quotient is the rate.)

$$\frac{3}{8} = .375$$

$$.375 = 37.5\% = 37\frac{1}{2}\%$$

Therefore, 3 is $37\frac{1}{2}\%$ of 8.

Example 2: What percent of 542 is 234?

$$\frac{234}{542} = .4317 + (\text{round off})$$

$$.432 = 43.2\%$$

Therefore, 234 is 43.2% of 542.

Example 3: 125 is what percent of 50?

$$\frac{125}{50} = 2.50$$

$$2.50 = 250\%$$

Therefore, 125 is 250% of 50.

10. Finding Base Numbers

To find a number when a percent of the number is known, first find 1% of the number, and then find 100% of the number. In this case, the *percentage* of the number and the *rate* are given. The problem is to find the *base*.

Example 1: 42 is 12% of what number?

$$12\% (\text{base number}) = 42$$

$$1\% (\text{base number}) =$$

$$\frac{42}{12} = 3.50$$

$$100\% (\text{base number}) =$$

$$100 \times 3.50 = 350$$

Therefore, the base number is 350.

Example 2: 45 is 150% of what number?

$$150\% (\text{base number}) = 45$$

$$1\% (\text{base number}) = \frac{45}{150} = .3$$

$$100\% (\text{base number}) =$$

$$100 \times .3 = 30$$

Therefore, the base number is 30.

11. Expressing Accuracy of Measurements in Percent

a. *Relative error* is the accuracy of a measurement expressed in percent of the total measurement. In determining the relative error, it is first necessary to establish the *limit of error*.

b. The *limit of error* is the difference between the *true value* and the *measured value*. Assume that the reading on a scale, to the nearest tenth of an inch, is 2.2 inches. If the true value is 2.15 inches, the limit of error is the difference between 2.15 and 2.20, or .05 inch.

c. *Relative error* is computed by solving the ratio $\frac{\text{LIMIT OF ERROR}}{\text{MEASURED VALUE}}$, and expressing the result as a percent. In the scale reading above, the relative error = $\frac{.05}{2.2} = 2.27\%$, or 2.3%.

12. Review Problems—Percentage

a. Show each of the following in three forms—as a fraction or mixed number, as a decimal, and as a percent:

- (1) $\frac{3}{5}$
- (2) 50%
- (3) .375
- (4) $\frac{1}{4}$
- (5) $62\frac{1}{2}\%$
- (6) .6
- (7) $\frac{3}{10}$
- (8) 70%
- (9) 2.25
- (10) $1\frac{7}{8}$
- (11) .08
- (12) $\frac{3}{50}$
- (13) .18
- (14) $\frac{1}{4}\%$
- (15) .025
- (16) .05
- (17) $8\frac{1}{3}\%$
- (18) $37\frac{1}{2}\%$
- (19) 105%
- (20) 4%

b. Evaluate the following:

- (1) 250% of 60
- (2) 125% of 40
- (3) 200% of 2
- (4) 225% of 400

c. What percent of a number is—

- (1) 1.5 times the number?

(2) $2\frac{3}{4}$ times the number?

(3) $\frac{3}{2}$ times the number?

(4) $5\frac{1}{2}$ times the number?

d. Find the following:

(1) $\frac{2}{5}\%$ of 410

(2) $\frac{3}{5}\%$ of 416,000

(3) $\frac{2}{5}\%$ of 85

(4) 5.2% of 85

e. Solve the following problems:

(1) Find the relative error for a limit of error of .05 inch in measuring 24.2 inches.

(2) Find the relative error for a limit of error of 2 inches in measuring 200 yards.

f. Find the number when—

(1) 12% of the number is 52

(2) 15% of the number is 375

(3) 32% of the number is 166.4

(4) 8% of the number is 16

(5) 84% of the number is 168

CHAPTER 3

RATIO AND PROPORTION

Section I. RATIO

13. Understanding Ratio

It is often desirable, for the purpose of comparison, to express one quantity in terms of another quantity of the same kind. One way to express this relationship is by means of a *ratio*. For example, if one resistor has a resistance of 800 ohms and another has a resistance of 100 ohms, the first resistor has 8 times as much resistance as the second. In other words, the ratio between the resistors is 8 to 1.

14. Expressing Ratio

Ratio can be expressed in four different ways. For example, the ratio of 12 to 3 can be expressed as follows: 12 to 3, 12:3, $12 \div 3$, or $\frac{12}{3}$. The numbers 12 and 3, which are the terms of the ratio, are called the *antecedent* and the *consequent*, respectively. The antecedent is the dividend or the numerator; the consequent is the divisor or denominator.

15. Obtaining Value of Ratio

Both terms of any ratio may be multiplied and divided by the same number without changing the value of the expression. In the ratio

$\frac{12}{3}$, for example, the 12 is divided by 3, giving the value of 4. This means that the ratio 12:3 is equal to the ratio 4:1.

Example 1: What is the ratio of 6:2?

$$\frac{6}{2} = 3, \text{ or } 3:1$$

Example 2: What is the ratio of 7:3?

$$\frac{7}{3} = 2\frac{1}{3} \text{ or } 2\frac{1}{3}:1$$

Example 3: Find the ratio of the areas (par. 26) of two squares the sides of which are 6 and 8 inches, respectively. The areas of similar figures are in the same ratios as the squares of their like dimensions.

$$8^2:6^2 = 64:36$$

$$\frac{64}{36} = 1\frac{28}{36} = 1\frac{7}{9} \text{ or } 1\frac{7}{9}:1$$

Thus, the second square (8 inches on a side) is $1\frac{7}{9}$ times as large as the first square (6 inches on a side).

Section II. PROPORTIONS

16. Understanding Proportion

A proportion is a statement of equality between two ratios. If the value of one ratio is equal to the value of another ratio, they are said to be in proportion. For example, the ratio 3:6 is equal to the ratio 4:8. Therefore, this can be written $3:6 :: 4:8$ or $3:6 = 4:8$. In any proportion, the first and last terms are called the *extremes*; the second and third terms are called the *means* (fig. 2).

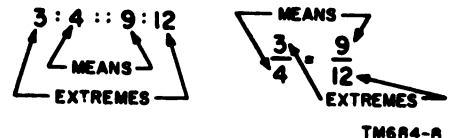


Figure 2. Terms of proportion.

17. Rules of Proportion

There are three rules of proportion that are used in determining an unknown quantity.

They also can be used to prove that the proportion is true.

a. In any proportion, *the product of the means equals the product of the extremes.*

Example 1: $3:4 :: 9:12.$

$$3 \times 12 = 36 \text{ (product of extremes)}$$

$$4 \times 9 = 36 \text{ (product of means)}$$

Example 2: $\frac{3}{4} = \frac{9}{12}.$

Note. When the proportion is expressed in fractional form, the numerator of one fraction is multiplied by the denominator of the other fraction. This process is called *cross-multiplication.*

$$3 \times 12 = 36 \text{ (product of extremes)}$$

$$4 \times 9 = 36 \text{ (product of means)}$$

b. In any proportion, *the product of the means divided by either extreme gives the other extreme.*

Example: $6:8 :: 18:24.$

$$8 \times 18 = 144 \text{ (product of means)}$$

$$144 \div 6 = 24 \text{ (one extreme)}$$

$$144 \div 24 = 6 \text{ (other extreme)}$$

c. In any proportion, *the product of the extremes divided by either mean gives the other mean.*

Example: $5:7 :: 15:21$

$$5 \times 21 = 105 \text{ (product of extremes)}$$

$$105 \div 7 = 15 \text{ (one mean)}$$

$$105 \div 15 = 7 \text{ (other mean)}$$

18. Solving for Unknown Term

As demonstrated in paragraph 49, the unknown term of a proportion can be determined if the other three terms are known.

Example 1: In the proportion $\frac{5}{10} = \frac{10}{y}$, solve

for y (the unknown quantity).

Find the product of the means:

$$10 \times 10 = 100$$

Find the product of the extremes:

$$5 \times y = 5y$$

The products of the means and extremes are equal: $5y = 100$

Divide both sides by 5:

$$\frac{5y}{5} = \frac{100}{5}$$

$$y = 20$$

Therefore, $\frac{5}{10} = \frac{10}{20}$

Example 2: In the proportion $6:12 :: 24:y$, solve for y .

Write the proportion in fractional form:

$$\frac{6}{12} = \frac{24}{y}$$

Cross-multiply.

$$6y = 288$$

Divide both sides by 6.

$$\frac{6y}{6} = \frac{288}{6}$$

$$y = 48$$

Therefore, $6:12 :: 24:48.$

Example 3: In the proportion $\frac{z}{20} =$

$$\frac{5}{10}, \text{ solve for } z.$$

Cross-multiply.

$$10z = 100$$

Divide both sides by 10:

$$\frac{10z}{10} = \frac{100}{10}$$

$$z = 10$$

Therefore, $\frac{10}{20} = \frac{5}{10}.$

19. Stating Ratios for Problems in Proportion

When setting up a proportion problem, be sure to state the ratios correctly. Analyze each problem carefully to determine whether the unknown quantity will be greater or lesser than the known term of the ratio in which it occurs. Arrange the terms of the ratio as shown below, and solve for the unknown quantity as explained in paragraph 18.

$$\frac{\text{LESSER}}{\text{GREATER}} = \frac{\text{LESSER}}{\text{GREATER}}, \text{ or LESSER : GREATER :: LESSER : GREATER}$$

Example: The weight of 15 feet of iron pipe is 8 pounds.

What is the weight of 255 feet of the same pipe? Let the unknown quantity be represented by the letter y . Since ratios must express a relation between quantities of the same kind, one ratio must be between feet and feet and the other between pounds and pounds.

Study the problems; 255 feet of pipe will weigh more than 15 feet of pipe. Arrange the first ratio in the order LESSER to GREATER—15 feet:

$$255 \text{ feet, or } \frac{15}{255}.$$

Arrange the second ratio in the same order—LESSER to GREATER—8 pounds: y

$$\text{pounds, or } \frac{8}{y}.$$

Write the proportion and solve.

$$15:255 = 8:y, \text{ or}$$

$$\frac{15}{255} = \frac{8}{y}$$

$$15y = 255 \times 8$$

$$15y = 2040$$

$$y = \frac{2040}{15}$$

$$y = 136 \text{ pounds}$$

20. Inverse Proportion

a. The ratio 2:3 is the inverse of the ratio 3:2. In proportion, when a second ratio is equal to the inverse of the first ratio, the elements are said to be *inversely proportional*.

b. Two numbers are inversely proportional when one increases as the other decreases. In this case, their product is always the same. In problems dealing with pulleys, the speeds of different size pulleys connected by belts are inversely proportional to their diameters. A smaller pulley rotates faster than a larger pulley.

Example 1: A pulley 30 inches in diameter is turning at a speed of 300 revolutions per minute. If this pulley is belted to a pulley 15 inches in diameter (fig. 3), determine the speed at which the smaller pulley is turning.

Let the speed of the smaller pulley be represented by y . Study the problem; the first ratio will be between inches and the second will be between revolutions per minute (rpm). Also note that the second pulley is smaller than the first and must make more revolutions than the first. Therefore, the answer will be a number larger than 300.

Arrange the ratios in the order LESSER to GREATER.

First ratio:

$$15:30, \text{ or } \frac{15}{30}$$

Second ratio:

$$300:y, \text{ or } \frac{300}{y}$$

The proportion:

$$15:30 = 300:y, \text{ or } \frac{15}{30} = \frac{300}{y}$$

Solve the proportion:

$$\frac{15}{30} = \frac{300}{y}$$

$$15y = 300 \times 30$$

$$15y = 9000$$

$$y = \frac{9000}{15}$$

$$y = 600 \text{ rpm}$$

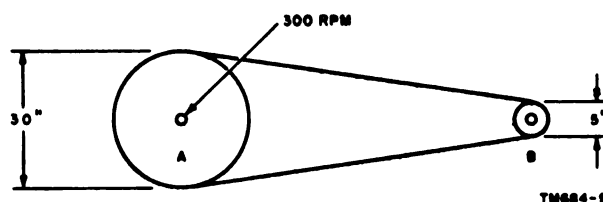


Figure 3. Pulleys and inverse ratio.

Example 2: A 24-inch pulley is fixed to a drive shaft that is turning at the rate of 400 rpm. This pulley is belted to a 6-inch pulley. Determine the speed of the smaller pulley in revolutions per minute. Driving pulley (400 rpm, 24 inches in diameter).

Driven pulley (y rpm, 6 inches in diameter).

$$\frac{6}{24} = \frac{400}{y}$$

$$6y = 400 \times 24 = 9,600$$

$$y = 1,600 \text{ rpm}$$

21. Problems Using Proportion

a. A steel plate $\frac{1}{2}$ inch thick, 12 inches wide, and 9 feet long weighs 183.6 pounds. What is the weight of a piece of steel plate of the same thickness and width if it is 16 feet 6 inches long?

b. If three men complete a certain job in 8 days, how many days would it take seven men

to complete the same job, considering that they will work at the same speed?

c. If 3 resistors cost 25 cents, find the cost of 60 resistors at the same rate?

d. If the upkeep on 62 trucks for a year is \$3,100, what would be the upkeep on 28 such trucks for 1 year at the same rate?

e. At a given temperature, the resistance of a wire increases with its length. If the resistance of a wire per 1,000 feet at 68°F is .248 ohm, what is the resistance of 1,500 feet; of 1,200 feet; of 1,850 feet; of 3,600 feet?

f. If 21-gage wire weighs 2.452 pounds per 1,000 feet, what is the weight of 1,150 feet; 1,540 feet; 1,680 feet; 349 yards?

g. The speeds of gears running together are inversely proportional to the number of teeth in the gears. A driving gear with 48 teeth meshes with a driven gear with 16 teeth. If the driving gear turns at the rate of 100 rpm, how many rpm are made by the driven gear?

h. A 36-tooth gear running at a speed of 280 rpm drives another gear with 64 teeth. What is the speed of the other gear?

CHAPTER 4

POWERS AND ROOTS

22. Powers

There are many times in mathematics when a number must be multiplied by itself a number of times, such as $4 \times 4 \times 4 \times 4 \times 4$. This is written as 4^5 and is described as 4 raised to the fifth power. A number multiplied by itself once is said to be raised to the second power (squared). Thus, 5×5 is written 5^2 . The number 2, written to the right and above the number 5, is the *exponent*; the number 5 is the *base*. The base number is a *factor* of a number written in exponential form because the product is evenly divisible by the base.

23. Roots

The root of a number is that number which, when multiplied by itself a given number of times, will equal the given number. The square root of 25 is 5, since 5×5 or 5^2 equals 25. The third root (cube root) of 216 is 6, since $6 \times 6 \times 6$ or 6^3 equals 216. The fourth root of 81 is 3, since $3 \times 3 \times 3 \times 3$ or 3^4 equals 81. Extraction of a root is generally indicated by placing, in front of the number, a *radical sign* ($\sqrt{\quad}$). A small figure is placed in the angle at the front of the sign to indicate the root to be taken. If the small figure is omitted, it is understood that the operation required is square root.

Thus,

$$\sqrt{25} = 5$$

$$\sqrt[3]{216} = 6$$

$$\sqrt{81} = 3$$

24. Finding Square Root of a Number

a. Finding Square Root by Mental Calculation. In some instances, the square root can be determined mentally from a knowledge of common multiplication. For example, $\sqrt{25}$ is 5, since 5×5 or $5^2 = 25$. Similarly, $\sqrt{144}$ is 12, since 12×12 or $12^2 = 144$.

b. Finding Square Root by Arithmetical Process. In most cases, the square root of a number must be determined by a mathematical process. If the number is a perfect square, the square root will be an integral number; if the number is not a perfect square, the square root will be a continued decimal. To save time in calculation, a table of square roots of numbers from 1 to 100 is given in appendix III.

Example 1: Evaluate $\sqrt{3398.89}$.

Step 1. Starting at the decimal point mark off the digits in pairs in both directions.

$$\sqrt{33 \ 98.89}$$

Step 2. Place the decimal point for the answer directly above the decimal point that appears under the radical sign.

$$\sqrt{33 \ 98.89}$$

Step 3. Determine by inspection the largest number that can be squared without exceeding the first pair of digits—33. The answer is 5, since the square of any number larger than 5 will be greater than 33. Place the 5 above the first pair of digits.

$$\begin{array}{r} 5 \\ \sqrt{33 \ 98.89} \end{array}$$

Step 4. Square 5 to obtain 25, and place it under 33. Subtract 25 from 33 and obtain 8. Bring down the next pair of digits—98.

$$\begin{array}{r} 5 \\ \sqrt{33 \ 98.89} \\ \underline{25} \\ 898 \end{array}$$

Step 5. Double the answer, 5, to obtain a trial divisor of 10. Divide the trial divisor into all but the last

digit of the modified remainder. It will go into 89 eight times. Place the 8 above the second pair of digits, and also place the 8 to the right of the trial divisor. Thus, the true divisor is 108. Multiply 108 by 8 and obtain 864. Subtract 864 from 898 to obtain 34. Bring down the next pair of digits—89.

$$\begin{array}{r} 5 \quad \boxed{8} \\ \sqrt{33 \ 98.89} \\ \underline{25} \\ 898 \\ \underline{864} \\ 3489 \end{array}$$

$$2 \times 5 = 10 \boxed{8}$$

$$\boxed{8} \times 108 = \underline{864}$$

Note. With each new successive digit in the answer:

1. Place the digit in the answer above the pair of digits involved.
2. Place the same digit to the right of the trial divisor to obtain the true divisor.
3. Multiply the digit by the true divisor. (Do not use the square boxes in actual problems.)

Step 6.

Double the answer, 58, to obtain a trial divisor of 116. Divide the trial divisor into all but the last digit of the remainder. It will go into 348 three times. Place the 3 above the third pair of digits, and also place the 3 to the right of the trial divisor. Thus, the true divisor is 1163. Multiply 1163 by 3 to obtain 3489. Subtract 3489 from 3489. There is no remainder. Therefore 3398.89 is a perfect square and its square root is 58.3.

$$\begin{array}{r} 5 \quad 8. \quad \boxed{3} \\ \sqrt{33 \ 98.89} \\ \underline{25} \\ 898 \\ \underline{864} \\ 3489 \\ \underline{3489} \\ 0 \end{array}$$

$$2 \times 58 = 116 \quad \boxed{3}$$

$$\boxed{3} \times 1163 = \underline{3489}$$

Step 7.

Check the answer by squaring 58.3— $58.3^2 = 3398.89$. The complete calculation is shown below:

$$\begin{array}{r} 5 \quad 8. \quad 3 \\ \sqrt{33 \ 98.89} \\ \underline{25} \\ 898 \\ \underline{864} \\ 3489 \\ \underline{3489} \\ 0 \end{array}$$

$$5 \times 5 = 25$$

$$2 \times 5 = 10 \quad \boxed{8}$$

$$\boxed{8} \times 108 = \underline{864}$$

$$2 \times 58 = 116 \quad \boxed{3}$$

$$\boxed{3} \times 1163 = \underline{3489}$$

Example 2: Evaluate $\sqrt{786.808}$

Step 1. Starting at the decimal point, mark off the digits in pairs in both directions.

$$\sqrt{07 \ 86.80 \ 80}$$

Note. The extreme left-hand group may have only one digit. However, there must be an even number of digits to the right of the decimal point. If necessary, add a zero.

Step 2.

Place the decimal point for the answer directly above the decimal point that appears under the radical sign.

$$\sqrt{07 \ 86.80 \ 80}$$

Step 3.

Determine the largest number that can be squared without exceeding the first digit—7. The answer is 2, since the square of any whole number larger than 2 will be greater than 7. Place the 2 above the 7.

$$\begin{array}{r} 2 \\ \sqrt{07 \ 86.80 \ 80} \end{array}$$

Step 4.

Square 2 to obtain 4 and place it under 7. Subtract 4 from 7 to obtain 3. Bring down the next pair of digits—86.

$$\begin{array}{r} 2 \\ \sqrt{07 \ 86.80 \ 80} \\ \underline{4} \\ 386 \end{array}$$

Step 5.

Double the answer, 2, to obtain a trial divisor of 4. Divide the trial divisor into all but the last digit of the modified remainder. It will go into 38 nine times. Place the 9 above the second pair of digits, and also place the 9 to the right of the trial divisor. The true divisor is 49. Multiply 49 by 9 to obtain 441. However,

441 cannot be subtracted from 386, so the next lower digit must be tried. Substitute 8 for 9 in both the answer and the divisor and multiply 48 by 8 to obtain 384. Subtract 384 from 386 to obtain a remainder of 2. Bring down the next pair of digits—80.

$$\begin{array}{r}
 29. \\
 \sqrt{07\ 86.80\ 80} \\
 \underline{4} \\
 386 \\
 \underline{441} \\
 28. \\
 \sqrt{07\ 86.80\ 80} \\
 \underline{4} \\
 386 \\
 \underline{384} \\
 280
 \end{array}$$

$$\begin{array}{l}
 2 \times 2 = 4 \quad \boxed{9} \\
 \boxed{9} \times 49 = \quad 441
 \end{array}$$

$$\begin{array}{l}
 4 \quad \boxed{8} \\
 \boxed{8} \times 48 = \quad 384
 \end{array}$$

Step 6.

Double the answer, 28, to obtain a trial divisor of 56. Divide the trial divisor into all but the last digit of the remainder. Since it is not possible to divide 56 into 28, place a zero above the third pair of digits and bring down the next pair of digits—80.

$$\begin{array}{r}
 28. \quad \boxed{0} \\
 \sqrt{07\ 86.80\ 80} \\
 \underline{4} \\
 386 \\
 \underline{384} \\
 280
 \end{array}$$

$$2 \times 28 = 56$$

Step 7.

Multiply 280 by 2 to obtain a trial divisor of 560. Divide the trial divisor into all but the last digit of the remainder. It will go 5 times. Place the 5 above the fourth pair of digits, and also place the 5 to the right of the trial divisor. Thus, the true divisor is 5605. Multiply 5605 by 5 to obtain 28025. Subtract 28025 from 28080. There is a remainder of 55. Thus, the square root of 786.808 is 28.05, with a remainder of 55. A more exact answer can be obtained by

adding pairs of zeros and continuing the square root process.

$$\begin{array}{r}
 28.05 \\
 \sqrt{07\ 86.80\ 80} \\
 \underline{4} \\
 386 \\
 \underline{384} \\
 28080 \\
 \underline{28025} \\
 55
 \end{array}$$

$$\begin{array}{l}
 2 \times 280 = 560 \quad \boxed{5} \\
 \boxed{5} \times 5605 = \quad 28025
 \end{array}$$

Check the answer by squaring 28.05 and adding the remainder (28.05² + .0055). Place the extreme right digit of the remainder under the extreme right digit of the squared number. The complete calculation is shown below:

$$\begin{array}{r}
 28.05 \\
 \sqrt{07\ 86.80\ 80} \\
 \underline{4} \\
 386 \\
 \underline{384} \\
 28080 \\
 \underline{26025} \\
 55
 \end{array}$$

$$\begin{array}{l}
 2 \times 2 = 4 \quad \boxed{8} \\
 \boxed{8} \times 48 = \quad 384 \\
 2 \times 28 = 56 \\
 2 \times 280 = 560 \quad \boxed{5} \\
 \boxed{5} \times 5605 = \quad 28025
 \end{array}$$

25. Review Problems—Square Root

a. Solve the following:

- (1) $\sqrt{441}$
- (2) $\sqrt{1089}$
- (3) $\sqrt{2500}$
- (4) $\sqrt{8.40}$
- (5) $\sqrt{2510.01}$
- (6) $\sqrt{4901.4001}$
- (7) $\sqrt{7482.25}$
- (8) $\sqrt{5759.2921}$

b. Solve the following to nearest thousandth.

- (1) $\sqrt{5}$
- (2) $\sqrt{7}$
- (3) $\sqrt{11}$
- (4) $\sqrt{13}$
- (5) $\sqrt{15}$
- (6) $\sqrt{17}$

c. The current (in amperes) flowing through a resistor can be determined by taking the square root of the quotient obtained by dividing the value of power supplied to the resistor (in watts) by the value of the resistance (in

ohms). Thus, if a resistance of 300 ohms is absorbing 60 watts of power, it is drawing a current of $\sqrt{\frac{60}{300}}$ amperes. This equals about .447 ampere. In the same manner, find the value of current for each of the following values of power and resistance:

	<i>Power (watts)</i>	<i>Resistance (ohms)</i>	<i>Current (amperes)</i>
(1)	25	1,000	?
(2)	50	7,000	?
(3)	40	500	?
(4)	75	60	?

CHAPTER 5

ALGEBRA

Section I. INTRODUCTION

26. General

a. Algebra is an extension of arithmetic. All of the four basic operations of arithmetic—addition, subtraction, multiplication and division—apply also to algebra. Arithmetic deals only with particular numbers; algebra may also employ letters or symbols to represent numbers.

b. Algebra is often referred to as the shorthand language of mathematicians. The simplest example of the algebraic language is the formula, in which letters are used to represent words or numbers. For example, the area (A) of a rectangle can be determined by multiplying the length (l) by the width (w). Algebraically, this is stated as $A = lw$.

27. Algebraic Expressions and Terms

a. An *algebraic expression* is the representation of any quantity in algebraic signs and symbols; for example, $2x - 7$. A *numerical algebraic expression* consists entirely of numerals and signs, such as $8 - (6 \times 2)$. A *literal algebraic expression* contains only letters and symbols, such as $ax - ay$.

b. Each algebraic expression contains two or more terms, separated by one of the signs of operation ($+$, $-$, \div , \times). The expression $3x - 4xy - 2y$, for example, contains three terms: $3x$, $4xy$, and $2y$. If the terms have the same letters and exponents, such as $3a^2x$, $9a^2x$, and $12a^2x$, they are called *similar terms*. Terms that do not contain the same letters and exponents, such as $3ab^2$, $3a^2b$, and $3x^2y$, are *dissimilar terms*.

c. If an algebraic expression contains one term, such as $3abc$ or $5a^4x^2$, it is called a *monomial*; if it contains two terms, such as $x - y$,

it is called a *binomial*; and if it contains three terms, such as $5x^2 - 3xy - 2y^2$, it is called a *trinomial*. A more general rule of algebraic expressions states that any expression containing more than one term is called a *polynomial*.

28. Signs of Operation

In algebra, the conventional signs of operation ($+$, $-$, \times and \div) retain the same meaning as in arithmetic. In algebra, however, certain other signs may be used.

a. *Multiplication* may be indicated as follows:

<i>Arithmetic</i>	<i>Algebra</i>
$a \times b$	ab
$a \times b$	$a \cdot b$
$a \times b$	$(a)(b)$

b. *Division* may be indicated as follows:

<i>Arithmetic</i>	<i>Algebra</i>
$x \div y$	$\frac{x}{y}$
$(a + b) \div (a - b)$	$\frac{a + b}{a - b}$

c. The arithmetical signs for both *addition* and *subtraction* are retained in algebra.

<i>Arithmetic</i>	<i>Algebra</i>
$4 + 5$	$4 + 5$
$a - b$	$a - b$

29. Coefficients

Any factor of a product is known as a coefficient of the remaining factors. In the term $2\pi f$, 2 is the numerical coefficient of πf , f is the coefficient of 2π , and π is the coefficient of $2f$. However, it is common practice to speak of the numerical part of the term as the coefficient. If a term contains no numerical coefficient, the number 1 is understood. Thus, abc is 1 abc , and xyz is 1 xyz .

30. Subscripts

In expression such as $R = R_1 + R_2 + R_3$, the small numbers or letters written to the right and below the literal terms are called subscripts. Subscripts are used to designate different values of a variable quantity. They are read: R sub 1, R sub 2, etc.

Section II. POSITIVE AND NEGATIVE NUMBERS

32. Signed Numbers

Only positive numbers are used in arithmetical operations, but both *positive* and *negative* numbers may appear in algebraic expressions. The plus sign (+) is used to indicate a positive number and the minus sign (−) to indicate a negative number. If the sign is omitted, the number is understood to be positive. Positive and negative numbers are called *signed numbers*.

33. Need for Negative Numbers

The need for negative numbers may be seen from the succession of subtraction below:

$$\begin{array}{cccccccccc} 6 & 6 & 6 & 6 & 6 & 6 & 6 & 6 & 6 & 6 \\ -0 & -1 & -2 & -3 & -4 & -5 & -6 & -7 & -8 & -9 \\ \hline 6 & 5 & 4 & 3 & 2 & 1 & 0 & -1 & -2 & -3 \end{array}$$

When the subtrahend is greater than the minuend, the difference becomes less than zero and the negative sign is placed before the difference. Thus, a negative number may be defined as a number less than zero.

34. Application of Positive and Negative Numbers

In technical work, many scales are calibrated above and below (or to the right and left of)

31. The Radical Sign

The radical sign ($\sqrt{\quad}$) has the same meaning in algebra as in arithmetic (ch. 5). Thus, the expression $z = 2\sqrt{R^2 + x^2}$ states that z is equal to 2 times the square root of $R^2 + x^2$.

a center point designated 0 (zero). For example, the degrees of temperature indicated on a thermometer scale are measurements of distance taken on a scale in opposite directions from some point chosen to represent a reference or zero point. Temperature is always so many degrees above or below zero. In mathematics, it is convenient to indicate that a temperature is so many degrees above or below zero by prefixing the reading with a positive or negative sign. Thus, 45° above zero is +45° and 15° below zero is −15°. Similarly, in electronic and electrical measuring instruments, scales are often calibrated to read positive numbers on one side of a zero and negative numbers on the other.

35. Graphical Representation of Positive and Negative Numbers

a. *Principle.* Positive and negative numbers may be represented graphically as shown in figure 4. The zero is the reference point. This graph can be used to illustrate both addition and subtraction.

b. *Addition.* To add numbers graphically, start at the zero reference point and mark off the first number, going to the right if the number is positive, or to the left if the number is

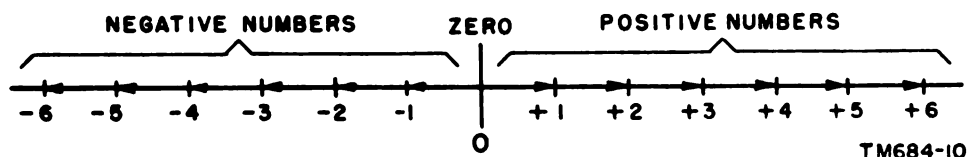


Figure 4. Graphical representation of positive and negative numbers.

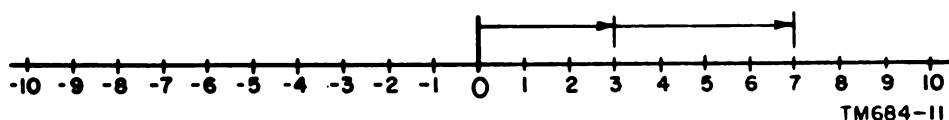


Figure 5. Graphical representation of addition of positive numbers.

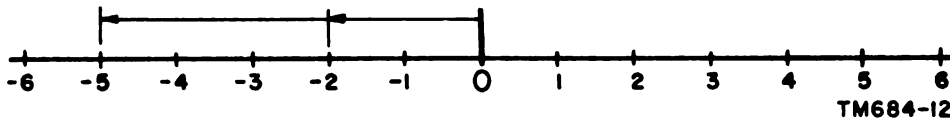


Figure 6. Graphical representation of addition of negative numbers (-1 and -5).

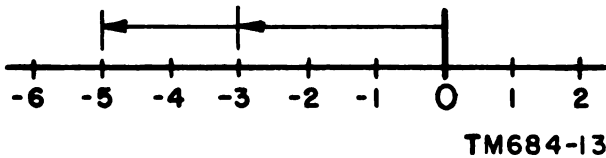


Figure 7. Graphical representation of addition of negative numbers (-3 and -2).

negative. From this new point, mark off the second number, again going to the right if the number is positive, or to the left if it is negative. The number of units between zero and the final point is the sum of the two numbers. This procedure can be continued for more than two numbers. Figure 5 shows graphical addition of positive numbers; figures 6 and 7 show graphical addition of negative numbers; and figure 8 shows the addition of a combination of a positive and a negative number. Figures 6 and 7 show that the order in which the negative numbers are taken does not affect the answer.

c. Subtraction. To subtract numbers graphically, change the sign of the subtrahend (number to be subtracted) and proceed as for addition. Figure 9 shows the subtraction of $+3$ from $+5$ to obtain the difference of $+2$.

36. Absolute Value of a Number

The numerical value of a number, without regard to its sign, is called the *absolute value*

of the number. Thus, the absolute value of -3 or $+3$ is 3. This is written $|3|$.

37. Addition of Positive and Negative Numbers

a. Positive Numbers. To add two or more positive numbers, find the sum of their absolute values and prefix the sum with a plus sign. When there is no possibility of misunderstanding, the plus sign is usually omitted.

Example: Add $+4$, $+5$, and $+6$
 $+4 + (+5) + (+6) = +15$ or
 15

b. Negative Numbers. To add two or more negative numbers, find the sum of their absolute values and prefix the sum with a minus sign.

Example: Add -4 , -5 , and -6
 $-4 + (-5) + (-6) = -15$

c. Positive and Negative Numbers. To add a positive and a negative number, find the difference between their absolute values and prefix the sum with the sign of the number that has the greater absolute value. This is called *algebraic addition*. When three or more positive and negative numbers are to be added, first find the sum of all positive numbers, and then the sum of all negative numbers. Add these sums algebraically as above.

Example 1: Add $+6$ and -9 .
 $+6 + (-9) = -3$

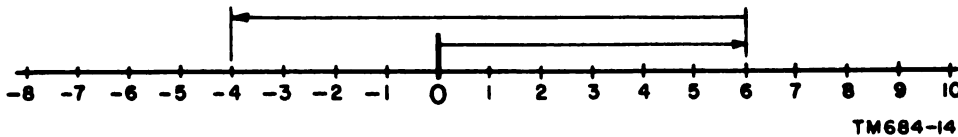


Figure 8. Graphical representation of addition of positive and negative numbers.

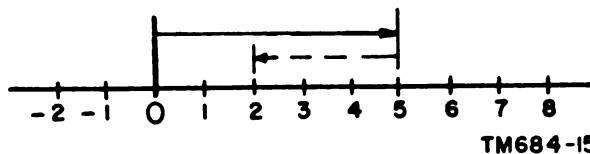


Figure 9. Graphical representation of subtraction of positive numbers.

Example 2: Add +5, -8, +12, and -6.

$$\begin{aligned} +5 + (+12) &= +17 \\ -8 + (-6) &= -14 \\ (+17) + (-14) &= +3 \end{aligned}$$

38. Subtraction of Positive and Negative Numbers

To subtract positive and negative numbers, change the sign of the subtrahend and proceed as in addition (par. 37).

a. Positive Numbers.

Example 1: Subtract +2 from +5.

$$\begin{aligned} +5 - (+2) &= +5 - 2 = +3 \\ &\text{or } 3 \end{aligned}$$

Example 2: Subtract $+5a^2$ from $+6a^2$.

$$\begin{aligned} +6a^2 - (+5a^2) &= +6a^2 - 5a^2 \\ &= +1a^2 = a^2 \end{aligned}$$

b. Negative Numbers.

Example 1: Subtract -3 from -5.

$$-5 - (-3) = -5 + 3 = -2$$

Example 2: Subtract $-4a$ from $-2a$.

$$\begin{aligned} -2a - (-4a) &= -2a + 4a = \\ &+2a \text{ or } 2a \end{aligned}$$

c. Positive and Negative Numbers.

Example 1: Subtract -2 from +5.

$$\begin{aligned} +5 - (-2) &= +5 + 2 = +7 \\ &\text{or } 7. \end{aligned}$$

Example 2: Subtract $-3x^2$ from $+5x^2$.

$$\begin{aligned} +5x^2 - (-3x^2) &= +5x^2 + 3x^2 \\ &= +8x^2 \text{ or } 8x^2 \end{aligned}$$

39. Multiplication of Positive and Negative Numbers

a. Numbers Having Like Signs. If the two numbers to be multiplied have the same signs, the product is positive.

Example 1: Multiply +5 by +3.

$$(+5)(+3) = +15 \text{ or } 15$$

Example 2: Multiply -5 by -3.

$$(-5)(3-3) = +15 \text{ or } 15$$

b. Numbers Having Unlike Signs. If the two numbers to be multiplied have unlike signs, the product is negative.

Example 1: Multiply -5 by +3.

$$(-5)(+3) = -15$$

Example 2: Multiply +5 by -3.

$$(+5)(-3) = -15$$

c. Several Positive and Negative Numbers. To multiply several positive and negative numbers, multiply the numbers in groups of two in the order in which they appear.

Example 1:

$$\begin{aligned} &\text{Multiply } (-5)(+3)(+7)(-2)(-4). \\ &(-5)(+3) \quad (+7)(-2) \quad (-4) \\ &= (-15) \quad (-14) \quad (-4) \\ &= \quad (+210) \quad (-4) \\ &= \quad \quad \quad -840 \end{aligned}$$

Example 2:

$$\begin{aligned} &\text{Multiply } (+7)(+2)(-5)(-3)(-1)(-4). \\ &= (+7)(+2) \quad (-5)(-3) \quad (-1)(-4) \\ &= (+14) \quad (+15) \quad (+4) \\ &= \quad (+210) \quad (+4) \\ &= \quad \quad \quad 840 \end{aligned}$$

40. Division of Positive and Negative Numbers

a. Numbers Having Like Signs. The quotient of two numbers that have the same signs is positive.

Example 1: Divide -15 by -5.

$$-15 \div -5 = +3 \text{ or } 3$$

Example 2: Divide +24 by +6.

$$+24 \div +6 = +4 \text{ or } 4$$

b. Numbers Having Unlike Signs. The quotient of two numbers that have opposite signs is negative.

Example 1: Divide 35 by -7.

$$+35 \div -7 = -5$$

Example 2: Divide -8,988 by 28.

$$-8988 \div 28 = -321$$

41. Order of Signs

When only addition and subtraction signs appear in a series of terms, addition and subtraction procedures may be performed in any order. However, when multiplication and division signs appear in the same series with addition and subtraction signs, the multiplication and division must be performed first, and then the addition and subtraction.

Example 1: Evaluate $15 + 5 - 3 + 4 - 8$.

Step 1. Add the + terms:
 $15 + 5 + 4 = 24$

Step 2. Add the - terms:
 $(-3) + (-8) = -11$

Step 3. Add the + terms and - terms algebraically:
 $24 - 11 = 13$.

Example 2: Evaluate $9 \times 4 + 6 - 3 + 5 \times 2$.

Step 1. Perform the multiplication first:
 $(9 \times 4) + 6 - 3 + (5 \times 2) =$
 $(36) + 6 - 3 + (10)$

Step 2. Add the + terms:
 $36 + 6 + 10 = 52$

Step 3. Add the + terms and the - terms algebraically:
 $52 - 3 = 49$

Example 3: Evaluate $81 \div 9 - 3 + 6 - 15 + 4 \times 5$.

Step 1. Perform the division:
 $(81 \div 9) - 3 + 6 - 15 +$
 $(4 \times 5) = (9) - 3 + 6 - 15 +$
 (4×5)

Step 2. Perform the multiplication:
 $9 - 3 + 6 - 15 + (4 \times 5) =$
 $9 - 3 + 6 - 15 + (20)$

Step 3. Add the + terms:
 $9 + 6 + 20 = 35$

Step 4. Add the - terms:
 $(-3) + (-15) = -18$

Step 5. Add the \div terms and the - terms algebraically:
 $35 - 18 = 17$.

42. Review Problems—Positive and Negative Numbers

a. Add the following:

- (1) 23 and -6
- (2) 21 and 37
- (3) -54 and 33
- (4) -43° and -96°
- (5) 682 volts and -934 volts

b. Subtract the following:

- (1) -104 amperes from 147 amperes
- (2) -37 volts from -45 volts
- (3) $.64cy$ from $.0025cy$
- (4) $21.36ax^2$ from $-10.63ax^2$
- (5) $-.986x^2y$ from $.824x^2y$

c. Find the product of the following:

- (1) -6.4 and 2.8
- (2) 3, -6 , and 4
- (3) $-\frac{2}{3}$, $-\frac{6}{7}$, and $-\frac{2}{5}$
- (4) 3.01, $-.02$, and -1.26
- (5) $-.0025$, 150, -10 , and $.075$
- (6) -2 , 5, 3, -1 , and 4

d. Divide:

- (1) 36 by 4
- (2) $-\frac{5}{7}$ by $\frac{3}{4}$
- (3) -5.6 by $-.008$
- (4) -750 by -3
- (5) $\frac{1}{3}$ ampere by $\frac{1}{2}$ ampere
- (6) -3750 by 150

e. Evaluate the following:

- (1) $2 + 3 - 9$
- (2) $3 + 4 + 2 \times 5 - 3$
- (3) $2 - 3 \times 9$
- (4) $3 \times 4 + 2 \times 5 - 3$
- (5) $5 + 3 \times 7 - 2 \times 11 + 7$
- (6) $28 \div 14 - 8 + 16 + 3 \times 2$
- (7) $46 - 18 + 3 \times 4 - 8 + 12$
- (8) $5 - 3 + 6 \times 4 + 40$
- (9) $8 - 16 + 4 \times 3 - 10 \times 5$
- (10) $15 \div 5 - 3 + 2 \times 10 - 2$

Section III. FUNDAMENTAL OPERATIONS

43. Addition and Subtraction of Algebraic Expressions

a. General. Only similar algebraic terms—those that are exactly alike in all respects other than numerical coefficients—may be added or subtracted. For example, the sum of $3x^2y$ and $5x^2y$ is $8x^2y$. Dissimilar terms cannot be added or subtracted directly, but the processes of addition or subtraction can be indicated by the use of plus or minus signs. For example, the sum of $4x^2y$ and $2xy^2$ is $4x^2y + 2xy^2$.

b. Procedure. To add or subtract algebraic expressions, arrange the terms so that like terms are in the same vertical column, and preferably in descending order of powers. Add or subtract the terms according to the rules of signed numbers (pars. 37 and 38).

Example 1: Add $x^3 - 3x^2 + 1$, $x^3 + x - 3$, and $x^2 + x + 1$.

$$\begin{array}{r} x^3 - 3x^2 \qquad \qquad + 1 \\ x^3 \qquad \qquad \qquad + x - 3 \\ \hline \qquad \qquad \qquad x^2 + x + 1 \\ 2x^3 - 2x^2 + 2x - 1 \end{array}$$

Example 2: Subtract $x^3 + 3x^2 + x - 1$ from $x^4 + x^3 - x + 2$.

$$\begin{array}{r} x^4 + x^3 \qquad \qquad - x + 2 \\ - (x^3 + 3x^2 + x - 1) \\ \hline \text{Remove parentheses and change} \\ \text{signs.} \\ x^4 + x^3 \qquad \qquad - x + 2 \\ - x^3 - 3x^2 - x + 1 \\ \hline x^4 \qquad - 3x^2 - 2x + 3 \end{array}$$

44. Multiplication and Division of Monomials

a. Multiplication. In multiplying monomials, multiply the numerical coefficients and write this result as the coefficient of the product. After the coefficient, write each literal factor with an exponent equal to the sum of all the exponents of that letter in the original factors.

For example, $3a^n \cdot 2a^m = 6a^{n+m}$.

Example 1: Multiply x^2 by x^3 .
 $x^2 \cdot x^3 = x^{2+3} = x^5$

Example 2: Multiply x , x^3 , and x^{10} .
 $x^1 \cdot x^3 \cdot x^{10} = x^{1+3+10} = x^{14}$

Example 3: Multiply x^3y^6 by $3xy^2$.

Step 1. Multiply the coefficients:
 $1 \cdot 3 = 3$

Step 2. Multiply the two factors having the base x :

$$x^3 \cdot x = x^{3+1} = x^4$$

Step 3. Multiply the two factors having the base y :

$$y^6 \cdot y^2 = y^{6+2} = y^8$$

Step 4. The product is:

$$x^4y^8 \cdot 3xy^2 = 3x^4y^8$$

Example 4: Multiply x^2y^4z and wx^3yz^5 .

$$x^2y^4z \cdot wx^3yz^5 = wx^{2+3}y^{4+1}z^{1+5}$$

$$x^{2+3} = x^5$$

$$y^{4+1} = y^5$$

$$z^{1+5} = z^6$$

$$\text{Therefore, } x^2y^4z \cdot wx^3yz^5 = wx^5y^5z^6$$

b. Division. In dividing a monomial by a monomial, divide the numerical coefficient of the dividend by the coefficient of the divisor and write the result as the coefficient of the quotient. After the coefficient, write each literal factor with an exponent equal to its exponent in the dividend minus its exponent in the divisor. Thus, to divide $6a^n$ by $3a^m$ (n greater than m), $\frac{6a^n}{3a^m} = 2a^{n-m}$.

Example 1: Divide x^3 by x^2 .

$$\frac{x^3}{x^2} = x^{3-2} = x^1 = x$$

Example 2: Divide $5x^6yz^3$ by $6x^3z^2$.

$$\begin{aligned} \frac{5x^6yz^3}{6x^3z^2} &= \frac{5}{6}x^{6-3}yz^{3-2} \\ &= \frac{5}{6}x^3yz \text{ or } \frac{5x^3yz}{6} \end{aligned}$$

c. Removal of Parentheses and Brackets.

- (1) In multiplying a quantity in parentheses by a given factor, multiply each term inside the parentheses by that factor and drop the parentheses. If the factor is a negative quantity, the sign of every term inside the parentheses is changed. For example, $-5(a - b + c) = -5a + 5b - 5c$.
- (2) When an algebraic expression, such as $5x - 4[x - 2(x - 3)]$, has more than one grouping symbol (parentheses and brackets), remove the inside grouping symbol first and then successively remove the outer grouping symbols.

Example 1: Simplify $5x - 4 [x - 2(x - 3)]$.

$$\begin{aligned} 5x - 4 [x - 2(x - 3)] &= 5x - 4 [x - 2x + 6] \\ &= 5x - 4x + 8x - 24 \\ &= 9x - 24 \\ &= 3(3x - 8) \end{aligned}$$

Example 2: Simplify $4a - \{6a - 2b + 2 [2a - b + 42] - (c + 2b)\}$.

$$\begin{aligned} 4a - \{6a - 2b + 2 [2a - b + 42] - (c + 2b)\} \\ &= 4a - \{6a - 2b + 4a - 2b + 84 - c - 2b\} \\ &= 4a - 6a + 2b - 4a + 2b - 84 + c + 2b \\ &= -6a + 6b + c - 84 \end{aligned}$$

Example 3: Simplify $-(-1 [- (x - y - z) + 29] - 39 + 2y - z)$.

$$\begin{aligned} -(-1 [- (x - y - z) + 29] - 39 + 2y - z) \\ &= -(-1 [-x + y + z + 29] - 39 + 2y - z) \\ &= -(+x - y - z - 29 - 39 + 2y - z) \\ &= -x + y + z + 29 + 39 - 2y + z \\ &= -x - y + 2z + 68 \end{aligned}$$

45. Raising Algebraic Functions to Powers

To raise an algebraic function to a power, multiply the exponents. Thus, $(a^m)^n = a^{mn}$.

Example 1: Simplify $(5^3)^4$.

$$(5^3)^4 = 5^{3 \cdot 4} = 5^{12}$$

Example 2: Simplify $(2ab)^3$.

$$\begin{aligned} (2ab)^3 &= 2ab \cdot 2ab \cdot 2ab = 8a^3 b^3 \\ \text{or } 2^{1 \cdot 3} a^{1 \cdot 3} b^{1 \cdot 3} &= 8a^3 b^3 \end{aligned}$$

Example 3: Simplify $(ax^2)^3$.

$$(ax^2)^3 = a^{1 \cdot 3} x^{2 \cdot 3} = a^3 x^6$$

Example 4: Simplify $[(x^3)^4]^5$.

$$[(x^3)^4]^5 = [x^{3 \cdot 4}]^5 = [x^{12}]^5 = x^{12 \cdot 5} = x^{60}$$

Example 5: Simplify $\left(\frac{2}{x^2}\right)^5$

$$\left(\frac{2}{x^2}\right)^5 = \frac{2^{1 \cdot 5}}{x^{2 \cdot 5}} = \frac{2^5}{x^{10}} = \frac{32}{x^{10}}$$

46. Negative Exponents

The rule for dividing monomials (par. 44b) also holds when the exponents of the denominator is greater than the exponent of the numerator. For example, $a^3 \div a^5 = a^{3-5} = a^{-2}$; however, a quantity such as a^{-2} may be written as $\frac{1}{a^2}$.

Example: Multiply x^2 , x^{-1} , and $\frac{1}{x^{-3}}$.

Step 1. Write down the factors of the multiplication:

$$x^2 \cdot x^{-1} \cdot \frac{1}{x^{-3}}$$

Step 2. Place all factors in the numerator:

$$x^2 \cdot x^{-1} \cdot x^3$$

Step 3. Multiply the factors (add their exponents):

$$x^{2-1+3} = x^4$$

47. Zero Exponents

The zero power of any quantity is equal to 1. For example $x^2 \cdot x^{-2} = x^0$ when the exponents are added. However, x^{-2} can also be written $\frac{1}{x^2}$; in this case, $x^2 \cdot x^{-2} = \frac{x^2}{x^2} = 1$.

Therefore, $x^0 = 1$. Any number (except zero) raised to the zero power is equal to 1.

Example: Solve $\frac{x^2y^2}{z} \cdot \frac{z^4}{xy} + \frac{x^2y^2}{z^3}$.

$$\begin{aligned} \frac{x^2y^2}{z} \cdot \frac{z^4}{xy} + \frac{x^2y^2}{z^3} &= \frac{x^2y^2z^4}{xyz} + \frac{x^2y^2}{z^3} = \frac{x^2y^2z^4}{xyz} \cdot \frac{z^3}{x^2y^2} \\ &= \frac{x^2y^2z^7}{x^2y^2z} = x^{2-2}y^{2-2}z^{7-1} \\ &= x^{-1}y^0z^6 = x^{-1} \cdot 1 \cdot z^6 = \frac{z^6}{x} \end{aligned}$$

48. Multiplication of Polynomials

a. By a Monomial. To multiply a polynomial by a monomial, multiply each term in the polynomial separately by the monomial and add the products. Observe the rules for the multiplication of signed numbers (par. 39) and exponents (par. 44a).

Example 1: Multiply $3a + 2ab + 5c$ by $2b$.

$$\begin{array}{r} 3a + 2ab + 5c \\ \quad \quad \quad 2b \\ \hline 6ab + 4ab^2 + 10bc \end{array}$$

Example 2: Multiply $ad - ae + af$ by $3a^2$.

$$\begin{array}{r} ad - ae + af \\ \quad \quad \quad 3a^2 \\ \hline 3a^2d - 3a^2e + 3a^2f \end{array}$$

Example 3: Multiply $3x^2y^2 - 2xy^3 + 5x^4y$ by $4x^3y$.

$$\begin{array}{r} 3x^2y^2 - 2xy^3 + 5x^4y \\ \quad \quad \quad 4x^3y \\ \hline 12x^5y^3 - 8x^4y^4 + 20x^7y^2 \end{array}$$

b. By a Polynomial. To multiply a polynomial by another polynomial, multiply each term of one polynomial by each term of the other and add the products.

Example 1: Multiply $(a + b)$ by $(a + b)$.

$$\begin{array}{r} a + b \\ a + b \\ \hline a^2 + ab \\ \quad ab + b^2 \\ \hline a^2 + 2ab + b^2 \end{array}$$

Example 2: Multiply $2x + 3y$ by $2x + 3z$.

$$\begin{array}{r} 2x + 3y \\ 2x + 3z \\ \hline 4x^2 + 6xy \\ \quad \quad \quad + 6xz + 9yz \\ \hline 4x^2 + 6xy + 6xz + 9yz \end{array}$$

Example 3: Multiply $5x^2 - 6xy + 3y^2$ by $x + y$.

$$\begin{array}{r} 5x^2 - 6xy + 3y^2 \\ \quad \quad \quad x + y \\ \hline 5x^3 - 6x^2y + 3xy^2 \\ \quad \quad \quad + 5x^2y - 6xy^2 + 3y^3 \\ \hline 5x^3 - x^2y - 3xy^2 + 3y^3 \end{array}$$

49. Division of Polynomials

a. By a Monomial. To divide a polynomial by a monomial, divide each term of the polynomial by the monomial.

Example 1: Divide $3a^2 + 4ab + 5ac$ by a .

$$\frac{3a^2 + 4ab + 5ac}{a} = 3a + 4b + 5c$$

Example 2: Divide $7x^2 + 14xy - 21ax^2$ by $7x$.

$$\frac{7x^2 + 14xy - 21ax^2}{7x} = x + 2y - 3ax$$

Example 3: Divide $4r(s + t) - r^2(s + t)^2 + qr^2(s + t)^3$ by $r^2(s + t)$.

$$\begin{aligned} &\frac{4r(s + t) - r^2(s + t)^2 + qr^2(s + t)^3}{r^2(s + t)} \\ &= \frac{4r(s + t)}{r^2(s + t)} - \frac{r^2(s + t)^2}{r^2(s + t)} + \frac{qr^2(s + t)^3}{r^2(s + t)} \\ &= \frac{4}{r} - r(s + t) + q(s + t)^2 \end{aligned}$$

b. By a Polynomial. To divide a polynomial by a polynomial, just arrange the dividend and the divisor according to descending powers of one variable, starting with the highest powers at the left. Then proceed as shown in the examples below. If there is a remainder, write it as the numerator of a fraction the denominator of which is the divisor.

Example 1: Divide $ab + ac + db + dc$ by $a + d$.

Step 1. Divide the first term of the divisor, a , into the first term of the dividend, ab . The quantity a is contained in the first term, ab , b times. Write b as the first term of the quotient.

Step 2. Multiply both terms of the divisor by b :

Step 3. Subtract the result from the original dividend:

Step 4. Divide the first term of the divisor into the first term of the

remainder. It is contained in the first term, ac , c times. Write c as the second term of the quotient.

$$\begin{array}{r} b + c \\ a + d \overline{) ab + ac + db + dc} \\ \underline{ab \quad \quad + db} \\ ac \quad \quad + dc \end{array}$$

Step 5. Multiply both terms of the divisor by c and subtract. There is no remainder:

$$\begin{array}{r} b + c \\ a + d \overline{) ab + ac + db + dc} \\ \underline{ab \quad \quad + db} \\ ac \quad \quad + dc \\ \underline{ac \quad \quad + dc} \\ \end{array}$$

Step 6. Therefore, $\frac{ab + ac + db + dc}{a + d} = b + c$.

Example 2: Divide $x^2 + 2xy + y^2$ by $x + y$.

$$\begin{array}{r} x + y \\ x + y \overline{) x^2 + 2xy + y^2} \\ \underline{x^2 + xy} \\ xy + y^2 \\ \underline{xy + y^2} \\ \end{array}$$

Therefore, $\frac{x^2 + 2xy + y^2}{x + y} = x + y$.

Example 3: Divide $6a^2 - ab - 27ac - 15b^2 + 7bc + 30c^2$ by $3a - 5b - 6c$.

$$\begin{array}{r} 2a + 3b - 5c \\ 3a - 5b - 6c \overline{) 6a^2 - ab - 27ac - 15b^2 + 7bc + 30c^2} \\ \underline{6a^2 - 10ab - 12ac} \\ 9ab - 15ac - 15b^2 + 7bc + 30c^2 \\ \underline{9ab - 15b^2 - 18bc} \\ - 15ac + 25bc + 30c^2 \\ \underline{ - 15ac + 25bc + 30c^2} \\ \end{array}$$

50. Review Problems—Fundamental Operations

a. Add the following algebraic expressions:

- (1) $2a^4 + 3a^2b^2 + 5b^4$, $a^4 - 5a^2b^2 - 2b^4$, and $3a^4 - 2a^2b^2 + b^4$.
- (2) $3E - 2RI - 15ZI$, $6RI + 24ZI$, and $-2E - RI + 11ZI$.
- (3) $10w - 4x + 3y + 6z$, $2x - 5w + y$, $3z - 2x - y$, and $6y - 4w - z + 5x$.

b. Subtract the following algebraic expressions:

- (1) $-7ax - 2by + cz$ from $12ax + 15by - 8cz$.
- (2) $10w - 3y - 4z + 6x$ from $3x + 5y - 2z - 15w$.
- (3) $8a^2 + 10ab - 4b^2$ from $12a^2 - 24ab + 2b^2$.

c. Simplify:

- (1) $7a^0$
- (2) $(5x + 9)^0$
- (3) $(3x^2 + 7x + 1)^0$

d. Perform the indicated operations:

- (1) $f^6 \cdot f^4$
- (2) $y^a \cdot y^b$
- (3) $v^{x+1} \cdot v^{x-1}$
- (4) $\frac{r^{10}}{r^5}$
- (5) $(R^3)^m$
- (6) $\frac{r^{m+5}}{r^4}$

e. Express with positive exponents:

- (1) $4x^{-4}$
- (2) $r^{-3}x^{-4}$
- (3) $(6a)^{-2b}$
- (4) $I^{-2}R^{-1}$
- (5) $2^{-3}a^2b^{-3}$
- (6) $\frac{3EI^{-2}R^{-1}}{4}$

f. Perform the indicated operations:

- (1) $(5ab)(2a^2 - 3ab + 7b^2)$
- (2) $4a(a^2 + 3a + 1)$
- (3) $(i^2 + 3i + 9)(i - 3)$
- (4) $(2x^2 + 3xy - y^2)(x^2 + xy + y^2)$
- (5) $(3x^2 - 2xy - 5y^2)(3x^2 + 2xy - 5y^2)$
- (6) $[(x - 1)a - (x - 1)c] \div [(x - 1)ac]$
- (7) $(3rL - rR^2) \div rR$
- (8) $(5a^4b - 10a^3b^2 + 15a^2b^3) \div 5a^4b$
- (9) $(1 + 2z^4 + 4z^2 - z^3 + 7z) \div (3 + z^2 - z)$
- (10) $(100b^3 - 13b^2 - 3b) \div (8 + 25b)$

Section IV. FACTORING

51. Understanding Factoring

Factoring is the breaking up of an expression into the *factors* or *individual parts* of which it is composed. In other words, to factor an algebraic expression means to find two or more expressions which, when multiplied together, will result in the original expression. For example, since $3 \cdot 5 = 15$, 3 and 5 are the factors of 15; since $4 \cdot a \cdot b = 4ab$, 4, a , and b , are the factors of $4ab$; since $a(x + y) = ax + ay$, a and $(x + y)$ are the factors of $ax + ay$.

52. Factors of Positive Integers

It is often difficult to determine at a glance the factors of which a number is composed. For example, consider the numerical expression 36. There are many different combinations of numbers that would result in an answer of 36; for example, the desired factors for 36 in a certain problem might $36 \cdot 1$, $18 \cdot 2$, $12 \cdot 3$, $9 \cdot 4$, $6 \cdot 6$, $2 \cdot 2 \cdot 9$, $4 \cdot 3 \cdot 3$, $2 \cdot 3 \cdot 6$, and so on.

53. Factors of a Monomial

Because the factors of a monomial are evident, usually a monomial is not separated into its prime factors. The factors of a^4b^2c are $a \cdot a \cdot a \cdot a \cdot b \cdot b \cdot c$, and the factors of $15a^2b^3$ are $3 \cdot 5 \cdot a \cdot a \cdot b \cdot b \cdot b$.

54. Square Root of a Monomial

The square root of an algebraic expression is one of its two equal factors. Thus, the square root of 49 is 7, the square root of 81 is 9, the square root of a^2 is a , and the square root of x^2y^2 is xy . As discussed in paragraph 31, the radical sign is used to indicate the square root of a number. Actually, every number has two square roots, one positive and one negative. If no sign precedes the radical, the positive or *principal root* is understood. For example, $\sqrt{9} = +3$. If a negative sign precedes the radical, however, the negative root is intended. Thus, $-\sqrt{9} = -3$. When dealing with literal terms, the values of the various factors often

are unknown. Therefore, when extracting the square root of a monomial, extract the square root of the numerical coefficient, divide the exponents of the literal terms by 2, and prefix the square root with the plus or minus (\pm) sign, which denotes that either the positive or negative root may be the correct one.

Example 1: $\sqrt{x^{16}y^4} = \pm x^8y^2$.

Example 2: $\sqrt{49a^4b^2} = \pm 7a^2b$.

55. Cube Root of a Monomial

The cube root of a monomial is one of its three equal factors. The index 3 in the angle of the radical sign ($\sqrt[3]{}$) indicates cube root (par. 31). To extract the cube root of a monomial, extract the cube root of the numerical coefficient, divide the exponents of the literal terms by 3, and prefix the cube with the same sign as that of the monomial.

Example 1: $\sqrt[3]{a^6y^3} = a^2y$.

Example 2: $\sqrt[3]{27x^{12}y^6z^9} = 3x^4y^2z^3$.

Example 3: $\sqrt[3]{-64r^{21}s^3} = -4r^7s$.

56. Factors of a Polynomial

a. *Common Monomial Factor.* In an algebraic expression, the type of factor which can be recognized most easily is the monomial factor (single letter or number) which is common to each term in the expression. For instance, in the expression $xa + xb + xc$, the x is a factor common to each of the terms. Thus, the expression $xa + xb + xc$ can be written $x(a + b + c)$. This relationship is shown pictorially in figure 10. Since the area of a rectangle is equal to its base multiplied by its altitude (par. 136b), the area of the uppermost rectangle in figure 10 is x times a , or xa . The areas of the center and lower rectangles are xb and xc , respectively. The area of the large rectangle formed by the three small rectangles is equal to its base x times its altitude $(a + b + c)$, or $x(a + b + c)$. Since the area of the large

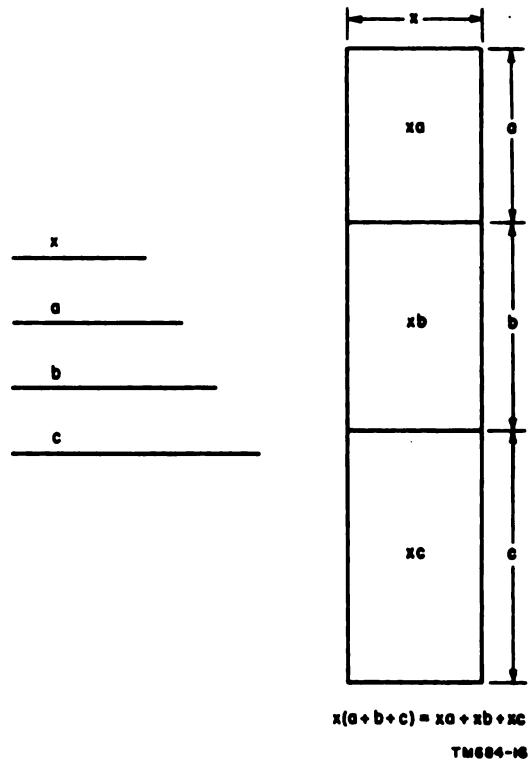


Figure 10. Common monomial factors.

rectangle is equal to the sum of the areas of the three smaller rectangles, then $x(a + b + c)$ is equal to $xa + xb + xc$. This shows that the factor x can be removed from $xa + xb + xc$ and the expression written $x(a + b + c)$. Accuracy of factoring can be checked by multiplying the two factors together—the product should be the original expression. Thus, $x(a + b + c) = xa + xb + xc$. To factor a polynomial the terms of which have a common monomial factor, determine the largest factor common to all of the terms, divide the polynomial by this factor, and write the quotient in parentheses preceded by the monomial factor. The first factor contains all that is common to all of the terms; it may consist of more than one literal number and may be to a power higher than the first.

Example 1: Factor $x^3 - 7x^2 + 4x$.

$$x^3 - 7x^2 + 4x = x(x^2 - 7x + 4)$$

Example 2: Factor $abx + aby - abz$.

$$abx + aby - abz = ab(x + y - z)$$

Example 3: Factor $2az^2 - 4bz^2 + 6cz^2$.

$$2az^2 - 4bz^2 + 6cz^2 = 2z^2(a - 2b + 3c)$$

b. Binomial Factors. Sometimes binomial factors are not immediately apparent, and an algebraic term may appear to have no common factors. For example, the expression $am + bm + an + bn$ may seem to have no factors in common. However, the first pair, $am + bm$, has a common factor, m , and the second pair, $an + bn$, has a common factor, n . Factoring out the common factors, the expression becomes $m(a + b) + n(a + b)$. Since there are two terms containing a common factor $(a + b)$, this factor can be removed to make the expression $(a + b)(m + n)$. Thus, the factors are $(a + b)$ and $(m + n)$. This relationship is shown pictorially in figure 11. Starting with

the upper left-hand rectangle and going clockwise, the areas of the four rectangles are an , am , bm , and bn . The area of the large rectangle formed by the four smaller rectangles is its base $(m + n)$ times its altitude $(a + b)$, or $(m + n)(a + b)$. Since the area of the large rectangle is equal to the sum of the areas of the four smaller rectangles, then $(m + n)(a + b)$ is equal to $an + am + bm + bn$. This shows that the expression $am + bm + an + bn$ can be factored into $(m + n)$ and $(a + b)$. To check the factoring, multiply $(a + b)$ by $(m + n)$; the product is $am + an + bm + bn$. Since the addition of terms can be expressed in any order, the factoring is correct.

Example 1: Factor $py - pz - qy + qz$.

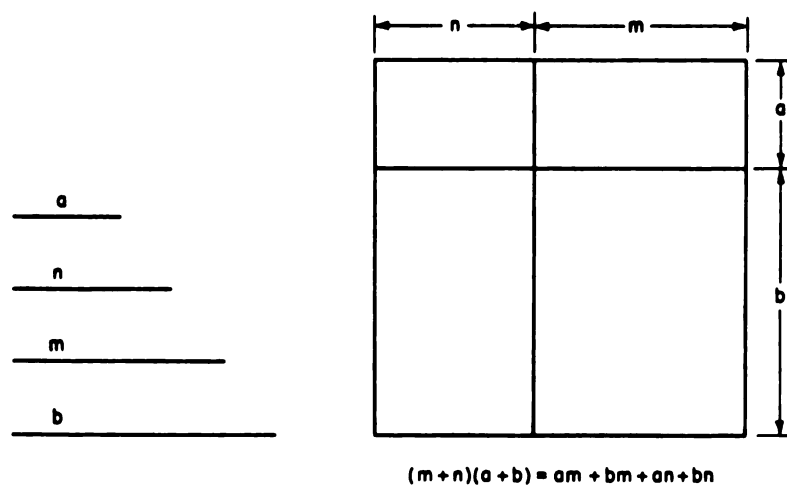
$$\begin{aligned} py - pz - qy + qz &= p(y - z) - q(y - z) \\ &= (p - q)(y - z) \end{aligned}$$

Example 2: Factor $4xa - 8zb - 6ya - 4xb + 8za + 6yb$.

$$\begin{aligned} 4xa - 8zb - 6ya - 4xb + 8za + 6yb &= 4xa - 6ya + 8za - 4xb + 6yb - 8zb \\ &= 2a(2x - 3y + 4z) - 2b(2x - 3y + 4z) \\ &= (2a - 2b)(2x - 3y + 4z) \\ &= 2(a - b)(2x - 3y + 4z) \end{aligned}$$

Example 3: Factor $da + db - dc - ea - eb + ec + fa + fb - fc$.

$$\begin{aligned} da + db - dc - ea - eb + ec + fa + fb - fc &= d(a + b - c) - e(a + b - c) + f(a + b - c) \\ &= (d - e + f)(a + b - c) \end{aligned}$$



TM684-17

Figure 11. Binomial factors.

57. Factors of the Square of a Binomial

a. Square of Sum of Two Numbers. The square of the sum of two numbers is a special product that should be readily recognized to aid in factoring algebraic expressions. *The square of the sum of two numbers equals the square of the first, plus twice the product of the first and second, plus the square of the second.* To illustrate, $(a + b)^2 = a^2 + 2ab + b^2$. Conversely, the factors of $a^2 + 2ab + b^2$ are $(a + b)(a + b)$ or $(a + b)^2$. This relationship is shown in figure 12. The areas of the four rectangles, as shown on the figure, are a^2 , ab , ab , and b^2 . The area of the large rectangle formed by the four smaller rectangles is equal to its base $(a + b)$ times its altitude $(a + b)$, or $(a + b)^2$. Since the area of the large rectangle is equal to the sum of the areas of the four smaller rectangles, then $(a + b)^2$ is equal to $a^2 + ab + ab + b^2$, or $a^2 + 2ab + b^2$. This shows that the expression $a^2 + 2ab + b^2$ can be factored into $(a + b)(a + b)$, or $(a + b)^2$. Figure 13 shows a similar relationship in which nine small rectangles form one large rectangle.

In this case, the area of the large rectangle is $(a + 2b)^2$ and the sum of the areas of the nine smaller rectangles is $a^2 + 4ab + 4b^2$; consequently, $(a + 2b)$ and $(a + 2b)$ are factors of $a^2 + 4ab + 4b^2$. Thus, the factors of the square of one number, plus twice the product of the first and second number, plus the square of the second number are the square of the sum of the two numbers.

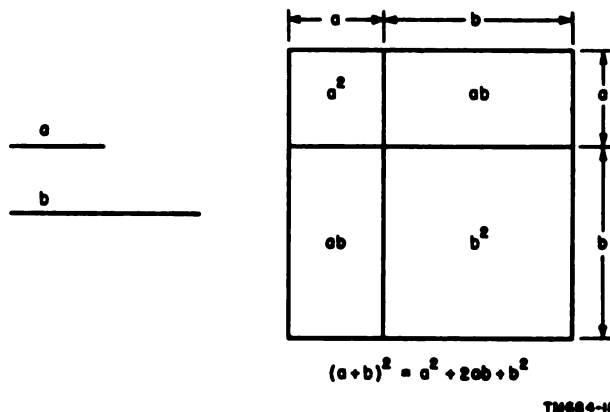


Figure 12. Square of sum of two numbers.

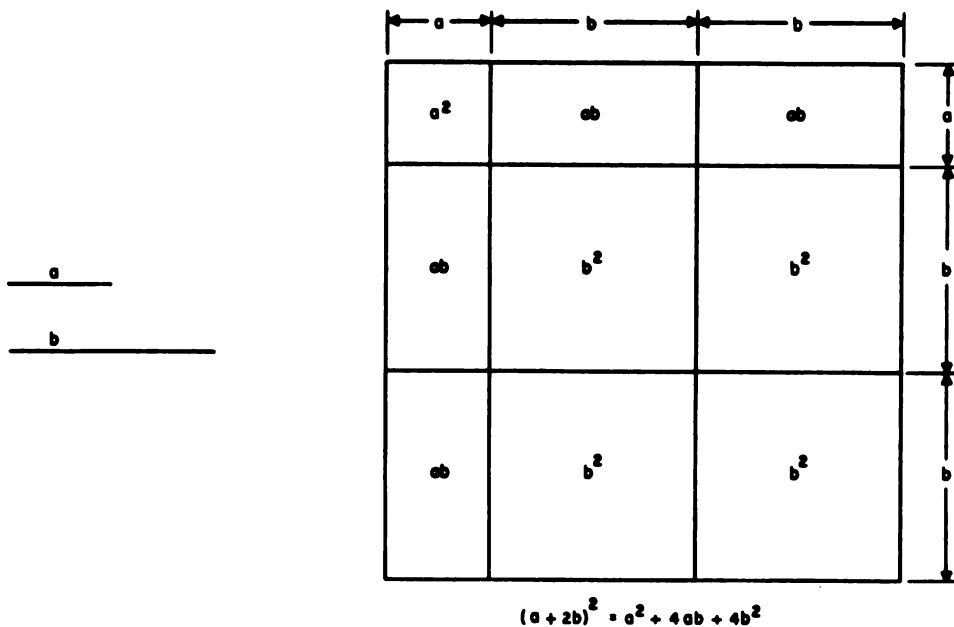


Figure 13. Factors of square of positive binomial.

Example: Factor $4b^2 + 16db + 16d^2$.

$$\begin{aligned} 4b^2 + 16db + 16d^2 &= (2b + 4d)(2b + 4d) \\ &= (2b + 4d)^2 \\ &= [2(b + 2d)]^2 \\ &= 2^2(b + 2d)^2 \end{aligned}$$

To prove the factoring:

$$\begin{aligned} (2b + 4d)^2 &= (2b)^2 + 2(2b)(4d) + (4d)^2 \\ &= 4b^2 + 16db + 16d^2 \end{aligned}$$

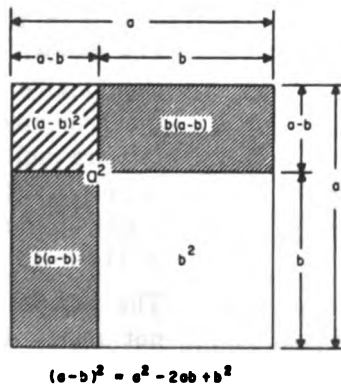
Note that 4 (that is, 2^2) may be removed before factoring the rest of the expression—this often simplifies computation.

$$4(b^2 + 4bd + 4d^2) = 4(b + 2d)^2$$

b. Square of Difference of Two Numbers.
The square of the difference of two numbers equals the square of the first, minus twice the product of the first and second, plus the square of the second. For example, $(a - b)^2 = a^2 - 2ab + b^2$. The factors of $a^2 - 2ab + b^2$ are $(a - b)(a - b)$ or $(a - b)^2$. This relationship is shown pictorially in figure 14. The area of the large rectangle formed by the four small rectangles is a^2 . The areas of the four smaller rectangles are shown on the illustration. The area of the upper left-hand rectangle is $(a - b)^2$. It is also equal to the area of the large rectangle minus the areas of the other three rectangles, or $a^2 - b(a - b) - b(a - b) - b^2$.

This can be further simplified as follows:

$$\begin{aligned} a^2 - b(a - b) - b(a - b) - b^2 \\ a^2 - 2b(a - b) - b^2 \\ a^2 - 2ab + 2b^2 - b^2 \\ a^2 - 2ab + b^2 \end{aligned}$$



TM684-20

Figure 14. Square of difference of two numbers.

Therefore, $(a - b)^2 = a^2 - 2ab + b^2$, and $(a - b)$ and $(a - b)$ are factors of $a^2 - 2ab + b^2$. Thus, the factors of the square of one number, minus twice the product of the first and the second, plus the square of the second are the square of the difference of the two numbers.

Example:

Factor $9b^2 - 12bd + 4d^2$.

$$\begin{aligned} 9b^2 - 12bd + 4d^2 &= (3b - 2d)(3b - 2d) \\ &= (3b - 2d)^2 \end{aligned}$$

To prove the factoring:

$$\begin{aligned} (3b - 2d)^2 &= (3b)^2 - 2(3b)(2d) + (2d)^2 \\ &= 9b^2 - 12bd + 4d^2 \end{aligned}$$

58. Factors of Difference of Two Squares

The product of the sum and difference of two numbers is equal to the difference of their squares. Thus, $(a + b)(a - b) = a^2 - b^2$. To factor the difference of two squares, extract the square roots, then write the sum of the roots as one factor and the difference of the roots as the other factor. Thus, the factors of $a^2 - b^2$ are $(a + b)(a - b)$.

Example:

Factor $4x^2 - 9y^2$.

$$4x^2 - 9y^2 = (2x + 3y)(2x - 3y)$$

To prove the factoring:

$$\begin{aligned} (2x + 3y)(2x - 3y) \\ &= (2x)^2 + (2x)(3y) - (2x)(3y) - (3y)^2 \\ &= 4x^2 - 9y^2 \end{aligned}$$

59. Factors of Trinomials

a. Trinomials Such as $x^2 + x(a + b) + ab$. The factors of a trinomial consisting of the square of the common term, the product of the common term and the algebraic sum of the unlike terms, and the product of the unlike terms are two binomials that have one term in common and the other term unlike. Thus, the factors of $x^2 + x(a + b) + ab$ are $(x + a)(x + b)$ where x is the common term, and a and b are the unlike terms. As proof, the product of $(x + a)(x + b)$ is $x^2 + xa + xb + ab$. By factoring the two terms which have a common factor, x , the original trinomial $x^2 + x(a + b) + ab$ is obtained.

Example: Factor $9r^2 + 6r(s + t) + 4st$.

$$9r^2 + 6r(s + t) + 4st = (3r + 2s)(3r + 2t)$$

To prove the factoring:

$$\begin{aligned} (3r + 2s)(3r + 2t) &= (3r)^2 + (3r)(2s) + (3r)(2t) + (2s)(2t) \\ &= 9r^2 + 6rs + 6rt + 4st \\ &= 9r^2 + 6r(s + t) + 4st \end{aligned}$$

b. Trinomials Such as $x^2 + 6x + 8$. To factor a trinomial of the form $x^2 + 6x + 8$, $x^2 - 6x + 8$, $x^2 + 6x - 8$, or $x^2 - 6x - 8$, much of the work is done by trial and error. The problem is to find two factors of the final term which, when added together, will give the coefficient of the middle term. Taking the first of the trinomials above, the factors of 8 are $8 \cdot 1$ and $4 \cdot 2$. Since $4 + 2 = 6$ and $8 + 1 = 9$, the factors that will be used are 4 and 2. With regards to signs, if the sign of the final term is positive, the signs of the two factors are alike and will be the same as the sign of the middle term. Thus, the factors of $x^2 + 6x + 8$ are $(x + 4)$ and $(x + 2)$, and the factors of $x^2 - 6x + 8$ are $(x - 4)$ and $(x - 2)$. If the sign of the final term is negative, however, the signs containing the two terms of each binomial factor are unlike; the larger factor will take the sign of the middle term. For example, the factors of $x^2 + 2x - 8$ are $(x + 4)$ and $(x - 2)$, and the factors of $x^2 - 2x - 8$ are $(x - 4)$ and $(x + 2)$.

Example 1: Factor $y^2 + 12y + 32$.

$$y^2 + 12y + 32 = (y + 8)(y + 4)$$

Example 2: Factor $z^2 - 11z + 30$.

$$z^2 - 11z + 30 = (z - 6)(z - 5)$$

Example 3: Factor $r^2 + 4r - 12$.

$$r^2 + 4r - 12 = (r + 6)(r - 2)$$

Example 4: Factor $s^2 - s - 20$.

$$s^2 - s - 20 = (s - 5)(s + 4)$$

c. Trinomials Such as $6a^2 - 11a - 10$. The procedure used to factor trinomials of this type

is an extension of the procedure described in *b* above and as shown in the example below.

Example: Factor $6a^2 - 11a - 10$.

Step 1. Find two numbers that, when multiplied together, form the left-hand term, $6a^2$.

$$(6a)(a) = 6a^2$$

$$(2a)(3a) = 6a^2$$

Step 2 Find two numbers that, when multiplied together, form the right-hand term, -10 .

$$(10)(-1) = -10$$

$$(5)(-2) = -10$$

$$(-10)(1) = -10$$

$$(-5)(2) = -10$$

Step 3. By trial and error, set up two binomial expressions containing factors from step 1 in the left-hand term and factors from step 2 in the right-hand term. The proper selection of factors should give the middle term of the trinomial when the binomials are multiplied.

$$(2a + 5)(3a - 2) \text{ (first trial)}$$

$$6a^2 + 15a - 4a - 10 = 6a^2 + 11a - 10 \text{ (multiplying out)}$$

The middle term obtained does not match the middle term of the given trinomial. The numerical value is correct, but the sign is wrong. Make a second

trial with the signs in the binomials changed.

$$(2a - 5)(3a + 2)$$

$$6a^2 - 15a + 4a - 10 = 6a^2 - 11a - 10$$

Step 4. Since the second trial results in the correct trinomial, the factors of $6a^2 - 11a - 10$ are $(2a - 5)$ and $(3a + 2)$.

Note. The method of trial and error used above may not work in every case. Other arrangements of factors and signs must be tried until the correct results are obtained.

60. Factors of Two Cubes

a. Sum of Two Cubes. The factors of the sum of two cubes, such as $x^3 + y^3$, are $(x + y)$ and $(x^2 - xy + y^2)$. In this case, the binomial is an expression of the sum of the primes times the sum of the squares of the primes minus the product of the primes. This is seen readily by dividing $x^3 + y^3$ by $x + y$.

Thus,

$$\begin{array}{r} x + y \overline{) x^3 - xy^2 + y^3} \\ \underline{x^3 + x^2y} \\ -x^2y - xy^2 \\ \underline{-x^2y - xy^2} \\ xy^2 + y^3 \\ \underline{xy^2 + y^3} \\ 0 \end{array}$$

Example 1: Factor $z^3 + 8$.

$$z^3 + 8 = (z + 2)(z^2 - 2z + 4)$$

To prove the factoring:

$$\begin{array}{r} z + 2 \overline{) z^3 - 2z^2 + 4z + 8} \\ \underline{z^3 + 2z^2} \\ -2z^2 - 4z \\ \underline{-2z^2 - 4z} \\ 4z + 8 \\ \underline{4z + 8} \\ 0 \end{array}$$

Example 2:

Factor $r^3 + 125x^3$.

$$r^3 + 125x^3 = (r + 5x)(r^2 - 5rx + 25x^2)$$

To prove the factoring:

$$\begin{array}{r} r + 5x \overline{) r^3 - 5r^2x + 25rx^2 + 125x^3} \\ \underline{r^3 + 5r^2x} \\ -5r^2x - 25rx^2 \\ \underline{-5r^2x - 25rx^2} \\ 25rx^2 + 125x^3 \\ \underline{25rx^2 + 125x^3} \\ 0 \end{array}$$

b. Difference of Two Cubes. The factors of the difference of two cubes, such as $x^3 - y^3$, are $(x - y)(x^2 + xy + y^2)$. These factors are an expression of the difference of the primes times the sum of the squares plus the product of the primes. As in the sum of two cubes, factoring can be proved by dividing the product by the binomial factor.

Example 1: Factor $a^3 - b^3$.

$$a^3 - b^3 = (a - b)(a^2 + ab + b^2)$$

To prove the factoring:

$$\begin{array}{r} a - b \overline{) a^3 + a^2b + ab^2 + b^3} \\ \underline{a^3 - a^2b} \\ a^2b - ab^2 \\ \underline{a^2b - ab^2} \\ ab^2 - b^3 \\ \underline{ab^2 - b^3} \\ 0 \end{array}$$

Example 2: Factor $z^3 - 27$.

$$z^3 - 27 = (z - 3)(z^2 + 3z + 9)$$

To prove the factoring:

$$\begin{array}{r} z - 3 \overline{) z^3 + 3z^2 + 9z - 27} \\ \underline{z^3 - 3z^2} \\ 3z^2 - 9z \\ \underline{3z^2 - 9z} \\ 9z - 27 \\ \underline{9z - 27} \\ 0 \end{array}$$

$$-\frac{a-b}{c-d} = +\frac{-(a-b)}{c-d} = \frac{-a+b}{c-d} = \frac{b-a}{c-d}.$$

c. If the numerator or denominator is in factored form, change only the sign of one of the factors, not both. Thus,

$$-\frac{(x-y)(x-2y)}{x+y} = \frac{(x+y)(x-2y)}{x+y} = \frac{(y-x)(x-2y)}{x+y}.$$

64. Changing Form of Algebraic Fractions

In algebra, as in arithmetic, any fraction can be changed to an equivalent fraction by multiplying or dividing both the numerator and denominator by the same term or number except zero. This will not change the value of the fraction. For example, to change the fraction $\frac{3}{5}$ to a fraction with 10 as its denominator, multiply both the numerator and the denominator by 2. Thus,

$$\frac{3}{5} = \frac{3 \cdot 2}{5 \cdot 2} = \frac{6}{10}.$$

Similarly, to change the fraction $\frac{x}{y}$ to a fraction with yz as its denominator, the denominator is changed to yz by multiplying by z ; the numerator also is multiplied by z to become xz . Thus,

$$\frac{x}{y} = \frac{x \cdot z}{y \cdot z} = \frac{xz}{yz}.$$

Example 1: Change $\frac{4}{a-3}$ to a fraction with $a^2 - 9$ as its denominator.

$$\begin{aligned} \frac{4}{a-3} &= \frac{4 \cdot (a+3)}{(a-3)(a+3)} \\ &= \frac{4(a+3)}{a^2-9} \end{aligned}$$

Example 2: Change $\frac{4r-3}{6r}$ to a fraction with $18\pi r^2 s$ as its denominator.

$$\frac{4r-3}{6r} = \frac{(4r-3) \cdot 3\pi r s}{6r \cdot 3\pi r s} = \frac{3\pi r s(4r-3)}{18\pi r^2 s}$$

65. Reducing Fractions to Lowest Terms

As in arithmetic, when the numerator and denominator of a fraction have no common factor other than 1, the fraction is said to be in its lowest terms. The fraction $\frac{3}{8}$, $\frac{a}{b}$, and

$\frac{p+q}{p-q}$, therefore, are in their lowest terms

since the numerator and denominator of each fraction have no other factor except 1. The fractions $\frac{6}{12}$ and $\frac{3a}{9a^2}$ are not in their lowest

terms. The fraction $\frac{6}{12}$ can be reduced to its lowest term by dividing both the numerator and denominator by 6. Similarly, the fraction

$\frac{6y}{15y^2}$ can be reduced to $\frac{1}{3y}$ by dividing the numerator and denominator by $6y$. Thus, to reduce a fraction to its lowest terms, factor the numerator and denominator into prime factors and cancel the factors common to both (since they are equal to $\frac{1}{1}$).

Example 1: Reduce $\frac{6y}{8y^2}$ to lowest terms.

$$\frac{6y}{8y^2} = \frac{2y(3)}{2y(4y)} = \frac{3}{4y}$$

Example 2: Reduce $\frac{xab^2}{xcb}$ to lowest terms.

$$\frac{xab^2}{xcb} = \frac{xb(ab)}{xb(c)} = \frac{ab}{c}$$

Example 3: Reduce $\frac{a^2 - b^2}{4a + 4b}$ to lowest terms.

$$\frac{a^2 - b^2}{4a + 4b} = \frac{(a + b)(a - b)}{4(a + b)} = \frac{a - b}{4}$$

Example 4: Reduce $\frac{2a^2 + 4ab + 2b^2}{2a + 2b}$ to lowest terms.

$$\frac{2a^2 + 4ab + 2b^2}{2a + 2b} = \frac{2(a + b)(a + b)}{2(a + b)} = \frac{a + b}{1} = a + b$$

66. Finding Lowest Common Denominator

The lowest common denominator (LCD) of two or more fractions is the smallest term or number that is divisible by each of the denominators. Inspect to find this term or number, divide the LCD by the denominator of each fraction, and multiply both the numerator and denominator by the quotient. For example, when changing the fractions $\frac{2}{3}$ and $\frac{4}{5}$ to fractions which have an LCD, inspection shows that 15 is the smallest number which is divisible by both 3 and 5. Thus, the fractions $\frac{2}{3}$ and $\frac{3}{5}$ be-

come $\frac{10}{15}$ and $\frac{9}{15}$. Similarly, the LCD of $\frac{4xy}{3a^2}$ and $\frac{6z}{4ab}$ is $12a^2b$ because this is the smallest term that is divisible by both $3a^2$ and $4ab$. Thus, the fraction $\frac{4xy}{3a^2}$ and $\frac{6z}{4ab}$ become $\frac{16xyb}{12a^2b}$ and $\frac{18za}{12a^2b}$, respectively. When fractions have factors with exponents in the denominators, the highest power of each distinct factor is used to form the LCD. For example, consider the problem of finding the LCD of fractions having the following denominators: x^2y^2z , $x^2y^3z^2$, y^4z^3 , x^2y^4 . The LCD is $x^2y^4z^3$ because x^2 , y^4 , and z^3 are the highest powers of x , y , and z in any one denominator.

Example: Change $\frac{3a}{a^2 - b^2}$ and $\frac{4b}{a^2 - ab - 2b^2}$ to equivalent fractions having an LCD.

Step 1. Factor each denominator into its prime factors:

$$\frac{3a}{a^2 - b^2} = \frac{3a}{(a + b)(a - b)}$$

$$\frac{4b}{a^2 - ab - 2b^2} = \frac{4b}{(a + b)(a - 2b)}$$

Step 2. The lowest common multiple of the denominators is the LCD:

$$(a + b)(a - b)(a - 2b)$$

Step 3. Divide the LCD by the denominators:

$$(a + b)(a - b)(a - 2b) \div (a + b)(a - b) = a - 2b$$

$$(a + b)(a - b)(a - 2b) \div (a + b)(a - 2b) = a - b$$

Step 4. Change $\frac{3a}{(a + b)(a - b)}$ into a fraction having $(a + b)$

$(a - b)(a - 2b)$ as its denominator:

$$\frac{3a}{(a + b)(a - b)} = \frac{3a(a - 2b)}{(a + b)(a - b)(a - 2b)}$$

Step 5. Change $\frac{4b}{(a+b)(a-2b)}$ into a fraction having $(a+b)(a-b)(a-2b)$ as its denominator.

$$\frac{4b}{(a+b)(a-2b)} = \frac{4b(a-b)}{(a+b)(a-b)(a-2b)}$$

Step 6. Therefore, $\frac{3a}{a^2-b^2} = \frac{3a(a-b)}{(a+b)(a-b)(a-2b)}$

$$\text{and } \frac{4b}{a^2-ab-b^2} = \frac{4b(a-b)}{(a+b)(a-b)(a-2b)}$$

67. Addition and Subtraction of Algebraic Fractions

a. Addition. The addition of algebraic fractions is similar to the corresponding operation in arithmetic. To add two or more fractions having a common denominator, add the numerators and place the result over the common denominator. If the fractions have different denominators, convert them to fractions with an LCD. The sum of the fractions is equal to the algebraic sum of the numerators divided by the LCD. Simplify the numerator and reduce the result to its lowest terms. If possible, factor or combine for further simplification.

Example: Find the sum of $\frac{2x}{x+y}$ and $\frac{2y}{x-y}$.

The LCD is $(x+y)(x-y)$. Therefore,

$$\begin{aligned} \frac{2x}{x+y} + \frac{2y}{x-y} &= \frac{2x(x-y)}{(x+y)(x-y)} + \frac{2y(x+y)}{(x+y)(x-y)} \\ &= \frac{2x(x-y) + 2y(x+y)}{(x+y)(x-y)} \\ &= \frac{2x^2 - 2xy + 2xy + 2y^2}{(x+y)(x-y)} \\ &= \frac{2x^2 + 2y^2}{(x+y)(x-y)} \\ &= \frac{2(x^2 + y^2)}{x^2 - y^2} \end{aligned}$$

b. Subtraction. To subtract two fractions having a common denominator, subtract the numerator of the subtrahend from the numerator of the minuend and place the result over the common denominator. If the denominators are different, find the LCD and subtract, as shown below.

Example: Subtract $\frac{8}{x^2+6x-16}$ from $\frac{9}{x^2+7x-18}$.

The LCD is $(x-2)(x+8)(x+9)$. Therefore,

$$\begin{aligned} \frac{9}{x^2+7x-18} - \frac{8}{x^2+6x-16} &= \frac{9(x+8)}{(x-2)(x+8)(x+9)} - \frac{8(x+9)}{(x-2)(x+8)(x+9)} \\ &= \frac{9(x+8) - 8(x+9)}{(x-2)(x+8)(x+9)} \\ &= \frac{9x + 72 - 8x - 72}{(x-2)(x+8)(x+9)} \\ &= \frac{x}{(x-2)(x+8)(x+9)} \end{aligned}$$

68. Multiplication and Division of Algebraic Fractions

a. Multiplication. The process of multiplication of algebraic fractions is the same as in arithmetic. The product of two or more fractions is the product of the numerators divided by the product of the denominators. The operation may be simplified by dividing common factors in the numerator and denominator by the same factor.

Example 1: Multiply $\frac{6a^2b}{7x}$ by $\frac{21x^2y}{24a^2b}$.

The first numerator and the second denominator are divisible by $6a^2b$; the first denominator and the second numerator are divisible by $7x$. Therefore:

$$\frac{\overset{1}{6a^2b}}{\underset{1}{7x}} \cdot \frac{\overset{3xy}{21x^2y}}{\underset{4}{24a^2b}} = \frac{3xy}{4}$$

Example 2: Multiply $\frac{a^2 + 2ab + b^2}{a - b}$ by $\frac{a^2 - 2ab + b^2}{a + b}$

$$\begin{aligned} \frac{a^2 + 2ab + b^2}{a - b} \cdot \frac{a^2 - 2ab + b^2}{a + b} &= \frac{(a + b)(a + b)}{a - b} \cdot \frac{(a - b)(a - b)}{a + b} \\ &= \frac{\overset{1}{(a + b)} \overset{1}{(a + b)} \cancel{(a - b)} \cancel{(a - b)}}{\underset{1}{(a - b)} \underset{1}{(a + b)}} \\ &= (a + b)(a - b) \\ &= a^2 - b^2 \end{aligned}$$

b. Division. To divide algebraic fractions, multiply the dividend by the reciprocal of the divisor. Thus, to divide by x , multiply by the reciprocal of x , that is $\frac{1}{x}$. In other words, invert the divisor and proceed as in multiplication.

Example 1: Divide $\frac{2a + 2b}{a - 3}$ by $\frac{a^2 - b^2}{2a - 6}$.

$$\begin{aligned} \frac{2a + 2b}{a - 3} \div \frac{a^2 - b^2}{2a - 6} &= \frac{2a + 2b}{a - 3} \cdot \frac{2a - 6}{a^2 - b^2} \\ &= \frac{\overset{1}{2(a + b)}}{\underset{1}{a - 3}} \cdot \frac{\overset{1}{2(a - 3)}}{\underset{1}{(a + b)(a - b)}} \\ &= \frac{2 \cdot 2}{a - b} \\ &= \frac{4}{a - b} \end{aligned}$$

Example 2: Divide $\frac{z^2 - z - 6}{z^2 - 25}$ by $\frac{z^2 + z - 12}{z^2 - z - 20}$.

$$\begin{aligned} \frac{z^2 - z - 6}{z^2 - 25} \div \frac{z^2 + z - 12}{z^2 - z - 20} &= \frac{z^2 - z - 6}{z^2 - 25} \cdot \frac{z^2 - z - 20}{z^2 + z - 12} \\ &= \frac{\overset{1}{(z - 3)} \overset{1}{(z + 2)}}{\underset{1}{(z - 5)} \underset{1}{(z + 5)}} \cdot \frac{\overset{1}{(z - 3)} \overset{1}{(z + 4)}}{\underset{1}{(z + 4)} \underset{1}{(z - 3)}} \\ &= \frac{z + 2}{z + 5} \end{aligned}$$

69. Review Problems—Algebraic Fractions

a. Changing Signs of Fractions. Solve for the unknown.

- (1) $\frac{4x+3}{6} - \frac{x-9}{4} = 5$
- (2) $\frac{x-2}{4} = \frac{1}{2}$
- (3) $\frac{r+4}{3} - \frac{r-2}{5} = 2$
- (4) $\frac{4x-3}{6x} - \frac{4x+5}{3x} = 2$
- (5) $\frac{7t+2}{3} = 3$
- (6) $\frac{x-4}{3} + \frac{2x-5}{6} = 3$
- (7) $\frac{2r+3}{2} - \frac{3r+2}{4} = 2$
- (8) $\frac{7x-4}{3} + \frac{x-5}{5} = \frac{1}{5}$

b. Equivalent Fractions. Supply missing terms.

- (1) $\frac{4}{8} = \frac{?}{16}$
- (2) $\frac{1}{c} = \frac{?}{cx}$
- (3) $\frac{3}{r-s} = \frac{?}{r^2-s^2}$
- (4) $\frac{a-s}{1} = \frac{?}{3}$
- (5) $\frac{l-6}{l-3} = \frac{?}{(l-3)(l-9)}$
- (6) Change $\frac{4E^2}{R}$ into an equivalent fraction of which the denominator is $2I^2R$.
- (7) Change $\frac{1}{3\pi/c}$ into an equivalent fraction of which the denominator is $2I^2R$.

c. Lowest Common Denominator. Reduce to equivalent fractions having an LCD.

- (1) $\frac{1}{R}, \frac{1}{R^2}, \frac{1}{r}$
- (2) $\frac{1}{a+1}, \frac{x}{a-1}$
- (3) $\frac{b}{2x}, \frac{c}{3x}$
- (4) $\frac{y}{2}, \frac{y}{2y+6}$
- (5) $\frac{2}{c}, \frac{3}{c+1}$

$$(6) \frac{i}{e-5}, \frac{i}{2e-10}$$

$$(7) \frac{y}{c^2-d^2}, \frac{z}{c-d}$$

d. Addition and Subtraction of Fractions
Perform the indicated operations.

$$(1) \frac{1}{a} + \frac{4}{a} + \frac{7}{a}$$

$$(2) \frac{s}{t} + \frac{s+4}{2t} + \frac{s+3}{4t}$$

$$(3) \frac{3a}{4x^2y} + \frac{5b}{6xy^2}$$

$$(4) \frac{2}{z^2-1} + \frac{4}{z^2-4}$$

$$(5) \frac{3c-2d}{4cd^2} + \frac{2c-3d}{3c^2d}$$

$$(6) \frac{(r+1)(r-3)}{r^2+2r-15} + \frac{(r-2)(r+5)}{r^2+2r-15}$$

$$(7) 3y - \frac{1}{4}$$

$$(8) \frac{a+b}{a-b} - \frac{a-b}{a+b}$$

$$(9) \frac{32}{25q^2} - \frac{16}{5q}$$

$$(10) \frac{3t-2t}{4tv^2} - \frac{2t-3t}{3t^2v}$$

e. Multiplication and Division of Fractions
Perform the indicated operations.

$$(1) \frac{9y^2}{16} \cdot \frac{2}{3}$$

$$(2) \frac{a^3}{b^4} \cdot \frac{a^6}{b^2}$$

$$(3) \frac{3x^2}{49y^2z} \cdot \frac{7yz^2}{9xm}$$

$$(4) \left(\frac{1}{r} - \frac{1}{s}\right) \left(r - \frac{r^2}{s}\right)$$

$$(5) \frac{2x^2 - 5xy - 3y^2}{x^2 - 9y^2} \cdot \frac{3x + 9y}{10x^2 + 5xy}$$

$$(6) \frac{a-b}{a^2+2ab+b^2} \cdot \frac{a+b}{\frac{a^2-b^2}{a^2}}$$

$$(7) 3z \div \frac{1}{5}$$

$$(8) \frac{5ba^3}{6cd} \div 5b$$

$$(9) \frac{12s^2t}{20uv} \div \frac{3st}{4u^2v}$$

$$(10) \left(e + 2 - \frac{3}{e}\right) \div \left(e + 1 - \frac{2}{e}\right)$$

Section VI. EXPONENTS AND RADICALS

70. General

Chapter 4 presents exponents and roots consisting only of whole numbers. However, to use exponents and radicals to solve many equations and formulas, a knowledge of additional operations is required.

71. Fractional Exponents

a. General. A fractional exponent is merely another way of expressing the root of a number. For example, the cube root of x usually is written $\sqrt[3]{x}$; however, it also can be written $x^{\frac{1}{3}}$. Similarly, $\sqrt{2}$ also can be written $2^{\frac{1}{2}}$.

b. Application. Fractional exponents have a practical value in simplifying algebraic problems. They follow the same rules as exponents

that consist of integers, and can be added, subtracted, multiplied, or divided in the same way; thus

$$a^{\frac{1}{2}} \cdot a^{\frac{1}{2}} = a^{\frac{1}{2} + \frac{1}{2}} = a^1 = a, \text{ and } a^{\frac{1}{3}} \cdot a^{\frac{1}{3}} \cdot a^{\frac{1}{3}} = a^{\frac{1}{3} + \frac{1}{3} + \frac{1}{3}} = a^1 = a.$$

In other words, $a^{\frac{1}{2}}$ is one of two equal factors of a or the square root of a , and $a^{\frac{1}{3}}$ is two of three equal factors of a or the square cube root of a ; therefore, $a^{\frac{1}{2}} = \sqrt{a}$ and $a^{\frac{1}{3}} = \sqrt[3]{a}$.

c. Changing from Radical Form to Exponential Form. To change a radical expression to exponential form, remove the radical sign and annex a fractional exponent to the radicand (number under the radical sign). The numerator of the fractional exponent is the power of the radicand, and the denominator is the index of the root.

Example 1: Change $\sqrt[4]{a^2}$ to exponential form and simplify.

$$\sqrt[4]{a^2} = (a^2)^{\frac{1}{4}}$$

Multiplying exponents and simplifying:

$$(a^2)^{\frac{1}{4}} = a^{2 \cdot \frac{1}{4}} = a^{\frac{2}{4}} = a^{\frac{1}{2}} = \sqrt{a}$$

Therefore, $\sqrt[4]{a^2} = \sqrt{a}$

Example 2: Change $\sqrt[3]{8a^2b^3}$ to exponential form and simplify.

$$\begin{aligned} \sqrt[3]{8a^2b^3} &= \sqrt[3]{2^3a^2b^3} = (2^3a^2b^3)^{\frac{1}{3}} = 2^{\frac{3}{3}} \cdot a^{\frac{2}{3}} \cdot b^{\frac{3}{3}} \cdot \frac{1}{3} \\ &= 2^1 a^{\frac{2}{3}} b^1 = 2a^{\frac{2}{3}}b = 2b(a^{\frac{2}{3}}) = 2b\sqrt[3]{a^2} \end{aligned}$$

d. Changing from Exponential Form to Radical Form. To change an expression with a fraction exponent to a radical form, make the base of the fractional exponent the radicand, the numerator of the exponent the power of the radicand, and the denominator of the exponent the index of the root.

Example 1: Change $4^{\frac{1}{2}}$ to radical form.

$$4^{\frac{1}{2}} = \sqrt{4}$$

Example 2: Change $3^{\frac{2}{3}}$ to radical form.

$$3^{\frac{2}{3}} = \sqrt[3]{3^2} = \sqrt[3]{9}$$

Example 3: Change $(5a^2b)^{\frac{1}{3}}$ to radical form.

$$\begin{aligned} (5a^2b)^{\frac{1}{3}} &= \sqrt[3]{(5a^2b)^1} \\ &= \sqrt[3]{25a^2b^3} \end{aligned}$$

72. Simplification of Radicals

a. Removing a Factor from the Radicand. The form in which a radical expression is writ-

ten may be changed without altering its numerical value. Sometimes there is a question as to what actually is the simplest form for an expression. For instance, consider the simplification of an expression such as $\sqrt{1250}$: $\sqrt{1250} = \sqrt{2 \cdot 5^4} = 5^2\sqrt{2} = 25\sqrt{2}$. The expression $25\sqrt{2}$ usually is accepted as being simpler than $\sqrt{1250}$. As a general rule, the fewer the factors under the radical sign, the simpler the expression. Thus, a radicand may be separated into two factors, one of which is the greater power whose root can be taken. The root of this factor may then be written as the coefficient of a radical of which the other factor is the radicand.

Example 1: Simplify $\sqrt{50}$.

$$\begin{aligned} \sqrt{50} &= \sqrt{25 \cdot 2} \\ &= \sqrt{25} \cdot \sqrt{2} \\ &= 5\sqrt{2} \end{aligned}$$

Example 2: Simplify $\sqrt[4]{32a^7b^3}$.

$$\begin{aligned}\sqrt[4]{32a^7b^3} &= (2^5a^7b^3)^{\frac{1}{4}} \\ &= 2^{\frac{5}{4}}a^{\frac{7}{4}}b^{\frac{3}{4}} \\ &= 2^{\frac{4}{4}}2^{\frac{1}{4}}a^{\frac{4}{4}}a^{\frac{3}{4}}b^{\frac{3}{4}} \\ &= 2a\sqrt[4]{2a^3b^3}\end{aligned}$$

b. Rationalizing Denominator. Rationalizing a denominator containing a radical means to eliminate the radical in the denominator. For example, to rationalize the expression $\frac{1}{\sqrt[3]{2}}$, first change the denominator into an expression having a fractional exponent; thus, $\frac{1}{\sqrt[3]{2}} = \frac{1}{2^{\frac{1}{3}}}$; then multiply the denominator by a number that will make its exponent equal to 1. This operation eliminates the radical sign below the line. In this case, $2^{\frac{2}{3}}$ is such a factor; thus $2^{\frac{1}{3}} \cdot 2^{\frac{2}{3}} = 2^{\frac{3}{3}} = 2$. Such multiplication can be performed without changing the value of the fraction if the numerator also is multiplied by the same number; thus $\frac{1}{2^{\frac{1}{3}}} \cdot \frac{2^{\frac{2}{3}}}{2^{\frac{2}{3}}} = \frac{2^{\frac{2}{3}}}{2^{\frac{1}{3} + \frac{2}{3}}} = \frac{2^{\frac{2}{3}}}{2}$.

Finally, changing the numerator into radical form, $\frac{\sqrt[3]{2^2}}{2} = \frac{\sqrt[3]{4}}{2}$. Therefore, to rationalize a denominator, multiply both the numerator and the denominator by a number that will make the exponent in the denominator equal to 1; then simplify the radicand in the numerator. The examples below illustrate the method of rationalizing a few different types of denominators.

Example 1: Rationalize $\frac{1}{3^{\frac{2}{7}}}$.

$$\frac{1}{3^{\frac{2}{7}}} = \frac{1}{3^{\frac{2}{7}}} \cdot \frac{3^{\frac{5}{7}}}{3^{\frac{5}{7}}} = \frac{3^{\frac{3}{7}}}{3} = \frac{\sqrt[7]{3^3}}{3}$$

Example 2: Rationalize $\frac{1}{\sqrt{8}}$.

First simplify $\sqrt{8}$.

$$\begin{aligned}\sqrt{8} &= \sqrt{4 \cdot 2} = \sqrt[2]{2} = 2 \cdot 2^{\frac{1}{2}} \\ \frac{1}{\sqrt{8}} &= \frac{1}{2 \cdot 2^{\frac{1}{2}}} = \frac{2^{\frac{1}{2}}}{2 \cdot 2^{\frac{1}{2}} \cdot 2^{\frac{1}{2}}} = \frac{\sqrt{2}}{4}\end{aligned}$$

Example 3: Rationalize $\frac{1}{\sqrt{7}}$.

Here the square root in the denominator is being multiplied by itself, making the number a perfect square.

$$\frac{1}{\sqrt{7}} = \frac{1}{\sqrt{7}} \cdot \frac{\sqrt{7}}{\sqrt{7}} = \frac{\sqrt{7}}{\sqrt{7}\sqrt{7}} = \frac{\sqrt{7}}{7}$$

c. Practical Application. The processes of the simplification of radicals and rationalization of denominators are useful when computing decimals. It is necessary to know, however, that $\sqrt{2} = 1.414$, $\sqrt{3} = 1.732$, etc. For example, consider the problem of evaluating $\frac{1}{\sqrt{2}}$. One way of evaluating this problem is to divide 1 by 1.414. This evaluation is a long-division problem of some length, however. A much more simple way is to rationalize—thus $\frac{1}{\sqrt{2}} = \frac{\sqrt{2}}{2}$, and dividing 1.414 by 2 gives the result, 0.707.

73. Addition and Subtraction of Radicals

As discussed in paragraph 27b, terms that are alike in all respects, except for their coefficients, are called *similar terms*. Similarly, radicals that have the same index and the same radicand and differ only in their coefficients are called *similar radicals*. For example, $-5\sqrt{3}$, $2\sqrt{3}$, and $\sqrt{3}$ are similar radicals. Similar radicals may be added or subtracted in the same way that similar terms are added and subtracted. However, if the radicands are not alike and cannot be reduced to a common radicand, they are dissimilar and addition and subtraction can only be indicated; thus to add or subtract radicals, reduce them to their simplest form, then combine similar radicals, and indicate the addition or subtraction of dissimilar radicals.

Example 1: Perform the indicated operations.

$$4\sqrt{6} - 5\sqrt{6} - \sqrt{6} + 10\sqrt{6} = 8\sqrt{6}$$

Example 2: Add.

$$\begin{aligned}\sqrt{48a} + \sqrt{\frac{a}{3}} + \sqrt{3a} &= 4\sqrt{3a} + \frac{1}{3}\sqrt{3a} + \sqrt{3a} \\ &= \frac{16}{3}\sqrt{3a}\end{aligned}$$

Example 3: Perform the indicated operations.

$$\begin{aligned}\sqrt[3]{16r^3} - r\sqrt[3]{4r} + \sqrt[3]{64r^3} &= \sqrt[3]{(4r)^3} - r\sqrt[3]{4r} + \sqrt[3]{(4r)^3} \\ &= (4r)^{\frac{3}{3}} - 4(4r)^{\frac{1}{3}} + (4r)^{\frac{3}{3}} \\ &= \sqrt[3]{4r} - r\sqrt[3]{4r} + \sqrt[3]{4r} \\ &= \sqrt[3]{4r}(2 - r)\end{aligned}$$

Example 4: Perform the indicated operations.

$$\begin{aligned}2\sqrt{6} + \sqrt[3]{\frac{2}{3}} - \sqrt[3]{36} &= 2\sqrt{6} + \sqrt[3]{\frac{2}{3} \cdot \frac{8}{8}} - \sqrt[3]{6 \cdot 6} \\ &= 2\sqrt{6} + \frac{2}{3}\sqrt{6} - \sqrt[3]{6^3} \\ &= 2\sqrt{6} + \frac{2}{3}\sqrt{6} - \sqrt{6} \\ &= 4\sqrt{6}\end{aligned}$$

74. Multiplication of Radicals

a. Radicals With Same Indexes. Radicals can be multiplied and combined under the same radical sign even though they differ in value, provided the index of the radicals are the same. To multiply a radical expression when radicals are of the same order, first multiply the coefficients, then multiply the radicands, and then simplify, if possible. For example, $2\sqrt{3} \cdot 3\sqrt{5} = 6\sqrt{15}$. If the radicand is a perfect square, simplify the result by extracting the square root. Remember that there are two square roots, one positive and one negative; thus, $6\sqrt{3} \cdot 4\sqrt{3} = 24\sqrt{9} = 24(\pm 3) = \pm 72$. When polynomial expressions, either or both of which involve radicals, are to be multiplied, proceed in the same manner as with literal polynomial expressions (par. 48). For example,

$$(\sqrt{3} + 2\sqrt{5}) \times (\sqrt{3} - 2\sqrt{5}) =$$

$$\begin{array}{r} \sqrt{3} + 2\sqrt{5} \\ \sqrt{3} - 2\sqrt{5} \\ \hline \sqrt{9} + 2\sqrt{15} \\ - 2\sqrt{15} - 4\sqrt{25} \\ \hline \sqrt{9} \qquad - 4\sqrt{25} = \pm 3 - 4(\pm 5) \\ \qquad \qquad \qquad = \pm 3 \pm 20 \\ \qquad \qquad \qquad = 3 \pm 20 \text{ or } -3 \pm 20 \\ \qquad \qquad \qquad = \pm 17 \text{ or } \pm 23 \end{array}$$

Example 1: Multiply $2\sqrt[3]{3a}$, $5\sqrt[3]{4a}$, and $3\sqrt[3]{18a}$.

$$\begin{aligned}2\sqrt[3]{3a} \cdot 5\sqrt[3]{4a} \cdot 3\sqrt[3]{18a} &= 2 \cdot 5 \cdot 3 \cdot \sqrt[3]{3a} \cdot \sqrt[3]{4a} \cdot \sqrt[3]{18a} \\ &= 30\sqrt[3]{216a^3} \\ &= 30 \cdot 6a \\ &= 180a\end{aligned}$$

Example 2: Multiply $\sqrt[3]{8t^3}$ and $\sqrt[3]{4t^3s}$.

$$\begin{aligned}\sqrt[3]{8t^3} \cdot \sqrt[3]{4t^3s} &= \sqrt[3]{32t^6s} \\ &= \sqrt[3]{2^4 \cdot 2 \cdot t^4 \cdot t \cdot s} \\ &= 2t\sqrt[3]{2ts}\end{aligned}$$

b. Radicals With Different Indexes. To multiply radicals when the indexes are different, first express them as radicals with a common index (or common fractional exponent) and proceed as in *a* above. The common index is the lowest common multiple of the indexes of the original radicals.

Example 1: Multiply $\sqrt{2} \cdot \sqrt[3]{4}$.

$$\begin{aligned}\sqrt{2} \cdot \sqrt[3]{4} &= \sqrt{2} \cdot \sqrt[6]{2^2} \\ &= 2^{\frac{1}{2}} \cdot 2^{\frac{2}{3}} \\ &= 2^{\frac{3}{6}} \cdot 2^{\frac{4}{6}} \\ &= 2^{\frac{7}{6}} \\ &= 2^{\frac{6}{6}} \cdot 2^{\frac{1}{6}} \\ &= 2 \cdot 2^{\frac{1}{6}} \text{ or } 2\sqrt[6]{2}\end{aligned}$$

Example 2: Multiply $\sqrt[3]{4x} \cdot \sqrt{8x^3}$.

$$\begin{aligned}\sqrt[3]{4x} \cdot \sqrt{8x^3} &= \sqrt[12]{(4x)^4} \cdot \sqrt[12]{(8x^3)^3} \\ &= \sqrt[12]{(2^2x)^4} \cdot \sqrt[12]{(2^3x^3)^3} \\ &= \sqrt[12]{2^8 \cdot 2^9 \cdot x^4 \cdot x^9} \\ &= \sqrt[12]{2^{17} \cdot x^{13}} \\ &= \sqrt[12]{2^{12} \cdot 2^5 \cdot x^{12} \cdot x} \\ &= 2x \sqrt[12]{2^5 \cdot x} \\ &= 2x \sqrt[6]{32x}\end{aligned}$$

75. Division of Radicals

a. Monomial Radical Expressions. The division of radicals is essentially the opposite of multiplication. When radicals are of the same order, the division of two radicals may be expressed under one radical sign—for example, $\frac{\sqrt{4}}{\sqrt{2}} = \sqrt{\frac{4}{2}} = \sqrt{2}$. When radicals are of different orders, they must be expressed as radicals having the same index or be changed to fractional exponents.

Example 1: Divide $\sqrt{15}$ by $\sqrt{5}$.

$$\frac{\sqrt{15}}{\sqrt{5}} = \sqrt{\frac{15}{5}} = \sqrt{3}$$

Example 2: Divide $\sqrt[3]{x^3y}$ by $\sqrt[3]{y^7}$.

$$\begin{aligned}\frac{\sqrt[3]{x^3y}}{\sqrt[3]{y^7}} &= \sqrt[3]{\frac{x^3y}{y^7}} \\ &= \sqrt[3]{\frac{x^3}{y^6}} \\ &= \frac{x}{y^2} \sqrt[3]{x^3}\end{aligned}$$

Example 3: Divide $\sqrt{35}$ by $\sqrt{15}$.

$$\begin{aligned}\frac{\sqrt{35}}{\sqrt{15}} &= \sqrt{\frac{35}{15}} \\ &= \sqrt{\frac{7}{3}} \\ &= \frac{1}{3}\sqrt{21}\end{aligned}$$

Example 4: Divide $\sqrt{4ab} \sqrt[3]{2ab}$ by $\sqrt[6]{4a^3b^3}$.

$$\begin{aligned}\frac{\sqrt{4ab} \sqrt[3]{2ab}}{\sqrt[6]{4a^3b^3}} &= \frac{\sqrt{(4ab)^2} \sqrt[3]{(2ab)^3}}{\sqrt[6]{4a^3b^3}} \\ &= \sqrt[6]{\frac{64a^2b^2 \cdot 4a^2b^2}{4a^3b^3}} \\ &= \sqrt[6]{64b^2} \\ &= \sqrt[3]{2^3b^2} \text{ or } (2^3b^2)^{\frac{1}{6}} \\ &= 2\sqrt[3]{b}\end{aligned}$$

b. Binomial Expressions With Radical in Divisor. When the divisor is a binomial in which one or more of the terms contains a square root, division is performed by first rationalizing the divisor. Multiply the numerator and denominator of the fraction by the denominator with the sign between the terms changed; then simplify the numerator and the denominator.

Example 1: Divide 3 by $4 + \sqrt{6}$.

$$\begin{aligned}\frac{3}{4 + \sqrt{6}} &= \frac{3}{4 + \sqrt{6}} \cdot \frac{4 - \sqrt{6}}{4 - \sqrt{6}} \\ &= \frac{3(4 - \sqrt{6})}{16 - 6} \\ &= \frac{3}{10} (4 - \sqrt{6})\end{aligned}$$

Example 2: Divide $\sqrt{1+x} - \sqrt{1-x}$ by $\sqrt{1+x} + \sqrt{1-x}$.

$$\begin{aligned} \frac{\sqrt{1+x} - \sqrt{1-x}}{\sqrt{1+x} + \sqrt{1-x}} &= \frac{\sqrt{1+x} - \sqrt{1-x}}{\sqrt{1+x} + \sqrt{1-x}} \cdot \frac{\sqrt{1+x} - \sqrt{1-x}}{\sqrt{1+x} - \sqrt{1-x}} \\ &= \frac{(1+x) - 2\sqrt{1-x^2} + (1-x)}{(1+x) - (1-x)} \\ &= \frac{2 - 2\sqrt{1-x^2}}{2x} \\ &= \frac{1 - \sqrt{1-x^2}}{x} \end{aligned}$$

76. Review Problems—Exponents and Radicals

a. Simplify.

(1) $2^{\frac{1}{2}}(2^2)^{\frac{2}{3}}$

(2) $(8^{\frac{2}{3}})^{\frac{3}{2}}$

(3) $\sqrt{50}$

(4) $\sqrt{\frac{3}{16}}$

(5) $\sqrt{18x-9}$

(6) $\sqrt[n]{\frac{6x^{2n}}{y^n}}$

(7) $(x^{10}y^5)^{\frac{1}{5}}$

(8) $(d^6e^4)^{\frac{3}{4}}$

(9) $\left(\frac{64r^4}{s^2}\right)^{\frac{1}{2}}$

(10) $(a^9b^3)^{\frac{2}{3}}$

b. Express with radical signs.

(1) $4^{\frac{1}{3}}$

(2) $a^{\frac{3}{2}}b^{\frac{2}{3}}$

(3) $6^{\frac{2}{3}}$

(4) $(8f)^{\frac{1}{2}}$

(5) $5x^{\frac{5}{2}}$

(6) $a^{\frac{3}{4}}c^{1-\frac{5}{6}}$

(7) $6r^{\frac{1}{3}}$

(8) $(8a^2b^3)^{\frac{1}{3}}$

(9) $({}^2r_1 + {}^3r_2)^{\frac{1}{2}}$

(10) $3(x^4y^2)^{\frac{1}{2}}$

c. Express with fractional exponents.

(1) $\sqrt[3]{a^5}$

(2) $\sqrt[3]{5x}$

(3) $6x\sqrt[3]{a^2}$

(4) $\sqrt[5]{z^2}$

(5) $\sqrt[3]{3a^3b^5}$

(6) $y^3\sqrt[3]{a^3}$

(7) $8\sqrt[3]{3e}$

(8) $9\sqrt[5]{g^4}$

(9) $3b\sqrt[4]{cd^2}$

(10) $\sqrt[3]{(x-y)^2}$

d. Simplify by removing suitable factors from radicand.

(1) $\sqrt{12}$

(2) $\sqrt{63}$

(3) $\sqrt{63x^2}$

(4) $2\sqrt{72a^2b^4}$

(5) $\sqrt{60b^3d^2}$

(6) $\sqrt{8I^2R}$

(7) $3\sqrt{63p^3z^2}$

(8) $2dr^2\sqrt{108dr^4s^3}$

(9) $5a\sqrt{81a^2b}$

(10) $16w^2x\sqrt{98w^4x^2y^2z}$

e. Rationalize denominators.

(1) $\frac{1}{\sqrt{50}}$

(2) $\frac{1}{\sqrt{4x}}$

(3) $\frac{2a}{\sqrt{3a}}$

(4) $\frac{1}{\sqrt[3]{x}}$

(5) $\frac{1}{\sqrt[4]{3ax^3}}$

$$(6) \frac{1}{\sqrt[3]{3-2x}}$$

$$(7) \frac{a+b}{\sqrt[3]{a^3}}$$

$$(8) \frac{a}{\sqrt[3]{a^2bc}}$$

$$(9) \frac{1}{\sqrt[3]{(s+1)^2}}$$

$$(10) \frac{i+3}{\sqrt[5]{(i+3)^2}}$$

f. Simplify.

$$(1) 6\sqrt{4} - 3\sqrt{4} + 2\sqrt{4}$$

$$(2) 6\sqrt{45} - 2\sqrt{20}$$

$$(3) x - \sqrt{\frac{8x^2}{4}}$$

$$(4) \frac{a}{2} + \sqrt{\frac{9a^2}{2}}$$

$$(5) r\sqrt{rst} + rt\sqrt{\frac{s}{rt}}$$

$$(6) \sqrt{\frac{x+y}{x-y}} - \sqrt{\frac{x-y}{x+y}}$$

$$(7) \sqrt{5} + 3\sqrt{x} + 5\sqrt{x}$$

$$(8) 7\sqrt{a} - 4\sqrt{b} - 2\sqrt{b}$$

$$(9) 4\sqrt{x-y} + 3\sqrt{x+y} - 8\sqrt{x-y}$$

$$(10) 3\sqrt{125a^3b^3} + b\sqrt{20a^3} - \sqrt{500a^3b^3}$$

g. Find product and simplify.

$$(1) 3\sqrt{5} \cdot 4\sqrt{2}$$

$$(2) 2\sqrt[3]{9} \cdot 3\sqrt[3]{3}$$

$$(3) 4\sqrt[3]{a^2b^4} \cdot 2\sqrt[3]{ab^2}$$

$$(4) \sqrt{4x^2} \cdot x\sqrt{3z^2}$$

$$(5) \sqrt[3]{4x^2y^2} \cdot \sqrt[5]{2x^3y^2} \cdot \sqrt[4]{4xy^2}$$

$$(6) 2\sqrt[3]{2pq^2r} \cdot \sqrt[3]{4pq^2r^2} \cdot 3\sqrt[3]{8pq^2r^2}$$

$$(7) (\sqrt{a} + \sqrt{b} + \sqrt{c})^2$$

$$(8) a\sqrt{x}(a\sqrt{ax} + x\sqrt{ax} + \sqrt{ax})$$

$$(9) \sqrt{9 - \sqrt{17}} \cdot \sqrt{9 + \sqrt{17}}$$

$$(10) \sqrt[3]{x^3y^6} \sqrt{256a^8}$$

h. Divide and simplify.

$$(1) \frac{\sqrt{12}}{\sqrt{8}}$$

$$(2) \frac{\sqrt[3]{625y}}{\sqrt[3]{5y}}$$

$$(3) \frac{\sqrt[3]{16x^2}}{\sqrt[3]{2x}}$$

$$(4) \frac{3zy}{\sqrt{zy}}$$

$$(5) \frac{2}{\sqrt{6-2}}$$

$$(6) \frac{\sqrt{30a} \sqrt{24a^2} \sqrt[3]{72a}}{\sqrt[3]{5a}}$$

$$(7) \frac{\sqrt{2} + \sqrt{c}}{\sqrt{c} + 2\sqrt{2}}$$

$$(8) \frac{4\sqrt{3} - 3\sqrt{2}}{\sqrt{6}} \div \frac{\sqrt{10}}{4\sqrt{3} + 3\sqrt{2}}$$

$$(9) \frac{\sqrt{e^2 + f^2 + f}}{\sqrt{e^2 + f^2 - f}}$$

$$(10) \frac{2b + \sqrt{1-4b^2}}{2b - \sqrt{1-4b^2}}$$

Section VII. IMAGINARY AND COMPLEX NUMBERS

77. Imaginary Numbers

a. Indicated Square Root of Negative Numbers.

- (1) In the study of roots to this point, only the roots of positive numbers have been considered. Sometimes a negative expression will appear under the radical. Such an expression originally was given the designation *imaginary number* to distinguish it from real numbers. In electricity and electronics, however, so-called imaginary numbers are used for real physical calculations—the reactance of a large capaci-

tor or inductor must be calculated by using this type of number.

- (2) In multiplication, when a real number is multiplied by itself the result is always positive. For example, $+5 \cdot +5 = 25$, and $-5 \cdot -5 = 25$. Therefore, any number raised to a power having an even exponent will be positive because like signs are being multiplied. However, this is not true for the interpretation of an expression such as $\sqrt{-9}$. Any negative number can be regarded as the product of a positive number of the same absolute value and -1 , and the square root of a negative

number can be written as the square root of a positive number times $\sqrt{-1}$; thus, $\sqrt{-9} = \sqrt{9} \sqrt{-1} = 3\sqrt{-1}$, with $\sqrt{-1}$ being the imaginary number. Most mathematics texts represent the imaginary number $\sqrt{-1}$ by the letter i . However, the letter I or i means current in electrical formulas; therefore, the letter j , commonly called the *operator j*, is used in electronics.

Example 1: $\sqrt{-36} = \sqrt{(-1)36} = \sqrt{-1} \cdot \sqrt{36} = \sqrt{-1} \cdot 6 = j6$

Example 2: $\sqrt{-Z^2} = \sqrt{(-1)Z^2} = \sqrt{-1} \cdot \sqrt{Z^2} = \sqrt{-1} \cdot Z = jZ$

Example 3: $-\sqrt{-9a^2} = -\sqrt{(-1)9a^2} = -\sqrt{-1} \cdot \sqrt{9a^2} = -\sqrt{-1} \cdot 3a = -j3a$

b. Powers of Operator j . Imaginary numbers follow the fundamental laws of addition, subtraction, multiplication, and division. They also can be raised to a power; thus, $j^2 = j^2 \cdot j = -1(j) = -j$, and $j^4 = j^2 \cdot j^2 = -1(-1) = 1$. The values of the powers of j are obtained as follows:

$$j^2 = j \cdot j = \sqrt{-1} \cdot \sqrt{-1} = -1;$$

$$j^3 = j \cdot j \cdot j = \sqrt{-1} \cdot \sqrt{-1} \cdot \sqrt{-1} = -1\sqrt{-1} = -j; \text{ and}$$

$$j^4 = j \cdot j \cdot j \cdot j = \sqrt{-1} \cdot \sqrt{-1} \cdot \sqrt{-1} \cdot \sqrt{-1} = -1 \cdot -1 = 1; \text{ but}$$

$j^5 = j \cdot j \cdot j \cdot j \cdot j = j^4 \cdot j = j^1 = \sqrt{-1}$, and the whole cycle starts over again. Therefore, j^4 can be eliminated as many times as it is contained in an expression, reducing the quantity to j , j^2 , or j^3 and getting its value from the following:

$$\begin{aligned} j &= j = \sqrt{-1} \\ j^2 &= -1 \\ j^3 &= -j \\ j^4 &= 1 \end{aligned}$$

Example 1: Simplify j^{13} .

$$j^{13} = j^{12} \cdot j = j = \sqrt{-1}$$

Example 2: Simplify j^{27} .

$$j^{27} = j^{24} \cdot j^3 = j^3 = -j = -\sqrt{-1}$$

c. Addition and Subtraction of Imaginary Numbers. These numbers may be added or subtracted in the same manner that any algebraic expression is added or subtracted (par. 44). First change the expression to the j form; then treat the j as any other letter in an algebraic expression.

Example 1: Add $\sqrt{-25}$, $\sqrt{-36}$, and $\sqrt{-9}$.

$$\sqrt{-25} + \sqrt{-36} + \sqrt{-9} = j5 + j6 + j3 = j14$$

Example 2: Add $6\sqrt{-2} + 5\sqrt{-8} + 8\sqrt{-18}$.

$$\begin{aligned} 6\sqrt{-2} + 5\sqrt{-8} + 8\sqrt{-18} &= j^6\sqrt{2} + j^2\sqrt{8} + j^2\sqrt{18} \\ &= j^6\sqrt{2} + j(5 \cdot 2)\sqrt{2} + j(8 \cdot 3)\sqrt{2} \\ &= (j^6 + j^{10} + j^{24})\sqrt{2} \\ &= j^{10}\sqrt{2} \end{aligned}$$

Example 3: Subtract $\sqrt{-64}$ from $\sqrt{-36}$.

$$\sqrt{-36} - \sqrt{-64} = j^2 - j^3 = -j^3$$

Example 4: Subtract $4\sqrt{-8}$ from $6\sqrt{-18}$.

$$\begin{aligned} 6\sqrt{-18} - 4\sqrt{-8} &= j(6 \cdot 3)\sqrt{2} - j(4 \cdot 2)\sqrt{2} \\ &= (j^{12} - j^8)\sqrt{2} \\ &= j^{10}\sqrt{2} \end{aligned}$$

d. *Multiplication of Simple Imaginary Numbers.* When multiplying two imaginary numbers, remember that $j^2 = -1$, $j^3 = -j$, and $j^4 = 1$ (b above); then, proceed as with any problem in multiplication (par. 45).

Example 1: Multiply $\sqrt{-16}$ and $\sqrt{-4}$.

$$\sqrt{-16} \cdot \sqrt{-4} = j^4 \cdot j^2 = j^6 = (-1)8 = -8$$

Example 2: Multiply $\sqrt{-81}$, $\sqrt{-25}$, and $\sqrt{-49}$.

$$\sqrt{-81} \cdot \sqrt{-25} \cdot \sqrt{-49} = j^9 \cdot j^5 \cdot j^7 = j^{21} = (-j)315 = -j315$$

e. *Division of Single Imaginary Numbers.* In the division of two simple imaginary numbers, when both the dividend and divisor contain operator j , divide both by j and proceed as with ordinary integers. If a j remains in the denominator, the denominator must be rationalized because the j represents a radical expression. To rationalize, multiply both the numerator and denominator by the imaginary number.

Example 1: Divide $\sqrt{-100}$ by $\sqrt{-16}$.

$$\frac{\sqrt{-100}}{\sqrt{-16}} = \frac{j \cdot 10}{j \cdot 4} = 2\frac{1}{2}$$

Example 2: Divide 12 by $\sqrt{-6}$.

$$\frac{12}{\sqrt{-6}} = \frac{12}{j\sqrt{6}} = \frac{12 \cdot j\sqrt{6}}{j\sqrt{6} \cdot j\sqrt{6}} = \frac{j12\sqrt{6}}{j^2 6} = \frac{j2\sqrt{6}}{-1} = -j2\sqrt{6}$$

Example 3: Divide $\sqrt{-3}$ by $\sqrt{-4}$.

$$\frac{\sqrt{-3}}{\sqrt{-4}} = \frac{j\sqrt{3}}{j2} = \frac{\sqrt{3}}{2} \text{ or } \frac{1}{2}\sqrt{3}$$

Example 4: Divide 6 by j .

$$\frac{6}{j} = \frac{6}{j} \cdot \frac{j}{j} = \frac{j6}{j^2} = \frac{j6}{-1} = -j6$$

78. Complex Numbers

a. *Operations With Complex Numbers.* A *complex number* is a real number united to an imaginary number by a plus or minus sign; thus, $10 - j5$, $x + jy$, and $R + jx$ are complex numbers. Complex numbers are of great importance in alternating-current electricity in which many problems would be difficult to solve without their use. A complex number expressed in the form $x + jy$ may be considered a bi-

nomial; thus, the addition, subtraction, multiplication, and division of complex numbers are reduced to the corresponding operations with binomials in which one term is real and the other imaginary.

b. *Addition and Subtraction of Complex Numbers.* To add or subtract complex numbers, first combine the real parts, then combine the imaginary parts, and write the results as a binomial with the appropriate sign separating the real and imaginary terms.

Example 1: Add $3 + j5$ and $5 - j$.

$$\begin{aligned} (3 + j5) + (5 - j) &= 3 + j5 + 5 - j \\ &= 8 + j4 \end{aligned}$$

Example 2: Add $6 + \sqrt{-25}$ and $8\sqrt{-16}$.

$$\begin{aligned}(6 + \sqrt{-25}) + (8\sqrt{-16}) &= 6 + j5 + (8 \cdot j4) \\ &= 6 + j5 + j32 \\ &= 6 + j37\end{aligned}$$

Example 3: Add $8 + \sqrt{-12}$ and $9 + \sqrt{-75}$.

$$\begin{aligned}(8 + \sqrt{-12}) + (9 + \sqrt{-75}) &= 8 + j2\sqrt{3} + 9 + j5\sqrt{3} \\ &= 17 + j7\sqrt{3}\end{aligned}$$

Example 4: Subtract $7 - j6$ from $3 - j2$.

$$\begin{aligned}(3 - j2) - (7 - j6) &= 3 - j2 - 7 + j6 \\ &= -4 + j4\end{aligned}$$

Example 5: Subtract $2 - 3\sqrt{-4}$ from $10 + \sqrt{-4}$.

$$\begin{aligned}(10 + \sqrt{-4}) - (2 - 3\sqrt{-4}) &= (10 + j2) - (2 - j6) \\ &= 10 + j2 - 2 + j6 \\ &= 8 + j8 \text{ or } 8(1 + j)\end{aligned}$$

Example 6: Subtract $3 + 7\sqrt{-24}$ from $5 + 3\sqrt{-6}$.

$$\begin{aligned}(5 + 3\sqrt{-6}) - (3 + 7\sqrt{-24}) &= 5 + j3\sqrt{6} - [3 + j(7 \cdot 2)\sqrt{6}] \\ &= 5 + j3\sqrt{6} - 3 - j14\sqrt{6} \\ &= 2 - j11\sqrt{6}\end{aligned}$$

c. Multiplication of Complex Numbers. As in addition and subtraction, when complex numbers are multiplied they are treated as ordinary binomials. Remember, however, that $j^2 = -1$.

Example 1: Multiply $3 - j6$ by $4 + j2$.

$$\begin{array}{r} 3 - j6 \\ 4 + j2 \\ \hline 12 - j24 \\ +j6 - j^2 12 \\ \hline 12 - j18 - j^2 12 \\ \hline = j12 - j18 - (-1)(12) \\ = 12 - j18 + 12 \\ = 24 - j18 \\ \hline \hline \end{array}$$

Example 2: Multiply $8 - j\sqrt{5}$ by $-2 + j\sqrt{6}$.

$$\begin{array}{r} 8 - j\sqrt{5} \\ -2 + j\sqrt{6} \\ \hline -16 + j2\sqrt{5} + j8\sqrt{6} - j^2\sqrt{30} \\ \hline = -16 + j2\sqrt{5} + j8\sqrt{6} - (-1)\sqrt{30} \\ = -16 + j2\sqrt{5} + j8\sqrt{6} + \sqrt{30} \\ = -16 + \sqrt{30} + j(2\sqrt{5} + 8\sqrt{6})\end{array}$$

d. Division of Complex Numbers. When dividing complex numbers, the denominator of the expression in its fractional form must first be rationalized (par. 74). To obtain a real number as a divisor, multiply both the numerator and denominator by the complex number of the denominator with its sign changed (called the *conjugate* of the complex number). In carrying out the multiplication, the radical expression is eliminated. Since $j^2 = -1$, the sign of the coefficient of j^2 is changed; the complex number thus becomes a real number to combine with the other real number in the denominator.

Example 1: Divide $3 + j4$ by $1 + j$.

$$\begin{aligned}\frac{3 + j4}{1 + j} &= \frac{3 + j4}{1 + j} \cdot \frac{1 - j}{1 - j} \\ &= \frac{3 + j - j^2 4}{1 - j^2} \\ &= \frac{3 + j - (1-1)4}{1 - (-1)} \\ &= \frac{3 + j + 4}{2} \\ &= \frac{7}{2} + j \frac{1}{2}\end{aligned}$$

Example 2: Divide 6 by $3 + \sqrt{-2}$.

$$\begin{aligned}\frac{6}{3 + \sqrt{-2}} &= \frac{6}{3 + j\sqrt{2}} \cdot \frac{3 - j\sqrt{2}}{3 - j\sqrt{2}} \\ &= \frac{6(3 - j\sqrt{2})}{(3 + j\sqrt{2})(3 - j\sqrt{2})} \\ &= \frac{18 - j6\sqrt{2}}{9 - j^2 2} \\ &= \frac{18 - j6\sqrt{2}}{11}\end{aligned}$$

79. Review Problems—Imaginary and Complex Numbers

a. Simplify the radical, using operator j .

- (1) $\sqrt{-75}$
- (2) $\sqrt{-23}$
- (3) $-\sqrt{-64ax^3}$
- (4) $-\sqrt{-100x^3y^4}$
- (5) $\sqrt{-\frac{1}{9}}$
- (6) $\sqrt[3]{-128x^3y^3}$

b. Add.

- (1) $-47 + j17$ and $63 + j92$
- (2) $27 - j11$ and $14 - j11$
- (3) $123 - j114$ and $-62 - j137$
- (4) $44 + j17$ and $-j7$
- (5) $6 + j10$ and $j1$
- (6) $14 + j15$ and $-16 - j62$

c. Subtract.

- (1) $-69 + j432$ from $710 + j61$
- (2) $14 - j121$ from $73 - j7$
- (3) $84 - j62$ from $62 - j47$
- (4) $-74 - j20$ from $81 - j81$
- (5) $-87 - j7$ from $82 + j16$
- (6) $-9 + j$ from $-j7$

d. Multiply.

- (1) $4 + \sqrt{-81}$ by $2 + \sqrt{-49}$
- (2) $2 + 2\sqrt{-2}$ by $3 + 3\sqrt{-3}$
- (3) $2 - j3$ by $2 + j3$
- (4) $(2 - j3)^2$
- (5) $(j^4 + j^2 + j^3 + j4)^2$
- (6) $4 - j7$ by $8 + j2$
- (7) $f + jg$ by $f + jg$
- (8) $I + jE$ by $I - jE$
- (9) $8 - j13$ by $11 - j12$
- (10) $5 + \sqrt{-16}$ by $7 - \sqrt{-81}$

e. Divide.

- (1) 1 by $3 + j2$
- (2) $6 + j$ by j
- (3) $2 + j3$ by $3 - j4$
- (4) $4 + \sqrt{-9}$ by $2 - \sqrt{-1}$
- (5) $x + jy$ by $x - jy$
- (6) 10 by $1 + j2$
- (7) 3 by $1 - j$
- (8) $3 + \sqrt{-25}$ by $4 - \sqrt{-4}$
- (9) $6 - j2$ by $4 - j7$
- (10) $I + jE$ by $I - jE$

Section VIII. EQUATIONS

80. General

An *equation* is a statement of equality between two expressions. For example, $x + y = 12$, $3x + 5 = 20$, and $3 \cdot 9 = 27$ are equations; therefore, all expressions separated by the equality sign are equations, whether the expressions are algebraic or arithmetical. The expression to the left of the equality sign is called the *left-hand member* of the equation; the expression to the right of the equality sign is called the *right-hand member*. Finding the values of the unknown quantities of an algebraic equation is known as solving the equation, and the answer is called the *solution*. If only one unknown is involved, the solution is also called the *root*.

81. Solving Simple Equations

a. Adding Same Quantity to Both Members of Equation. Equal quantities may be added to both sides of an equation without changing the equality.

Example 1: Solve the equation $x - 4 = 7$ for x .

$$\begin{aligned} x - 4 &= 7 \\ x - 4 + 4 &= 7 + 4 \\ x &= 11 \end{aligned}$$

Example 2: Solve the equation $x - 7 = 14$ for x .

$$\begin{aligned} x - 7 &= 14 \\ x - 7 + 7 &= 14 + 7 \\ x &= 21 \end{aligned}$$

b. Subtracting Same Quantity From Both Members of Equation. Equal quantities may be subtracted from both sides of an equation.

Example 1: Solve the equation $x + 2 = 5$ for x .

$$\begin{aligned} x + 2 &= 5 \\ x + 2 - 2 &= 5 - 2 \\ x &= 3 \end{aligned}$$

Example 2: Solve the equation $x + 5 = 12$ for x .

$$\begin{aligned} x + 5 &= 12 \\ x + 5 - 5 &= 12 - 5 \\ x &= 7 \end{aligned}$$

c. Multiplying Both Members of Equation by Same Quantity. Both sides of an equation can be multiplied by the same quantity.

Example 1: Solve the equation $\frac{x}{3} = 5$ for x .

$$\begin{aligned} \frac{x}{3} &= 5 \\ \frac{x}{3} \cdot \frac{3}{1} &= 5 \cdot 3 \\ x &= 15 \end{aligned}$$

Example 2: Solve the equation $\frac{z}{3} + \frac{z}{9} = 4$ for z .

Multiply both sides of the equation by 9.

$$\begin{aligned} \left(\frac{z}{3} \cdot \frac{9}{1}\right) + \left(\frac{z}{9} \cdot \frac{9}{1}\right) &= 4 \cdot 9 \\ 3z + z &= 36 \\ 4z &= 36 \\ z &= 9 \end{aligned}$$

d. Dividing Both Members of Equation by Same Quantity. Both sides of an equation may be divided by the same quantity.

Example 1: Solve the equation $3x = 12$ for x .

$$\begin{aligned} 3x &= 12 \\ \frac{3x}{3} &= \frac{12}{3} \\ x &= 4 \end{aligned}$$

Example 2: Solve the equation $PV = RT$ for T .

$$\begin{aligned} PV &= RT \\ \frac{PV}{R} &= \frac{RT}{R} \\ T &= \frac{PV}{R} \end{aligned}$$

82. Solving More Difficult Equations

a. Transposition. The process of adding to or subtracting from both members of an equation (par. 81a and b) can be shortened by shifting a term or terms from one side of the equation to the other and changing the signs. This operation is called transposition.

Example 1: Solve the equation $6x + 4 = x - 16$ for x .

$$\begin{aligned} 6x + 4 &= x - 16 \\ 6x - x &= -16 - 4 \\ 5x &= -20 \\ x &= -4 \end{aligned}$$

Example 2: Solve the equation $5a - 7 = 2a + 2$ for a .

$$\begin{aligned} 5a - 7 &= 2a + 2 \\ 5a - 2a &= 2 + 7 \\ 3a &= 9 \\ a &= 3 \end{aligned}$$

b. Equations With Fractions. In solving a fractional equation, first find the LCD and multiply both members of the equation, term by term; then perform the operations in paragraph 81 or *a* above.

Example 1: Solve the equation $\frac{x}{2} + \frac{x}{3} = 10$ for x .

$$\begin{aligned} \frac{x}{2} + \frac{x}{3} &= 10 \\ \frac{3x + 2x}{6} &= 10 \\ \frac{5x}{6} &= \frac{10}{1} \\ 5x &= 60 \\ x &= 12 \end{aligned}$$

Example 2: Solve the equation $\frac{x-1}{2} = 3 + x$ for x .

$$\begin{aligned} \frac{x-1}{2} &= 3 + x \\ \frac{x-1}{2} &= \frac{3+x}{1} \\ 1(x-1) &= 2(3+x) \\ x-1 &= 6+2x \\ x-2x &= 6+1 \\ -x &= 7 \\ x &= -7 \end{aligned}$$

Example 1: In simple problems, an equation may be written by an almost direct translation into algebraic symbols; thus,

$$\begin{array}{ccccccc} \underbrace{7} & \times & \underbrace{E} & - & \underbrace{3} & & \\ \text{Seven times a certain voltage} & & \text{diminished by 3} & & & & \\ \hline \text{gives the same result as the voltage} & & \text{increased by 75,} & & & & \\ \hline & = & & + & & & 75. \end{array}$$

Solving the equation:

$$\begin{aligned} 7E - 3 &= E + 75 \\ 7E - E &= 75 + 3 \\ 6E &= 78 \\ E &= 13 \end{aligned}$$

Example 3: Solve the equation $\frac{2}{x-2} + \frac{2}{x+4} = \frac{4}{x-3}$ for x .

$$\begin{aligned} \frac{2}{x-2} + \frac{2}{x+4} &= \frac{4}{x-3} \\ \frac{2(x+4) + 2(x-2)}{(x-2)(x+4)} &= \frac{4}{x-3} \\ \frac{2x+8+2x-4}{(x-2)(x+4)} &= \frac{4}{x-3} \\ \frac{4x+4}{(x-2)(x+4)} &= \frac{4}{x-3} \\ (4x+4)(x-3) &= 4(x-2)(x+4) \\ 4x^2 - 8x - 12 &= 4(x^2 + 2x - 8) \\ 4x^2 - 8x - 12 &= 4x^2 + 8x - 32 \\ \cancel{4x^2} - \cancel{4x^2} - 8x - 8x &= -32 + 12 \\ -16x &= -20 \\ 16x &= 20 \\ x &= \frac{20}{16} = \frac{5}{4} = 1\frac{1}{4} \\ x &= 1\frac{1}{4} \end{aligned}$$

83. Written Equations

Many practical problems are stated in words and must be translated into symbols before the rules of algebra can be applied. There are no specific rules for the translation of a written problem into an equation of numbers, signs, and symbols. The following general suggestions may be helpful in developing equations:

a. From the worded statement of the problem, select the unknown quantity (or one of the unknown quantities) and represent it by a letter, such as x . Write the expression, stating exactly what x represents and the units in which it is measured.

b. If there is more than one unknown quantity in the problem, try to represent each unknown in terms of the first unknown.

$$\begin{aligned} \text{Check: } 7(13) - 3 &= 13 + 75 \\ 91 - 3 &= 13 + 75 \\ 88 &= 88 \end{aligned}$$

Example 2: A triangle has a perimeter of 30 inches. The longest side is 7 inches longer than the shortest side, and the third side is 5 inches longer than the shortest side. Find the length of the three sides.

$$\begin{aligned} \text{Let } x &= \text{length of shortest side.} \\ x + 7 &= \text{length of longest side.} \\ x + 5 &= \text{length of third side.} \\ x + (x + 5) + (x + 7) &= 30 \end{aligned}$$

Solving the equation:

$$\begin{aligned} x + x + 5 + x + 7 &= 30 \\ 3x + 12 &= 30 \\ 3x &= 30 - 12 \\ 3x &= 18 \\ x &= 6 = \text{shortest side.} \\ 6 + 5 &= 11 = \text{third side.} \\ 6 + 7 &= 13 = \text{longest side.} \end{aligned}$$

84. Simultaneous Equations

a. Definition. Simultaneous equations are two or more equations satisfied by the same sets of values of the unknown quantities. They are used to solve a problem with two or more unknown quantities.

b. Example. Assume that the sum of two numbers is 17, and that three times the first number less two times the second number is equal to 6. What are the numbers? In setting up equations for this problem, let x equal the first number and y equal the second number. The first equation is $x + y = 17$, and the second equation is $3x - 2y = 6$. This problem can be solved in three ways: by substitution, by addition, or by subtraction. All three methods are explained below.

(1) *Substitution.*

$$\begin{aligned} x + y &= 17 \text{ or } x = 17 - y \\ \text{Substitute } x = 17 - y &\text{ in the second} \\ \text{equation:} \\ 3x - 2y &= 6 \\ 3(17 - y) - 2y &= 6 \\ \text{Remove the parentheses:} \\ 51 - 3y - 2y &= 6 \\ \text{Transpose:} \\ -5y &= 6 - 51 \\ -5y &= -45 \\ 5y &= 45 \\ y &= 9 \end{aligned}$$

Substitute $y = 9$ in the first equation and solve for x :

$$x + y = 17 \text{ or } x + 9 = 17$$

Transpose:

$$\begin{aligned} x &= 17 - 9 \\ x &= 8 \end{aligned}$$

(2) *Addition.*

$$\begin{aligned} x + y &= 17 \\ 3x - 2y &= 6 \end{aligned}$$

Before adding, change the y in the first equation to $2y$ so that the y terms drop out when added; thus, the first equation must be multiplied by 2.

$$\begin{array}{r} 2x + 2y = 34 \\ 3x - 2y = 6 \\ \hline 5x = 40 \\ x = 8 \end{array}$$

Substitute $x = 8$ in the first equation and solve for y :

$$\begin{aligned} x + y &= 17 \text{ or } 8 + y = 17 \\ y &= 17 - 8 \\ y &= 9 \end{aligned}$$

(3) *Subtraction.*

Before subtracting, multiply the first equation by 3 so that the x terms drop out when subtracted.

$$\begin{array}{r} 3x + 3y = 51 \\ 3x - 2y = 6 \\ \hline + 5y = 45 \\ y = 9 \end{array}$$

Subtract the second equation from the first equation:

$$\begin{array}{r} 3x + 3y = 51 \\ -3x + 2y = -6 \\ \hline 5y = 45 \\ y = 9 \end{array}$$

Substitute $y = 9$ in the first equation and solve for x : Refer to (1) and (2) above.

c. Additional Examples. If the coefficients of the unknowns differ (for example, $3x$ and x and $2y$ and $4y$), multiply one or both equations to establish equal coefficients for one of the unknowns (x or y).

Example 1: Solve for x and y if $3x + 2y = 7$ and $x + 4y = 9$.

$$\begin{array}{r} 3x + 2y = 7 \\ x + 4y = 9 \end{array}$$

Multiply the first equation by 2 so that $2y$ will become $4y$:

$$\begin{array}{r} 6x + 4y = 14 \\ x + 4y = 9 \end{array}$$

Subtract the second equation from the first equation:

$$\begin{array}{r} 6x + 4y = 14 \\ -x - 4y = -9 \\ \hline 5x = 5 \\ x = 1 \end{array}$$

Solve for y by substituting $x = 1$ in either equation.

Example 2: Solve for x and y if $2x + 3y = 24$ and $3x - 4y = 2$.

$$\begin{array}{r} 2x + 3y = 24 \\ 3x - 4y = 2 \end{array}$$

Multiply the first equation by 4 to change $3y$ to $12y$; multiply the second equation by 3 to change $4y$ to $12y$; then add the two equations:

$$\begin{array}{r} 8x + 12y = 96 \\ 9x - 12y = 6 \\ \hline 17x = 102 \\ x = 6 \end{array}$$

Solve for y by substituting $x = 6$ in either equation.

85. Solving Formulas

a. The Formula. A formula is a rule or law that states a scientific relationship. It can be

expressed in an equation by using letters, symbols, and constant terms. For example, a formula in electricity (par. 184) states that the voltage across any part of a circuit is equal to the product of the current and resistance of that part of the circuit. In formula form, this is expressed as $E = IR$, where E is the *voltage or difference in potential* expressed in *volts*, I is the *current* expressed in *amperes*, and R is the *resistance* expressed in *ohms*.

b. Solving the Formula. To solve a formula, perform the same operations on both members of an equation until the desired unknown can be isolated in one member of the equation. If the numerical values for some variables are given, substitute in the formula and solve for the unknown as in any other equation.

Example 1: Solve the formula $T =$

$$\frac{12(D - d)}{l} \text{ for } D.$$

$$T = \frac{12(D - d)}{l}$$

$$T = \frac{12D - 12d}{l}$$

Multiply both sides by l :

$$Tl = 12D - 12d$$

Transpose and change signs:

$$12D = Tl + 12d$$

Divide both sides by 12:

$$\frac{12D}{12} = \frac{Tl}{12} + \frac{12d}{12}$$

$$D = \frac{Tl}{12} + d$$

Example 2: Given the formula for electrical power, $P = I^2R$, find the value of P in watts when $I = 15.4$ amperes and $R = 25.7$ ohms.

$$P = I^2R$$

Substituting the given numerical values for I and R :

$$\begin{aligned} P &= (15.4)^2 \times 25.7 \\ &= 237.16 \times 25.7 \\ &= 6,095 \text{ watts} \end{aligned}$$

Example 3: Given the formula for the total resistance of two resistors in parallel,

$$R_T = \frac{R_1 R_2}{R_1 + R_2}, \text{ solve for } R_x \text{ in ohms when}$$

$$R_1 = 40 \text{ ohms and } R_2 = 60 \text{ ohms.}$$

$$R_r = \frac{R_1 R_2}{R_1 + R_2}$$

Substitute the given numerical values for R_1 and R_2 :

$$\begin{aligned} R_r &= \frac{40 \times 60}{40 + 60} \\ &= \frac{2,400}{100} \\ &= 24 \text{ ohms} \end{aligned}$$

86. Review Problems—Equations

a. Solve for the unknown quantity in each of the following:

$$(1) y + 12 = 15$$

$$(2) \frac{n}{8} = \frac{1}{4}$$

$$(3) 0.63s = 53.55$$

$$(4) 47x - 17 = 235 - 37x$$

$$(5) (10m + 6) - (11 - 15m) = 14m + 6m$$

$$(6) \begin{aligned} x + y &= 3 \\ 3x + 2y &= 1 \end{aligned}$$

$$(7) \begin{aligned} a - 3b &= 0 \\ 5a - 4b &= 11 \end{aligned}$$

$$(8) \begin{aligned} 7x - 5y &= 1 \\ 5x + y &= 19 \end{aligned}$$

$$(9) \begin{aligned} 4m - 2n &= 2 \\ 3m + n &= 14 \end{aligned}$$

$$(10) \begin{aligned} 3r - 9s &= 15 \\ 6r - 7s &= 41 \end{aligned}$$

b. Solve the following formulas for the quantity indicated:

$$(1) Fd = Wh \text{ for } d$$

$$(2) v^2 = v_0^2 + 2gh \text{ for } g$$

$$(3) F = \frac{w}{y} a \text{ for } a$$

$$(4) H = \frac{D^2 N}{2.534} \text{ for } N$$

$$(5) F = \frac{22.5 BIl}{10^8} \text{ for } l$$

c. Solve the following linear equations for the unknown quantity:

$$(1) 7(2x - 6) - 8 = 10x + 10$$

$$(2) 10(x - 2) - 10(2 - x) = 4x - 40$$

$$(3) 9.8a - 9.4 = 6.8a + .6$$

$$(4) 2x + 3 + \frac{11x - 11}{8} = 22$$

$$(5) 3R + (2R - 4) = 6R - 10(R - 2)$$

$$(6) \frac{5Z}{4} + 2Z = \frac{3 + Z}{3} - 7Z$$

$$(7) -(5x + 15) = 5x + 21 - \frac{5(2 - x)}{2}$$

$$(8) \frac{11y - 13}{25} + \frac{17y + 4}{21} + \frac{19y + 3}{7} = 28\frac{1}{7} + \frac{5y - 25\frac{1}{2}}{4}$$

$$(9) \frac{4X_L}{5} - 6X_L + 2 = \frac{X_L}{4}$$

$$(10) (x - 1)(x + 1) + x(1 - x) = 4x(2x + 1) - 8x(x - 2)$$

d. Solve the following sets of simultaneous linear equations:

$$(1) \begin{aligned} 5x - 2y &= 10 \\ 3x - y &= 7 \end{aligned}$$

$$(2) \begin{aligned} 6a + 15b &= 69 \\ 6a - 6b &= 14 \end{aligned}$$

$$(3) \begin{aligned} x - 3y &= -17 \\ 2x + 6y &= 50 \end{aligned}$$

$$(4) \begin{aligned} 6x - 8y &= 20 \\ 3x + 2y &= -14 \end{aligned}$$

$$(5) \begin{aligned} -4x + y &= 13 \\ 8x - 5y &= -29 \end{aligned}$$

$$(6) \begin{aligned} 2I + \frac{2Z - 22}{3} &= 30 \\ \frac{3I - 15}{4} + 6Z &= 108 \end{aligned}$$

$$(7) \begin{aligned} \frac{2}{x} + y &= 1 \\ \frac{1}{x} + 2y &= 1\frac{1}{2} \end{aligned}$$

$$(8) \begin{aligned} \frac{a}{3} + \frac{b}{4} &= 1 \\ \frac{a}{5} + \frac{b}{2} &= -\frac{1}{2} \end{aligned}$$

$$(9) \begin{aligned} \frac{5}{x} + \frac{2}{y} &= -1 \\ \frac{3}{x} + \frac{1}{y} &= 1\frac{1}{2} \end{aligned}$$

$$(10) \text{ Solve for } r \text{ and } s: \begin{aligned} (a - b)r + (a + b)s &= a^2 - b^2 \\ (a + b)r - (a - b)s &= 2ab \end{aligned}$$

e. Solve the following problems:

- (1) Three times a voltage (E) diminished by 2 is equal to that voltage. What is the voltage?
- (2) The sum of two resistances in series is R ohms. One resistance is 20 ohms. Give the algebraic expression for the other.
- (3) If a certain voltage (E) is tripled and the result is diminished by 220 volts, the remainder is equal to the original voltage. What is the voltage?
- (4) When two resistors are connected in series, the total resistance (R) is the sum of the two resistances. If one resistor is 25 ohms and the total resist-

ance is 100 ohms, what is the value of the other resistor?

- (5) The current (I) from a battery is divided among three circuits. The first circuit draws 20 milliamperes more than the second circuit, and the second circuit draws 20 milliamperes more than the third circuit. If the total current drawn is 240 milliamperes, what is the current in each circuit?
- (6) Solving by the formula $I = \frac{E}{R}$, how much current (I) does an electric circuit having a resistance (R) of 20 ohms take if the voltage (E) is 110 volts?

Section IX. QUADRATIC EQUATIONS

87. General

A quadratic equation is one which can be reduced to the form $ax^2 + bx + c = 0$ where a , b , and c are known and x is the unknown quantity. In other words, a quadratic equation contains the square of the unknown quantity, such as x^2 , but no higher power. For example, $3x^2 + 5x - 2 = 0$ and $x^2 - 4x + 3 = 0$ are quadratic equations. The form $ax^2 + bx + c = 0$ is called the *general quadratic equation*.

88. Pure Quadratic Equations

A pure quadratic equation is obtained from the general quadratic equation when b is equal to zero and the middle term (bx) does not appear. The equation then becomes $ax^2 + c = 0$. The pure quadratic equation has two roots that are equal in absolute value but have opposite signs. As discussed in paragraph 49, all numbers have two square roots. The equation $x^2 - 36 = 0$ is a pure quadratic equation since there are two numbers which, when substituted for x , will satisfy the equation. Thus $(+6)^2 - 36 = 0$ since $36 - 36 = 0$; also, $(-6)^2 - 36 = 0$ since $36 - 36 = 0$. Therefore, $x = \pm 6$.

Example: Solve the equation $x^2 - 5 = 20$ for x .

$$\begin{aligned}x^2 - 5 &= 20 \\x^2 &= 25 \\x &= \pm 5\end{aligned}$$

Check:

$$\begin{aligned}(\pm 5)^2 - 5 &= 20 \\25 - 5 &= 20 \\20 &= 20\end{aligned}$$

89. Solution by Factoring

a. Quadratic equations are found in many applications of even the simplest nature. For example, suppose that a sheet of metal is to be cut so that it has an area of 30 square inches, and that the length of the piece will be 1 inch longer than the width. With x representing the unknown width and $x + 1$ the unknown length, $x(x + 1)$ equals the area; therefore, the equation that must be satisfied is $x(x + 1) = 30$. By performing the indicated multiplication and subtracting 30 from each side, the equation now can be written in the form of a quadratic equation, as $x^2 + x - 30 = 0$.

b. To solve this equation, factor the left-hand side into the equivalent equation: $(x - 5)(x + 6) = 0$. The product of two factors is zero if either of the factors is zero (par. 53). Thus, each factor is set equal to zero and solved for the unknown. The equation is satisfied if $x - 5 = 0$ or $x = 5$. Note that the equation also is satisfied if $x + 6 = 0$. This illustrates an important fact concerning quadratic equations: *Every quadratic equation has two solutions.* Only one solution, however, may be appropriate when quadratic equations are used to solve

actual problems. The quadratic equation only gives two *possible* solutions—the *actual* solution must be determined by referring to the facts in the original problem.

Example 1: Solve the equation $x^2 - 2x = 0$ for x .

$$x^2 - 2x = 0$$

Factoring:

$$x(x - 2) = 0$$

$$x = 0$$

or $x - 2 = 0$

$$x = 2$$

Thus, 0 or 2 are the roots of the equation $x^2 - 2x = 0$.

Example 2: Solve the equation $2x^2 - 3x - 5 = 0$ for x .

$$2x^2 - 3x - 5 = 0$$

Factoring:

$$(2x - 5)(x + 1) = 0$$

so $x + 1 = 0$

and $x = -1$

or $2x - 5 = 0$

$$2x = 5$$

and $x = \frac{5}{2}$ or $2\frac{1}{2}$

Thus, -1 and $2\frac{1}{2}$ are the roots of the equation $2x^2 - 3x - 5 = 0$.

90. Solution by Completing the Square

In solving quadratic equations, the method of factoring described in paragraph 89 usually is best if the factors are immediately apparent by inspection. When the values of the unknown are not whole numbers or rational fractions, a quadratic equation can be solved more easily by the method of *completing the square*. This method also is used to derive the quadratic formula (par. 91). For example, to solve the equation $2x^2 - x - 2 = 0$ by completing the square, proceed as follows:

a. Transpose all terms involving x to the left-hand side of the equation and all other terms to the right-hand side. The equation is now in the form $2x^2 - x = 2$, or $x^2 - \frac{1}{2}x = 1$. When using this method, the coefficient of the squared term must be unity (one).

b. Add a number to both sides of the equation so that the left-hand side will be a perfect

trinomial square. To determine this number, divide the coefficient of the middle term ($-\frac{1}{2}$) by 2 and square the resulting number.

$$x^2 - \frac{1}{2}x = 1$$

$$x^2 - \frac{1}{2}x + \frac{1}{16} = 1 + \frac{1}{16}$$

c. Replace the trinomial square on the left-hand side of the equation with the square of a binomial.

$$(x - \frac{1}{4})^2 = \frac{17}{16}$$

d. Extract the square root of both sides of the equation.

$$x - \frac{1}{4} = \frac{\pm\sqrt{17}}{4}$$

Thus, $x = \frac{1 \pm \sqrt{17}}{4}$

91. The General Quadratic Equation

a. *General.* Another method of solving quadratic equations consists of substitution in a formula derived from the general quadratic equation (b below). The general quadratic equation is in the form $ax^2 + bx + c = 0$, and any quadratic equation can be written in this form (par. 87). Thus, in the equation $2r^2 + 5r - 3 = 0$, $a = 2$, $b = 5$, and $c = -3$. Similarly, in the equation $9x^2 - 25 = 0$, $a = 9$, $b = 0$, and $c = -25$.

b. *Deriving Formula for Solving any Quadratic Equation.* Since the general quadratic equation, $ax^2 + bx + c = 0$, represents any quadratic equation, the roots of this equation will represent the roots of any quadratic equation; then, if the general quadratic equation is solved for the unknown values, the roots obtained will serve as a formula for finding the roots of any quadratic equation. The formula is derived from the general form by the method of completing the square; thus, given the general equation $ax^2 + bx + c = 0$, proceed as follows:

(1) Divide through by the coefficient a .

$$x^2 + \frac{bx}{a} + \frac{c}{a} = 0$$

(2) Subtract the term $\frac{c}{a}$ from both sides of the equation.

$$x^2 + \frac{bx}{a} = -\frac{c}{a}$$

This operation prepares the equation for the addition of a quantity to both sides of the equation that will make the left-hand side a perfect square. This quantity is obtained by dividing the coefficient of the x term by 2, and squaring the quotient. Since the coefficient of the x term is $\frac{b}{a}$, the quantity to be added to both sides of the equation is $(\frac{b}{2a})^2$, or $\frac{b^2}{4a^2}$.

- (3) Add $\frac{b^2}{4a^2}$ to both sides of the equation.

$$x^2 + \frac{bx}{a} + \frac{b^2}{4a^2} = \frac{b^2}{4a^2} - \frac{c}{a}$$

- (4) Factor the left-hand side of the equation, and add the fraction on the right-hand side.

$$(x + \frac{b}{2a})^2 = \frac{b^2 - 4ac}{4a^2}$$

- (5) Take the square root of both sides of the equation.

$$x + \frac{b}{2a} = \pm \frac{\sqrt{b^2 - 4ac}}{2a}$$

- (6) Subtract $\frac{b}{2a}$ from both sides of the equation.

$$x = -\frac{b}{2a} \pm \frac{\sqrt{b^2 - 4ac}}{2a}$$

- (7) Collect the terms on the right-hand side of the equation.

$$x = \frac{-b \pm \sqrt{b^2 - 4ac}}{2a}$$

This equation is known as the *quadratic formula*. The two roots of any quadratic equation can be obtained by substituting in the formula the particular values of a , b , and c .

92. Solution by the Quadratic Formula

In practical problems, pure quadratic equations (par. 88) are seldom found, and solution

by factoring (par. 89) can be used only occasionally. However, any quadratic equation can be solved by the method of completing the square (par. 90)—the method used to derive the quadratic formula (par. 91). This method is unnecessary, however, when the values for a , b , and c for any quadratic equation can be substituted in the formula $x = \frac{-b \pm \sqrt{b^2 - 4ac}}{2a}$

Example 1: Solve the equation $2x^2 - 6x + 3 = 0$ by using the quadratic formula.

$$2x^2 - 6x + 3 = 0$$

$$a = 2; b = -6; c = 3$$

Substituting in the formula:

$$x = \frac{-b \pm \sqrt{b^2 - 4ac}}{2a}$$

$$x = \frac{-(-6) \pm \sqrt{36 - (4)(2)(3)}}{4}$$

$$= \frac{6 \pm \sqrt{12}}{4}$$

$$= \frac{3 \pm \sqrt{3}}{2}$$

$$\text{Thus, } x = \frac{3 + \sqrt{3}}{2} \text{ or } x = \frac{3 - \sqrt{3}}{2}$$

$$\text{Check: } x = \frac{3 + \sqrt{3}}{2}$$

$$x = \frac{3 + 1.732}{2} = 2.366$$

Substituting in the equation:

$$2(2.366)^2 - 6(2.366) + 3 = 0$$

$$11.20 - 14.20 + 3 = 0$$

$$14.20 - 14.20 = 0$$

$$x = \frac{3 - \sqrt{3}}{2}$$

$$x = \frac{3 - 1.732}{2} = .634$$

Substituting in the equation:

$$2(.634)^2 - 6(.634) + 3 = 0$$

$$2(.40) - 3.80 + 3 = 0$$

$$3.80 - 3.80 = 0$$

Example 2: Solve the equation $3x^2 + 5x - 2 = 0$ by using the quadratic formula.

$$3x^2 + 5x - 2 = 0$$

$$a = 3; b = 5; c = -2$$

Substituting in the formula:

$$x = \frac{-b \pm \sqrt{b^2 - 4ac}}{2a}$$

$$x = \frac{-5 \pm \sqrt{25 - (4)(3)(-2)}}{(2)(3)}$$

$$= \frac{-5 \pm 7}{6}$$

Thus, $x = \frac{1}{3}$ or $x = -2$.

Check: $x = \frac{1}{3}$

Substituting in the equation:

$$3\left(\frac{1}{3}\right)^2 + 5\left(\frac{1}{3}\right) - 2 = 0$$

$$\frac{3}{9} + \frac{5}{3} - 2 = 0$$

$$\frac{1}{3} + \frac{5}{3} - 2 = 0$$

$$\frac{1}{3} + \frac{5}{3} - \frac{6}{3} = 0$$

$$\frac{6}{3} - \frac{6}{3} = 0$$

$$x = -2$$

Substituting in the equation:

$$3(-2)^2 + 5(-2) - 2 = 0$$

$$12 - 10 - 2 = 0$$

$$12 - 12 = 0$$

93. Character of the Roots

a. The values for unknowns that are not

whole numbers or rational fractions are called *irrational roots*. A *rational* number is a number which can be expressed as the ratio of two integers. For example, 9, $\frac{7}{3}$, $\frac{1}{8}$, and $\sqrt{16}$ are rational numbers. Any whole number is rational since it is the quotient of itself and unity; thus, $9 = \frac{9}{1}$. Numbers such as $\frac{7}{3}$ and $\frac{1}{8}$ are often referred to as rational fractions. A radical is rational if it can be expressed as the quotient of two whole numbers. Thus $\sqrt{16}$ is rational since $\sqrt{16} = 4 = \frac{4}{1}$. A number such as $\sqrt{3}$ which cannot be written as the ratio of two whole numbers is called irrational. Rational and irrational numbers, taken together, make up the system of real numbers. Any number, such as $3 + \sqrt{3}$, which contains a radical sign that cannot be removed also is considered irrational. Roots of quadratic equations are real if a minus sign does not occur under a radical. For example, $x = 5$ is a real root—roots such as $x = \frac{3 + \sqrt{3}}{2}$ or $x = \frac{3 - \sqrt{3}}{2}$ are real, but irrational.

b. One important fact to be remembered when using the quadratic formula is that the expression under the radical sign, $b^2 - 4ac$, must be regarded as a whole before the square root can be taken. The quantity $b^2 - 4ac$ is called the *discriminant* of the quadratic equation. Many things can be learned about a quadratic equation merely by inspecting the discriminant. If the value of the discriminant is positive, real roots will be obtained when the equation is solved. These roots are either rational or irrational—rational when the discriminant is a perfect square, irrational when it is not. The roots are equal only when the value of $b^2 - 4ac$ is zero. When $b^2 - 4ac$ is negative, the square root will be that of a negative number and the roots will be imaginary.

c. In summary, a quadratic equation always has two solutions. The solutions will be:

Real and equal.....if $b^2 - 4ac$ equals 0.

Unequal but real.....if $b^2 - 4ac$ is positive.

Real and rational.....if $b^2 - 4ac$ is a perfect square.

Imaginary.....if $b^2 - 4ac$ is negative.

94. Review Problems—Quadratic Equations

a. Solve by factoring.

(1) $2x^2 + 3x = 0$

(2) $(x - 4)x = 0$

(3) $(x + 3)\frac{x}{3} = 0$

(4) $\frac{1}{2}x^2 + \frac{1}{2}x = 0$

(5) $2x^2 - 128 = 0$

(6) $\frac{1}{2}x^2 - 2 = 1$

(7) $3x^2 - 25 = 2$

(8) $3x(x - 2) + 2x(3 - x) = 16$

(9) $x^2 - x - 42 = 0$

(10) $x^2 - 13x + 12 = 0$

b. Solve by completing the square.

(1) $x^2 + 3x - 1 = 0$

(2) $y^2 + 6y - 10 = 0$

(3) $E^2 - 4E + 1 = 0$

(4) $2E^2 + 8E - 3 = 0$

(5) $8H^2 - 8H = 5$

(6) $5L^2 - 5 = 2L^2 - 10L$

(7) $14r^2 - 28r - 42 = 0$

(8) $\frac{1}{v^2} - \frac{4}{v} = 2$

(9) $y^2 - 5 = 2y$

(10) $8x^2 - 8x = 8$

c. Solve by using the quadratic formula.

(1) $a^2 + 2a + 1 = 0$

(2) $12y^2 - 6 + y = 0$

(3) $0 = 1 + 5E + 3E^2$

(4) $6I^2 + I - 12 = 0$

(5) $2c^2 + 4c - 6 = 0$

(6) $15R^2 = 22R + 5$

(7) $\frac{Z - 2}{Z} = 1 - Z$

(8) $\frac{3}{r - 2} = 1 + \frac{2}{r + 3}$

(9) $\frac{3x + 2}{2x + 4} = \frac{x + 2}{2x}$

(10) $0 = 6 - \frac{b - 2}{b + 2} + \frac{b - 1}{b + 1}$

CHAPTER 6

GRAPHS

Section I. BASIC CHARACTERISTICS OF GRAPHS

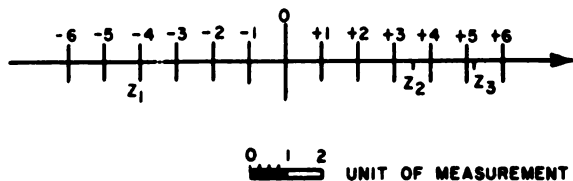
95. General

A graph is a pictorial representation of the relation between two or more quantities. In many instances, problems are more clearly understood when solved graphically than when solved by other methods. Numerical data taken from an experiment or calculations derived from a formula require interpretation, and a curve on a graph depicting such data will provide a picture that shows at a glance how one factor or function depends on another.

96. The Number Line

a. In figure 15, on a straight line of indeterminate length, a point 0 has been chosen from which to measure distances. The point 0 is called the origin. A unit of measurement also has been chosen, and positive and negative integers have been marked off and labeled. The usual choice for a positive direction is shown by the arrow. On the number line, Z_1 corresponds to -4 , Z_2 corresponds to $3\frac{1}{2}$, and Z_3 corresponds to 5.2 .

b. Consider a number x as corresponding to a point a distance of x units from 0. If x is positive, the point will be in the direction of the arrow from 0; if x is negative, the point will be in the opposite direction from 0. The relative size of two numbers is indicated graphically by the relative positions on the number



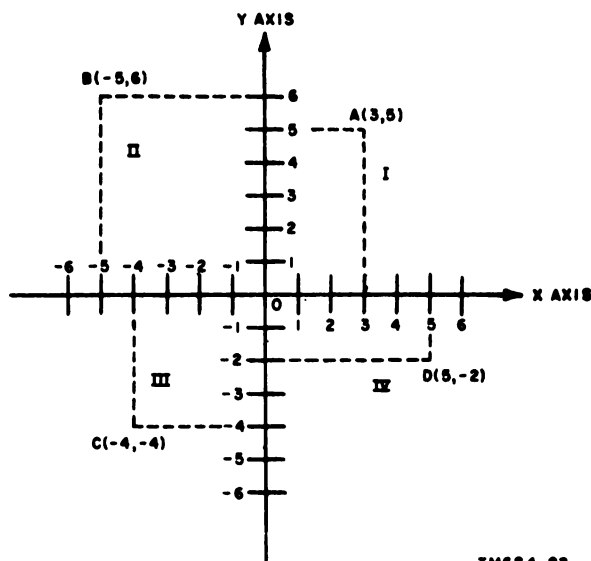
TM684-21

Figure 15. The number line.

line of points corresponding to the two numbers. For example, if x is greater than w , the point corresponding to x will be to the right of the point corresponding to w ; if x is less than w , the point corresponding to x will be to the left of the point corresponding to w . The number of units from the origin to the point representing a certain number, regardless of direction, is the absolute value (par. 35) of the number.

97. Rectangular Coordinates

a. In the preceding paragraph, a relationship was given between numbers and points on a straight line. A similar relationship can be established between a pair of numbers and a point on a plane. In figure 16, two number lines are drawn perpendicular to each other at their origins for form a set of axes. The horizontal axis is commonly called the x axis;



TM684-22

Figure 16. Rectangular coordinates.

the vertical axis is commonly called the y axis. Any point on the plane can be located with reference to the two axes: It must lie a certain number of units to the left (negative) or to the right (positive) of the y axis; and it must lie a certain number of units above (positive) or below (negative) the x -axis. To locate a point with reference to the set of axes, it is necessary only to know the x value and the y value of the point. These two values are known as the *coordinates* of the point. The x value, called the *abscissa*, is written first; the y value, called the *ordinate*, follows. The two numbers are separated by a comma and are usually enclosed in parentheses. Thus, in figure 16, the correct notation for the coordinates at point A is (3,5), because the x value is 3 and the y value 5.

b. The axes divide the graph into four sections, or *quadrants*, identified by the Roman numerals I, II, III, and IV in figure 16. The signs of the abscissa and the ordinate in each of the quadrants are given in the chart below.

Quadrant	Abscissa	Ordinate
I	+	+
II	-	+
III	-	-
IV	+	-

98. Plotting Points

The procedure for locating points by their coordinates is called *plotting* the points. To plot the point D (5, -2) in figure 16, for example, erect a perpendicular on the x axis five units to the right of the y axis; then erect a perpendicular to the y axis two units below the

x axis; the point of intersection of these two perpendiculars is the point D (5,-2).

99. Review Problems—Plotting Points

a. Plot each of the following points and state the quadrant, if any, in which each lies:

- (1) (4,2)
- (2) (4,-2)
- (3) (-1,3)
- (4) (6,-1)
- (5) (3,0)
- (6) (0,-3)
- (7) (-15,-27)
- (8) (3½,4¼)
- (9) (5.6,-6.5)

b. Plot the points in the following chart and connect them by straight segments in the order of increasing values of x :

x	-3	-2	-1	0	1	2	3	4
y	18	8	2	0	2	8	18	32

c. Plot the points in the following chart and sketch a smooth curve passing through them in the order of increasing values of x :

x	-3	-2	-1	0	1	2	3
y	-37	-8	5	8	7	7	17

d. If $y = 2x - 3$, plot the points for which $x = 4, 2, 1, 0, -1, -2$, and -4 after finding the corresponding values of y .

e. Draw the triangle of which the vertices are (-2,6), (3,2), and (0,-3).

f. Draw the quadrilateral of which the vertices, connected in the order given, are (1,3), (-3,4), (-2,-5), and (3,-2).

Section II. GRAPHING EQUATIONS

100. Graphing Linear Equations

a. *General.* An equation in the first degree in two unknowns is called a *linear equation* since its graph is a straight line. For example, $x + y = 5$, $2x + y = 12$, and $x - 6y = 6$ are linear equations. An equation is said to be of the first degree in two unknowns if only the first power of either unknown is involved and

if neither of the unknowns appears in a denominator.

b. *Plotting Graphs of Linear Equations.*

- (1) The first step in plotting the graph of a linear equation (or of any other equation or formula) is to set up a table of values for both unknowns that will satisfy the equation. In the equa-

tion $x + y = 5$, for example, it is apparent that there are a number of values for x and y that will satisfy the equation. For any number assigned to x , there is a corresponding number for y which will satisfy the equation. Consider that 4 and -4 will be the maximum plus and minus values for x . Using the values 4, 3, 2, 1, 0, -1 , -2 , -3 , and -4 for x , the equation is solved for y at each value of x . These are arranged in tabular form as shown on figure 17.

- (2) Each of these pairs of values gives a point on a graph. Consider each of the corresponding points as coordinates—the value of x the abscissa and the value of y the ordinate. The line joining these points (fig. 17) is the graph of the equation $x + y = 5$. Note that the coordinates for any two points are sufficient to determine its graph. Therefore, plotting the coordinates for any two points is sufficient to determine the graph of a first degree equation. Plotting a third point, however, will serve as a check, for if the three points are not on the same straight line, one of them is in error.

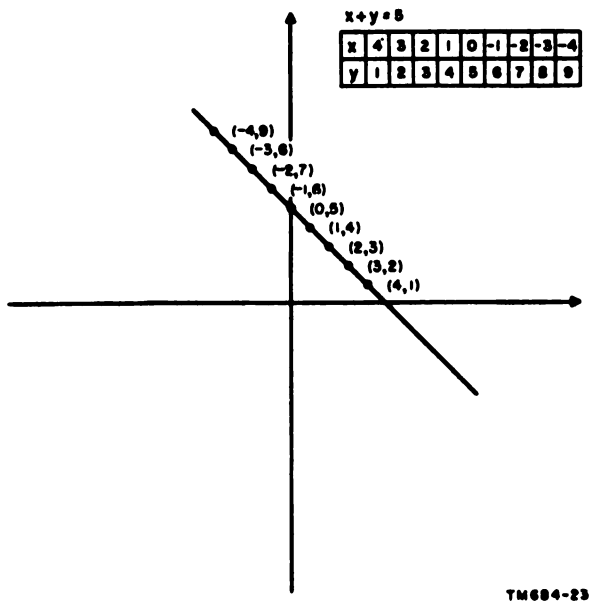


Figure 17. Graph of linear equation.

101. Graphical Solution of Simultaneous Linear Equations

a. When two *independent* linear equations contain the same two related unknowns, there will be an unlimited number of solutions for each equation. However, *there can be only one set of values that will satisfy both equations*. Determining the one set of values is known as the simultaneous solution of the two independent equations.

b. Graphically, the two equations can be solved simultaneously by plotting them on the same graph and locating their point of intersection (if there is one). For example, consider the graphical solution of the equations $3x - 2y = 0$ and $3x + 2y = 6$. Selecting 6 and -6 as the maximum plus and minus values for x and using $x = 4$ as a checkpoint, the coordinates for both equations are determined. For the equation $3x - 2y = 0$, these coordinates are (6, 9), (4, 6), and $(-6, -9)$; for the equation $3x + 2y = 6$, (6, -6), (4, -3), and $(-6, 12)$. These coordinates are plotted on an axis and a line is drawn joining the plotted points of each equation (fig. 18). The graphs of the two independent linear equation cross at point P, where $x = 1$ and $y = 1.5$. To check the graphical solution of the equations, substitute these values for x and y in the original equations. Since they satisfy both equation, the graphical solution is correct.

c. If two *dependent* equations are plotted on a graph, their lines will coincide. For example, the equations $x + y = 4$ and $2x + 2y = 8$

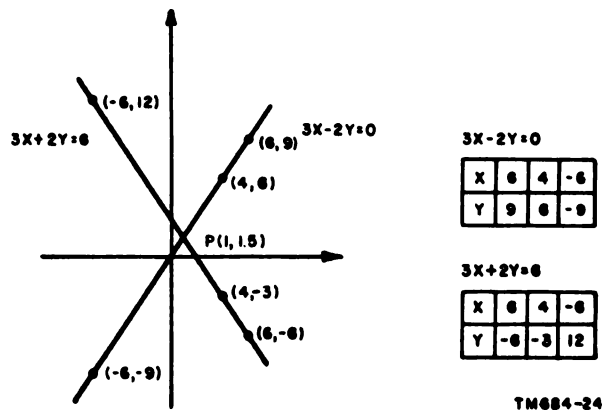


Figure 18. Graphical solution of simultaneous linear equations.

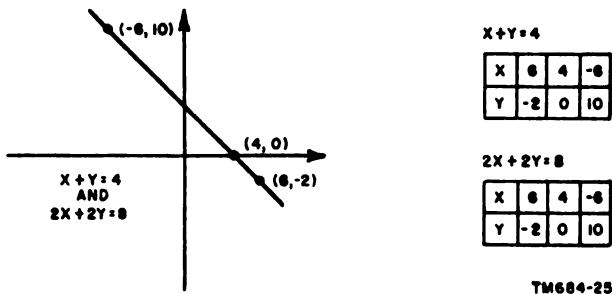


Figure 19. Graph of dependent simultaneous linear equations.

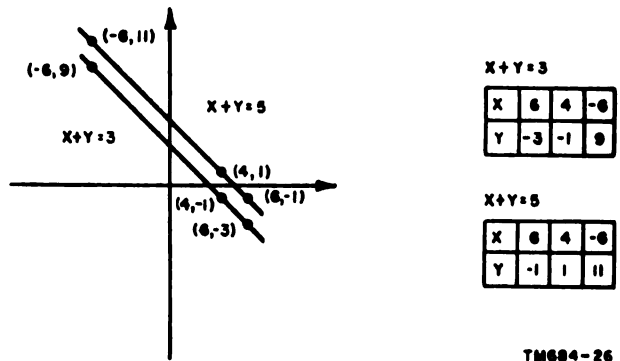


Figure 20. Graph of inconsistent simultaneous linear equations.

are dependent, since they can be reduced to identical forms. Selecting the same plus and minus values for x and the same check point as in b above, the coordinates for both equations are found to be $(6, -2)$, $(4, 0)$, and $(-6, 10)$. Plotted on a graph, both equations form a single line (fig. 19).

d. Simultaneous equations that have no common solution are called *inconsistent*. No solution is possible for the equations $x + y = 3$ and $x + y = 5$, because there are no values for x and y which, when added together to make 3, will also equal 5. Using 6 and -6 as maximum plus and minus values for x , and using $x = 4$ as a check point, the coordinates for equation $x + y = 3$ are found to be $(6, -3)$, $(4, -1)$, and $(-6, 9)$; the coordinates for $x + y = 5$ are $(6, -1)$, $(4, 1)$, and $(-6, 11)$. Plotted on a graph, these equations form parallel lines (fig. 20).

102. Graphing Quadratic Equations

a. The Dependent Variable. In graphing a quadratic equation, only two values, or points, for plotting the equation can be obtained by finding the roots of the equation (par. 88). These values do not give a complete picture of the equation. To get a continuous graph, a *dependent variable* is introduced. This variable, usually identified by the letter y , gets its name from the fact that it depends on another quantity for its value. For example, in the equation $y = x^2 - 6x + 5$, the value of y depends on the value of x ; therefore, y is a dependent variable. The quantity on which y depends is called the *independent variable*. A more accurate designation for the dependent variable is $f(x)$, meaning *function of x* . Using

this designation, the equation given above would be written $f(x) = x^2 - 6x + 5$. If the independent variable in the equation were z , the equation would be written $f(z) = z^2 - 6z + 5$.

b. Graphical Solution of Quadratic Equations. In the original equation $f(x) = x^2 - 6x + 5$, different values are substituted for the unknown to find the corresponding values of the function; thus if x equals -1 , the equation becomes $f(-1) = (-1)^2 - 6(-1) + 5 = 12$; if x equals zero, the equation becomes $f(0) = 0 - 0 + 5 = 5$; if x equals 1, the equation becomes $f(1) = (1)^2 - 6(1) + 5 = 0$, etc. Compile a table of enough values to make it possible to plot the equation, as shown in figure 21. The graph of the function crosses the x -axis at two points, 1 and 5, which give a graphical solution of the equation $x^2 - 6x + 5 = 0$. The equation also may be solved by factoring, as follows:

$$\begin{aligned} (x - 1)(x - 5) &= 0 \\ x - 1 = 0 \text{ and } x - 5 &= 0 \\ x = 1 \text{ and } x &= 5 \end{aligned}$$

Thus, the solutions or the roots of the equation are obtained when $f(x) = 0$. These roots represent the points where the graph of $f(x) = x^2 - 6x + 5$ crosses the x -axis.

c. Properties of Functions. In addition to the original equation, $f(x) = x^2 - 6x + 5$, consider three equations that differ in one respect—their constant terms are not the same. For example:

$$\begin{aligned} f(x) &= x^2 - 6x + 8 \\ f(x) &= x^2 - 6x + 9 \\ f(x) &= x^2 - 6x + 12 \end{aligned}$$

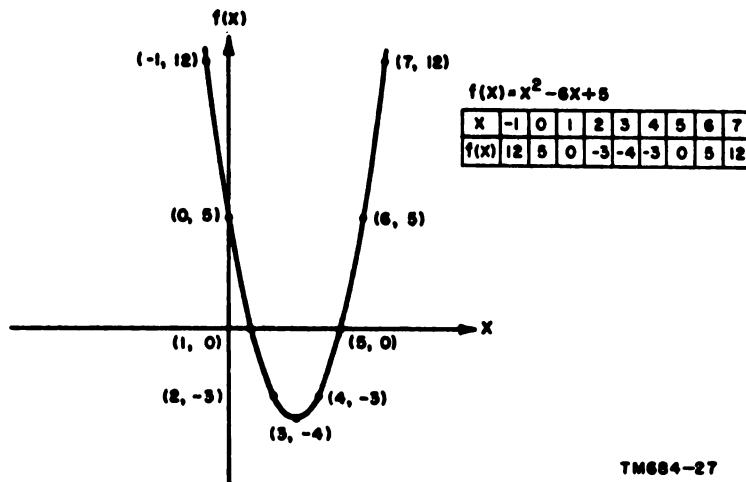


Figure 21. Graph of function of quadratic equation.

The graphs of the four corresponding functions have interesting properties and can be studied more advantageously when plotted on the same graph, as shown in figure 22.

- (1) The function of $x^2 - 6x + 5$ crosses the horizontal or x -axis at two points, 1 and 5. These points indicate that the roots of the equation are, $x = 1$ and $x = 5$. To compare this information with the discussion on quadratic equations in chapter 5, the discriminant of the equation must be investigated. The discriminant of $x^2 - 6x + 5$ is $(b^2 - 4ac) = (36 - 4 \cdot 1 \cdot 5) = 36 - 20 = 16$. Referring to the summary of the character of roots in paragraph 93, the roots are real and rational. To prove this, substitute the value of the discriminant in the quadratic formula.

$$x = \frac{-b \pm \sqrt{b^2 - 4ac}}{2a}$$

$$x = \frac{-(-6) \pm \sqrt{16}}{2}$$

$$x = \frac{6 + 4}{2} = 5 \text{ or } \frac{6 - 4}{2} = 1$$

Thus, the discriminant is a perfect square and the roots are real and rational.

- (2) The function of $x^2 - 6x + 8$ crosses the horizontal axis at 2 and 4, indicating that the roots are $x = 2$ and $x = 4$. Calculating the discriminant,

$(b^2 - 4ac) = (36 - 4 \cdot 2 \cdot 2) = 36 - 32 = 4$. Thus, the discriminant is a perfect square and will give real and rational roots.

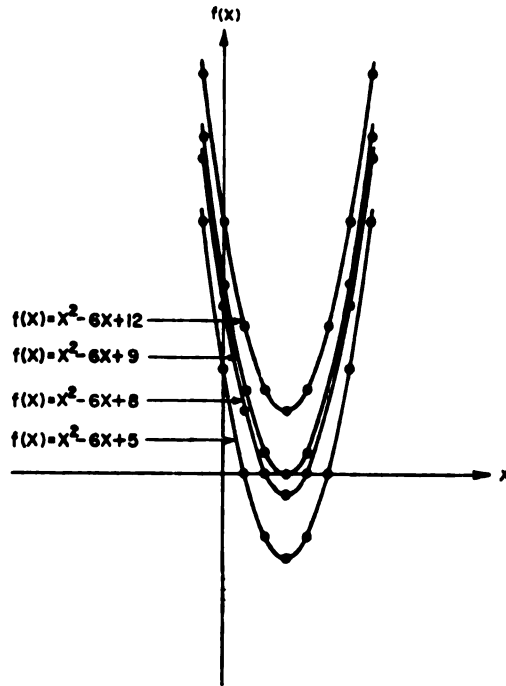
- (3) The function of $x^2 - 6x + 9$ touches the x -axis at only one point, 3. Thus, both roots of the equation are $x = 3$. Calculating the discriminant, $(b^2 - 4ac) = (36 - 4 \cdot 9) = 0$, which indicates that the roots are real and equal. Check the graph of this equation (fig. 22); it will be seen that the curve just touches the x -axis at one point. Thus, the root $x = 3$ must be counted twice and may be called a double root.
- (4) The equation $f(x) = x^2 - 6x + 12$ has a discriminant equal to $(36 - 4 \cdot 12)$ or -12 . Solving for the roots of this equation,

$$x = \frac{6 \pm \sqrt{-12}}{2} = 3 \pm \sqrt{-3}.$$

This is imaginary, but the meaning becomes apparent when the graph of the function of the equation is inspected. The plot does not cross the x -axis and, therefore, both roots must be imaginary.

d. Minimum Value of a Quadratic.

- (1) The minimum value of a quadratic function will occur at $x = \frac{-b}{2a}$ when



$f(x) = x^2 - 6x + 5$									
x	-1	0	1	2	3	4	5	6	7
f(x)	12	5	0	-3	-4	-3	0	5	12

$f(x) = x^2 - 6x + 8$									
x	-1	0	1	2	3	4	5	6	7
f(x)	15	8	3	0	-1	0	3	8	15

$f(x) = x^2 - 6x + 9$									
x	-1	0	1	2	3	4	5	6	7
f(x)	16	9	4	1	0	-1	4	9	16

$f(x) = x^2 - 6x + 12$									
x	-1	0	1	2	3	4	5	6	7
f(x)	19	12	7	4	3	4	7	12	19

TM684-28

Figure 22. Properties of functions.

the general quadratic equation $ax^2 + bx + c = y$ (par. 91) defines the coefficients a and b . This relation can be checked by calculating the value of x at which the minimum value of the function $x^2 - 6x + 5$ occurs and comparing this calculated value with the plot of the equation (fig. 21 or 22). Thus,

$$x = \frac{-b}{2a} = -\frac{(-6)}{2(1)} = \frac{6}{2} = 3,$$

and the minimum value of the function $x^2 - 6x + 5$ occurs at $x = 3$. Checking the graph verifies this statement. The minimum value of the functions $x^2 - 6x + 8$, $x^2 - 6x + 9$, and $x^2 - 6x + 12$ also occurs at $x = 3$.

- (2) To find the value of the function at the minimum point, substitute for x . The minimum occurs at $x = \frac{-b}{2a}$;

therefore, substitute $\frac{-b}{2a}$ for x in the function of the general quadratic equation.

$$\begin{aligned} f(x) &= ax^2 + bx + c \\ &= a\left(\frac{-b}{2a}\right)^2 + b\left(\frac{-b}{2a}\right) + c \\ &= \frac{b^2}{4a} - \frac{b^2}{2a} + c = \frac{b^2}{4a} - \frac{2b^2}{4a} + c \\ &= \frac{-b^2}{4a} + c \end{aligned}$$

Thus, to find the value of the function $f(x) = x^2 - 6x + 5$ at the minimum point:

$$\begin{aligned} f(x) &= \frac{-b^2}{4a} + c = \frac{-36}{4} + 5 = \\ &= -9 + 5 = -4 \end{aligned}$$

This method can be used to find the minimum value of the function if the value of x at which the minimum occurs is *not* known. However if it is known that the minimum value occurs at $x = 3$, merely substitute this value for x in the original equation.

$$\begin{aligned} f(x) &= x^2 - 6x + 5 \\ &= 9 - 6 \cdot 3 + 5 \\ &= 14 - 18 \\ f(x) \text{ min} &= -4 \end{aligned}$$

- (3) Note that in all cases where the word *minimum* is used, the word *maximum* is applicable if the equation $y = f(x)$ is such that its graph has a maximum instead of a minimum. If the equation were $f(x) = 3 + 6x - x^2$, the minus sign preceding the term x^2 would indicate that the curve has a maximum.

e. Practical Application. The methods of analysis presented in *c* and *d* above can be used for some very important relationships in applied electricity and electronics. It may be used, for example, to find the load resistance of a circuit in terms of the circuit components necessary to obtain maximum power transfer (par. 216).

103. Review Problems—Graphs

a. Plot the graphs of the following linear equations:

- (1) $2x - 5 = y$
- (2) $5 - 2x = y$
- (3) $y = 5x$
- (4) $3x + 2y = 18$
- (5) $5x - 5y = 20$
- (6) $3x + y + 14 = 0$

b. Plot the graphs of the following sets of simultaneous equations:

- (1) $2x + 3y = 12$
 $3x - y = 7$
- (2) $x + y = 9$
 $5x + y = 17$
- (3) $x + 5y = 22$
 $3x - 2y = -2$
- (4) $3x - 2y = 0$
 $x - 5y = 13$
- (5) $6x + 2y = 12$
 $4y + 2y = 10$
- (6) $x - 2y = 0$
 $y = 1 + x$

c. Find the roots of the following quadratic equations to the nearest tenth by plotting their graphs:

- (1) $y^2 - 2y - 2 = 0$
- (2) $x^2 - 1 + x = 0$
- (3) $9 - t^2$
- (4) $x^2 - 2x + 2 = 0$
- (5) $x^2 - 5x + 3 = 0$
- (6) $10 - 3x - x^2 = 0$

CHAPTER 7

POWERS OF 10

104. General

The technique of using powers of 10 can greatly simplify mathematical calculations. A number containing many zeros to the right or to the left of the decimal point can be dealt with much more readily when put in the form of powers of 10. For example, $.0000037 \times .000021$ can be handled more easily when put in the form $3.7 \times 10^{-6} \times 2.1 \times 10^{-5}$.

105. Table of Powers of 10

The table below gives some of the values of the powers of 10. In a whole number, the exponent is positive and equals the number of zeros following the 1; in decimals, the exponent is negative and equals one more than the number of zeros immediately following the decimal point.

Number	Power of 10	Number	Power of 10
.000001	10^{-6}	1	10^0
.00001	10^{-5}	10	10^1
.0001	10^{-4}	100	10^2
.001	10^{-3}	1,000	10^3
.01	10^{-2}	10,000	10^4
.1	10^{-1}	100,000	10^5
		1,000,000	10^6

106. Expressing Numbers in Scientific Notation

Any number written as the product of an integral power of 10 and a number between 1 and 10 is said to be expressed in *scientific notation*.

Example 1: $81,000,000 = 8.1 \times 10,000,000 = 8.1 \times 10^7$

Example 2: $600,000,000 = 6 \times 100,000,000 = 6 \times 10^8$

Example 3: $.000,000,000,9 = 9 \times .000,000,000,1 = 9 \times 10^{-10}$

107. Addition and Subtraction of Numbers in Scientific Notation

Numbers expressed in scientific notation can only be added or subtracted if the powers of 10 are the same. For example, 3×10^5 can be added to 2×10^5 to get 5×10^5 ; however, 3×10^5 cannot be added to 2×10^6 because the powers of 10 are not the same. The number 3×10^5 can be changed to 30×10^4 , however, and it can then be added to 2×10^5 to obtain 32×10^4 . The answers to problems solved by using scientific notation can be left in the exponential form. In the examples below, however, the answers are converted to the decimal form to aid in understanding this technique.

Example 1: Add 450,000 and 763,000.

$$\begin{aligned} 450,000 + 763,000 &= 45 \times 10^4 + 76.3 \times 10^4 \\ &= 121.3 \times 10^4 \\ &= 1,213,000 \end{aligned}$$

Example 2: Add .000,068,25 and .000,007,54.

$$\begin{aligned} .000,068,25 + .000,007,54 &= 6825 \times 10^{-8} + 754 \times 10^{-8} \\ &= 7579 \times 10^{-8} \\ &= .000,075,79 \end{aligned}$$

Example 3: Subtract .000,004,33 from .000,05.

$$\begin{aligned} .000,05 - .000,004,33 &= 5000 \times 10^{-8} - 433 \times 10^{-8} \\ &= 4567 \times 10^{-8} \\ &= .000,045,67 \end{aligned}$$

108. Multiplication of Numbers in Scientific Notation

The general rules covering the multiplication of radicals (par. 74) also apply in the multiplication of numbers that are expressed in scientific notation.

Example 1: Multiply 100,000 by 1,000.

$$100,000 \times 1,000 = 10^5 \times 10^3 = 10^{5+3} = 10^8 = 100,000,000$$

Example 2: Multiply 25,000 by 5,000.

$$\begin{aligned} 25,000 \times 5,000 &= 2.5 \times 10^4 \times 5 \times 10^3 = 2.5 \times 5 \times 10^{4+3} \\ &= 12.5 \times 10^7 \\ &= 125,000,000 \end{aligned}$$

Example 3: Multiply 1,800, .000015, 300, and .0048.

$$\begin{aligned} 1,800 \times .000015 \times 300 \times .0048 \\ &= 1.8 \times 10^3 \times 1.5 \times 10^{-5} \times 3 \times 10^2 \times 4.8 \times 10^{-3} \\ &= 1.8 \times 1.5 \times 3 \times 4.8 \times 10^{3-5+2-3} \\ &= 38.88 \times 10^{-3} \\ &= .03888 \end{aligned}$$

109. Division of Numbers in Scientific Notation

The general rules covering the division of radicals (par. 75) also apply in the division of numbers that are expressed in scientific notation.

Example 1: Divide 75,000 by .0005.

$$\frac{75,000}{.0005} = \frac{75 \times 10^3}{5 \times 10^{-4}} = \frac{75}{5} \times 10^{3+4} = 15 \times 10^7 = 150,000,000$$

Example 2: Divide 14,400,000 by 1,200,000.

$$\frac{14,400,000}{1,200,000} = \frac{144 \times 10^5}{12 \times 10^5} = \frac{144}{12} = 12$$

Example 3: Divide 98,100 by .0025, 180, and 1,090,000.

$$\begin{aligned} &\frac{98,100}{.0025 \times 180 \times 1,090,000} \\ &= \frac{9.81 \times 10^4}{2.5 \times 10^{-3} \times 1.8 \times 10^2 \times 1.09 \times 10^6} \\ &= \frac{9.81 \times 10^4}{2.5 \times 1.8 \times 1.09 \times 10^{-3+2+6}} \\ &= \frac{9.81 \times 10^4}{4.905 \times 10^5} \\ &= 2 \times 10^{-1} \\ &= .2 \end{aligned}$$

110. Finding the Power or Root of a Number in Scientific Notation

The general rules covering powers and roots (pars. 71 and 72) also apply to numbers expressed in scientific notation.

Example 1: Find the square root of 144,000,000.

$$\begin{aligned} \sqrt{144,000,000} &= \sqrt{144 \times 10^6} \\ &= 12 \times 10^3 \\ &= 12,000 \end{aligned}$$

Example 2: Find the cube root of .000,008.

$$\begin{aligned}\sqrt[3]{.000,008} &= \sqrt[3]{8 \times 10^{-6}} \\ &= 2 \times 10^{-2} \\ &= .02\end{aligned}$$

Example 3: Square 15,000.

$$\begin{aligned}(15,000)^2 &= (15 \times 10^3)^2 \\ &= 225 \times 10^6 \\ &= 225,000,000\end{aligned}$$

Example 4: Find the square root of (160,000)³.

$$\begin{aligned}\sqrt[2]{160,000^3} &= (160,000)^{3/2} \\ &= (16 \times 10^4)^{3/2} \\ &= 64 \times 10^6 \\ &= 64,000,000\end{aligned}$$

Example 5: Find the square root of $\frac{86,900}{3,560,000}$.

$$\begin{aligned}\sqrt{\frac{86,900}{3,560,000}} &= \sqrt{\frac{8.69 \times 10^4}{3.56 \times 10^6}} \\ &= \sqrt{2.44 \times 10^{-2}} \\ &= 1.56 \times 10^{-1} \\ &= .156\end{aligned}$$

111. Review Problems—Powers of 10

In the following problems, leave the answer in powers of ten:

a. Convert the following numbers to powers of 10 and add:

- (1) 1,245,000 + 368,000
- (2) 79,000 + 421,000
- (3) .000,007,66 + .000,054

b. Convert the following numbers to powers of 10 and subtract:

- (1) 333,400 — 22,500
- (2) .000,068 — .000,049
- (3) .000,004,89 — .000,000,398

c. Convert the following numbers to powers of 10 and multiply:

- (1) 446,000 × 200

(2) $7,700 \times .003,2$

(3) $.000,096 \times .000,33$

(4) $.003,66 \times 4,000,000$

d. Convert the following numbers to powers of 10 and divide:

- (1) $668,000 \div 4,000$
- (2) $88,445,000 \div .000,55$
- (3) $.000,963 \div .000,009$
- (4) $.006,93 \div 21$

e. Convert the following numbers to powers of 10 and perform the indicated operations:

- (1) $\sqrt[3]{64,000,000}$
- (2) $\sqrt[3]{.000,169}$
- (3) $.003^3$
- (4) $27,000^{2/3}$

CHAPTER 8 LOGARITHMS

112. General

Many lengthy mathematical operations may be accomplished more easily through the use of logarithms. With logarithms (also called logs), multiplication of numbers is reduced to a simple process of addition, division becomes a process of subtraction, raising a number to a power becomes simple multiplication, and extraction of roots is done by simple division.

113. Definition

The logarithm of a given number is the power to which another number (called the base) must be raised to equal the given number. The word "logarithm" has the same meaning as the word "exponent."

Example: Find the logarithm of 1,000 to the base 10.

From the definition, the logarithm of a number (1,000) is the power (x) to which another number called the base (10) must be raised to equal the given number (1,000).

Thus, $10^x = 1,000$. Since $10^3 = 1,000$, then:

$10^x = 10^3$ and by inspection:

$$x = 3$$

Therefore, the logarithm of 1,000 to the base 10 equals 3 or $\log_{10} 1,000 = 3$.

114. Types of Logarithms

a. Common Logarithms. Common logarithms use the number 10 as a base. They are so universally used that the 10 usually is omitted; the answer in paragraph 113 could be $\log 1,000 = 3$. Some values of common logarithms are included in the table below. The common logarithm of any number between

these values consists of the logarithm of the smaller number plus a decimal. For example, the log of a number between 100 and 1,000, such as 157, consists of the log of the smaller number (10) plus a decimal. The log of 157 is 2.1959.

$\log 1 = 0$	$\log .1 = -1$
$\log 10 = 1$	$\log .01 = -2$
$\log 100 = 2$	$\log .001 = -3$
$\log 1,000 = 3$	$\log .0001 = -4$
$\log 10,000 = 4$	

b. Natural Logarithms. Natural logarithms are based upon the irrational number e , and are written both as \log_e and \ln . Natural logarithms are used in special applications and as such are not explained further in this text.

115. Parts of Logarithms

a. Logarithms are divided into two parts, the integral and the decimal. The integral part is known as the characteristic, and the decimal part is called the mantissa.

(1) *The characteristic of any number is one less than the number of digits to the left of the decimal point. Thus, the characteristic for the number 3 is 1 — 1 or zero, since there is one number to the left of the decimal point. The characteristic for 30, with two numbers to the left of the decimal point, is 2 — 1 or 1. Similarly, the characteristic for 300 is 2, and the characteristic for 3,000 is 3. The characteristic of the log of a decimal is negative and is based upon the position of the first rational number to the right of the decimal point. If there are no numbers to the left of the decimal point, the characteristic is negative. In the number .327, for example, the first*

rational number is in the first decimal place and the characteristic is -1 ; in the number .03, the first rational number is in the second decimal place and the characteristic is -2 . Similarly, the characteristic for .003 is -3 , and the characteristic for .0003 is -4 .

- (2) The mantissa is always the same for a given sequence of integers, regardless of where the decimal point appears among them. Thus, the *mantissa* is the same for 1570, 157, 15.7, 1.57, .157, and .0157, and the logs of these numbers differ only in respect to their characteristics. Their logarithms, respectively, are 3.1959, 2.1959, 1.1959, 0.1959, -1.1959 and -2.1959 .

b. The mantissa is always positive—even when the characteristic is negative. This fact poses a problem of notation, and also complicates the addition and subtraction of logarithms.

- (1) In the notation of logarithms, to say that $\log .157$ is -1.1959 is not strictly true, for what we mean to say is -1 plus .1959. To overcome this problem, the minus sign is generally written above the characteristic, and is made long enough to cover the entire negative portion of the logarithm. More properly, therefore, $\log .157$ is written $\bar{1}.1959$.
- (2) In the addition and subtraction of logarithms, the complication can be removed by expressing the negative characteristic in a positive manner; more precisely, by adding a large enough number to the characteristic and by subtracting the same number from the entire logarithm. Thus, the log of .157 is written $9.1959-10$, and the log of .0157 is written $8.1959-10$.

116. Finding a Logarithm

A table of common logarithms is given in appendix III. Note, however, that the table contains only the mantissas of logarithms. The characteristic must be obtained, in each in-

stance, by following the rules given in paragraph 115a(1).

Example 1: Find the logarithm of 333.

Determine the characteristic of 333. The characteristic is $3 - 1$, or 2.

Determine the mantissa of 333.

In the table of common logarithms, look down the N column for the number 33. The mantissa for 333 is in this horizontal row in the column headed by the number 3. The mantissa is .5224.

$\log 333 = 2.5224$.

Example 2: Find the logarithm of .127.

Determine the characteristic of .127. The characteristic is -1 or 9. ----- -10 .

Determine the mantissa of .127.

In the table of common logarithms, look down the N column for 12. The mantissa for 127 is in this horizontal row in the column headed by the number 7. The mantissa is .1038.

$\log .127 = 9.1038-10$.

117. Logarithmic Interpolation

The table of common logarithms given in appendix III is adequate if the given number has three or less integers. If it has four or more integers, however, it is necessary to interpolate—that is, to find the proportional part of the difference between the logarithms shown in the table.

Example 1: Find the logarithm of 2.369.

Step 1. The characteristic of 2.369 is 0. Since the mantissa for this number cannot be found in the table, it is necessary to interpolate. Look for the mantissas of the numbers next lower and higher than 2369. The mantissa of the number 2360 is .3729 and the mantissa of the number 2370 is .3747. Since 2369 lies between 2360 and 2370, the mantissa of

2369 must lie between .3729 and .3747. This may be written:

$$\begin{aligned}\log 2360 &= .3729 \\ \log 2369 &= .3729 + x \\ \log 2370 &= .3747\end{aligned}$$

Step 2. Set up the proportions. The difference between 2369 and 2360 is 9. The difference between 2370 and 2360 is 10. Therefore, the desired mantissa is $\frac{9}{10}$ of the difference between these two. Let the difference between the mantissa of 2369 and 2360 equal x . The difference between .3747 and .3729 is .0018. The proportion is $\frac{x}{.0018}$.

Step 3. Solve the problem.

$$\begin{aligned}\frac{9}{10} &= \frac{x}{.0018} \\ 10x &= .0162 \\ x &= .0016\end{aligned}$$

Step 4. Since the value of x is .0016, the mantissa of 2369 is .3729 + .0016 or .3745. Therefore, $\log 2369 = 0.3745$.

Example 2: Find the logarithm of .017234.

Step 1. The characteristic of .017234 is -2 or 8. ----- -10. The numbers in the table lower and higher than 17234 are 17200 and 17300. The mantissa of 17200 is .2355; the mantissa of 17300 is .2380. The difference between 17234 and 17200 is 34; the difference between 17300 and 17200 is 100; the difference between .2380 and .2355 is .0025. This may be written:

$$\begin{aligned}\log 17200 &= .2355 \\ \log 17234 &= .2355 + x \\ \log 17300 &= .2380\end{aligned}$$

Step 2. Let the difference between the mantissas of 17234 and 17200 equal x . The equation is as follows:

$$\begin{aligned}\frac{34}{100} &= \frac{x}{.0025} \\ 100x &= .0850 \\ x &= .00085 = .0009\end{aligned}$$

Step 3. Since the value of x is .0009, the mantissa of 17234 is .2355 + .0009 or .2364. Therefore, $\log .017234 = 8.2364-10$.

118. Reading Antilogarithms

The process of finding the antilogarithm (also called antilog), consists of determining the number from which the logarithm was derived. This process is essentially the reverse of finding the logarithm (par. 116). Consequently, the location of the decimal point is determined from the characteristic, and the numerical value of the number is determined from the mantissa.

Example 1: Find the antilog of 1.8954.

Step 1. Since the characteristic of the logarithm is 1, there will be two digits to the left of the decimal point in the number.

Step 2. Look in the table for the mantissa, .8954. The number given for .8954 is 786.

Step 3. Count off two digits from the left and insert the decimal point. The antilog of 1.8954 is 78.6.

Example 2: Find the antilog of 7.0828-10.

Step 1. Since the characteristic of the logarithm is -3, the first significant figure will be in the third decimal place.

Step 2. Look for the mantissa .0828 in the table. The number given for .0828 is 121.

Step 3. Add two zeros to the right of the decimal point and before the first significant figure. Thus, the antilog of 7.0828-10 is .0021.

119. Antilogarithmic Interpolation

If the mantissa of a logarithm does not appear in the table, it is necessary to interpolate.

Example 1: Find the antilog of 2.7654.

Step 1. Since the characteristic of the logarithm is 2, there will be three digits to the left of the decimal point in the number.

Step 2. The mantissa in the table lower than .7654 is .7649. The num-

ber with .7649 as a mantissa is 582.

Step 3. The mantissa higher than .7654 is .7657. The number with .7657 as a mantissa is 583.

Step 4. Set up the proportions. The difference between .7654 and .7649 is .0005; the difference between .7657 and .7649 is .0008. The proportional difference is $\frac{.0005}{.0008}$

or $\frac{5}{8}$. The difference between 583 and 582 is 1. This can be written:

$$\begin{aligned}\text{antilog } .7649 &= 582 \\ \text{antilog } .7654 &= 582 + x \\ \text{antilog } .7657 &= 583\end{aligned}$$

Step 5. Let x equal the difference between the number represented by the mantissa .7654 and the number 582. The equation is as follows:

$$\begin{aligned}\frac{5}{8} &= \frac{x}{1} \\ 8x &= 5 \\ x &= .625\end{aligned}$$

Step 6. The number is $582 + .625$. Since there are three digits to the left of the decimal point, the antilog of 2.7654 is 582.625.

Example 2: Find the antilog of 6.7166—10.

Step 1. Since the characteristic of the logarithm is —4, the first rational number will be in the fourth decimal place.

Step 2. The mantissa in the table lower than .8166 is .8162; the number with .8162 as a mantissa is 655.

Step 3. The mantissa in the table higher than .8166 is .8169; the number with .8169 as a mantissa is 656.

Step 4. The difference between .8162 and .8166 is .0004; the difference between .8169 and .8162 is .0007. The proportional difference is $\frac{.0004}{.0007}$ or $\frac{4}{7}$. The difference between 656 and 655 is 1. This may be written:

$$\begin{aligned}\text{antilog } .8162 &= 655 \\ \text{antilog } .8166 &= 655 + x \\ \text{antilog } .8169 &= 656\end{aligned}$$

Step 5. Let x equal the difference between the number represented by the mantissa .8166 and the number 655. The equation is as follows:

$$\begin{aligned}\frac{4}{7} &= \frac{x}{1} \\ 7x &= 4 \\ x &= .57\end{aligned}$$

Step 6. The number is $655 + .57$. Since the first rational figure is in the fourth decimal place, the antilog of 6.7166—10 is .00065557.

120. Addition and Subtraction of Logarithms

Logarithms are added and subtracted arithmetically. Since every mantissa is positive (par. 115*b*), however, every negative characteristic should be expressed as a positive (par. 115*b*).

Example 1: Add the logarithms 3.7493 and 2.4036.

$$\begin{array}{r} 3.7493 \\ + 2.4036 \\ \hline 6.1529 \end{array}$$

Example 2: Add the logarithms 3.4287 and 6.3982.

$$\begin{array}{r} 3.4287 \\ + 4.3982-10 \\ \hline 7.8269-10 \end{array}$$

Example 3: Add the logarithms 8.9324—10, 7.2812—10, 5.4138—10, and 9.9918—10.

$$\begin{array}{r} 8.9324-10 \\ 7.2812-10 \\ 5.4138-10 \\ + 9.9918-10 \\ \hline 31.6192-40 \\ - (30 \quad -30) \\ \hline 1.6192-10 \end{array}$$

Example 4: Subtract the logarithm 9.1245 from the logarithm 6.3058.

To subtract a larger logarithm from a smaller logarithm, add 10 or a multiple of 10 to the smaller logarithm, and subtract the same number from the loga-

rithm by writing that number with a minus sign to the right of the logarithm. The number chosen for this purpose should be the least that will cause the smaller logarithm to exceed the larger.

$$\begin{array}{r} 16.3058-10 \\ - 9.1245 \\ \hline 7.1813-10 \end{array}$$

Example 5: Subtract the logarithm 3.7980—10 from 2.8686. When subtracting a negative logarithm from a positive logarithm, where that part of the characteristic of the negative logarithm to the left of the mantissa is larger than the characteristic of the positive logarithm, add 10 or a multiple of 10 to the characteristic of the positive logarithm, and subtract that same amount from the right of the positive logarithm.

$$\begin{array}{r} 12.8686-10 \\ 3.7980-10 \\ \hline 9.0706 \end{array}$$

121. Multiplication by Use of Logarithms

The logarithm of the product of two numbers is equal to the sum of the logarithms of the numbers. Thus, $\log (2 \times 6) = \log 2 + \log 6$; and $\log (12 \times 8) = \log 12 + \log 8$.

Example 1: Multiply 68.2 by 40.8 by using logarithms.

$$\begin{aligned} \log (68.2 \times 40.8) &= \log 68.2 + \log 40.8 \\ \log 68.2 &= 1.8338 \\ \log 40.8 &= 1.6107 \\ \log (68.2 \times 40.8) &= 3.4445 \\ \text{antilog } .4440 &= 278 \\ \text{antilog } .4445 &= 278 + x \\ \text{antilog } .4455 &= 279 \\ \frac{5}{15} &= \frac{x}{1} \\ 15x &= 5 \\ x &= .33 \\ \text{antilog } .4445 &= 2783 \\ 68.2 \times 40.8 &= 2,783 \end{aligned}$$

Example 2: Find the product of 2.11 and 41.3 by using logarithms.

$$\begin{aligned} \log (2.11 \times 41.3) &= \log 2.11 + \log 41.3 \\ \log 2.11 &= 0.3243 \\ \log 41.3 &= 1.6160 \\ \log (2.11 \times 41.3) &= 1.9403 \\ \text{antilog } .9400 &= 871 \\ \text{antilog } .9403 &= 871 + x \\ \text{antilog } .9405 &= 872 \\ \frac{3}{5} &= \frac{x}{1} \\ 5x &= 3 \\ x &= .6 \\ \text{antilog } 1.9403 &= 87.16 \\ 2.11 \times 41.3 &= 87.16 \end{aligned}$$

122. Division by Use of Logarithms

The logarithm of the quotient of two numbers is equal to the difference between the logarithms of the numbers. Thus, $\log (75 \div 329) = \log 75 - \log 329$, and $\log (8 \div 2) = \log 8 - \log 2$.

Example 1: Divide 785 by 329 by using logarithms.

$$\begin{aligned} \log (785 \div 329) &= \log 785 - \log 329 \\ \log 785 &= 2.8949 \\ \log 329 &= 2.5172 \\ \log (785 \div 329) &= 0.3777 \\ \text{antilog } .3766 &= 238 \\ \text{antilog } .3777 &= 238 + x \\ \text{antilog } .3784 &= 239 \\ \frac{11}{18} &= \frac{x}{1} \\ 18x &= 11 \\ x &= .611 \\ \text{antilog } 0.3777 &= 2.386 \\ 785 \div 329 &= 2.386 \end{aligned}$$

Example 2: Find the value of $\frac{3}{7}$ by using logarithms.

$$\begin{aligned} \log \frac{3}{7} &= \log 3 - \log 7 \\ \log 3 &= 0.4771 \\ \log 7 &= 0.8451 \end{aligned}$$

Since the logarithm of 7 is greater than the logarithm of 3, it is necessary to add 10. -----
—10 to the logarithm of 3 before subtracting the logarithm of 7.

$$\begin{aligned} \log 3 &= 10.4771-10 \\ \log 7 &= 0.8451 \\ \hline \log (3 \div 7) &= 9.6320-10 \\ \text{antilog } .6314 &= 428 \\ \text{antilog } .6320 &= 428 + x \\ \text{antilog } .6325 &= 429 \end{aligned}$$

$$\begin{aligned} \frac{6}{11} &= \frac{x}{1} \\ 11x &= 6 \\ x &= .55 \\ \text{antilog } 9.6320-10 &= .42855 \\ 3 \div 7 &= .42855 \end{aligned}$$

123. Finding the Power of a Number by Logarithms

The logarithm of a number raised to a power is equal to the logarithm of the number multiplied by the power.

Example 1: Evaluate $(18.7)^3$.

$$\begin{aligned} \log (18.7)^3 &= 3 \log 18.7 \\ &= 3 \times 1.2718 \\ &= 3.8154 \\ \text{antilog } .8149 &= 653 \\ \text{antilog } .8154 &= 653 + x \\ \text{antilog } .8156 &= 654 \\ \frac{5}{7} &= \frac{x}{1} \\ 7x &= 5 \\ x &= .7 \\ \text{antilog } 3.8154 &= 6537 \\ (18.7)^3 &= 6,537 \end{aligned}$$

Example 2: Evaluate $(.03625)^4$.

$$\begin{aligned} \log (.03625)^4 &= 4 \log .03625 \\ \log 3620 &= .5587 \\ \log 3625 &= .5587 + x \\ \log 3630 &= .5599 \\ \frac{5}{10} &= \frac{x}{.0012} \\ x &= .0006 \\ \log (.03625)^4 &= 4 (8.5593-10) \\ &= 34.2372-40 \\ \text{(Subtract)} & \quad \underline{30.0000-30} \\ &= 4.2372-10 \\ \text{antilog } .2355 &= 172 \\ \text{antilog } .2372 &= 172 + x \\ \text{antilog } .2380 &= 173 \\ \frac{17}{25} &= \frac{x}{1} \\ 25x &= 17 \\ x &= .68 = .7 \end{aligned}$$

$$\begin{aligned} \text{antilog } 4.2372-10 &= .00001727 \\ (.03625)^4 &= .00001727 \end{aligned}$$

Example 3: Evaluate $(2.13)^{\frac{1}{3}}$.

$$\begin{aligned} \log (2.13)^{\frac{1}{3}} &= \frac{1}{3} \log 2.13 \\ &= \frac{1}{3} \times 0.3284 \\ &= 0.2189 \\ \text{antilog } .2175 &= 165 \\ \text{antilog } .2189 &= 165 + x \\ \text{antilog } .2201 &= 166 \\ \frac{14}{26} &= \frac{x}{1} \\ 26x &= 14 \\ x &= .5 \\ \text{antilog } 0.2189 &= 1.655 \\ (2.13)^{\frac{1}{3}} &= 1.655 \end{aligned}$$

124. Finding the Root of a Number by Logarithms

The logarithm of the root of a number is equal to the logarithm of the number divided by the root.

Example 1: Evaluate $\sqrt[4]{34987}$.

$$\begin{aligned} \log \sqrt[4]{34987} &= \frac{\log 34987}{4} \\ \log 34900 &= .5428 \\ \log 34987 &= .5428 + x \\ \log 35000 &= .5441 \\ \frac{87}{100} &= \frac{x}{.0013} \\ 100x &= .1131 \\ x &= .0011 \\ &= \frac{4.5439}{4} \\ &= 1.135975 = 1.1360 \\ \text{antilog } .1335 &= 136 \\ \text{antilog } .1360 &= 136 + x \\ \text{antilog } .1367 &= 137 \\ \frac{25}{32} &= \frac{x}{1} \\ 32x &= 25 \\ x &= .78 \\ \text{antilog } 1.1360 &= 13.678 \\ \sqrt[4]{34987} &= 13.678 \end{aligned}$$

Example 2: Evaluate $\sqrt[3]{76.24}$.

$$\begin{aligned} \log \sqrt[3]{76.24} &= \frac{\log 76.24}{3} \\ \log 7620 &= .8820 \\ \log 7624 &= .8820 + x \\ \log 7630 &= .8825 \\ \frac{4}{10} &= \frac{x}{.0005} \end{aligned}$$

$$\begin{aligned}
 10x &= .0020 \\
 x &= .0002 \\
 &= \frac{1.8822}{3} \\
 &= 0.6274
 \end{aligned}$$

$$\begin{aligned}
 \text{antilog } 0.6274 &= 4.24 \\
 \sqrt[3]{76.24} &= 4.24
 \end{aligned}$$

Example 3: Evaluate $\sqrt[3]{.0073573}$.

$$\begin{aligned}
 \log \sqrt[3]{.0073573} &= \frac{\log .0073573}{3} \\
 \log 73500 &= .8663 \\
 \log 73573 &= .8663 + x \\
 \log 73600 &= .8669 \\
 \frac{73}{100} &= \frac{x}{.0006} \\
 100x &= .0438 \\
 x &= .0004 \\
 &= \frac{7.8667-10}{3}
 \end{aligned}$$

The quotient of 7.8667—10 divided by 3 is 2.6222—3 $\frac{1}{2}$. By adding 20.0000—20 to 7.8667—10, the sum, 27.8667—30, can be divided by 3 and the quotient will be a workable logarithm.

$$\begin{array}{r}
 \log .0073573 = 7.8667-10 \\
 \text{add } 20.0000-20 \\
 \hline
 27.8667-30
 \end{array}$$

$$\frac{27.8667-30}{3} = 9.2889-10$$

$$\begin{aligned}
 \text{antilog } .2878 &= 194 \\
 \text{antilog } .2889 &= 194 + x \\
 \text{antilog } .2900 &= 195
 \end{aligned}$$

$$\frac{11}{22} = \frac{x}{1}$$

$$22x = 11$$

$$x = .5$$

$$\text{antilog } 9.2889-10 = .1945$$

$$\sqrt[3]{.0073573} = .1945$$

125. Cologarithms

The *cologarithms* of a number is the logarithm of the reciprocal of the number. For example, $\text{colog } N = \log \frac{1}{N}$. However,

$$\begin{aligned}
 \log \frac{1}{N} &= \log 1 - \log N \\
 &= 0 - \log N
 \end{aligned}$$

$$\log \frac{1}{N} = -\log N$$

Therefore, $\text{colog } N = \log \frac{1}{N} = -\log N$. Thus the cologarithm of a number is the logarithm of the number subtracted from the logarithm of 1 (0.0000 or, to avoid a negative mantissa, 10.0000—10).

Example 1: Evaluate the cologarithm of 373.

$$\text{colog } 373 = \log \frac{1}{373}$$

$$\log 1 = 10.0000-10$$

$$\log 373 = \underline{2.5717}$$

$$\text{colog } 373 = 7.4283-10$$

Example 2: Evaluate $\frac{2.37}{3.61}$.

$$\begin{aligned}
 \log \frac{2.37}{3.61} &= \log 2.37 - \log 3.61 \\
 &= \log 2.37 + \text{colog } 3.61
 \end{aligned}$$

$$\log 1 = 10.0000-10$$

$$\log 3.61 = \underline{0.5575}$$

$$\text{colog } 3.61 = \underline{9.4425-10}$$

$$\log 2.37 = \underline{0.3747}$$

$$\underline{9.8172-10}$$

$$\text{antilog } 9.8172-10 = .65643$$

126. Computation by Logarithms

In performing logarithmic computations, follow the principles given in paragraphs 117 through 125. When negative quantities are involved (in multiplication and division), disregard the minus sign when making logarithmic calculations. After calculating the antilog, the sign is determined in accordance with the algebraic law of signs for multiplication and division.

Example 1: Evaluate $\sqrt[3]{\frac{(94.7)^2 (.00789)}{(3.71)^3 (.345)}}$.

$$\begin{aligned} \log (94.7)^2 &= 2 \log 94.7 \\ &= 2 \times 1.9763 \\ &= 3.9526 \\ \log (.00789) &= \frac{7.8971-10}{1} \\ \log (94.7)^2 + \log (.00789) &= \frac{11.8497-10}{1} = 1.8497 \\ \log (3.71)^3 &= 3 \log 3.71 \\ &= 3 \times 0.5694 \\ &= 1.7082 \\ \log (.345) &= \frac{9.5378-10}{1} \\ \log (3.71)^3 + \log (.345) &= \frac{11.2460-10}{1} = 1.2460 \\ \log (94.7)^2 (.00789) &= 1.8497 \\ \log (3.71)^3 (.345) &= \frac{1.2460}{0.6037} \\ \log \sqrt[3]{\frac{(94.7)^2 (.00789)}{(3.71)^3 (.345)}} &= \frac{0.6037}{3} \\ &= .2012 \\ \text{antilog } .2012 &= 1.5892 \end{aligned}$$

Example 2: Evaluate $\sqrt[4]{\frac{(6.484)^2 \cdot \sqrt[3]{7.667}}{(12.35)^2 \cdot \sqrt[3]{3007}}}$.

$$\begin{aligned} \log (6.484)^2 &= 2 \log 6.484 \\ &= 2 \times 0.8118 \\ &= 1.6236 \\ \log \sqrt[3]{7.667} &= \frac{\log 7.667}{3} \\ &= \frac{0.8846}{3} \\ &= 0.2949 \\ \log (6.484)^2 + \log \sqrt[3]{7.667} &= 1.6236 + .2949 \\ &= 1.9185 \\ \log (12.35)^2 &= 2 \log 12.35 \\ &= 2 \times 1.0917 \\ &= 2.1834 \\ \log \sqrt[3]{3007} &= \frac{\log 3007}{3} \\ &= \frac{3.4782}{3} \\ &= 1.1594 \\ \log (12.35)^2 + \log \sqrt[3]{3007} &= 2.1834 + 1.1594 \\ &= 3.3428 \\ \log (6.484)^2 \sqrt[3]{7.667} &= 11.9185-10 \\ \log (12.35)^2 \sqrt[3]{3007} &= \frac{3.3428}{8.5757-10} \end{aligned}$$

$$\log \frac{\sqrt[4]{(6.484)^2 \sqrt[3]{7.667}}}{(12.35)^2 \sqrt[3]{3007}} = \frac{38.5757-40}{4}$$

$$= 9.6439-10$$

$$\text{antilog } 9.6439-10 = .4405$$

127. Review Problems—Logarithms

a. Find the logarithms of the following numbers to the base 10:

- (1) 785
- (2) 3.57
- (3) .0345
- (4) .000476
- (5) 49.6
- (6) 273.5
- (7) 760.1
- (8) 7.234
- (9) .009875
- (10) .00005254

b. Find the antilogs of the following logarithms:

- (1) 4.8457
- (2) 2.4330
- (3) 9.5453—10
- (4) 6.8299—10
- (5) 0.6010
- (6) 2.5690
- (7) 5.4343—10
- (8) 5.6994
- (9) 0.2018
- (10) 4.5372—10

c. Using logarithms, find the products of the following to four significant figures:

- (1) 6.93×23.7
- (2) 186×215
- (3) 64.3×21.4
- (4) $.089 \times .076$
- (5) 135×42.3

d. Using logarithms, find the quotients of the following to four significant figures:

- (1) $148 \div 297$
- (2) $\frac{251}{648}$

- (3) $14.9 \div 37.4$
- (4) $47.38 \div 63.29$
- (5) $\frac{1.06}{4.35}$

e. Using logarithms, evaluate the following:

- (1) $(.0293)^4$
- (2) $(1.756)^7$
- (3) $(7.953)^{\frac{1}{2}}$
- (4) $(69.37)^{.7}$
- (5) $(27.98)^{\frac{2}{3}}$
- (6) $\sqrt[3]{.01325}$
- (7) $\sqrt[4]{815}$
- (8) $\sqrt{7698}$
- (9) $\sqrt[3]{8.942}$
- (10) $\sqrt[4]{.000079911}$

f. Using logarithms, compute the following:

- (1) $\frac{3.8 \times 2.6}{4.3}$
- (2) $\sqrt[3]{\frac{.541 \times 47.3}{.0157}}$
- (3) $\frac{44.1 \times 1.82}{10.27 \times .32}$
- (4) $\frac{85.21 \times \sqrt[3]{4651}}{\sqrt{46.82} \times 6.230}$
- (5) $\left(\frac{31.21}{40.70}\right)^{\frac{2}{3}}$
- (6) $\sqrt[3]{\frac{(57.20)^{\frac{2}{3}}}{(31.42)^{\frac{2}{3}}}}$
- (7) $\sqrt{\frac{.08152 \times 1.953}{95.27}}$
- (8) $\sqrt{\frac{.8531}{9.327}} \times \sqrt[3]{\frac{518.2}{61.52}}$
- (9) $\frac{48.19 \times \sqrt{56.02}}{431.6 \times \sqrt[3]{46.25} \times \sqrt{16.34}}$
- (10) $\sqrt{\frac{.008150 \times .08532}{.01234 \times \sqrt[3]{.09156}}}$

CHAPTER 9 PLANE GEOMETRY

128. Introduction

Plane geometry is that part of geometry which deals with plane figures. In electronics, as in many other fields, it is necessary to know how to deal with areas of common plane figures. This chapter presents the formulas for finding the areas of triangles, quadrilaterals (plane figures having four sides and four angles), and circles. No effort has been made to cover the entire field of geometry. Only those principles and proofs are presented that are of value in practical work.

129. Definitions

a. *Lines.* A line has length, but no width or thickness. What is drawn on paper and called a line has thickness and breadth because of the material used to draw it—however, this mark only *represents* the actual line.

b. *Angles.* An angle, such as ABC in A, figure 23, is formed by the intersection of two lines. An angle, therefore, is the measure of the difference in direction of two straight lines that meet. The lines which form the angle, AB or BC , are called the *sides* of the angle, and the point of meeting, B , the vertex. The symbol \angle is used to indicate angles. Angles usually are measured in *degrees*. A complete circle or rotation consists of 360 degrees. The symbol $^\circ$ is used to indicate degrees; it is written to the right and slightly above the number. For example, 30 degrees is written 30° . Each degree consists of 60 *minutes*, and each minute is further broken down into 60 *seconds*. The symbol $'$ is used to indicate minutes; the symbol $''$ indicates seconds. For example, 20 minutes is written $20'$; 15 seconds is written $15''$.

- (1) When one straight line is *perpendicular* to another straight line, the angle formed is a right angle (90°) (B, fig. 23).

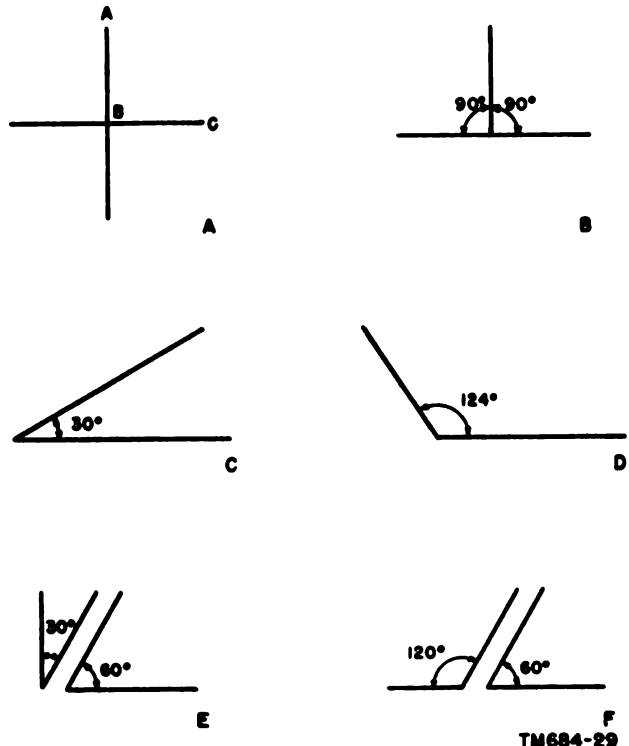


Figure 23. Angles.

- (2) Two right angles, added together, form a *straight angle*. A straight angle, therefore, is an angle of 180° .
- (3) Any angle less than a right angle is an *acute angle* (C, fig. 23).
- (4) Any angle greater than a right angle and less than 180° is an *obtuse angle* (D, fig. 23).
- (5) Two angles whose sum is one right angle are called *complementary angles* (E, fig. 23).
- (6) Two angles whose sum is a straight angle are called *supplementary angles* (F, fig. 23).

130. Basic Principles of Geometric Construction

a. *Reproducing Angles.* To draw an angle equal to a given angle BAC (fig. 24)—

- (1) Draw a line, $A'C'$.
- (2) With A as the center, use a compass to strike an arc that cuts the sides of the given angle at X and Y . Using the same radius, strike a similar arc, $X'Y'$, on the line, $A'C'$.
- (3) Measure the opening of the given angle by setting one point of the compass at Y and the other at X . With the compass at this distance and with Y' as the center, strike an arc as shown in figure 24. This will cut the first arc at point X' .
- (4) Draw a line, $A'B'$, through X' . The new angle, $B'A'C'$, is the same size as angle BAC .

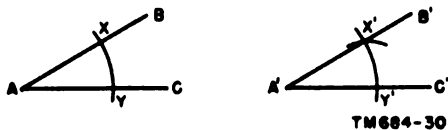


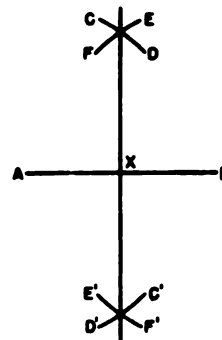
Figure 24. Reproducing an angle.

b. *Finding the Midpoint of a Straight Line Segment.* To find the midpoint of any straight line segment, such as AB in figure 25—

- (1) Use a radius greater than half the length of AB . Using point A as the center, draw arcs CD and $C'D'$. With point B as the center, and using the same radius, draw arcs EF and $E'F'$.
- (2) Draw a straight line to connect the points where the arcs intersect. Point X , where this line intersects AB , is the midpoint of straight line segment AB .

c. *Constructing a Perpendicular.* To construct a perpendicular to a straight line at a given point—

- (1) On the straight line, such as AB in figure 26, mark point P at which the perpendicular is to be constructed.
- (2) Set a compass for a radius less than the shorter of the two segments, AP

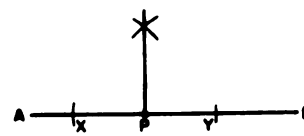


TM684-31

Figure 25. Bisecting a straight line segment.

or PB . With P as a center, draw arcs, cutting line AB at points X and Y .

- (3) Set the compass for a radius greater than PX . With X as a center, draw an arc above point P (fig. 26). Keep the compass at the same setting and, with Y as a center, draw another arc intersecting the one drawn with X as a center. (The two arcs may be drawn to intersect below point P instead of above.)
- (4) Draw a straight line from the point where the two arcs intersect to point P . The line is perpendicular to AB .
- (5) To construct the perpendicular bisector of a straight line segment, first find the midpoint of the line segment (b above), and construct the perpendicular at that point.

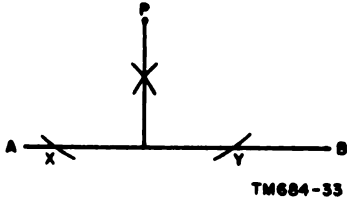


TM684-32

Figure 26. Constructing a perpendicular to a straight line at a point on the line.

d. *Constructing a Perpendicular to a Straight Line from a Point Not on the Line.* To draw a perpendicular to a straight line from a point outside the line, such as point P in figure 27—

- (1) With point P as the center, draw an arc cutting line AB at points X and Y .



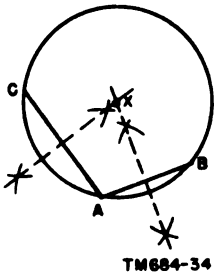
TM684-33

Figure 27. Constructing a perpendicular to a straight line from a point not on the line.

- (2) Using a radius greater than one-half the distance between X and Y and, with points X and Y as centers, draw arcs that intersect.
- (3) Draw a straight line from point P, through the point where the two arcs intersect, to line AB. The line is perpendicular to AB.

e. Finding the Center of a Circle.

- (1) Draw any two chords, such as AB and AC in figure 28.
- (2) Construct the perpendicular bisector of each chord (c above). Point X, where the two perpendicular bisectors meet, is the center of the circle.

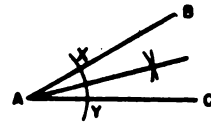


TM684-34

Figure 28. Finding the center of a circle.

f. Bisecting an Angle. Any angle, such as angle CAB in figure 29, can be divided into two equal angles. An angle, thus divided, is said to be bisected. To bisect an angle—

- (1) Using A as a center, draw an arc cutting the sides of angle CAB at X and Y.
- (2) With X and Y as centers, draw intersecting arcs.
- (3) Draw a straight line from A through the point where the arcs intersect. The line divides angles CAB into two



TM684-35

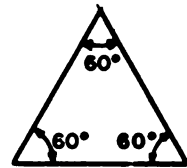
Figure 29. Bisecting an angle.

equal angles and is called the bisector of angle CAB.

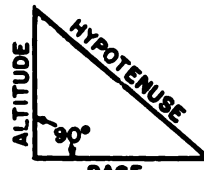
131. Triangles

a. General. A triangle is a plane figure bounded by three straight lines. There are several different kinds of triangles.

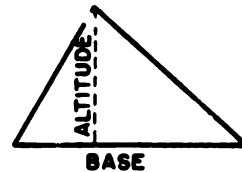
- (1) An equilateral triangle (A, fig. 30) has three equal sides and three equal angles; each angle equals 60° .
- (2) An isosceles triangle has two equal



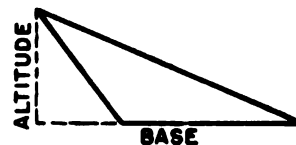
A



B



C



D

TM684-36

Figure 30. Triangles.

sides and two equal angles. The equal angles are opposite the equal sides.

- (3) A *right triangle* (B, fig. 30) has one right angle.
- (4) An *oblique triangle* (C and D, fig. 30) is one that does not contain a right angle. Thus, all except right triangles are oblique triangles.

b. Base. The base of a triangle is the side on which the triangle is supposed to stand. However, any side of a triangle may be used as the base.

c. Altitude. The altitude is the perpendicular line distance from the vertex of the triangle to the base or the base extended. In B, figure 30, the altitude of a right triangle is shown, in C, figure 30, the altitude of an acute triangle, and in D, figure 30, the altitude of an obtuse triangle. Note that in an obtuse triangle, it is necessary to extend the base of the triangle to find the altitude.

d. Area. The area of a triangle is the entire surface within the perimeter.

e. Hypotenuse. The side opposite the right angle of any right triangle is the hypotenuse (B, fig. 30).

132. Law of Angles of Any Triangle

The sum of the angles of any triangle is equal to 180° . When given any two of three angles of a triangle, the third angle can be found by subtracting the sum of the given angles from 180°

Example 1:

If two angles of a triangle are 90° and 45° , what is the size of the third angle?

$$90^\circ + 45^\circ = 135^\circ$$

$$180^\circ - 135^\circ = 45^\circ$$

Therefore, the third angle is 45° .

Example 2:

Angle A of triangle ABC is 100° ; angle B is 30° . What is the size of angle C?

$$\angle A + \angle B + \angle C = 180^\circ$$

$$\angle A = 100^\circ$$

$$\angle B = 30^\circ$$

$$\angle A + \angle B = 130^\circ$$

$$\angle C = 180^\circ - 130^\circ$$

$$\angle C = 50^\circ$$

133. Law of Right Triangles

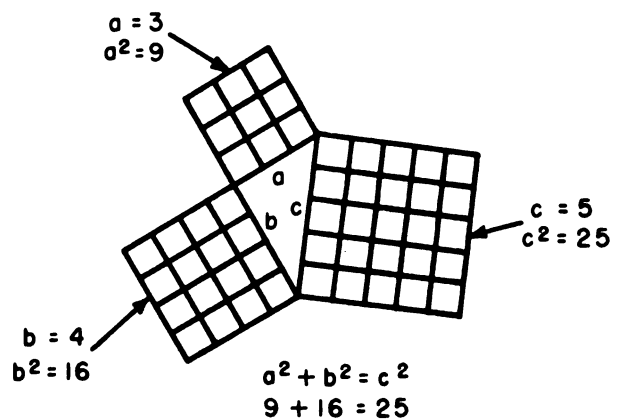
a. The Pythagorean Theorem. This theorem, which applies to any right triangle, states that *the square of the hypotenuse is equal to the sum of the squares of the other two sides*. The Pythagorean theorem is of prime importance in trigonometry (ch. 10) since the value of one side of a right triangle can be found if the other two sides are known. Thus, in figure 31:

$$c^2 = a^2 + b^2 \text{ or } 25 = 16 + 9$$

$$a^2 = c^2 - b^2 \text{ or } 16 = 25 - 9$$

$$b^2 = c^2 - a^2 \text{ or } 9 = 25 - 16$$

Example 1: Find the hypotenuse of a right triangle if the sides are 3 and 4 inches long, respectively.



TM684-37

Figure 31. The Pythagorean theorem.

$$\begin{aligned}
c^2 &= a^2 + b^2 \\
c^2 &= 9 + 16 \\
c^2 &= 25 \\
c &= \sqrt{25} \\
c &= 5 \text{ inches}
\end{aligned}$$

Example 2: The hypotenuse of a right triangle is 13 inches long and one side is 5 inches long. Find the length of the other side.

$$\begin{aligned}
c^2 &= a^2 + b^2 \\
13^2 &= 5^2 + b^2 \\
b^2 &= 169 - 25 \\
b^2 &= 144 \\
b &= \sqrt{144} \\
b &= 12 \text{ inches}
\end{aligned}$$

Example 3: Given the right triangle *ABC* (fig. 31), find *c* if *a* = 7 and

$$\begin{array}{r}
b = 6. \\
c^2 = a^2 + b^2 \\
c^2 = 49 + 36 \\
c^2 = 85 \\
c = \sqrt{85} \\
c = 9.22-
\end{array}
\begin{array}{r}
9. 2 2 \\
\sqrt{85.00\ 00} \\
\quad 81 \\
\quad \underline{400} \\
\quad \quad 364 \\
\quad \quad \underline{3600} \\
\quad \quad \quad 3684
\end{array}$$

Example 4: Given the right triangle *ABC* (fig. 31), find *b* if *a* = 9 and

$$\begin{array}{r}
c = 12. \\
b^2 = c^2 - a^2 \\
b^2 = 144 - 81 \\
b^2 = 63 \\
b = \sqrt{63} \\
b = 7.93+
\end{array}
\begin{array}{r}
7. 9 3 \\
\sqrt{63.00\ 00} \\
\quad 49 \\
\quad \underline{1400} \\
\quad \quad 1341 \\
\quad \quad \underline{5900} \\
\quad \quad \quad 4749
\end{array}$$

Example 5: Given the right triangle *ABC* (fig. 31), find *a* if *b* = 6 and

$$\begin{array}{r}
c = 13. \\
a^2 = c^2 - b^2 \\
a^2 = 169 - 36 \\
a^2 = 133 \\
a = \sqrt{133} \\
a = 11.53+
\end{array}
\begin{array}{r}
1\ 1. 5\ 3 \\
\sqrt{01\ 33.00\ 00} \\
\quad 1 \\
\quad \underline{33} \\
\quad \quad 21 \\
\quad \quad \underline{1200} \\
\quad \quad \quad 1125 \\
\quad \quad \quad \underline{7500} \\
\quad \quad \quad \quad 6909
\end{array}$$

b. Special Right Triangles. The two right triangles in examples 1 and 2 of *a* above are special right triangles with sides that have whole numbers. These triangles are called the 3-4-5 right triangle and the 5-12-13 right triangle, although their sides may also be multiples of these numbers. For example, a triangle having sides of 6, 8, and 10 inches is also a 3-4-5 right triangle, because its sides are multiples of 3, 4, and 5. When determining the unknown side of a right triangle, the process is greatly simplified if the triangle is a 3-4-5 or 5-12-13 right triangle. In these cases, the unknown side can often be determined by inspection.

Example 1: The hypotenuse of a right triangle is 15 inches long, and one side is 12 inches long. Find the other side.

Since 15 and 12 can be divided by 3 to give 5 and 4, the triangle is a 3-4-5 right triangle. The third side, therefore, is equal to 3 times 3, or

9 inches. The answer can be checked by the Pythagorean theorem.

Example 2: The two sides of a triangle are 10 and 24 feet long. Find the length of the hypotenuse.

Dividing 10 and 24 by 2 gives 5 and 12, the two sides of a 5-12-13 right triangle. Therefore, the hypotenuse is 2 times 13, or 26 inches.

134. Area of Any Triangle

The area of any triangle is equal to one-half the product of its base and altitude. The formula for finding the area is $A = \frac{bh}{2}$ where b is the base of the triangle and h is the altitude.

Example 1:

What is the area of a triangle with a base of 15 inches and an altitude of 10 inches?

$$\begin{aligned} A &= \frac{bh}{2} \\ &= \frac{15 \times 10}{2} \\ &= \frac{150}{2} \\ &= 75 \text{ square inches} \end{aligned}$$

Example 2:

Find the area of a right triangle if the base measures 7 feet and the hypotenuse 25 feet.

$$\begin{aligned} c^2 - b^2 &= a^2 \\ a^2 &= 25^2 - 7^2 = 625 - 49 \\ a^2 &= 576 \\ a &= \sqrt{576} = 24 \text{ feet altitude} \\ A &= \frac{bh}{2} \\ &= \frac{7 \times 24}{2} = \frac{168}{2} \\ &= 84 \text{ square feet} \end{aligned}$$

135. Quadrilaterals

A quadrilateral is a plane figure bounded by four straight lines.

a. A *parallelogram* (A, fig. 32) is a quadrilateral having both pairs of opposite sides parallel.

b. A *rectangle* (B, fig. 32) is a parallelogram that has four right angles.

c. A *square* (C, fig. 32) is a rectangle, all four sides of which are equal.

d. A *trapezoid* (D, fig. 32) is a quadrilateral with two sides (called bases) parallel and unequal.

136. Area of Any Parallelogram

The area of any parallelogram is equal to the product of the base by the altitude. The formula for finding the area is $A = bh$ where b is the base and h is the height or altitude.

Example 1: Find the area of a square, each side of which is 15 inches.

$$\begin{aligned} A &= bh \\ &= 15 \times 15 \\ &= 225 \text{ square inches} \end{aligned}$$


Example 2: What is the area of a rectangle with a base of 12 inches and an altitude of 7 inches?

$$\begin{aligned} A &= bh \\ &= 12 \times 7 \\ &= 84 \text{ square inches} \end{aligned}$$

137. Area of Trapezoid

The area of a trapezoid is determined by multiplying one-half the sum of the bases by the altitude of the trapezoid.


$$\text{Thus, } A = \left(\frac{B + b}{2} \right) h.$$



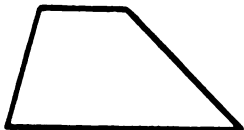
A



B



C



D

TM684-38

Figure 32. Quadrilaterals.

Example: Find the area of a trapezoid the bases of which are 16 and 10 inches long and the altitude is 8 inches.

$$\begin{aligned}
 A &= \left(\frac{B + b}{2}\right)h \\
 &= \left(\frac{16 + 10}{2}\right)8 \\
 &= \frac{26}{2} \times 8 \\
 &= 104 \text{ square inches}
 \end{aligned}$$

138. Circles

a. General. A circle is a plane figure bounded by a closed curve, every point of which is equidistant from the center.

b. Circumference. The circumference is the curved line that bounds a circle (A, fig. 33).

c. Chord. A chord is a straight line drawn through a circle and terminated at its intersections with the circumference (B, fig. 33).

d. Diameter. The diameter of a circle is a chord that passes through the center of the circle (A, fig. 33).

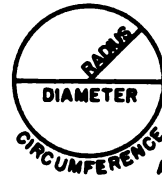
e. Radius. The radius of a circle is a straight line from the center to a point on the circumference (A, fig. 33). All radii of the same circle are of equal length, one-half of the diameter.

f. Arc. An arc is any part of the circumference of a circle.

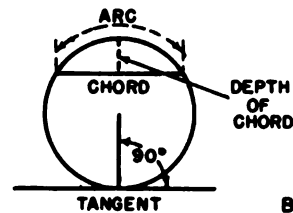
g. Segment. A segment is that area of a circle bounded by a chord and the arc subtended by that chord (C, fig. 33).

h. Sector. A sector is the area between an arc and two radii drawn to the ends of the arc (C, fig. 33).

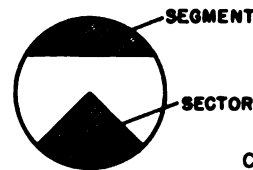
i. Tangent. A tangent is a straight line that touches the circumference of a circle at only one point and is perpendicular to the radius drawn to the point of contact (B, fig. 33). This



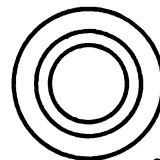
A



B



C



D

TM684-39

Figure 33. Circles.

point is called the *point of tangency* or the *point of contact*.

j. Concentric Circles. Concentric circles are circles having a common center (*D*, fig. 33).

k. Pi (π). The Greek letter π is used to represent the relationship of the circumference of any circle to its diameter. Roughly, it equals $\frac{22}{7}$. More approximately, it equals 3.1416. In many applications, it is rounded off to 3.14.

139. Circumference of Any Circle

The circumference of any circle is π times the diameter; therefore, $C = \pi D$.

Example 1: Find the circumference of a circle if the diameter is $6\frac{1}{2}$ inches.

$$\begin{aligned} C &= \pi D \\ &= 3.14 \times 6.5 \\ &= 20.42 \text{ inches} \end{aligned}$$

Example 2: Find the diameter of a circular tank having a circumference of $31\frac{1}{2}$ inches.

When the circumference of a circle is given, the diameter is calculated by dividing the circumference by π — $D = \frac{C}{\pi}$.

$$\begin{aligned} D &= \frac{C}{\pi} \\ &= \frac{31.5}{3.1416} \\ &= 10.03 \text{ inches} \end{aligned}$$

140. Area of Any Circle

a. The area of any circle is equal to π multiplied by the radius squared; therefore, $a = \pi r^2$.

Example 1: Find the area of a circle having a diameter of 5 feet 6 inches.

$$\begin{aligned} A &= \pi r^2 \\ &= \pi \left(\frac{5.5}{2}\right)^2 \\ &= \pi(2.75)^2 \\ &= 3.14 \times 7.56 \\ &= 23.76 \text{ square feet} \end{aligned}$$

Example 2: What is the diameter of a circle the area of which is 78.54 square rods?

$$A = \pi r^2 \text{ and } r = \frac{D}{2}$$

$$A = \pi \left(\frac{D}{2}\right)^2$$

$$A = \frac{\pi D^2}{4}$$

Transposing:

$$D^2 = \frac{4A}{\pi}$$

$$D = \sqrt{\frac{4A}{\pi}}$$

$$D = \sqrt[2]{\frac{A}{\pi}}$$

Substituting and solving for *D*:

$$D = \sqrt[2]{\frac{78.54}{3.1416}}$$

$$D = \sqrt[2]{25}$$

$$D = 2 \times 5$$

$$D = 10 \text{ rods}$$

b. The area of any circle also is equal to one-half the product of the circumference and the radius.

Example: If the diameter of a circle is 10 inches, and the circumference of the circle is 31.416 inches, what is the area of the circle?

$$A = \frac{1}{2}Cr$$

$$r = \frac{1}{2}D \text{ or } r = 5$$

$$A = \frac{1}{2}(31.416 \times 5)$$

$$= \frac{157.08}{2}$$

$$= 78.54 \text{ square inches}$$

141. Area of Ring

A ring is the area between the circumferences of two concentric circles. The area of a ring may be found by subtracting the area of the small circle from the area of the large circle. If *R* is the radius of the large circle and *r* is the radius of the small circle, a simplified formula for the area of the ring can be developed as follows:

$$\begin{aligned} \text{Area of ring} &= \text{area of large circle} - \text{area of} \\ &\quad \text{small circle} \\ &= \pi R^2 - \pi r^2 \\ &= \pi(R^2 - r^2) \end{aligned}$$

By factoring ($R^2 - r^2$) into $(R + r)(R - r)$, the formula also can be written:

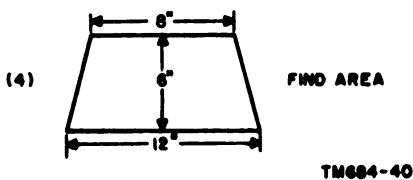
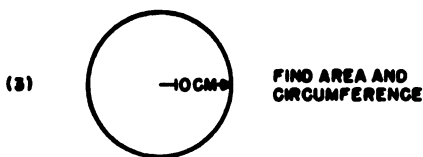
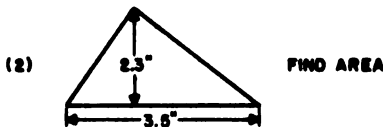
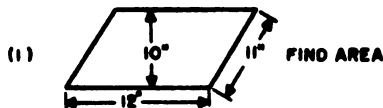
$$A = \pi(R + r)(R - r)$$

Example: Find the area of a ring having an inside diameter of 8 inches and an outside diameter of 12 inches.

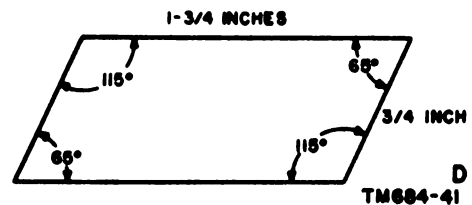
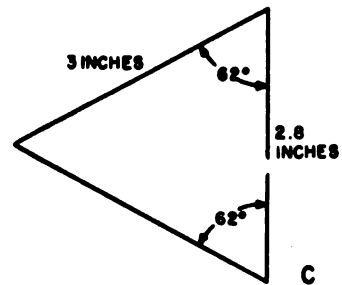
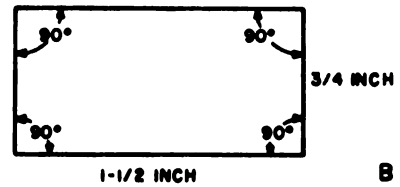
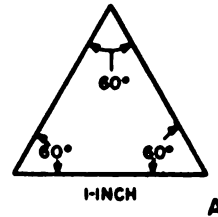
$$\begin{aligned}
 A &= \pi(R + r)(R - r) \\
 &= 3.14(6 + 4)(6 - 4) \\
 &= 3.14 \times 10 \times 2 \\
 &= 62.8 \text{ square inches}
 \end{aligned}$$

142. Review Problems—Plane Geometry

- Find the area of a rectangle having a base of 12 inches and an altitude of 8 inches.
- What is the area of a square, each side of which is 6 inches?
- Find the area of a triangle of which the altitude is 5 inches and the base is 10 inches.
- Find the area of a triangle having an altitude of 15 inches and a base of 2 inches.
- What is the hypotenuse of a right triangle the sides of which are 12 and 8 inches?
- Find the third side of a right triangle if one side is 7 inches and the hypotenuse is 9 inches.
- Identify the following figures, give the formulas, and solve for the required quantity.



k. What are the perimeters of the following figures?



i. Find the area of the largest circle that can be cut from a square piece of sheet metal with sides of 10 inches.

j. If the height of an antenna is 80 feet, how far from its top is an object on the ground 60 feet from the base of the pole?

k. How many square feet of lumber are needed to build 10 boxes 18 inches by 16 inches by 9 inches?

l. A metal plate is in the shape of an equilateral triangle. If the altitude is 14 inches, what is the perimeter?

CHAPTER 10

TRIGONOMETRY

Section I. BASIC TRIGONOMETRIC THEORY

143. Introduction

a. Definition. Trigonometry deals with the relationships between the sides and angles of triangles. It uses the theories of basic mathematics—the numbers of arithmetic, the equations of algebra, and the theorems of geometry—to aid in the measurement of the sides and angles of triangles.

b. Application. The ability to use angles and their trigonometric relationships in electrical calculations is especially important in the study of alternating current (ac). Most effects of ac circuit components can be studied or described only in terms of the part of a cycle by which a current lags behind a corresponding voltage, or vice versa. A large percentage of the problems relating to the analysis of ac circuits and communication networks involves the solution of the right triangle in some form. Certain facts about right triangles are familiar (ch 9)—namely, that the square of the hypotenuse is equal to the sum of the squares of the other two sides ($c^2 = a^2 + b^2$), that the sum of the acute angles of a right triangle is 90° , and that the sum of the interior angles of any triangle is 180° . However, it would be impossible to solve certain problems with only this information. After learning other relationships between the sides and angles of triangles, it will be found that trigonometry is an easy and accurate method of solving many problems in ac electricity (ch 15).

144. Trigonometric Functions

a. General. Trigonometry is based on the six trigonometric functions involved in the study of the right angle. If the value of one quantity depends on the value of a second quantity, the first quantity is said to be a function of the second. The six trigonometric functions—sine (sin), cosine (cos), tangent (tan), co-

tangent (cot), secant (sec), and cosecant (csc)—are derived from the ratios of the sides of a right triangle to each other.

b. The Right Triangle. Figure 34 shows a right triangle, with the angles labeled A , B , and C ; C is the right angle. The sides of the triangle are labeled a , b , and c , with the side opposite each angle given the same letter as the angle. The following are the trigonometric ratios of the sides of a triangle:

$$\sin = \frac{\text{opposite side}}{\text{hypotenuse}}$$

$$\cos = \frac{\text{adjacent side}}{\text{hypotenuse}}$$

$$\tan = \frac{\text{opposite side}}{\text{adjacent side}}$$

$$\cot = \frac{\text{adjacent side}}{\text{opposite side}}$$

$$\sec = \frac{\text{hypotenuse}}{\text{adjacent side}}$$

$$\csc = \frac{\text{hypotenuse}}{\text{opposite side}}$$

c. Angle A. Refer again to figure 34. Using the acute angle A , a is the opposite side, b is the adjacent side, and c , which is the side opposite the right angle, is the hypotenuse. Therefore,

$$\sin A = \frac{a}{c}$$

$$\cos A = \frac{b}{c}$$

$$\tan A = \frac{a}{b}$$

$$\cot A = \frac{b}{a}$$

$$\sec A = \frac{c}{b}$$

$$\csc A = \frac{c}{a}$$

d. *Angle B.* Using the acute angle B in figure 34, b is the opposite side, a is the adjacent side, and c is the hypotenuse. Therefore,

$$\sin B = \frac{b}{c}$$

$$\cos B = \frac{a}{c}$$

$$\tan B = \frac{b}{a}$$

$$\cot B = \frac{a}{b}$$

$$\sec B = \frac{c}{a}$$

$$\csc B = \frac{c}{b}$$

e. *Angle C.* Right angle C is the angle which establishes the relationship between the other sides and other angles and thus may be called a constant. Although it is possible to obtain functions for angle C , they are not covered here because they are not needed in solving problems of this type.

Example:

Determine the values of the trigonometric functions of a right triangle with sides as follows: $a = 3$, $b = 4$, $c = 5$ (fig. 35).

Functions of angle A :

$$\sin A = \frac{a}{c} = \frac{3}{5}$$

$$\cos A = \frac{b}{c} = \frac{4}{5}$$

$$\tan A = \frac{a}{b} = \frac{3}{4}$$

$$\cot A = \frac{b}{a} = \frac{4}{3}$$

$$\sec A = \frac{c}{b} = \frac{5}{4}$$

$$\csc A = \frac{c}{a} = \frac{5}{3}$$

Functions of angle B :

$$\sin B = \frac{b}{c} = \frac{4}{5}$$

$$\cos B = \frac{a}{c} = \frac{3}{5}$$

$$\tan B = \frac{b}{a} = \frac{4}{3}$$

$$\cot B = \frac{a}{b} = \frac{3}{4}$$

$$\sec B = \frac{c}{a} = \frac{5}{3}$$

$$\csc B = \frac{c}{b} = \frac{5}{4}$$

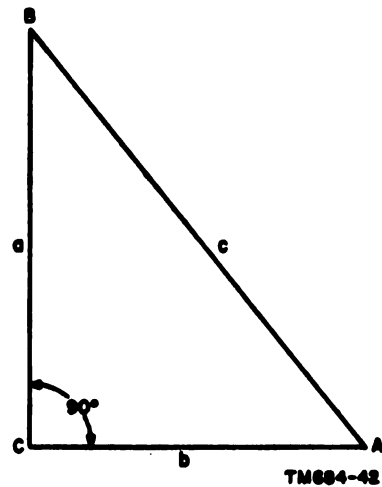


Figure 34. Trigonometric functions of the right triangle.

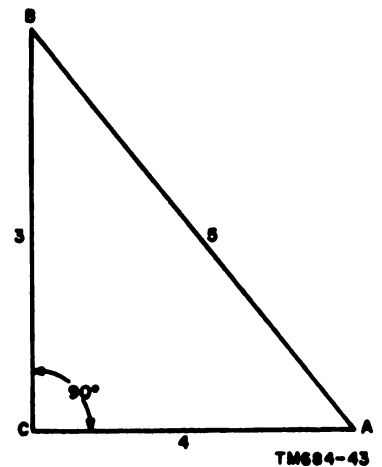


Figure 35. Right triangle with sides known.

145. Reciprocal Relations of Trigonometric Functions

From the definitions of the six trigonometric functions (par. 144), the reciprocal relations (listed below) can be determined. The cosecant, secant, and cotangent should always be thought of as the reciprocals of the sine, cosine, and tangent, respectively.

$$\sin A = \frac{a}{c} = \frac{1}{\frac{c}{a}} = \frac{1}{\csc A}$$

$$\cos A = \frac{b}{c} = \frac{1}{\frac{c}{b}} = \frac{1}{\sec A}$$

$$\tan A = \frac{a}{b} = \frac{1}{\frac{b}{a}} = \frac{1}{\cot A}$$

$$\csc A = \frac{c}{a} = \frac{1}{\frac{a}{c}} = \frac{1}{\sin A}$$

$$\sec A = \frac{c}{b} = \frac{1}{\frac{b}{c}} = \frac{1}{\cos A}$$

$$\cot A = \frac{b}{a} = \frac{1}{\frac{a}{b}} = \frac{1}{\tan A}$$

146. Functions of Complementary Angles

a. The function of an acute angle is equal to the cofunction of its complementary angle. Apply the definitions of the trigonometric functions (par. 144) to angles A and B to obtain the following relations:

$$\sin B = \frac{b}{c} = \cos A$$

$$\tan B = \frac{b}{a} = \cot A$$

$$\sec B = \frac{c}{a} = \csc A$$

$$\cos B = \frac{a}{c} = \sin A$$

$$\cot B = \frac{a}{b} = \tan A$$

$$\csc B = \frac{c}{b} = \sec A$$

b. With angle B equal to $90^\circ - A$, these relations may be written:

$$\sin (90^\circ - A) = \cos A$$

$$\tan (90^\circ - A) = \cot A$$

$$\sec (90^\circ - A) = \csc A$$

$$\cos (90^\circ - A) = \sin A$$

$$\cot (90^\circ - A) = \tan A$$

$$\csc (90^\circ - A) = \sec A$$

147. Solving for Unknown Functions

If one trigonometric function of a right triangle is known, the other trigonometric functions can be determined. This is done by using the Pythagorean theorem (par. 133).

Example 1: Given the right triangle ABC (fig. 23): side a is 4; side C is 9. Since $\sin A = \frac{4}{9}$, find the other trigonometric functions of angle A .

$$\sin A = \frac{a}{c}; \text{ also, } \sin A = \frac{4}{9}.$$

$$\text{Therefore, } a = 4, c = 9$$

$$b^2 = c^2 - a^2$$

$$b^2 = 81 - 16$$

$$b^2 = 65$$

$$b = \sqrt{65}$$

$$b = 8.06$$

$$\begin{array}{r} 8.06 \\ \sqrt{65.00\ 00} \\ \underline{64} \\ 1606 \\ \underline{10000} \\ 9636 \end{array}$$

$$\begin{array}{ll} \sin A = \frac{4}{9} & \cot A = \frac{8.06}{4} \\ \cos A = \frac{8.06}{9} & \sec A = \frac{9}{8.06} \\ \tan A = \frac{4}{8.06} & \csc A = \frac{9}{4} \end{array}$$

Example 2: Given the right triangle ABC (fig. 23): side A is $\sqrt{3}$; side b is 7. Since $\tan A = \frac{\sqrt{3}}{7}$ or $\frac{1}{7}\sqrt{3}$, find the other trigonometric functions of angle A .

$$\tan A = \frac{a}{b}; \text{ also, } \tan A = \frac{1}{7}\sqrt{3} = \frac{\sqrt{3}}{7}.$$

Therefore,

$$a = \sqrt{3}, b = 7$$

$$c^2 = a^2 + b^2$$

$$c^2 = 3 + 49$$

$$c^2 = 52$$

$$c = \sqrt{52}$$

$$c = \sqrt{4} \cdot \sqrt{13}$$

$$c = 2\sqrt{13}$$

$$\sin A = \frac{\sqrt{3}}{2\sqrt{13}}$$

$$\cot A = \frac{7}{\sqrt{3}}$$

$$\cos A = \frac{7}{2\sqrt{13}}$$

$$\sec A = \frac{2\sqrt{13}}{7}$$

$$\tan A = \frac{\sqrt{3}}{7}$$

$$\csc A = \frac{2\sqrt{13}}{\sqrt{3}}$$

148. Solving for Sides and Trigonometric Functions When One Side and One Function Are Given

When one side and one function of an angle of a right triangle are given, the two other sides and the remaining trigonometric functions of the given angle can be found. These are determined by use of the Pythagorean theorem.

Example 1: Given the right triangle ABC (fig. 34): if the hypotenuse is 30 inches and $\sec A = 5$, solve for sides a and b and the trigonometric functions of angle A .

$$\sec A = \frac{c}{b}; \text{ also, } \sec A = \frac{30}{b}; \text{ but } \sec A = 5 \text{ or } \frac{5}{1}$$

$$\text{Therefore, } \frac{30}{b} = \frac{5}{1}$$

$$5b = 30$$

$$b = 6 \text{ inches}$$

$$a^2 = c^2 - b^2$$

$$a^2 = 900 - 36$$

$$a^2 = 864$$

$$a = \sqrt{864}$$

$$a = \sqrt{144} \sqrt{6}$$

$$a = 12\sqrt{6} \text{ inches, } b = 6 \text{ inches, } c = 30 \text{ inches}$$

$$\sin A = \frac{12\sqrt{6}}{30} = \frac{12}{30}\sqrt{6} = \frac{2}{5}\sqrt{6}$$

$$\cos A = \frac{\sqrt{6}}{30} = \frac{1}{5}$$

$$\tan A = \frac{12\sqrt{6}}{6} = 2\sqrt{6}$$

$$\cot A = \frac{6}{12\sqrt{6}} = \frac{1}{2\sqrt{6}} \cdot \frac{\sqrt{6}}{\sqrt{6}} = \frac{\sqrt{6}}{(2)(6)} = \frac{\sqrt{6}}{12} = \frac{1}{12}\sqrt{6}$$

$$\sec A = \frac{30}{6} = 5$$

$$\csc A = \frac{30}{12\sqrt{6}} = \frac{5}{2\sqrt{6}} \cdot \frac{\sqrt{6}}{\sqrt{6}} = \frac{5\sqrt{6}}{(2)(6)} = \frac{5\sqrt{6}}{12} = \frac{5}{12}\sqrt{6}$$

Example 2: Given the right triangle ABC (fig. 34) : solve for sides b and c and the trigonometric functions of angle A when side a is 21.2 inches and $\sin A = \frac{4}{7}$.

$$\sin A = \frac{a}{c}; \text{ also, } \sin a = \frac{21.2}{c}, \text{ but } \sin A = \frac{4}{7}.$$

$$\text{Therefore, } \frac{21.2}{c} = \frac{4}{7}$$

$$4c = 148.4$$

$$c = 37.1 \text{ inches}$$

$$b^2 = c^2 - a^2$$

$$b^2 = 1376.41 - 449.44$$

$$b^2 = 926.97$$

$$b = \sqrt{926.97}$$

$$b = 30.4 \text{ inches, } a = 21.2 \text{ inches, } c = 37.1 \text{ inches}$$

$$\sin A = \frac{21.2}{37.1} = \frac{4}{7}$$

$$\cot A = \frac{30.4}{21.2} = \frac{7.6}{5.3}$$

$$\cos A = \frac{30.4}{37.1}$$

$$\sec A = \frac{37.1}{30.4}$$

$$\tan A = \frac{21.2}{30.4} = \frac{5.3}{7.6}$$

$$\csc A = \frac{37.1}{21.2} = \frac{7}{4}$$

149. Constructing an Acute Angle of Right Triangle When One Trigonometric Function Is Known

When the trigonometric function of an acute angle is given, the angle may be constructed geometrically. Use the definition given for the given function.

Example: Construct the acute angle A of right triangle ABC if $\tan A = \frac{1}{4}$.

Step 1. Let $a = 1$ unit and $b = 4$ units.

Step 2. Erect perpendicular lines AC and BC . Use cross-sectional paper if available.

Step 3. Measure off 1 unit along BC and 4 units along AC (A, fig. 36).

Step 4. Join A and B , thus forming the right triangle ABC (B, fig. 36).

Step 5. $\tan A = \frac{1}{4}$; therefore, A is the required angle. Measuring angle A with a protractor shows it to

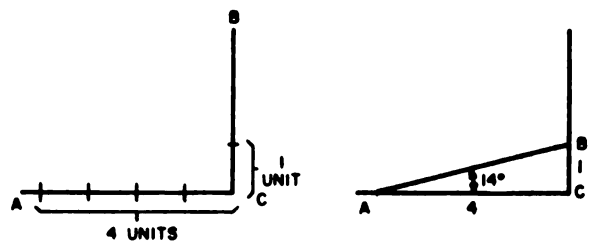


Figure 36. Constructing an angle when one function is known.

be an angle of approximately 14° .

150. Common Trigonometric Functions

a. General. There are two special-case right triangles that are commonly used in solving mathematical problems. These are the right isosceles triangle (par. 131a) with equal acute angles of 45° (fig. 37) and the right triangle with acute angles of 30° and 60° . The functions of these angles are tabulated in appendix III.

b. Trigonometric Functions of 45° . Draw the right triangle ABC (fig. 37) with angle A equal to 45° . Because the acute angles of a right triangle are complementary, angle A plus angle B equals 90° . Thus, angle B is also 45° . Since sides opposite equal angles are equal, side a is equal to side b .

Let $a = 1$ and $b = 1$.

$$c^2 = a^2 + b^2$$

$$c^2 = 1 + 1$$

$$c^2 = 2$$

$$c = \sqrt{2}$$

$$\sin 45^\circ = \frac{1}{\sqrt{2}} \cdot \frac{\sqrt{2}}{\sqrt{2}} = \frac{\sqrt{2}}{2} = \frac{1}{2}\sqrt{2}$$

$$\cos 45^\circ = \frac{1}{\sqrt{2}} \cdot \frac{\sqrt{2}}{\sqrt{2}} = \frac{\sqrt{2}}{2} = \frac{1}{2}\sqrt{2}$$

$$\tan 45^\circ = \frac{1}{1} = 1$$

$$\cot 45^\circ = \frac{1}{1} = 1$$

$$\sec 45^\circ = \frac{\sqrt{2}}{1} = \sqrt{2}$$

$$\csc 45^\circ = \frac{\sqrt{2}}{1} = \sqrt{2}$$

c. Trigonometric Functions of 30° and 60° . Draw the equilateral triangle ABX (fig. 38). The angles of any equilateral triangle are 60° and the sides are equal (par. 131a). Drop a perpendicular BC to the center of the base AX . Right angles ACB and BCX are formed by the perpendicular and the base. The angles ABC and XBC are 30° angles. Since the sides of the equilateral triangle are equal, the perpendicular bisecting the base makes the base AC of the right triangle ABC one-half the length of the base AX of the equilateral triangle. Thus, the side opposite the right angle in a right triangle

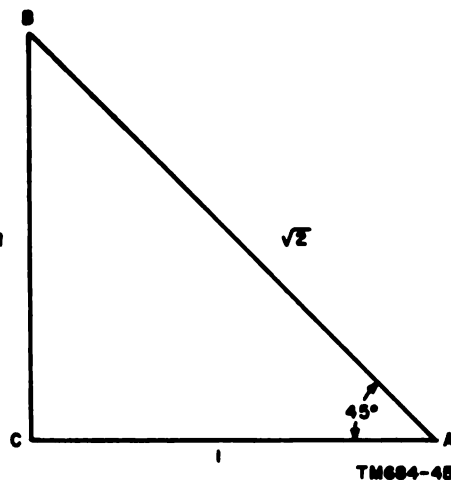


Figure 37. Right isosceles triangle—trigonometric functions of 45° .

is twice the length of the side opposite the 30° angle.

Let $b = 1$ and $c = 2$.

$$a^2 = c^2 - b^2$$

$$a^2 = 4 - 1$$

$$a^2 = 3$$

$$a = \sqrt{3}$$

$$\sin 60^\circ = \frac{\sqrt{3}}{2} = \frac{1}{2}\sqrt{3}$$

$$\cos 60^\circ = \frac{1}{2}$$

$$\tan 60^\circ = \frac{\sqrt{3}}{1} = \sqrt{3}$$

$$\cot 60^\circ = \frac{1}{\sqrt{3}} \cdot \frac{\sqrt{3}}{\sqrt{3}} = \frac{\sqrt{3}}{3} = \frac{1}{3}\sqrt{3}$$

$$\sec 60^\circ = \frac{2}{1} = 2$$

$$\csc 60^\circ = \frac{2}{\sqrt{3}} \cdot \frac{\sqrt{3}}{\sqrt{3}} = \frac{2\sqrt{3}}{3} = \frac{2}{3}\sqrt{3}$$

$$\sin 30^\circ = \frac{1}{2}$$

$$\cos 30^\circ = \frac{\sqrt{3}}{2} = \frac{1}{2}\sqrt{3}$$

$$\tan 30^\circ = \frac{1}{\sqrt{3}} = \frac{1}{\sqrt{3}} \cdot \frac{\sqrt{3}}{\sqrt{3}} = \frac{\sqrt{3}}{3} = \frac{1}{3}\sqrt{3}$$

$$\cot 30^\circ = \frac{\sqrt{3}}{1} = \sqrt{3}$$

$$\sec 30^\circ = \frac{2}{\sqrt{3}} \cdot \frac{\sqrt{3}}{\sqrt{3}} = \frac{2\sqrt{3}}{3} = \frac{2}{3}\sqrt{3}$$

$$\csc 30^\circ = \frac{2}{1} = 2$$

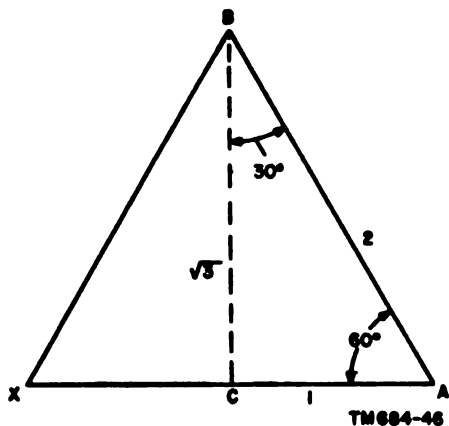


Figure 38. Equilateral right triangle—trigonometric functions of a right triangle with angles of 30° and 60°

151. Solving for Sides of 45° - 45° - 90° or 30° - 60° - 90° Triangles When One Side Is Given

In special cases, right triangles can be solved when only one side is given. These are the 45° - 45° - 90° isosceles triangle and the 30° - 60° - 90° triangle.

Example 1: Solve for the unknown sides of right triangle ABC if angle $A = 60^\circ$ and $b = 4$ inches.

$$\tan 60^\circ = \frac{a}{b} = \frac{a}{4}; \text{ however, } \tan 60^\circ = \sqrt{3}.$$

Therefore,

$$\frac{a}{4} = \frac{\sqrt{3}}{1}$$

$$a = 4\sqrt{3} \text{ inches}$$

$$\cos 60^\circ = \frac{b}{c} = \frac{4}{c}; \text{ however, } \cos 60^\circ = \frac{1}{2}.$$

Therefore,

$$\frac{4}{c} = \frac{1}{2}$$

$$c = 8 \text{ inches}$$

Thus, $a = 4\sqrt{3}$ inches, $b = 4$ inches, $c = 8$ inches.

Example 2: Solve for the unknown sides of right triangle ABC if angle $A = 45^\circ$ and $c = 6$ inches.

$$\sin 45^\circ = \frac{a}{c} = \frac{a}{6}; \text{ however, } \sin 45^\circ = \frac{\sqrt{2}}{2}.$$

Therefore;

$$\frac{a}{6} = \frac{\sqrt{2}}{2}$$

$$2a = 6\sqrt{2}$$

$$a = 3\sqrt{2}$$

$$\cos 45^\circ = \frac{b}{c} = \frac{b}{6}; \text{ however, } \cos 45^\circ = \frac{\sqrt{2}}{2}.$$

Therefore,

$$\frac{b}{6} = \frac{\sqrt{2}}{2}$$

$$2b = 6\sqrt{2}$$

$$b = 3\sqrt{2} \text{ inches}$$

Thus, $a = 3\sqrt{2}$ inches, $b = 3\sqrt{2}$ inches, $c = 6$ inches.

152. Calculations Involving Angles

a. Addition. To add angles, arrange the degrees, minutes, and seconds in separate columns and add each column separately. If the sum of the seconds column is 60 or more, subtract 60 or a multiple of 60 from that column, and add 1 minute or the same multiple of 1 minute to the minutes column. If the sum of the minutes column is 60 or more, subtract 60 from that column and add 1° to the degree column.

Example 1: Add 20° 40' 25", 8° 35' 5", and 30° 58' 51".

$$\begin{array}{r} 20^\circ \ 40' \ 25'' \\ 8^\circ \ 35' \ 5'' \\ 30^\circ \ 58' \ 51'' \\ \hline 58^\circ \ 133' \ 81'' \end{array}$$

Subtract 60" from 81" and add 1' to 133'.

$$\begin{array}{r} 58^\circ \ 133' \ 81'' \\ + \ 1' \ -60'' \\ \hline 58^\circ \ 134' \ 21'' \end{array}$$

Subtract 120' from 134' and add 2° to 58°.

$$\begin{array}{r} 58^\circ \ 134' \ 21'' \\ + \ 2^\circ \ -120' \\ \hline 60^\circ \ 14' \ 21'' \end{array}$$

Example 2: Add 15° 44' 36" and 12° 38' 35".

$$\begin{array}{r} 15^\circ \ 44' \ 36'' \\ 12^\circ \ 38' \ 35'' \\ \hline 27^\circ \ 82' \ 71'' = 27^\circ \ 83' \ 11'' = 28^\circ \ 23' \ 11''. \end{array}$$

b. Subtraction. To subtract angles, arrange the degrees, minutes, and seconds in separate columns with the larger angle on top. Then, subtract the individual columns. If the upper number in a column is too small to allow subtraction, one unit must be taken away from the preceding column and 60 units added to the insufficient number to make subtraction possible.

Example 1: Subtract 14° 51' 30" from 86° 45' 10".

$$\begin{array}{r} 86^\circ \ 45' \ 10'' \\ -14^\circ \ 51' \ 30'' \\ \hline \end{array}$$

Subtraction cannot be performed in either the seconds or minutes columns. Subtract 1' from 45' leaving 44', and add 60" to 10" for a total of 70".

$$\begin{array}{r} 86^\circ \ 44' \ 70'' \\ -14^\circ \ 51' \ 30'' \\ \hline \end{array}$$

Subtraction still cannot be performed in the minutes column. Subtract 1° from 86°, leaving 85°, and add 60' to 44' for a total of 104'.

$$\begin{array}{r} 85^\circ \ 104' \ 70'' \\ -14^\circ \ 51' \ 30'' \\ \hline 71^\circ \ 53' \ 40'' \end{array}$$

Example 2: Subtract 10° 35' 42" from 19° 20' 20".

$$\begin{array}{r} 19^\circ \ 20' \ 20'' \\ -10^\circ \ 35' \ 42'' \\ \hline \end{array}$$

Subtraction cannot be performed in either the minutes or seconds columns. Therefore, change $19^\circ 20' 20''$ to $18^\circ 79' 80''$ and subtract.

$$\begin{array}{r} 18^\circ 79' 80'' \\ -10^\circ 35' 42'' \\ \hline 8^\circ 44' 38'' \end{array}$$

c. **Multiplication.** To multiply an angle by a given number, multiply each column by the number. If the answer in the seconds or minutes column is greater than 60, reduce as in the addition of angles (a above).

Example 1: Multiply $15^\circ 21' 40''$ by 3.

$$\begin{array}{r} 15^\circ 21' 40'' \\ \quad \quad \quad 3 \\ \hline 45^\circ 63' 120'' = 45^\circ 65' 0'' = 46^\circ 5' \end{array}$$

Example 2: Multiply $12^\circ 14' 36''$ by 5.

$$\begin{array}{r} 12^\circ 14' 36'' \\ \quad \quad \quad 5 \\ \hline 60^\circ 70' 180'' = 60^\circ 73' = 61^\circ 13' \end{array}$$

d. **Division.** To divide an angle by a given number, divide each column by the number (beginning with the degrees column). Change the remainder in degrees, if any, into minutes and add it to the minutes column; then, perform division on the numbers in the minutes column. Change the remainder in minutes, if any, to seconds and add it to the seconds column; then, perform division on the numbers in the seconds column.

Example 1: Divide $71^\circ 22' 21''$ by 3.

$$\begin{array}{r} 23^\circ \quad 47' \quad 27'' \\ \sqrt{71^\circ \quad 22' \quad 21''} \\ \underline{69} \\ 2^\circ = \frac{120'}{2} \\ \underline{142} \\ 141' \\ \underline{1'} = \frac{60''}{1} \\ \quad 81'' \\ \quad \underline{81''} \end{array}$$

Example 2: Divide $166^\circ 17' 36''$ by 6.

$$\begin{array}{r} 27^\circ \quad 42' \quad 56'' \\ \sqrt{166^\circ \quad 17' \quad 36''} \\ \underline{162} \\ 4^\circ = \frac{240'}{6} \\ \underline{257} \\ 252' \\ \underline{5'} = \frac{300''}{5} \\ \quad 336'' \\ \quad \underline{336''} \end{array}$$

153. Review Problems—Basic Trigonometry

Note. In the following problems, angle C is the right angle and equals 90° .

a. Find the third side of each of the following right triangles ABC , if two sides are:

- (1) $a = 5, b = 7$
- (2) $b = 18, c = 19$
- (3) $a = 17, c = 43$
- (4) $a = 3b$
- (5) $a = 2m, c = m^2 + 1$

b. Given the right triangle ABC , solve for the trigonometric functions of angle A in each of the following cases:

- (1) $\sin A = \frac{4}{7}$
- (2) $\tan A = \frac{2}{3}$
- (3) $\cos A = \frac{\sqrt{3}}{2}$
- (4) $\csc A = 2.4$
- (5) $\cot A = \frac{1}{y}$
- (6) $\sec A = 2\frac{2}{3}$

c. Solve each of the right triangles (ABC) for the two unknown sides:

- (1) $\sin A = \frac{1}{2}, a = 17$
- (2) $\tan A = \frac{3}{4}, b = 12$

$$(3) \cos A = \frac{4}{5}, c = 20$$

$$(4) \csc A = \frac{15}{7}, c = 37.5$$

$$(5) \cot A = \frac{3}{5}, a = 10$$

$$(6) \sec A = \frac{9}{4}, b = 18.4$$

d. Solve each of the following right triangles (ABC) for the unknown sides:

$$(1) A = 30^\circ, a = 10$$

$$(2) B = 45^\circ, b = 7$$

$$(3) A = 60^\circ, c = 8$$

$$(4) B = 30^\circ, a = 9$$

$$(5) B = 60^\circ, c = 25$$

Section II. NATURAL TRIGONOMETRIC FUNCTIONS

154. Tables and Their Uses

For convenience in computing, trigonometric functions are arranged in tables similar to the tables of logarithms. The ratios themselves are called *natural sines, cosines, tangents, cotangents, etc.* The tables in appendix III give the sines and cosines, the tangents and cotangents, and the secants and cosecants of the angles from 0° to 90° . Angles less than 45° are read down the page; the degrees are at the top of the page and the minutes are on the left. Angles greater than 45° are read up the page; the degrees are at the bottom of the page and the minutes are on the right. As with logarithms, it is necessary to interpolate to find the function of an angle which does not reduce to an integral number of minutes. When working with the sine and tangent, which are increasing in size from 0° to 90° , it is necessary to add in interpolation. When working with the cosine and cotangent, which are decreasing in size from 0° to 90° , it is necessary to subtract.

155. Finding the Function of an Angle From the Table

To find the function of an angle from the table, proceed much the same as with the table of logarithms. This is illustrated by the following examples:

a. *When an Angle Is Given in the Table.*

Example 1: Find the cosine of $44^\circ 27'$

- Step 1. Turn to the table of sines and cosines.
- Step 2. Locate the 44° column at the top of the page.
- Step 3. Locate the $27'$ at the left of the page.
- Step 4. Read .71386 in the column headed Cosin.
- Step 5. $\cos 44^\circ 27' = .71386$.

Example 2: Find the tangent of $86^\circ 18'$.

- Step 1. Turn to the table of tangents and cotangents.
- Step 2. Locate the 86° column at the bottom of the page.
- Step 3. Locate the $18'$ at the right of the page.
- Step 4. Read 15.4638 in the column headed Tang.
- Step 5. $\tan 86^\circ 18' = 15.4638$.

b. *When an Angle Is Not Given in the Table.*

Example 1: Find the sine of $32^\circ 46' 36''$.

$$\begin{aligned} \sin 32^\circ 46' &= .54122 \\ \sin 32^\circ 46' 36'' &= .54122 + r \\ \sin 32^\circ 47' &= .54146 \end{aligned}$$

$$\begin{array}{r}
\sin 32^\circ 46' 36'' \\
\underline{-32^\circ 46'} \\
36'' \\
\text{ratio} = \frac{36}{60} = \frac{6}{10} = \frac{3}{5} \\
.54146 - .54122 = .00024 \\
\text{ratio} = \frac{x}{.00024} \\
\frac{3}{5} = \frac{x}{.00024} \\
5x = .00072 \\
x = .000144 \\
\sin 32^\circ 46' 36'' = .54122 + .000144 = .54136
\end{array}$$

Example 2: Find the tangent of $56^\circ 43' 27''$.

$$\begin{array}{r}
\tan 56^\circ 43' = 1.52332 \\
\tan 56^\circ 43' 27'' = 1.52332 + x \\
\tan 56^\circ 44' = 1.52429 \\
\frac{27}{60} \text{ or } \frac{9}{20} = \frac{x}{.00097} \\
20x = .00878 \\
x = .000436 \text{ or } .00044 \\
\tan 56^\circ 43' 27'' = 1.52332 + .00044 = 1.52376
\end{array}$$

156. Finding an Angle When the Trigonometric Function Is Given

The procedure for using the table to find an angle corresponding to a function is similar to that of logarithms. This is illustrated in the examples in *a* and *b* below.

a. When the Function Is Given in the Table.

Example: Find the value of angle *A* if $\sin A = .27284$.

Step 1. Find .27284 in the Sine column of the Sines and Cosines table.

Step 2. Reading 15° at the top of the column and $50'$ in the minutes column on the left, angle *A* = $15^\circ 50'$.

b. When the Function Is Not Given in the Table.

Example 1: Find the value of angle *A* when $\sin A = .78112$.

$$\begin{array}{r}
.78098 = \sin 51^\circ 21' \\
.78112 = \sin 51^\circ 21' + x \\
.78116 = \sin 51^\circ 22' \\
\begin{array}{r}
.78112 \\
\underline{-.78098} \\
.00014
\end{array}
\quad
\begin{array}{r}
.78116 \\
\underline{-.78098} \\
.00018
\end{array} \\
\text{ratio} = \frac{.00014}{.00018} = \frac{14}{18} = \frac{7}{9} \\
51^\circ 22' - 51^\circ 21' = 1' = 60'' \\
\text{ratio} = \frac{x}{60} \\
\frac{7}{9} = \frac{x}{60} \\
9x = 420 \\
x = 47 \\
\text{angle } A = 51^\circ 21' 47''
\end{array}$$

Examp. Find the value of angle A when $\cot A = .33820$.

$$\begin{aligned} .33848 &= \cot 71^\circ 18' \\ .33820 &= \cot 71^\circ 18' + x \\ .33816 &= \cot 71^\circ 19' \\ \frac{28}{32} \text{ or } \frac{7}{8} &= \frac{x}{60} \\ 8x &= 420 \\ x &= 53 \end{aligned}$$

$$\text{angle } A = 71^\circ 18' 53''$$

157. Solving a Right Triangle When an Acute Angle and the Hypotenuse Are Given

To solve for the unknowns in a right triangle when an acute angle and the hypotenuse are given, proceed as in a and b below. In both examples, angle C is the right angle; therefore, angle $C = 90^\circ$.

Example 1: Find the unknown sides a and b , and the value of angle B in right triangle ABC (fig. 39) if angle A is $33^\circ 15'$ and the hypotenuse, c is 9 inches.

$$\begin{aligned} \angle A + \angle B + \angle C &= 180^\circ \\ \angle B &= 180^\circ - \angle A - \angle C \\ \angle B &= 180^\circ - 33^\circ 15' - 90^\circ \\ \angle B &= 56^\circ 45' \end{aligned}$$

$$\sin A = \frac{a}{c}$$

$$\sin 33^\circ 15' = \frac{a}{9}$$

$$a = 9 \sin 33^\circ 15'$$

$$a = 9 \times .54829 = 4.93461$$

$$a = 4.93461$$

$$\cos A = \frac{b}{c}$$

$$\cos 33^\circ 15' = \frac{b}{9}$$

$$b = 9 \cos 33^\circ 15'$$

$$b = 9 \times .83629$$

$$b = 7.52661$$

Therefore, $\angle A = 33^\circ 15'$

$\angle B = 56^\circ 45'$

$\angle C = 90^\circ$

$a = 4.93461$ inches

$b = 7.52661$ inches

$c = 9$ inches

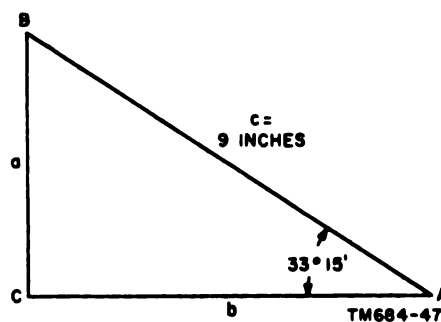


Figure 39. Solving a right triangle when an acute angle ($33^\circ 15'$) and the hypotenuse are given.

Example 2: Solve for the unknown sides a and b , and the value of angle B in right triangle ABC (fig. 40) if angle A is $24^\circ 35' 36''$ and the hypotenuse, c , is 12 inches.

$$\begin{aligned}\angle B &= 180^\circ - \angle A - \angle C \\ \angle B &= 180^\circ - 24^\circ 35' 36'' - 90^\circ \\ \angle B &= 65^\circ 24' 24''\end{aligned}$$

$$\sin A = \frac{a}{c}$$

$$\sin 24^\circ 35' 36'' = \frac{a}{12}$$

$$a = 12 \sin 24^\circ 35' 36''$$

$$\sin 24^\circ 35' = .41602$$

$$\sin 24^\circ 35' 36'' = .41602 + x$$

$$\sin 24^\circ 36' = .41628$$

$$\frac{36}{60} \text{ or } \frac{3}{5} = \frac{x}{.00026}$$

$$5x = .00078$$

$$x = .00016$$

$$\sin 24^\circ 35' 36'' = .41602 + .00016 = .41618$$

$$a = 12 \times .41618$$

$$a = 4.99416$$

$$\cos A = \frac{b}{c}$$

$$\cos 24^\circ 35' 36'' = \frac{b}{12}$$

$$b = 12 \cos 24^\circ 35' 36''$$

$$\cos 24^\circ 35' = .90936$$

$$\cos 24^\circ 35' 36'' = .90936 - x$$

$$\cos 24^\circ 36' = .90924$$

$$\frac{36}{60} \text{ or } \frac{3}{5} = \frac{x}{.00012}$$

$$5x = .00036$$

$$x = .00007$$

$$\cos 24^\circ 35' 36'' = .90936 - .00007 = .90929$$

$$b = 12 \times .90929$$

$$b = 10.91148$$

Therefore, $\angle A = 24^\circ 35' 36''$ $a = 4.99416$ inches
 $\angle B = 65^\circ 24' 24''$ $b = 10.91148$ inches
 $\angle C = 90^\circ$ $c = 12$ inches

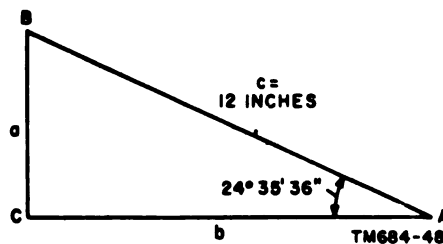


Figure 40. Solving a right triangle when an acute angle ($24^\circ 35' 36''$) and the hypotenuse are given.

158. Solving a Right Triangle When an Acute Angle and the Adjacent Side Are Given

To solve a right triangle when an acute angle and the adjacent side are given, proceed as shown in the example below. Angle C is the right angle.

Example: Find the unknown sides a and c and the value of angle B in the right triangle ABC (fig. 41) if angle A is $37^\circ 42' 42''$ and the side adjacent to angle A is 8 inches.

$$\angle B = 180^\circ - 90^\circ - 37^\circ 42' 42''$$

$$\angle B = 52^\circ 17' 18''$$

$$\cos A = \frac{b}{c}$$

$$\cos 37^\circ 42' 42'' = \frac{8}{c}$$

$$c (\cos 37^\circ 42' 42'') = 8$$

$$\cos 37^\circ 42' = .79122$$

$$\cos 37^\circ 42' 42'' = .79122 - x$$

$$\cos 37^\circ 43' = .79105$$

$$\frac{42}{60} \text{ or } \frac{7}{10} = \frac{x}{.00017}$$

$$10x = .00119$$

$$x = .00012$$

$$\cos 37^\circ 42' 42'' = .79122 - .00012 = .79110$$

$$.79110c = 8$$

$$c = \frac{8}{.79110}$$

$$c = 10.11$$

$$\tan A = \frac{a}{b}$$

$$\tan 37^\circ 42' 42'' = \frac{a}{8}$$

$$a = 8 \tan 37^\circ 42' 42''$$

$$\tan 37^\circ 42' = .77289$$

$$\tan 37^\circ 42' 42'' = .77289 + x$$

$$\tan 37^\circ 43' = .77335$$

$$\frac{42}{60} \text{ or } \frac{7}{10} = \frac{x}{.00046}$$

$$10x = .00322$$

$$x = .00032$$

$$\tan 37^\circ 42' 42'' = .77289 + .00032 = .77321$$

$$a = 8 \times .77321$$

$$a = 6.18568$$

Therefore, $\angle A = 37^\circ 42' 42''$

$a = 6.18568$ inches

$\angle B = 52^\circ 17' 18''$

$b = 8$ inches

$\angle C = 90^\circ$

$c = 10.11$ inches

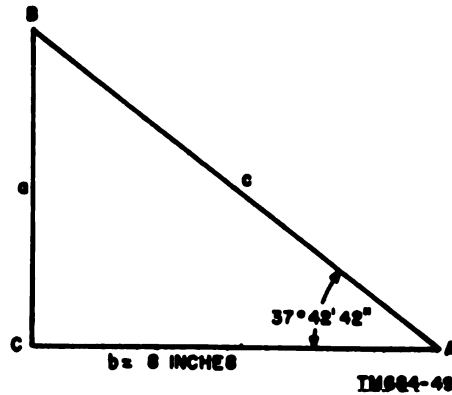


Figure 41. Solving a right triangle when an acute angle and the adjacent side are given.

159. Solving a Right Triangle When Hypotenuse and One Side Are Given

Given the hypotenuse and one other side of a right triangle, solve for the unknown angles and side as illustrated in the example below.

Example: Find the unknown angles A and B , and side c of right triangle ABC (fig. 42) if the hypotenuse is 12 inches and the side opposite angle A is 8 inches.

$$\begin{aligned}
 b^2 &= c^2 - a^2 \\
 b^2 &= 12^2 - 8^2 \\
 b^2 &= 144 - 64 \\
 b^2 &= 80 \\
 b &= \sqrt{80} \\
 b &= 8.94 \\
 \sin A &= \frac{a}{c} \\
 \sin A &= \frac{8}{12} = \frac{2}{3} \\
 \sin A &= .66667 \\
 .66653 &= \sin 41^\circ 48' \\
 .66667 &= \sin 41^\circ 48' + x \\
 .66675 &= \sin 41^\circ 49' \\
 \frac{14}{22} &= \frac{x}{60} \\
 22x &= 840 \\
 x &= \frac{840}{22} = 38 \\
 .66667 &= \sin 41^\circ 48' 38'' \\
 \text{angle } A &= 41^\circ 48' 38'' \\
 \angle B &= 180^\circ - \angle C - \angle A \\
 \angle B &= 180^\circ - 90^\circ - 41^\circ 48' 38'' \\
 \angle B &= 48^\circ 11' 22'' \\
 \text{Therefore, } \angle A &= 41^\circ 48' 38'' & a &= 8 \text{ inches} \\
 \angle B &= 48^\circ 11' 22'' & b &= 8.94 \text{ inches} \\
 \angle C &= 90^\circ & c &= 12 \text{ inches}
 \end{aligned}$$

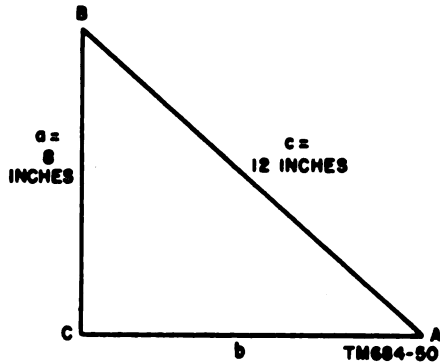


Figure 48. Solving a right triangle, when the hypotenuse and one side are given.

160. Solving a Right Triangle When Two Sides Are Given

When two sides of a right triangle are given, solve for the unknown angles and the hypotenuse as shown in the example below.

Example: Find the unknown angles A and B and side c in right triangle ABC (fig. 48) if side a is 8 inches and side b is 10 inches.

$$c^2 = a^2 + b^2$$

$$c^2 = 64 + 100$$

$$c^2 = 164$$

$$c = \sqrt{164}$$

$$c = 12.8$$

$$\tan A = \frac{a}{b}$$

$$\tan A = \frac{8}{10}$$

$$\tan A = .80000$$

$$.79972 = \tan 38^\circ 39'$$

$$.80000 = \tan 38^\circ 39' + x$$

$$.80020 = \tan 38^\circ 40'$$

$$\frac{28}{48} \text{ or } \frac{7}{12} = \frac{x}{60}$$

$$12x = 420$$

$$x = 35$$

$$.80000 = \tan 38^\circ 39' 35''$$

$$\text{angle } A = 38^\circ 39' 35''$$

$$\angle B = 180^\circ - \angle C - \angle A$$

$$\angle B = 180^\circ - 90^\circ - 38^\circ 39' 35''$$

$$\angle B = 51^\circ 20' 25''$$

$$\text{Therefore, } \angle A = 38^\circ 39' 35''$$

$$\angle B = 51^\circ 20' 25''$$

$$\angle C = 90^\circ$$

$$a = 8 \text{ inches}$$

$$b = 10 \text{ inches}$$

$$c = 12.8 \text{ inches}$$

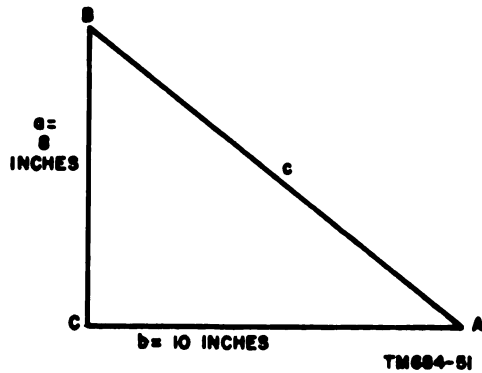


Figure 43. Solving a right triangle when two sides are given.

161. Solving a 30°-60°-90° Triangle When One Side Is Given

In a 30°-60°-90° triangle, the side opposite the 30° angle is equal to one-half the hypotenuse. Refer to paragraph 150c for the derivation of the trigonometric functions. Solve for the unknown sides as shown in the example below.

Example: Find the unknown sides b and c of 30°-60°-90° triangle ABC (fig. 44) if the side opposite the 60° angle is 6 inches.

$$\sin 60^\circ = \frac{\sqrt{3}}{2}; \text{ also, } \sin 60^\circ = \frac{a}{c} = \frac{6}{c}$$

$$\frac{\sqrt{3}}{2} = \frac{6}{c}$$

$$\sqrt{3}c = 12$$

$$c = \frac{12}{\sqrt{3}}$$

Eliminate $\sqrt{3}$ in the denominator by multiplying $\frac{12}{\sqrt{3}}$ by $\frac{\sqrt{3}}{\sqrt{3}}$:

$$c = \frac{12}{\sqrt{3}} \cdot \frac{\sqrt{3}}{\sqrt{3}} = \frac{12\sqrt{3}}{\sqrt{9}} = \frac{12\sqrt{3}}{3} = 4\sqrt{3}$$

$$c = 4\sqrt{3} = 4 \times 1.7321 = 6.9284$$

$$\tan 60^\circ = \frac{\sqrt{3}}{1}; \text{ also, } \tan 60^\circ = \frac{a}{b} = \frac{6}{b}$$

$$\frac{\sqrt{3}}{1} = \frac{6}{b}$$

$$\sqrt{3}b = 6$$

$$b = \frac{6}{\sqrt{3}} \cdot \frac{\sqrt{3}}{\sqrt{3}} = \frac{6\sqrt{3}}{\sqrt{9}} = \frac{6\sqrt{3}}{3} = 2\sqrt{3}$$

$$b = 2\sqrt{3} = 2 \times 1.7321 = 3.4642$$

Therefore, $a = 6$ inches

$b = 3.4642$ inches

$c = 6.9284$ inches

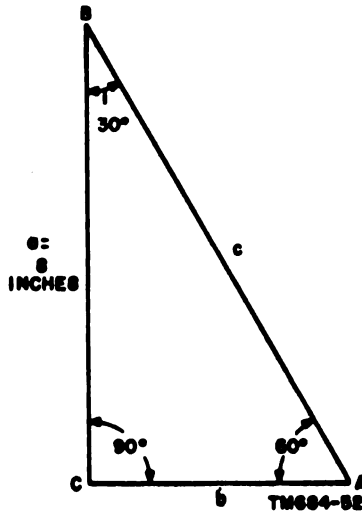


Figure 44. Solving a 30°-60°-90° triangle when one side is given.

162. Solving a 45°-45°-90° Triangle When One Side Is Given

In a 45°-45°-90° triangle, the sides opposite the equal angles are equal. Refer to paragraph 150b for the derivation of the trigonometric functions. Solve for the unknown sides as shown in the example below.

Example: Find the unknown sides a , b , and c of 45°-45°-90° triangle ABC (fig. 45) if the side opposite acute angle A is 5 inches.

$$\sin 45^\circ = \frac{1}{\sqrt{2}}; \text{ also, } \sin A = \frac{a}{c} = \frac{5}{c}$$

$$\frac{1}{\sqrt{2}} = \frac{5}{c}$$

$$c = 5\sqrt{2}$$

$$c = 5 \times 1.4142 = 7.0710$$

$$\tan 45^\circ = \frac{1}{1}; \text{ also, } \tan A = \frac{a}{b} = \frac{5}{b}$$

$$\frac{1}{1} = \frac{5}{b}$$

$$[b = 5]$$

Therefore, $a = 5$ inches

$b = 5$ inches

$c = 7.071$ inches

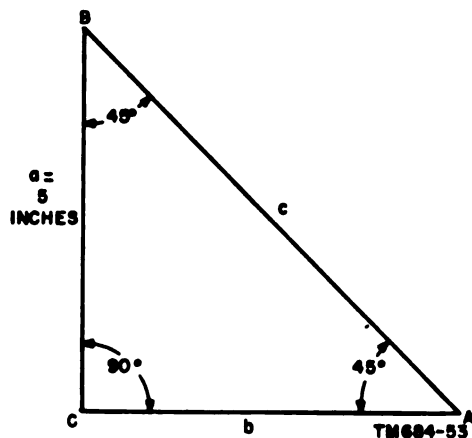


Figure 45. Solving a 45°-45°-90° triangle when one side is given.

163. Angles of Elevation and Depression

When an object is higher than the observer's eye, the angle between the horizontal and the line of sight to the object is called the *angle of elevation* (A, fig. 46). When an object is lower than the observer's eye, the angle between the line of sight to the object and the horizontal is called the *angle of depression* (B, fig. 46).

Example:

A television antenna mast is 450 feet high (fig. 47). Find to the nearest second the angle of elevation to its top at a point 200 feet from the base of the mast.

$$\tan A = \frac{a}{b}$$

$$\tan A = \frac{450}{200}$$

$$\tan A = 2.2500$$

$$2.2496 = \tan 66^\circ 2'$$

$$2.2500 = \tan 66^\circ 2' + x$$

$$2.2513 = \tan 66^\circ 3'$$

$$\frac{4}{17} = \frac{x}{60}$$

$$17x = 240$$

$$x = 14$$

$$2.2500 = \tan 66^\circ 2' 14''$$

$$A = 66^\circ 2' 14''$$

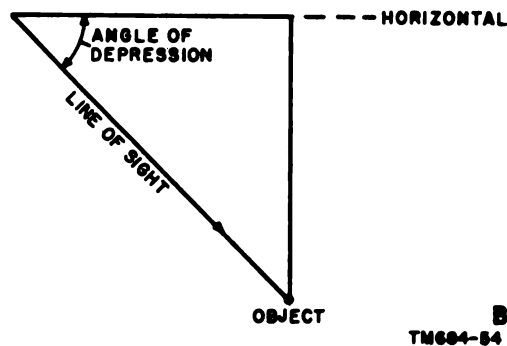
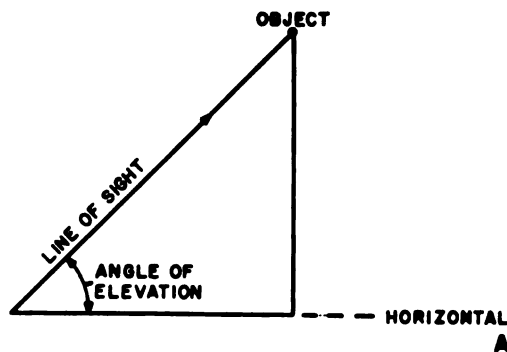


Figure 46. Angles of elevation and depression.

164. Review Problems—Natural Trigonometric Functions

a. Find the sine, cosine, tangent, and cotangent of the following angles:

- (1) 1° 30'
- (2) 15° 25'
- (3) 32° 10'
- (4) 36° 39'
- (5) 44° 59'
- (6) 44° 59' 45"
- (7) 35° 12' 15"
- (8) 54° 27' 32"
- (9) 48° 25' 37"
- (10) 67° 33' 42"

b. Solve for the values of the following angles in degrees, minutes and seconds:

- (1) $\sin A = .25737$
- (2) $\cot A = .43279$

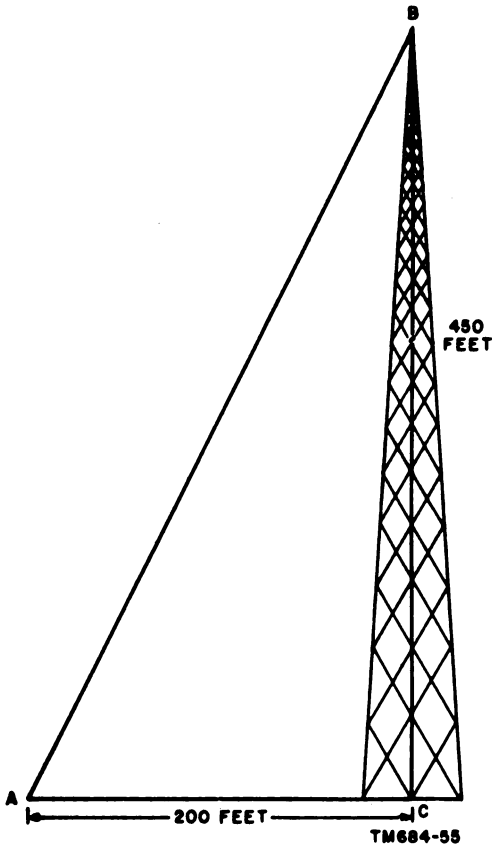


Figure 47. Finding the angle of elevation to top of an antenna mast.

- (3) $\cos A = .94000$
- (4) $\tan A = .47237$
- (5) $\cot A = 1.17529$
- (6) $\cos A = .36243$
- (7) $\sin A = .37778$
- (8) $\tan A = .67676$
- (9) $\tan A = 1.29000$
- (10) $\cot A = .79553$

c. Solve for the following (angle $C = 90^\circ$):

- (1) Angle A in right triangle ABC when $a = 19$ and $c = 27$.
- (2) Side a in right triangle ABC when $A = 37^\circ 15'$ and $c = 17$.
- (3) Side c in right triangle ABC when $A = 42^\circ 37' 15''$ and $a = 22$.
- (4) Side B in right triangle ABC when $A = 37^\circ 45' 42''$ and $c = 25$.

- (5) Side c in right triangle ABC when $A = 14^\circ 35'$ and $b = 12$.
- (6) Angle A in right triangle ABC when $b = 7$ and $c = 12$.
- (7) Side a in right triangle ABC when $A = 47^\circ 22' 52''$ and $b = 31$.
- (8) Side b in right triangle ABC when $A = 56^\circ 31' 25''$ and $a = 25$.
- (9) Angle A in right triangle ABC when $a = 17$ and $b = 23$.
- (10) Side b in right triangle ABC when $A = 7^\circ 32' 54''$ and $a = 17$.
- (11) Side c in right triangle ABC when $a = 15$ and $b = 27$.
- (12) Angle A in right triangle ABC when $a = 15$ and $b = 27$.

d. Solve the following problems:

- (1) Over a distance of 300 feet, the angle of elevation of a road is $8^\circ 24' 30''$. What is the rise in feet?
- (2) The angle of elevation to the top of an antenna mast is $34^\circ 17' 50''$. If the distance from the transit to the center of the mast is 110 feet, how high is the mast? The transit is 5 feet high.
- (3) If a ladder 15 feet long just touches the top of a wall and subtends an angle of $35^\circ 24' 16''$ with the ground, how far is the lower end of the ladder from the wall and how high is the wall?
- (4) A captive balloon is anchored by 950 feet of cable. A man observes that the angle of elevation from his point of observation to the bottom of the balloon is $16^\circ 47' 12''$. How far is he from the balloon anchor?
- (5) An excavation is 33 feet wide. The angle of depression from the top of one side to the bottom of the other side is $19^\circ 34' 24''$. How deep is the excavation?
- (6) The angle of elevation from a given

- point to the top of a tower is $17^{\circ} 37' 15''$. Moving back 40 feet in a direct line, the angle of elevation from this point to the top of the tower is $15^{\circ} 35' 20''$. Find the height of the tower.
- (7) To determine the height of a tower, two sights are taken on a straight line perpendicular to the tower. If the distance between the points of observation is 60 feet and the angles of elevation are $32^{\circ} 30' 15''$ and $28^{\circ} 15' 30''$, respectively, what is the height of the tower?
- (8) From a point in an open field a man sights on two mileposts along the side of a highway. The angles formed by an imaginary line perpendicular to the highway and the sights on the mileposts are $33^{\circ} 20'$ and $39^{\circ} 17' 30''$. How far is the man from the closest point on the highway?
- (9) An airplane is flying between two towns at an altitude of 5,000 feet. Measured with respect to the horizontal, at a given moment, the angle to the outskirts of one town is $50^{\circ} 26' 14''$, while the angle to the outskirts of the other town is $64^{\circ} 44' 12''$. How far apart, in a direct line, are the two towns?
- (10) A radio antenna on top of a building is 10 feet high. The angle of elevation to the base of the pole is $37^{\circ} 17' 20''$; the angle of elevation to the top of the antenna is $40^{\circ} 30' 15''$. How high is the building?
- (11) In a 45° - 45° - 90° right triangle the hypotenuse is 2 inches long. Find the length of the other two sides.
- (12) In a 30° - 60° - 90° right triangle the hypotenuse is 6 inches long. Find the length of the other two sides.

Section III. TRIGONOMETRIC LAWS

165. Solving Oblique Triangles

An oblique triangle is one in which one of the angles is a right angle. The formulas in this section are used primarily to solve oblique triangles, but may also be used to solve right triangles. In the solution of triangles by trigonometric laws, the four following cases arise:

- a. When any side and any two angles are given.
- b. When any two sides and the angle opposite one of them are given.

c. When any two sides and the angle included between them are given.

d. When the three sides are given.

166. Law of Sines

In any triangle, the sides are proportional to the sines of the opposite angles.

$$\text{Thus, } \frac{a}{\sin A} = \frac{b}{\sin B} = \frac{c}{\sin C}.$$

a. *Two Angles and One Side Given.*

Example: Solve for the unknowns in oblique triangle ABC (fig. 48) when angle $A = 35^{\circ} 47' 36''$, angle $B = 68^{\circ} 42' 27''$, and the side opposite angle A is 15 inches.

$$\angle C = 180^{\circ} - \angle A - \angle B$$

$$\angle C = 180^{\circ} - 35^{\circ} 47' 36'' - 68^{\circ} 42' 27''$$

$$\angle C = 75^{\circ} 29' 57''$$

$$\frac{a}{\sin A} = \frac{b}{\sin B}$$

$$b \sin A = a \sin B$$

$$b = \frac{a \sin B}{\sin A}$$

$$b = \frac{15 \sin 68^{\circ} 42' 27''}{\sin 35^{\circ} 47' 36''}$$

$$\begin{aligned}\sin 68^\circ 42' &= .98169 \\ \sin 68^\circ 42' 27'' &= .98169 + x \\ \sin 68^\circ 48' &= .98180\end{aligned}$$

$$\frac{27}{60} \text{ or } \frac{9}{20} = \frac{x}{.00011}$$

$$20x = .00099$$

$$x = .000049 = .00005$$

$$\sin 68^\circ 42' 27'' = .98169 + .00005 = .98174$$

$$\sin 35^\circ 47' = .58472$$

$$\sin 35^\circ 47' 36'' = .58472 + x$$

$$\sin 35^\circ 48' = .58496$$

$$\frac{36}{60} \text{ or } \frac{3}{5} = \frac{x}{.00024}$$

$$5x = .00072$$

$$x = .00014$$

$$\sin 35^\circ 47' 36'' = .58472 + .00014 = .58486$$

$$b = \frac{15 \times .98174}{.58486}$$

$$b = \frac{13.97610}{.58486}$$

$$b = 23.89$$

$$\frac{a}{\sin A} = \frac{c}{\sin C}$$

$$c \sin A = a \sin C$$

$$c = \frac{a \sin C}{\sin A}$$

$$c = \frac{15 \sin 75^\circ 29' 57''}{\sin 35^\circ 47' 36''}$$

$$\sin 75^\circ 29' = .96807$$

$$\sin 75^\circ 29' 57'' = .96807 + x$$

$$\sin 75^\circ 30' = .96815$$

$$\frac{57}{60} \text{ or } \frac{19}{20} = \frac{x}{.00008}$$

$$20x = .00152$$

$$x = .000076 = .00008$$

$$\sin 75^\circ 29' 57'' = .96807 + .00008 = .96815$$

$$c = \frac{15 \times .96815}{.58486}$$

$$c = \frac{14.52225}{.58486}$$

$$c = 24.83$$

Therefore, $\angle A = 35^\circ 47' 36''$

$\angle B = 68^\circ 42' 27''$

$\angle C = 75^\circ 29' 57''$

$a = 15$ inches.

$b = 23.89$ inches

$c = 24.83$ inches

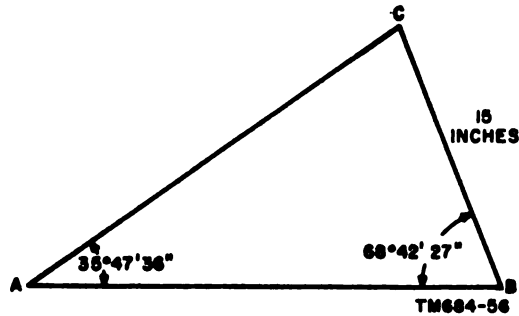


Figure 48. Solving an oblique triangle by the law of sines when two angles and a side are given.

b. Two Sides and One Angle Given.

Example: Find the unknowns in oblique triangle ABC (fig. 49) when angle $A = 53^\circ 35' 40''$, the side opposite angle A is 10 inches, and the side opposite angle B is 12 inches.

$$\frac{a}{\sin A} = \frac{b}{\sin B}$$

$$a \sin B = b \sin A$$

$$\sin B = \frac{b \sin A}{a}$$

$$\sin B = \frac{12 \sin 53^\circ 35' 40''}{10}$$

$$\begin{aligned} \sin 53^\circ 35' &= .80472 \\ \sin 53^\circ 35' 40'' &= .80472 + x \\ \sin 53^\circ 36' &= .80489 \end{aligned}$$

$$\frac{40}{60} \text{ or } \frac{2}{3} = \frac{x}{.00017}$$

$$3x = .00084$$

$$x = .00011$$

$$\sin 53^\circ 35' 40'' = .80472 + .00011 = .80483$$

$$\sin B = \frac{12 \times .80483}{10}$$

$$\sin B = \frac{4.82898}{5}$$

$$\sin B = .965796 = .96580$$

$$\begin{aligned} .96578 &= \sin 74^\circ 58' \\ .96580 &= \sin 74^\circ 58' + x \\ .96585 &= \sin 74^\circ 59' \end{aligned}$$

$$\frac{2}{7} = \frac{x}{60}$$

$$7x = 120$$

$$x = 17$$

$$.96580 = \sin 74^\circ 58' 17''$$

$$\angle B = 74^\circ 58' 17''$$

$$\angle C = 180^\circ - \angle A - \angle B$$

$$\angle C = 180^\circ - 58^\circ 35' 40'' - 74^\circ 58' 17''$$

$$\angle C = 51^\circ 26' 3''$$

$$\frac{a}{\sin A} = \frac{c}{\sin C}$$

$$c \sin A = a \sin C$$

$$c = \frac{a \sin C}{\sin A}$$

$$c = \frac{10 \sin 51^\circ 26' 3''}{\sin 58^\circ 35' 40''}$$

$$\sin 51^\circ 26' = .78188$$

$$\sin 51^\circ 26' 3'' = .78188 + x$$

$$\sin 51^\circ 27' = .78206$$

$$\frac{3}{60} \text{ or } \frac{1}{20} = \frac{x}{.00018}$$

$$20x = .00018$$

$$x = .000009 = .00001$$

$$\sin 51^\circ 26' 3'' = .78188 + .00001 = .78189$$

$$c = \frac{10 \times .78189}{.80483}$$

$$c = \frac{7.8189}{.80483}$$

$$c = 9.71$$

Therefore, $\angle A = 58^\circ 35' 40''$

$\angle B = 74^\circ 58' 17''$

$\angle C = 51^\circ 26' 3''$

$a = 10$ inches

$b = 12$ inches

$c = 9.71$ inches

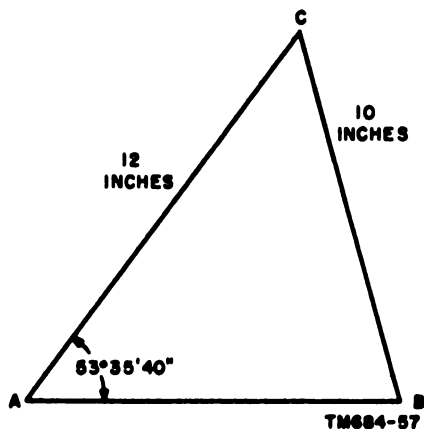


Figure 49. Solving an oblique triangle by the law of sines when two sides and an angle are given.

167. Law of Cosines

In any triangle, the square of any side equals the sum of the squares of the other two sides minus twice the product of these two sides times the cosine of the angle between them.

Thus, $a^2 = b^2 + c^2 - 2bc \cos A$

$$b^2 = a^2 + c^2 - 2ac \cos B$$

$$c^2 = a^2 + b^2 - 2ab \cos C$$

Example: Find the unknowns in oblique triangle ABC (fig. 50) when angle $C = 56^\circ 45' 24''$, the side opposite angle A is 6 inches, and the side opposite angle B is 8 inches.

$$\begin{aligned}
 c^2 &= a^2 + b^2 - 2ab \cos C \\
 c^2 &= 6^2 + 8^2 - 2(6)(8) \cos 56^\circ 45' 24'' \\
 c^2 &= 36 + 64 - 96 \cos 56^\circ 45' 24'' \\
 c^2 &= 100 - 96 \cos 56^\circ 45' 24'' \\
 \cos 56^\circ 45' &= .54829 \\
 \cos 56^\circ 45' 24'' &= .54829 - x \\
 \cos 56^\circ 46' &= .54805 \\
 \frac{24}{60} \text{ or } \frac{2}{5} &= \frac{x}{.00024} \\
 5x &= .00048 \\
 x &= .000096 \text{ or } .00010 \\
 \cos 56^\circ 45' 24'' &= .54829 - .00010 = .54819
 \end{aligned}$$

$$c^2 = 100 - 96(.54819)$$

$$c^2 = 100 - 52.62624$$

$$c^2 = 47.37376$$

$$c = \sqrt{47.37376}$$

$$c = 6.882$$

$$\frac{a}{\sin A} = \frac{c}{\sin C}$$

$$c \sin A = a \sin C$$

$$\sin A = \frac{a \sin C}{c}$$

$$\sin A = \frac{6 \sin 56^\circ 45' 24''}{6.882}$$

$$\sin 56^\circ 45' = .83629$$

$$\sin 56^\circ 45' 24'' = .83629 + x$$

$$\sin 56^\circ 46' = .83645$$

$$\frac{24}{60} \text{ or } \frac{2}{5} = \frac{x}{.00016}$$

$$5x = .00082$$

$$x = .000064 = .00006$$

$$\sin 56^\circ 45' 24'' = .83629 + .00006 = .83635$$

$$\sin A = \frac{6(.83635)}{6.882}$$

$$\sin A = \frac{5.01810}{6.882}$$

$$\sin A = .72916$$

$$.72897 = \sin 46^\circ 48'$$

$$.72916 = \sin 46^\circ 48' + x$$

$$.72917 = \sin 46^\circ 49'$$

$$\frac{19}{20} = \frac{x}{60}$$

$$20x = 1140$$

$$x = 57$$

$$.72917 = \sin 46^\circ 48' 57''$$

$$\angle A = 46^\circ 48' 57''$$

$$\angle B = 180^\circ - \angle C - \angle A$$

$$\angle B = 180^\circ - 56^\circ 45' 24'' - 46^\circ 48' 57''$$

$$\angle B = 76^\circ 25' 39''$$

Therefore, $\angle A = 46^\circ 48' 57''$

$$\angle B = 76^\circ 25' 39''$$

$$\angle C = 56^\circ 45' 24''$$

$$a = 6 \text{ inches}$$

$$b = 8 \text{ inches}$$

$$c = 6.882 \text{ inches}$$

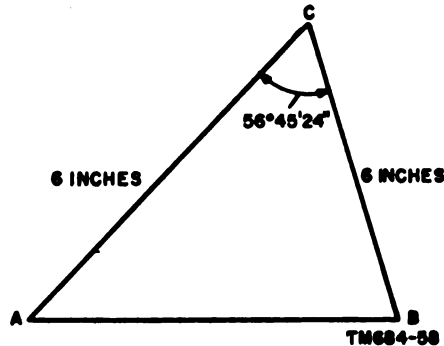


Figure 50. Solving an oblique triangle by the law of cosines when an angle and two sides are given.

168. Law of Tangents

The law of tangents is expressed by the formula $\frac{a - b}{a + b} = \frac{\tan \frac{1}{2}(A - B)}{\tan \frac{1}{2}(A + B)}$, where a and b are any two sides and A and B are the angles opposite these sides.

Example: Find the unknowns in oblique triangle ABC (fig. 51) when two sides of the triangle are 9 and 11 inches, respectively, and angle C , the angle included between these two sides, is $40^\circ 40' 40''$.

$$\angle A + \angle B + \angle C = 180^\circ$$

$$\angle A + \angle B + 40^\circ 40' 40'' = 180^\circ$$

$$\angle A + \angle B = 180^\circ - 40^\circ 40' 40''$$

$$\angle A + \angle B = 139^\circ 19' 20''$$

$$\frac{1}{2}(\angle A + \angle B) = \frac{139^\circ 19' 20''}{2}$$

$$\frac{1}{2}(\angle A + \angle B) = 69^\circ 39' 40''$$

$$\frac{a - b}{a + b} = \frac{\tan \frac{1}{2}(\angle A - \angle B)}{\tan \frac{1}{2}(\angle A + \angle B)}$$

$$\frac{11 - 9}{11 + 9} \text{ or } \frac{2}{20} = \frac{\tan \frac{1}{2}(\angle A - \angle B)}{\tan 69^\circ 39' 40''}$$

$$20 \tan \frac{1}{2}(\angle A - \angle B) = 2 \tan 69^\circ 39' 40''$$

$$10 \tan \frac{1}{2}(\angle A - \angle B) = \tan 69^\circ 39' 40''$$

$$\tan \frac{1}{2}(\angle A - \angle B) = \frac{\tan 69^\circ 39' 40''}{10}$$

$$\tan 69^\circ 39' = 2.69612$$

$$\tan 69^\circ 39' 40'' = 2.69612 + x$$

$$\tan 69^\circ 40' = 2.69853$$

$$\frac{40}{60} \text{ or } \frac{2}{3} = \frac{x}{.00241}$$

$$3x = .00482$$

$$x = .00161$$

$$\tan 69^\circ 39' 40'' = 2.69612 + .00161 = 2.69773$$

$$\tan \frac{1}{2}(A - B) = \frac{2.69773}{10}$$

$$\tan \frac{1}{2}(A - B) = .26977$$

$$.26951 = \tan 15^\circ 5'$$

$$.26977 = \tan 15^\circ 5' + x$$

$$.26982 = \tan 15^\circ 6'$$

$$\frac{26}{31} = \frac{x}{60}$$

$$31x = 1560$$

$$x = 50$$

$$.26977 = \tan 15^\circ 5' 50''$$

$$\frac{1}{2}(A - B) = 15^\circ 5' 50''$$

$$\frac{1}{2}(A + B) = \frac{1}{2}A + \frac{1}{2}B = 69^\circ 39' 40''$$

$$\frac{1}{2}(A - B) = \frac{1}{2}A - \frac{1}{2}B = 15^\circ 5' 50''$$

$$\text{(add)} \quad \frac{A}{} = 84^\circ 44' 90''$$

$$\angle A = 84^\circ 45' 30''$$

$$\frac{1}{2}(A + B) = \frac{1}{2}A + \frac{1}{2}B = 69^\circ 38' 100''$$

$$\frac{1}{2}(A - B) = \frac{1}{2}A - \frac{1}{2}B = 15^\circ 5' 50''$$

$$\text{(subtract)} \quad \frac{B}{} = 54^\circ 33' 50''$$

$$\angle B = 54^\circ 33' 50''$$

$$\frac{a}{\sin A} = \frac{c}{\sin C}$$

$$c \sin A = a \sin C$$

$$c = \frac{a \sin C}{\sin A}$$

$$c = \frac{11 \sin 40^\circ 40' 40''}{\sin 84^\circ 45' 30''}$$

$$\sin 40^\circ 40' = .65166$$

$$\sin 40^\circ 40' 40'' = .65166 + x$$

$$\sin 40^\circ 40' 41'' = .65188$$

$$\frac{40}{60} \text{ or } \frac{2}{3} = \frac{x}{.00022}$$

$$3x = .00044$$

$$x = .000146 = .00015$$

$$\sin 40^\circ 40' 40'' = .65166 + .00015 = .65181$$

$$\sin 84^\circ 45' = .99580$$

$$\sin 84^\circ 45' 30'' = .99580 + x$$

$$\sin 84^\circ 46' = .99583$$

$$\frac{30}{60} \text{ or } \frac{1}{2} = \frac{x}{.00003}$$

$$2x = .00003$$

$$x = .000015 = .00002$$

$$\sin 84^\circ 45' 30'' = .99580 + .00002 = .99582$$

$$c = \frac{11 \sin 40^\circ 40' 40''}{\sin 84^\circ 45' 30''}$$

$$c = \frac{11 \times .65181}{.99582}$$

$$c = \frac{7.16991}{.99582}$$

$$c = 7.2$$

Therefore, $\angle A = 84^\circ 45' 30''$ $a = 11$ inches
 $\angle B = 54^\circ 33' 50''$ $b = 9$ inches
 $\angle C = 40^\circ 40' 40''$ $c = 7.2$ inches

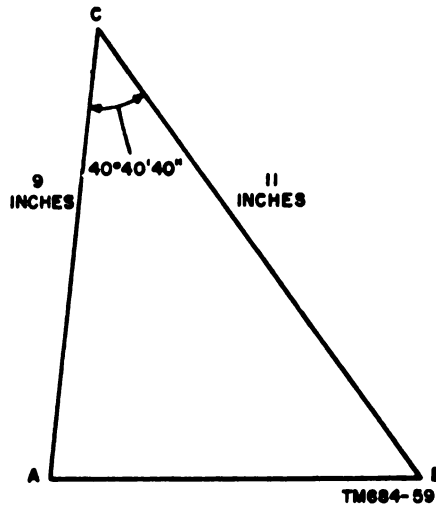


Figure 51. Solving an oblique triangle by the law of tangents when an angle and two sides are given.

169. Finding an Angle When Three Sides Are Given

The following formulas are used to find the angles of a triangle when three sides of the triangle are given:

$$\sin \frac{1}{2}A = \sqrt{\frac{(s-b)(s-c)}{bc}}$$

$$\sin \frac{1}{2}B = \sqrt{\frac{(s-a)(s-c)}{ac}}$$

$$\sin \frac{1}{2}C = \sqrt{\frac{(s-a)(s-b)}{ab}}$$

In these formulas, a , b , and c are the sides of the triangle, and $s = \frac{1}{2}(a + b + c)$.

Example: Find the angles of an oblique triangle if $a = 5$ inches, $b = 8$ inches, and $c = 11$ inches.

$$\begin{aligned} s &= \frac{1}{2}(a + b + c) \\ s &= \frac{1}{2}(5 + 8 + 11) \\ s &= \frac{1}{2}(24) \\ s &= 12 \end{aligned}$$

$$\begin{aligned} \sin \frac{1}{2}A &= \sqrt{\frac{(s-b)(s-c)}{bc}} \\ \sin \frac{1}{2}A &= \sqrt{\frac{(12-8)(12-11)}{(8)(11)}} \\ \sin \frac{1}{2}A &= \sqrt{\frac{(4)(1)}{88}} \\ \sin \frac{1}{2}A &= \sqrt{\frac{4}{88}} = \sqrt{\frac{1}{22}} \\ \sin \frac{1}{2}A &= \sqrt{.0454545} \end{aligned}$$

$$\begin{aligned}
\sin \frac{1}{2}A &= .21819 \\
.21808 &= \sin 12^\circ 18' \\
.21819 &= \sin 12^\circ 18' + x \\
.21831 &= \sin 12^\circ 19' \\
\frac{16}{28} \text{ or } \frac{4}{7} &= \frac{x}{60} \\
7x &= 240 \\
x &= 34 \\
.21819 &= \sin 12^\circ 18' 34'' \\
\frac{1}{2}A &= 12^\circ 18' 34'' \\
\angle A &= 24^\circ 36' 68'' \text{ or } 24^\circ 37' 8'' \\
\sin \frac{1}{2}B &= \sqrt{\frac{(s-a)(s-c)}{ac}} \\
\sin \frac{1}{2}B &= \sqrt{\frac{(12-5)(12-11)}{(5)(11)}} \\
\sin \frac{1}{2}B &= \sqrt{\frac{(7)(1)}{55}} \\
\sin \frac{1}{2}B &= \sqrt{\frac{7}{55}} \\
\sin \frac{1}{2}B &= \sqrt{.1272727} \\
\sin \frac{1}{2}B &= .35675 \\
.35674 &= \sin 20^\circ 54' \\
.35675 &= \sin 20^\circ 54' + x \\
.35701 &= \sin 20^\circ 55' \\
\frac{1}{27} &= \frac{x}{60} \\
27x &= 60 \\
x &= 2 \\
.35675 &= \sin 20^\circ 54' 2'' \\
\frac{1}{2}B &= 20^\circ 54' 2'' \\
\angle B &= 40^\circ 108' 4'' \text{ or } 41^\circ 48' 4'' \\
\angle C &= 180^\circ - \angle A - \angle B \\
\angle C &= 180^\circ - 24^\circ 37' 8'' - 41^\circ 48' 4'' \\
\angle C &= 180^\circ - 66^\circ 25' 12'' \\
\angle C &= 113^\circ 34' 48''
\end{aligned}$$

Therefore, $\angle A = 24^\circ 37' 8''$
 $\angle B = 41^\circ 48' 4''$
 $\angle C = 113^\circ 34' 48''$

170. Finding the Area of a Triangle When Two Sides and the Included Angle Are Given

The formula for finding the area of a triangle when two sides and the included angle are given is $S = \frac{1}{2} ab \sin C$ where S is the area of the triangle, a and b are the given sides, and C is the included angle.

Example: Find the area of oblique triangle ABC (fig. 52) when two sides are 7 and 8 inches, respectively, and the included angle is $50^\circ 50' 50''$.

$$\begin{aligned}
S &= \frac{1}{2} ab \sin C \\
S &= \frac{1}{2} \times 7 \times 8 \times \sin 50^\circ 50' 50'' \\
\sin 50^\circ 50' &= .77531 \\
\sin 50^\circ 50' 50'' &= .77531 + x
\end{aligned}$$

$$\begin{aligned} \sin 50^\circ 51' &= .77550 \\ \frac{50}{60} \text{ or } \frac{5}{6} &= \frac{x}{.00019} \\ 6x &= .00095 \\ x &= .00016 \\ \sin 50^\circ 50' 50'' &= .77531 + .00016 = .77547 \\ S &= \frac{1}{2} \times 7 \times 8 \times .77547 = 21.71316 \\ S &= 21.71316 \text{ square inches} \end{aligned}$$

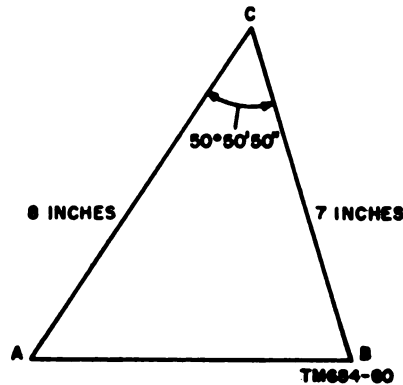


Figure 58. Solving for the area of an oblique triangle when two sides and the included angle are given.

171. Finding the Area of a Triangle When Two Angles and a Side Are Given

The formula for finding the area of a triangle when two angles and a side are given is $S = \frac{a^2 \sin B \sin C}{2 \sin A}$ where S is the area of the triangle, B and C are the given angles, and a is the given side.

Example: Find the area of oblique triangle ABC (fig. 58) when the two angles are $38^\circ 42' 48''$ and $68^\circ 52' 42''$ and the side is 10 inches.

$$\begin{aligned} \angle A &= 180^\circ - \angle B - \angle C \\ \angle A &= 180^\circ - 38^\circ 42' 48'' - 68^\circ 52' 42'' \\ \angle A &= 180^\circ - 107^\circ 35' 30'' \\ \angle A &= 72^\circ 24' 30'' \\ S &= \frac{a^2 \sin B \sin C}{2 \sin A} \\ S &= \frac{10^2 \sin 38^\circ 42' 48'' \sin 68^\circ 52' 42''}{2 \sin 72^\circ 24' 30''} \\ \sin 38^\circ 42' &= .62524 \\ \sin 38^\circ 42' 48'' &= .62524 + x \\ \sin 38^\circ 43' &= .62547 \\ \frac{48}{60} \text{ or } \frac{4}{5} &= \frac{x}{.00023} \\ 5x &= .00092 \\ x &= .00018 \\ \sin 38^\circ 42' 48'' &= .62524 + .00018 = .62542 \\ \sin 68^\circ 52' &= .93274 \\ \sin 68^\circ 52' 42'' &= .93274 + x \end{aligned}$$

$$\begin{aligned}
\sin 68^\circ 53' &= .93285 \\
\frac{42}{60} \text{ or } \frac{7}{10} &= \frac{x}{.00011} \\
10x &= .00077 \\
x &= .000077 \text{ or } .00008 \\
\sin 68^\circ 53' 42'' &= .93274 + .00008 = .93282 \\
\sin 72^\circ 24' &= .95319 \\
\sin 72^\circ 24' 30'' &= .95319 + x \\
\sin 72^\circ 25' &= .95328 \\
\frac{30}{60} \text{ or } \frac{1}{2} &= \frac{x}{.00009} \\
2x &= .00009 \\
x &= .000045 \text{ or } .00005 \\
\sin 72^\circ 24' 30'' &= .95319 + .00005 = .95324 \\
S &= \frac{100 \times .62542 \times .93282}{2 \times .95324} \\
S &= \frac{50 \times .62542 \times .93282}{.95324} \\
S &= \log 50 + \log .62542 + \log .93282 - \log .95324 \\
\log 50 &= 1.6990 \\
\log .62500 &= 9.7959-10 \\
\log .62542 &= 9.7959-10 + x \\
\log .62600 &= 9.7966-10 \\
\frac{42}{100} &= \frac{x}{.0007} \\
100x &= .0294 \\
x &= .000294 \text{ or } .0003 \\
\log .62542 &= 9.7959-10 + .0003 = 9.7962-10 \\
\log .93200 &= 9.9694-10 \\
\log .93282 &= 9.9694-10 + x \\
\log .93300 &= 9.9699-10 \\
\frac{82}{100} &= \frac{x}{.0005} \\
100x &= .0410 \\
x &= .00041 \text{ or } .0004 \\
\log .93282 &= 9.9694-10 + .0004 = 9.9698-10 \\
\log .95300 &= 9.9791-10 \\
\log .95324 &= 9.9791-10 + x \\
\log .95400 &= 9.9795-10 \\
\frac{24}{100} &= \frac{x}{.0004} \\
100x &= .0096 \\
x &= .000096 \text{ or } .0001 \\
\log .95324 &= 9.9791-10 + .0001 = 9.9792-10 \\
S &= 1.6990 + 9.7962-10 + 9.9698-10 - 9.9792-10 \\
&1.6990 \\
&9.7962-10 \\
&+ 9.9698-10 \\
&\hline
&21.4650-20 \\
&- 9.9792-10 \\
&\hline
&11.4858-10 \text{ or } 1.4858
\end{aligned}$$

$$\begin{aligned}
\text{antilog } 1.4857 &= 30.6 \\
\text{antilog } 1.4858 &= 30.6 + x \\
\text{antilog } 1.4871 &= 30.7 \\
\frac{1}{14} &= \frac{x}{.1} \\
14x &= .1 \\
x &= .007 \\
\text{antilog } 1.4858 &= 30.6 + .007 = 30.607 \\
S &= 30.607 \text{ square inches}
\end{aligned}$$

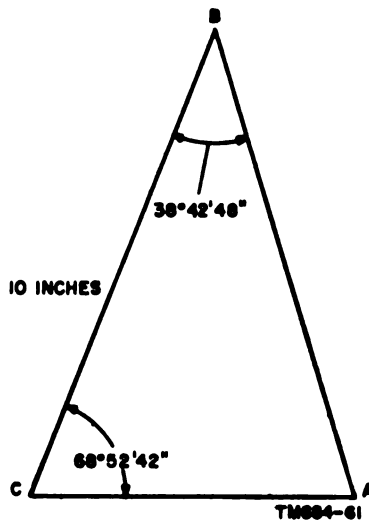


Figure 59. Solving for the area of an oblique triangle when two angles and a side are given.

172. Finding the Area of Triangle When Three Sides Are Given

To find the area of triangle when three sides are given, use the formula

$$S = \sqrt{s(s-a)(s-b)(s-c)}$$

where a , b , and c are the sides of the triangle and $s = \frac{1}{2}(a + b + c)$.

Example: Find the area of an oblique triangle when the sides are 8, 11, and 15 inches, respectively.

$$\begin{aligned}
s &= \frac{1}{2}(a + b + c) \\
s &= \frac{1}{2}(8 + 11 + 15) \\
s &= \frac{1}{2}(34) \\
s &= 17 \\
S &= \sqrt{s(s-a)(s-b)(s-c)} \\
S &= \sqrt{17(17-8)(17-11)(17-15)} \\
S &= \sqrt{17(9)(6)(2)} \\
S &= \sqrt{1836} \\
S &= 42.84 \text{ square inches}
\end{aligned}$$

173. Review Problems—Trigonometric Laws

a. In an oblique triangle ABC , angle $A = 42^\circ 15' 12''$, angle $B = 75^\circ 28' 10''$, and side b measures 21 inches. Solve the triangle for angle C and side a .

b. In an oblique triangle ABC , angle $C = 52^\circ 30'$, side $b = 45$ inches, and side $c = 38$ inches. Solve for angle B .

c. In an oblique triangle ABC , sides a , b , and c opposite angles A , B , and C have lengths of 9, 16, and 21 inches, respectively. Find the three angles of the triangle.

d. In an oblique triangle where a and b are any two sides and A and B are the angles opposite these sides, angle $C = 57^\circ 20' 45''$, $a =$

9.78 inches, and $b = 6.47$ inches. Find angles A and B .

e. The three sides of a triangle are 40, 37, and 13 inches, respectively. Find the area of the triangle.

f. Two sides of an oblique triangle measure 12 and 18 feet, respectively. The angle between the two sides is 115° . Find the area of the triangle.

g. In a triangle ABC , angle $A = 30^\circ$ and angle $B = 60^\circ$. The side opposite angle $C = 16$ inches. Find the area of the triangle.

h. In an oblique triangle ABC , angle $C = 62^\circ 50'$. The side opposite angle A measures 9.65 inches, and the side opposite angle B measures 17.85 inches. Find angles A and B and the length of the side opposite angle C .

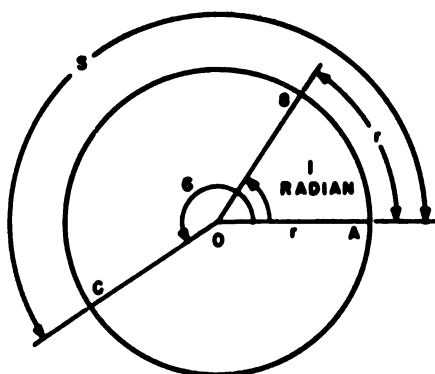
CHAPTER 11

RADIANs

174. Angular Measurement Using Radians

a. *Definition.* A radian is a unit of angular measurement equal to that angle which, when its vertex is upon the center of a circle, intercepts an arc that is equal in length to the radius of the circle. Thus, in figure 54, central angle AOB is equal to 1 radian because arc AB is equal to radius OA .

- (1) The system that makes use of the radian is called the *natural system* of angular measurement because it has no arbitrary unit, such as the degree, but is founded upon the observation that the absolute size of any angle is the ratio of its arc to the radius of that arc. Where the arc and radius are equal, the ratio is 1, and this unit is the radian.
- (2) The natural system of angular measurement—also called the circular system and the radian system—is used



TM684-62

Figure 54. The radian or circular system of measurement.

extensively in electrical formulas (part II).

b. *Finding Any Angle.* To find any angle, such as angle AOC in figure 54, when the length of arc AB is known, determine the number of times that radius r will go into arc length ABC , thus determining the number of radians in the angle.

Thus,

$$\text{Angle} = \frac{\text{arc}}{\text{radius}}$$

or, if angle AOC is denoted by the Greek letter θ (Theta) and arc ABC by s ,

$$\theta = \frac{s}{r} \text{ radians}$$

Example: A circle has a radius of 6 inches. Find the angle subtended at the center of the circle by an arc 9 inches in length.

$$\begin{aligned} \theta &= \frac{s}{r} \\ &= \frac{9}{6} \\ &= 1.5 \text{ radians} \end{aligned}$$

c. *Finding Length of Arc.* To find the length of an arc intercepted by a central angle when the radius of the circle and the number of radians in the angle are known, use the formula in b above in the form—

$$s = r\theta$$

Example: A circle has a radius of 5 feet. How long is the arc intercepted by a central angle of 1.5 radians?

$$\begin{aligned} s &= r\theta \\ &= 5 \times 1.5 \\ &= 7.5 \text{ feet} \end{aligned}$$

175. The Relation Between Degrees and Radians

a. General. It is often necessary to convert an angle from degrees to radians or from radians to degrees. If the angle is one complete revolution, the arc is one complete circumference of a circle; thus, it is 2π times the radius. Therefore, the angle is equal to $2\pi r$ divided by r —that is, 2π radians ($\pi = 3.1416$).

Therefore,

$$1 \text{ revolution} = 2\pi \text{ radians}$$

also

$$1 \text{ revolution} = 360^\circ$$

Thus,

$$2\pi \text{ radians} = 360^\circ$$

$$1 \text{ radian} = \frac{360^\circ}{2\pi} = \frac{180^\circ}{\pi} = 57.29578^\circ$$

and since

$$360^\circ = 2\pi \text{ radians}$$

$$1^\circ = \frac{2\pi}{360} = \frac{\pi}{180} = 0.017453 \text{ radians}$$

To change radians to degrees, accurate to seconds, use figures accurate to at least five decimal places.

b. Changing Degrees to Radians and Radians to Degrees.

Example 1: Change 2.74 radians to degrees, minutes, and seconds.

$$1 \text{ radian} = 57.29578^\circ$$

$$2.74 \text{ radians} = 2.74(57.29578)$$

$$= 156.99044^\circ$$

$$1^\circ = 60'$$

$$.99044^\circ = .99044(60)'$$

$$= 59.4264'$$

$$.4264' = .4264(60)''$$

$$= 25.5''$$

$$2.74 \text{ radians} = 156^\circ 59' 25.5''$$

Example 2: Change $57^\circ 15' 18''$ to radians.

Step 1. Change the minutes and seconds to decimals of a degree:

$$1' = 60''$$

$$18'' = \frac{18}{60}$$

$$= .3'$$

$$15.3' = \frac{15.3}{60}$$

$$= .255^\circ$$

$$57^\circ 15' 18'' = 57.255^\circ$$

Step 2. Change to radians:

$$1^\circ = .017453 \text{ radian}$$

$$57.255^\circ = 57.255(.017453)$$

$$= .99927 \text{ radian}$$

c. Expressing Angles in Radians as Multiples of π . It is often convenient to express angles in radians as multiples of π . Since $360^\circ = 2\pi$ radians, $90^\circ = \frac{1}{2}\pi$ radians, $40^\circ = \frac{1}{4}\pi$ radians, etc. It is necessary only to multiply the degrees by $\frac{\pi}{180}$ to change to radians.

Example: Express 135° in radians as a multiple of π .

$$\begin{aligned} 135^\circ &= 135\left(\frac{\pi}{180}\right) \\ &= \frac{3}{4}\pi \text{ radians} \end{aligned}$$

176. Review Problems—Radians

a. Find the angle θ for the following arc lengths and radii:

- (1) $r = 5$ inches, $s = 2$ inches.
- (2) $r = 3$ feet, $s = 12$ feet.
- (3) $r = .8$ miles, $s = 6.4$ miles.
- (4) $r = 27$ meters, $s = 75$ meters

b. Find the arc lengths for the following angles and radii:

- (1) $\theta = 5$ radians, $r = 7$ inches
- (2) $\theta = 8$ radians, $r = 2.2$ feet
- (3) $\theta = 2.1$ radians, $r = 9$ miles
- (4) $\theta = .03$ radians, $r = .066$ inch

c. Express the following angles in radians:

- (1) 30°
- (2) $263^\circ 12'$
- (3) $158^\circ 33'$
- (4) $336^\circ 24' 22''$

d. Express the following angles in degrees:

- (1) c radians
- (2) 25 radians
- (3) 3.45 radians
- (4) 3π radians

e. Express the following angles as multiples of π :

- (1) 30°
- (2) 60°
- (3) 225°
- (4) 720°

CHAPTER 12

VECTORS

177. Plane Vectors

a. A line segment used to represent a quantity that has direction as well as magnitude is called a vector. The length of a vector is proportionate to the magnitude, and the arrow, or head, of the vector indicates the direction of the quantity represented.

b. The quantity represented by a vector is called a vector quantity. This is the directed magnitude itself. Electrical quantities, such as current and voltage, are vector quantities in ac circuits (par. 194).

Example: An airplane is flying northeast at 120 miles per hour. Its speed is represented on figure 55 by line OA . The direction in which the airplane is traveling is represented by the direction of the line.

178. Vector Notation

Because a vector quantity has direction as well as magnitude, the methods of denoting a vector are different from the methods of de-

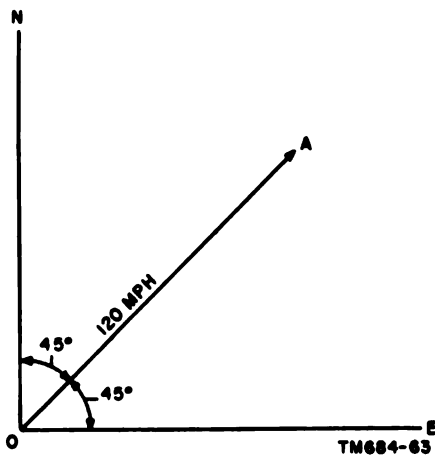


Figure 55. The velocity of an airplane described by a vector.

noting a scalar quantity. A vector may be denoted by two letters, the first indicating the origin, or initial point, and the other indicating the head or terminal point. For example, a vector may be represented by the letters AB , indicating that the quantity went from A to B . A small arrow sometimes is placed over the

letters for emphasis; for example, \vec{AB} . Another method of notation is A/θ , where A represents the magnitude of the quantity, and θ represents the angle the vector makes with some reference line. For example, if line OE in figure 55 were used as the reference line, vector OA could be represented by the notation $120/45^\circ$, where 120 represents the magnitude of the quantity, and 45° represents the direction with respect to line OE . With respect to line ON , vector OA , would be represented by the notation $120/-45^\circ$.

179. Addition of Vectors, Parallelogram Method

The addition of vectors by the parallelogram method is shown in figure 56. To add vector OA to OC , draw a vector OC with its initial point located at the initial point of vector OA , and complete the parallelogram with these vectors forming two sides. The diagonal vector OB , with its initial point at the same initial point of OA and OC and its terminal point at the opposite vertex of the parallelogram, is the sum of OA and OC . Thus, two vectors (OA and OC) acting simultaneously on a point or object may be replaced by a single vector called the *resultant* (OB). The resultant vector will pro-

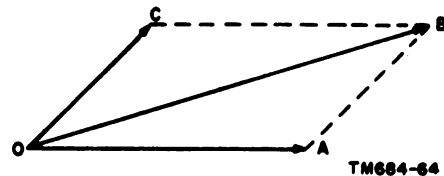
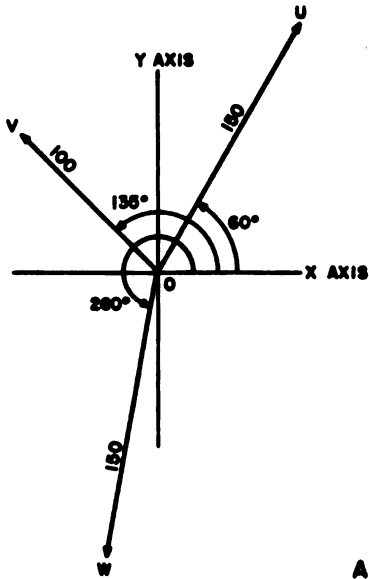
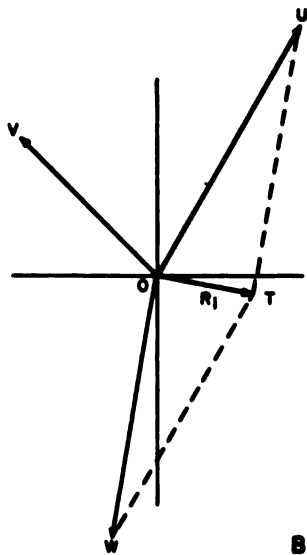


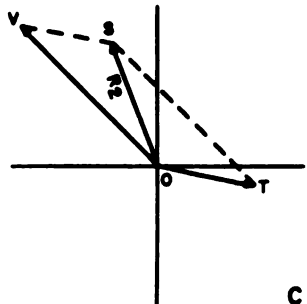
Figure 56. Adding vectors, parallelogram method.



A



B



C

TM684-200

Figure 57. Resolution of three vectors.

duce the same effect on the object as the joint action of the two vectors.

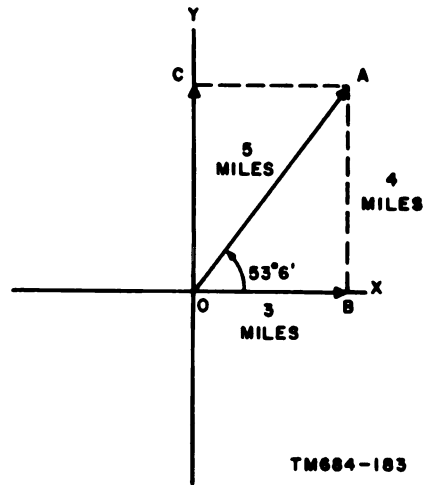
180. Addition of More Than Two Vectors

a. In determining the resultant (par. 179) of vectors when more than two quantities are represented, proceed as follows:

- (1) Find the resultant of two of the vector quantities,
- (2) Determine the final resultant between the third quantity and the resultant obtained from (1), above.

b. Assume three forces U, V, and W are acting on point O as shown in A, figure 57. Force U exerts 150 pounds at an angle of 60° , V exerts 100 pounds at an angle of 135° , and W exerts 150 pounds at an angle of 260° . Find the resultant of forces on point O.

- (1) The resultant of any two vectors, such as U and W, are determined graphically by the line R_1 (B, fig. 57). To solve this problem first draw the vectors to scale at the designated angles; then construct the parallelogram OUTW with adjacent sides WT and UT. The resultant R_1 of OW and OU will be the diagonal OT.
- (2) Combine the resultant R_1 with force V, then construct another parallelogram to scale as in (1), above. The final resultant R_2 is similarly determined by the line SO (C, fig. 57).



TM684-183

Figure 58. Horizontal and vertical components of vector.

This, then, is the resolution of all three forces U, V, and W acting on point O.

181. Components of a Vector

a. A vector may be resolved into components along any two specified directions. If the directions of the components are chosen so that they are at right angles to each other, the components are called *rectangular components*.

b. By placing the initial point of a vector at the origin of the X and Y axes, the rectangular components are readily obtained either graphically or by computation. In figure 58, a vector with a magnitude of 5 and a direction of $53^{\circ} 6'$ is shown broken down into a horizontal compo-

nent of 3 and a vertical component of 4. This is done by using the sine and cosine function as follows:

$$\sin 53^{\circ} 6' = \frac{BA}{5}$$

$$.79968 = \frac{BA}{5}$$

$$BA = 5 \times .79968 \\ = 4 \text{ (approx)}$$

$$\cos 53^{\circ} 6' = \frac{OB}{5}$$

$$.60042 = \frac{OB}{5}$$

$$OB = 5 \times .60042 \\ = 3 \text{ (approx)}$$

PART II
APPLICATIONS OF MATHEMATICAL PRINCIPLES TO COMMON
COMMUNICATIONS-ELECTRONICS PROBLEMS

CHAPTER 13
INTRODUCTION

182. Series Circuits

In a *series circuit*, electrical energy is supplied to a number of devices in series; that is the same current passes through each device in completing its path to the source of supply. Figure 59 shows a resistance, an inductor, and a capacitor connected in series with a voltage source.

a. The current is the same in all parts of a series circuit.

b. The total voltage drop (E_t) in a series circuit is equal to the sum of the voltage drops across individual loads:

$$E_t = E_1 + E_2 + E_3 + \dots$$

c. The total resistance (R_t) of a series circuit is equal to the sum of all individual resistance:

$$R_t = R_1 + R_2 + R_3 + \dots$$

d. The total inductance L_t of a series circuit is equal to the sum of the individual inductances:

$$L_t = L_1 + L_2 + L_3 + \dots$$

e. The reciprocal of the total capacitance (C_t) is equal to the sum of the reciprocals of the separate capacitances. The total capacitance is also less than the capacitance of any one of the capacitors, and is expressed as follows:

$$\frac{1}{C_t} = \frac{1}{C_1} + \frac{1}{C_2} + \frac{1}{C_3} + \dots$$

If only two capacitances are in series, a simplified formula can be derived by combining fractions over an LCD, and taking the reciprocal:

$$\frac{1}{C_t} = \frac{1}{C_1} + \frac{1}{C_2}$$

$$\frac{1}{C_t} = \frac{C_2}{C_1 C_2} + \frac{C_1}{C_1 C_2}$$

$$\frac{1}{C_t} = \frac{C_1 + C_2}{C_1 C_2}$$

$$C_t = \frac{C_1 C_2}{C_1 + C_2}$$

If two or more capacitors of equal value are placed in series, the total capacitance is equal to the value of one capacitor (c) divided by the number of capacitors used (n):

$$C_t = \frac{C}{n}$$

This equation can be derived as follows (assuming 3 equal-value capacitors):

$$\frac{1}{C_t} = \frac{1}{C_1} + \frac{1}{C_2} + \frac{1}{C_3}$$

$$\frac{1}{C_t} = \frac{1}{C} + \frac{1}{C} + \frac{1}{C}$$

$$\frac{1}{C_t} = \frac{3}{C}$$

$$C_t = \frac{C}{3}$$

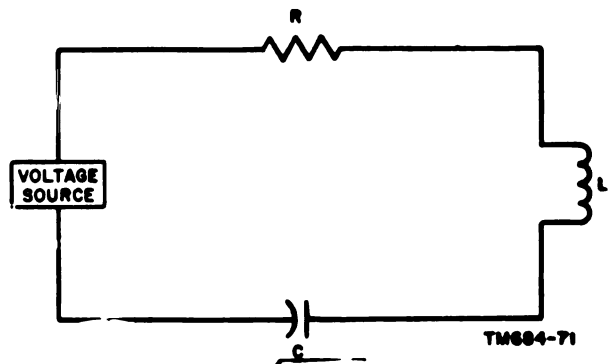


Figure 59. Example of a series circuit.

183. Parallel Circuits

Figure 60 is an example of a simple parallel circuit, with two resistors connected in parallel across a generator. As indicated by the arrows, the current from the generator separates into two parts, each resistor receiving a part of the total current. The larger fraction of current flows through the branch of less resistance, and the smaller fraction of current flows through the branch of greater resistance. The two parts of the current join again upon leaving the resistors.

a. The total current (I_t) in a parallel circuit is the sum of the currents in the separate branches:

$$I_t = I_1 + I_2 + I_3 + \dots$$

b. The voltage (E) across each branch of a parallel circuit is the same:

$$E_1 = E_2 = E_3 \dots$$

c. The reciprocal of the total resistance (R_t) of all resistors in a parallel circuit is equal to the sum of the reciprocals of the separate resistance. The total resistance is also less than the resistance of any one of the resistors, and is expressed as follows:

$$\frac{1}{R_t} = \frac{1}{R_1} + \frac{1}{R_2} + \frac{1}{R_3} + \dots$$

If only two resistors are in parallel, a simplified formula can be derived for the total resistance as for total capacitance in a series circuit (par. 182e):

$$R_t = \frac{R_1 R_2}{R_1 + R_2}$$

If two or more resistors of the same value are placed in parallel, the total resistance is equal to the value of one resistor (R) divided by the number of resistors used (n), as for capacitances, in series (par. 182e):

$$R_t = \frac{R}{n}$$

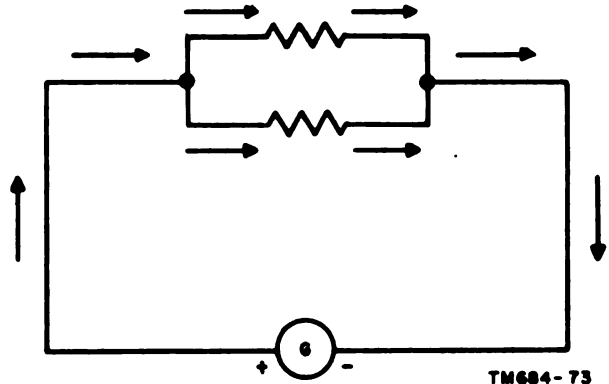


Figure 60. Example of a parallel circuit.

d. The reciprocal of the total inductance (L_t) in a parallel circuit is equal to the sum of the reciprocals of the separate inductances, as with resistances (c above):

$$\frac{1}{L_t} = \frac{1}{L_1} + \frac{1}{L_2} + \frac{1}{L_3} + \dots$$

The rules covering the calculation of resistances in parallel (c above) also apply to inductances in parallel.

e. The total capacitance in a parallel circuit is equal to the sum of the individual capacitances, as for resistances and inductances in series (par. 182c and d):

$$C_t = C_1 + C_2 + C_3 + \dots$$

The rules covering the calculation of resistances and inductances in series also apply to capacitances in parallel.

184. Series-Parallel Circuit

A series-parallel circuit is simply a combination of a series circuit and a parallel circuit. The rules covering series circuits (par. 182) apply to the series portion of the circuit, and the rules covering parallel circuits (par. 183) apply to the parallel portion of the circuit. The examples given in chapters 14 through 18 more clearly illustrate the various types of circuits.

CHAPTER 14

PROBLEMS IN DC ELECTRICITY

185. General

In circuits using constant-value dc electricity, only the effects of the resistance in the circuit are significant, because inductance and capacitance depend on varying current or voltage. Consequently, the examples given in this chapter involve only resistances.

186. Ohm's Law

a. An important relationship between current (I), voltage (E), and resistance (R) in a circuit is given by Ohm's law which states that the current in an electrical circuit varies directly as the voltage and inversely as the resistance. Expressed in a formula, the relationship is:

$$I = \frac{E}{R}$$

The formula may also appear in the following forms:

$$E = IR$$

$$R = \frac{E}{I}$$

b. The following example illustrates Ohm's law:

Example: Solve the following problem:
A voltmeter (voltage measuring device) connected directly

across a resistance reads 65 volts (fig. 61). An ammeter (current measuring device) connected in series reads 5.8 amperes. What is the value of the resistance in ohms?

$$E = 65, I = 5.8, R = ?$$

$$R = \frac{E}{I}$$

$$R = \frac{65}{5.8} \\ = 12.26 \text{ or } 12.3 \text{ ohms.}$$

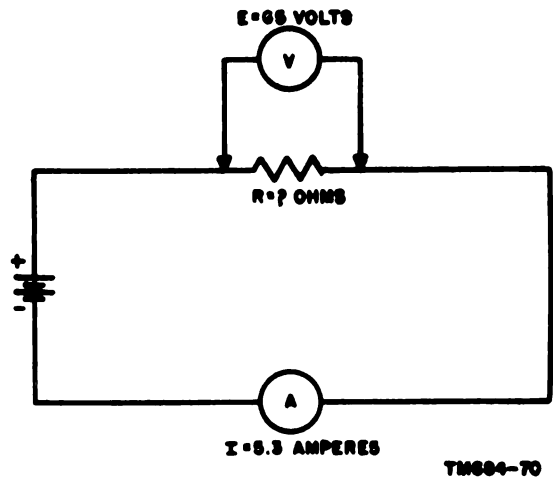


Figure 61. Simple circuit with unknown resistance.

187. Solving Series Circuits

The following example illustrates the method of using Ohm's law and the principles of series circuits (par. 182) to solve series dc circuits.

Example: Solve the following problem:

Resistors R_1 , R_2 , and R_3 are connected in series across a 110-volt generator (fig. 62). If resistor $R_1 = 6.5$ ohms, resistor $R_2 = 10.3$ ohms, and resistor $R_3 = 7.6$ ohms, what is the total current in the circuit? What is the voltage drop across each resistance?

- Step 1.** Find the total resistance in the circuit.
 $R_t = R_1 + R_2 + R_3$
 $= 6.5 + 10.3 + 7.6$
 $= 24.4$ ohms total resistance
- Step 2.** Find the total current in the circuit.
 $E = IR$
 $110 = I(24.4)$
 $24.4I = 110$
 $I = 4.508$ amperes total current
- Step 3.** Find the voltage drop across R_1 .
 $E = IR$
 $= 4.508(6.5)$
 $= 29.302$ volts across R_1
- Step 4.** Find the voltage drop across R_2 .
 $E = IR$
 $= 4.508(10.3)$
 $= 46.432$ volts across R_2
- Step 5.** Find the voltage drop across R_3 .
 $E = IR$
 $= 4.508(7.6)$
 $= 34.261$ volts across R_3
- Check:** $34.261 + 46.432 + 29.303 = 109.996$ or 110 volts.

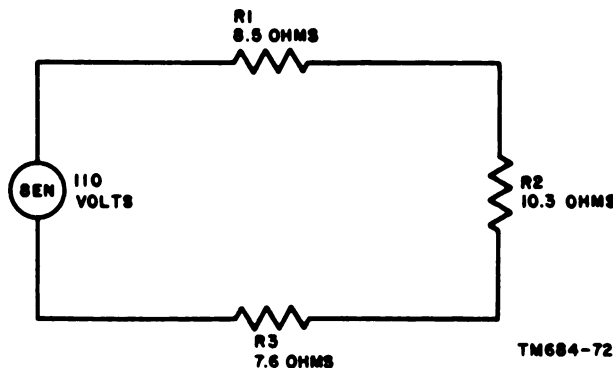


Figure 62. Series circuit with unknown current.

188. Solving Parallel Circuits

The following example illustrates the method of using Ohms' law and the principles of parallel circuits (par. 183) to solve parallel dc circuits.

Example: Solve the following problem :

In figure 63, a resistor of 200 ohms (R_1), a resistor of 600 ohms (R_2), and an unknown resistor (R_3) are connected in parallel across a source of emf. The voltage across R_1 is 40 volts. The current through the resistor of unknown value (R_3) is 0.40 ampere. Find (a) the value of R_3 , (b) the total resistance of the circuit, and (c) the total current, in the circuit.

Step 1. Find the voltage across R_3 .

$$E_1 = E_2 = E_3$$

Since the voltage across R_1 is 40 volts, the voltage across R_3 is also 40 volts.

Step 2. Find the resistance of R_3 .

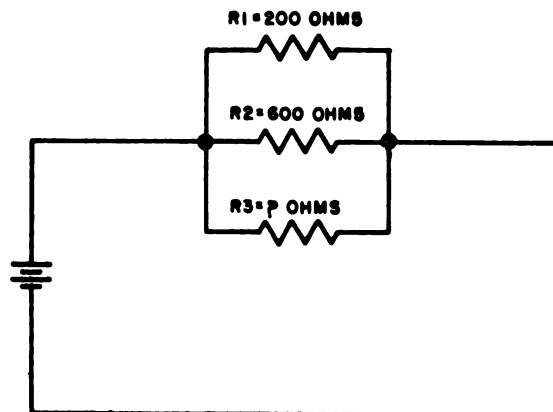
$$\begin{aligned} R_3 &= \frac{E_3}{I_3} \\ &= \frac{40}{.4} \\ &= 100 \text{ ohms} \end{aligned}$$

Step 3. Find the total resistance of the three resistors.

$$\begin{aligned} \frac{1}{R_t} &= \frac{1}{R_1} + \frac{1}{R_2} + \frac{1}{R_3} \\ \frac{1}{R_t} &= \frac{1}{200} + \frac{1}{600} + \frac{1}{100} \\ \frac{1}{R_t} &= \frac{3}{600} + \frac{1}{600} + \frac{6}{600} \\ \frac{1}{R_t} &= \frac{10}{600} \\ 10R_t &= 600 \\ R_t &= \frac{600}{10} \\ &= 60 \text{ ohms} \end{aligned}$$

Step 4. Find the line current in the circuit.

$$\begin{aligned} I_t &= \frac{E_t}{R_t} \\ &= \frac{40}{60} \\ &= 0.667 \text{ ampere} \end{aligned}$$



TM684-74

Figure 63. Parallel circuit with three resistances, one unknown.

189. Solving Series-Parallel Circuits

A simple series-parallel circuit, with series-connected resistors R_2 and R_3 connected in parallel with resistor R_4 , and the combination connected in series with resistors R_1 and R_5 , is shown in A, figure 64. The following example uses B through D, figure 64, to illustrate the method of solving series-parallel dc circuits.

Example: Find the current through each resistance and the voltage drop across each resistance in A, figure 64.

Step 1. Since R_2 and R_3 are in series, their total resistance is the sum (B, fig. 64) of the two resistances.

$$\begin{aligned} R_{2,3} &= R_2 + R_3 \\ &= 5 + 15 \\ &= 20 \text{ ohms} \end{aligned}$$

Step 2. $R_{2,3}$ is in parallel with R_4 . Find the total resistance of the combination (C, fig. 64).

$$\begin{aligned} \frac{1}{R_{2,3,4}} &= \frac{1}{R_{2,3}} + \frac{1}{R_4} \\ \frac{1}{R_{2,3,4}} &= \frac{1}{20} + \frac{1}{30} \\ \frac{1}{R_{2,3,4}} &= \frac{3}{60} + \frac{2}{60} \\ \frac{1}{R_{2,3,4}} &= \frac{5}{60} \\ 5R_{2,3,4} &= 60 \\ R_{2,3,4} &= \frac{60}{5} \\ R_{2,3,4} &= 12 \text{ ohms} \end{aligned}$$

Step 3. $R_1, R_{2,3,4}$ and R_5 are in series. Their total resistance is the sum (D, fig. 64) of the resistances.

$$\begin{aligned} R_{1,2,3,4,5} &= R_1 + R_{2,3,4} + R_5 \\ &= 3 + 12 + 10 \\ &= 25 \text{ ohms} \end{aligned}$$

Step 4. Find the total current sent through these resistances by a voltage of 100 volts.

$$\begin{aligned} I_t &= \frac{E_t}{R_t} \\ &= \frac{100}{25} \\ &= 4 \text{ amperes} \end{aligned}$$

Step 5. Find the voltage drop across $R_{2,3,4}$.

$$\begin{aligned} E_{2,3,4} &= IR_{2,3,4} \\ &= 4 \times 12 \\ &= 48 \text{ volts} \end{aligned}$$

Step 6. Analyze the parallel circuit.

The voltage across R_4 is 48 volts. Find the current.

$$\begin{aligned} I_4 &= \frac{E_4}{R_4} \\ &= \frac{48}{30} \\ &= 1.6 \text{ amperes} \end{aligned}$$

The voltage across R_2 and R_3 also is 48 volts, and the resistance $R_{2,3}$ is 20 ohms. Find the current.

$$\begin{aligned} I_{2,3} &= \frac{E_{2,3}}{R_{2,3}} \\ &= \frac{48}{20} \\ &= 2.4 \text{ amperes } (I_2 = I_3) \end{aligned}$$

Step 7. Find all voltage drops.

$$\begin{aligned}
 E_1 &= I_1 R_1 \\
 &= 4 \times 3 \\
 &= 12 \text{ volts} \\
 E_2 &= I_2 R_2 \\
 &= 2.4 \times 5 \\
 &= 12 \text{ volts} \\
 E_3 &= I_3 R_3 \\
 &= 2.4 \times 15 \\
 &= 36 \text{ volts} \\
 E_4 &= I_4 R_4 \\
 &= 1.6 \times 30 \\
 &= 48 \text{ volts} \\
 E_5 &= I_5 R_5 \\
 &= 4 \times 10 \\
 &= 40 \text{ volts}
 \end{aligned}$$

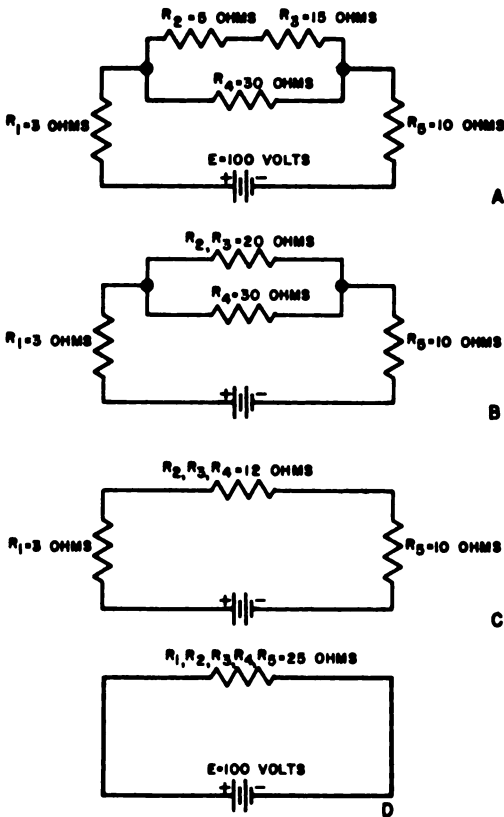


Figure 64. Solving a series-parallel circuit.

190. Solving More Complex Electrical Problems by Using Kirchhoff's Laws

a. *General.* The more complex series-parallel problems are often more readily solved by using Kirchhoff's laws. A full treatment of the electrical phenomena embodied in Kirchhoff's laws is not within the scope of

this manual. For a complete treatment of electrical theory on this subject, see TM 11-661. The basic principles of Kirchhoff's laws are as follows:

- (1) The algebraic sum of the currents at any junction of conductors is zero.
- (2) The algebraic sum of the electromotive forces and voltage drops around a closed circuit is zero.

b. *Understanding Kirchhoff's Laws.* The first of Kirchhoff's laws simply means that there is just as much current flowing away from a point as there is flowing to it. The second law simply means that the voltage source is equal to the sum of the voltage drops around any closed circuit. For example, starting at point X (fig. 65) and going around the circuit clockwise, the following equation is obtained:

$$E - IR_1 - IR_2 - IR_3 = 0$$

Substituting the values of resistance as indicated in the figure, the equation becomes:

$$37 - 13I - 9I - 11I = 0$$

Collecting like terms and solving for I gives:

$$37 - 33I = 0$$

$$33I = 37$$

$$I = 1.121 \text{ amperes}$$

To prove that this is correct, use Ohm's law as follows:

$$E_1 = IR_1 = 1.121 \times 13 = 14.58 \text{ volts}$$

$$E_2 = IR_2 = 1.121 \times 9 = 10.09 \text{ volts}$$

$$E_3 = IR_3 = 1.121 \times 11 = 12.33 \text{ volts}$$

$$E_t = IR_t = 1.121 \times 33 = 37.00 \text{ volts}$$

Thus, the sum of the voltage drops equals the applied voltage and the second law is verified.

c. *Solving Series-Parallel Circuits Using Kirchhoff's Laws.* Problems involving series-parallel circuits are readily solved by using Kirchhoff's laws and simultaneous equations (par. 84). The example below illustrates such a problem.

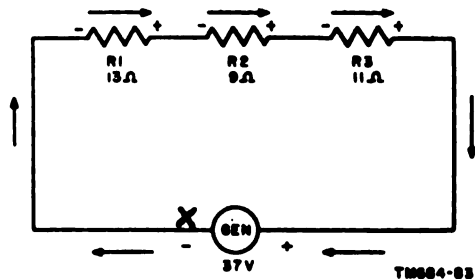


Figure 65. Example of Kirchhoff's second law.

Example: Solve for the current in each branch of the circuit shown in figure 66.

Step 1. Assume a direction for the current flow in each branch, as shown in the figure. (It will be shown that the direction assumed does not affect the accuracy of the result.) According to Kirchhoff's first law, the current I_1 flowing through the 6-ohm resistor plus the current I_2 flowing through the 7- and 8-ohm resistors equals the current $I_1 + I_2$ flowing through the remainder of the circuit, which includes the 5-ohm resistor.

Step 2. Considering the first part of the circuit, from point B through the generator and around the circuit back to point B through the 6-ohm resistor, the application of Kirchhoff's second law yields the following equation:

$$\begin{aligned} 10 - 5(I_1 + I_2) - 6I_1 &= 0 \\ 10 - 5I_1 - 5I_2 - 6I_1 &= 0 \\ 10 - 11I_1 - 5I_2 &= 0 \quad (\text{equation 1}). \end{aligned}$$

Step 3. Considering the path from point B through the generator and through points A, X, and Y back to B, the application of Kirchhoff's second law yields the following equation:

$$\begin{aligned} 10 - 5(I_1 + I_2) - 7I_2 - 8I_2 &= 0 \\ 10 - 5I_1 - 5I_2 - 7I_2 - 8I_2 &= 0 \\ 10 - 5I_1 - 20I_2 &= 0 \quad (\text{equation 2}). \end{aligned}$$

Step 4. Using the methods of solving simultaneous equations described in paragraph 116, solve for I_1 by multiplying equation 1 by 4 and subtracting equation 2 from the new equation:

$$\begin{aligned} 40 - 44I_1 - 20I_2 &= 0 \\ \underline{10 - 5I_1 - 20I_2} &= 0 \\ 30 - 39I_1 &= 0 \\ -39I_1 &= -30 \\ I_1 &= 0.769 \text{ ampere} \end{aligned}$$

Step 5. Solve for I_2 by substituting the value of I_1 in either equation 1 or equation 2, or by eliminating I_1 in solving the simultaneous equations. Substituting I_1 in equation 2 yields the following:

$$\begin{aligned} 10 - 5(0.769) - 20I_2 &= 0 \\ 10 - 3.845 - 20I_2 &= 0 \\ -20I_2 &= -6.155 \\ I_2 &= 0.308 \text{ ampere} \end{aligned}$$

Step 6. The current in the left-hand side of the circuit is $I_1 + I_2$ or 1.077 amperes.

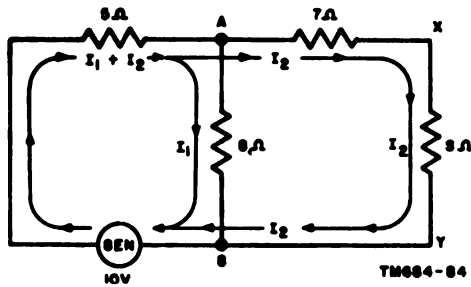


Figure 66. Solving series-parallel circuits, using Kirchhoff's laws.

d. Direction of Current Flow. If the direction of current flow is assumed incorrectly, the computed value for the current will have a negative sign; however, the magnitude of the current will be the same. Therefore, to correct the error, simply reverse the assumed direction of current flow on the diagram.

e. Facts to Remember When Working Problems. The solution of problems involving series-parallel circuits by the above method normally is relatively simple. The important facts to remember when working such problems are:

- (1) Assume any direction of current flow in the beginning.
- (2) Take any path around any portion of the circuit, as long as the path is a complete circuit.
- (3) Observe the polarities of the circuit, both voltage sources and voltage drops.
- (4) Be sure to have as many equations as there are unknowns.

191. Dc Power

In dc circuits, the amount of power absorbed by a resistor or the resistance of a circuit is easily determined by Joule's law:

$P = I^2R$, where:

P = power absorbed in watts

I = total current in amperes

R = total resistance of the circuit in ohms

Since the voltage drop (E) across a resistor (R) is equal to IR , the formula above may also be written: $P = IR \times I = EI$.

Example 1: Find the power consumed in a 50-ohm resistor when a current of 5 amperes flows through it.

$$\begin{aligned} P &= I^2R \\ &= 5^2 \times 50 \\ &= 1,250 \text{ watts} \end{aligned}$$

Example 2: Find the power delivered by a 12-volt battery when the current drain is 6 amperes.

$$\begin{aligned} P &= EI \\ &= 12 \times 6 \\ &= 72 \text{ watts} \end{aligned}$$

192. Review Problems—Dc Electricity

a. (1) The resistance of a tungsten lamp is 20 ohms when the lamp is cold. What current will the lamp draw the instant it is placed across a 110-volt line? (2) When the lamp is glowing at full brilliancy, its resistance rises to 84 ohms. What is the final steady current of the lamp?

b. An adjustable resistor has a minimum setting of 14 ohms and a maximum setting of 50 ohms. (1) What ranges of resistance can be covered with two of these resistors connected in series? (2) What ranges of resistance can be covered with two of these resistors connected in parallel?

c. When a 6,500-ohm resistance is connected into the plate circuit of a radio tube, the plate current is 34 milliamperes. (1) What is the voltage drop across the 6,500-ohm resistance? (2) How much power is consumed by the resistor?

d. Three resistors of 20 ohms, 30 ohms, and 50 ohms, respectively, are connected in series. The current through R_1 (20 ohms) is 0.8 ampere. (1) What is the current through R_2 (50 ohms)? (2) What is the voltage across R_2 (30 ohms)? (3) What is the total voltage drop across the three resistors?

e. A divided circuit has three branches of 5, 10, and 20 ohms resistance, respectively. (1) What is the joint conductance of the three branches? (Conductance is the reciprocal of resistance.) (2) What is the joint resistance? (3) A current of 20 amperes flows in the 5-

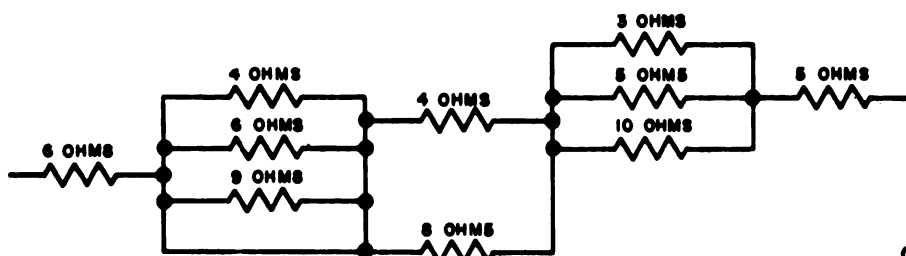
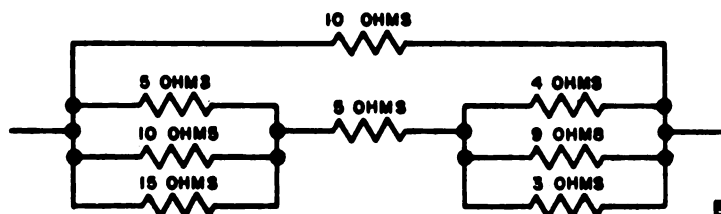
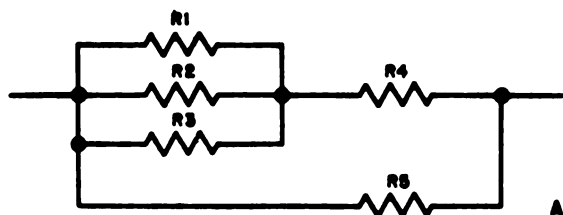
ohm branch; find the current in each of the other branches. (4) Find the combined current.

f. A parallel circuit has branches with resistances of 1, 3, 10, 20, and 50 ohms, respectively. (1) What is the conductance of each branch? (2) What is the conductance of the combination? (3) What is the resistance of the combination?

g. Three resistors R_1 (36 ohms), R_2 (42 ohms) and R_3 are connected in series with a generator. An ammeter inserted in the circuit

between R_1 and R_2 reads 2.4 amperes, and a voltmeter across R_3 reads 41 volts. (1) What is the resistance of R_3 ? (2) What is the voltage across R_1 ? (3) What is the voltage across R_2 ? (4) What is the voltage across the generator?

h. Find the total resistance of: (1) circuit A when $R_1 = 6$ ohms, $R_2 = 9$ ohms, $R_3 = 17$ ohms, $R_4 = 5$ ohms, $R_5 = 11$ ohms; (2) circuit a when $R_1 = 12$ ohms, $R_2 = 25$ ohms, $R_3 = 19$ ohms, $R_4 = 8$ ohms, $R_5 = 12$ ohms. (3) circuit B; (4) circuit C.



C
TM684-76

i. A 10-ohm resistor is connected in series with a 15-ohm resistor. (1) What voltage must be placed across the two resistors to send a current of 5 amperes through it? (2) What would the voltage be across each resistor?

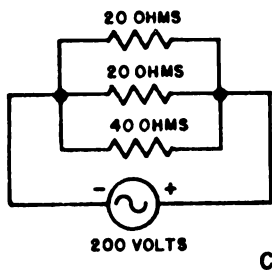
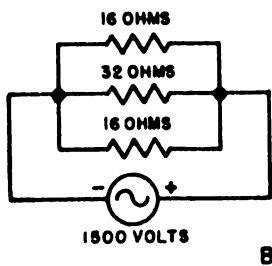
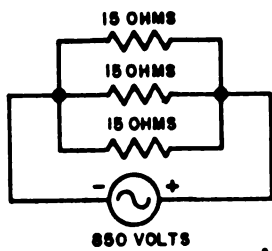
j. (1) What voltage is required to force a current of 10 amperes through a parallel combination of three branches having resistances of 15.3 ohms, 1.3 ohms, and 10.5 ohms, re-


spectively? (2) What will the current be in each branch? (3) What is the voltage drop across each branch?

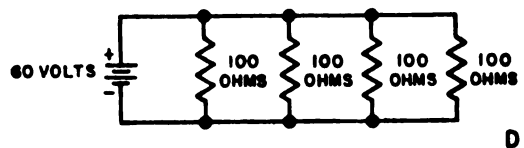
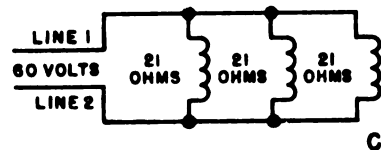
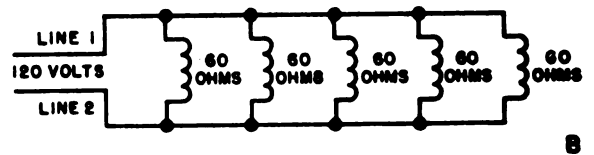
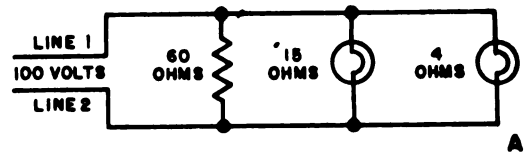
k. A generator has an output voltage of 110 volts. (1) What current is flowing in a wire of 0.02 ohm connected across the terminals? (2) What current will flow if an incandescent lamp of 484 ohms is also connected across the generator?

l. Find the total resistance of each of the parallel circuits A, B, and C.

m. Find the total resistance of each of the parallel circuits A, B, C, and D.



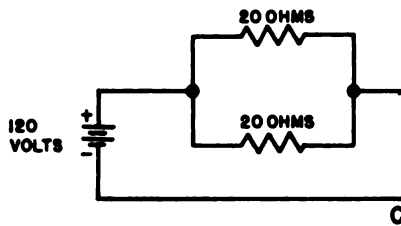
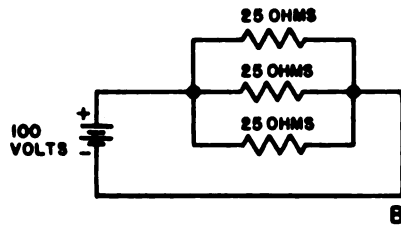
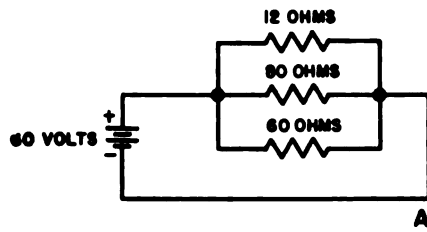
NOTE:
 INDICATES GENERATOR
 TM684-77




NOTE:
 INDICATES BATTERY

TM684-78

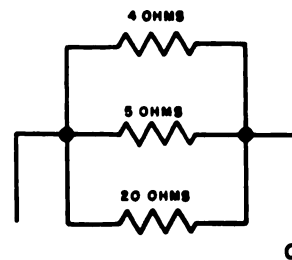
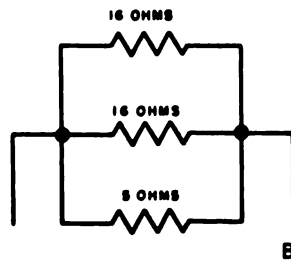
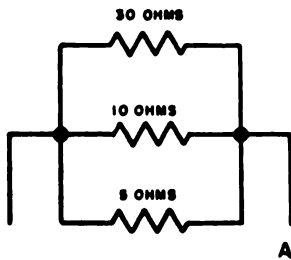
n. Find the total resistance of each of the parallel circuits A, B, and C.



NOTE:
 INDICATES BATTERY

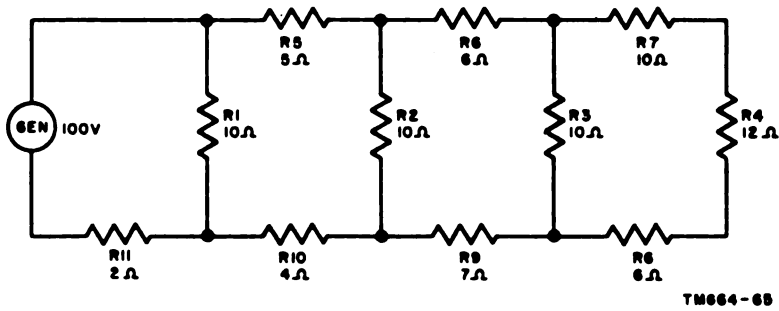
TM684-79

o. Find the total resistance of each of the parallel circuits A, B, and C.

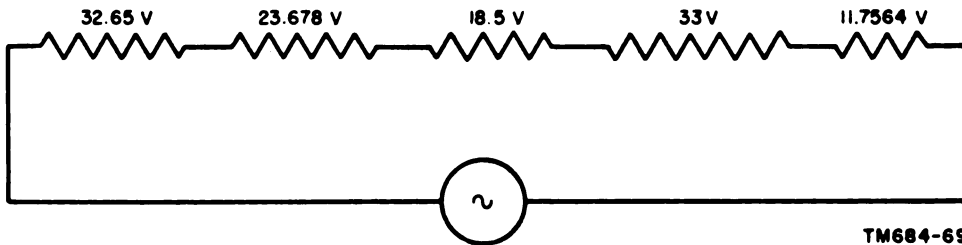


TM684-80

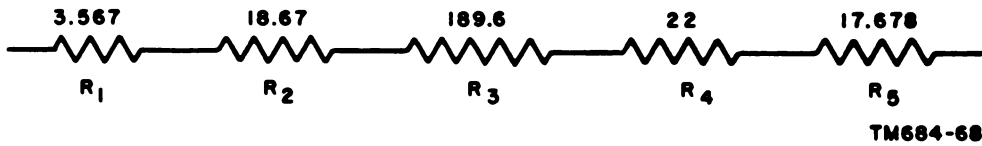
p. Find the current through each resistor in the circuit below.



q. Find the total resistance in the circuit below when a current of .5 amperes flows through it.



r. Find the current through the resistors in the circuit below when 115 volts is applied across the circuit.



CHAPTER 15

PROBLEMS IN AC ELECTRICITY

193. General

In circuits using ac electricity¹, the current is affected by inductance and capacitance as well as resistance. In addition, certain combinations of these loads will produce unusual effects, such as resonance (par. 202), not experienced in dc circuits. These phenomena are used extensively in electrical and electronic circuits. Consequently, problems in ac electricity are more complex than corresponding problems in dc electricity.

194. Application of Vectors and Trigonometry in Solving Ac Circuit Problems

a. As discussed in chapter 12, a vector is a line whose length and direction represent accurately a given quantity; the quantity thus represented is a *vector quantity*. Because the magnitude of ac currents and voltages varies from instant to instant, the magnitude is a function of time, and the current and voltage can be expressed as vectors: The length of the vector represents the magnitude of the current or voltage, and the direction represents its relationship in time to another vector (*b* below).

b. When a circuit contains inductance or capacitance, the current in the circuit is not in phase with the voltage that produces it. In other words, the instant the voltage is zero, the current that it produces has a value other than zero, or when the voltage is at its maximum, the current has a value different from its maximum value. The current is said to *lead* the voltage if the current reaches its maximum *before* the voltage maximum occurs; the current is said to *lag* the voltage if the current

¹ This chapter is limited to the application of mathematics to single-phase, sinusoidal ac. The electrical phenomena of this type of ac are treated briefly. See TM 11-681 for a complete treatment of single-phase, sinusoidal ac.

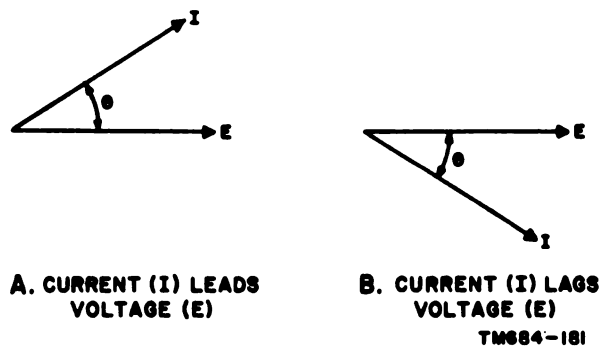


Figure 67. Vector representation of leading and lagging current.

reaches its maximum *after* the voltage maximum occurs. The relationship between current and voltage can be represented by vectors, with one vector representing current, another voltage, and with the angle between them indicating the amount of lag or lead. Figure 67 shows a vector representation of leading and lagging current. The angle is called the phase angle.

c. The voltage drop across a resistor also may be represented by a vector having the same direction as the vector representing the current flowing through the resistor. In other words, the voltage across the resistor and the current flowing through it are in phase.

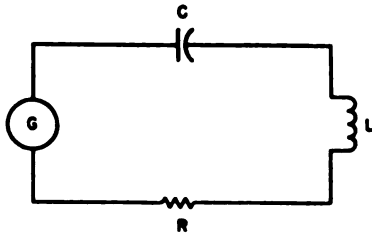
d. The voltage drop across a capacitor may be represented by a vector making an angle of 90° with the vector representing the current flowing through the capacitor. In a purely capacitive circuit, the current will lead the applied voltage by an angle of 90° .

e. The voltage drop across an inductor may be represented by a vector making an angle of 90° with the vector representing the current flowing through the inductance. In a purely inductive circuit, the current will lag the applied voltage by an angle of 90° .

f. In a circuit that contains inductance, capacitance, and resistance, the current will lead or lag the applied voltage by a phase angle of less than 90° .

g. The example below illustrates the use of vectors in the solution of a typical ac circuit problem. Paragraphs 199 through 201 give a more detailed coverage of problems of this type.

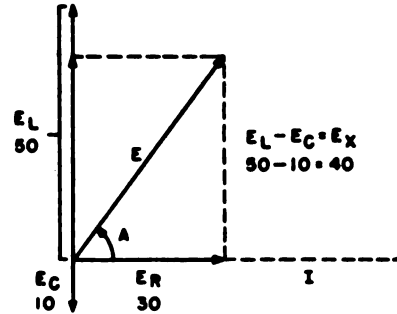
Example: In a series circuit (fig. 68), the voltage drop across the capacitor (E_C) is 10 volts, the voltage drop across the inductance (E_L) is 50 volts, and the voltage drop across the resistance (E_R) is 30 volts. Determine the magnitude of the applied voltage. By what phase angle (A) does the current lead or lag the applied voltage in the circuit?



TM684-65

Figure 68. An ac series circuit containing inductance, capacitance, and resistance.

- Step 1.** The vector diagram for this circuit is shown in figure 69. In a series circuit, the same current flows through each element. Draw the vector representing the current (I) in a horizontal position. The angles of all vectors representing voltage drops are given with respect to the current.
- Step 2.** Draw the vector E_L , representing the voltage drop across the inductance, at an angle of 90° with the vector I .
- Step 3.** Draw the vector E_C , representing the voltage drop across the capacitor, at a angle of -90° with the vector I .



TM684-66

Figure 69. A vector diagram of an ac series circuit containing inductance, capacitance, and resistance.

- Step 4.** The vector E_R , representing the voltage drop across the resistor, has the same direction as the vector I .
- Step 5.** The vector sum of these voltage drops is equal to the applied voltage.
- Along the horizontal:
 $E_L = 0, E_C = 0, E_R = 30$
- Along the vertical:
 $E_L = 50, E_C = -10, E_R = 0$
- Step 6.** Adding the horizontal and vertical voltage drops, respectively:
- $$E_L + E_C + E_R = 0 + 0 + 30 = 30$$
- $$E_L + E_C + E_R = 50 + (-10) + 0 = 40$$
- Step 7.** Because the vectors form a right triangle, with the applied voltage E as the hypotenuse and E_R and E_X as the sides (fig. 69), the law of right triangles (par. 188) can be used to solve for one of the quantities when the other two are known. From this law, the relationship between E, E_R , and E_X is expressed by the formula
- $$E = \sqrt{E_R^2 + E_X^2}$$
- $$E = \sqrt{E_R^2 + E_X^2}$$
- $$= \sqrt{(30)^2 + (40)^2}$$
- $$= \sqrt{900 + 1600}$$
- $$= \sqrt{2500}$$
- $$= 50 \text{ volts}$$

Step 8. The formula for determining angle A which the vector representing the applied voltage makes with the vector I (fig.

$$69) \text{ is } \tan A = \frac{E_X}{E_R}.$$

$$\begin{aligned} \tan A &= \frac{E_X}{E_R} \\ &= \frac{40}{30} \text{ or } \frac{4}{3} \\ &= 1.33333 \end{aligned}$$

$$A = 53^\circ 7' 48''$$

Step 9. The circuit is predominately inductive; therefore, the current lags the applied voltage by a phase angle of $53^\circ 7' 48''$.

195. Ohm's Law Applied to Ac Circuits

Because of the effects of inductance and capacitance in ac circuits, Ohm's law (par. 186) must be modified to take these added effects into consideration.

a. If the circuit contains a combination of resistance and inductive reactance (par. 196) or capacitive reactance (par. 197), or both, the overall effect is called impedance (par. 198), and Ohm's law is modified to read:

$$I = \frac{E}{Z}$$

where I is the current in amperes, E the ac voltage in volts, and Z the impedance in ohms. This formula may also be written:

$$E = IZ$$

$$Z = \frac{E}{I}$$

b. If the circuit contains reactances only, the formulas become:

$$I = \frac{E}{X}$$

$$E = IX$$

$$X = \frac{E}{I}$$

where X is the total reactance (par. 198a) of the circuit in ohms.

c. If the circuit contains resistance only, the formula is the same as in a dc circuit (par. 186).

d. The application of these formulas in solving ac circuit problems is covered in paragraphs 196 through 203.

196. Inductive Reactance

Inductance enables an electric circuit to build up a voltage by electromagnetic induction whenever the current strength changes. The induced voltage always opposes the applied voltage and thus retards the change in the current. *Inductive reactance* is the effect of inductance expressed in *ohms*. The formula for finding inductive reactance is:

$$X_L = 2\pi fL$$

where X_L is the inductive reactance in ohms, L is the inductance in henrys, and f is the frequency in cps.

Example 1: Determine the inductive reactance of a coil if the ac in the circuit has a frequency of 100 cps, and the inductance of the coil is 0.036 henry.

$$\begin{aligned} X_L &= 2\pi fL \\ &= 2 \times 3.14 \times 100 \times .036 \\ &= 628 \times .036 \\ &= 22.608 \text{ ohms} \end{aligned}$$

Example 2: If a coil with an inductance of 0.2 henry and negligible resistance is connected across the terminals of a 220-volt, 60-cycle ac generator, how much current will flow through the coil?

Step 1. Find the inductive reactance of the coil.

$$\begin{aligned} X_L &= 2\pi fL \\ &= 2 \times 3.14 \times 60 \times .2 \\ &= 376.8 \times .2 \\ &= 75.36 \text{ ohms} \end{aligned}$$

Step 2. Find the amount of current that will flow through the coil.

$$\begin{aligned} I &= \frac{E}{X_L} \\ &= \frac{220}{75.36} \\ &= 2.92 \text{ amperes} \end{aligned}$$

197. Capacitive Reactance

Capacitance enables a capacitor to retain an electric charge which opposes any changes in the voltage of the circuit in which the capacitor is connected. *Capacitive reactance* is the effect of the capacitance expressed in *ohms*.

The formula for finding capacitive reactance is:

$$X_c = \frac{1}{2\pi fC}$$

where X_c is the capacitive reactance, C is the capacitance expressed in farads, and f is the frequency in cycles per second.

Example: A 110-volt, 60-cycle ac generator is connected in series with a 1-microfarad (10^{-6} farad) capacitance. What is the capacitive reactance of the circuit?

$$\begin{aligned} X_c &= \frac{1}{2\pi fC} \\ &= \frac{1}{2 \times 3.14 \times 60 \times 10^{-6}} \\ &= \frac{10^6}{6.28 \times 60} \\ &= \frac{1,000,000}{376.8} \\ &= 2,653 \text{ ohms} \end{aligned}$$

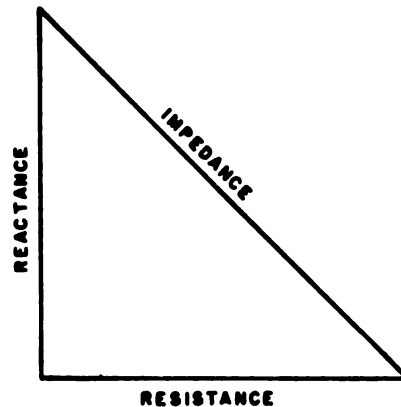
198. Impedance

a. The *impedance* of a circuit is the circuit's total opposition to the flow of current. In a dc circuit, the opposition consists of resistance alone. In an ac circuit, the opposition consists of resistance and reactance (X). Inductive and capacitive reactances can be combined, but because their effects in the circuit are exactly opposite—inductive reactance causes the current to lag the voltage by 90° and capacitive reactance causes the current to lead the voltage by 90° —they are combined by subtraction:

$$\begin{aligned} X &= X_L - X_c \text{ or} \\ X &= X_c - X_L \quad (\text{subtracting the smaller} \\ &\quad \text{from the larger}) \end{aligned}$$

b. Resistance and reactance cannot be added directly, but they can be considered as two vectors acting at right angles to each other. Thus, the relation between resistance, reactance, and impedance may be illustrated by a right triangle (fig. 70). Since these quantities may be related to the sides of a right triangle, the formula for finding the impedance of a circuit is:

$$Z^2 = R^2 + X^2 \text{ or } Z = \sqrt{R^2 + X^2}$$



TM684-81

Figure 70. The resistance-reactance-impedance triangle.

where Z is the impedance in ohms, R is the resistance in ohms, and X is the reactance in ohms.

Example 1: A 110-volt, 60-cycle ac generator is connected in series with a 1-microfarad capacitance and a 1,000-ohm resistance. The capacitive reactance of the circuit is 2,650 ohms. What is the impedance of the circuit?

$$\begin{aligned} Z &= \sqrt{R^2 + X^2} \\ &= \sqrt{(1000)^2 + (2650)^2} \\ &= \sqrt{(10^3)^2 + (2.65 \times 10^3)^2} \\ &= \sqrt{10^6 + 7.023 \times 10^6} \\ &= \sqrt{8.023 \times 10^6} \\ &= 2.83 \times 10^3 \\ &= 2,830 \text{ ohms} \end{aligned}$$

Example 2: A 300-volt, variable-frequency ac generator is connected in series with an inductive reactance of 300 ohms, a capacitive reactance of 100 ohms, and a resistance of 100 ohms. What is the impedance of the circuit?

$$\begin{aligned} Z &= \sqrt{R^2 + (X_L - X_c)^2} \\ &= \sqrt{(100)^2 + (300 - 100)^2} \\ &= \sqrt{(100)^2 + (200)^2} \\ &= \sqrt{(10^2)^2 + (2 \times 10^2)^2} \\ &= \sqrt{10^4 + 4 \times 10^4} \\ &= \sqrt{5 \times 10^4} \\ &= 2.236 \times 10^2 \\ &= 223.6 \text{ ohms} \end{aligned}$$

199. Solving Ac Circuits Having Resistance and Inductance

a. *Series Circuits.* The following examples illustrate the method of solving series ac circuits having resistance and inductance (called series RL circuits) by using the principles described in paragraphs 198 through 198.

Example 1: An ac circuit with a resistance of 1,000 ohms and an inductance of 5 henrys is connected in series with a generator (fig. 71). The voltage drop across the resistance is 51.5 volts, and the voltage drop across the inductance is 97 volts. Find the applied voltage in the circuit. If the impedance of the circuit is 2,182 ohms, what is the phase angle by which the current lags the applied voltage?

Step 1. The vector diagram for this circuit is shown in figure 77. In an ac series circuit, the same current flows through all parts of the circuit—in this case, 0.051 ampere. Draw the vector E_R to represent the voltage drop across the resistance. Draw the vector E_L to represent the voltage drop across the inductance.

Step 2. The vector sum of these voltage drops is equal to the applied voltage. Adding the horizontal and vertical voltage drops, respectively:

$$E_L + E_R = 0 + 51.5 = 51.5$$

$$E_L + E_R = 97 + 0 = 97$$

Step 3. Find the applied voltage as follows:

$$\begin{aligned} E^2 &= E_L^2 + E_R^2 \\ &= (97)^2 + (51.5)^2 \\ &= 9409 + 2652.25 \\ &= 12061.25 \end{aligned}$$

$$\begin{aligned} E &= \sqrt{12061.25} \\ &= 109.8 \text{ or approx } 110 \text{ volts} \end{aligned}$$

Step 4. Find the phase angle by which the current lags the applied voltage.

$$\begin{aligned} \cos A &= \frac{R}{Z} \text{ (for series circuit)} \\ &= \frac{1000}{2182} \\ &= 0.46904 \\ A &= 62^\circ 1' 19'' \end{aligned}$$

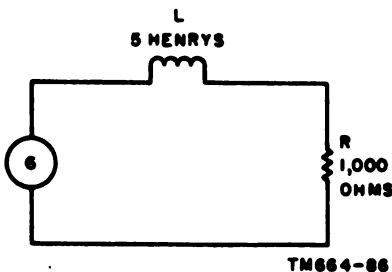


Figure 71. An ac series circuit containing inductance and resistance.

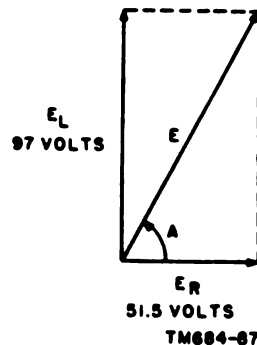


Figure 72. Ac series circuit containing inductance and resistance, vector diagram.

Step 5. Therefore, the current lags the applied voltage by a phase angle of $62^{\circ} 1' 19''$.

Example 2: A 110-volt, 60-cycle ac generator is connected in a series circuit to a load consisting of an inductance of 3 henrys and a resistance of 10,000 ohms (A, fig. 73).

Step 1. Find the inductive reactance of the circuit.

$$\begin{aligned}X_L &= 2\pi fL \\ &= 2 \times 3.14 \times 60 \times 3 \\ &= 6.28 \times 180 \\ &= 1130.4 \\ &= 1,130 \text{ ohms (approx)}\end{aligned}$$

Step 2. Find the impedance of the circuit.

$$\begin{aligned}Z &= \sqrt{R^2 + X_L^2} \\ &= \sqrt{(10,000)^2 + (1130)^2} \\ &= \sqrt{100,000,000 + 1,276,900} \\ &= \sqrt{101,276,900} \\ &= 10,063.64 \\ &= 10,064 \text{ ohms (approx)}\end{aligned}$$

Step 3. Find the effective current in the circuit. (The effective value is the equivalent heating value of an alternating current as compared to a direct current. It is also called the root-mean-square (rms) value.)

$$\begin{aligned}I &= \frac{E}{Z} \\ &= \frac{110}{10,065} \\ &= 0.0109 \text{ ampere}\end{aligned}$$

Step 4. In a series circuit, the same current flows through all parts of the circuit. Therefore, the current through both the inductance and the resistance is 0.0109 ampere.

Step 5. Find the voltage drop across the inductance.

$$\begin{aligned}E_L &= IX_L \\ &= 0.0109 \times 1130 \\ &= 12.317 \\ &= 12 \text{ volts (approx)}\end{aligned}$$

Step 6. Find the voltage drop across the resistance.

$$\begin{aligned}E_R &= IR \\ &= 0.0109 \times 10,000 \\ &= 109 \text{ volts}\end{aligned}$$

Step 7. Find the total voltage in the circuit. In an ac series circuit, voltage drops are added vectorially (B, fig. 73).

$$\begin{aligned}E_T^2 &= E_L^2 + E_R^2 \\ &= (12)^2 + (109)^2 \\ &= 144 + 11,881 \\ &= 12,025 \\ E_T &= \sqrt{12,025} \\ &= 109.6 \\ &= 110 \text{ volts (approx)}\end{aligned}$$

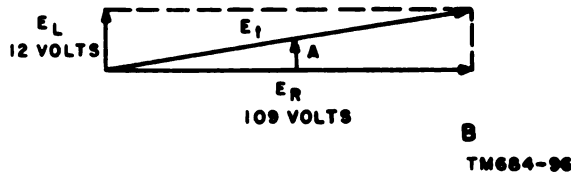
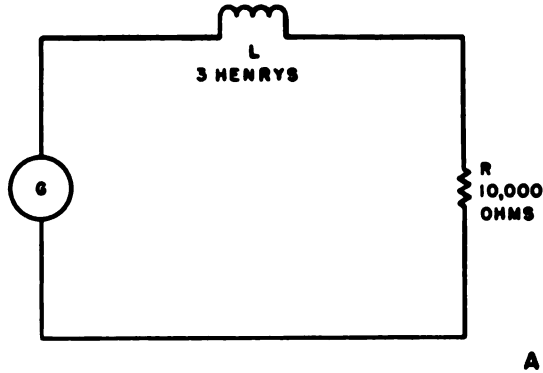


Figure 73. Ac series circuit having inductance and resistance, schematic and vector diagrams.

Step 8. Find the phase angle by which the current lags the applied voltage.

$$\begin{aligned} \cos A &= \frac{R}{Z} \\ &= \frac{10,000}{10,065} \\ &= 0.99354 \\ A &= 6^\circ 31' \end{aligned}$$

b. *Parallel Circuits.* The following examples illustrate the method of solving parallel RL circuits by using the principles described in paragraphs 193 through 198.

Example 1: An ac circuit has an inductance and resistance connected in parallel (fig. 74). The current flowing through the inductance is 0.0584 ampere, and the current flowing through the resistance is 0.11 ampere. What is the total current in the circuit? If the impedance of the circuit is 884 ohms, what is the phase angle by which the line current lags the applied voltage?

Step 1. The vector diagram for this circuit is shown in figure 75. In a parallel circuit the voltage drop across each inductance or resistance is the same—in this circuit, 110 volts. Draw the vector I_R to represent the current through the resistor. Draw the vector I_L to represent the current through the inductance.

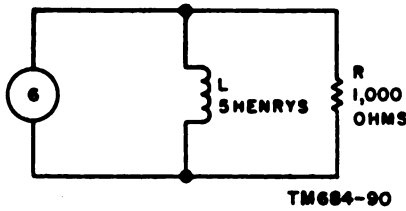


Figure 74. An ac parallel circuit containing inductance and resistance.

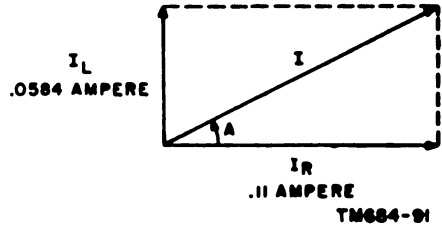


Figure 75. Ac parallel circuit containing inductance and resistance, vector diagram.

Step 2. The horizontal and vertical currents, respectively are:

$$I_R = 0.11 \text{ ampere}$$

$$I_L = 0.0584 \text{ ampere}$$

Step 3. Find the total current as follows:

$$I^2 = I_L^2 + I_R^2$$

$$= (0.0584)^2 + (0.11)^2$$

$$= 0.0034 + .0121$$

$$= 0.0155$$

$$I = \sqrt{0.0155}$$

$$= 0.1245 \text{ ampere}$$

Step 4. Find the phase angle by which the line current lags the applied voltage.

$$\cos A = \frac{Z}{R} \text{ (for parallel circuit)}$$

$$= \frac{884}{1,000}$$

$$= 0.88400$$

$$A = 27^\circ 52' 43''$$

Step 5. Thus, the line current lags the applied voltage by a phase angle of $27^\circ 52' 43''$.

Example 2: A 110-volt, 60-cycle ac generator is connected in a parallel circuit to a load consisting of an inductance of 3 henrys and a resistance of 10,000 ohms (A, fig. 76).

Step 1. Find the inductive reactance of the circuit.

$$X_L = 2\pi fL$$

$$= 2 \times 3.14 \times 60 \times 3$$

$$= 6.28 \times 180$$

$$= 1130.4$$

$$= 1130 \text{ ohms (approx)}$$

Step 2. Find the impedance of the circuit.

$$Z = \frac{RX_L}{\sqrt{R^2 + X_L^2}}$$

$$= \frac{10,000 \times 1130}{\sqrt{(10,000)^2 + (1130)^2}}$$

$$= \frac{10^4 \times 1.13 \times 10^3}{\sqrt{(10^4)^2 + (1.13 \times 10^3)^2}}$$

$$= \frac{1.13 \times 10^7}{\sqrt{10^8 + 1.277 \times 10^6}}$$

$$\begin{aligned}
&= \frac{1.13 \times 10^7}{\sqrt{100 \times 10^6 + 1.277 \times 10^8}} \\
&= \frac{1.13 \times 10^7}{\sqrt{101.277 \times 10^6}} \\
&= \frac{1.13 \times 10^7}{10.07 \times 10^3} \\
&= .1123 \times 10^4 \\
&= 1123 \text{ ohms (approx)}
\end{aligned}$$

Step 3. Find the line current in the circuit.

$$\begin{aligned}
I &= \frac{E}{Z} \\
&= \frac{110}{1123} \\
&= 0.09795 \text{ ampere}
\end{aligned}$$

Step 4. Find the current flowing through the inductance.

$$\begin{aligned}
I_L &= \frac{E}{X_L} \\
&= \frac{110}{1130} \\
&= .09734 \\
&= 0.0973 \text{ ampere (approx)}
\end{aligned}$$

Step 5. Find the current flowing through the resistance.

$$\begin{aligned}
I_R &= \frac{E}{R} \\
&= \frac{110}{10,000} \\
&= 0.011 \text{ ampere}
\end{aligned}$$

Step 6. Find the total current in the circuit. In an ac parallel circuit, the currents through the separate parts of the circuit are added vectorially (B, fig. 76).

$$\begin{aligned}
I_t^2 &= I_L^2 + I_R^2 \\
&= (0.097)^2 + (0.011)^2 \\
&= (9.7 \times 10^{-2})^2 + (1.1 \times 10^{-2})^2 \\
&= 94.09 \times 10^{-4} + 1.21 \times 10^{-4} \\
&= 95.3 \times 10^{-4} \\
I_t &= \sqrt{95.3 \times 10^{-4}} \\
&= 9.8 \times 10^{-2} \\
&= .098 \text{ ampere (approx)}
\end{aligned}$$

Step 7. In a parallel circuit, the voltage drop across one element would be the same as the voltage drop across another element in parallel with it. Thus, the voltage drop across both the inductance and the resistance is 110 volts.

Step 8. Find the phase angle by which the line current lags the applied voltage.

$$\begin{aligned}
\cos A &= \frac{Z}{R} \\
&= \frac{1123}{10,000} \\
&= 0.11230 \\
A &= 83^\circ 33' 52''
\end{aligned}$$

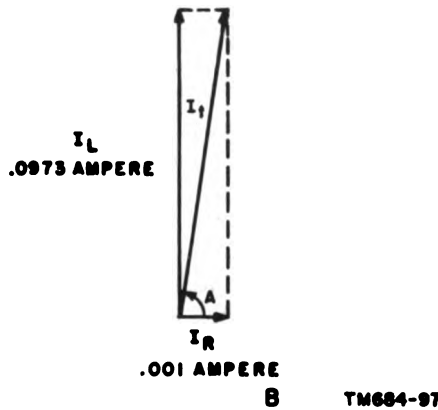
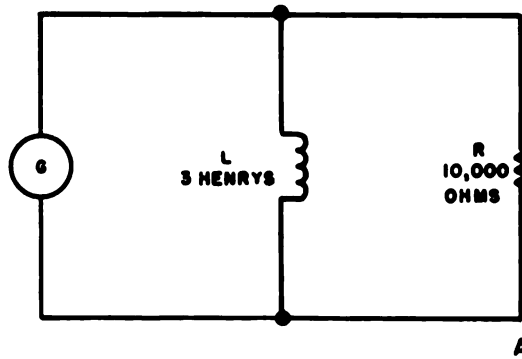


Figure 78. Ac parallel circuit having inductance and resistance, schematic and vector diagrams.

200. Solving Ac Circuits Having Resistance and Capacitance

a. *Series Circuits.* The following examples illustrate the method of solving series ac circuits having resistance and capacitance (called series RC circuits) by using the principles described in paragraphs 193 through 198.

Example 1: An ac generator in a series circuit is connected to a load consisting of a capacitance and a resistance (fig. 77). The voltage drop across the capacitance is 103 volts, and the voltage drop across the resistance is 39 volts. What is the applied voltage in the circuit? If the impedance of the circuit is 2,840 ohms, what is the phase angle by which the current leads the applied voltage?

Step 1. The vector diagram for this circuit is shown in figure 78. In a series circuit, the same current flows through all parts of the circuit—in this case, 0.039 ampere. Draw the vector E_R to represent the voltage drop across the resistance. Draw the vector E_C to represent the voltage drop across the capacitance.

Step 2. The vector sum of these voltage drops is equal to the applied voltage. Adding the horizontal and vertical voltage drops, respectively:

$$E_C + E_R = 0 + 39 = 39$$

$$E_C + E_R = 103 + 0 = 103$$

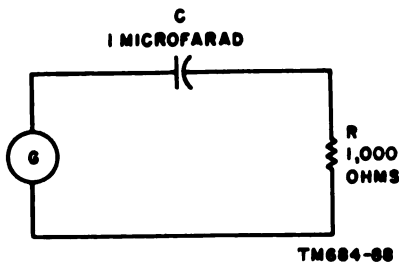


Figure 77. An ac series circuit containing capacitance and resistance.

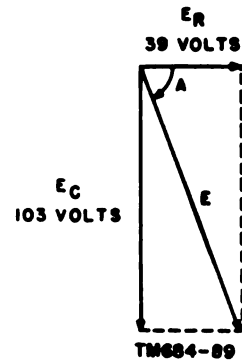


Figure 78. Ac series circuit containing capacitance and resistance, vector diagram.

Step 3. Find the applied voltage as follows:

$$\begin{aligned}
 E^2 &= E_C^2 + E_R^2 \\
 &= (103)^2 + (39)^2 \\
 &= (1.03 \times 10^2)^2 + (3.9 \times 10)^2 \\
 &= 1.061 \times 10^4 + 15.2 \times 10^2 \\
 &= 106.1 \times 10^2 + 15.2 \times 10^2 \\
 &= 121.3 \times 10^2 \\
 E &= \sqrt{121.3 \times 10^2} \\
 &= 11.01 \times 10 \\
 &= 110.1 \text{ volts}
 \end{aligned}$$

Step 4. Find the phase angle by which the current leads the applied voltage.

$$\begin{aligned}
 \cos A &= \frac{R}{Z} \\
 &= \frac{1000}{2840} \\
 &= 0.35211 \\
 &= 69^\circ 24'
 \end{aligned}$$

Step 5. Thus, the current leads the applied voltage by a phase angle of $69^\circ 24'$.

Example 2: A 110-volt, 60-cycle ac generator is connected in a series circuit to a load consisting of a 2-microfarad capacitor and a 10,000-ohm resistor (A, fig. 79).

Step 1. Find the capacitive reactance of the circuit.

$$\begin{aligned}
 X_C &= \frac{1}{2\pi fC} \\
 &= \frac{1}{2 \times 3.14 \times 60 \times 2 \times 10^{-6}} \\
 &= \frac{1}{753.6 \times 10^{-6}} \\
 &= \frac{1}{7.536 \times 10^{-4}} \\
 &= \frac{10^4}{7.536} \\
 &= \frac{10,000}{7.536} \\
 &= 1,327 \text{ ohms (approx)}
 \end{aligned}$$

Step 2. Find the impedance of the circuit.

$$\begin{aligned}Z &= \sqrt{R^2 + X_C^2} \\&= \sqrt{(10,000)^2 + (1327)^2} \\&= \sqrt{(10^4)^2 + (1.327 \times 10^3)^2} \\&= \sqrt{10^8 + 1.761 \times 10^6} \\&= \sqrt{100 \times 10^6 + 1.761 \times 10^6} \\&= \sqrt{101.761 \times 10^6} \\&= 10.088 \times 10^3 \\&= 10,088 \text{ ohms (approx)}\end{aligned}$$

Step 3. Find the current in the circuit.

$$\begin{aligned}I &= \frac{E}{Z} \\&= \frac{110}{10,088} \\&= 0.0109 \text{ ampere (approx)}\end{aligned}$$

Step 4. In a series circuit, the same current flows through all parts of the circuit; therefore, the current through both the capacitance and the resistance is 0.0109 ampere.

Step 5. Find the voltage drop across the capacitance.

$$\begin{aligned}E_c &= IX_c \\&= 0.0109 \times 1327 \\&= 14.46 \\&= 14 \text{ volts}\end{aligned}$$

Step 6. Find the voltage drop across the resistance.

$$\begin{aligned}E_r &= IR \\&= 0.0109 \times 10,000 \\&= 109 \text{ volts}\end{aligned}$$

Step 7. Find the total voltage in the circuit (B, fig. 79).

$$\begin{aligned}E_t^2 &= E_r^2 + E_c^2 \\&= (109)^2 + (14)^2 \\&= (1.09 \times 10^2)^2 + (1.4 \times 10)^2 \\&= 1.1881 \times 10^4 + 1.96 \times 10^2 \\&= 118.81 \times 10^2 + 1.96 \times 10^2 \\&= 120.77 \times 10^2 \\E &= \sqrt{120.77 \times 10^2} \\&= 10.99 \times 10 \\&= 109.9 \text{ or } 110 \text{ volts}\end{aligned}$$

Step 8. Find the phase angle by which the current leads the applied voltage.

$$\begin{aligned}\cos A &= \frac{R}{Z} \\&= \frac{10,000}{10,088} \\&= 0.991178 \\&= 0.99118 \\A &= 7^\circ 37'\end{aligned}$$

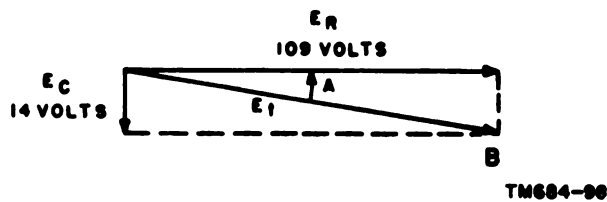
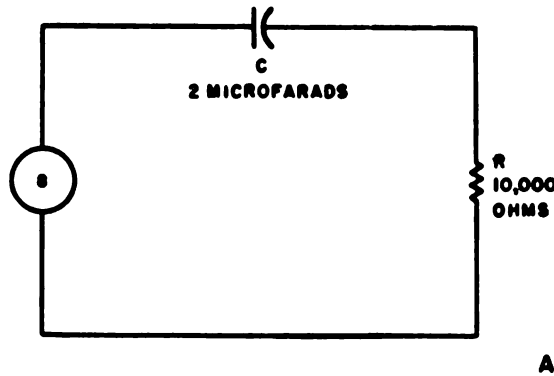


Figure 79. Ac series circuit having capacitance and resistance, schematic and vector diagrams.

b. *Parallel Circuits.* The following examples illustrate the method of solving parallel RC circuits by using the principles described in paragraphs 193 through 198.

Example 1: An ac circuit has a capacitance and resistance connected in parallel (fig. 80). The current flowing through the capacitance is 0.0415 ampere, and the current flowing through the resistance is 0.11 ampere. What is the total current in the circuit? If the impedance of the circuit is 938 ohms, what is the phase angle by which the current leads the applied voltage?

Step 1. The vector diagram for this circuit is shown in figure 81. In a parallel circuit, the voltage drop across each capacitance or resistance is the same—in this case, 110 volts. Draw the vector I_R to represent the current through the resistor. Draw the vector I_C to represent the current through the capacitance.

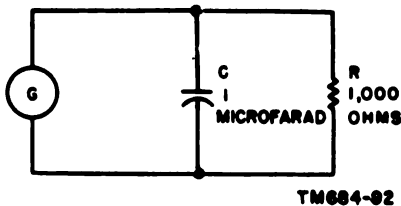


Figure 80. An ac parallel circuit containing capacitance and resistance.

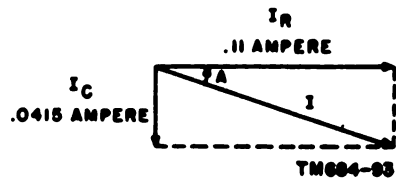


Figure 81. Ac parallel circuit containing capacitance and resistance, vector diagram.

Step 2. The vector sum of the currents through the separate parts of the circuit will be equal to the total current. Adding the horizontal and vertical currents, respectively:

$$I_C + I_R = 0 + .11 = .11$$

$$I_C + I_R = .0415 + 0 = .0415$$

Step 3. Find the total current as follows:

$$\begin{aligned} I^2 &= I_C^2 + I_R^2 \\ &= (.0415)^2 + (.11)^2 \\ &= (1.45 \times 10^{-3})^2 + (11 \times 10^{-2})^2 \\ &= 2.1 \times 10^{-4} + 121 \times 10^{-4} \\ &= 123.1 \times 10^{-4} \\ I &= \sqrt{123.1 \times 10^{-4}} \\ &= 11.1 \times 10^{-2} \\ &= .111 \text{ ampere} \end{aligned}$$

Step 4. Find the phase angle by which the current leads the applied voltage.

$$\begin{aligned} \cos A &= \frac{Z}{R} \\ &= \frac{938}{1,000} \\ &= .93800 \\ A &= 20^\circ 17' 6'' \end{aligned}$$

Step 5. Thus, the current leads the applied voltage by a phase angle of $20^\circ 17' 6''$.

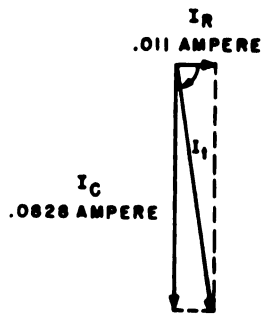
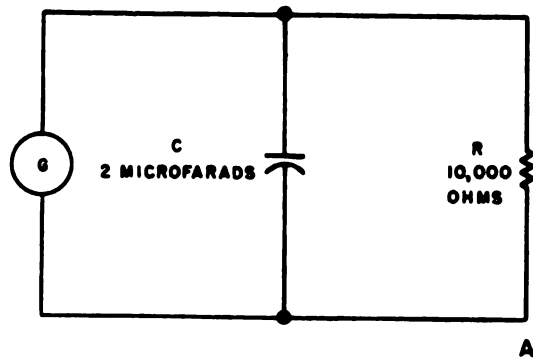
Example 2: A 110-volt, 60-cycle ac generator is connected to a load consisting of a 2-microfarad capacitance and a 10,000-ohm resistance in parallel (A, fig. 82).

Step 1. Find the capacitance reactance of the circuit.

$$\begin{aligned} X_C &= \frac{1}{2\pi fC} \\ &= \frac{1}{2 \times 3.14 \times 60 \times 2 \times 10^{-6}} \\ &= \frac{1}{7.536 \times 10^{-4}} \\ &= \frac{10^4}{7.536} \\ &= \frac{10,000}{7.536} \\ &= 1,327 \text{ ohms} \end{aligned}$$

Step 2. Find the impedance of the circuit.

$$\begin{aligned} Z &= \frac{RX_C}{\sqrt{R^2 + X_C^2}} \\ &= \frac{10,000 \times 1327}{\sqrt{(10,000)^2 + (1327)^2}} \\ &= \frac{10^4 \times 1.327 \times 10^3}{\sqrt{(10^4)^2 + (1.327 \times 10^3)^2}} \\ &= \frac{1.327 \times 10^7}{\sqrt{10^8 + 1.76 \times 10^6}} \\ &= \frac{1.327 \times 10^7}{\sqrt{100 \times 10^6 + 1.76 \times 10^6}} \end{aligned}$$



B TM684-99

Figure 82. Ac parallel circuit having resistance and capacitance, schematic and vector diagrams.

$$\begin{aligned}
 &= \frac{1.327 \times 10^7}{\sqrt{101.76 \times 10^6}} \\
 &= \frac{1.327 \times 10^7}{10.088 \times 10^3} \\
 &= .1315 \times 10^4 \\
 &= .1315 \text{ ohms (approx)}
 \end{aligned}$$

Step 3. Find the current flowing through the capacitance.

$$\begin{aligned}
 I_C &= \frac{E}{X_C} \\
 &= \frac{110}{1327} \\
 &= 0.08289 \\
 &= 0.0829 \text{ ampere}
 \end{aligned}$$

Step 4. Find the current flowing through the resistance.

$$\begin{aligned}
 I_R &= \frac{E}{R} \\
 &= \frac{110}{10,000} \\
 &= 0.011 \text{ ampere}
 \end{aligned}$$

Step 5. Find the total current in the circuit.

$$\begin{aligned}
 I_T^2 &= I_R^2 + I_C^2 \\
 &= (.011)^2 + (.0829)^2 \\
 &= (1.1 \times 10^{-2})^2 + (8.29 \times 10^{-2})^2 \\
 &= 1.21 \times 10^{-4} + 68.72 \times 10^{-4} \\
 &= 69.93 \times 10^{-4}
 \end{aligned}$$

$$\begin{aligned}
 I_t &= \sqrt{69.93 \times 10^{-4}} \\
 &= 8.36 \times 10^{-2} \\
 &= .0836 \text{ ampere (approx)}
 \end{aligned}$$

- Step 6. In a parallel circuit, the voltage drop across each capacitance or resistance in parallel is the same. Thus, the voltage drop across both the capacitance and the resistance is 110 volts.
- Step 7. Find the phase angle by which the current leads the applied voltage.

$$\begin{aligned}
 \cos A &= \frac{Z}{R} \\
 &= \frac{1315}{10,000} \\
 &= 0.13150 \\
 A &= 82^\circ 26' 37''
 \end{aligned}$$

201. Solving Ac Circuits Having Resistance, Inductance, and Capacitance

a. *Series Circuits.* The following examples illustrate the method of solving series ac circuits having resistance, inductance, and capacitance (called series RLC circuits) by using the principles described in paragraphs 193 through 198.

Example 1: A 300-volt, 60-cycle ac generator is connected in series with a 6-ohm resistance, an 8-ohm inductive reactance, and a 16-ohm capacitive reactance (fig. 83). Find (1) the resultant reactive voltage, (2) the current flowing in the circuit, and (3) the voltage drops across the resistance, the inductance, and the capacitance. (4) Check the solution by vectorially adding E_L , E_C , and E_R . The result should equal the applied voltage. (5) Find the phase angle by which the current leads or lags the applied voltage.

- Step 1. The vector diagram for this circuit is shown in figure 84. Since E_C and E_L are 180° out of phase, their vector sum

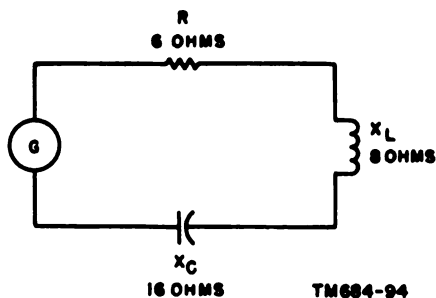


Figure 83. An ac series circuit containing resistance, inductive reactance, and capacitance reactance.

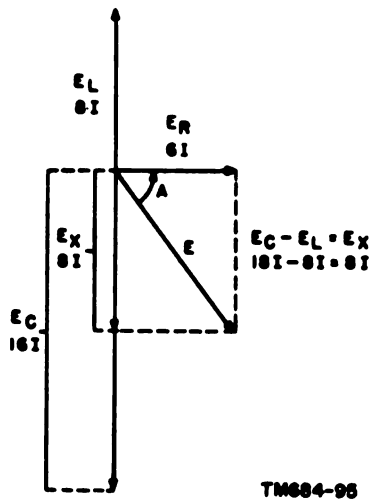


Figure 84. Ac series circuit containing resistance, inductive reactance, and capacitive reactance vector diagram.

is the difference between the two. E_C is greater than E_L ; thus, the resultant reactive voltage, E_X , is $16I - 8I = 8I$.

Step 2. Find the current flowing in the circuit.

$$\begin{aligned}
 E^2 &= E_R^2 + E_X^2 \\
 E^2 &= (IR)^2 + (IX)^2 \\
 (300)^2 &= (6I)^2 + (8I)^2 \\
 (3 \times 10^2)^2 &= (6I)^2 + (8I)^2 \\
 9 \times 10^4 &= 36I^2 + 64I^2 \\
 9 \times 10^4 &= 100I^2 \\
 9 \times 10^4 &= 10^2I^2 \\
 \sqrt{9 \times 10^4} &= \sqrt{10^2I^2} \\
 3 \times 10^2 &= 10I \\
 300 &= 10I \\
 I &= 30 \text{ amperes}
 \end{aligned}$$

Step 3. Find the voltage drop across the resistance.

$$\begin{aligned}
 E_R &= IR \\
 &= 30 \times 6 \\
 &= 180 \text{ volts}
 \end{aligned}$$

Step 4. Find the voltage drop across the inductance.

$$\begin{aligned}
 E_L &= IX_L \\
 &= 30 \times 8 \\
 &= 240 \text{ volts}
 \end{aligned}$$

Step 5. Find the voltage drop across the capacitance.

$$\begin{aligned}
 E_C &= IX_C \\
 &= 30 \times 16 \\
 &= 480 \text{ volts}
 \end{aligned}$$

Step 6. Find the resultant reactive voltage.

$$\begin{aligned}
 E_X &= E_C - E_L \\
 &= 480 - 240 \\
 &= 240 \text{ volts}
 \end{aligned}$$

Step 7. Vectorially add the voltages in the circuit. The result should equal the applied voltage.

$$\begin{aligned}
 E^2 &= E_R^2 + E_X^2 \\
 &= (180)^2 + (240)^2 \\
 &= (1.8 \times 10^2)^2 + (2.4 \times 10^2)^2 \\
 &= 3.24 \times 10^4 + 5.76 \times 10^4 \\
 &= 9 \times 10^4 \\
 E &= \sqrt{9 \times 10^4} \\
 &= 3 \times 10^2 \\
 &= 300 \text{ volts}
 \end{aligned}$$

Step 8. Find the phase angle by which the current leads or lags the applied voltage in the circuit.

$$\begin{aligned}
 \tan A &= \frac{X_L - X_C}{R} \\
 &= \frac{8}{6} \\
 &= 1.33333 \\
 A &= 53^\circ 7' 48''
 \end{aligned}$$

Step 9. The circuit is predominantly capacitive; therefore, the current *leads* the applied voltage by a phase angle of $53^{\circ} 7' 48''$.

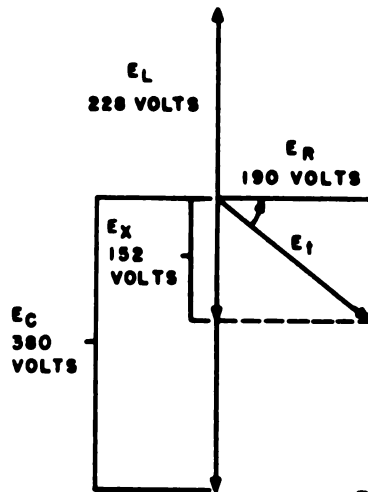
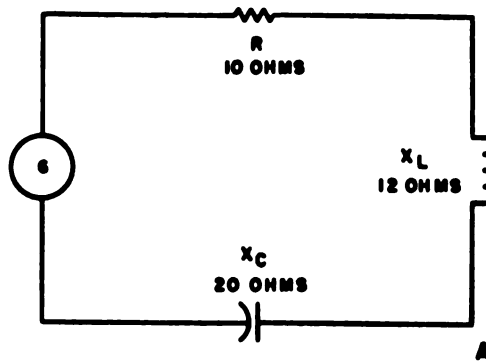
Example 2: A 60-cycle ac generator is connected in series with a 10-ohm resistance, a 12-ohm inductive reactance, and a 20-ohm capacitive reactance (A, fig. 85). The current flowing through the circuit is 19 amperes. (1) Find the voltage drop across each circuit element. (2) Find the total voltage. (3) Find the phase angle between the current and the applied voltage.

Step 1. Find the voltage drop across the resistance.

$$\begin{aligned} E_R &= IR \\ &= 19 \times 10 \\ &= 190 \text{ volts} \end{aligned}$$

Step 2. Find the voltage drop across the inductance.

$$\begin{aligned} E_L &= IX_L \\ &= 19 \times 12 \\ &= 228 \text{ volts} \end{aligned}$$



TM684-100

Figure 85. An ac series circuit having inductance, capacitance, and resistance, schematic and vector diagrams.

Step 3. Find the voltage drop across the capacitance.

$$\begin{aligned} E_c &= IX_c \\ &= 19 \times 20 \\ &= 380 \text{ volts} \end{aligned}$$

Step 4. Find the resultant reactive voltage.

$$\begin{aligned} E_x &= E_c - E_L \\ &= 380 - 228 \\ &= 152 \text{ volts} \end{aligned}$$

Step 5. Find the total voltage in the circuit.

$$\begin{aligned} E^2 &= E_R^2 + E_x^2 \\ &= (190)^2 + (152)^2 \\ &= (1.9 \times 10^2)^2 + (1.52 \times 10^2)^2 \\ &= 3.61 \times 10^4 + 2.31 \times 10^4 \\ &= 5.92 \times 10^4 \\ E &= \sqrt{5.92 \times 10^4} \\ &= 2.43 \times 10^2 \\ &= 243 \text{ volts} \end{aligned}$$

Step 6. Find the phase angle by which the current leads the applied voltage in the circuit. Since the capacitive reactance is greater and cancels the inductive reactance, the circuit is capacitive and the current leads the applied voltage by the phase angle A .

$$\begin{aligned} \tan A &= \frac{X_c - X_L}{R} \\ &= \frac{20 - 12}{10} \\ &= \frac{8}{10} \\ &= .80000 \\ A &= 38^\circ 39' 35'' \end{aligned}$$

b. Parallel Circuits. The following example illustrates the method of solving parallel ac circuits having resistance, inductance, and capacitance (called parallel RLC circuits) by using the principles described in paragraphs 193 through 198.

Example: A parallel circuit has a 300-volt input, a 150-ohm resistance, a 125-ohm inductive reactance, and a 100-ohm capacitive reactance (A, fig. 86).

Step 1. Since this is a parallel circuit, the same voltage is impressed across the inductance, the resistance, and the capacitance. Thus, the voltage across each of them is 300 volts.

Step 2. Find the current flowing through the resistor.

$$\begin{aligned} I_R &= \frac{E}{R} \\ &= \frac{300}{150} \\ &= 2 \text{ amperes} \end{aligned}$$

Step 3. Find the current flowing through the inductance.

$$\begin{aligned} I_L &= \frac{E}{X_L} \\ &= \frac{300}{125} \\ &= 2.4 \text{ amperes} \end{aligned}$$

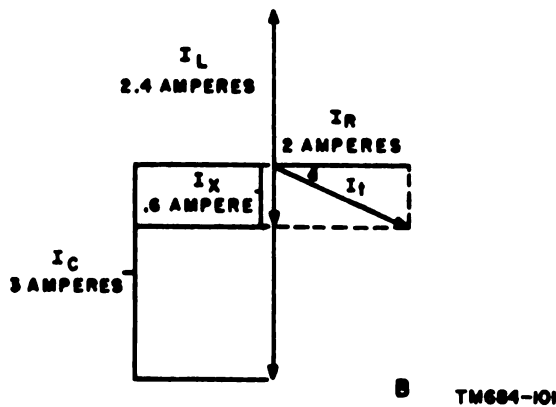
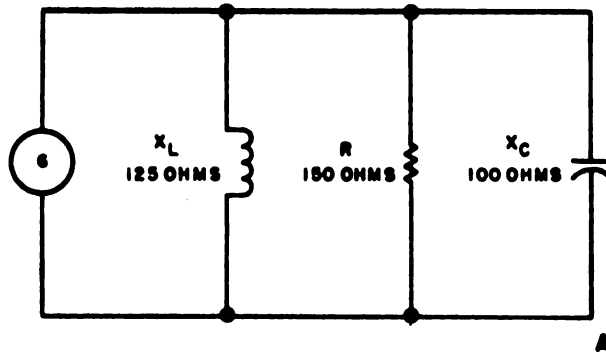


Figure 86. A parallel circuit having inductance, capacitance, and resistance, schematic and vector diagrams.

Step 4. Find the current flowing through the capacitor.

$$\begin{aligned}
 I_c &= \frac{E}{X_C} \\
 &= \frac{300}{100} \\
 &= 3 \text{ amperes}
 \end{aligned}$$

Step 5. Find the total current in the circuit (B, fig. 86).

$$\begin{aligned}
 I_x &= I_c - I_L \\
 &= 3 - 2.4 \\
 &= .6 \text{ ampere} \\
 I_t^2 &= I_R^2 + I_x^2 \\
 &= (2)^2 + (.6)^2 \\
 &= 4 + .36 \\
 &= 4.36 \\
 I_t &= \sqrt{4.36} \\
 &= 2.0889 \\
 &= 2.089 \text{ amperes}
 \end{aligned}$$

Step 6. Find the impedance of the circuit.

$$\begin{aligned} Z &= \frac{E}{I_i} \\ &= \frac{300}{2.089} \\ &= 143.6 \\ &= 144 \text{ ohms (approx)} \end{aligned}$$

Step 7. Find the phase angle by which the current leads the applied voltage. Since this is a parallel circuit in which the inductive reactance is greater than the capacitive reactance, the circuit is capacitive and the current leads the applied voltage.

$$\begin{aligned} \cos A &= \frac{Z}{R} \\ &= \frac{144}{150} \\ &= .96000 \\ A &= 16^\circ 15' 38'' \end{aligned}$$

202. Resonance

In a series or parallel ac circuit containing inductance and capacitance, a condition known as *resonance* exists when the inductive reactance equals the capacitive reactance. This condition occurs at a specific frequency called the *resonant frequency*. A formula for finding the resonant frequency is derived by equating the formulas for inductive reactance and capacitive reactance, as follows:

$$\begin{aligned} X_L &= X_C \\ 2\pi f_r L &= \frac{1}{2\pi f_r C} \\ 4\pi^2 f_r^2 LC &= 1 \\ f_r^2 &= \frac{1}{4\pi^2 LC} \\ f_r &= \frac{1}{2\pi\sqrt{LC}} \end{aligned}$$

where f_r is the resonant frequency.

Example: Find the resonant frequency of a circuit containing a 4-millihenry inductance and a 40-micromicrofarad capacitor in series with a variable frequency ac source.

$$\begin{aligned} f &= \frac{1}{2\pi\sqrt{LC}} \\ &= \frac{1}{6.28\sqrt{4 \times 10^{-3} \times 4 \times 10^{-11}}} \\ &= \frac{1}{6.28 \times 4 \times 10^{-7}} \\ &= \frac{10^7}{25.12} \\ &= \frac{10,000,000}{25.12} \\ &= 398,000 \text{ cps or } 398 \text{ kilocycles (kc)}. \end{aligned}$$

203. Ac Power

a. In an ac circuit containing both resistance and reactance the only power actually dissipated is the power absorbed by the resistance of the circuit (*b* below). However, if the circuit contained reactance only, large amounts of power would still *appear* to be consumed because of the phase difference between voltage and current. Consequently, in either case an ac generator supplying power to the circuit would receive less power from the circuit than it delivers to the circuit. The power which the generator delivers to the circuit is called the *apparent* power and is equal to the product of the effective value of the voltage ($E_{\max}/\sqrt{2}$) and the effective value of the current ($I_{\max}/\sqrt{2}$). Therefore,

$$P \text{ (apparent power)} = \frac{E_{\max}}{\sqrt{2}} \cdot \frac{I_{\max}}{\sqrt{2}}$$

$$= \frac{E_{\max} I_{\max}}{2}$$

b. Apparent power is different from the actual power consumed by the load, which is called the average or true power and is the energy absorbed by the resistance of the circuit. The average or true power is expressed by the formula $P = EI \cos \theta$, where

E = effective value of the voltage across the circuit

I = effective value of the current in the circuit

θ = phase angle between current and voltage

c. Apparent power may also be expressed by the following formulas:

$$P = EI$$

$$P = I^2 Z$$

$$P = \frac{E^2}{Z}$$

d. In a purely resistive circuit, average or true ac power also may be expressed by Joule's law ($P = I^2 R$) as in the dc case (par. 191).

e. The following examples illustrate some of the above principles.

Example 1: Find the power that an ac generator must deliver to a circuit if the peak voltage is 230 volts and the peak current is 5 amperes.

$$P = \frac{E_{\max} I_{\max}}{2}$$

$$= \frac{230 \times 5}{2}$$

$$= 575 \text{ watts.}$$

Example 2: Find the average power consumed in a circuit if the effective ac voltage is 115 volts, the effective current is 7 amperes, and the current leads the voltage by 60° .

$$P = EI \cos \theta$$

$$= 115 \times 7 \times \cos 60^\circ$$

$$= 115 \times 7 \times .5$$

$$= 402.5 \text{ watts.}$$

204. Review Problems—Ac Electricity

a. An alternator is connected to a 520-volt, 60-cycle ac parallel circuit having a resistance of 96 ohms, an inductance of 249 millihenrys, and a capacity of 19.8 microfarads. (1) Find the inductive reactance of the circuit. (2) Find the capacitive reactance of the circuit. (3) Determine whether the current leads or lags the voltage. (4) Find the impedance of the circuit. (5) Determine the value of the current in the circuit.

b. Determine the inductive reactance of a coil if the ac in the circuit has a frequency of 60 cps, and the inductance of the coil is 0.025 henry.

c. A 110-volt, 25-cycle ac generator is connected in series with a 0.1-microfarad capacitance and a 2,000-ohm resistance. What is the capacitive reactance of the circuit?

d. What is the value of the reactance of a circuit if the impedance $Z = 100$ ohms and the resistance $R = 60$ ohms?

e. Find the resonant frequency of a series RLC circuit if the inductance is 0.478 millihenry and the capacitance is 256 micromicrofarads.

f. A series RLC circuit consists of 6 ohms resistance, 8 ohms inductive reactance, and 16 ohms capacitive reactance. (1) Find the current in the circuit. (2) Find the voltage drop across the resistance. (3) Find the voltage drop across the capacitance. (4) Find the voltage drop across the inductance.

g. A parallel RLC circuit has an input voltage of 300 volts, an inductive reactance of 75 ohms, a capacitive reactance of 50 ohms, and a resistance of 100 ohms. (1) Find the current through the resistance. (2) Find the current through the inductance. (3) Find the

current through the capacitance. (4) Find the total impedance of the circuit. (5) Find the phase angle between the line or total current and the applied voltage. (6) Find the average power. (7) Find the apparent power.

CHAPTER 16

APPLICATIONS OF LOGARITHMS TO TRANSMISSION PROBLEMS

205. The Transmission Unit

When signal power is transmitted along a transmission line, there is a power loss or attenuation; if an amplifier is used in the circuit, there may be a power gain. This loss or gain of power, resulting in a decrease or increase in the intensity of the signal, is measured in terms of the decibel (db). The decibel is a measure of power *ratio* and is probably the most widely used unit in communications. The formula for measuring transmission loss or gain is:

$$\text{db} = 10 \log_{10} \frac{P_1}{P_2}$$

where $\frac{P_1}{P_2}$ is the ratio of the two powers being compared (par. 206).

206. Converting Power Ratio to Decibels

When converting a power ratio into its decibel expression, represent the larger power as P_1 and the smaller power as P_2 , regardless of whether the larger power is the input or output. Thus, the power ratio will always be greater than 1, and its logarithm will be a positive number. Prefix a plus sign to the answer if the power change is a gain (the power output greater than the power input); prefix a minus sign if the power change is a loss.

Example 1: The input power to a transmission line is 10 milliwatts, and the output power is 2.46 milliwatts. Express the power change in db.

$$\begin{aligned} \text{db} &= 10 \log \frac{P_1}{P_2} \\ &= 10 \log \frac{10}{2.46} \\ &= 10 \times \log 4.07 \\ &= 10 \times .6096 \\ &= -6.096 \end{aligned}$$

Thus, the loss of the transmission line is 6.096 db, since input is greater than output.

Example 2: A repeater amplifier has an input power of 2 milliwatts and an output power of 400 watts. Calculate the power change.

$$\begin{aligned} \text{db} &= 10 \log \frac{P_1}{P_2} \\ &= 10 \log \frac{400}{.002} \\ &= 10 \times \log 200,000 \\ &= 10 \times 5.3010 \\ &= +53.01 \end{aligned}$$

The gain of the repeater amplifier is 53.01 db, since output is greater than input.

207. Converting Decibels to Power Ratio

To find the power ratio when the gain or loss is expressed in decibels, reverse the procedure given in paragraph 206. If the number of decibels is positive, the circuit has a power gain and the output power is greater than the input power. If the number of decibels is negative, the circuit has a power loss and the output power is less than the input power. Insert the power change in decibels in the formula given in paragraph 200 and divide by 10; then find the antilog of both sides of the equation (par. 118) to obtain the power ratio.

Example 1: A circuit is known to have a power change of +12 db. Find the power ratio.

$$\begin{aligned} \text{db} &= 10 \log \frac{P_1}{P_2} \\ 12 \text{ db} &= 10 \log \frac{P_1}{P_2} \\ 1.2 &= \log \frac{P_1}{P_2} \end{aligned}$$

Find the antilog of both sides of the equation.

$$\frac{P_1}{P_2} = 15.85 \text{ of } 15.9$$

Since the number of decibels is given as positive, the circuit has a gain and its output power is 15.9 times its input power.

Example 2: A certain wire transmission circuit has a power change of -25 db. Calculate the power ratio.

$$\text{db} = 10 \log \frac{P_1}{P_2}$$

$$25 \text{ db} = 10 \log \frac{P_1}{P_2}$$

$$2.5 = \log \frac{P_1}{P_2}$$

$$\frac{P_1}{P_2} = 316.2$$

Since the number of decibels has a minus sign, the circuit attenuates power. The output power is less than the input power by a ratio of 1 to 316.2.

208. Review Problems—Transmission Problems

a. A network has a loss of 16 decibels. What power ratio correspond to this loss?

b. The input to a powerline 50 miles long is 210 milliwatts. The power delivered at the end of the line is 40 microwatts. What is the attenuation in decibels per mile?

c. A power of 10 milliwatts is required to drive an audiofrequency (af) amplifier. The output of the amplifier is 120 milliwatts. What is the gain in decibels?

d. What is the ratio of the output power to the input power if there is a power gain of 14 decibels?

CHAPTER 17

MISCELLANEOUS ELECTRICAL PROBLEMS

209. Efficiency

Efficiency is the ratio of output to input and usually is expressed in percent (ch. 2). Generators, motors, and other electrical devices often are rated according to their efficiency. To express efficiency in percent, write the ratio of output to input as a fraction, convert to a decimal, and then convert the decimal to a percent (par. 4).

Example: What is the efficiency of a generator that has an output of 60 kilowatts (kw) and an input of 75 kilowatts?

$$\begin{aligned}\text{Efficiency} &= \frac{\text{Output}}{\text{Input}} \\ &= \frac{60}{75} \\ &= 0.80 \\ &= 80\%\end{aligned}$$

210. Percent Overload

Another application of percent is the overload rating of motors, generators, etc. In this application, the amount of power, that can be applied to or taken from an electrical device, above the rated output, is expressed as a percent of the rated output.

Example 1: What is the percent of overload capacity of a generator that has a rated output of 500 watts and can provide a maximum of 550 watts?

$$\begin{aligned}\text{Overload} &= \text{maximum power} - \text{rated power} \\ &= 550 - 500 \\ &= 50 \text{ watts}\end{aligned}$$

$$\begin{aligned}\text{Percent overload} &= \frac{\text{Overload}}{\text{Rated power}} \\ &= \frac{50}{500} \\ &= 10\%\end{aligned}$$

Example 2: Find the maximum output of a generator that is rated at 1,500 watts, and has a 10 percent overload capacity.

$$\begin{aligned}0.10 \times 1,500 &= 150 \text{ watts} \\ 1,500 + 150 &= 1,650 \text{ watts maximum output.}\end{aligned}$$

211. Tolerances

A tolerance is an allowance for variations from the standard or specified value. In the manufacture of resistors, for example, the resistance is permitted to be within a specified percentage of the standard value. This percentage is indicated in the color code of the resistors.

Example: Find the possible low and high values of a 20,000-ohm resistor with a tolerance of ± 5 percent.

$$\begin{aligned}0.05 \times 20,000 &= 1,000 \text{ ohms} \\ 20,000 + 1,000 &= 21,000 \text{ ohms (high value)} \\ 20,000 - 1,000 &= 19,000 \text{ ohms (low value)}\end{aligned}$$

Therefore, since the tolerance is plus or minus 5%, the value of the resistor should be between 21,000 and 19,000 ohms.

212. Transformer Relationships

a. *General.* In a transformer, relationships exist between the currents, voltages, impedances, and number of turns of wire in the windings. These relationships are expressed by equations containing ratios involving these quantities.

b. *Relationship Between Voltage and Number of Turns.* This relationship is expressed by the following equation:

$$\frac{E_p}{N_p} = \frac{E_s}{N_s}$$

where E_p is the voltage across the primary winding, N_p is the number of turns on the primary winding, E_s is the voltage across the secondary winding, and N_s is the number of turns on the secondary winding (fig. 87). The equation may also be written:

$$\begin{aligned} \frac{E_p}{E_s} &= \frac{N_p}{N_s} \\ E_p N_s &= E_s N_p \\ E_s &= \frac{E_p N_s}{N_p} \text{ or } E_p \left(\frac{N_s}{N_p} \right) \\ E_p &= \frac{E_s N_p}{N_s} \text{ or } E_s \left(\frac{N_p}{N_s} \right) \end{aligned}$$

The ratios N_p/N_s and N_s/N_p are called the *turns ratios* and may be expressed as a single factor.

Example: Find the voltage across the secondary winding of a transformer if the primary voltage is 100 volts and the turns ratio from primary to secondary is 1 to 4.

$$\begin{aligned} \frac{N_p}{N_s} &= \frac{1}{4} \text{ or } \frac{N_s}{N_p} = 4 \\ E_s &= E_p \left(\frac{N_s}{N_p} \right) \\ E_s &= 100 (4) \\ &= 400 \text{ volts} \end{aligned}$$

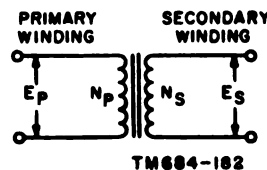


Figure 87. Simple Transformer.

c. *Relationship Between Current and Number of Turns.* This relationship is expressed by the following equation:

$$\frac{I_p}{I_s} = \frac{N_s}{N_p}$$

where I_p is the primary current, I_s is the secondary current, and N_p and N_s the number of turns on the primary and secondary as before. The equation may be written:

$$\begin{aligned} I_p N_p &= I_s N_s \\ I_p &= \frac{I_s N_s}{N_p} \text{ or } I_s \left(\frac{N_s}{N_p} \right) \\ I_s &= \frac{I_p N_p}{N_s} \text{ or } I_p \left(\frac{N_p}{N_s} \right) \end{aligned}$$

Example: Find the primary current in a transformer if the secondary current is 5 milliamperes and the turns ratio from primary to secondary is 20 to 1.

$$\frac{N_2}{N_1} = \frac{20}{1} \text{ or, } \frac{N_2}{N_1} = \frac{1}{20}$$

$$I_1 = I_2 \left(\frac{N_2}{N_1} \right)$$

$$= 5 \times 10^{-3} \left(\frac{1}{20} \right)$$

$$I_1 = \frac{10^{-4}}{4}$$

$$= \frac{0.00100}{4}$$

$$= 0.00025 \text{ amperes, or, } 0.25 \text{ milliamperes}$$

d. Relationship Between Current and Voltage. By combining the relationships given in *b* and *c* above, a relationship can be derived between primary and secondary currents as follows:

$$\frac{E_2}{E_1} = \frac{N_2}{N_1} \text{ (from } b \text{ above)}$$

$$\frac{I_2}{I_1} = \frac{N_1}{N_2} \text{ (from } c \text{ above)}$$

$$\text{Therefore, } \frac{E_2}{E_1} = \frac{I_1}{I_2} \text{ (because both are equal to } \frac{N_2}{N_1} \text{)}$$

The equation may also be written:

$$E_1 = \frac{E_2 I_2}{I_1}$$

$$I_1 = \frac{E_2 I_2}{E_1}$$

$$E_1 = \frac{E_2 I_2}{I_1}$$

$$I_1 = \frac{E_2 I_2}{E_1}$$

$$E_1 I_1 = E_2 I_2$$

Since voltage multiplied by current equals power, the last form of the equation states that the power absorbed by the primary winding is equal to the power delivered to the secondary winding. This is true in an ideal transformer which has no loss, and is essentially true in an actual transformer which has very little loss; efficiencies of 98 percent are common in actual transformers.

Example: Find the voltage across the secondary winding of a transformer if the primary voltage is 150 volts, the primary current is 5 amperes, and the secondary current is 25 amperes.

$$E_1 = \frac{E_2 I_2}{I_1}$$

$$= \frac{150 \times 5}{25}$$

$$= 30 \text{ volts}$$

e. *Relationship Between Impedance and Number of Turns.* This relationship also can be derived from the relationships given in b and c above by dividing one by the other, as follows:

$$\frac{E_p}{E_s} = \frac{N_p}{N_s} \text{ (from b above)}$$

$$\frac{I_p}{I_s} = \frac{N_s}{N_p} \text{ (from c above)}$$

$$\frac{\frac{E_p}{E_s}}{\frac{I_p}{I_s}} = \frac{\frac{N_p}{N_s}}{\frac{N_s}{N_p}} \text{ (dividing the first by the second)}$$

$$\frac{I_s}{I_p} \cdot \frac{E_p}{E_s} = \frac{N_p}{N_s} \cdot \frac{N_p}{N_s}$$

$$\frac{E_p}{I_p} \cdot \frac{I_s}{E_s} = \frac{N_p^2}{N_s^2}$$

$$Z_p \cdot \frac{1}{Z_s} = \frac{N_p^2}{N_s^2} \text{ (substituting } Z \text{ for } \frac{E}{I}\text{)}$$

$$\frac{Z_p}{Z_s} = \frac{N_p^2}{N_s^2} \text{ or, } \frac{Z_p}{Z_s} = \left(\frac{N_p}{N_s}\right)^2$$

where Z_p is the impedance of the primary winding and Z_s is the impedance of the secondary winding in ohms. The equation may also be written:

$$Z_p = Z_s \left(\frac{N_p}{N_s}\right)^2$$

$$Z_s = Z_p \left(\frac{N_s}{N_p}\right)^2$$

Example: Find the impedance of the secondary winding of a transformer if the impedance of the primary winding is 200 ohms and the turns ratio from primary to secondary is 5 to 1.

$$\frac{N_p}{N_s} = \frac{5}{1} \text{ or, } \frac{N_s}{N_p} = \frac{1}{5}$$

$$\begin{aligned} Z_s &= Z_p \left(\frac{N_s}{N_p}\right)^2 \\ &= 200 \left(\frac{1}{5}\right)^2 \\ &= 200 \times \frac{1}{25} \\ &= 8 \text{ ohms} \end{aligned}$$

213. Conductance

Conductance is a measure of the ease with which current flows in a circuit. It is given the symbol G and is equal to the reciprocal of resistance: $G = 1/R$. The unit of conductance is the *mho*, which is the word ohm spelled backwards.

Example: Find the conductance of a circuit consisting of a 4-ohm resistor in parallel with a 5-ohm resistor. In a parallel circuit, the

reciprocal of the total resistance is equal to the sum of the reciprocals of the individual resistances:

$$\begin{aligned} \frac{1}{R_t} &= \frac{1}{R_1} + \frac{1}{R_2}, \\ \text{or } G &= \frac{1}{R_1} + \frac{1}{R_2} \\ G &= \frac{1}{4} + \frac{1}{5} \\ &= .25 + .20 \\ &= .45 \text{ mhos} \end{aligned}$$

214. Energy Stored in an Inductance

The amount of energy stored in an inductance is determined from the formula $P = \frac{LI^2}{2}$, where

L = inductance in henrys

I = current in amperes

P = energy in joules.

Example: Find the energy stored in a coil if the inductance is 7 milli-henrys and the current is 3 milliamperes. Using scientific notation (par. 106), the energy in joules is:

$$\begin{aligned} P &= \frac{LI^2}{2} \\ &= \frac{7 \times 10^{-3} (3 \times 10^{-3})^2}{2} \\ &= \frac{7 \times 10^{-3} 9 \times 10^{-6}}{2} \\ &= \frac{63 \times 10^{-9}}{2} \\ &= 31.5 \times 10^{-9} \text{ joules.} \end{aligned}$$

215. Delta-Wye Transformations

a. A delta circuit consists of three resistors or other circuit components connected together to form the Greek letter *delta* (Δ). In a wye circuit, the resistors or other circuit components are connected together to form the letter *Y*. Figure 88 shows an example of each type of circuit constructed of resistors.

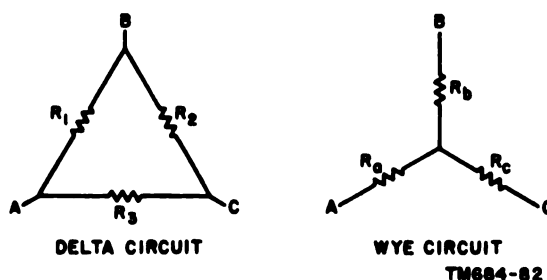


Figure 88. Delta and wye circuits.

b. If the resistances are known for a delta circuit, they can be found for an equivalent wye circuit from the following equations:

$$R_a = \frac{R_1 R_2}{R_1 + R_2 + R_3}$$

$$R_b = \frac{R_1 R_3}{R_1 + R_2 + R_3}$$

$$R_c = \frac{R_2 R_3}{R_1 + R_2 + R_3}$$

Example: Find the equivalent resistances for a wye circuit if the resistances of a delta circuit are 10, 20, and 70 ohms.
Let $R_1 = 10$ ohms, $R_2 = 20$ ohms, and $R_3 = 70$ ohms.

$$\begin{aligned} R_a &= \frac{R_1 R_3}{R_1 + R_2 + R_3} \\ &= \frac{10 \times 70}{10 + 20 + 70} \\ &= \frac{700}{100} \\ &= 7 \text{ ohms} \end{aligned}$$

$$\begin{aligned} R_b &= \frac{R_1 R_2}{R_1 + R_2 + R_3} \\ &= \frac{10 \times 20}{100} \\ &= 2 \text{ ohms} \end{aligned}$$

$$\begin{aligned} R_c &= \frac{R_2 R_3}{R_1 + R_2 + R_3} \\ &= \frac{20 \times 70}{100} \\ &= 14 \text{ ohms} \end{aligned}$$

c. If the resistances are known for a wye circuit, they can be found for an equivalent delta circuit from the following equations:

$$\begin{aligned} R_1 &= \frac{R_a R_b + R_a R_c + R_b R_c}{R_a} \\ R_2 &= \frac{R_a R_b + R_a R_c + R_b R_c}{R_b} \\ R_3 &= \frac{R_a R_b + R_a R_c + R_b R_c}{R_c} \end{aligned}$$

Example: Find the equivalent resistance for a delta circuit if the resistances of a wye circuit are 10, 20, and 30 ohms.
Let $R_a = 10$ ohms, $R_b = 20$ ohms, and $R_c = 30$ ohms.

$$\begin{aligned} R_1 &= \frac{R_a R_b + R_a R_c + R_b R_c}{R_a} \\ &= \frac{10 \times 20 + 10 \times 30 + 20 \times 30}{10} \\ &= \frac{200 + 300 + 600}{10} \\ &= \frac{1,100}{10} \\ &= 110 \text{ ohms} \end{aligned}$$

$$\begin{aligned} R_2 &= \frac{R_a R_b + R_a R_c + R_b R_c}{R_b} \\ &= \frac{1,100}{20} \\ &= 55 \text{ ohms} \end{aligned}$$

$$\begin{aligned} R_3 &= \frac{R_a R_b + R_a R_c + R_b R_c}{R_c} \\ &= \frac{1,100}{30} \\ &= 36.666 \\ &= 36.67 \text{ ohms} \end{aligned}$$

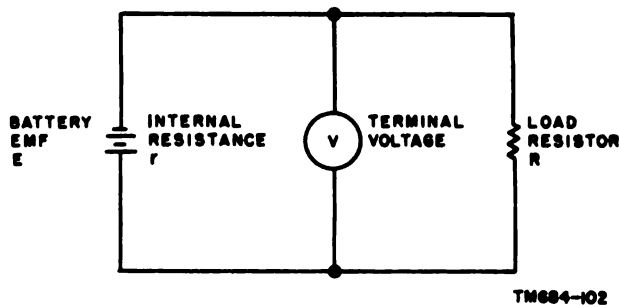


Figure 89. Maximum power transfer.

216. Maximum Power Transfer

a. Quadratic equations (par. 87-94) are used in problems involving the transfer of power from a source to a load. Such a problem can be illustrated by referring to figure 89. In the figure, the battery voltage is given as E , the internal resistance of the battery as r , the terminal voltage as V , and the load resistance as R . The total resistance of the circuit is $(R + r)$. From Ohm's law, $E = I(R + r)$, and the power delivered to the load is $P = VI$ where $V = E - Ir$.

b. The current through the circuit passes through the battery and drops the battery voltage to what is called the *terminal voltage*. Substituting for V in the power equation, $P = (E - Ir)I$, or $P = EI - I^2r$. A quadratic equation in I is obtained when the terms are rearranged. Thus, $-I^2r + EI - P = 0$. This equation can be solved for maximum current by using the method for finding the minimum value as a quadratic (par. 91). In the equation $-rI^2 + EI - P = f(I)$, $a = -r$, $b = E$, and $c = -P$. Substituting in the equation $I = \frac{-b}{2a}$, $I_{\text{max power}} = \frac{-E}{2(-r)} = \frac{E}{2r}$. This equation will give the current through the circuit when maximum power is delivered.

Example: If a 12-volt battery has an internal resistance of 3 ohms, find the current flowing in the circuit when maximum power is being delivered to the load.

$$\begin{aligned} I &= \frac{E}{2r} \\ &= \frac{12}{2 \times 3} \\ &= 2 \text{ amperes} \end{aligned}$$

c. If the value for current at maximum power transfer $\left(\frac{E}{2r}\right)$ is substituted in the original equation $I(R + r) = E$, a relationship between the load resistance and the internal resistance of the battery for maximum power transfer can be derived as follows:

$$\begin{aligned} I(R + r) &= E \\ \frac{E}{2r}(R + r) &= E \\ (R + r) &= 2r \quad (\text{dividing by } E \text{ and multiplying by } 2r) \\ R &= 2r - r \\ R &= r \end{aligned}$$

Consequently, to obtain the maximum power transfer from the source to the load, the value of the load resistance must be equal to the internal resistance of the source.

217. Review Problems—Miscellaneous Electrical Problems

a. A generator is rated at 2,000 watts with a maximum output of 2,100 watts. What is the percent of overload capacity?

b. If the power input of a rotary converter is 48,000 watts and the power output is 37,300 watts, what is the efficiency?

c. The output of a generator is increased from 2,560 watts to 2,944 watts. How much is the increase when expressed in percent?

d. A 12,000-ohm resistance has a tolerance of plus or minus 5%. What is the maximum possible resistance?

e. If the input of an electric motor is 860 watts and the output is 746 watts, what is the efficiency of the motor?

f. A generator is rated at 2,000 watts and has a 10% overload capacity. What is the maximum output of the generator?

g. If the inductance L is 80 henrys and the energy P stored in the circuit is 100 joules, find the current I in amperes.

CHAPTER 18

GRAPHICAL REPRESENTATION AND SOLUTION OF ELECTRICAL PROBLEMS

218. Constructing and Reading Engineering Graphs

a. Constructing Graphs.

(1) Engineering graphs of operational or experimental data are constructed in the same manner as graphs of equations (pars. 100–102). First a chart is compiled of the available data, and then the data is plotted on an axis. The *independent variable* (the variable to which values are assigned) usually is plotted on the *x axis*, and the *dependent variable* on the *y axis*. The scales on the axes should be as large as practicable and, at the same time, keep the graph within the space available. Sometimes it may be convenient to choose a unit length for

the ordinate different from that of the abscissa. Before selecting the units on the axes, examine the table for the maximum and minimum values of the variables and then choose the units on the axes to fit these values in the space available for the graph. Number the points at uniform intervals along the length of each axis, and label each scale.

(2) As an example, an experiment is conducted to determine the plate current (I_p) of a 6J5 electron tube at various values of plate voltage (E_p) when the tube has a grid bias of -6 volts. The plate voltages applied range from 120 to 235 volts. The information is tabulated as follows:

E_p	120	140	158	170	180	190	200	210	218	225	235
I_p	.5	1	2	3	4	5	6	7	8	9	10

(3) The plate current is then plotted against the plate voltage and the points joined by a smooth curve. The resulting graph (fig. 90) is a picture of the plate current-voltage characteristic of a 6J5 electron tube with a grid bias of -6 volts.

b. *Reading Graphs.* The process of finding properties of a function by inspection of the graph representing it is called *reading the graph*. From a study of the graph in figure 90, certain information is evident and additional information can be easily obtained.

(1) There is a gradual increase in the plate current of the 6J5 tube when the plate voltage is increased from 120 to 158 volts. From 158 to 210 volts, the current increase is fairly

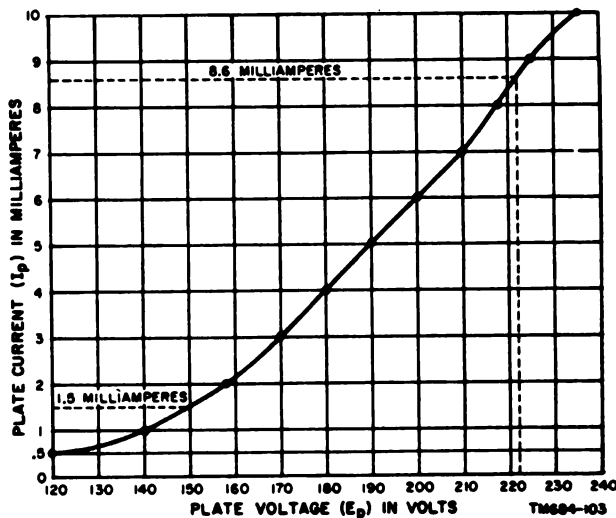


Figure 90. Graph showing plate current versus plate voltage characteristics of 6J5 electron tube with grid bias of -6 volts.

steady. From 210 to 225 volts, however, the increase is sharper, but flattens out slightly from 225 to 235 volts.

- (2) To determine the plate voltage that must be applied to result in a plate current of 8.6 milliamperes, draw a horizontal line from the 8.6 point on the y axis to the curve (fig. 90). At the point where this horizontal line intercepts the curve, drop a vertical line to the x axis. The required plate voltage is 222 volts. Similarly, to obtain a plate current of 1.5 milliamperes, a plate voltage of 150 volts must be applied.

R	0	2	4	6	8	10	12	14	16	18	20
I	∞	60	30	20	15	12	10	8.5	7.5	6.6	6

- (2) After a study of the table, it will be found that it is more convenient to use a much smaller unit of measurement on the x axis than on the y axis. Also, the entire graph falls in the first quadrant as all values are positive. The resulting graph (fig. 92) is the current-resistance characteristic of the circuit. Note that the current decreases as the resistance increases. The current for any value of the variable resistance can be found by reading the graph.

b. Example 2.

- (1) Figure 93 shows an ac series circuit with a coil having a fixed inductance connected across an ac generator that can be varied in frequency from 100 to 1,000 cps in steps of 100 cycles. It is assumed that the effect of the inductance L is so much greater than the resistance of the coil that the effect of the resistance can be neglected. The problem is to plot inductive


f	100	200	300	400	500	600	700	800	900	1,000
X_L	25.1	50.2	75.4	100.5	125.5	150.7	175.8	201.0	226.1	251.2

219. Application of Graphs to Electrical Laws

a. Example 1.

- (1) A variable resistance is connected across a generator that maintains a potential of 120 volts (fig. 91). The problem is to plot the current as the resistance is varied in 2-ohm steps from 0 to 20 ohms. Ohm's law, $I = \frac{E}{R}$, is used to obtain the coordinates.

The voltage E is constant, the resistance R is the independent variable, and the current I is the dependent variable; thus, current will be plotted against resistance, and the independent variable, resistance, will be plotted along the x axis. The following chart is compiled:

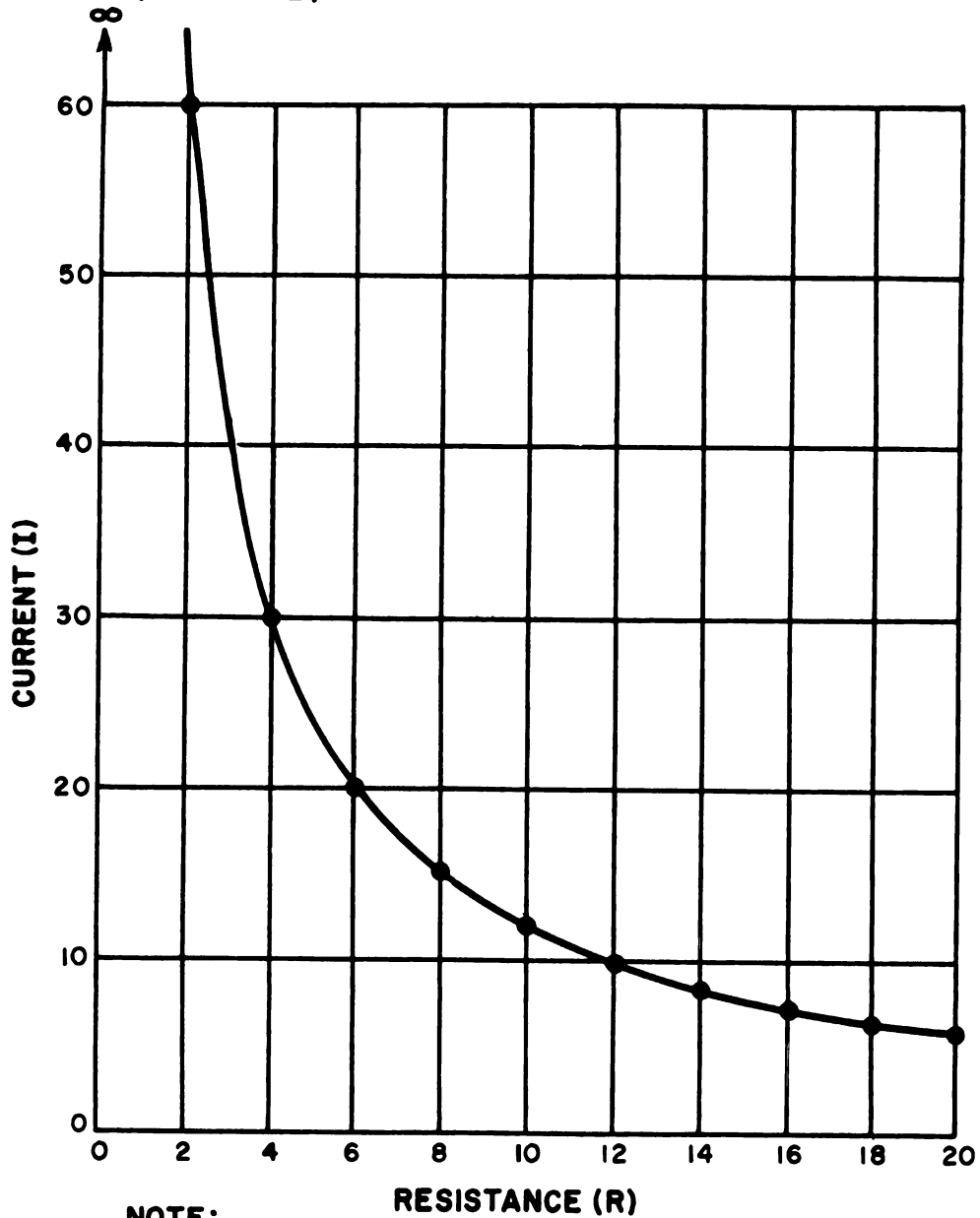


TM684-104

Figure 91. Series circuit showing variable resistance connected across generator.

reactance X_L in the formula $X_L = 2\pi fL$. The frequency f is varied to determine the effect upon the inductive reactance. L is constant at 0.04 henry, and 2π equals 6.28; thus, inductive reactance will be plotted against frequency, with the frequency plotted along the x axis. The following chart is compiled:

INFINITY (SEE NOTE)

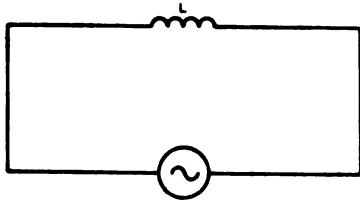


NOTE:

ZERO DIVIDED INTO ANY NUMBER (EXCEPT ZERO)
IS REPRESENTED BY THE INFINITY SYMBOL (∞).

TM684-105

Figure 92. Graph showing current versus resistance curve for series circuit with 120-volt potential.



TM684-106

Figure 93. Series circuit showing inductance connected across ac generator.

(2) Since all values are positive, the entire graph will lie in the first quadrant. The resulting graph (fig. 94)

pictures the increase in the reactance of the inductor as operating frequencies are increased from 100 to 1,000 cycles per second.

220. Review Problems—Graphical Representation and Solution of Electrical Problems

a. The antenna resistance R in ohms varies as the height H in wavelengths of a horizontal half-wave antenna according to the values given in the chart below. Plot the curve of the antenna resistance against the antenna height. At what height is the resistance at a maximum?

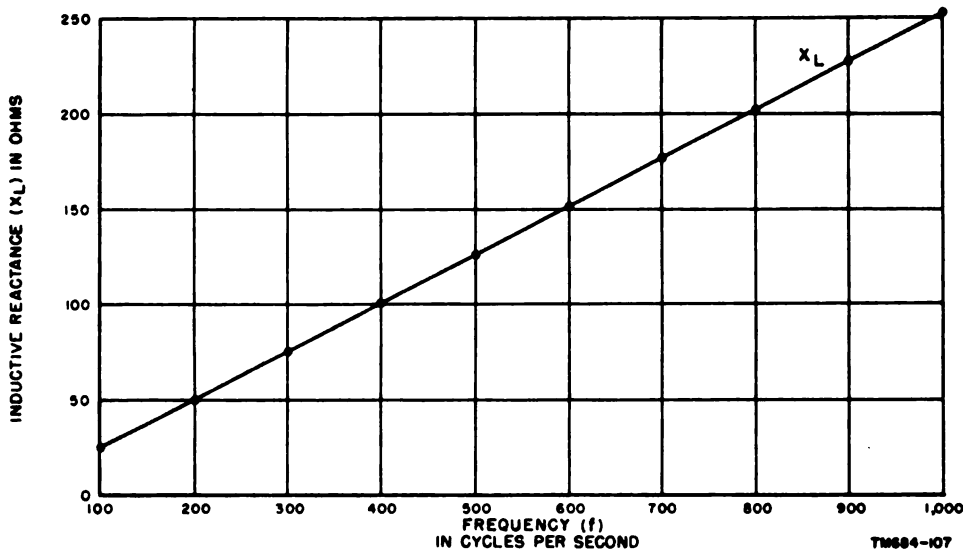


Figure 94. Graph showing reactance of 0.4-henry inductor at frequencies from 100 to 1,000 cps.

H	0	0.25	0.50	0.75	1.00	1.25	1.50	1.75	2.00
R	0	30	87	95	68	60	77	85	68

b. As the output current I_o in milliamperes is varied by a full-wave rectifier voltage quadrupler, the output voltage E_o in volts changes

in accordance with the following data. Plot the curve and determine the current at a voltage of 380 volts.

I_o	45.5	42.0	39.5	36.0	32.5	28.5	24.0	19.5	14.0	8.0	4.0
E_o	292	305	317	330	350	370	390	415	448	488	515

c. When two coils are arranged so that a change in current in one coil causes a voltage to be induced in the other, the coils are said to possess mutual inductance. Given the mutual inductance M in henrys for two coils S centi-

meters apart, plot the curve of the mutual inductance against the separation between the coils. What is the mutual inductance when the coils are separated by a distance of 7 centimeters?

<i>S</i>	0	2	4	6	8	10	12	14
<i>M</i>	0.051	0.049	0.041	0.033	0.025	0.017	0.011	0.007

d. The vertical sag *S* in a powerline depends on the temperature *T*. With the sag being measured in feet and the temperature in °F. the following data is available for a 400-foot

span. Plot the vertical sag against the temperature. If the sag is not to exceed 8.1 feet, what is the maximum permissible temperature?

<i>T</i>	-40	-20	0	20	40	60	80	100
<i>S</i>	6.8	7.0	7.2	7.4	7.6	7.8	8.0	8.2

e. The values of current *I* in milliamperes obtained by applying *E* volts to a selenium rectifier plate is shown in the following chart.

Plot the current against the voltage and determine the current when the voltage is 0.8 volt.

<i>E</i>	1.5	1.3	1.1	0.9	0.7	0	-2	-4	-6	-8	-10
<i>I</i>	100	80	60	40	20	0	-0.05	-1	-2	-3	-4

f. Using the formula $XC = \frac{1,000,000}{2\pi fC}$ to determine the values of variables, plot a graph showing reactance *XC* of a circuit having a capacitance of 2 microfarads at frequencies *f* variable from 1,000 to 10,000 cps in 1,000-cycle steps. ($2\pi = 6.28$.)

potential. Using Ohm's law, plot the current through the resistance against the voltage across the resistance as the voltage is varied from 0 to 120 volts in 10-volt steps.

g. A circuit consists of a resistance of 5 ohms connected across a source of variable

potential. Using Ohm's law, plot the current through the resistance against the voltage across the resistance as the voltage is varied from 0 to 120 volts in 10-volt steps.

h. A variable resistance is connected across a generator that maintains a potential of 220 volts. Plot the current through the resistance as the resistance is varied in 5-ohm steps from 5 to 60 ohms.

CHAPTER 19

BINARY NUMBERS

221. Scope and Background

a. This chapter serves as an introduction to the theory and arithmetic of binary numbers. It explains the difference between binary numbers and the more conventional decimal numbering system.

b. Binary numbers are of primary interest to the electronic technician because of their use in digital computers and similar devices. These computers fundamentally depend on either a conducting or nonconducting state of vacuum tubes or transistors, or they may depend on the storage states of magnetic cores. Hence they are bistable; that is, they are in one of two stable conditions.

c. The decimal numbering system uses 10 digits, 0 through 9. A digital computer using the decimal system would be large and complex; hence the binary system was adapted for digital computer use—the two digits, 0

and 1, of the binary system correspond to the bistable states discussed in *b* above. These two digits are called *bits*, a contraction of *Binary digITS*.

222. Comparison Between Decimal and Binary Systems

a. Decimal System. In the decimal system, the value of a number depends on the position of its digits. For example, in the decimal number 63, the digit 3 represents 3; however, in 63,444, the digit 3 represents 3,000; thus, changing the place of a digit in a number changes the value of the digit.

(1) As another example, decimal number 825 means $8 \times 10^2 + 2 \times 10^1 + 5 \times 10^0$. Ten (10) is considered the radix or base of the decimal system. Positional values for the equivalent powers of 10 are given in the following chart:

Position	Millions	Hundred thousands	Ten thousands	Thousands	Hundreds	Tens	Units
Value	1,000,000	100,000	10,000	1,000	100	10	1
Power	10^6	10^5	10^4	10^3	10^2	10^1	10^0

(2) Again, using 63,444 as an example, the number can be analyzed as follows:

Position digit	6	3	4	4	4
Power	10^4	10^3	10^2	10^1	10^0

(3) Now multiply the position digit by the power (value) and add:

$$\begin{array}{rcl}
 6 \times 10^4 & = & 60,000 \\
 3 \times 10^3 & = & 3,000 \\
 4 \times 10^2 & = & 400 \\
 4 \times 10^1 & = & 40 \\
 4 \times 10^0 \text{ (or 1)} & = & + 4 \\
 & & \hline
 & & 63,444
 \end{array}$$

b. Binary System. In place of 10, the binary system uses 2 as the base or radix. All powers are powers of 2. An expansion (multiplication) of some of the powers of 2 follows:

$$\begin{array}{rcl}
 2^0 & = & 1 \\
 2^1 & = & 2 \\
 2^2 & = & 4 \\
 2^3 & = & 8 \\
 2^4 & = & 16 \\
 2^5 & = & 32 \\
 2^6 & = & 64 \\
 2^7 & = & 128 \\
 2^8 & = & 256, \text{ etc.}
 \end{array}$$

(1) The binary system operates like the decimal system. Use the number 11111 as an example:

(a) In the decimal system:

$$11111 = 10^5 + 10^4 + 10^3 + 10^2 + 10^1 + 10^0 = 111,111.$$

(b) In the binary system:

$$11111 = 2^5 + 2^4 + 2^3 + 2^2 + 2^1 + 2^0 = 63.$$

(2) A portion of the positional values and equivalent powers used in the binary system is now given.

Position	Sixty-four	Thirty-two	Sixteen	Eight	Four	Two	Units
Value	64	32	16	8	4	2	1
Power	2^6	2^5	2^4	2^3	2^2	2^1	2^0

223. Tabular Conversion of Decimal Numbers to Binary Numbers

a. The following chart expresses the decimal numbers 0 through 10 in the binary system:

Decimal numbers	Binary numbers					
	2^5	2^4	2^3	2^2	2^1	2^0
	32	16	8	4	2	1
0	0	0	0	0	0	0
1	0	0	0	0	0	1
2	0	0	0	0	1	0
3	0	0	0	0	1	1
4	0	0	0	1	0	0
5	0	0	0	1	0	1
6	0	0	0	1	1	0
7	0	0	0	1	1	1
8	0	0	1	0	0	0
9	0	0	1	0	0	1
10	0	0	1	0	1	0

- (1) If a power of 2 appears in the decimal number in the left column, place a 1 in the column in which the power of two appears. If a power of 2 is not used, place a 0 in that column.
- (2) The decimal number 0 is equivalent to the binary number 0. Thus, a 0 is required in the extreme right-hand position of the binary system.
- (3) The decimal number 2 equals 2^1 —place a 1 under 2^1 and a 0 under all other powers of 2.
- (4) The decimal number 3 equals $2^1 + 2^0$. Place a 1 in each of these columns and a 0 under all other powers of 2.

(5) The decimal number 4 equals 2^2 . Place a 1 under 2^2 and a 0 under all other powers of 2.

(6) The decimal number 5 equals $2^2 + 2^0$. Place a 1 under each of these powers of 2 and a 0 under all of the remaining powers.

(7) Use the procedures outlined above to check the remaining values in the chart.

b. Additional tabular conversions follow:

Decimal numbers	Binary numbers					
	2^5	2^4	2^3	2^2	2^1	2^0
	32	16	8	4	2	1
20	0	1	0	1	0	0
30	0	1	1	1	1	0
40	1	0	1	0	0	0
45	1	0	1	1	0	1
50	1	1	0	0	1	0
57	1	1	1	0	0	1

224. Nontabular Conversion of Decimal Numbers to Binary Numbers

The tabular conversion of decimal numbers to binary numbers is tedious and somewhat awkward. An easier method is to divide the decimal number by 2, and the answer again by two, continuing until you have a remainder of 1. In the example below, 37 will be converted to its binary equivalent. Notice that throughout the operation all numbers will be either exactly divisible by 2 or will be divisible with a remainder of 1. If 2 divides evenly, place a

0 to the right of that quotient; if 2 does not divide evenly, place a 1 to the right of that quotient; repeat until further division by 2 is impossible.

Example: $2 \overline{)37}$
 $2 \overline{)18} \ 1$
 $2 \overline{)9} \ 0$
 $2 \overline{)4} \ 1$
 $2 \overline{)2} \ 0$
 $2 \overline{)1} \ 0$
 $0 \ 1$

Bit position	1	0	1	1	0	1	0
Power value	2^6	2^5	2^4	2^3	2^2	2^1	2^0
Multiply bit position times power value	64	0	16	8	0	2	0
Add horizontally	$64 + 0 + 16 + 8 + 0 + 2 + 0$						
Total	90,						
The decimal equivalent, therefore, is 90.							

226. Nontabular Conversion of Binary Numbers to Decimal Numbers

The following procedure illustrates an alternative method of converting from binary numbers to decimal numbers—the same binary number, 1011010 is used:

- a. Start with the bit at the extreme left.
 - (1) If the next bit to the right is a 0, double the leftmost bit.
 - (2) However, if this next bit is a 1, double the leftmost bit and add 1.
- b. The complete conversion of 1011010 follows:
 - (1) At the first left bit, double 1 to get 2 since the second bit from left is a 0.
 - (2) At the second left bit, double 2 and add 1 to get 5 since the third bit from left is a 1.
 - (3) At the third left bit, double 5 and add 1 to get 11 since the fourth bit from the left is a 1.
 - (4) At the fourth bit, double 11 to get 22 since the fifth bit from the left is a 0.
 - (5) At the fifth bit, double 22 and add 1 to get 45 since the sixth bit is a 1.
 - (6) At the sixth bit, double 45 to get 90

The binary number, 100101, is obtained by reading from *bottom to top*. This result may be checked against the tabular system of conversion (par. 257).

225. Tabular Conversion of Binary Numbers to Decimal Numbers

Using the binary number 1011010, the following procedure illustrates one method of converting from binary numbers to decimal numbers:

since the seventh bit is a 0. This is the answer and the end of the operation.

- (7) Since the seventh bit is the last bit, no further operations are required. Remember that no mathematical operation is required for the extreme right-hand bit when converting by the nontabular method.

227. Addition of Binary Numbers

a. Addition in the binary system is similar to addition in the decimal system. The rules for binary addition follow:

- (1) $0 + 0 = 0$
- (2) $0 + 1 = 1$
- (3) $1 + 1 = 10$, 0 with 1 to carry into the next place. This rule may be expanded further to include: $1 + 1 = 11$, or 1 with 1 to carry to the next place. $1 + 1 + 1 + 1 = 100$, or 0 with 10 to carry in the next place.

b. The following example illustrates binary addition.

Binary	Decimal
1101	13
+ 1111	15
<hr/> 11100	<hr/> 28

- (1) Begin at the extreme right bit:
 $1 + 1 = 10$. Write 0, carry 1.
- (2) $0 + 1 + 1$ (carried over) = 10.
Write 0, carry 1.
- (3) $1 + 1 + 1$ (carried over) = 11. Write 1, carry 1.
- (4) $1 + 1 + 1$ (carried over) = 11. Write 11.
- (5) The answer is 11100. Check answer by converting to decimal numbers and then adding (as shown).

c. Binary addition is further illustrated by the next example:

<i>Binary</i>	<i>Decimal</i>
101 1101 1101	1501
+ 111 0010 1101	+ 1837
1101 0000 1010	3338

228. Subtraction of Binary Numbers

a. Subtraction in the binary system is similar to subtraction in the decimal system. The rules for binary subtraction follow:

- (1) $0 - 0 = 0$
- (2) $1 - 1 = 0$
- (3) $1 - 0 = 1$
- (4) $0 - 1 = 1$, and then proceed to change all numbers in the top row until you change a 1 to a 0.

b. The following example illustrates binary subtraction:

<i>Binary</i>	<i>Decimal</i>
1011 (minuend)	11
- 0101 (subtrahend)	5
0110 (remainder)	6

- (1) Begin at the extreme right bit:
 $1 - 1 = 0$. Bring down 0, none to carry.
- (2) $1 - 0 = 1$. Bring down 1, none to carry.
- (3) $0 - 1 = 1$. The bit 1 to the extreme left in the minuend is changed to 0.
- (4) $0 - 0 = 0$. End of operation.
- (5) The complete calculation may be

checked by adding the subtrahend and the remainder.

<i>Binary</i>	<i>Decimal</i>
0101	5
+ 0110	+ 6
1011	11

c. Binary subtraction is further illustrated in the next example:

<i>Binary</i>	<i>Decimal</i>
1101 0000 1010 (minuend)	3338
- 111 0010 1101 (subtrahend)	- 1837
101 1101 1101 (remainder)	1501

Proof:

<i>Binary</i>	<i>Decimal</i>
101 1101 1101	1501
+ 111 0010 1101	+ 1837
1101 0000 1010	3338

229. Complementary Addition of Binary Numbers

The direct subtraction of binary numbers is not used in some data equipments. Instead, the subtraction processes are carried out by complement addition. To subtract two binary numbers using this system, proceed as follows:

a. Use the following problem as an example:

1101101 (minuend)
- 10010 (subtrahend)

b. First determine the complement of the subtrahend.

- (1) Add zeros to the left until the subtrahend has the same number of bits as the minuend; for example, 0010010.
- (2) Note the first 1 counting from the right and bring down this 1 as well as any of the zeros to its right; then reverse all other bits proceeding toward the left. The subtrahend of (1) above becomes 1101110. This number is the complement.
- (3) Now add the minuend to the complement:

110 1101
+ 110 1110
1101 1011

- (4) Delete the 1 to the extreme left and the remainder becomes 1011011.

(5) Check the answer by binary subtraction:

$$\begin{array}{r} 110\ 1101 \text{ (minuend)} \\ - 1\ 0010 \text{ (subtrahend)} \\ \hline 101\ 1011 \text{ (remainder)} \end{array}$$

c. The next problem is solved by using the principles explained in *a* and *b* above.

- (1) 11101101 (minuend)
111100 (subtrahend)
- (2) 00111100 becomes the complement 11000100.
- (3) 1110 1101 (minuend)
+ 1100 0100 (complement)
11011 0001 (remainder)
- (4) Proof by subtraction
11101101 (minuend)
- 111100 (subtrahend)
10110001 (remainder)

230. Multiplication of Binary Numbers

a. Multiplication is the simplest of all the binary processes. The rules are:

- (1) $0 \times 0 = 0$
(2) $0 \times 1 = 0$
(3) $1 \times 1 = 1$

b. Remember that binary *addition* is important to binary multiplication. Two examples of multiplication are given below.

<i>Example 1:</i>	<i>Binary</i>	<i>Decimal</i>
	1011	11
	$\times 10$	$\times 2$
	<u>0000</u>	
	1011	
	<u>10110</u>	22

<i>Example 2:</i>	<i>Binary</i>	<i>Decimal</i>
	111011	59
	$\times 101$	$\times 5$
	<u>111011</u>	
	000000	
	111011	
	<u>100100111</u>	295

231. Division of Binary Numbers

a. Division of binary numbers is similar to division in the decimal system. The simple rules are:

- (1) $0 \div 0 = 0$
(2) $0 \div 1 = 0$
(3) $1 \div 1 = 1$

b. Remember that binary subtraction is important to binary division. Two examples of binary division are given below.

<i>Example 1:</i>	<i>Binary</i>	<i>Decimal</i>
	111	7
	10)11110	2)14
	<u>10</u>	<u>14</u>
	11	
	<u>10</u>	
	10	
	<u>10</u>	

Proof:

<i>Binary</i>	<i>Decimal</i>
111	7
$\times 10$	$\times 2$
<u>1110</u>	<u>14</u>

<i>Example 2:</i>	<i>Binary</i>	<i>Decimal</i>
	1001 ¹⁰⁰ ₁₁₀	9 ⁴ / ₅
	110)1111010	6)58
	<u>110</u>	<u>54</u>
	1010	4/6
	<u>110</u>	
	100	

Note the remainder of 100/110.

Proof:

1001	(partial quotient)
$\times 110$	(divisor)
<u>10010</u>	
1001	
<u>110110</u>	(partial dividend)
+100	(add remainder)
<u>111010</u>	(total dividend)

232. Fractions in the Binary System

a. The system of expressing fractions with binary numbers is similar to the decimal numbering methods. For example, the common fraction $\frac{3}{5}$ may be expressed in binary numbers as

$\frac{11}{101}$ Also, binary fractions may be expressed as decimal fractions when the powers of 2 are used with negative exponents. The binary fraction 0.011 is equivalent to the decimal fraction 0.375 and may be written as:

$$0 \times 2^{-1} + 1 \times 2^{-2} + 1 \times 2^{-3} = 0 + \frac{1}{4} + \frac{1}{8} = \frac{3}{8} \text{ or } .375.$$

b. The following table lists some of the fractional values and their equivalents in both systems:

<i>Decimal equivalents</i>	<i>Power of 2</i>	<i>Binary equivalent</i>
$\frac{1}{2}$ or .5	2^{-1}	.1
$\frac{1}{4}$ or .25	2^{-2}	.01
$\frac{1}{8}$ or .125	2^{-3}	.001
$\frac{1}{16}$ or .065	2^{-4}	.0001
$\frac{1}{32}$ or .03125	2^{-5}	.00001
$\frac{1}{64}$ or .015625	2^{-6}	.000001
$\frac{1}{128}$ or .0078125	2^{-7}	.0000001
$\frac{1}{256}$ or .00390625	2^{-8}	.00000001
$\frac{1}{512}$ or .001953125	2^{-9}	.000000001

c. Using values from the table, the decimal fraction 0.375 is equal to .25 + .125 and hence has the binary equivalency of .01 + .001 = .011.

233. Conversion of Decimal Fractions to Binary Numbers

Usually, the decimal fractions are converted to binary fractions by performing a series of multiplications by 2. This method is directly opposite to the method explained in paragraph 224. As a rule, decimal fractions cannot be converted to exact binary equivalents. The extent of error must be tolerable for a given application and the number of bits used must be reasonable.

a. To convert 0.375 to a binary number, proceed as follows:

- (1) Multiply the decimal 0.375 by 2 to obtain a new integer (whole number) and a new decimal, 0.75. Since in 0.75 the integer to the left of the decimal point is 0, place a 0 in the binary equivalent as .0.

<u>Decimal $\times 2$</u>	<u>New integer and decimal</u>	<u>Partial binary equivalent</u>
0.375×2	0.75	.0

- (2) Multiply the decimal 0.75 by 2 to obtain a new integer and decimal. Since the integer to the left of the decimal point is a 1, place a 1 in the binary equivalent as .01.

<u>Decimal $\times 2$</u>	<u>New integer and decimal</u>	<u>Partial binary equivalent</u>
0.75×2	1.50	.01

(3) Drop the integer 1 and multiply the decimal 0.50 by 2 to obtain a new integer and decimal. Since the new integer to the left of the decimal is a 1, place another 1 in the binary equivalent as .011.

<u>Decimal $\times 2$</u>	<u>New integer and decimal</u>	<u>Partial binary equivalent</u>
0.50 $\times 2$	1.00	.011

(4) Note that the operation ends when the decimal part has been expanded to 0.00. The decimal fraction, 0.375, is equivalent to the binary fraction, .011. In this instance, the binary and decimal fractions have exactly the same value.

b. The next example illustrates the conversion of 0.3465 to its binary equivalent. Note that the partial binary equivalents are added at the end of the operation to obtain the complete equivalent:

<i>Multiplication $\times 2$</i>	<i>Binary equivalent</i>	<i>Decimal value of binary equivalent</i>
A	B	C
0.3465 $\times 2 = .6930$.0	.0
0.693 $\times 2 = 1.386$.01	.25
.386 $\times 2 = 0.772$.000	.00
0.772 $\times 2 = 1.544$.0001	.0625
0.554 $\times 2 = 1.108$	<u>.00001</u>	<u>.03125</u>
Add up all entries under B and C.	.01011	.34375

c. In b above, the binary and decimal fractions differ in value and the amount of error may be determined by subtraction:

$$0.3465 - 0.34375 = 0.00275 \text{ (fraction of error)}$$

234. Mixed Binary Numbers

a. A mixed binary number is a combination of whole numbers and binary fractions. Examples of this are:

<i>Binary number</i>	<i>Decimal equivalent</i>
1011.1	11.5
1110.011	14.375
10.000001	1.015625

b. The fundamental operations (addition, subtraction, multiplication, and division) for mixed binary numbers or binary fractional numbers alone are in accordance with the principles already explained in this chapter.

APPENDIX I

BASIC SLIDE RULE OPERATIONS

1. General

This appendix describes the basic slide rule and covers the operations of multiplication, division, squaring, and square root.

2. Description of Slide Rule

a. Slide rules are made in several different sizes and styles, and in an assortment of scales. However, they all contain the same basic scales and use them in the same manner.

b. The most common type of slide rule is about 10 inches long and generally has scales on both sides. The most frequently used scales, and the ones covered here, are the A, B, C, and D. Figure 95 is a simplified drawing of a slide rule of this type, showing these scales and the other essential parts of the rule. Note that these scales have indexes (the number 1) on both ends. Also note that the A and B scales have an additional index in the center that divides these scales into two equal parts. The left-hand part of the scales is called A-left or B-left, and the right-hand part, A-right or B-right.

3. Basic Principles of Operation

The slide rule is based on the principle of the logarithm; that is, the segments on the rule represent exponents, or logarithms, but are indicated by the antilogs, or numbers corresponding to those logarithms. Consequently, when the slide rule is used so that two

line segments are added, the logarithms of the numbers shown are actually being added, and the sum of the two line segments is represented by the antilog of the sum of the logarithms. Since the sum of the logarithms of two numbers is equal to the logarithm of the product of the two numbers (par. 121), adding two line segments on a slide rule will give the product of the two numbers represented by the line segments. This is the technique used in multiplication with a slide rule (par. 6 of this app). In the division process, the reverse procedure is used; that is the two line segments are used so that one is subtracted from the other.

4. Accuracy

The accuracy of a slide rule depends on the length of the rule and on the portion of the rule being used. With the 10-inch rule shown in figure 95, numbers can be approximated to four significant figures on the left-hand end of the C or D scales, but only to three significant figures on the right-hand end of these scales. Despite this fact, the results obtained with the slide rule are sufficiently accurate for many practical purposes; in any case, the results serve as a rapid and efficient check of more complex computations.

5. Reading the Scales

a. Since the scales on a slide rule do not have uniform increments along their lengths,

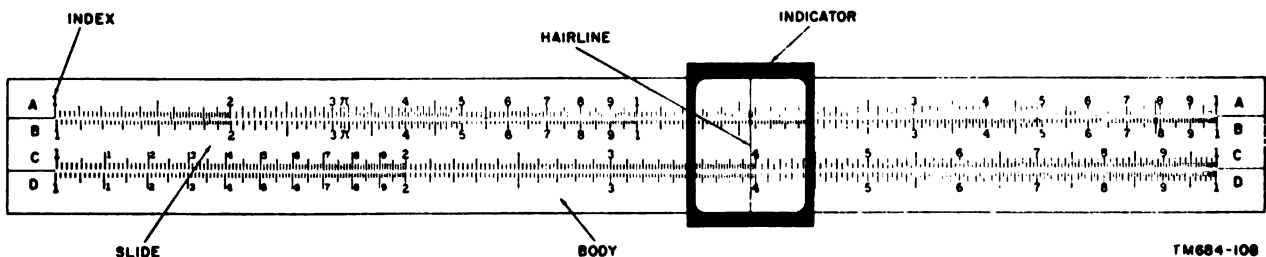


Figure 95. Typical slide rule, simplified drawing.

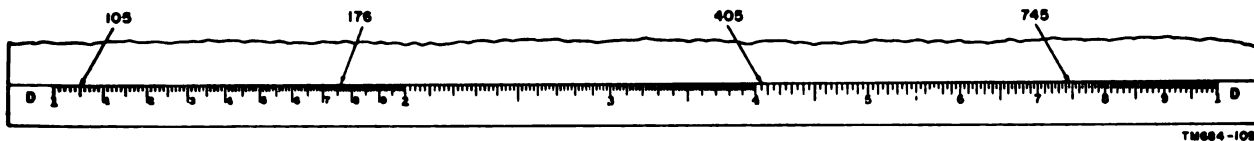


Figure 96. Locating numbers on the D scale.

be careful when approximating numbers at different points on the scales. For example, the space between the larger numbers 1 and 2 on the D scale (fig. 96) is divided into 10 sub-groups (identified by the small numbers 1 through 10) of 10 increments each; thus there are 100 increments between 1 and 2 on the D scale, and each increment is equal to one one-hundredth of the difference. Between 4 and 5 on the D scale, however, there are only 20 increments, and each increment therefore, is equal to five one-hundredths of the difference. Consequently, the number 105 would be located 5 increments above 1, whereas 405 would be 1 increment above 4 on the scale. Figure 96 shows the location of these and other numbers on the D scale.

b. To locate a number on a scale, first determine its general location between two of the numbers on that scale; then determine the value of each increment between the numbers. Finally, determine its exact location based on the value of the increments.

c. In reading the scale, as in logarithms, the decimal point is neglected until after the absolute value of the result is obtained; therefore, in figure 96, the number 1245 could actually represent 1.245, 12.45, 124.5, .001245, etc. The use of scientific notation (par. 106) will greatly simplify the handling of very large or very small numbers.

6. Multiplication

a. Normally, the process of multiplication is performed by using the C and D scales. The A and B scales may also be used, but they are not as accurate because the increments are

smaller. To multiply two numbers, proceed as follows:

- (1) Locate one number on the D scale. Slide the indicator until the hairline is over the number to mark its location.
- (2) Place one of the indexes of the C scale above the number on the D scale. Use the hairline of the indicator to align the index and the number.
- (3) Locate the second number on the C scale. If the number is located on the portion of the C scale beyond the end of the D scale, reposition the slide so that the other index on the C scale is above the number on the D scale.
- (4) Slide the indicator so that the hairline is over the number on the C scale. The product of the two numbers is read under the hairline on the D scale.

b. The two examples below illustrate the method of multiplication described above. They also point out the use of the two indexes on the C scale.

Example 1: Multiply 2 by 3.

- Step 1. Locate the number 2 on the D scale and slide the indicator until the hairline is over it.
- Step 2. Place the left-hand index of the C scale above the number 2 on the D scale. Use the hairline on the indicator for alinement.
- Step 3. Locate the number 3 on the C scale and slide the indicator so that the hairline is over it. The




Figure 97. Slide rule arranged for multiplying 2 by 3.



Figure 98. Slide rule arranged for multiplying 6 by 3.

product of 2 times 3 or 6 is read under the hairline on the D scale. Figure 97 shows a slide rule arranged for this product.

Example 2: Multiply 6 by 3.

- Step 1.** Locate the number 6 on the D scale and slide the indicator so that the hairline is over it.
- Step 2.** Place the right-hand index of the C scale above the number 6 on the D scale. Use the hairline on the indicator for alinement. (The right-hand index is used because the number 3 on the C scale would be beyond the end of the D scale if the left-hand index were used.)
- Step 3.** Locate the number 3 on the C scale and slide the indicator so that the hairline is over it. The product of 6 times 3 or 18 is read under the hairline on the D scale. Figure 98 shows a slide rule arranged for this product.

7. Division

a. The process of division, like multiplication, generally is performed by using the C and D scales. To divide one number by another number, proceed as follows:

- (1) Locate the dividend (number to be divided) on the D scale. Slide the indicator until the hairline is over the number to mark its location.
- (2) Locate the divisor on the C scale.

Move the slide until this number is above the dividend on the D scale. Use the hairline on the indicator for alinement.

- (3) Slide the indicator until the hairline is over the index on the C scale that is above a portion of the D scale. The quotient of the two numbers is read under the hairline on the D scale.

b. The following example illustrates the use of the method of division described above.

Example: Divide 8 by 2.

- Step 1.** Locate the dividend (8) on the D scale and slide the indicator until the hairline is over it.
- Step 2.** Locate the divisor (2) on the C scale and move the slide until this number is above 8 on the D scale. Use the hairline on the indicator for alinement.
- Step 3.** Slide the indicator until the hairline is over the left-hand index. The quotient of 8 divided by 2 is located under the hairline on the D scale. Figure 99 shows a slide rule arranged for this quotient.

8. Squaring a Number

a. The process of squaring a number is performed by using the A and D scales. To square a number, proceed as follows:

- (1) Locate the number on the D scale. Slide the indicator until the hairline is over the number.

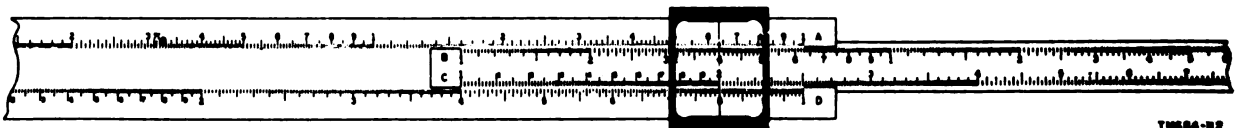


Figure 99. Slide rule arranged for dividing 8 by 2.

(2) Read the square under the hairline on the A scale. Remember that the increments on the A scale are smaller than the increments on the D scale; be sure to evaluate the increment carefully.

b. The following example illustrates the procedure given above.

Example: Find the square of 12.5.

Step 1. Locate 12.5 on the D scale. Slide the indicator until the hairline is over it (fig. 100).

Step 2. Read the square of 12.5 under the hairline on the A scale. The three significant figures that can be obtained from the A scale are 156. To locate the decimal point, estimate the value of the square of 12.5. Since the square of 12 is 144, the square of 12.5 is 156.

9. Square Root of a Number

a. The process of finding the square root of a number is simply the reverse of the proc-

ess of squaring a number (par. 8). To find the square root of a number, proceed as follows:

(1) Locate the number on the A scale. Slide the indicator until the hairline is over the number.

(2) Read the square root under the hairline on the D scale.

b. The following example illustrates the procedure given above.

Example: Find the square root of 9.5.

Step 1. Locate 9.5 on the A scale. Note that there are two such numbers on the A scale, one on A-left, and one on A-right. Since the square root of 9 is 3, the number on A-right would not yield the correct result; therefore, slide the indicator until the hairline is over the 9.5 on A-left.

Step 2. Read the square root of 9.5, that is, 3.08, under the hairline on the D scale. Figure 101 shows a slide rule arranged for this square root.

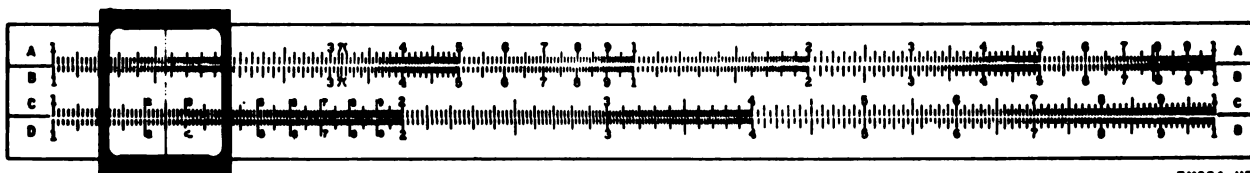


Figure 100. Slide rule arranged for finding the square of 12.5.

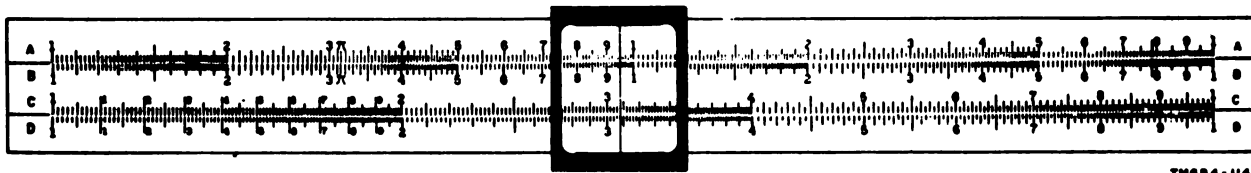


Figure 101. Slide rule arranged for finding the square root of 9.5.

APPENDIX II

SYSTEMS OF MEASUREMENT

1. General

Two systems of measurement are in use in the United States today: the English system, based on the foot and the pound, and the metric system, based on the centimeter (or meter) and the gram (or kilogram). Both systems are used in electronics. For example, the wavelength of an antenna is calculated in the metric system; the physical length of each conductor is stated in feet and inches.

2. Metric Prefixes

In the field of communications, there are often wide ranges in electrical quantities. For example, the input of a radio receiver may be in millionths of a volt, and the output circuit of a transmitter may be in thousands of volts. Thus, metric prefixes are used in electronics in combination with basic units of measurement—volts, ohms, watts, amperes, farads, henrys, and cycles—to facilitate operations. The following chart gives the meaning of these prefixes with respect to various units of measurement.

Metric prefix	Meaning	Associated with
Mega	Million (1,000,000)	Volt, ohms, cycles, amperes
Kilo	Thousand (1,000)	Volts, watts, cycles, meters, amperes
Hecto	Hundred (100)	Meters
Deka	Ten (10)	Meters
Deci	One-tenth (0.1)	Meters
Centi	One-hundredth (0.01)	Meters
Milli	One-thousandth (0.001)	Volts, amperes, meters, henrys, watts, ohms
Micro	One-millionth (0.0000001)	Volts, amperes, farads, henrys, mhos, ohms
Micromicro	One-millionth of one-millionth (0.000,000,000,001)	Volts, amperes, farads, coulombs

3. Conversion Factors

The table below lists the common units of measurement with one set of prefixes and the factor by which these units must be multiplied to convert them to units with another set of prefixes. The examples below illustrate the method in which the table is used.

Example 1: Convert 7.54 megacycles to cycles.

From the table, to convert from megacycles to cycles, multiply by 10^6 .

$$7.54 \times 10^6 = 7.54 \times 1,000,000 = 7,540,000 \text{ cycles}$$

Example 2: Convert 5,500 watts to kilowatts.

From the table, to convert watts to kilowatts, multiply by .001.
 $5,500 \times 0.001 = 5.5 \text{ watts}$

To convert from	To	Multiply by
Abamperes	Amperes	10.0000
Abamperes	Statampere	2.998×10^{10}
Abcoulombs	Ampere-hours	2.778×10^{-3}
Abcoulombs	Coulombs	10.0000
Abcoulombs	Faradays	1.036×10^{-4}
Abcoulombs	Statcoulombs	2.998×10^{10}
Abfarads	Farads	10^9
Abfarads	Microfarads	10^{15}
Abfarads	Statfarads	8.988×10^{20}
Abhenrys	Henrys	10^{-9}
Abhenrys	Microhenrys	.001
Abhenrys	Millihenrys	10^{-6}
Abhenrys	Stathenrys	1.118×10^{-21}
Abohms	Megohms	10^{-15}
Abohms	Microhms	0.001
Abohms	Ohms	10^{-9}
Abohms	Statohms	1.118×10^{-21}
Abvolts	Microvolts	.01
Abvolts	Millivolts	10^{-6}
Abvolts	Statvolts	3.336×10^{-1}
Abvolts	Volts	10^{-8}
Acres	Ares (square dekameters)	40.46873
Acres	Hectares (square hectometers)	.4046873
Acres	Square feet	4.356×10^4
Acres	Square inches	6,272,640
Acres	Square kilometers	4.047×10^{-8}
Acres	Square meters	4047
Acres	Square miles	1.563×10^{-6}
Acres	Square rods	160
Acres	Square yards	4840
Amperes	Abamperes	.1
Amperes	Milliamperes	1000
Amperes	Statamperes	2.998×10^9
Ampere-hours	Abcoulombs	360
Ampere-hours	Coulombs	3600
Ampere-hours	Faradays	3.731×10^{-2}
Ampere-hours	Statcoulombs	1.080×10^{13}
Ares	Acres (US)	.02471044
Ares	Hectares	.01
Ares	Square feet	1076.4
Ares	Square meters	100
Ares	Square miles	3.861×10^{-6}
Ares	Square yards	119.60
Bushels (dry)	Cubic centimeters	3524×10^4
Bushels (dry)	Cubic feet	1.2444
Bushels (dry)	Cubic inches	2150.4
Bushels (dry)	Cubic meters	3.524×10^{-2}
Bushels (dry)	Liters	35.24
Centimeters	Feet	3.281×10^{-2}
Centimeters	Inches	.3937
Centimeters	Kilometers	10^{-5}
Centimeters	Meters	.01
Centimeters	Mils	393.7
Centimeters	Miles	6.214×10^{-6}
Centimeters	Millimeters	10
Centimeters	Yards	1.094×10^{-2}
Centimeters/second	Feet/minute	1.969
Centimeters/second	Feet/second	3.282×10^{-2}
Centimeters/second	Kilometers/hour	.036

To convert from	To	Multiply by
Centimeters/second	Kilometers/minute	.0006
Centimeters/second	Knots/hour	1.943×10^{-2}
Centimeters/second	Meters/minute	.6
Centimeters/second	Meters/second	.01
Centimeters/second	Miles/hour	2.237×10^{-2}
Centimeters/second	Miles/minute	3.728×10^{-4}
Circular mils	Square centimeters	5.067×10^{-6}
Circular mils	Square inches	7.854×10^{-7}
Circular mils	Square millimeters	5.067×10^{-4}
Circular mils	Square mils	.7854
Coulombs	Abcoulombs	.1
Coulombs	Ampere-hours	2.778×10^{-4}
Coulombs	Faradays	1.036×10^{-5}
Coulombs	Statcoulombs	2.998×10^9
Cubic centimeters	Cubic feet	3.531×10^{-3}
Cubic centimeters	Cubic inches	6.102×10^{-2}
Cubic centimeters	Cubic meters	10^{-6}
Cubic centimeters	Cubic yards	1.308×10^{-6}
Cubic centimeters	Gallons (liquid)	2.642×10^{-4}
Cubic centimeters	Liters	.001
Cubic centimeters	Pints (liquid)	2.113×10^{-6}
Cubic centimeters	Quarts (liquid)	1.057×10^{-6}
Cubic feet	Bushels (dry)	.8036
Cubic feet	Cubic centimeters	2.832×10^4
Cubic feet	Cubic inches	1728
Cubic feet	Cubic meters	2.832×10^{-2}
Cubic feet (US)	Cubic yards	3.704×10^{-2}
Cubic feet	Gallons (liquid)	7.481
Cubic feet	Liters	28.316
Cubic feet	Pints (liquid)	59.84
Cubic feet	Quarts (liquid)	29.922
Cubic hectometers	Cubic meters	10^6
Cubic inches	Bushels (dry)	4.6503×10^{-4}
Cubic inches	Cubic centimeters	16.39
Cubic inches	Cubic feet	5.787×10^{-4}
Cubic inches	Cubic meters	1.639×10^{-3}
Cubic inches (US)	Cubic yards	2.143×10^{-6}
Cubic inches	Gallons	4.329×10^{-6}
Cubic inches	Liters	1.639×10^{-2}
Cubic inches	Pints (liquid)	3.463×10^{-3}
Cubic inches	Quarts (liquid)	1.732×10^{-3}
Cubic meters	Bushels (dry)	28.38
Cubic meters	Cubic centimeters	10^6
Cubic meters	Cubic feet	35.31
Cubic meters	Cubic inches	6.102×10^4
Cubic meters	Cubic yards	1.308
Cubic meters	Gallons (liquid)	264.2
Cubic meters	Liters	1000
Cubic meters	Pints (liquid)	2113
Cubic meters	Quarts (liquid)	1057
Cubic meters	Steres	1
Cubic yards	Cubic centimeters	7.646×10^5
Cubic yards	Cubic feet	27
Cubic yards	Cubic inches	46656
Cubic yards	Cubic meters	.7646
Cubic yards	Gallons	202.0
Cubic yards	Liters	764.6
Cubic yards	Pints (liquid)	1616
Cubic yards	Quarts (liquid)	807.9

To convert from	To	Multiply by
Decimeters	Meters	.1
Decigrams	Grams	.1
Decisteres	Cubic meters	.1
Degrees	Circumferences* (revolutions)	2.778×10^{-3}
Degrees	Minutes	60
Degrees	Quadrants	1.111×10^{-2}
Degrees	Radians*	1.745×10^{-2}
Degrees	Seconds	3600
Degrees/second	Radians/second	1.745×10^{-2}
Degrees/second	Revolutions/minute	.1667
Degrees/second	Revolutions/second	2.778×10^{-3}
Dekagrams	Grams	10
Dekameters	Meters	10
Faradays	Abcoulombs	9649
Faradays	Ampere-hours	26.81
Faradays	Coulombs	9.649×10^4
Faradays	Statcoulombs	2.893×10^{14}
Farads	Abfarads	10^{-9}
Farads	Microfarads	10^6
Farads	Statfarads	8.988×10^{11}
Feet	Centimeters	30.48
Feet	Inches	12
Feet	Kilometers	3.048×10^{-4}
Feet	Meters	.3048
Feet	Miles (nautical)	1.645×10^{-4}
Feet	Miles (statute)	1.894×10^{-4}
Feet	Mils	1.2×10^4
Feet	Millimeters	304.8
Feet	Yards	.3333
Feet/minute	Centimeter/second	.5080
Feet/minute	Feet/second	1.667×10^{-2}
Feet/minute	Kilometers/hour	1.829×10^{-2}
Feet/minute	Kilometers/second	3.048×10^{-4}
Feet/minute	Knots	9.868×10^{-3}
Feet/minute	Meters/minute	.3048
Feet/minute	Meters/second	5.080×10^{-3}
Feet/minute	Miles/hour	1.136×10^{-2}
Feet/minute	Miles/minute	1.894×10^{-4}
Feet/second	Centimeters/second	30.48
Feet/second	Feet/minute	60
Feet/second	Kilometers/hour	1.097
Feet/second	Kilometers/minute	1.829×10^{-2}
Feet/second	Knots/hour	.5921
Feet/second	Meters/minute	18.29
Feet/second	Meters/second	.3048
Feet/second	Miles/hour	.6818
Feet/second	Miles/minute	1.136×10^{-2}
Gallons (liquid)	Cubic centimeters	3785.
Gallons (liquid)	Cubic feet	.1337
Gallons (liquid)	Cubic inches	231
Gallons (liquid)	Cubic meters	3.785×10^{-3}
Gallons (liquid)	Cubic yards	4.951×10^{-3}
Gallons (liquid)	Liters	3.785
Gallons (liquid)	Pints (liquid)	8
Gallons (liquid)	Quarts (liquid)	4
Grains	Grams	6.480×10^{-2}
Grains	Kilograms	6.481×10^{-5}
Grains	Milligrams	64.81

See notes at end of table.

To convert from	To	Multiply by
Grains	Ounces (avoirdupois)	2.286×10^{-3}
Grains	Pounds (avoirdupois)	1.429×10^{-4}
Grams	Grains	15.43
Grams	Kilograms	6.480×10^{-6}
Grams	Milligrams	64.80
Grams	Ounces (avoirdupois)	3.527×10^{-3}
Grams	Pounds (avoirdupois)	2.205×10^{-6}
Grams	Tons (long)	9.842×10^{-7}
Grams	Tons (metric)	10^{-6}
Grams	Tons (short)	1.102×10^{-6}
Hectares	Acres	2.471
Hectares	Acres	100
Hectares	Square feet	1.076×10^5
Hectares	Square meters	10000
Hectares	Square rods	3.954×10^2
Hectares	Square yards	11959.85
Hectograms	Grams	100
Hectograms	Ounces (avoirdupois)	3.527
Hectoliters	Liters	100
Hectometers	Meters	100
Hectometers	Rods	19.88
Hectometers	Yards	109.4
Hectowatts	Watts	100
Hemispheres	Spheres	.5
Hemispheres	Spherical right angles	4
Hemispheres	Steradians ^b	6.283
Henrys	Abhenrys	10^9
Henrys	Microhenrys	10^6
Henrys	Millihenrys	1000
Henrys	Stathenrys	1.113×10^{-12}
Inches	Centimeters	2.540
Inches	Feet	8.333×10^{-2}
Inches	Kilometers	2.540×10^{-5}
Inches	Meters	2.540×10^{-2}
Inches	Miles	1.578×10^{-5}
Inches	Millimeters	25.40
Inches	Mils	1000
Inches	Yards	2.778×10^{-2}
Kilograms	Grains	1.543×10^4
Kilograms	Grams	1000
Kilograms	Milligrams	10^6
Kilograms	Ounces (avoirdupois)	35.27
Kilograms	Pounds (avoirdupois)	2.205
Kilograms	Tons (long)	9.842×10^{-4}
Kilograms	Tons (metric)	.001
Kilograms	Tons (short)	1.102×10^{-6}
Kiloliters	Gallons (liquid)	264.18
Kiloliters	Liters	1000
Kilometers	Centimeters	10^5
Kilometers	Feet	3281
Kilometers	Inches	3.937×10^4
Kilometers	Meters	1000
Kilometers	Miles (nautical)	.5396
Kilometers	Miles (statute)	.6214
Kilometers	Millimeters	10^6
Kilometers	Mils	3.937×10^7
Kilometers	Yards	1094
Kilometers/hour	Centimeters/second	27.78

See notes at end of table.

To convert from	To	Multiply by
Kilometers/hour	Feet/minute	54.68
Kilometers/hour	Feet/second	.9113
Kilometers/hour	Kilometers/minute	1.667×10^{-3}
Kilometers/hour	Knots/hour	.5396
Kilometers/hour	Meters/minute	16.67
Kilometers/hour	Meters/second	.2778
Kilometers/hour	Miles/hour	.6214
Kilometers/hour	Miles/minute	1.086×10^{-3}
Kilometers/minute	Centimeters/second	1667
Kilometers/minute	Feet/minute	3281
Kilometers/minute	Feet/second	54.68
Kilometers/minute	Kilometers/hour	60
Kilometers/minute	Knots/hour	32.38
Kilometers/minute	Meters/minute	1000
Kilometers/minute	Meters/second	16.67
Kilometers/minute	Miles/hour	37.28
Kilometers/minute	Miles/minute	.6214
Kilowatt hours	Watt-hours	1000
Kilowatts	Watts	1000
Knots/hour	Centimeters/second	51.48
Knots/hour	Feet/hour	6080.20
Knots/hour	Feet/minute	101.3
Knots/hour	Feet/second	1.689
Knots/hour	Kilometers/hour	1.853
Knots/hour	Kilometers/minute	3.088×10^{-3}
Knots/hour	Meters/minute	30.88
Knots/hour	Meters/second	.5148
Knots/hour	Miles/hour	1.152
Knots/hour	Miles/minute	1.919×10^{-3}
Liters	Bushels (dry)	2.838×10^{-2}
Liters	Cubic centimeters	1000
Liters	Cubic feet	3.531×10^{-2}
Liters	Cubic inches	61.02
Liters	Cubic meters	.001
Liters	Cubic yards	1.308×10^{-3}
Liters	Gallons (liquid)	.2642
Liters	Pints (liquid)	2.113
Liters	Quarts (liquid)	1.057
Megacycles	Cycles	10^6
Megameters	Meters	10^6
Megohms	Abohms	.001
Megohms	Abohms	10^{15}
Megohms	Microhms	10^{12}
Megohms	Ohms	10^6
Megohms	Statohms	1.112×10^{-3}
Meters	Centimeters	100
Meters	Feet	3.281
Meters	Inches	39.37
Meters	Kilometers	.001
Meters	Megameters	10^{-6}
Meters	Miles (statute)	6.214×10^{-4}
Meters	Millimeters	1000
Meters	Millimicrons	10^9
Meters	Mils	3.937×10^4
Meters	Yards	1.094
Meters/minute	Centimeters/second	1.667
Meters/minute	Feet/minute	3.281
Meters/minute	Feet/second	5.468×10^{-3}
Meters/minute	Kilometers/hour	.06

To convert from	To	Multiply by
Meters/minute	Kilometers/minute	.001
Meters/minute	Knots/hour	3.238 x 10 ⁻³
Meters/minute	Meters/second	1.667 x 10 ⁻²
Meters/minute	Miles/hour	3.728 x 10 ⁻³
Meters/minute	Miles/minute	6.214 x 10 ⁻⁴
Meters/second	Centimeters/second	100
Meters/second	Feet/minute	196.8
Meters/second	Feet/second	3.281
Meters/second	Kilometers/hour	3.6
Meters/second	Kilometers/minute	.06
Meters/second	Knots/hour	1.943
Meters/second	Meters/minute	60
Meters/second	Miles/hour	2.237
Meters/second	Miles/minute	3.728 x 10 ⁻²
Microfarads	Abfarads	10 ⁻¹⁵
Microfarads	Farads	10 ⁻⁶
Microfarads	Statfarads	8.988 x 10 ⁶
Micrograms	Grams	10 ⁻⁶
Milligrams	Milligrams	.001
Microhenrys	Abhenrys	1,000
Microhenrys	Henrys	10 ⁻⁶
Microhenrys	Millhenrys	.001
Microhenrys	Stathenry	1.113 x 10 ⁻¹⁸
Microhms	Abohms	1000
Microhms	Megohms	10 ⁻¹²
Microhms	Ohms	10 ⁻⁶
Microhms	Stathms	1.113 x 10 ⁻¹⁸
Microliters	Liters	10 ⁻⁶
Micromicrofarads	Farads	10 ⁻¹²
Microvolts	Abvolts	100
Microvolts	Millivolts	.001
Microvolts	Statvolts	3.336 x 10 ⁻⁶
Microvolts	Volts	10 ⁻⁶
Miles	Centimeters	1.609 x 10 ⁵
Miles	Feet	5280
Miles	Inches	6.336 x 10 ⁴
Miles	Kilometers	1.609
Miles	Meters	1609
Miles	Miles (nautical)	.8684
Miles	Rods	320
Miles	Yards	1760
Miles/hour	Centimeters/second	44.70
Miles/hour	Feet/minute	88
Miles/hour	Feet/second	1.467
Miles/hour	Kilometers/hour	1.609
Miles/hour	Kilometers/minute	2.682 x 10 ⁻²
Miles/hour	Knots (per hour)	.8684
Miles/hour	Meters/minute	26.82
Miles/hour	Meters/second	.4470
Miles/hour	Miles/minute	1.667 x 10 ⁻²
Miles/minute	Centimeters/second	2682
Miles/minute	Feet/minute	5280
Miles/minute	Feet/second	88
Miles/minute	Kilometers/hour	96.54
Miles/minute	Kilometers/minute	1.609
Miles/minute	Knots/hour	52.10
Miles/minute	Meters/minute	1609
Miles/minute	Meters/second	26.82
Miles/minute	Miles/hour	60

To convert from	To	Multiply by
Milligrams	Grains	1.543×10^{-2}
Milligrams	Grams	.001
Milligrams	Kilograms	10^{-6}
Milligrams	Ounces (avoirdupois)	3.527×10^{-5}
Milligrams	Pounds (avoirdupois)	2.205×10^{-6}
Milligrams	Tons (long)	9.842×10^{-10}
Milligrams	Tons (metric)	10^{-9}
Milligrams	Tons (short)	1.102×10^{-9}
Millihenrys	Abhenrys	10^6
Millihenrys	Henrys	.001
Millihenrys	Microhenrys	1000
Millihenrys	Stathenrys	1.112×10^{-15}
Milliliters	Liters	.001
Millimeters	Centimeters	.1
Millimeters	Feet	3.281×10^{-3}
Millimeters	Inches	3.937×10^{-2}
Millimeters	Kilometers	10^{-6}
Millimeters	Meters	.001
Millimeters	Miles	6.214×10^{-7}
Millimeters	Mils	39.37
Millimeters	Yards	1.094×10^{-3}
Millimicrons	Microns	.001
Millivolts	Abvolts	10^6
Millivolts	Microvolts	1000
Millivolts	Statvolts	3.336×10^{-6}
Millivolts	Volts	.001
Mils	Centimeters	2.540×10^{-3}
Mils	Feet	8.333×10^{-5}
Mils	Inches	.001
Mils	Kilometers	2.540×10^{-5}
Mils	Millimeters	2.540×10^{-2}
Mils	Yards	2.778×10^{-5}
Minutes (angle)	Degrees	1.667×10^{-2}
Minutes (angle)	Quadrants	1.852×10^{-4}
Minutes (angle)	Radians*	2.909×10^{-4}
Minutes (angle)	Revolutions* (circumferences)	4.630×10^{-5}
Minutes (angle)	Seconds	60
Myriagrams	Grams	10,000
Myriagrams	Kilograms	10
Myriameters	Kilometers	10
Myriameters	Meters	10,000
Myriameters	Miles	6.21370
Ohms	Abohms	10^9
Ohms	Megohms	10^{-6}
Ohms	Microhms	10^6
Ohms	Statohms	1.112×10^{-12}
Ounces (avoirdupois)	Grains	437.5
Ounces (avoirdupois)	Grams	28.35
Ounces (avoirdupois)	Kilograms	2.835×10^{-2}
Ounces (avoirdupois)	Milligrams	2.835×10^4
Ounces (avoirdupois)	Pounds (avoirdupois)	6.250×10^{-2}
Ounces (avoirdupois)	Tons (long)	2.790×10^{-5}
Ounces (avoirdupois)	Tons (metric)	2.835×10^{-5}
Ounces (avoirdupois)	Tons (short)	3.125×10^{-5}
Pints (liquid)	Cubic centimeters	473.2
Pints (liquid)	Cubic feet	1.671×10^{-2}
Pints (liquid)	Cubic inches	28.87
Pints (liquid)	Cubic meters	4.732×10^{-4}

See notes at end of table.

To convert from	To	Multiply by
Pints (liquid)	Cubic yards	6.189 x 10 ⁻⁴
Pints (liquid)	Gallons (liquid)	.125
Pounds (avoirdupois)	Grains	7000
Pounds (avoirdupois)	Grams	453.6
Pounds (avoirdupois)	Kilograms	.4536
Pounds (avoirdupois)	Milligrams	4.536 x 10 ⁵
Pounds (avoirdupois)	Ounces (avoirdupois)	16
Pounds (avoirdupois)	Tons (long)	4.464 x 10 ⁻⁴
Pounds (avoirdupois)	Tons (short)	.0005
Quadrants	Degrees	90
Quadrants	Minutes	5400
Quadrants	Radians*	1.571
Quadrants	Revolutions* (circumferences)	.25
Quadrants	Seconds	3.24 x 10 ⁵
Quarts (liquid)	Cubic centimeters	946.4
Quarts (liquid)	Cubic feet	3.342 x 10 ⁻³
Quarts (liquid)	Cubic inches	57.75
Quarts (liquid)	Cubic meters	9.464 x 10 ⁻⁴
Quarts (liquid)	Cubic yards	1.238 x 10 ⁻⁶
Quarts (liquid)	Gallons (liquid)	.25
Radians*	Circumferences*	.1591
Radians*	Degrees	57.30
Radians*	Degrees, minutes, seconds	57°, 17', 44.8"
Radians*	Minutes	3438
Radians*	Quadrants	.6366
Radians*	Revolutions*	.1591
Radians*	Seconds	2.063 x 10 ⁵
Radians/second	Degrees/second	57.30
Radians/second	Revolutions/minute	9.549
Radians/second	Revolutions/second	.1592
Revolutions* (circumferences)	Degrees	360
Revolutions* (circumferences)	Minutes	2.16 x 10 ⁴
Revolutions* (circumferences)	Quadrants	4
Revolutions* (circumferences)	Radians*	6.283
Revolutions* (circumferences)	Seconds	1.296 x 10 ⁶
Revolutions/minute	Degrees/second	6
Revolutions/minute	Radians/second	.1047
Revolutions/minute ²	Revolutions/second ²	1.667 x 10 ⁻²
Revolutions/second	Degrees/second	360
Revolutions/second	Radians/second	6.283
Revolutions/second	Revolutions/minute	60
Seconds (angle)	Degrees	2.778 x 10 ⁻⁴
Seconds (angle)	Minutes	1.667 x 10 ⁻²
Seconds (angle)	Quadrants	3.087 x 10 ⁻⁶
Seconds (angle)	Radians*	4.848 x 10 ⁻⁶
Seconds (angle)	Revolutions* (circumferences)	7.716 x 10 ⁻⁷
Spheres	Hemispheres	2
Spheres	Spherical right angles	8
Spheres	Steradians	12.57
Spherical right angles	Hemispheres	.25
Spherical right angles	Spheres	.125
Spherical right angles	Steradians	1.571
Square centimeters	Circular mils	1.973 x 10 ⁵
Square centimeters	Square decimeters	.01
Square centimeters	Square feet	1.076 x 10 ⁻³
Square centimeters	Square inches	.1550
Square centimeters	Square kilometers	10 ⁻¹⁰
Square centimeters	Square meters	.0001

See notes at end of table.

To convert from	To	Multiply by
Square centimeters	Square miles	3.861×10^{-11}
Square centimeters	Square millimeters	100
Square centimeters	Square yards	1.196×10^{-4}
Square feet	Acres	2.296×10^{-6}
Square feet	Acres	9.290×10^{-4}
Square feet	Circular mils	1.833×10^6
Square feet	Square centimeters	929.0
Square feet	Square inches	144
Square feet	Square kilometers	9.290×10^{-8}
Square feet	Square meters	9.290×10^{-2}
Square feet	Square miles	3.587×10^{-8}
Square feet	Square millimeters	9.290×10^4
Square inches	Circular mils	1.273×10^6
Square inches	Square centimeters	6.452
Square inches	Square feet	6.944×10^{-3}
Square inches	Square kilometers	6.452×10^{-10}
Square inches	Square meters	6.452×10^{-4}
Square inches	Square millimeters	645.2
Square inches	Square yards	7.716×10^{-4}
Square kilometers	Acres	247.1
Square kilometers	Square centimeters	10^{10}
Square kilometers	Square feet	1.076×10^7
Square kilometers	Square inches	1.550×10^9
Square kilometers	Square meters	10^6
Square kilometers	Square miles	.3861
Square kilometers	Square millimeters	10^{12}
Square kilometers	Square yards	1.196×10^6
Square meters	Acres	2.471×10^{-4}
Square meters	Acres	.01
Square meters	Circular mils	1.973×10^9
Square meters	Square centimeters	10^4
Square meters	Square feet	10.76
Square meters	Square inches	1550
Square meters	Square kilometers	10^{-6}
Square meters	Square miles	3.861×10^{-7}
Square meters	Square millimeters	10^6
Square meters	Square yards	1.196
Square miles	Acres	640
Square miles	Square centimeters	2.590×10^{10}
Square miles	Square feet	2.788×10^7
Square miles	Square inches	4.015×10^9
Square miles	Square kilometers	2.590
Square miles	Square meters	2.590×10^6
Square miles	Square yards	3.098×10^6
Square millimeters	Circular mils	1973
Square millimeters	Square centimeters	.01
Square millimeters	Square feet	1.076×10^{-5}
Square millimeters	Square inches	1.550×10^{-3}
Square millimeters	Square kilometers	10^{-12}
Square millimeters	Square meters	10^{-6}
Square millimeters	Square miles	3.861×10^{-13}
Square millimeters	Square yards	1.196×10^{-6}
Square rods	Acres	.00625
Square rods	Square feet	272.25
Square rods	Square inches	39204
Square rods	Square meters	25.293
Square rods	Square miles	9.766×10^{-6}
Square rods	Square yards	30.25
Square yards	Acres	2.066×10^{-4}

To convert from	To	Multiply by
Square yards	Square centimeters	8361
Square yards	Square feet	9
Square yards	Square inches	1296
Square yards	Square kilometers	8.361×10^{-7}
Square yards	Square meters	.8361
Square yards	Square miles	3.228×10^{-7}
Square yards	Square millimeters	8.361×10^{-5}
Statamperes	Abamperes	3.335×10^{-11}
Statamperes	Amperes	3.335×10^{-10}
Statcoulombs	Abcoulombs	3.335×10^{-11}
Statcoulombs	Ampere-hours	9.259×10^{-14}
Statcoulombs	Coulombs	3.335×10^{-10}
Statcoulombs	Faradays	3.457×10^{-15}
Statfarads (or centimeters)	Abfarads	1.112×10^{-21}
Statfarads	Farads	1.112×10^{-12}
Statfarads	Microfarads	1.112×10^{-6}
Stathenrys	Abhenrys	8.988×10^{20}
Stathenrys	Henrys	8.988×10^{11}
Stathenrys	Microhenrys	8.988×10^{17}
Stathenrys	Millihenrys	8.988×10^{14}
Statohms	Abohms	8.988×10^{20}
Statohms	Megohms	8.988×10^6
Statohms	Microhms	8.988×10^{17}
Statohms	Ohms	8.988×10^{11}
Statvolts	Abvolts	2.998×10^{10}
Statvolts	Microvolts	2.998×10^8
Statvolts	Millivolts	2.998×10^6
Statvolts	Volts	299.8
Steradians	Hemispheres	.1592
Steradians	Spheres	7.958×10^{-3}
Steradians	Spherical right angles	.6366
Steres	Cubic meters	1
Steres	Liters	999.973
Tons (long)	Grams	1.016×10^6
Tons (long)	Kilograms	1016
Tons (long)	Milligrams	1.016×10^9
Tons (long)	Ounces (avoirdupois)	3.584×10^4
Tons (long)	Pounds (avoirdupois)	2240
Tons (long)	Tons (metric)	1.016
Tons (long)	Tons (short)	1.120
Tons (metric)	Grams	10^6
Tons (metric)	Kilograms	1000
Tons (metric)	Milligrams	10^9
Tons (metric)	Ounces (avoirdupois)	3.527×10^4
Tons (metric)	Pounds (avoirdupois)	2205
Tons (metric)	Tons (long)	.9842
Tons (metric)	Tons (short)	1.102
Tons (short)	Grams	9.072×10^5
Tons (short)	Kilograms	907.2
Tons (short)	Milligrams	9.072×10^8
Tons (short)	Ounces (avoirdupois)	3.2×10^4
Tons (short)	Pounds (avoirdupois)	2000
Tons (short)	Tons (long)	.8929
Tons (short)	Tons (metric)	.9072
Volts	Abvolts	10^8
Volts	Microvolts	10^6
Volts	Millivolts	1000
Volts	Statvolts	3.335×10^{-3}
Watts	Horsepower	.0013410

To convert from	To	Multiply by
Watts	Kilowatts	.001
Yards	Centimeters	91.44
Yards	Feet	3
Yards	Inches	36
Yards	Kilometers	9.144×10^{-4}
Yards	Meters	.9144
Yards	Miles	5.682×10^{-4}
Yards	Miles (nautical)	4.934×10^{-4}
Yards	Millimeters	914.4
Yards	Mils	3.6×10^4

* 2π radians = 1 circumference = 360°

* 4π steradians = 1 sphere.

APPENDIX III TABLES

1. Squares, Cubes, Square Roots, and Cube Roots

No.	Square	Cube	Square Root	Cube Root	No. = Diam.		No.
					Circum.	Area	
1	1	1	1.0000	1.0000	3.142	0.7854	1
2	4	8	1.4142	1.2599	6.283	3.1416	2
3	9	27	1.7321	1.4423	9.425	7.0686	3
4	16	64	2.0000	1.5874	12.566	12.5664	4
5	25	125	2.2361	1.7100	15.708	19.6350	5
6	36	216	2.4495	1.8171	18.850	28.2743	6
7	49	343	2.6458	1.9129	21.991	38.4845	7
8	64	512	2.8284	2.0000	25.133	50.2655	8
9	81	729	3.0000	2.0801	28.274	63.6173	9
10	100	1000	3.1623	2.1544	31.416	78.5398	10
11	121	1331	3.3166	2.2240	34.558	95.0332	11
12	144	1728	3.4641	2.2894	37.699	113.097	12
13	169	2197	3.6056	2.3513	40.841	132.732	13
14	196	2744	3.7417	2.4101	43.982	153.938	14
15	225	3375	3.8730	2.4662	47.124	176.715	15
16	256	4096	4.0000	2.5198	50.265	201.062	16
17	289	4913	4.1231	2.5713	53.407	226.980	17
18	324	5832	4.2426	2.6207	56.549	254.469	18
19	361	6859	4.3589	2.6684	59.690	283.529	19
20	400	8000	4.4721	2.7144	62.832	314.159	20
21	441	9261	4.5826	2.7589	65.973	346.361	21
22	484	10648	4.6904	2.8020	69.115	380.133	22
23	529	12167	4.7958	2.8439	72.257	415.476	23
24	576	13824	4.8990	2.8845	75.398	452.389	24
25	625	15625	5.0000	2.9240	78.540	490.874	25
26	676	17576	5.0990	2.9625	81.681	530.929	26
27	729	19683	5.1962	3.0000	84.823	572.555	27
28	784	21952	5.2915	3.0366	87.965	615.752	28
29	841	24389	5.3852	3.0723	91.106	660.520	29
30	900	27000	5.4772	3.1072	94.248	706.858	30
31	961	29791	5.5678	3.1414	97.389	754.768	31
32	1024	32768	5.6569	3.1748	100.531	804.248	32
33	1089	35937	5.7446	3.2075	103.673	855.299	33
34	1156	39304	5.8310	3.2396	106.814	907.920	34
35	1225	42875	5.9161	3.2711	109.956	962.113	35
36	1296	46656	6.0000	3.3019	113.097	1017.88	36
37	1369	50653	6.0828	3.3322	116.239	1075.21	37
38	1444	54872	6.1644	3.3620	119.381	1134.11	38
39	1521	59319	6.2450	3.3912	122.522	1194.59	39

TM684-121

No.	Square	Cubo	Square Root	Dimm.		No.	Square	Cubo	Square Root	Cubo	Square Root	No. = Dimm.		No.
				Circum.	Area							Circum.	Area	
40	1600	64000	6.3246	3.4200	125.66	1256.64	40	80	512000	8.9443	4.3089	251.33	5026.55	80
41	1681	68921	6.4031	3.4482	128.81	1320.25	41	81	531441	9.0000	4.3267	254.47	5153.00	81
42	1764	74088	6.4807	3.4760	131.95	1385.44	42	82	551368	9.0554	4.3445	257.61	5281.02	82
43	1849	79507	6.5574	3.5034	135.09	1452.20	43	83	571787	9.1104	4.3621	260.75	5410.61	83
44	1936	85184	6.6332	3.5303	138.23	1520.53	44	84	592704	9.1652	4.3795	263.89	5541.77	84
45	2025	91125	6.7082	3.5569	141.37	1590.43	45	85	614125	9.2195	4.3968	267.04	5674.50	85
46	2116	97336	6.7823	3.5830	144.51	1661.90	46	86	636056	9.2736	4.4140	270.18	5808.80	86
47	2209	103823	6.8557	3.6088	147.65	1734.94	47	87	658503	9.3274	4.4310	273.32	5944.68	87
48	2304	110592	6.9282	3.6342	150.80	1809.56	48	88	681472	9.3808	4.4480	276.46	6082.12	88
49	2401	117649	7.0000	3.6593	153.94	1885.74	49	89	704969	9.4340	4.4647	279.60	6221.14	89
50	2500	125000	7.0711	3.6840	157.08	1963.50	50	90	729000	9.4868	4.4814	282.74	6361.73	90
51	2601	132651	7.1414	3.7084	160.22	2042.82	51	91	753571	9.5394	4.4979	285.88	6503.88	91
52	2704	140608	7.2111	3.8325	163.36	2123.72	52	92	778688	9.5917	4.5144	289.03	6647.61	92
53	2809	148877	7.2801	3.7563	166.50	2206.18	53	93	804357	9.6437	4.5307	292.17	6792.91	93
54	2916	157464	7.3485	3.7798	169.65	2290.22	54	94	830584	9.6954	4.5468	295.31	6939.78	94
55	3025	166375	7.4162	3.8030	172.79	2375.83	55	95	857375	9.7468	4.5629	298.45	7088.22	95
56	3136	175616	7.4833	3.8259	175.93	2463.01	56	96	884736	9.7980	4.5789	301.59	7238.23	96
57	3249	185193	7.5498	3.8485	179.07	2551.76	57	97	912673	9.8489	4.5947	304.73	7389.81	97
58	3364	195112	7.6158	3.8709	182.21	2642.08	58	98	941192	9.8995	4.6104	307.88	7542.96	98
59	3481	205379	7.6811	3.8930	185.35	2733.97	59	99	970299	9.9499	4.6261	311.02	7697.69	99
60	3600	216000	7.7460	3.9149	188.50	2827.43	60	100	1000000	10.0000	4.6416	314.16	7853.98	100
61	3721	226981	7.8102	3.9365	191.64	2922.47	61	101	1030301	10.4099	4.6570	317.30	8011.85	101
62	3844	238328	7.8740	3.9579	194.78	3019.07	62	102	1061208	10.0995	4.6723	320.44	8171.28	102
63	3969	250047	7.9373	3.9791	197.92	3117.25	63	103	1092727	10.1489	4.6875	323.58	8332.29	103
64	4096	262114	8.0000	4.0000	201.06	3216.99	64	104	1124864	10.1980	4.7027	326.73	8494.87	104
65	4225	274625	8.0623	4.0207	204.20	3318.31	65	105	1157625	10.2470	4.7177	329.87	8659.01	105
66	4356	287496	8.1240	4.0412	207.35	3421.19	66	106	1191016	10.2956	4.7326	333.01	8824.73	106
67	4489	300763	8.1854	4.0615	210.49	3525.65	67	107	1225043	10.3441	4.7475	336.15	8992.02	107
68	4624	314432	8.2462	4.0817	213.63	3631.68	68	108	1259712	10.3923	4.7622	339.29	9160.88	108
69	4761	328509	8.3066	4.1016	216.77	3739.28	69	109	1295029	10.4403	4.7769	342.43	9331.32	109
70	4900	343000	8.3666	4.1213	219.91	3848.45	70	110	1331000	10.4881	4.7914	345.58	9503.32	110
71	5041	357911	8.4261	4.1408	223.05	3959.19	71	111	1367631	10.5357	4.8059	348.72	9676.89	111
72	5184	373248	8.4853	4.1602	226.19	4071.50	72	112	1404928	10.5830	4.8203	351.86	9852.03	112
73	5329	389107	8.5440	4.1793	229.34	4185.39	73	113	1442897	10.6301	4.8346	355.00	10028.7	113
74	5476	405224	8.6023	4.1983	232.48	4300.84	74	114	1481544	10.6771	4.8488	358.14	10207.0	114
75	5625	421875	8.6603	4.2172	235.62	4417.86	75	115	1520875	10.7238	4.8629	361.28	10386.9	115
76	5776	438976	8.7178	4.2358	238.76	4536.46	76	116	1560896	10.7703	4.8770	364.42	10568.3	116
77	5929	456533	8.7750	4.2543	241.90	4656.63	77	117	1601613	10.8167	4.8910	367.57	10751.3	117
78	6084	474552	8.8318	4.2727	245.04	4778.36	78	118	1643032	10.8628	4.9049	370.71	10935.9	118
79	6241	493039	8.8882	4.2908	248.19	4901.67	79	119	1685159	10.9087	4.9187	373.85	11122.0	119

TM684-123

TM684-122

No.	Square Feet	Cube Feet	No. - - - - - Diam.		No.	Square Feet	Cube Feet	No. - - - - - Diam.		No.	Square Feet	Cube Feet	No. - - - - - Diam.		No.
			Circum.	Area				Circum.	Area				Circum.	Area	
120	14400	1728000	10.9545	4.9324	376.99	11309.7	120	160	25600	4096000	12.6491	5.4288	502.65	20106.2	160
121	14641	1771561	11.0000	4.9461	380.13	11499.0	121	161	25921	4173281	12.6886	5.4401	505.80	20358.3	161
122	14884	1815848	11.0454	4.9597	383.27	11689.9	122	162	26244	4251528	12.7279	5.4514	508.94	20612.0	162
123	15129	1860867	11.0905	4.9732	386.42	11882.3	123	163	26569	4330747	12.7671	5.4626	512.08	20867.2	163
124	15376	1906624	11.1355	4.9866	389.56	12076.3	124	164	26896	4410944	12.8062	5.4737	515.22	21124.1	164
125	15625	1953125	11.1803	5.0000	392.70	12271.8	125	165	27225	4492125	12.8452	5.4848	518.36	21382.5	165
126	15876	2000376	11.2250	5.0133	395.84	12469.0	126	166	27556	4574296	12.8841	5.4959	521.50	21642.4	166
127	16129	2048383	11.2694	5.0265	398.98	12667.7	127	167	27889	4657463	12.9228	5.5069	524.65	21904.0	167
128	16384	2097152	11.3137	5.0397	402.12	12868.0	128	168	28224	4741532	12.9615	5.5178	527.79	22167.1	168
129	16641	2146689	11.3578	5.0528	405.27	13069.8	129	169	28561	4826809	13.0000	5.5288	530.93	22431.8	169
130	16900	2197000	11.4018	5.0658	408.41	13273.2	130	170	28900	4913000	13.0384	5.5397	534.07	22698.0	170
131	17161	2248091	11.4455	5.0788	411.55	13478.2	131	171	29241	5000211	13.0767	5.5505	537.21	22965.8	171
132	17424	2299968	11.4891	5.0916	414.69	13684.8	132	172	29584	5088448	13.1149	5.5613	540.35	23235.2	172
133	17689	2352637	11.5326	5.1045	417.83	13892.9	133	173	29929	5177717	13.1529	5.5721	543.50	23506.2	173
134	17956	2406104	11.5758	5.1172	420.97	14102.6	134	174	30276	5268024	13.1909	5.5828	546.64	23778.7	174
135	18225	2460375	11.6190	5.1299	424.12	14313.9	135	175	30625	5359375	13.2288	5.5934	549.78	24052.8	175
136	18496	2515456	11.6619	5.1426	427.26	14526.7	136	176	30976	5451776	13.2665	5.6041	552.92	24328.5	176
137	18769	2571353	11.7047	5.1551	430.40	14741.1	137	177	31329	5545233	13.3041	5.6147	556.06	24605.7	177
138	19044	2628072	11.7473	5.1676	433.54	14957.1	138	178	31684	5639752	13.3417	5.6252	559.20	24884.6	178
139	19321	2685619	11.7898	5.1801	436.68	15174.7	139	179	32041	5735339	13.3791	5.6357	562.35	25164.9	179
140	19600	2744000	11.8322	5.1925	439.82	15393.8	140	180	32400	5832000	13.4164	5.6462	565.49	25446.9	180
141	19881	2803221	11.8743	5.2048	442.96	15614.5	141	181	32761	5929741	13.4536	5.6567	568.63	25730.4	181
142	20164	2863288	11.9164	5.2171	446.11	15836.8	142	182	33124	6028568	13.4907	5.6671	571.77	26015.5	182
143	20449	2924207	11.9583	5.2293	449.25	16060.6	143	183	33489	6128487	13.5277	5.6774	574.91	26302.2	183
144	20736	2985984	12.0000	5.2415	452.39	16286.0	144	184	33856	6229504	13.5647	5.6877	578.05	26590.4	184
145	21025	3048625	12.0416	5.2536	455.53	16513.0	145	185	34225	6331625	13.6015	5.6980	581.19	26880.3	185
146	21316	3112136	12.0830	5.2656	458.67	16741.5	146	186	34596	6434856	13.6382	5.7083	584.34	27171.6	186
147	21609	3176523	12.1244	5.2776	461.81	16971.7	147	187	34969	6539203	13.6748	5.7185	587.48	27464.6	187
148	21904	3241792	12.1655	5.2896	464.96	17203.4	148	188	35344	6644672	13.7113	5.7287	590.62	27759.1	188
149	22201	3307949	12.2066	5.3015	468.10	17436.6	149	189	35721	6751269	13.7477	5.7388	593.76	28055.2	189
150	22500	3375000	12.2474	5.3133	471.24	17671.5	150	190	36100	6859000	13.7840	5.7489	596.90	28352.9	190
151	22801	3442951	12.2882	5.3251	474.38	17907.9	151	191	36481	6967871	13.8203	5.7590	600.04	28652.1	191
152	23104	3511808	12.3288	5.3368	477.52	18145.8	152	192	36864	7077888	13.8564	5.7690	603.19	28952.9	192
153	23409	3581577	12.3693	5.3485	480.66	18385.4	153	193	37249	7189057	13.8924	5.7790	606.33	29255.3	193
154	23716	3652264	12.4097	5.3601	483.81	18626.5	154	194	37636	7301384	13.9284	5.7890	609.47	29559.2	194
155	24025	3723875	12.4499	5.3717	486.95	18869.2	155	195	38025	7414875	13.9642	5.7989	612.61	29864.8	195
156	24336	3796416	12.4900	5.3832	490.09	19113.4	156	196	38416	7529536	14.0000	5.8088	615.75	30171.9	196
157	24649	3869893	12.5300	5.3947	493.23	19359.3	157	197	38809	7645373	14.0357	5.8186	618.89	30480.5	197
158	24964	3944312	12.5698	5.4061	496.37	19606.7	158	198	39204	7762392	14.0712	5.8285	622.04	30790.7	198
159	25281	4019679	12.6095	5.4175	499.51	19855.7	159	199	39601	7880599	14.1067	5.8383	625.18	31102.6	199

T.M. 64-123

T.M. 64-124

No.	Square	Cube	Square Foot	Cube Foot	No.	Dim.		No.	Square	Cube	Square Foot	Cube Foot	No.	Square	Cube	Square Foot	Cube Foot	No.	Square	Cube	Square Foot	Cube Foot	No.	Square	Cube	Square Foot	Cube Foot	No.
						Circum.	Area																					
200	40000	80000000	14.1421	5.8480	628.32	31415.9	200	240	57600	13824000	15.4919	6.2145	753.98	45238.9	240													
201	40401	8120601	14.1774	5.8578	631.46	31730.9	201	241	58081	13997521	15.5242	6.2231	757.12	45616.7	241													
202	40804	8242408	14.2127	5.8675	634.60	32047.4	202	242	58564	14172488	15.5563	6.2317	760.27	45996.1	242													
203	41209	8365427	14.2478	5.8771	637.74	32365.5	203	243	59049	14348907	15.5885	6.2403	763.41	46377.0	243													
204	41616	8489664	14.2829	5.8868	640.89	32685.1	204	244	59536	14526784	15.6205	6.2488	766.55	46759.5	244													
205	42025	8615125	14.3178	5.8964	644.03	33006.4	205	245	60025	14706125	15.6525	6.2573	769.69	47143.5	245													
206	42436	8741816	14.3527	5.9059	647.17	33329.2	206	246	60516	14886936	15.6844	6.2658	772.83	47529.2	246													
207	42849	8869743	14.3875	5.9155	650.31	33653.5	207	247	61009	15069223	15.7162	6.2743	775.97	47916.4	247													
208	43264	8998912	14.4222	5.9250	653.45	33979.5	208	248	61504	15252992	15.7480	6.2828	779.12	48305.1	248													
209	43681	9129329	14.4568	5.9345	656.59	34307.0	209	249	62001	15438249	15.7797	6.2912	782.26	48695.5	249													
210	44100	9261000	14.4914	5.9439	659.73	34636.1	210	250	62500	15625000	15.8114	6.2996	785.40	49087.4	250													
211	44521	9393931	14.5258	5.9533	662.88	34966.7	211	251	63001	15813251	15.8430	6.3080	788.54	49480.9	251													
212	44944	9528128	14.5602	5.9627	666.02	35298.9	212	252	63504	16003008	15.8745	6.3164	791.68	49875.9	252													
213	45369	9663597	14.5945	5.9721	669.16	35632.7	213	253	64009	16194277	15.9060	6.3247	794.82	50272.6	253													
214	45796	9800344	14.6287	5.9814	672.30	35968.1	214	254	64516	16387064	15.9374	6.3330	797.96	50670.7	254													
215	46225	9938375	14.6629	5.9907	675.44	36305.0	215	255	65025	16581375	15.9687	6.3413	801.11	51070.5	255													
216	46656	10077696	14.6969	6.0000	678.58	36643.5	216	256	65536	16777216	16.0000	6.3496	804.25	51471.9	256													
217	47089	10218313	14.7309	6.0092	681.73	36983.6	217	257	66049	16974593	16.0312	6.3579	807.39	51874.8	257													
218	47524	10360232	14.7648	6.0185	684.87	37325.3	218	258	66564	17173512	16.0624	6.3661	810.53	52279.2	258													
219	47961	10503459	14.7986	6.0277	688.01	37668.5	219	259	67081	17373979	16.0935	6.3743	813.67	52685.3	259													
220	48400	10648000	14.8324	6.0368	691.15	38013.3	220	260	67600	17576000	16.1245	6.3825	816.81	53092.9	260													
221	48841	10793861	14.8661	6.0459	694.29	38359.6	221	261	68121	17779581	16.1555	6.3907	819.96	53502.1	261													
222	49284	10941048	14.8997	6.0550	697.43	38707.6	222	262	68644	17984728	16.1854	6.3988	823.10	53912.9	262													
223	49729	11089567	14.9332	6.0641	700.58	39057.1	223	263	69169	18191447	16.2173	6.4070	826.24	54325.2	263													
224	50176	11239424	14.9666	6.0732	703.72	39408.1	224	264	69696	18399744	16.2481	6.4151	829.38	54739.1	264													
225	50625	11390625	15.0000	6.0822	706.86	39760.8	225	265	70225	18609625	16.2788	6.4232	832.52	55154.6	265													
226	51076	11543176	15.0333	6.0912	710.00	40115.0	226	266	70756	18821096	16.3095	6.4312	835.66	55571.6	266													
227	51529	11697083	15.0665	6.1002	713.14	40470.8	227	267	71289	19034163	16.3401	6.4393	838.81	55990.3	267													
228	51984	11852352	15.0997	6.1091	716.28	40828.1	228	268	71824	19248832	16.3707	6.4473	841.95	56410.4	268													
229	52441	12008980	15.1327	6.1180	719.42	41187.1	229	269	72361	19465109	16.4012	6.4553	845.09	56832.2	269													
230	52900	12167000	15.1658	6.1269	722.57	41547.6	230	270	72900	19683000	16.4317	6.4633	848.23	57255.5	270													
231	53361	12326391	15.1987	6.1358	725.71	41909.6	231	271	73441	19902511	16.4621	6.4713	851.37	57680.4	271													
232	53824	12487168	15.2315	6.1446	728.85	42273.3	232	272	73984	20123648	16.4924	6.4792	854.51	58106.9	272													
233	54289	12649337	15.2643	6.1534	731.99	42638.5	233	273	74529	20346417	16.5227	6.4872	857.66	58534.9	273													
234	54756	12812904	15.2971	6.1622	735.13	43005.3	234	274	75076	20570824	16.5529	6.4951	860.80	58964.6	274													
235	55225	12977875	15.3297	6.1710	738.27	43373.6	235	275	75625	20796875	16.5831	6.5030	863.94	59395.7	275													
236	55696	13144256	15.3623	6.1797	741.42	43743.5	236	276	76176	21024576	16.6132	6.5108	867.08	59828.5	276													
237	56169	13312053	15.3948	6.1885	744.56	44115.0	237	277	76729	21253933	16.6433	6.5187	870.22	60262.8	277													
238	56644	13481272	15.4272	6.1972	747.70	44488.1	238	278	77284	21484952	16.6733	6.5265	873.36	60698.7	278													
239	57121	13651919	15.4596	6.2058	750.84	44862.7	239	279	77841	21717639	16.7033	6.5343	876.50	61136.2	279													

TM604-127

TM604-126

No.	Square	Cube	Square Feet	Cube Feet	No.	Diam.		No.	Square	Cube	Square Feet	Cube Feet	No.	Diam.		No.
						Circum.	Area							Circum.	Area	
280	78400	21952000	16,7332	6,5421	879.65	61575.2	280	320	102400	32768000	17,8885	6,8399	1005.3	80424.8	320	
281	78961	22188041	16,7631	6,5499	882.79	62015.8	281	321	103041	33076161	17,9165	6,8470	1008.5	80928.2	321	
282	79524	22425768	16,7929	6,5577	885.93	62458.0	282	322	103684	33386248	17,9444	6,8541	1011.6	81433.2	322	
283	80089	22665187	16,8226	6,5654	889.07	62901.8	283	323	104329	33698267	17,9722	6,8612	1014.7	81939.8	323	
284	80656	22906304	16,8523	6,5731	892.21	63347.1	284	324	104976	34012224	18,0000	6,8683	1017.9	82448.0	324	
285	81225	23149125	16,8819	6,5808	895.35	63794.0	285	325	105625	34328125	18,0278	6,8753	1021.0	82957.7	325	
286	81796	23393656	16,9115	6,5885	898.50	64242.4	286	326	106276	34645976	18,0555	6,8824	1024.2	83469.0	326	
287	82369	23639903	16,9411	6,5962	901.64	64692.5	287	327	106929	34965783	18,0831	6,8894	1027.3	83981.8	327	
288	82944	23887872	16,9706	6,6039	904.78	65144.1	288	328	107584	35287552	18,1108	6,8964	1030.4	84496.3	328	
289	83521	24137569	17,0000	6,6115	907.92	65597.2	289	329	108241	35611289	18,1384	6,9034	1033.6	85012.3	329	
290	84100	24389000	17,0294	6,6191	911.06	66052.0	290	330	108900	35937000	18,1659	6,9104	1036.7	85529.9	330	
291	84681	24642171	17,0587	6,6267	914.20	66508.3	291	331	109561	36264691	18,1934	6,9174	1039.9	86049.0	331	
292	85264	24897088	17,0880	6,6343	917.35	66966.2	292	332	110224	36594368	18,2209	6,9244	1043.0	86569.7	332	
293	85849	25153757	17,1172	6,6419	920.49	67425.6	293	333	110889	36926037	18,2483	6,9313	1046.2	87092.0	333	
294	86436	25412184	17,1464	6,6494	923.63	67886.7	294	334	111556	37259704	18,2757	6,9382	1049.3	87615.9	334	
295	87025	25672375	17,1756	6,6569	926.77	68349.3	295	335	112225	37595375	18,3030	6,9451	1052.4	88141.3	335	
296	87616	25934336	17,2047	6,6644	929.91	68813.5	296	336	112896	37933056	18,3303	6,9521	1055.6	88668.3	336	
297	88209	26198073	17,2337	6,6719	933.05	69279.2	297	337	113569	38272753	18,3576	6,9589	1058.7	89196.9	337	
298	88804	26463592	17,2627	6,6794	936.19	69746.5	298	338	114244	38614472	18,3848	6,9658	1061.9	89727.0	338	
299	89401	26730899	17,2916	6,6869	939.34	70215.4	299	339	114921	38958219	18,4120	6,9727	1065.0	90258.7	339	
300	90000	27000000	17,3205	6,6943	942.48	70685.8	300	340	115600	39304000	18,4391	6,9795	1068.1	90792.0	340	
301	90601	27270901	17,3494	6,7018	945.62	71157.9	301	341	116281	39651821	18,4662	6,9864	1071.3	91326.9	341	
302	91204	27543608	17,3781	6,7092	948.76	71631.5	302	342	116964	40001688	18,4932	6,9932	1074.4	91863.3	342	
303	91809	27818127	17,4069	6,7166	951.90	72106.6	303	343	117649	40353607	18,5203	7,0000	1077.6	92401.3	343	
304	92416	28094464	17,4356	6,7240	955.04	72583.4	304	344	118336	40707584	18,5472	7,0068	1080.7	92940.9	344	
305	93025	28372625	17,4642	6,7313	958.19	73061.7	305	345	119025	41063625	18,5742	7,0136	1083.8	93482.0	345	
306	93636	28652616	17,4929	6,7387	961.33	73541.5	306	346	119716	41421736	18,6011	7,0203	1087.0	94024.7	346	
307	94249	28934443	17,5214	6,7460	964.47	74023.0	307	347	120409	41781923	18,6279	7,0271	1090.1	94569.0	347	
308	94864	29218112	17,5499	6,7533	967.61	74506.0	308	348	121104	42144192	18,6548	7,0338	1093.3	95114.9	348	
309	95481	29503629	17,5784	6,7606	970.75	74990.6	309	349	121801	42508549	18,6815	7,0406	1096.4	95662.3	349	
310	96100	29791000	17,6068	6,7679	973.89	75476.8	310	350	122500	42875000	18,7083	7,0473	1099.6	96211.3	350	
311	96721	30080231	17,6352	6,7752	977.04	75964.5	311	351	123201	43243551	18,7350	7,0540	1102.7	96761.8	351	
312	97344	30371328	17,6635	6,7824	980.18	76453.8	312	352	123904	43614208	18,7617	7,0607	1105.8	97314.0	352	
313	97969	30664297	17,6918	6,7897	983.32	76944.7	313	353	124609	43986977	18,7883	7,0674	1109.0	97867.7	353	
314	98596	30959144	17,7200	6,7969	986.46	77437.1	314	354	125316	44361864	18,8149	7,0740	1112.1	98423.0	354	
315	99225	31255875	17,7482	6,8041	989.60	77931.1	315	355	126025	44738875	18,8414	7,0807	1115.3	98979.8	355	
316	99856	31554496	17,7764	6,8113	992.74	78426.7	316	356	126736	45118016	18,8680	7,0873	1118.4	99538.2	356	
317	100489	31855013	17,8045	6,8185	995.88	78923.9	317	357	127449	45499293	18,8944	7,0940	1121.5	100098	357	
318	101124	32157432	17,8326	6,8256	999.03	79422.6	318	358	128164	45882712	18,9209	7,1006	1124.7	100660	358	
319	101761	32461759	17,8606	6,8328	1002.2	79922.9	319	359	128881	46268279	18,9473	7,1072	1127.8	101223	359	

TM684-129

TM684-128

No.	Square	Cube	Square Foot	Cube Foot	No. Diam.		No.	Square	Cube	Square Foot	Cube Foot	No. Diam.		No.
					Circum.	Area						Circum.	Area	
360	129600	46656000	18.9737	7.1138	1131.0	101788	360	160000	64000000	20.0000	7.3681	1256.6	125664	400
361	130321	47045881	19.0000	7.1204	1134.1	102354	361	160801	64481201	20.0250	7.3742	1259.8	126293	401
362	131044	47437928	19.0263	7.1269	1137.3	102922	362	161604	64964808	20.0499	7.3803	1262.9	126923	402
363	131769	47832147	19.0526	7.1335	1140.4	103491	363	162409	65450827	20.0749	7.3864	1266.1	127556	403
364	132496	48228544	19.0788	7.1400	1143.5	104062	364	163216	65939264	20.0998	7.3925	1269.2	128190	404
365	133225	48627125	19.1050	7.1466	1146.7	104635	365	164025	66430125	20.1246	7.3986	1272.3	128825	405
366	133956	49027896	19.1311	7.1531	1149.8	105209	366	164836	66923416	20.1494	7.4047	1275.5	129462	406
367	134689	49430863	19.1572	7.1596	1153.0	105785	367	165649	67419143	20.1742	7.4108	1278.6	130100	407
368	135424	49836032	19.1833	7.1661	1156.1	106362	368	166464	67917312	20.1990	7.4169	1281.8	130741	408
369	136161	50243409	19.2094	7.1726	1159.2	106941	369	167281	68417929	20.2237	7.4229	1284.9	131382	409
370	136900	50653000	19.2354	7.1791	1162.4	107521	370	168100	68921000	20.2485	7.4290	1288.1	132025	410
371	137641	51064811	19.2614	7.1855	1165.5	108103	371	168921	69426531	20.2731	7.4350	1291.2	132670	411
372	138384	51478848	19.2873	7.1920	1168.7	108687	372	169744	69934528	20.2978	7.4410	1294.3	133317	412
373	139129	51895117	19.3132	7.1984	1171.8	109272	373	170569	70444997	20.3224	7.4470	1297.5	133965	413
374	139876	52313624	19.3391	7.2048	1175.0	109858	374	171396	70957944	20.3470	7.4530	1300.6	134614	414
375	140625	52734375	19.3649	7.2112	1178.1	110447	375	172225	71473375	20.3715	7.4590	1303.8	135265	415
376	141376	53157376	19.3907	7.2177	1181.2	111036	376	173056	71991296	20.3961	7.4650	1306.9	135918	416
377	142129	53582633	19.4165	7.2240	1184.4	111628	377	173889	72511713	20.4206	7.4710	1310.0	136572	417
378	142884	54010152	19.4422	7.2304	1187.5	112221	378	174724	73034632	20.4450	7.4770	1313.2	137228	418
379	143641	54439939	19.4679	7.2368	1190.7	112815	379	175561	73560059	20.4695	7.4829	1316.3	137885	419
380	144400	54872000	19.4936	7.2432	1193.8	113411	380	176400	74088000	20.4939	7.4889	1319.5	138544	420
381	145161	55306341	19.5192	7.2495	1196.9	114009	381	177241	74618461	20.5183	7.4948	1322.6	139205	421
382	145924	55742968	19.5448	7.2558	1200.1	114608	382	178084	75151448	20.5426	7.5007	1325.8	139867	422
383	146689	56181887	19.5704	7.2622	1203.2	115209	383	178929	75686967	20.5670	7.5067	1328.9	140531	423
384	147456	56623104	19.5959	7.2685	1206.4	115812	384	179776	76225024	20.5913	7.5126	1332.0	141196	424
385	148225	57066625	19.6214	7.2748	1209.5	116416	385	180625	76765625	20.6155	7.5185	1335.2	141863	425
386	148996	57512456	19.6469	7.2811	1212.7	117021	386	181476	77308776	20.6398	7.5244	1338.3	142531	426
387	149769	57960603	19.6723	7.2874	1215.8	117628	387	182329	77854483	20.6640	7.5302	1341.5	143201	427
388	150544	58411072	19.6977	7.2936	1218.9	118237	388	183184	78402752	20.6882	7.5361	1344.6	143872	428
389	151321	58863869	19.7231	7.2999	1222.1	118847	389	184041	78953589	20.7123	7.5420	1347.7	144545	429
390	152100	59319000	19.7484	7.3061	1225.2	119459	390	184900	79507000	20.7364	7.5478	1350.9	145220	430
391	152881	59776471	19.7737	7.3124	1228.4	120072	391	185761	80062991	20.7605	7.5537	1354.0	145896	431
392	153664	60236288	19.7990	7.3186	1231.5	120687	392	186624	80621568	20.7846	7.5595	1357.2	146574	432
393	154449	60698457	19.8242	7.3248	1234.6	121304	393	187489	81182737	20.8087	7.5654	1360.3	147254	433
394	155236	61162984	19.8494	7.3310	1237.8	121922	394	188356	81746504	20.8327	7.5712	1363.5	147934	434
395	156025	61629875	19.8746	7.3372	1240.9	122542	395	189225	82312875	20.8567	7.5770	1366.6	148617	435
396	156816	62099136	19.8997	7.3434	1244.1	123163	396	190096	82881856	20.8806	7.5828	1369.7	149301	436
397	157609	62570773	19.9249	7.3496	1247.2	123786	397	190969	83453453	20.9045	7.5886	1372.9	149987	437
398	158404	63044792	19.9499	7.3558	1250.4	124410	398	191844	84027672	20.9284	7.5944	1376.0	150674	438
399	159201	63521199	19.9750	7.3619	1253.5	125036	399	192721	84604519	20.9523	7.6001	1379.2	151363	439

TM684-131

TM684-130

No.	Square Feet	Cubo	Square Feet	Cubo Feet	No. = Bloms.		No.
					Chrom.	Area	
440	193600	85184000	20,9762	7,6059	1382.3	152053	440
441	194481	85766121	21,0000	7,6117	1385.4	152745	441
442	195364	86350888	21,0238	7,6174	1388.6	153439	442
443	196249	86938307	21,0476	7,6232	1391.7	154134	443
444	197136	87528384	21,0713	7,6289	1394.9	154830	444
445	198025	88121125	21,0950	7,6346	1398.0	155528	445
446	198916	88716536	21,1187	7,6403	1401.2	156228	446
447	199809	89314623	21,1424	7,6460	1404.3	156930	447
448	200704	89915392	21,1660	7,6517	1407.4	157633	448
449	201601	90518849	21,1896	7,6574	1410.6	158337	449
450	202500	91125000	21,2132	7,6631	1413.7	159043	450
451	203401	91733851	21,2368	7,6688	1416.9	159751	451
452	204304	92345408	21,2603	7,6744	1420.0	160460	452
453	205209	92959677	21,2838	7,6801	1423.1	161171	453
454	206116	93576664	21,3073	7,6857	1426.3	161883	454
455	207025	94196375	21,3307	7,6914	1429.4	162597	455
456	207936	94818816	21,3542	7,6970	1432.6	163313	456
457	208849	95443993	21,3776	7,7026	1435.7	164030	457
458	209764	96071912	21,4009	7,7082	1438.9	164748	458
459	210681	96702579	21,4243	7,7138	1442.0	165468	459
460	211600	97336000	21,4476	7,7194	1445.1	166190	460
461	212521	97972181	21,4709	7,7250	1448.3	166914	461
462	213444	98611128	21,4942	7,7306	1451.4	167639	462
463	214369	99252847	21,5174	7,7362	1454.6	168365	463
464	215296	99897344	21,5407	7,7418	1457.7	169093	464
465	216225	100544625	21,5639	7,7473	1460.8	169823	465
466	217156	101194696	21,5870	7,7529	1464.0	170554	466
467	218089	101847563	21,6102	7,7584	1467.1	171287	467
468	219024	102503232	21,6333	7,7639	1470.3	172021	468
469	219961	103161709	21,6564	7,7695	1473.4	172757	469
470	220900	103822000	21,6795	7,7750	1476.5	173494	470
471	221841	104487111	21,7025	7,7805	1479.7	174234	471
472	222784	105154048	21,7256	7,7860	1482.8	174974	472
473	223729	105823817	21,7486	7,7915	1486.0	175716	473
474	224676	106496424	21,7715	7,7970	1489.1	176460	474
475	225625	107171875	21,7945	7,8025	1492.3	177205	475
476	226576	107850176	21,8174	7,8079	1495.4	177952	476
477	227529	108533333	21,8403	7,8134	1498.5	178701	477
478	228484	109215352	21,8632	7,8188	1501.7	179451	478
479	229441	109902239	21,8861	7,8243	1504.8	180203	479
480	230400	110592000	21,9089	7,8297	1508.0	180958	480
481	231361	111284641	21,9317	7,8352	1511.1	181711	481
482	232324	111980168	21,9545	7,8406	1514.3	182467	482
483	233289	112678587	21,9773	7,8460	1517.4	183225	483
484	234256	113379904	22,0000	7,8514	1520.5	183984	484
485	235225	114084125	22,0227	7,8568	1523.7	184745	485
486	236196	114791256	22,0454	7,8622	1526.8	185508	486
487	237169	115501303	22,0681	7,8676	1530.0	186272	487
488	238144	116214272	22,0907	7,8730	1533.1	187038	488
489	239121	116930169	22,1133	7,8784	1536.2	187805	489
490	240100	117649000	22,1359	7,8837	1539.4	188574	490
491	241081	118370771	22,1585	7,8891	1542.5	189345	491
492	242064	119095488	22,1811	7,8944	1545.7	190117	492
493	243049	119823157	22,2036	7,8998	1548.8	190890	493
494	244036	120553784	22,2261	7,9051	1551.9	191665	494
495	245025	121287375	22,2486	7,9105	1555.1	192442	495
496	246016	122023936	22,2711	7,9158	1558.2	193221	496
497	247009	122763473	22,2935	7,9211	1561.4	194000	497
498	248004	123505992	22,3159	7,9264	1564.5	194782	498
499	249001	124251499	22,3383	7,9317	1567.7	195565	499
500	250000	125000000	22,3607	7,9370	1570.8	196350	500
501	251001	125751501	22,3830	7,9423	1573.9	197136	501
502	252004	126506008	22,4054	7,9476	1577.1	197923	502
503	253009	127263527	22,4277	7,9528	1580.2	198713	503
504	254016	128024064	22,4499	7,9581	1583.4	199504	504
505	255025	128787625	22,4722	7,9634	1586.5	200296	505
506	256036	129554216	22,4944	7,9686	1589.7	201090	506
507	257049	130323843	22,5167	7,9739	1592.8	201886	507
508	258064	131096512	22,5389	7,9791	1595.9	202683	508
509	259081	131872229	22,5610	7,9843	1599.1	203482	509
510	260100	132651000	22,5832	7,9896	1602.2	204282	510
511	261121	133432831	22,6053	7,9948	1605.4	205084	511
512	262144	134217728	22,6274	8,0000	1608.5	205887	512
513	263169	135005697	22,6495	8,0052	1611.6	206692	513
514	264196	135796744	22,6716	8,0104	1614.8	207499	514
515	265225	136590875	22,6936	8,0156	1617.9	208307	515
516	266256	137388096	22,7156	8,0208	1621.1	209117	516
517	267289	138188413	22,7376	8,0260	1624.2	209928	517
518	268324	138991832	22,7596	8,0311	1627.3	210741	518
519	269361	139798359	22,7816	8,0363	1630.5	211556	519

TM604-133

TM604-132

No.	Square	Cubo	Square Root	Cubo Root	No. = Diam.		No.	Square	Cubo	Square Root	Cubo Root	No. = Diam.		No.
					Circum.	Area						Circum.	Area	
520	270400	140608000	22.8035	8.0415	1633.6	212372	520	313600	175616000	23.6643	8.2426	1759.3	246301	560
521	271441	141420761	22.8254	8.0466	1636.8	213189	521	314721	176558481	23.6854	8.2475	1762.4	247181	561
522	272484	142236648	22.8473	8.0517	1639.9	214008	522	315844	177504328	23.7065	8.2524	1765.6	248063	562
523	273529	143055667	22.8692	8.0569	1643.1	214829	523	316969	178453547	23.7276	8.2573	1768.7	248947	563
524	274576	143877824	22.8910	8.0620	1646.2	215651	524	318096	179406144	23.7487	8.2621	1771.9	249832	564
525	275625	144703125	22.9129	8.0671	1649.3	216475	525	319225	180362125	23.7697	8.2670	1775.0	250719	565
526	276676	145531576	22.9347	8.0723	1652.5	217301	526	320356	181321496	23.7908	8.2719	1778.1	251607	566
527	277729	146363183	22.9565	8.0774	1655.6	218128	527	321489	182284263	23.8118	8.2768	1781.3	252497	567
528	278784	147197952	22.9783	8.0825	1658.8	218956	528	322624	183250432	23.8328	8.2816	1784.4	253388	568
529	279841	148035889	23.0000	8.0876	1661.9	219787	529	323761	184220009	23.8537	8.2865	1787.6	254281	569
530	280900	148877000	23.0217	8.0927	1665.0	220618	530	324900	185193000	23.8747	8.2913	1790.7	255176	570
531	281961	149721291	23.0434	8.0978	1668.2	221452	531	326041	186169411	23.8956	8.2962	1793.9	256072	571
532	283024	150568768	23.0651	8.1028	1671.3	222287	532	327184	187149248	23.9165	8.3010	1797.0	256970	572
533	284089	151419437	23.0868	8.1079	1674.5	223123	533	328329	188132517	23.9374	8.3059	1800.1	257869	573
534	285156	152273304	23.1084	8.1130	1677.6	223961	534	329476	189119224	23.9583	8.3107	1803.3	258770	574
535	286225	153130375	23.1301	8.1180	1680.8	224801	535	330625	190109375	23.9792	8.3155	1806.4	259672	575
536	287296	153990656	23.1517	8.1231	1683.9	225642	536	331776	191102976	24.0000	8.3203	1809.6	260576	576
537	288369	154854153	23.1733	8.1281	1687.0	226484	537	332929	192100033	24.0208	8.3251	1812.7	261482	577
538	289444	155720872	23.1948	8.1332	1690.2	227329	538	334084	193100552	24.0416	8.3300	1815.8	262389	578
539	290521	156590819	23.2164	8.1382	1693.3	228175	539	335241	194104539	24.0624	8.3348	1819.0	263298	579
540	291600	157464000	23.2379	8.1433	1696.5	229022	540	336400	195120000	24.0832	8.3396	1822.1	264208	580
541	292681	158340421	23.2594	8.1483	1699.6	229871	541	337561	196122941	24.1039	8.3443	1825.3	265120	581
542	293764	159220088	23.2809	8.1533	1702.7	230722	542	338724	197137368	24.1247	8.3491	1828.4	266033	582
543	294849	160103007	23.3024	8.1583	1705.9	231574	543	339889	198155287	24.1454	8.3539	1831.6	266948	583
544	295936	160989184	23.3238	8.1633	1709.0	232428	544	341056	199176704	24.1661	8.3587	1834.7	267865	584
545	297025	161878625	23.3452	8.1683	1712.2	233283	545	342225	200201625	24.1868	8.3634	1837.8	268783	585
546	298116	162771336	23.3666	8.1733	1715.3	234140	546	343396	201230056	24.2074	8.3682	1841.0	269701	586
547	299209	163667323	23.3880	8.1783	1718.5	234998	547	344569	202262003	24.2281	8.3730	1844.1	270624	587
548	300304	164566592	23.4094	8.1833	1721.6	235858	548	345744	203297472	24.2487	8.3777	1847.3	271547	588
549	301401	165469149	23.4307	8.1882	1724.7	236720	549	346921	204336469	24.2693	8.3825	1850.4	272471	589
550	302500	166375000	23.4521	8.1932	1727.9	237583	550	348100	205379000	24.2899	8.3872	1853.5	273397	590
551	303601	167284151	23.4734	8.1982	1731.0	238448	551	349281	206425071	24.3105	8.3919	1856.7	274325	591
552	304704	168196608	23.4947	8.2031	1734.2	239314	552	350464	207474688	24.3311	8.3967	1859.8	275254	592
553	305809	169112377	23.5160	8.2081	1737.3	240182	553	351649	208527857	24.3516	8.4014	1863.0	276184	593
554	306916	170031464	23.5372	8.2130	1740.4	241051	554	352836	209584584	24.3721	8.4061	1866.1	277117	594
555	308025	170953875	23.5584	8.2180	1743.6	241922	555	354025	210644875	24.3926	8.4108	1869.3	278051	595
556	309136	171879616	23.5797	8.2229	1746.7	242795	556	355216	211708736	24.4131	8.4155	1872.4	278986	596
557	310249	172808693	23.6008	8.2278	1749.9	243669	557	356409	212776173	24.4336	8.4202	1875.5	279923	597
558	311364	173741112	23.6220	8.2327	1753.0	244545	558	357604	213847192	24.4540	8.4249	1878.7	280862	598
559	312481	174676879	23.6432	8.2377	1756.2	245422	559	358801	214921799	24.4745	8.4296	1881.8	281802	599

No.	Square Feet	Cubic Feet	Square Feet	Cubic Feet	Sq. = Diam.		No.	Square Feet	Cubic Feet	Square Feet	Cubic Feet	Sq. = Diam.		No.
					Circum.	Area						Circum.	Area	
600	360000	216000000	24,4949	8,4343	1885.0	282743	600	409600	262144000	25,2982	8,6177	2010.6	321699	640
601	361201	217081801	24,5153	8,4390	1888.1	283687	601	410881	263374721	25,3180	8,6222	2013.8	322705	641
602	362404	218167208	24,5357	8,4437	1891.2	284631	602	412164	264609288	25,3377	8,6267	2016.9	323713	642
603	363609	219256227	24,5561	8,4484	1894.4	285578	603	413449	265847707	25,3574	8,6312	2020.0	324722	643
604	364816	220348864	24,5764	8,4530	1897.5	286526	604	414736	267089984	25,3772	8,6357	2023.2	325733	644
605	366025	221445125	24,5967	8,4577	1900.7	287475	605	416025	268336125	25,3969	8,6401	2026.3	326745	645
606	367236	222545016	24,6171	8,4623	1903.8	288426	606	417316	269586136	25,4165	8,6446	2029.5	327759	646
607	368449	223648543	24,6374	8,4670	1907.0	289379	607	418609	270840023	25,4362	8,6490	2032.6	328775	647
608	369664	224755712	24,6577	8,4716	1910.1	290333	608	419904	272097792	25,4558	8,6535	2035.8	329792	648
609	370881	225866529	24,6779	8,4763	1913.2	291289	609	421201	273359449	25,4755	8,6579	2038.9	330810	649
610	372100	226981000	24,6982	8,4809	1916.4	292247	610	422500	274625000	25,4951	8,6624	2042.0	331831	650
611	373321	228099131	24,7184	8,4856	1919.5	293206	611	423801	275894451	25,5147	8,6668	2045.2	332853	651
612	374544	229220928	24,7386	8,4902	1922.7	294166	612	425104	277167808	25,5343	8,6713	2048.3	333876	652
613	375769	230346397	24,7588	8,4948	1925.8	295128	613	426409	278445077	25,5539	8,6757	2051.5	334901	653
614	376996	231475544	24,7790	8,4994	1928.9	296092	614	427716	279726264	25,5734	8,6801	2054.6	335927	654
615	378225	232608375	24,7992	8,5040	1932.1	297057	615	429025	281011375	25,5930	8,6845	2057.7	336955	655
616	379456	233744896	24,8193	8,5086	1935.2	298024	616	430336	282300416	25,6125	8,6890	2060.9	337985	656
617	380689	234885113	24,8395	8,5132	1938.4	298992	617	431649	283593393	25,6320	8,6934	2064.0	339016	657
618	381924	236029032	24,8596	8,5178	1941.5	299962	618	432964	284890312	25,6515	8,6978	2067.2	340049	658
619	383161	237176659	24,8797	8,5224	1944.7	300934	619	434281	286191179	25,6710	8,7022	2070.3	341084	659
620	384400	238328000	24,8998	8,5270	1947.8	301907	620	435600	287496000	25,6905	8,7066	2073.5	342119	660
621	385641	239483061	24,9199	8,5316	1950.9	302882	621	436921	288804781	25,7099	8,7110	2076.6	343157	661
622	386884	240641848	24,9399	8,5462	1954.1	303858	622	438244	290117528	25,7294	8,7154	2079.7	344196	662
623	388129	241804367	24,9600	8,5408	1957.2	304836	623	439569	291434247	25,7488	8,7198	2082.9	345237	663
624	389376	242970624	24,9800	8,5453	1960.4	305815	624	440896	292754944	25,7682	8,7241	2086.0	346279	664
625	390625	244140625	25,0000	8,5499	1963.5	306796	625	442225	294079625	25,7876	8,7285	2089.2	347323	665
626	391876	245314376	25,0200	8,5544	1966.6	307779	626	443556	295408296	25,8070	8,7329	2092.3	348368	666
627	393129	246491883	25,0400	8,5590	1969.8	308763	627	444889	296740963	25,8263	8,7373	2095.4	349415	667
628	394384	247673152	25,0599	8,5635	1972.9	309748	628	446224	298077632	25,8457	8,7416	2098.6	350464	668
629	395641	248858189	25,0799	8,5681	1976.1	310736	629	447561	299418309	25,8650	8,7460	2101.7	351514	669
630	396900	250047000	25,0998	8,5726	1979.2	311725	630	448900	300763000	25,8844	8,7503	2104.9	352565	670
631	398161	251239591	25,1197	8,5772	1982.4	312715	631	450241	302111711	25,9037	8,7547	2108.0	353618	671
632	399424	252435968	25,1396	8,5817	1985.5	313707	632	451584	303464448	25,9230	8,7590	2111.2	354673	672
633	400689	253636137	25,1595	8,5862	1988.6	314700	633	452929	304821217	25,9422	8,7634	2114.3	355730	673
634	401956	254840104	25,1794	8,5907	1991.8	315696	634	454276	306182024	25,9615	8,7677	2117.4	356788	674
635	403225	256047875	25,1992	8,5952	1994.9	316692	635	455625	307546875	25,9808	8,7721	2120.6	357847	675
636	404496	257259456	25,2190	8,5997	1998.1	317690	636	456976	308915776	26,0000	8,7764	2123.7	358908	676
637	405769	258474853	25,2389	8,6043	2001.2	318690	637	458329	310288733	26,0192	8,7807	2126.9	359971	677
638	407044	259694072	24,2587	8,6088	2004.3	319692	638	459684	311665752	26,0384	8,7850	2130.0	361035	678
639	408321	260917119	25,2784	8,6132	2007.5	320695	639	461041	313046839	26,0576	8,7893	2133.1	362101	679

TM604-187

TM604-186

No.	Square Feet	Cube	Square Feet	Cube Feet	No. = Diam.		No.	Square Feet	Cube	Square Feet	Cube Feet	No. = Diam.		No.
					Circum.	Area						Circum.	Area	
680	462400	314432000	26.0768	8.7937	2136.3	363168	680	518400	373248000	26.8328	8.9628	2261.9	407150	720
681	463761	315821241	26.0960	8.7980	2139.4	364237	681	519841	374805361	26.8514	8.9670	2265.1	408282	721
682	465124	317214568	26.1151	8.8023	2142.6	365308	682	521284	376367048	26.8701	8.9711	2268.2	409416	722
683	466489	318611987	26.1343	8.8066	2145.7	366380	683	522729	377933067	26.8887	8.9752	2271.4	410550	723
684	467856	320013504	26.1534	8.8109	2148.9	367453	684	524176	379503424	26.9072	8.9794	2274.5	411687	724
685	469225	321419125	26.1725	8.8152	2152.0	368528	685	525625	381078125	26.9258	8.9835	2277.7	412825	725
686	470596	322828856	26.1916	8.8194	2155.1	369605	686	527076	382657176	26.9444	8.9876	2280.8	413965	726
687	471969	324242703	26.2107	8.8237	2158.3	370684	687	528529	384240583	26.9629	8.9918	2283.9	415106	727
688	473344	325660672	26.2298	8.8280	2161.4	371764	688	529984	385828352	26.9815	8.9959	2287.1	416248	728
689	474721	327082769	26.2488	8.8323	2164.6	372845	689	531441	387420489	27.0000	9.0000	2290.2	417393	729
690	476100	328509000	26.2679	8.8366	2167.7	373928	690	532900	389017000	27.0185	9.0041	2293.4	418539	730
691	477481	329939371	26.2869	8.8408	2170.8	375013	691	534361	390617891	27.0370	9.0082	2296.5	419686	731
692	478864	331373888	26.3059	8.8451	2174.0	376099	692	535824	392223168	27.0555	9.0123	2299.7	420835	732
693	480249	332812557	26.3249	8.8493	2177.1	377187	693	537289	393832837	27.0740	9.0164	2302.8	421986	733
694	481636	334255384	26.3439	8.8536	2180.3	378276	694	538756	395446904	27.0924	9.0205	2305.9	423138	734
695	483025	335702375	26.3629	8.8578	2183.4	379367	695	540225	397065375	27.1109	9.0246	2309.1	424293	735
696	484416	337153536	26.3818	8.8621	2186.6	380459	696	541696	398688256	27.1293	9.0287	2312.2	425448	736
697	485809	338608873	26.4008	8.8663	2189.7	381554	697	543169	400315553	27.1477	9.0328	2315.4	426604	737
698	487204	340068392	26.4197	8.8706	2192.8	382649	698	544644	401947272	27.1662	9.0369	2318.5	427762	738
699	488601	341532099	26.4386	8.8748	2196.0	383746	699	546121	403583419	27.1846	9.0410	2321.6	428922	739
700	490000	343000000	26.4575	8.8790	2199.1	384845	700	547600	405224000	27.2029	9.0450	2324.8	430084	740
701	491401	344472101	26.4764	8.8833	2202.3	385945	701	549081	406869021	27.2213	9.0491	2327.9	431247	741
702	492804	345948408	26.4953	8.8875	2205.4	387047	702	550564	408518488	27.2397	9.0532	2331.1	432412	742
703	494209	347428927	26.5141	8.8917	2208.5	388151	703	552049	410172407	27.2580	9.0572	2334.2	433578	743
704	495616	348913664	26.5330	8.8959	2211.7	389256	704	553536	411830784	27.2764	9.0613	2337.3	434746	744
705	497025	350402625	26.5518	8.9001	2214.8	390363	705	555025	413493625	27.2947	9.0654	2340.5	435916	745
706	498436	351895816	26.5707	8.9043	2218.0	391471	706	556516	415160936	27.3130	9.0694	2343.6	437087	746
707	499849	353393243	26.5895	8.9085	2221.1	392580	707	558009	416832723	27.3313	9.0735	2346.8	438259	747
708	501264	354894912	26.6083	8.9127	2224.3	393692	708	559504	418508992	27.3496	9.0775	2349.9	439433	748
709	502681	356400829	26.6271	8.9169	2227.4	394805	709	561001	420189749	27.3679	9.0816	2353.1	440609	749
710	504100	357911000	26.6458	8.9211	2230.5	395919	710	562500	421875000	27.3861	9.0856	2356.2	441786	750
711	505521	359425431	26.6646	8.9253	2233.7	397035	711	564001	423564751	27.4044	9.0896	2359.3	442965	751
712	506944	360944128	26.6833	8.9295	2236.8	398153	712	565504	425259008	27.4226	9.0937	2362.5	444146	752
713	508369	362467097	26.7021	8.9337	2240.0	399272	713	567009	426957777	27.4408	9.0977	2365.6	445328	753
714	509796	363994344	26.7208	8.9378	2243.1	400393	714	568516	428661064	27.4591	9.1017	2368.8	446511	754
715	511225	365525875	26.7395	8.9420	2246.2	401515	715	570025	430368875	27.4773	9.1057	2371.9	447697	755
716	512656	367061696	26.7582	8.9462	2249.4	402639	716	571536	432081216	27.4955	9.1098	2375.0	448883	756
717	514089	368601813	26.7769	8.9503	2252.5	403765	717	573049	433798093	27.5136	9.1138	2378.2	450072	757
718	515524	370146232	26.7955	8.9545	2255.7	404892	718	574564	435519512	27.5318	9.1178	2381.3	451262	758
719	516961	371694959	26.8142	8.9587	2258.8	406020	719	576081	437245479	27.5500	9.1218	2384.5	452453	759

TM604-139

TM604-138

No.	Square	Cubo	Square Root	Cubo Root	No. = Dimen.		No.	Square	Cubo	Square Root	Cubo Root	No. = Dimen.		No.
					Circum.	Area						Circum.	Area	
760	577600	438976000	27.5681	9.1258	2387.6	453646	760	640000	512000000	28.2843	9.2832	2513.3	502655	800
761	579121	440711081	27.5862	9.1298	2390.8	454841	761	641601	513922401	28.3019	9.2870	2516.4	503912	801
762	580644	442450728	27.6043	9.1338	2393.9	456037	762	643204	515849608	28.3196	9.2909	2519.6	505171	802
763	582169	444194947	27.6225	9.1378	2397.0	457234	763	644809	517781627	28.3373	9.2948	2522.7	506432	803
764	583696	445943744	27.6405	9.1418	2400.2	458434	764	646416	519718464	28.3549	9.2986	2525.8	507694	804
765	585225	447697125	27.6586	9.1458	2403.3	459635	765	648025	521660125	28.3725	9.3025	2529.0	508958	805
766	586756	449455096	27.6767	9.1498	2406.5	460837	766	649636	523606616	28.3901	9.3063	2532.1	510223	806
767	588289	451217663	27.6948	9.1537	2409.6	462042	767	651249	525557943	28.4077	9.3102	2535.3	511490	807
768	589824	452984832	27.7128	9.1577	2412.7	463247	768	652864	527514112	28.4253	9.3140	2538.4	512758	808
769	591361	454756609	27.7308	9.1617	2415.9	464454	769	654481	529475129	28.4429	9.3179	2541.5	514028	809
770	592900	456533000	27.7489	9.1657	2419.0	465663	770	656100	531441000	28.4605	9.3217	2544.7	515300	810
771	594441	458314011	27.7669	9.1696	2422.2	466873	771	657721	533411731	28.4781	9.3255	2547.8	516573	811
772	595984	460099648	27.7849	9.1736	2425.3	468085	772	659344	535387328	28.4956	9.3294	2551.0	517848	812
773	597529	461889917	27.8029	9.1775	2428.5	469298	773	660969	537367797	28.5132	9.3332	2554.1	519124	813
774	599076	463684824	27.8209	9.1815	2431.6	470513	774	662596	539353144	28.5307	9.3370	2557.3	520402	814
775	600625	465484375	27.8388	9.1855	2434.7	471730	775	664225	541343375	28.5482	9.3408	2560.4	521681	815
776	602176	467288576	27.8568	9.1894	2437.9	472948	776	665856	543338496	28.5657	9.3447	2563.5	522962	816
777	603729	469097433	27.8747	9.1933	2441.0	474168	777	667489	545338513	28.5832	9.3485	2566.7	524245	817
778	605284	470910952	27.8927	9.1973	2444.2	475389	778	669124	547343432	28.6007	9.3523	2569.8	525529	818
779	606841	472729139	27.9106	9.2012	2447.3	476612	779	670761	549353259	28.6182	9.3561	2573.0	526814	819
780	608400	474552000	27.9285	9.2052	2450.4	477836	780	672400	551368000	28.6356	9.3599	2576.1	528102	820
781	609961	476379541	27.9464	9.2091	2453.6	479062	781	674041	553387661	28.6531	9.3637	2579.2	529391	821
782	611524	478211768	27.9643	9.2130	2456.7	480290	782	675684	555412248	28.6705	9.3675	2582.4	530681	822
783	613089	480048687	27.9821	9.2170	2459.9	481519	783	677329	557441767	28.6880	9.3713	2585.5	531973	823
784	614656	481890304	28.0000	9.2209	2463.0	482750	784	678976	559476224	28.7054	9.3751	2588.7	533267	824
785	616225	483736625	28.0179	9.2248	2466.2	483982	785	680625	561515625	28.7228	9.3789	2591.8	534562	825
786	617796	485587656	28.0357	9.2287	2469.3	485216	786	682276	563559976	28.7402	9.3827	2595.0	535858	826
787	619369	487443403	28.0535	9.2326	2472.4	486451	787	683929	565609283	28.7576	9.3865	2598.1	537157	827
788	620944	489303872	28.0713	9.2365	2475.6	487688	788	685584	567663552	28.7750	9.3902	2601.2	538456	828
789	622521	491169069	28.0891	9.2404	2478.7	488927	789	687241	569722789	28.7924	9.3940	2604.4	539758	829
790	624100	493039000	28.1069	9.2443	2481.9	490167	790	688900	571787000	28.8097	9.3978	2607.5	541061	830
791	625681	494936711	28.1247	9.2482	2485.0	491409	791	690561	573856191	28.8271	9.4016	2610.7	542365	831
792	627264	496793088	28.1425	9.2521	2488.1	492652	792	692224	575930368	28.8444	9.4053	2613.8	543671	832
793	628849	498677257	28.1603	9.2560	2491.3	493897	793	693889	578009537	28.8617	9.4091	2616.9	544979	833
794	630436	500566184	28.1780	9.2599	2494.4	495143	794	695556	580093704	28.8791	9.4129	2620.1	546288	834
795	632025	502459875	28.1957	9.2638	2497.6	496391	795	697225	582182875	28.8964	9.4166	2623.2	547599	835
796	633616	504358336	28.2135	9.2677	2500.7	497641	796	698896	584277056	28.9137	9.4204	2626.4	548912	836
797	635209	506261573	28.2312	9.2716	2503.8	498892	797	700569	586376253	28.9310	9.4241	2629.5	550226	837
798	636804	508169592	28.2489	9.2754	2507.0	500145	798	702244	588480472	28.9482	9.4279	2632.7	551541	838
799	638401	510082399	28.2666	9.2793	2510.1	501399	799	703921	590589719	28.9655	9.4316	2635.8	552858	839

TM684-141

TM684-140

No.	Square	Cube	Square Foot	Cube Foot	No. = Diam.		No.	Square	Cube	Square Foot	Cube Foot	No. = Diam.		No.
					Circum.	Area						Circum.	Area	
840	705600	592704000	28.9828	9.4354	2638.9	554177	840	774400	681472000	29.6648	9.5828	2764.6	608212	880
841	707281	594823321	29.0000	9.4391	2642.1	555497	841	776161	683797841	29.6816	9.5865	2767.7	609595	881
842	708964	596947688	29.0172	9.4429	2645.2	556819	842	777924	686128968	29.6985	9.5901	2770.9	610980	882
843	710649	599077107	29.0345	9.4466	2648.4	558142	843	779689	688465387	29.7153	9.5937	2774.0	612366	883
844	712336	601211584	29.0517	9.4503	2651.5	559465	844	781456	690807104	29.7321	9.5973	2777.2	613754	884
845	714025	603351125	29.0689	9.4541	2654.6	560794	845	783225	693154125	29.7489	9.6010	2780.3	615143	885
846	715716	605495736	29.0861	9.4578	2657.8	562122	846	784996	695506456	29.7658	9.6046	2783.5	616534	886
847	717409	607645423	29.1033	9.4615	2660.9	563452	847	786769	697864103	29.7825	9.6082	2786.6	617927	887
848	719104	609800192	29.1204	9.4652	2664.1	564783	848	788544	700227072	29.7993	9.6118	2789.7	619321	888
849	720801	611960049	29.1376	9.4690	2667.2	566116	849	790321	702595369	29.8161	9.6154	2792.9	620717	889
850	722500	614121500	29.1548	9.4727	2670.4	567450	850	792100	704969000	29.8329	9.6190	2796.0	622114	890
851	724201	616295051	29.1719	9.4764	2673.5	568786	851	793881	707347971	29.8496	9.6226	2799.2	623513	891
852	725904	618470208	29.1890	9.4801	2676.6	570124	852	795664	709732288	29.8664	9.6262	2802.3	624913	892
853	727609	620650477	29.2062	9.4838	2679.8	571463	853	797449	712121957	29.8831	9.6298	2805.4	626315	893
854	729316	622835864	29.2233	9.4875	2682.9	572803	854	799236	714516984	29.8998	9.6334	2808.6	627718	894
855	731025	625026375	29.2404	9.4912	2686.1	574146	855	801025	716917375	29.9166	9.6370	2811.7	629124	895
856	732736	627222016	29.2575	9.4949	2689.2	575490	856	802816	719322336	29.9333	9.6406	2814.9	630530	896
857	734449	629422793	29.2746	9.4986	2692.3	576835	857	804609	721734273	29.9500	9.6442	2818.0	631938	897
858	736164	631628712	29.2916	9.5023	2695.5	578182	858	806404	724150792	29.9666	9.6477	2821.2	633348	898
859	737881	633839779	29.3087	9.5060	2698.6	579530	859	808201	726572699	29.9833	9.6513	2824.3	634760	899
860	739600	636056000	29.3258	9.5097	2701.8	580880	860	810000	729000000	30.0000	9.6549	2827.4	636173	900
861	741321	638277381	29.3428	9.5134	2704.9	582232	861	811801	731432701	30.0167	9.6585	2830.6	637587	901
862	743044	640503928	29.3598	9.5171	2708.1	583585	862	813604	733870808	30.0333	9.6620	2833.7	639003	902
863	744769	642735647	29.3769	9.5207	2711.2	584940	863	815409	736314327	30.0500	9.6656	2836.9	640421	903
864	746496	644972544	29.3939	9.5244	2714.3	586297	864	817216	738763264	30.0666	9.6692	2840.0	641840	904
865	748225	647214625	29.4109	9.5281	2717.5	587655	865	819025	741217625	30.0832	9.6727	2843.1	643261	905
866	749956	649461896	29.4279	9.5317	2720.6	589014	866	820836	743677416	30.0998	9.6763	2846.3	644683	906
867	751689	651714363	29.4449	9.5354	2723.8	590375	867	822649	746142643	30.1164	9.6799	2849.4	646107	907
868	753424	653972032	29.4618	9.5391	2726.9	591738	868	824464	748613312	30.1330	9.6834	2852.6	647533	908
869	755161	656234909	29.4788	9.5427	2730.0	593102	869	826281	751089429	30.1496	9.6870	2855.7	648960	909
870	756900	658503000	29.4958	9.5464	2733.2	594468	870	828100	753571000	30.1662	9.6905	2858.8	650388	910
871	758641	660776311	29.5127	9.5501	2736.3	595835	871	829921	756058031	30.1828	9.6941	2862.0	651818	911
872	760384	663054848	29.5296	9.5537	2739.5	597204	872	831744	758550528	30.1993	9.6976	2865.1	653250	912
873	762129	665338617	29.5466	9.5574	2742.6	598575	873	833569	761048497	30.2159	9.7012	2868.3	654684	913
874	763876	667627624	29.5635	9.5610	2745.8	599947	874	835396	763551944	30.2324	9.7047	2871.4	656118	914
875	765625	669921875	29.5804	9.5647	2748.9	601320	875	837225	766060875	30.2490	9.7082	2874.6	657555	915
876	767376	67221376	29.5973	9.5683	2752.0	602696	876	839056	768575296	30.2655	9.7118	2877.7	658993	916
877	769129	674526133	29.6142	9.5719	2755.2	604073	877	840889	771095213	30.2820	9.7153	2880.8	660433	917
878	770884	676836152	29.6311	9.5756	2758.3	605451	878	842724	773620632	30.2985	9.7188	2884.0	661874	918
879	772641	679151439	29.6479	9.5792	2761.5	606831	879	844561	776151559	30.3150	9.7224	2887.1	663317	919

TM684-143

TM684-142

No.	Square	Cube	Square Root	Cube Root	No. = Dimm.		No.	Square	Cube	Square Root	Cube Root	No. = Dimm.		No.	
					Circum.	Area						Circum.	Area		
920	846400	778688000	30.3315	9.7259	2890.3	664761	920	960	921600	884736000	30.9839	9.8648	3015.9	723823	960
921	848241	781229961	30.3480	9.7294	2893.4	665207	921	961	923521	887503681	31.0000	9.8683	3019.1	725332	961
922	850084	783777448	30.3645	9.7329	2896.5	667654	922	962	925444	890277128	31.0161	9.8717	3022.2	726842	962
923	851929	786330467	30.3809	9.7364	2899.7	669103	923	963	927369	893056347	31.0322	9.8751	3025.4	728354	963
924	853776	788889024	30.3974	9.7400	2902.8	670554	924	964	929296	895841344	31.0483	9.8785	3028.5	729867	964
925	855625	791453125	30.4138	9.7435	2906.0	672006	925	965	931225	898632125	31.0644	9.8819	3031.6	731382	965
926	857476	794022776	30.4302	9.7470	2909.1	673460	926	966	933156	901428696	31.0805	9.8854	3034.8	732899	966
927	859329	796597983	30.4467	9.7505	2912.3	674913	927	967	935089	904231063	31.0966	9.8888	3037.9	734417	967
928	861184	799178752	30.4631	9.7540	2915.4	676372	928	968	937024	907039232	31.1127	9.8922	3041.1	735937	968
929	863041	801765089	30.4795	9.7575	2918.5	677831	929	969	938961	909853209	31.1288	9.8956	3044.2	737458	969
930	864900	804357000	30.4959	9.7610	2921.7	679291	930	970	940900	912673000	31.1448	9.8990	3047.3	738981	970
931	866761	806954491	30.5123	9.7645	2924.8	680752	931	971	942841	915498611	31.1609	9.9024	3050.5	740506	971
932	868624	809557568	30.5287	9.7680	2928.0	682216	932	972	944784	918330048	31.1769	9.9058	3053.6	742032	972
933	870489	812166237	30.5450	9.7715	2931.1	683680	933	973	945729	921167317	31.1929	9.9092	3056.8	743559	973
934	872356	814780504	30.5614	9.7750	2934.2	685147	934	974	948676	924010424	31.2090	9.9126	3059.9	745088	974
935	874225	817400375	30.5778	9.7785	2937.4	686615	935	975	950625	926859375	31.2250	9.9160	3063.1	746619	975
936	876096	820025856	30.5941	9.7819	2940.5	688084	936	976	952576	929714176	31.2410	9.9194	3066.2	748151	976
937	877969	822656953	30.6105	9.7854	2943.7	689555	937	977	954529	932574833	31.2570	9.9227	3069.3	749685	977
938	879844	825293672	30.6268	9.7889	2946.8	691028	938	978	956484	935441352	31.2730	9.9261	3072.5	751221	978
939	881721	827936019	30.6431	9.7924	2950.0	692502	939	979	958441	938313739	31.2890	9.9295	3075.6	752758	979
940	883600	830584000	30.6594	9.7959	2953.1	693978	940	980	960400	941192000	31.3050	9.9329	3078.8	754296	980
941	885481	833237621	30.6757	9.7993	2956.2	695455	941	981	962361	944076141	31.3209	9.9363	3081.9	755837	981
942	887364	835896888	30.6920	9.8028	2959.4	696934	942	982	964324	946966168	31.3369	9.9396	3085.0	757378	982
943	889249	838561807	30.7083	9.8063	2962.5	698415	943	983	966289	949862087	31.3528	9.9430	3088.2	758922	983
944	891136	841232384	30.7246	9.8097	2965.7	699897	944	984	968256	952763904	31.3688	9.9464	3091.3	760466	984
945	893025	843908625	30.7409	9.8132	2968.8	701380	945	985	970225	955671625	31.3847	9.9497	3094.5	762013	985
946	894916	846590536	30.7571	9.8167	2971.9	702865	946	986	972196	958585256	31.4006	9.9531	3097.6	763561	986
947	896809	849278123	30.7733	9.8201	2975.1	704352	947	987	974169	961504803	31.4166	9.9565	3100.8	765111	987
948	898704	851971392	30.7896	9.8236	2978.2	705840	948	988	976144	964430272	31.4325	9.9598	3103.9	766662	988
949	900600	854670349	30.8058	9.8270	2981.4	707330	949	989	978121	967361669	31.4484	9.9632	3107.0	768214	989
950	902500	857375000	30.8221	9.8305	2984.5	708822	950	990	980100	970299000	31.4643	9.9666	3110.2	769769	990
951	904401	860083531	30.8383	9.8339	2987.7	710315	951	991	982081	973242271	31.4802	9.9699	3113.3	771325	991
952	906304	862801408	30.8545	9.8374	2990.8	711809	952	992	984064	976191488	31.4960	9.9733	3116.5	772882	992
953	908209	865523177	30.8707	9.8408	2993.9	713306	953	993	986049	979146657	31.5119	9.9766	3119.6	774441	993
954	910116	868250664	30.8869	9.8443	2997.1	714803	954	994	988036	982107784	31.5278	9.9800	3122.7	776002	994
955	912025	870983875	30.9031	9.8477	3000.2	716303	955	995	990025	985074875	31.5436	9.9833	3125.9	777564	995
956	913936	873722816	30.9192	9.8511	3003.4	717804	956	996	992016	988047936	31.5595	9.9866	3129.0	779128	996
957	915849	876467493	30.9354	9.8546	3006.5	719306	957	997	994009	991026973	31.5753	9.9900	3132.2	780693	997
958	917764	879217912	30.9516	9.8580	3009.6	720810	958	998	996004	994011992	31.5911	9.9933	3135.3	782260	998
959	919681	881974079	30.9677	9.8614	3012.8	722316	959	999	998001	997002999	31.6070	9.9967	3138.5	783828	999

TM684-145

TM684-144

2. Common Logarithms

N	0	1	2	3	4	5	6	7	8	9	c.d.
55	7404	7412	7419	7427	7435	7443	7451	7459	7466	7474	.8
56	7482	7490	7497	7505	7513	7520	7528	7536	7543	7551	.8
57	7559	7566	7574	7582	7589	7597	7604	7612	7619	7627	.8
58	7634	7642	7649	7657	7664	7672	7679	7686	7694	7701	.7
59	7709	7716	7723	7731	7738	7745	7752	7760	7767	7774	.7
60	7782	7789	7796	7803	7810	7818	7825	7832	7839	7846	.7
61	7853	7860	7868	7875	7882	7889	7896	7903	7910	7917	.7
62	7924	7931	7938	7945	7952	7959	7966	7973	7980	7987	.7
63	7993	8000	8007	8014	8021	8028	8035	8041	8048	8055	.7
64	8062	8069	8075	8082	8089	8096	8103	8109	8116	8122	.7
65	8129	8136	8142	8149	8156	8162	8169	8176	8182	8189	.7
66	8195	8202	8209	8215	8222	8228	8235	8241	8248	8254	.7
67	8261	8267	8274	8280	8287	8293	8299	8306	8312	8319	.6
68	8325	8331	8338	8344	8351	8357	8363	8370	8376	8382	.6
69	8388	8395	8401	8407	8414	8420	8426	8432	8439	8445	.6
70	8451	8457	8563	8470	8476	8482	8488	8494	8500	8506	.6
71	8513	8519	8525	8531	8537	8543	8549	8555	8561	8567	.6
72	8573	8579	8585	8591	8597	8603	8609	8615	8621	8627	.6
73	8633	8639	8645	8651	8657	8663	8669	8675	8681	8686	.6
74	8692	8698	8704	8710	8716	8722	8727	8733	8739	8745	.6
75	8751	8756	8762	8768	8774	8779	8785	8791	8797	8802	.6
76	8808	8814	8820	8825	8831	8837	8842	8848	8854	8859	.6
77	8865	8871	8876	8882	8887	8893	8899	8904	8910	8915	.6
78	8921	8927	8932	8938	8943	8949	8954	8960	8965	8971	.6
79	8976	8982	8987	8993	8998	9004	9009	9015	9020	9025	.5
80	9031	9036	9042	9047	9053	9058	9063	9069	9074	9079	.5
81	9085	9090	9096	9101	9106	9112	9117	9122	9128	9133	.5
82	9138	9143	9149	9154	9159	9165	9170	9175	9180	9186	.5
83	9191	9196	9201	9206	9212	9217	9222	9227	9232	9238	.5
84	9243	9248	9253	9258	9263	9269	9274	9279	9284	9289	.5
85	9294	9299	9304	9309	9315	9320	9325	9330	9335	9340	.5
86	9345	9350	9355	9360	9365	9370	9375	9380	9385	9390	.5
87	9395	9400	9405	9410	9415	9420	9425	9430	9435	9440	.5
88	9445	9450	9455	9460	9465	9470	9475	9480	9485	9490	.5
89	9494	9499	9504	9509	9513	9518	9523	9528	9533	9538	.5
90	9542	9547	9552	9557	9562	9566	9571	9576	9581	9586	.5
91	9590	9595	9600	9605	9609	9614	9619	9624	9628	9633	.5
92	9638	9643	9647	9652	9657	9661	9666	9671	9675	9680	.5
93	9685	9689	9694	9699	9703	9708	9713	9717	9722	9727	.5
94	9731	9736	9741	9745	9750	9754	9759	9763	9768	9773	.5
95	9777	9782	9786	9791	9795	9800	9805	9809	9814	9818	.5
96	9823	9827	9832	9836	9841	9845	9850	9854	9859	9863	.5
97	9868	9872	9877	9881	9886	9890	9894	9899	9903	9908	.4
98	9912	9917	9921	9926	9930	9934	9939	9943	9948	9952	.4
99	9956	9961	9965	9969	9974	9978	9983	9987	9991	9996	.4

TM684-147

N	0	1	2	3	4	5	6	7	8	9	c.d.
10	0000	0043	0086	0128	0170	0212	0253	0294	0334	0374	4.2
11	0414	0453	0492	0531	0569	0607	0645	0682	0719	0755	3.8
12	0792	0828	0864	0899	0934	0969	1004	1038	1072	1106	3.5
13	1139	1173	1206	1239	1271	1303	1335	1367	1399	1430	3.2
14	1461	1492	1523	1553	1584	1614	1644	1673	1703	1732	3.0
15	1761	1790	1818	1847	1875	1903	1931	1959	1987	2014	2.8
16	2041	2068	2095	2122	2148	2175	2201	2227	2253	2279	2.6
17	2304	2330	2355	2380	2405	2430	2455	2480	2504	2529	2.5
18	2553	2577	2601	2625	2648	2672	2695	2718	2742	2765	2.4
19	2788	2810	2833	2856	2878	2900	2923	2945	2967	2989	2.2
20	3010	3032	3054	3075	3096	3118	3139	3160	3181	3201	2.1
21	3222	3243	3263	3284	3304	3324	3345	3365	3385	3404	2.0
22	3424	3444	3464	3483	3502	3522	3541	3560	3579	3598	1.9
23	3617	3636	3655	3674	3692	3711	3729	3747	3766	3784	1.8
24	3802	3820	3838	3856	3874	3892	3909	3927	3945	3962	1.8
25	3979	3997	4014	4031	4048	4065	4082	4099	4116	4133	1.7
26	4150	4166	4183	4200	4216	4232	4249	4265	4281	4298	1.6
27	4314	4330	4346	4362	4378	4393	4409	4425	4440	4456	1.6
28	4472	4487	4502	4518	4533	4548	4564	4579	4594	4609	1.5
29	4624	4639	4654	4669	4683	4698	4713	4728	4742	4757	1.5
30	4771	4786	4800	4814	4829	4843	4857	4871	4886	4900	1.4
31	4914	4928	4942	4955	4969	4983	4997	5011	5024	5038	1.4
32	5051	5065	5079	5092	5105	5119	5132	5145	5159	5172	1.3
33	5185	5198	5211	5224	5237	5250	5263	5276	5289	5302	1.3
34	5315	5328	5340	5353	5366	5378	5391	5403	5416	5428	1.3
35	5441	5453	5465	5478	5490	5502	5514	5527	5539	5551	1.2
36	5563	5575	5587	5599	5611	5623	5635	5647	5658	5670	1.2
37	5682	5694	5705	5717	5729	5740	5752	5763	5775	5786	1.2
38	5798	5809	5821	5832	5843	5855	5866	5877	5888	5899	1.1
39	5911	5922	5933	5944	5955	5966	5977	5988	5999	6010	1.1
40	6021	6031	6042	6053	6064	6075	6085	6096	6107	6117	1.1
41	6128	6138	6149	6160	6170	6180	6191	6201	6212	6222	1.0
42	6232	6243	6253	6263	6274	6284	6294	6304	6314	6325	1.0
43	6335	6345	6355	6365	6375	6385	6395	6405	6415	6425	1.0
44	6435	6444	6454	6464	6474	6484	6493	6503	6513	6522	1.0
45	6532	6542	6551	6561	6571	6580	6590	6599	6609	6618	1.0
46	6628	6637	6646	6656	6665	6675	6684	6693	6702	6712	.9
47	6721	6730	6739	6749	6758	6767	6776	6785	6794	6803	.9
48	6812	6821	6830	6839	6848	6857	6866	6875	6884	6893	.9
49	6902	6911	6920	6928	6937	6946	6955	6964	6972	6981	.9
50	6990	6998	7007	7016	7024	7033	7042	7050	7059	7067	.9
51	7076	7084	7093	7101	7110	7118	7126	7135	7143	7152	.8
52	7160	7168	7177	7185	7193	7202	7210	7218	7226	7235	.8
53	7243	7251	7259	7267	7275	7284	7292	7300	7308	7316	.8
54	7324	7332	7340	7348	7356	7364	7372	7380	7388	7396	.8

TM684-146

/	0°		1°		2°		3°		4°		/
	Sine	Cosin	Sine	Cosin	Sine	Cosin	Sine	Cosin	Sine	Cosin	
0	.00000	One.	.01745	.99985	.03490	.99939	.05234	.99863	.06976	.99756	60
1	.00029	One.	.01774	.99984	.03519	.99938	.05263	.99861	.07005	.99754	59
2	.00058	One.	.01803	.99984	.03548	.99937	.05292	.99860	.07034	.99752	58
3	.00087	One.	.01832	.99983	.03577	.99936	.05321	.99858	.07063	.99750	57
4	.00116	One.	.01862	.99983	.03606	.99935	.05350	.99857	.07092	.99748	56
5	.00145	One.	.01891	.99982	.03635	.99934	.05379	.99855	.07121	.99746	55
6	.00175	One.	.01920	.99982	.03664	.99933	.05408	.99854	.07150	.99744	54
7	.00204	One.	.01949	.99981	.03693	.99932	.05437	.99852	.07179	.99742	53
8	.00233	One.	.01978	.99980	.03723	.99931	.05466	.99851	.07208	.99740	52
9	.00262	One.	.02007	.99980	.03752	.99930	.05495	.99849	.07237	.99738	51
10	.00291	One.	.02036	.99979	.03781	.99929	.05524	.99847	.07266	.99736	50
11	.00320	.99999	.02065	.99979	.03810	.99927	.05553	.99846	.07295	.99734	49
12	.00349	.99999	.02094	.99978	.03839	.99926	.05582	.99844	.07324	.99731	48
13	.00378	.99999	.02123	.99977	.03868	.99925	.05611	.99842	.07353	.99729	47
14	.00407	.99999	.02152	.99977	.03897	.99924	.05640	.99841	.07382	.99727	46
15	.00436	.99999	.02181	.99976	.03926	.99923	.05669	.99839	.07411	.99725	45
16	.00465	.99999	.02211	.99976	.03955	.99922	.05698	.99838	.07440	.99723	44
17	.00495	.99999	.02240	.99975	.03984	.99921	.05727	.99836	.07469	.99721	43
18	.00524	.99999	.02269	.99974	.04013	.99919	.05756	.99834	.07498	.99719	42
19	.00553	.99998	.02298	.99974	.04042	.99918	.05785	.99833	.07527	.99716	41
20	.00582	.99998	.02327	.99973	.04071	.99917	.05814	.99831	.07556	.99714	40
21	.00611	.99998	.02356	.99972	.04100	.99916	.05844	.99829	.07585	.99712	39
22	.00640	.99998	.02385	.99972	.04129	.99915	.05873	.99827	.07614	.99710	38
23	.00669	.99998	.02414	.99971	.04159	.99913	.05902	.99826	.07643	.99708	37
24	.00698	.99998	.02443	.99970	.04188	.99912	.05931	.99824	.07672	.99705	36
25	.00727	.99997	.02472	.99969	.04217	.99911	.05960	.99822	.07701	.99703	35
26	.00756	.99997	.02501	.99969	.04246	.99910	.05989	.99821	.07730	.99701	34
27	.00785	.99997	.02530	.99968	.04275	.99909	.06018	.99819	.07759	.99699	33
28	.00814	.99997	.02560	.99967	.04304	.99907	.06047	.99817	.07788	.99696	32
29	.00844	.99996	.02589	.99966	.04333	.99906	.06076	.99815	.07817	.99694	31
30	.00873	.99996	.02618	.99966	.04362	.99905	.06105	.99813	.07846	.99692	30
31	.00902	.99996	.02647	.99965	.04391	.99904	.06134	.99812	.07875	.99689	29
32	.00931	.99996	.02676	.99964	.04420	.99902	.06163	.99810	.07904	.99687	28
33	.00960	.99995	.02705	.99963	.04449	.99901	.06192	.99808	.07933	.99685	27
34	.00989	.99995	.02734	.99963	.04478	.99900	.06221	.99806	.07962	.99683	26
35	.01018	.99995	.02763	.99962	.04507	.99898	.06250	.99804	.07991	.99680	25
36	.01047	.99995	.02792	.99961	.04536	.99897	.06279	.99803	.08020	.99678	24
37	.01076	.99994	.02821	.99960	.04565	.99896	.06308	.99801	.08049	.99676	23
38	.01105	.99994	.02850	.99959	.04594	.99894	.06337	.99799	.08078	.99673	22
39	.01134	.99994	.02879	.99959	.04623	.99893	.06366	.99797	.08107	.99671	21
40	.01164	.99993	.02908	.99958	.04653	.99892	.06395	.99795	.08136	.99668	20
41	.01193	.99993	.02938	.99957	.04682	.99890	.06424	.99793	.08165	.99666	19
42	.01222	.99993	.02967	.99956	.04711	.99889	.06453	.99792	.08194	.99664	18
43	.01251	.99992	.02996	.99955	.04740	.99888	.06482	.99790	.08223	.99661	17
44	.01280	.99992	.03025	.99954	.04769	.99886	.06511	.99788	.08252	.99659	16
45	.01309	.99991	.03054	.99953	.04798	.99885	.06540	.99786	.08281	.99657	15
46	.01338	.99991	.03083	.99952	.04827	.99883	.06569	.99784	.08310	.99654	14
47	.01367	.99991	.03112	.99952	.04856	.99882	.06598	.99782	.08339	.99652	13
48	.01396	.99990	.03141	.99951	.04885	.99881	.06627	.99780	.08368	.99649	12
49	.01425	.99990	.03170	.99950	.04914	.99879	.06656	.99778	.08397	.99647	11
50	.01454	.99989	.03199	.99949	.04943	.99878	.06685	.99776	.08426	.99644	10
51	.01483	.99989	.03228	.99948	.04972	.99876	.06714	.99774	.08455	.99642	9
52	.01513	.99989	.03257	.99947	.05001	.99875	.06743	.99772	.08484	.99639	8
53	.01542	.99988	.03286	.99946	.05030	.99873	.06773	.99770	.08513	.99637	7
54	.01571	.99988	.03316	.99945	.05059	.99872	.06802	.99768	.08542	.99635	6
55	.01600	.99987	.03345	.99944	.05088	.99870	.06831	.99766	.08571	.99632	5
56	.01629	.99987	.03374	.99943	.05117	.99869	.06860	.99764	.08600	.99630	4
57	.01658	.99986	.03403	.99942	.05146	.99867	.06889	.99762	.08629	.99627	3
58	.01687	.99986	.03432	.99941	.05175	.99866	.06918	.99760	.08658	.99625	2
59	.01716	.99985	.03461	.99940	.05205	.99864	.06947	.99758	.08687	.99622	1
60	.01745	.99985	.03490	.99939	.05234	.99863	.06976	.99756	.08716	.99619	0
/	Cosin	Sine	Cosin	Sine	Cosin	Sine	Cosin	Sine	Cosin	Sine	/
	89°		88°		87°		86°		85°		

TM684-148

AOO 446A

/	5°		6°		7°		8°		9°		10°		11°		12°		13°		14°	
	Sine	Cosine	Sine	Cosine	Sine	Cosine	Sine	Cosine	Sine	Cosine	Sine	Cosine	Sine	Cosine	Sine	Cosine	Sine	Cosine	Sine	Cosine
0	.08716	.99619	.10453	.99452	.12187	.99251	.13917	.99027	.15643	.98769	.17365	.98481	.19081	.98163	.20791	.97815	.22495	.97437	.24192	.97030
1	.08745	.99617	.10482	.99449	.12216	.99251	.13946	.99023	.15672	.98764	.17393	.98476	.19108	.98157	.20820	.97803	.22523	.97430	.24220	.97029
2	.08774	.99614	.10511	.99443	.12245	.99248	.14004	.99015	.15701	.98755	.17422	.98466	.19138	.98140	.20857	.97797	.22552	.97424	.24249	.97015
3	.08803	.99611	.10540	.99437	.12274	.99244	.14033	.99001	.15728	.98751	.17451	.98461	.19165	.98135	.20886	.97791	.22580	.97411	.24275	.97008
4	.08832	.99607	.10569	.99430	.12303	.99239	.14062	.98987	.15755	.98746	.17474	.98455	.19192	.98120	.20915	.97784	.22608	.97404	.24303	.96994
5	.08861	.99604	.10598	.99423	.12332	.99234	.14091	.98973	.15782	.98741	.17497	.98448	.19220	.98105	.20944	.97778	.22637	.97398	.24329	.96987
6	.08890	.99600	.10627	.99416	.12361	.99229	.14120	.98959	.15810	.98736	.17526	.98435	.19249	.98091	.20973	.97772	.22665	.97392	.24355	.96980
7	.08919	.99596	.10656	.99409	.12390	.99224	.14149	.98945	.15838	.98731	.17561	.98420	.19278	.98076	.21002	.97766	.22693	.97384	.24381	.96973
8	.08948	.99592	.10685	.99402	.12419	.99219	.14178	.98931	.15866	.98726	.17596	.98405	.19307	.98061	.21031	.97760	.22721	.97378	.24407	.96966
9	.08977	.99588	.10714	.99395	.12448	.99214	.14207	.98917	.15894	.98721	.17631	.98390	.19336	.98045	.21060	.97754	.22750	.97372	.24433	.96959
10	.09006	.99584	.10743	.99388	.12477	.99209	.14236	.98903	.15922	.98716	.17660	.98375	.19365	.98030	.21089	.97748	.22778	.97366	.24459	.96952
11	.09035	.99580	.10772	.99381	.12506	.99204	.14265	.98889	.15950	.98711	.17689	.98360	.19394	.98015	.21118	.97742	.22807	.97360	.24485	.96945
12	.09064	.99576	.10801	.99374	.12535	.99199	.14294	.98875	.15978	.98706	.17718	.98341	.19423	.98000	.21147	.97736	.22835	.97354	.24511	.96938
13	.09093	.99572	.10830	.99367	.12564	.99194	.14323	.98861	.16006	.98701	.17747	.98322	.19452	.97985	.21176	.97730	.22863	.97348	.24537	.96931
14	.09122	.99568	.10859	.99360	.12593	.99189	.14352	.98847	.16035	.98696	.17776	.98303	.19481	.97970	.21205	.97724	.22891	.97342	.24563	.96924
15	.09151	.99564	.10888	.99353	.12622	.99184	.14381	.98833	.16064	.98691	.17805	.98284	.19510	.97955	.21234	.97718	.22919	.97336	.24589	.96917
16	.09180	.99560	.10917	.99346	.12651	.99179	.14410	.98819	.16093	.98686	.17834	.98265	.19539	.97940	.21263	.97712	.22947	.97330	.24615	.96910
17	.09209	.99556	.10946	.99339	.12680	.99174	.14439	.98805	.16122	.98681	.17863	.98246	.19568	.97925	.21292	.97706	.22975	.97324	.24641	.96903
18	.09238	.99552	.10975	.99332	.12709	.99169	.14468	.98791	.16151	.98676	.17892	.98227	.19597	.97910	.21321	.97700	.23003	.97318	.24667	.96896
19	.09267	.99548	.11004	.99325	.12738	.99164	.14497	.98777	.16180	.98671	.17921	.98208	.19626	.97895	.21350	.97694	.23031	.97312	.24693	.96889
20	.09296	.99544	.11033	.99318	.12767	.99159	.14526	.98763	.16208	.98666	.17950	.98194	.19655	.97880	.21379	.97688	.23059	.97306	.24719	.96882
21	.09325	.99540	.11062	.99311	.12796	.99154	.14555	.98749	.16237	.98661	.17979	.98179	.19684	.97865	.21408	.97682	.23087	.97300	.24745	.96875
22	.09354	.99536	.11091	.99304	.12825	.99149	.14584	.98735	.16266	.98656	.18008	.98164	.19713	.97850	.21437	.97676	.23115	.97294	.24771	.96868
23	.09383	.99532	.11120	.99297	.12854	.99144	.14613	.98721	.16295	.98651	.18037	.98150	.19742	.97835	.21466	.97670	.23143	.97288	.24797	.96861
24	.09412	.99528	.11149	.99290	.12883	.99139	.14642	.98707	.16324	.98646	.18066	.98135	.19771	.97820	.21495	.97664	.23171	.97282	.24823	.96854
25	.09441	.99524	.11178	.99283	.12912	.99134	.14671	.98693	.16353	.98641	.18095	.98120	.19800	.97805	.21524	.97658	.23199	.97276	.24849	.96847
26	.09470	.99520	.11207	.99276	.12941	.99129	.14700	.98679	.16382	.98636	.18124	.98105	.19829	.97790	.21553	.97652	.23227	.97270	.24875	.96840
27	.09499	.99516	.11236	.99269	.12970	.99124	.14729	.98665	.16411	.98631	.18153	.98090	.19858	.97775	.21582	.97646	.23255	.97264	.24901	.96833
28	.09528	.99512	.11265	.99262	.13000	.99119	.14758	.98651	.16440	.98626	.18182	.98075	.19887	.97760	.21611	.97640	.23283	.97258	.24927	.96826
29	.09557	.99508	.11294	.99255	.13029	.99114	.14787	.98637	.16469	.98621	.18211	.98060	.19916	.97745	.21640	.97634	.23311	.97252	.24953	.96819
30	.09586	.99504	.11323	.99248	.13058	.99109	.14816	.98623	.16498	.98616	.18240	.98045	.19945	.97730	.21669	.97628	.23339	.97246	.24979	.96812
31	.09615	.99500	.11352	.99241	.13087	.99104	.14845	.98609	.16527	.98611	.18269	.98030	.19974	.97715	.21698	.97622	.23367	.97240	.25005	.96805
32	.09644	.99496	.11381	.99234	.13116	.99099	.14874	.98595	.16556	.98606	.18298	.98015	.20003	.97700	.21727	.97616	.23395	.97234	.25031	.96798
33	.09673	.99492	.11410	.99227	.13145	.99094	.14903	.98581	.16585	.98601	.18327	.98000	.20032	.97685	.21756	.97610	.23423	.97228	.25057	.96791
34	.09702	.99488	.11439	.99220	.13174	.99089	.14932	.98567	.16614	.98596	.18356	.97985	.20061	.97670	.21785	.97604	.23451	.97222	.25083	.96784
35	.09731	.99484	.11468	.99213	.13203	.99084	.14961	.98553	.16643	.98591	.18385	.97970	.20090	.97655	.21814	.97598	.23479	.97216	.25109	.96777
36	.09760	.99480	.11497	.99206	.13232	.99079	.14990	.98539	.16672	.98586	.18414	.97955	.20119	.97640	.21843	.97592	.23507	.97210	.25135	.96770
37	.09789	.99476	.11526	.99199	.13261	.99074	.15019	.98525	.16701	.98581	.18443	.97940	.20148	.97625	.21872	.97586	.23535	.97204	.25161	.96763
38	.09818	.99472	.11555	.99192	.13290	.99069	.15048	.98511	.16730	.98576	.18472	.97925	.20177	.97610	.21901	.97580	.23563	.97198	.25187	.96756
39	.09847	.99468	.11584	.99185	.13319	.99064	.15077	.98500	.16759	.98571	.18501	.97910	.20206	.97595	.21930	.97574	.23591	.97192	.25213	.96749
40	.09876	.99464	.11613	.99178	.13348	.99059	.15106	.98489	.16788	.98566	.18530	.97895	.20235	.97580	.21959	.97568	.23619	.97186	.25239	.96742
41	.09905	.99460	.11642	.99171	.13377	.99054	.15135	.98477	.16817	.98561	.18559	.97880	.20264	.97565	.21988	.97562	.23647	.97180	.25265	.96735
42	.09934	.99456	.11671	.99164	.13406	.99049	.15164	.98465	.16846	.98556	.18588	.97865	.20293	.97550	.22017	.97556	.23675	.97174	.25291	.96728
43	.09963	.99452	.11700	.99157	.13435	.99044	.15193	.98453	.16875	.98551	.18617	.97850	.20322	.97535	.22046	.97551	.23703	.97168	.25317	.96721
44	.09992	.99448	.11729	.99150	.13464	.99039	.15222	.98441	.16904	.98546	.18646	.97835	.20351	.97520	.22075	.97546	.23731	.97162	.25343	.96714
45	.10021	.99444	.11758	.99143	.13493	.99034	.15251	.98429	.16933	.98541	.18675	.97820	.20380	.97505	.22104	.97541	.23759	.97156	.25369	.96707
46	.10050	.99440	.11787	.99136	.13522	.99029	.15280	.98417	.16962	.98536	.18704	.97805	.20409	.97490	.22133	.97536	.23787	.97150	.25395	.96700
47	.10079	.99436	.11816	.99129	.13551	.99024	.15309	.98405	.16991	.98531	.18733	.97790	.20438	.97475	.22162	.97531	.23815	.97144	.25421	.96693
48	.10108	.99432	.11845	.99122	.13580	.99019	.15338	.98393	.17021	.98526	.18762	.97775	.20467	.97460	.22191	.97526	.23843	.97138	.25447	.96686
49	.10137	.99428	.11874	.99115	.13609	.99014	.15367	.98381	.17050	.98521	.18791	.97760	.20496	.97445	.22220	.97521	.23871	.97132	.25473	.96679
50	.10166	.99424	.11903	.99108	.13638	.99009	.15396	.98369	.17079	.98516	.18820	.97745	.20525	.97430	.22249	.97516	.23899	.97126	.25500	.96672
51	.10195	.99420	.11932	.99101	.13667	.99004	.15425	.98357	.17108	.98511	.18849	.97730	.20554	.97415	.22278	.97511	.23927	.97120	.25526	.96665
52	.10224	.99416	.11961	.99094	.13696	.99000	.15454	.98345	.17137	.98506	.18878	.97715	.20583	.97400	.22307	.97506	.23955	.97114	.25552	.96658
53	.10253	.99412	.11990	.99087	.13725	.98995	.15483	.98333	.17166	.98501	.18907	.97700	.20612	.97385	.22336	.97501	.23983	.97108	.25578	.96651
54	.10282	.99408	.12019	.99080	.13754	.98990	.15512	.98321	.17195	.98496	.18936	.97685	.20641	.97370	.22365	.97496	.24011	.97102	.25604	.96644
55	.10311	.99404	.12048	.99073	.13783	.98985	.15541	.98309	.17224	.98491	.18965	.97670	.20670	.97355	.22394	.97491	.24040	.97096	.25630	.96637
56	.10340	.99400	.12077	.99066	.13812	.98980	.15570	.98297	.17253	.98486	.18994	.97655	.20699	.97340	.22423	.97486	.24069	.97090</		

/	19°		18°		17°		16°		15°		14°		13°		12°		11°		10°		9°		8°		7°																																																																																																																																																																																																																																																																																																																																																																																																																																																																																																																																																																																																																																																																																																																																																																																																																																																																																																																																																																																																																																																																										
	Size	Coast	Size	Coast	Size	Coast	Size	Coast	Size	Coast	Size	Coast	Size	Coast	Size	Coast	Size	Coast	Size	Coast	Size	Coast	Size	Coast	Size	Coast																																																																																																																																																																																																																																																																																																																																																																																																																																																																																																																																																																																																																																																																																																																																																																																																																																																																																																																																																																																																																																																																									
0	25882	96593	27564	96126	29237	95630	30902	95106	32557	94552	34202	93969	35837	93358	37461	92718	39073	92050	40674	91355	42266	90631	43849	89878	45413	89100	46967	88287	48511	87478	50045	86603	51567	85724	53074	84800	54574	83877	56074	82954	57574	82031	59074	81108	60574	80185	62074	79262	63574	78339	65074	77416	66574	75916	68016	73416	69516	71916	69916	70416	71916	73416	74916	76416	77916	79416	80916	82416	83916	85416	86916	88416	89916	91416	92916	94416	95916	97416	98916	100416	101916	103416	104916	106416	107916	109416	110916	112416	113916	115416	116916	118416	119916	121416	122916	124416	125916	127416	128916	130416	131916	133416	134916	136416	137916	139416	140916	142416	143916	145416	146916	148416	149916	151416	152916	154416	155916	157416	158916	160416	161916	163416	164916	166416	167916	169416	170916	172416	173916	175416	176916	178416	179916	181416	182916	184416	185916	187416	188916	190416	191916	193416	194916	196416	197916	199416	200916	202416	203916	205416	206916	208416	209916	211416	212916	214416	215916	217416	218916	220416	221916	223416	224916	226416	227916	229416	230916	232416	233916	235416	236916	238416	239916	241416	242916	244416	245916	247416	248916	250416	251916	253416	254916	256416	257916	259416	260916	262416	263916	265416	266916	268416	269916	270416	271916	273416	274916	276416	277916	279416	280916	282416	283916	285416	286916	288416	289916	290416	291916	293416	294916	296416	297916	299416	300916	302416	303916	305416	306916	308416	309916	311416	312916	314416	315916	317416	318916	320416	321916	323416	324916	326416	327916	329416	330916	332416	333916	335416	336916	338416	339916	340416	341916	343416	344916	346416	347916	349416	350916	352416	353916	355416	356916	358416	359916	360416	361916	363416	364916	366416	367916	369416	370916	372416	373916	375416	376916	378416	379916	380416	381916	383416	384916	386416	387916	389416	390916	392416	393916	395416	396916	398416	399916	400416	401916	403416	404916	406416	407916	409416	410916	412416	413916	415416	416916	418416	419916	420416	421916	423416	424916	426416	427916	429416	430916	432416	433916	435416	436916	438416	439916	440416	441916	443416	444916	446416	447916	449416	450916	452416	453916	455416	456916	458416	459916	460416	461916	463416	464916	466416	467916	469416	470916	472416	473916	475416	476916	478416	479916	480416	481916	483416	484916	486416	487916	489416	490916	492416	493916	495416	496916	498416	499916	500416	501916	503416	504916	506416	507916	509416	510916	512416	513916	515416	516916	518416	519916	520416	521916	523416	524916	526416	527916	529416	530916	532416	533916	535416	536916	538416	539916	540416	541916	543416	544916	546416	547916	549416	550916	552416	553916	555416	556916	558416	559916	560416	561916	563416	564916	566416	567916	569416	570916	572416	573916	575416	576916	578416	579916	580416	581916	583416	584916	586416	587916	589416	590916	592416	593916	595416	596916	598416	599916	600416	601916	603416	604916	606416	607916	609416	610916	612416	613916	615416	616916	618416	619916	620416	621916	623416	624916	626416	627916	629416	630916	632416	633916	635416	636916	638416	639916	640416	641916	643416	644916	646416	647916	649416	650916	652416	653916	655416	656916	658416	659916	660416	661916	663416	664916	666416	667916	669416	670916	672416	673916	675416	676916	678416	679916	680416	681916	683416	684916	686416	687916	689416	690916	692416	693916	695416	696916	698416	699916	700416	701916	703416	704916	706416	707916	709416	710916	712416	713916	715416	716916	718416	719916	720416	721916	723416	724916	726416	727916	729416	730916	732416	733916	735416	736916	738416	739916	740416	741916	743416	744916	746416	747916	749416	750916	752416	753916	755416	756916	758416	759916	760416	761916	763416	764916	766416	767916	769416	770916	772416	773916	775416	776916	778416	779916	780416	781916	783416	784916	786416	787916	789416	790916	792416	793916	795416	796916	798416	799916	800416	801916	803416	804916	806416	807916	809416	810916	812416	813916	815416	816916	818416	819916	820416	821916	823416	824916	826416	827916	829416	830916	832416	833916	835416	836916	838416	839916	840416	841916	843416	844916	846416	847916	849416	850916	852416	853916	855416	856916	858416	859916	860416	861916	863416	864916	866416	867916	869416	870916	872416	873916	875416	876916	878416	879916	880416	881916	883416	884916	886416	887916	889416	890916	892416	893916	895416	896916	898416	899916	900416	901916	903416	904916	906416	907916	909416	910916	912416	913916	915416	916916	918416	919916	920416	921916	923416	924916	926416	927916	929416	930916	932416	933916	935416	936916	938416	939916	940416	941916	943416	944916	946416	947916	949416	950916	952416	953916	955416	956916	958416	959916	960416	961916	963416	964916	966416	967916	969416	970916	972416	973916	975416	976916	978416	979916	980416	981916	983416	984916	986416	987916	989416	990916	992416	993916	995416	996916	998416	999916	1000416	1001916	1003416	1004916	1006416	1007916	1009416	1010916	1012416	1013916	1015416	1016916	1018416	1019916	1020416	1021916	1023416	1024916	1026416	1027916	1029416	1030916	1032416	1033916	1035416	1036916	1038416	1039916	1040416	1041916	1043416	1044916	1046416	1047916	1049416	1050916	1052416	1053916	1055416	1056916	1058416	1059916	1060416	1061916	1063416	1064916	1066416	1067916	1069416	1070916	1072416	1073916	1075416	1076916	1078416	1079916	1080416	1081916	1083416	1084916	1086416	1087916	1089416	1090916	1092416	1093916	1095416	1096916	1098416	1099916	1100416	1101916	1103416	1104916	1106416	1107916	1109416	1110916	1112416	1113916	1115416	1116916	1118416	1119916	1120416	1121916	1123416	1124916	1126416	1127916	1129416	1130916	1132416	1133916	1135416	1136916	1138416	1139916	1140416	1141916	1143416	1144916	1146416	1147916	1149416	1150916	1152416	1153916	1155416	1156916	1158416	1159916	1160416	1161916	1163416	1164916	1166416	1167916	1169416	1170916	1172416	1173916	1175416	1176916	1178416	1179916	1180416	1181916	1183416	1184916	1186416	1187916	1189416	1190916	1192416	1193916	1195416	1196916	1198416	1199916	1200416	1201916	1203416	1204916	1206416	1207916	1209416	1210916	1212416	1213916	1215416	1216916	1218416	1219916	1220416	1221916	1223416	1224916	1226416	1227916	1229416	1230916	1232416	1233916	1235416	1236916	1238416	1239916	1240416	1241916	1243416	1244916	1246416	1247916	1249416	1250916	1252416	1253916	1255416	1256916	1258416	1259916	1260416	1261916	1263416	1264916	1266416	1267916	1269416	1270916	1272416	1273916	1275416	1276916	1278416	1279916	1280416	1281916	1283416	1284916	1286416	1287916	1289416	1290916	1292416	1293916	1295416	1296916	1298416	1299916	1300416	1301916	1303416	1304916	1306416	1307916	1309416	1310916	1312416	1313916	1315416	1316916	1318416	1319916	1320416	1321916	1323416	1324916	1326416	1327916	1329416	1330916	1332416	1333916	1335416	1336916	1338416	1339916	1340416	1341916	1343416	1344916	1346416	1347916	1349416	1350916	1352416	1353916	1355416	1356916	1358416	1359916	1360416	1361916	1363416	1364916	1366416	1367916	1369416	1370916	1372416	1373916	1375416	1376916	1378416	1379916	1380416	1381916	1383416	1384916	1386416	1387916	1389416	1390916	1392416	1393916	1395416	1396916	1398416	1399916	1400416	1401916	1403416	1404916	1406416	1407916	1409416	1410916	1412416	1413916	1415416	1416916	1418416	1419916	1420416	1421916	1423416	1424916	1426416	1427916	1429416	1430916	1432416	1433916	1435416	1436916	1438416	1439916	1440416	1441916	1443416	1444916	1446416	1447916	1449416	1450916	1452416	1453916	1455416	1456916	1458416	1459916	1460416	1461916	1463416	1464916	1466416	1467916	1469416	1470916	1472416	1473916	1475416	1476916	1478416	1479916	1480416	1481916	1483416	1484916	1486416	1487916	1489416	1490916	1492416	1493916	1495416	1496916	1498416	1499916	1500416	1501916	1503416	1504916	1506416	150

°	25°		26°		27°		28°		29°		30°		31°		32°		33°		34°		°
	Sine	Cosine	Sine	Cosine	Sine	Cosine	Sine	Cosine	Sine	Cosine	Sine	Cosine	Sine	Cosine	Sine	Cosine	Sine	Cosine	Sine	Cosine	
0	4.1262	90618	4.3837	89879	4.5399	89101	4.6947	88295	4.8481	87462	5.0000	86603	5.1504	85712	5.2992	84803	5.4468	83867	5.5919	82904	60
1	4.1268	90618	4.3863	89879	4.5429	89087	4.6973	88281	4.8506	87448	5.0025	86588	5.1529	85697	5.3017	84789	5.4488	83851	5.5943	82887	59
2	4.1274	90618	4.3889	89884	4.5451	89074	4.6998	88274	4.8532	87420	5.0050	86573	5.1554	85687	5.3041	84774	5.4513	83835	5.5968	82851	58
3	4.1281	90618	4.3916	89881	4.5477	89061	4.7024	88264	4.8557	87406	5.0076	86559	5.1579	85672	5.3066	84767	5.4537	83819	5.5992	82815	57
4	4.1287	90618	4.3942	89878	4.5503	89048	4.7050	88256	4.8583	87400	5.0101	86544	5.1604	85657	5.3091	84743	5.4561	83804	5.6016	82789	56
5	4.1294	90618	4.3968	89876	4.5529	89033	4.7076	88248	4.8608	87391	5.0126	86530	5.1633	85642	5.3115	84728	5.4586	83788	5.6040	82782	55
6	4.1300	90618	4.3994	89873	4.5554	89018	4.7101	88241	4.8634	87377	5.0151	86515	5.1653	85629	5.3140	84712	5.4610	83772	5.6064	82776	54
7	4.1306	90618	4.4020	89870	4.5580	89008	4.7127	88199	4.8659	87363	5.0176	86498	5.1678	85612	5.3166	84697	5.4635	83756	5.6088	82769	53
8	4.1312	90618	4.4046	89867	4.5606	88995	4.7153	88185	4.8684	87345	5.0201	86481	5.1703	85597	5.3189	84681	5.4659	83740	5.6112	82753	52
9	4.1318	90618	4.4072	89864	4.5632	88981	4.7178	88172	4.8710	87321	5.0227	86467	5.1728	85582	5.3214	84666	5.4683	83724	5.6136	82741	51
10	4.1324	90618	4.4098	89861	4.5658	88968	4.7204	88158	4.8735	87305	5.0252	86457	5.1753	85567	5.3238	84650	5.4708	83708	5.6160	82731	50
11	4.1330	90618	4.4124	89858	4.5684	88955	4.7229	88144	4.8761	87286	5.0277	86442	5.1778	85551	5.3263	84635	5.4732	83692	5.6184	82724	49
12	4.1336	90618	4.4150	89855	4.5710	88942	4.7255	88130	4.8786	87269	5.0302	86427	5.1803	85536	5.3288	84619	5.4756	83676	5.6208	82718	48
13	4.1342	90618	4.4176	89852	4.5736	88928	4.7281	88117	4.8811	87252	5.0327	86413	5.1828	85521	5.3312	84604	5.4781	83660	5.6232	82712	47
14	4.1348	90618	4.4202	89849	4.5762	88915	4.7306	88103	4.8837	87236	5.0352	86398	5.1852	85506	5.3337	84588	5.4805	83645	5.6256	82706	46
15	4.1354	90618	4.4228	89846	4.5788	88902	4.7332	88089	4.8862	87220	5.0377	86384	5.1877	85491	5.3361	84573	5.4829	83629	5.6280	82699	45
16	4.1360	90618	4.4254	89843	4.5814	88888	4.7358	88075	4.8888	87204	5.0402	86369	5.1902	85476	5.3386	84557	5.4854	83613	5.6304	82693	44
17	4.1366	90618	4.4280	89840	4.5840	88875	4.7383	88062	4.8913	87188	5.0427	86354	5.1927	85461	5.3411	84542	5.4878	83597	5.6328	82686	43
18	4.1372	90618	4.4306	89837	4.5866	88862	4.7409	88048	4.8938	87171	5.0452	86340	5.1952	85446	5.3435	84526	5.4902	83581	5.6352	82679	42
19	4.1378	90618	4.4332	89834	4.5891	88848	4.7434	88034	4.8964	87154	5.0477	86325	5.1977	85431	5.3460	84511	5.4927	83565	5.6377	82673	41
20	4.1384	90618	4.4358	89831	4.5917	88835	4.7460	88020	4.8989	87138	5.0503	86310	5.2002	85416	5.3484	84495	5.4951	83549	5.6401	82667	40
21	4.1390	90618	4.4384	89828	4.5942	88822	4.7486	88006	4.9014	87121	5.0528	86295	5.2026	85401	5.3509	84480	5.4975	83533	5.6425	82661	39
22	4.1396	90618	4.4410	89825	4.5968	88808	4.7511	87993	4.9040	87105	5.0553	86281	5.2051	85385	5.3534	84464	5.4999	83517	5.6449	82654	38
23	4.1402	90618	4.4436	89822	4.5994	88795	4.7537	87979	4.9065	87089	5.0578	86266	5.2076	85370	5.3558	84448	5.5024	83501	5.6473	82648	37
24	4.1408	90618	4.4462	89819	4.6020	88782	4.7562	87965	4.9090	87073	5.0603	86251	5.2101	85355	5.3583	84433	5.5048	83485	5.6497	82641	36
25	4.1414	90618	4.4488	89816	4.6046	88768	4.7588	87951	4.9116	87057	5.0628	86236	5.2126	85340	5.3607	84417	5.5072	83469	5.6521	82635	35
26	4.1420	90618	4.4514	89813	4.6072	88755	4.7614	87937	4.9141	87043	5.0653	86221	5.2151	85325	5.3632	84402	5.5097	83453	5.6545	82628	34
27	4.1426	90618	4.4540	89810	4.6098	88742	4.7639	87923	4.9166	87029	5.0678	86206	5.2176	85310	5.3656	84386	5.5121	83437	5.6569	82621	33
28	4.1432	90618	4.4566	89807	4.6124	88728	4.7665	87909	4.9191	87014	5.0703	86191	5.2201	85294	5.3681	84370	5.5145	83421	5.6593	82614	32
29	4.1438	90618	4.4592	89804	4.6150	88715	4.7690	87896	4.9217	87000	5.0728	86176	5.2225	85279	5.3705	84355	5.5169	83405	5.6617	82607	31
30	4.1444	90618	4.4618	89801	4.6176	88701	4.7716	87882	4.9242	86986	5.0754	86163	5.2250	85264	5.3730	84339	5.5194	83389	5.6641	82601	30
31	4.1450	90618	4.4644	89798	4.6202	88688	4.7741	87868	4.9268	86971	5.0779	86148	5.2275	85249	5.3754	84324	5.5218	83373	5.6665	82594	29
32	4.1456	90618	4.4670	89795	4.6228	88674	4.7767	87854	4.9293	86956	5.0804	86133	5.2300	85234	5.3779	84308	5.5242	83356	5.6689	82588	28
33	4.1462	90618	4.4696	89792	4.6254	88661	4.7793	87840	4.9318	86942	5.0829	86119	5.2324	85218	5.3804	84292	5.5266	83340	5.6713	82581	27
34	4.1468	90618	4.4722	89789	4.6280	88647	4.7818	87826	4.9344	86927	5.0854	86104	5.2349	85203	5.3828	84277	5.5291	83324	5.6736	82574	26
35	4.1474	90618	4.4748	89786	4.6306	88634	4.7844	87812	4.9369	86912	5.0879	86089	5.2374	85188	5.3853	84261	5.5315	83308	5.6760	82567	25
36	4.1480	90618	4.4774	89783	4.6332	88620	4.7869	87798	4.9394	86897	5.0904	86074	5.2399	85173	5.3877	84245	5.5339	83292	5.6784	82560	24
37	4.1486	90618	4.4800	89780	4.6358	88607	4.7895	87784	4.9419	86883	5.0929	86059	5.2423	85157	5.3902	84229	5.5363	83276	5.6808	82553	23
38	4.1492	90618	4.4826	89777	4.6384	88593	4.7920	87770	4.9444	86868	5.0954	86044	5.2448	85142	5.3926	84214	5.5388	83260	5.6832	82546	22
39	4.1498	90618	4.4852	89774	4.6410	88580	4.7946	87756	4.9470	86853	5.0979	86029	5.2473	85127	5.3951	84198	5.5412	83244	5.6856	82539	21
40	4.1504	90618	4.4878	89771	4.6436	88566	4.7971	87743	4.9495	86838	5.1004	86015	5.2498	85112	5.3975	84182	5.5436	83228	5.6880	82532	20
41	4.1510	90618	4.4904	89768	4.6462	88553	4.7997	87729	4.9521	86823	5.1029	86000	5.2522	85096	5.4000	84167	5.5460	83212	5.6904	82525	19
42	4.1516	90618	4.4930	89765	4.6488	88539	4.8022	87715	4.9546	86808	5.1054	85985	5.2547	85081	5.4024	84151	5.5484	83195	5.6928	82518	18
43	4.1522	90618	4.4956	89762	4.6514	88526	4.8048	87701	4.9571	86793	5.1079	85970	5.2572	85066	5.4049	84135	5.5509	83179	5.6952	82511	17
44	4.1528	90618	4.4982	89759	4.6540	88512	4.8073	87687	4.9596	86778	5.1104	85956	5.2597	85051	5.4073	84120	5.5533	83163	5.6976	82504	16
45	4.1534	90618	4.5008	89756	4.6566	88499	4.8099	87673	4.9621	86763	5.1129	85941	5.2621	85035	5.4097	84104	5.5557	83147	5.7000	82497	15
46	4.1540	90618	4.5034	89753	4.6592	88485	4.8124	87659	4.9646	86748	5.1154	85926	5.2646	85020	5.4122	84088	5.5581	83131	5.7024	82490	14
47	4.1546	90618	4.5060	89750	4.6618	88472	4.8149	87645	4.9671	86733	5.1179	85911	5.2671	85005	5.4146	84072	5.5605	83115	5.7047	82483	13
48	4.1552	90618	4.5086	89747	4.6644	88458	4.8174	87631	4.9696	86718	5.1204	85896	5.2696	84989	5.4171	84057	5.5629	83098	5.7071	82476	12
49	4.1558	90618	4.5112	89744	4.6670	88445	4.8200	87617	4.9721	86703	5.1229	85881	5.2721	84974	5.4195	84041	5.5654	83082	5.7095	82469	11
50	4.1564	90618	4.5138	89741	4.6696	88431	4.8226	87603	4.9746	86688	5.1254	85866	5.2746	84959	5.4220	84025	5.5678	83066	5.7119	82462	10
51	4.1570	90618	4.5164	89738	4.6722	88417	4.8252	87589	4.9771	86673	5.1279	85851	5.2771	84943	5.4244	84009	5.5702	83050	5.7143	82455	9
52	4.1576	90618	4.5190	89735	4.6748	88404	4.8277	87575	4.9796	86658	5.1304	85836									

°	34°		35°		36°		37°		38°		39°		40°		41°		42°		43°		44°			
	Sine	Cosine	Sine	Cosine	Sine	Cosine	Sine	Cosine	Sine	Cosine	Sine	Cosine	Sine	Cosine	Sine	Cosine	Sine	Cosine	Sine	Cosine	Sine	Cosine		
0	.57358	.81915	.58779	.80902	.60182	.79854	.61566	.78801	.62932	.77715	.64329	.76604	.65606	.75471	.66913	.74314	.68200	.73135	.69466	.71934	.68221	.73135	.69466	.71934
1	.57381	.81899	.58802	.80885	.60205	.79846	.61612	.78783	.63055	.77696	.64524	.76586	.65628	.75428	.66953	.74314	.68221	.73135	.69466	.71934	.68221	.73135	.69466	.71934
2	.57405	.81882	.58826	.80871	.60228	.79829	.61635	.78765	.63077	.77660	.64547	.76567	.65650	.75433	.66978	.74314	.68221	.73135	.69466	.71934	.68221	.73135	.69466	.71934
3	.57429	.81865	.58851	.80860	.60251	.79781	.61658	.78729	.63100	.77565	.64567	.76514	.65694	.75395	.66999	.74314	.68221	.73135	.69466	.71934	.68221	.73135	.69466	.71934
4	.57453	.81848	.58876	.80849	.60274	.79733	.61681	.78719	.63123	.77453	.64586	.76492	.65711	.75375	.67001	.74314	.68221	.73135	.69466	.71934	.68221	.73135	.69466	.71934
5	.57477	.81832	.58901	.80838	.60297	.79697	.61704	.78719	.63146	.77393	.64605	.76441	.65736	.75358	.67001	.74314	.68221	.73135	.69466	.71934	.68221	.73135	.69466	.71934
6	.57501	.81815	.58926	.80827	.60320	.79656	.61726	.78719	.63168	.77326	.64624	.76400	.65766	.75339	.67001	.74314	.68221	.73135	.69466	.71934	.68221	.73135	.69466	.71934
7	.57525	.81798	.58951	.80816	.60343	.79615	.61748	.78719	.63190	.77259	.64643	.76396	.65797	.75312	.67001	.74314	.68221	.73135	.69466	.71934	.68221	.73135	.69466	.71934
8	.57549	.81781	.58976	.80805	.60366	.79574	.61770	.78719	.63212	.77192	.64662	.76396	.65829	.75285	.67001	.74314	.68221	.73135	.69466	.71934	.68221	.73135	.69466	.71934
9	.57573	.81764	.59001	.80794	.60389	.79533	.61792	.78719	.63234	.77125	.64681	.76396	.65861	.75274	.67001	.74314	.68221	.73135	.69466	.71934	.68221	.73135	.69466	.71934
10	.57597	.81747	.59026	.80783	.60412	.79492	.61814	.78719	.63256	.77058	.64700	.76396	.65893	.75253	.67001	.74314	.68221	.73135	.69466	.71934	.68221	.73135	.69466	.71934
11	.57621	.81730	.59051	.80772	.60435	.79451	.61836	.78719	.63278	.76991	.64719	.76396	.65925	.75232	.67001	.74314	.68221	.73135	.69466	.71934	.68221	.73135	.69466	.71934
12	.57645	.81713	.59076	.80761	.60458	.79410	.61858	.78719	.63300	.76924	.64738	.76396	.65957	.75211	.67001	.74314	.68221	.73135	.69466	.71934	.68221	.73135	.69466	.71934
13	.57669	.81696	.59101	.80750	.60481	.79369	.61880	.78719	.63322	.76857	.64757	.76396	.65989	.75190	.67001	.74314	.68221	.73135	.69466	.71934	.68221	.73135	.69466	.71934
14	.57693	.81679	.59126	.80739	.60504	.79328	.61902	.78719	.63344	.76790	.64776	.76396	.66021	.75169	.67001	.74314	.68221	.73135	.69466	.71934	.68221	.73135	.69466	.71934
15	.57717	.81662	.59151	.80728	.60527	.79287	.61924	.78719	.63366	.76723	.64795	.76396	.66053	.75148	.67001	.74314	.68221	.73135	.69466	.71934	.68221	.73135	.69466	.71934
16	.57741	.81645	.59176	.80717	.60550	.79246	.61946	.78719	.63388	.76656	.64814	.76396	.66085	.75127	.67001	.74314	.68221	.73135	.69466	.71934	.68221	.73135	.69466	.71934
17	.57765	.81628	.59201	.80706	.60573	.79205	.61968	.78719	.63410	.76589	.64833	.76396	.66117	.75106	.67001	.74314	.68221	.73135	.69466	.71934	.68221	.73135	.69466	.71934
18	.57789	.81611	.59226	.80695	.60596	.79164	.61990	.78719	.63432	.76522	.64852	.76396	.66149	.75085	.67001	.74314	.68221	.73135	.69466	.71934	.68221	.73135	.69466	.71934
19	.57813	.81594	.59251	.80684	.60619	.79123	.62012	.78719	.63454	.76455	.64871	.76396	.66181	.75064	.67001	.74314	.68221	.73135	.69466	.71934	.68221	.73135	.69466	.71934
20	.57837	.81577	.59276	.80673	.60642	.79082	.62034	.78719	.63476	.76388	.64890	.76396	.66213	.75043	.67001	.74314	.68221	.73135	.69466	.71934	.68221	.73135	.69466	.71934
21	.57861	.81560	.59301	.80662	.60665	.79041	.62056	.78719	.63498	.76321	.64909	.76396	.66245	.75022	.67001	.74314	.68221	.73135	.69466	.71934	.68221	.73135	.69466	.71934
22	.57885	.81543	.59326	.80651	.60688	.79000	.62078	.78719	.63520	.76254	.64928	.76396	.66277	.75001	.67001	.74314	.68221	.73135	.69466	.71934	.68221	.73135	.69466	.71934
23	.57909	.81526	.59351	.80640	.60711	.78959	.62100	.78719	.63542	.76187	.64947	.76396	.66309	.74980	.67001	.74314	.68221	.73135	.69466	.71934	.68221	.73135	.69466	.71934
24	.57933	.81509	.59376	.80629	.60734	.78918	.62122	.78719	.63564	.76120	.64966	.76396	.66341	.74959	.67001	.74314	.68221	.73135	.69466	.71934	.68221	.73135	.69466	.71934
25	.57957	.81492	.59401	.80618	.60757	.78877	.62144	.78719	.63586	.76053	.64985	.76396	.66373	.74938	.67001	.74314	.68221	.73135	.69466	.71934	.68221	.73135	.69466	.71934
26	.57981	.81475	.59426	.80607	.60780	.78836	.62166	.78719	.63608	.75986	.65004	.76396	.66405	.74917	.67001	.74314	.68221	.73135	.69466	.71934	.68221	.73135	.69466	.71934
27	.57999	.81458	.59451	.80596	.60803	.78795	.62188	.78719	.63630	.75919	.65023	.76396	.66437	.74896	.67001	.74314	.68221	.73135	.69466	.71934	.68221	.73135	.69466	.71934
28	.58017	.81441	.59476	.80585	.60826	.78754	.62210	.78719	.63652	.75852	.65042	.76396	.66469	.74875	.67001	.74314	.68221	.73135	.69466	.71934	.68221	.73135	.69466	.71934
29	.58035	.81424	.59501	.80574	.60849	.78713	.62232	.78719	.63674	.75785	.65061	.76396	.66501	.74854	.67001	.74314	.68221	.73135	.69466	.71934	.68221	.73135	.69466	.71934
30	.58053	.81407	.59526	.80563	.60872	.78672	.62254	.78719	.63696	.75718	.65080	.76396	.66533	.74833	.67001	.74314	.68221	.73135	.69466	.71934	.68221	.73135	.69466	.71934
31	.58071	.81390	.59551	.80552	.60895	.78631	.62276	.78719	.63718	.75651	.65099	.76396	.66565	.74812	.67001	.74314	.68221	.73135	.69466	.71934	.68221	.73135	.69466	.71934
32	.58089	.81373	.59576	.80541	.60918	.78590	.62298	.78719	.63740	.75584	.65118	.76396	.66597	.74791	.67001	.74314	.68221	.73135	.69466	.71934	.68221	.73135	.69466	.71934
33	.58107	.81356	.59601	.80530	.60941	.78549	.62320	.78719	.63762	.75517	.65137	.76396	.66629	.74770	.67001	.74314	.68221	.73135	.69466	.71934	.68221	.73135	.69466	.71934
34	.58125	.81339	.59626	.80519	.60964	.78508	.62342	.78719	.63784	.75450	.65156	.76396	.66661	.74749	.67001	.74314	.68221	.73135	.69466	.71934	.68221	.73135	.69466	.71934
35	.58143	.81322	.59651	.80508	.60987	.78467	.62364	.78719	.63806	.75383	.65175	.76396	.66693	.74728	.67001	.74314	.68221	.73135	.69466	.71934	.68221	.73135	.69466	.71934
36	.58161	.81305	.59676	.80497	.61010	.78426	.62386	.78719	.63828	.75316	.65194	.76396	.66725	.74707	.67001	.74314	.68221	.73135	.69466	.71934	.68221	.73135	.69466	.71934
37	.58179	.81288	.59701	.80486	.61033	.78385	.62408	.78719	.63850	.75249	.65213	.76396	.66757	.74686	.67001	.74314	.68221	.73135	.69466	.71934	.68221	.73135	.69466	.71934
38	.58197	.81271	.59726	.80475	.61056	.78344	.62430	.78719	.63872	.75182	.65232	.76396	.66789	.74665	.67001	.74314	.68221	.73135	.69466	.71934	.68221	.73135	.69466	.71934
39	.58215	.81254	.59751	.80464	.61079	.78303	.62452	.78719	.63894	.75115	.65251	.76396	.66821	.74644	.67001	.74314	.68221	.73135	.69466	.71934	.68221	.73135	.69466	.71934
40	.58233	.81237	.59776	.80453	.61102	.78262	.62474	.78719	.63916	.75048	.65270	.76396	.66853	.74623	.67001	.74314	.68221	.73135	.69466	.71934	.68221	.73135	.69466	.71934
41	.58251	.81220	.59801	.80442	.61125	.78221	.62496	.78719	.63938	.74981	.65289	.76396	.66885	.74602	.67001	.74314	.68221	.73135	.69466	.71934	.68221	.73135	.69466	.71934
42	.58269	.81203	.59826	.80431	.61148	.78180	.62518	.78719	.63960	.74914	.65308	.76396	.66917	.74581	.67001	.74314	.68221	.73135	.69466	.71934	.68221	.73135	.69466	.71934
43	.58287	.81186</																						

°	89°		88°		87°		86°		85°		84°		83°		82°	
	Tang	Catung	Tang	Catung	Tang	Catung	Tang	Catung	Tang	Catung	Tang	Catung	Tang	Catung	Tang	Catung
0	∞	∞	∞	∞	∞	∞	∞	∞	∞	∞	∞	∞	∞	∞	∞	∞
1	0.0000	Infinitive	0.1746	57.2900	0.3492	28.6363	0.5241	19.0811	0.6992	14.2007	0.8749	11.4301	1.0510	9.51436	1.2278	8.14435
2	0.0029	3437.75	0.1775	56.3506	0.3550	28.1664	0.5270	18.9755	0.7031	14.2411	0.8778	11.3919	1.0540	9.48781	1.2308	8.12481
3	0.0058	1716.87	0.1804	55.4613	0.3609	27.7117	0.5328	18.8711	0.7080	14.1821	0.8807	11.3540	1.0569	9.46141	1.2338	8.10536
4	0.0087	1145.92	0.1832	54.5633	0.3668	27.2715	0.5387	18.7678	0.7119	14.0655	0.8866	11.2789	1.0628	9.40904	1.2397	8.06674
5	0.0116	859.436	0.1891	52.8821	0.3668	27.2715	0.5387	18.7678	0.7119	14.0655	0.8866	11.2789	1.0628	9.40904	1.2397	8.06674
6	0.0145	687.549	0.1920	52.0807	0.3668	27.2715	0.5387	18.7678	0.7119	14.0655	0.8866	11.2789	1.0628	9.40904	1.2397	8.06674
7	0.0174	572.957	0.1949	51.3032	0.3668	27.2715	0.5387	18.7678	0.7119	14.0655	0.8866	11.2789	1.0628	9.40904	1.2397	8.06674
8	0.0203	491.106	0.1978	50.5485	0.3668	27.2715	0.5387	18.7678	0.7119	14.0655	0.8866	11.2789	1.0628	9.40904	1.2397	8.06674
9	0.0232	429.711	0.2007	49.8157	0.3668	27.2715	0.5387	18.7678	0.7119	14.0655	0.8866	11.2789	1.0628	9.40904	1.2397	8.06674
10	0.0262	381.971	0.2036	49.1039	0.3668	27.2715	0.5387	18.7678	0.7119	14.0655	0.8866	11.2789	1.0628	9.40904	1.2397	8.06674
11	0.0291	343.774	0.2066	48.4121	0.3668	27.2715	0.5387	18.7678	0.7119	14.0655	0.8866	11.2789	1.0628	9.40904	1.2397	8.06674
12	0.0320	312.521	0.2095	47.7395	0.3668	27.2715	0.5387	18.7678	0.7119	14.0655	0.8866	11.2789	1.0628	9.40904	1.2397	8.06674
13	0.0349	286.478	0.2124	47.0853	0.3668	27.2715	0.5387	18.7678	0.7119	14.0655	0.8866	11.2789	1.0628	9.40904	1.2397	8.06674
14	0.0378	264.441	0.2153	46.4489	0.3668	27.2715	0.5387	18.7678	0.7119	14.0655	0.8866	11.2789	1.0628	9.40904	1.2397	8.06674
15	0.0407	245.552	0.2182	45.8294	0.3668	27.2715	0.5387	18.7678	0.7119	14.0655	0.8866	11.2789	1.0628	9.40904	1.2397	8.06674
16	0.0436	229.182	0.2211	45.2261	0.3668	27.2715	0.5387	18.7678	0.7119	14.0655	0.8866	11.2789	1.0628	9.40904	1.2397	8.06674
17	0.0465	214.858	0.2240	44.6386	0.3668	27.2715	0.5387	18.7678	0.7119	14.0655	0.8866	11.2789	1.0628	9.40904	1.2397	8.06674
18	0.0494	202.319	0.2269	44.0661	0.3668	27.2715	0.5387	18.7678	0.7119	14.0655	0.8866	11.2789	1.0628	9.40904	1.2397	8.06674
19	0.0523	190.884	0.2298	43.5081	0.3668	27.2715	0.5387	18.7678	0.7119	14.0655	0.8866	11.2789	1.0628	9.40904	1.2397	8.06674
20	0.0552	180.932	0.2328	43.0011	0.3668	27.2715	0.5387	18.7678	0.7119	14.0655	0.8866	11.2789	1.0628	9.40904	1.2397	8.06674
21	0.0581	172.244	0.2357	42.5435	0.3668	27.2715	0.5387	18.7678	0.7119	14.0655	0.8866	11.2789	1.0628	9.40904	1.2397	8.06674
22	0.0610	164.700	0.2386	42.1358	0.3668	27.2715	0.5387	18.7678	0.7119	14.0655	0.8866	11.2789	1.0628	9.40904	1.2397	8.06674
23	0.0639	158.259	0.2415	41.7781	0.3668	27.2715	0.5387	18.7678	0.7119	14.0655	0.8866	11.2789	1.0628	9.40904	1.2397	8.06674
24	0.0668	152.884	0.2444	41.4606	0.3668	27.2715	0.5387	18.7678	0.7119	14.0655	0.8866	11.2789	1.0628	9.40904	1.2397	8.06674
25	0.0697	148.565	0.2473	41.1831	0.3668	27.2715	0.5387	18.7678	0.7119	14.0655	0.8866	11.2789	1.0628	9.40904	1.2397	8.06674
26	0.0726	145.297	0.2502	40.9456	0.3668	27.2715	0.5387	18.7678	0.7119	14.0655	0.8866	11.2789	1.0628	9.40904	1.2397	8.06674
27	0.0755	143.070	0.2531	40.7481	0.3668	27.2715	0.5387	18.7678	0.7119	14.0655	0.8866	11.2789	1.0628	9.40904	1.2397	8.06674
28	0.0784	141.884	0.2560	40.5906	0.3668	27.2715	0.5387	18.7678	0.7119	14.0655	0.8866	11.2789	1.0628	9.40904	1.2397	8.06674
29	0.0813	141.744	0.2589	40.5681	0.3668	27.2715	0.5387	18.7678	0.7119	14.0655	0.8866	11.2789	1.0628	9.40904	1.2397	8.06674
30	0.0842	142.744	0.2618	40.6706	0.3668	27.2715	0.5387	18.7678	0.7119	14.0655	0.8866	11.2789	1.0628	9.40904	1.2397	8.06674
31	0.0871	144.889	0.2647	40.8981	0.3668	27.2715	0.5387	18.7678	0.7119	14.0655	0.8866	11.2789	1.0628	9.40904	1.2397	8.06674
32	0.0900	148.226	0.2676	41.2356	0.3668	27.2715	0.5387	18.7678	0.7119	14.0655	0.8866	11.2789	1.0628	9.40904	1.2397	8.06674
33	0.0929	152.865	0.2705	41.6731	0.3668	27.2715	0.5387	18.7678	0.7119	14.0655	0.8866	11.2789	1.0628	9.40904	1.2397	8.06674
34	0.0958	158.804	0.2734	42.2106	0.3668	27.2715	0.5387	18.7678	0.7119	14.0655	0.8866	11.2789	1.0628	9.40904	1.2397	8.06674
35	0.0987	166.143	0.2763	42.8481	0.3668	27.2715	0.5387	18.7678	0.7119	14.0655	0.8866	11.2789	1.0628	9.40904	1.2397	8.06674
36	0.1016	175.082	0.2792	43.5856	0.3668	27.2715	0.5387	18.7678	0.7119	14.0655	0.8866	11.2789	1.0628	9.40904	1.2397	8.06674
37	0.1045	185.821	0.2821	44.4231	0.3668	27.2715	0.5387	18.7678	0.7119	14.0655	0.8866	11.2789	1.0628	9.40904	1.2397	8.06674
38	0.1074	198.560	0.2850	45.3606	0.3668	27.2715	0.5387	18.7678	0.7119	14.0655	0.8866	11.2789	1.0628	9.40904	1.2397	8.06674
39	0.1103	213.599	0.2879	46.4981	0.3668	27.2715	0.5387	18.7678	0.7119	14.0655	0.8866	11.2789	1.0628	9.40904	1.2397	8.06674
40	0.1132	231.438	0.2908	47.8356	0.3668	27.2715	0.5387	18.7678	0.7119	14.0655	0.8866	11.2789	1.0628	9.40904	1.2397	8.06674
41	0.1161	252.577	0.2937	49.3731	0.3668	27.2715	0.5387	18.7678	0.7119	14.0655	0.8866	11.2789	1.0628	9.40904	1.2397	8.06674
42	0.1190	277.416	0.2966	51.1106	0.3668	27.2715	0.5387	18.7678	0.7119	14.0655	0.8866	11.2789	1.0628	9.40904	1.2397	8.06674
43	0.1219	306.255	0.2995	53.0481	0.3668	27.2715	0.5387	18.7678	0.7119	14.0655	0.8866	11.2789	1.0628	9.40904	1.2397	8.06674
44	0.1248	340.094	0.3024	55.1856	0.3668	27.2715	0.5387	18.7678	0.7119	14.0655	0.8866	11.2789	1.0628	9.40904	1.2397	8.06674
45	0.1277	380.933	0.3053	57.5231	0.3668	27.2715	0.5387	18.7678	0.7119	14.0655	0.8866	11.2789	1.0628	9.40904	1.2397	8.06674
46	0.1306	430.772	0.3082	60.1606	0.3668	27.2715	0.5387	18.7678	0.7119	14.0655	0.8866	11.2789	1.0628	9.40904	1.2397	8.06674
47	0.1335	493.611	0.3111	63.0981	0.3668	27.2715	0.5387	18.7678	0.7119	14.0655	0.8866	11.2789	1.0628	9.40904	1.2397	8.06674
48	0.1364	574.450	0.3140	66.3356	0.3668	27.2715	0.5387	18.7678	0.7119	14.0655	0.8866	11.2789	1.0628	9.40904	1.2397	8.06674
49	0.1393	678.289	0.3169	70.0731	0.3668	27.2715	0.5387	18.7678	0.7119	14.0655	0.8866	11.2789	1.0628	9.40904	1.2397	8.06674
50	0.1422	809.128	0.3198	74.4106	0.3668	27.2715	0.5387	18.7678	0.7119	14.0655	0.8866	11.2789	1.0628	9.40904	1.2397	8.06674
51	0.1451	970.967	0.3227	79.3481	0.3668	27.2715	0.5387	18.7678	0.7119	14.0655	0.8866	11.2789	1.0628	9.40904	1.2397	8.06674
52	0.1480	1178.806	0.3256	84.9856	0.3668	27.2715	0.5387	18.7678	0.7119	14.0655	0.8866	11.2789	1.0628	9.40904	1.2397	8.06674
53	0.1509	1438.645	0.3285	91.4231	0.3668	27.2715	0.5387	18.7678	0.7119	14.0655	0.8866	11.2789	1.0628	9.40904	1.2397	8.06674
54	0.1538	1766.484	0.3314	98.7606	0.3668	27.2715	0.5387	18.7678	0.7119	14.0655	0.8866	11.2789	1.0628	9.40904	1.2397	8.06674
55	0.1567	2188.323	0.3343	107.1981	0.3668	27.2715	0.5387	18.7678	0.7119	14.0655	0.8866	11.2789	1.0628	9.40904	1.2397	8.06674
56	0.1596	2720.162	0.3372	117.7356	0.3668	27.2715	0.5387	18.7678	0.7119	14.0655	0.8866	11.2789	1.0628	9.40904	1.2397	8.06674
57	0.1625	3396.001	0.3401	130.4731	0.3668	27.2715	0.5387	18.7678	0.7119	14.0655	0.8866	11.2789	1.0628	9.40904	1.2397	8.06674
58	0.1654	4255.840	0.3430	145.4106	0.3668	27.2715	0.5387	18.7678	0.7119	14.0655	0.8866	11.2789	1.0628	9.40904	1.2397	8.06674
59	0.1683	5355.679	0.3459	163.6481	0.3668	27.2715	0.5387	18.7678	0.7119	14.0655	0.8866	11.2789	1.0628	9.40904	1.2397	8.06674
60	0.1712	6755.518	0.3488	185.8856	0.3668	27.2715	0.5387	18.7678	0.7119	14.0655	0.8866	11.2789	1.0628	9.40904	1.2397	8.06674

80°		90°		100°		110°		120°		130°		140°		150°		
Teng	Cetang	Teng	Cetang	Teng	Cetang	Teng	Cetang	Teng	Cetang	Teng	Cetang	Teng	Cetang	Teng	Cetang	
0	14054	711537	15838	631375	17633	567128	19438	514455	21256	470463	23087	433148	24933	401078	26795	373205
1	14084	710038	15868	629007	17663	566165	19468	513682	21316	469971	23117	432573	24964	400886	26826	372771
2	14113	708546	15898	627629	17693	565205	19498	512919	21386	469480	23148	431688	24994	400700	26857	372338
3	14143	707059	15928	626251	17723	564248	19529	512156	21456	468989	23179	430803	25026	400514	26888	371907
4	14173	705579	15958	624874	17753	563295	19559	511392	21527	468498	23210	430000	25056	400328	26920	371476
5	14202	704105	15988	623497	17783	562344	19589	510629	21598	468007	23241	429197	25087	400142	26951	371046
6	14232	702637	16017	622120	17813	561397	19619	509866	21669	467516	23272	428394	25118	399956	26982	370616
7	14261	701174	16047	620743	17843	560452	19649	509105	21740	467025	23303	427591	25149	399770	27013	370186
8	14291	699718	16077	620003	17873	559511	19680	508344	21811	466534	23334	426788	25180	399584	27044	369756
9	14321	698268	16107	620851	17903	558573	19710	507583	21882	466043	23365	425985	25211	399398	27075	369326
10	14351	696823	16137	619703	17933	557638	19740	506829	21953	465552	23396	425182	25242	399212	27106	368896
11	14381	695385	16167	618559	17963	556706	19770	506080	22024	465061	23427	424379	25273	399026	27137	368466
12	14411	693952	16196	617419	17993	555777	19801	505337	22095	464570	23458	423576	25304	398840	27168	368036
13	14440	692525	16226	616283	18023	554851	19831	504594	22166	464079	23489	422773	25335	398654	27199	367606
14	14470	691104	16256	615151	18053	553927	19861	503851	22237	463588	23520	421970	25366	398468	27230	367176
15	14499	689688	16286	614023	18083	553007	19891	503108	22308	463097	23551	421167	25397	398282	27261	366746
16	14529	688278	16316	612899	18113	552090	19921	502365	22379	462606	23582	420364	25428	398096	27292	366316
17	14559	686874	16346	611779	18143	551176	19951	501622	22450	462115	23613	419561	25459	397910	27323	365886
18	14588	685475	16376	610664	18173	550264	19981	500879	22521	461624	23644	418758	25490	397724	27354	365456
19	14618	684082	16406	609552	18203	549356	20012	500136	22592	461133	23675	417955	25521	397538	27385	365026
20	14648	682694	16435	608444	18233	548451	20042	499394	22663	460642	23706	417152	25552	397352	27416	364596
21	14678	681312	16465	607340	18263	547548	20073	498651	22734	460151	23737	416349	25583	397166	27447	364166
22	14707	679936	16495	606240	18293	546648	20103	497908	22805	459660	23768	415546	25614	396980	27478	363736
23	14737	678564	16525	605143	18323	545751	20133	497165	22876	459169	23799	414743	25645	396794	27509	363306
24	14767	677199	16555	604051	18353	544857	20164	496422	22947	458678	23830	413940	25676	396608	27540	362876
25	14796	675838	16585	602962	18383	543966	20194	495675	23018	458187	23861	413137	25707	396422	27571	362446
26	14826	674483	16615	601878	18414	543077	20225	494922	23089	457696	23892	412334	25738	396236	27602	362016
27	14856	673133	16645	600797	18444	542192	20255	494169	23160	457205	23923	411531	25769	396050	27633	361586
28	14886	671789	16675	599720	18474	541309	20285	493416	23231	456714	23954	410728	25800	395864	27664	361156
29	14915	670450	16704	598646	18504	540429	20315	492663	23302	456223	23985	410000	25831	395678	27695	360726
30	14945	669116	16734	597576	18534	539552	20345	491912	23373	455732	24016	409172	25862	395492	27726	360296
31	14975	667787	16764	596510	18564	538677	20376	491161	23444	455241	24047	408344	25893	395306	27757	360000
32	15005	666463	16794	595448	18594	537805	20406	490410	23515	454750	24078	407516	25924	395120	27788	359570
33	15034	665144	16824	594390	18624	536936	20436	489660	23586	454259	24109	406688	25955	394934	27819	359140
34	15064	663831	16854	593335	18654	536070	20466	488910	23657	453768	24140	405860	25986	394748	27850	358710
35	15094	662523	16884	592283	18684	535206	20497	488160	23728	453277	24171	405032	26017	394562	27881	358280
36	15124	661219	16914	591235	18714	534345	20527	487410	23800	452786	24202	404204	26048	394376	27912	357850
37	15153	659921	16944	590191	18744	533487	20557	486660	23871	452295	24233	403376	26079	394190	27943	357420
38	15183	658627	16974	589151	18774	532631	20588	485910	23942	451804	24264	402548	26110	394004	27974	356990
39	15213	657339	17004	588114	18804	531778	20618	485160	24013	451313	24295	401700	26141	393818	28005	356560
40	15243	656055	17033	587080	18834	530928	20648	484410	24084	450822	24326	400852	26172	393632	28036	356130
41	15272	654777	17063	586051	18865	530080	20679	483660	24155	450331	24357	400004	26203	393446	28067	355700
42	15302	653503	17093	585024	18895	529235	20709	482910	24226	449840	24388	399156	26234	393260	28098	355270
43	15332	652234	17123	584001	18925	528393	20739	482160	24297	449349	24419	398308	26265	393074	28129	354840
44	15362	650970	17153	582982	18955	527553	20770	481410	24368	448858	24450	397460	26296	392888	28160	354410
45	15391	649710	17183	581966	18986	526715	20800	480660	24439	448367	24481	396612	26327	392702	28191	353980
46	15421	648456	17213	580953	19016	525880	20831	479910	24508	447876	24512	395764	26358	392516	28222	353550
47	15451	647206	17243	580000	19046	525048	20861	479160	24577	447385	24543	394916	26389	392330	28253	353120
48	15481	645961	17273	579044	19076	524218	20892	478410	24646	446894	24574	394068	26420	392144	28284	352690
49	15511	644720	17303	578093	19106	523391	20921	477660	24715	446403	24605	393220	26451	391958	28315	352260
50	15540	643484	17333	577143	19136	522566	20952	476910	24786	445912	24636	392372	26482	391772	28346	351830
51	15570	642253	17363	576199	19166	521744	20982	476160	24857	445421	24667	391524	26513	391586	28377	351400
52	15600	641026	17393	575264	19197	520925	21013	475410	24928	444930	24698	390676	26544	391400	28408	350970
53	15630	639804	17423	574336	19227	520107	21043	474660	24999	444439	24729	389828	26575	391214	28439	350540
54	15660	638587	17453	573409	19257	519293	21073	473910	25070	443948	24760	388980	26606	391028	28470	350110
55	15690	637374	17483	572483	19287	518480	21103	473160	25141	443457	24791	388132	26637	390842	28501	349680
56	15719	636165	17513	571559	19317	517671	21134	472410	25212	442966	24822	387284	26668	390656	28532	349250
57	15749	634961	17543	570636	19347	516863	21164	471660	25283	442475	24853	386436	26699	390470	28563	348820
58	15779	633761	17573	569714	19378	516058	21195	470910	25354	441984	24884	385588	26730	390284	28594	348390
59	15809	632566	17603	568794	19408	515256	21225	470160	25425	441493	24915	384740	26761	390098	28625	347960
60	15838	631375	17633	567878	19438	514455	21256	469410	25496	441002	24946	383892	26792	389912	28656	347530

TM004-100

TM004-159

/	16°		17°		18°		19°		20°		21°		22°		23°		/
	Tang	Catung	Tang	Catung	Tang	Catung	Tang	Catung	Tang	Catung	Tang	Catung	Tang	Catung	Tang	Catung	
0	28675	348741	30573	327085	32492	367768	34433	290401	36397	274748	38386	260509	40403	247509	42447	235583	60
1	28706	348359	30605	326745	32524	367664	34465	290147	36430	274499	38420	260283	40436	247302	42482	235395	59
2	28738	347937	30637	326406	32556	367560	34498	289893	36463	274250	38453	260057	40470	247095	42516	235205	58
3	28769	347516	30669	326067	32588	367457	34530	289639	36496	274004	38487	259831	40504	246888	42551	235015	57
4	28800	347116	30702	325729	32621	367353	34563	289385	36529	273756	38520	259606	40538	246682	42585	234825	56
5	28832	346716	30734	325392	32653	367250	34596	289131	36562	273509	38553	259381	40572	246476	42619	234636	55
6	28864	346316	30766	325055	32685	367147	34628	288877	36595	273263	38587	259156	40606	246270	42654	234447	54
7	28896	345916	30798	324718	32717	367044	34661	288623	36628	273017	38620	258932	40640	246065	42688	234258	53
8	28927	345517	30830	324381	32749	366941	34693	288369	36661	272771	38654	258708	40674	245860	42722	234069	52
9	28958	345117	30862	324044	32781	366838	34726	288115	36694	272526	38687	258484	40707	245655	42757	233881	51
10	28989	344718	30894	323707	32814	366735	34758	287861	36727	272281	38721	258261	40741	245451	42791	233693	50
11	29021	344319	30926	323370	32846	366632	34791	287607	36760	272036	38754	258038	40775	245246	42826	233505	49
12	29053	343920	30958	323033	32878	366529	34824	287353	36793	271792	38787	257815	40809	245043	42860	233317	48
13	29084	343521	30990	322696	32911	366426	34856	287100	36826	271548	38821	257593	40843	244839	42894	233130	47
14	29116	343122	31022	322359	32943	366323	34889	286847	36859	271304	38854	257371	40877	244636	42929	232943	46
15	29147	342723	31054	322022	32975	366220	34922	286588	36892	271060	38888	257150	40911	244433	42963	232756	45
16	29179	342324	31086	321685	33007	366117	34954	286329	36925	270817	38921	256928	40945	244230	42998	232570	44
17	29210	341925	31118	321348	33039	366014	34987	286070	36958	270573	38955	256707	40979	244027	43032	232383	43
18	29242	341526	31150	321011	33071	365911	35019	285811	36991	270329	38988	256487	41013	243825	43067	232197	42
19	29274	341127	31182	320674	33104	365808	35052	285552	37024	270084	39022	256266	41047	243623	43101	232012	41
20	29305	340728	31214	320337	33136	365705	35085	285293	37057	269840	39055	256046	41081	243422	43136	231826	40
21	29337	340329	31246	320000	33169	365602	35118	285034	37090	269595	39089	255827	41115	243220	43170	231641	39
22	29368	339930	31278	319663	33201	365499	35150	284775	37124	269350	39122	255608	41149	243019	43205	231456	38
23	29399	339531	31310	319326	33233	365396	35183	284516	37157	269105	39156	255389	41183	242819	43239	231271	37
24	29432	339132	31342	318989	33265	365293	35216	284257	37190	268860	39190	255170	41217	242618	43274	231086	36
25	29464	338733	31374	318652	33297	365190	35248	283998	37223	268611	39223	254952	41251	242418	43308	230902	35
26	29495	338334	31406	318315	33330	365087	35281	283739	37256	268362	39257	254734	41285	242218	43343	230718	34
27	29527	337935	31438	317978	33362	364984	35314	283480	37289	268113	39290	254516	41319	242019	43378	230534	33
28	29558	337536	31470	317641	33394	364881	35347	283221	37322	267864	39324	254299	41353	241819	43412	230351	32
29	29590	337137	31502	317304	33426	364778	35379	282962	37355	267615	39357	254082	41387	241620	43447	230167	31
30	29621	336738	31534	316967	33459	364675	35412	282703	37388	267366	39391	253865	41421	241421	43481	229984	30
31	29653	336339	31566	316630	33492	364572	35445	282444	37422	267117	39425	253648	41455	241223	43516	229801	29
32	29684	335940	31598	316293	33524	364469	35477	282185	37455	266868	39458	253432	41489	241025	43550	229619	28
33	29716	335541	31630	315956	33557	364366	35510	281926	37488	266619	39492	253217	41523	240827	43585	229437	27
34	29748	335142	31662	315619	33589	364263	35543	281667	37521	266370	39526	253001	41558	240629	43620	229254	26
35	29780	334743	31694	315282	33621	364160	35576	281408	37554	266121	39560	252786	41592	240432	43654	229073	25
36	29811	334344	31726	314945	33653	364057	35608	281149	37587	265872	39594	252571	41626	240235	43689	228891	24
37	29843	333945	31758	314608	33685	363954	35641	280890	37621	265623	39628	252357	41660	240038	43724	228710	23
38	29875	333546	31790	314271	33717	363851	35674	280631	37654	265374	39662	252142	41694	239841	43758	228528	22
39	29906	333147	31822	313934	33749	363748	35707	280372	37687	265125	39696	251928	41728	239645	43793	228348	21
40	29938	332748	31854	313597	33781	363645	35740	280113	37720	264876	39730	251715	41763	239449	43828	228167	20
41	29970	332349	31886	313260	33813	363542	35772	279854	37754	264627	39764	251502	41797	239253	43862	227987	19
42	30001	331950	31918	312923	33845	363439	35805	279595	37787	264378	39798	251289	41831	239058	43897	227806	18
43	30033	331551	31950	312586	33877	363336	35838	279336	37820	264129	39832	251076	41865	238862	43932	227626	17
44	30065	331152	31982	312249	33909	363233	35871	279077	37853	263880	39866	250864	41899	238668	43966	227447	16
45	30097	330753	32014	311912	33941	363130	35904	278818	37887	263631	39900	250652	41933	238473	44001	227267	15
46	30128	330354	32046	311575	33973	363027	35937	278559	37920	263382	39934	250440	41967	238279	44036	227088	14
47	30160	330000	32078	311238	34005	362924	35970	278300	37953	263133	39968	250229	42001	238084	44071	226909	13
48	30192	329646	32110	310901	34037	362821	36002	278041	37986	262884	39999	250018	42035	237891	44105	226730	12
49	30224	329292	32142	310564	34069	362718	36035	277782	38020	262635	40033	249807	42070	237699	44140	226552	11
50	30255	328938	32174	310227	34101	362615	36068	277523	38053	262386	40067	249597	42105	237504	44175	226374	10
51	30287	328584	32206	309890	34133	362512	36101	277264	38086	262137	40099	249386	42139	237311	44210	226196	9
52	30319	328230	32238	309553	34165	362409	36134	277005	38119	261888	40132	249177	42173	237118	44244	226018	8
53	30351	327876	32270	309216	34197	362306	36167	276746	38152	261639	40166	248968	42207	236925	44279	225840	7
54	30383	327522	32302	308879	34229	362203	36200	276487	38185	261390	40200	248758	42242	236733	44314	225663	6
55	30415	327168	32334	308542	34261	362100	36233	276228	38218	261141	40234	248549	42276	236541	44349	225486	5
56	30447	326814	32366	308205	34293	362000	36265	275969	38251	260892	40268	248340	42310	236349	44384	225309	4
57	30479	326460	32398	307868	34325	361897	36298	275710	38284	260643	40302	248132	42345	236158	44418	225132	3
58	30511	326106	32430	307531	34357	361794	36331	275451	38317	260394	40335	247924	42379	235967	44453	224956	2
59	30543	325752	32462	307194	34389	361691	36364	275192	38350	260145	40369	247716	42413	235776	44488	224780	1
60	30575	325398	32494	306857	34421	361588	36397	274933	38383	259896	40403	247509	42447	235585	44523	224604	0

TM684-162

TM684-161

°	24°		25°		26°		27°		28°		29°		30°		31°	
	Tang	Cetang	Tang	Cetang	Tang	Cetang	Tang	Cetang	Tang	Cetang	Tang	Cetang	Tang	Cetang	Tang	Cetang
0	44523	2.14604	46631	2.14451	48773	2.05030	50953	1.96261	53171	1.88073	55431	1.80405	57735	1.73205	60086	1.66428
1	44558	2.14248	46666	2.14288	48809	2.04879	50989	1.96120	53208	1.87941	55469	1.80281	57774	1.73089	60126	1.66318
2	44593	2.14252	46702	2.14125	48845	2.04728	51026	1.95979	53246	1.87809	55507	1.80158	57813	1.72973	60165	1.66209
3	44627	2.14077	46737	2.13963	48881	2.04577	51063	1.95838	53283	1.87677	55545	1.80034	57851	1.72857	60205	1.66099
4	44662	2.13902	46772	2.13801	48917	2.04426	51100	1.95698	53320	1.87546	55583	1.79911	57889	1.72741	60244	1.65990
5	44697	2.13727	46808	2.13639	48953	2.04276	51136	1.95557	53358	1.87415	55621	1.79788	57927	1.72625	60284	1.65881
6	44732	2.13552	46843	2.13477	48989	2.04125	51173	1.95417	53395	1.87283	55659	1.79665	57965	1.72509	60324	1.65772
7	44767	2.13377	46879	2.13316	49026	2.03975	51209	1.95276	53432	1.87152	55697	1.79542	58007	1.72393	60364	1.65663
8	44802	2.13202	46914	2.13154	49062	2.03825	51246	1.95135	53470	1.87021	55735	1.79419	58046	1.72278	60403	1.65554
9	44837	2.13027	46950	2.12993	49098	2.03675	51283	1.94997	53507	1.86891	55774	1.79296	58085	1.72163	60443	1.65445
10	44872	2.12852	46985	2.12822	49134	2.03526	51319	1.94858	53545	1.86760	55812	1.79174	58124	1.72047	60483	1.65337
11	44907	2.12677	47021	2.12671	49170	2.03376	51356	1.94718	53582	1.86630	55850	1.79051	58162	1.71932	60522	1.65228
12	44942	2.12502	47056	2.12511	49206	2.03227	51393	1.94579	53620	1.86499	55888	1.78929	58200	1.71817	60562	1.65120
13	44977	2.12327	47092	2.12350	49242	2.03078	51430	1.94440	53657	1.86369	55926	1.78807	58238	1.71702	60602	1.65011
14	45012	2.12152	47128	2.12190	49278	2.02929	51467	1.94301	53694	1.86239	55964	1.78685	58276	1.71587	60642	1.64903
15	45047	2.11977	47163	2.12030	49315	2.02780	51504	1.94162	53732	1.86109	56003	1.78563	58314	1.71473	60681	1.64795
16	45082	2.11802	47199	2.11871	49351	2.02631	51540	1.94023	53770	1.85987	56041	1.78441	58352	1.71358	60721	1.64687
17	45117	2.11627	47234	2.11711	49387	2.02482	51577	1.93885	53808	1.85865	56079	1.78319	58390	1.71244	60761	1.64579
18	45152	2.11452	47270	2.11552	49423	2.02333	51614	1.93746	53846	1.85743	56117	1.78198	58428	1.71129	60801	1.64471
19	45187	2.11277	47305	2.11392	49459	2.02184	51651	1.93608	53884	1.85621	56155	1.78077	58466	1.71015	60841	1.64363
20	45222	2.11102	47341	2.11233	49495	2.02035	51688	1.93470	53922	1.85499	56193	1.77955	58504	1.70901	60881	1.64255
21	45257	2.10927	47377	2.11075	49532	2.01886	51724	1.93332	53960	1.85377	56232	1.77834	58542	1.70787	60921	1.64148
22	45292	2.10752	47412	2.10916	49568	2.01737	51761	1.93195	53998	1.85255	56270	1.77713	58580	1.70673	60960	1.64041
23	45327	2.10577	47448	2.10758	49604	2.01588	51798	1.93057	54036	1.85133	56309	1.77592	58618	1.70560	61000	1.63934
24	45362	2.10402	47483	2.10600	49640	2.01439	51835	1.92920	54074	1.85011	56347	1.77471	58656	1.70446	61040	1.63826
25	45397	2.10227	47519	2.10442	49677	2.01290	51872	1.92782	54112	1.84889	56385	1.77351	58694	1.70332	61080	1.63719
26	45432	2.10052	47555	2.10284	49713	2.01141	51909	1.92643	54150	1.84767	56424	1.77230	58732	1.70219	61120	1.63612
27	45467	2.09877	47590	2.10126	49749	2.01000	51946	1.92504	54188	1.84645	56462	1.77110	58770	1.70106	61160	1.63505
28	45502	2.09702	47626	2.09969	49786	2.00860	51983	1.92365	54226	1.84523	56500	1.76990	58808	1.70000	61200	1.63398
29	45537	2.09527	47662	2.09811	49822	2.00711	52020	1.92226	54264	1.84401	56538	1.76869	58846	1.69892	61240	1.63292
30	45572	2.09352	47698	2.09654	49858	2.00562	52057	1.92088	54302	1.84279	56576	1.76749	58884	1.69766	61280	1.63185
31	45607	2.09177	47733	2.09498	49894	2.00413	52094	1.91962	54340	1.84157	56614	1.76630	58922	1.69653	61320	1.63079
32	45642	2.09002	47769	2.09341	49931	2.00277	52131	1.91826	54378	1.84035	56652	1.76510	58960	1.69541	61360	1.62972
33	45677	2.08827	47805	2.09184	49967	2.00131	52168	1.91690	54416	1.83913	56690	1.76390	59002	1.69429	61400	1.62866
34	45712	2.08652	47841	2.09028	50004	1.99986	52205	1.91554	54454	1.83791	56728	1.76270	59040	1.69318	61440	1.62760
35	45747	2.08477	47877	2.08872	50040	1.99841	52242	1.91418	54492	1.83669	56766	1.76150	59080	1.69203	61480	1.62654
36	45782	2.08302	47913	2.08716	50076	1.99695	52279	1.91282	54530	1.83547	56804	1.76032	59120	1.69091	61520	1.62548
37	45817	2.08127	47949	2.08560	50112	1.99550	52316	1.91147	54568	1.83425	56842	1.75913	59160	1.68979	61560	1.62442
38	45852	2.07952	47985	2.08405	50148	1.99406	52353	1.91012	54606	1.83303	56880	1.75794	59200	1.68866	61600	1.62336
39	45887	2.07777	48021	2.08250	50184	1.99261	52390	1.90876	54644	1.83181	56918	1.75675	59240	1.68754	61640	1.62230
40	45922	2.07577	48057	2.08094	50222	1.99116	52427	1.90741	54682	1.83059	56956	1.75556	59280	1.68643	61680	1.62125
41	45957	2.07402	48093	2.07939	50258	1.98972	52464	1.90607	54720	1.82937	57000	1.75437	59320	1.68531	61720	1.62019
42	45992	2.07227	48129	2.07785	50294	1.98828	52501	1.90472	54758	1.82815	57038	1.75319	59360	1.68419	61760	1.61914
43	46027	2.07052	48165	2.07630	50330	1.98684	52538	1.90337	54796	1.82693	57076	1.75200	59400	1.68308	61800	1.61808
44	46062	2.06877	48201	2.07476	50368	1.98540	52575	1.90200	54834	1.82571	57114	1.75082	59440	1.68196	61840	1.61703
45	46097	2.06702	48237	2.07321	50406	1.98396	52612	1.90063	54872	1.82449	57152	1.74964	59480	1.68085	61880	1.61598
46	46132	2.06527	48273	2.07167	50444	1.98252	52649	1.89926	54910	1.82327	57190	1.74846	59520	1.67954	61920	1.61493
47	46167	2.06352	48309	2.07014	50482	1.98108	52686	1.89789	54948	1.82205	57228	1.74728	59560	1.67833	61960	1.61388
48	46202	2.06177	48345	2.06860	50520	1.97966	52724	1.89651	54986	1.82083	57266	1.74610	59600	1.67712	62000	1.61283
49	46237	2.06002	48381	2.06706	50558	1.97823	52761	1.89513	55024	1.81961	57304	1.74492	59640	1.67591	62040	1.61179
50	46272	2.05827	48417	2.06553	50596	1.97680	52798	1.89376	55062	1.81839	57342	1.74375	59680	1.67470	62080	1.61074
51	46307	2.05652	48453	2.06400	50634	1.97537	52836	1.89239	55100	1.81717	57380	1.74257	59720	1.67350	62120	1.60970
52	46342	2.05477	48489	2.06247	50672	1.97393	52873	1.89102	55138	1.81595	57418	1.74140	59760	1.67230	62160	1.60865
53	46377	2.05302	48525	2.06094	50710	1.97249	52910	1.88966	55176	1.81473	57456	1.74023	59800	1.67110	62200	1.60760
54	46412	2.05127	48557	2.05942	50748	1.97105	52947	1.88830	55214	1.81351	57494	1.73905	59840	1.67000	62240	1.60655
55	46447	2.04952	48589	2.05790	50786	1.96961	52984	1.88693	55252	1.81229	57532	1.73790	59880	1.66888	62280	1.60550
56	46482	2.04777	48621	2.05638	50824	1.96817	53022	1.88556	55290	1.81107	57570	1.73675	59920	1.66772	62320	1.60445
57	46517	2.04602	48653	2.05485	50862	1.96672	53060	1.88419	55328	1.80985	57608	1.73560	59960	1.66657	62360	1.60340
58	46552	2.04427	48685	2.05333	50900	1.96528	53096	1.88282	55366	1.80863	57646	1.73445	60000	1.66542	62400	1.60241
59	46587	2.04252	48717	2.05180	50938	1.96384	53134	1.88145	55404	1.80741	57684	1.73330	60040	1.66428	62440	1.60137
60	46622	2.04077	48753	2.05030	50976	1.96241	53171	1.88027	55442	1.80619	57722	1.73215	60080	1.66313	62480	1.60033

TM684-164

TM684-163

No	33°		34°		35°		36°		37°		38°		39°		40°	
	Teng	Ceting	Teng	Ceting	Teng	Ceting	Teng	Ceting	Teng	Ceting	Teng	Ceting	Teng	Ceting	Teng	Ceting
0	62487	1.60033	64941	1.53968	67451	1.48256	70021	1.42815	72654	1.37638	75358	1.32704	78129	1.27994	80978	1.23490
1	62527	1.59930	64942	1.53888	67483	1.48163	70064	1.42726	72699	1.37558	75401	1.32624	78175	1.27917	81027	1.23416
2	62568	1.59826	64943	1.53808	67516	1.48077	70107	1.42638	72743	1.37466	75447	1.32544	78222	1.27841	81075	1.23343
3	62608	1.59723	65065	1.53791	67556	1.47977	70151	1.42550	72788	1.37370	75492	1.32466	78269	1.27764	81123	1.23270
4	62649	1.59620	65106	1.53695	67602	1.47885	70194	1.42462	72832	1.37278	75538	1.32384	78316	1.27688	81171	1.23196
5	62689	1.59517	65148	1.53600	67643	1.47792	70238	1.42374	72877	1.37181	75584	1.32304	78363	1.27611	81220	1.23123
6	62730	1.59414	65189	1.53506	67685	1.47699	70281	1.42286	72921	1.37089	75629	1.32224	78410	1.27535	81268	1.23050
7	62770	1.59311	65231	1.53402	67728	1.47607	70325	1.42198	72966	1.37000	75675	1.32144	78457	1.27458	81316	1.22977
8	62811	1.59208	65272	1.53298	67770	1.47514	70368	1.42110	73010	1.36913	75721	1.32064	78504	1.27382	81364	1.22904
9	62852	1.59105	65314	1.53194	67812	1.47422	70412	1.42022	73055	1.36823	75767	1.31984	78551	1.27306	81413	1.22831
10	62892	1.59002	65355	1.53090	67855	1.47330	70455	1.41934	73100	1.36730	75812	1.31904	78598	1.27230	81461	1.22758
11	62933	1.58900	65397	1.52986	67909	1.47238	70499	1.41847	73144	1.36637	75864	1.31825	78645	1.27153	81509	1.22685
12	62973	1.58797	65438	1.52881	67960	1.47145	70542	1.41759	73189	1.36543	75908	1.31745	78692	1.27077	81558	1.22612
13	63014	1.58695	65480	1.52776	68002	1.47053	70586	1.41672	73234	1.36449	75950	1.31666	78739	1.27001	81606	1.22539
14	63055	1.58593	65521	1.52672	68045	1.46962	70629	1.41585	73278	1.36356	75996	1.31586	78786	1.26925	81655	1.22467
15	63095	1.58490	65563	1.52568	68088	1.46870	70673	1.41497	73323	1.36263	76042	1.31507	78834	1.26849	81703	1.22394
16	63136	1.58388	65604	1.52464	68130	1.46778	70717	1.41409	73368	1.36170	76088	1.31427	78881	1.26774	81752	1.22321
17	63177	1.58286	65646	1.52360	68173	1.46686	70760	1.41322	73413	1.36078	76134	1.31348	78928	1.26698	81800	1.22249
18	63218	1.58184	65688	1.52256	68215	1.46595	70804	1.41235	73457	1.35985	76180	1.31269	78975	1.26622	81849	1.22176
19	63258	1.58083	65729	1.52152	68258	1.46503	70848	1.41148	73502	1.35893	76226	1.31190	79022	1.26546	81898	1.22104
20	63299	1.57981	65771	1.52048	68301	1.46411	70891	1.41061	73547	1.35801	76272	1.31110	79070	1.26471	81946	1.22031
21	63340	1.57879	65813	1.51946	68343	1.46320	70935	1.40974	73592	1.35709	76318	1.31031	79117	1.26395	81995	1.21959
22	63380	1.57778	65854	1.51850	68386	1.46229	70979	1.40887	73637	1.35617	76364	1.30952	79164	1.26319	82044	1.21886
23	63421	1.57676	65896	1.51754	68429	1.46137	71023	1.40800	73681	1.35525	76410	1.30873	79212	1.26244	82092	1.21814
24	63462	1.57575	65938	1.51658	68471	1.46046	71066	1.40714	73726	1.35433	76456	1.30795	79259	1.26169	82141	1.21742
25	63503	1.57474	65980	1.51562	68514	1.45955	71110	1.40627	73771	1.35341	76502	1.30716	79306	1.26093	82190	1.21670
26	63544	1.57372	66021	1.51466	68557	1.45864	71154	1.40540	73816	1.35249	76548	1.30637	79354	1.26018	82238	1.21598
27	63584	1.57271	66063	1.51370	68600	1.45773	71198	1.40454	73861	1.35157	76594	1.30558	79402	1.25943	82287	1.21526
28	63625	1.57170	66105	1.51274	68642	1.45682	71242	1.40368	73906	1.35065	76640	1.30480	79450	1.25867	82335	1.21454
29	63666	1.57069	66147	1.51179	68685	1.45591	71285	1.40281	73951	1.34974	76686	1.30401	79496	1.25792	82383	1.21382
30	63707	1.56969	66189	1.51084	68728	1.45500	71329	1.40195	73996	1.34882	76733	1.30323	79544	1.25717	82434	1.21310
31	63748	1.56868	66230	1.50988	68771	1.45410	71373	1.40109	74041	1.34791	76779	1.30244	79591	1.25642	82483	1.21238
32	63789	1.56767	66272	1.50893	68814	1.45320	71417	1.40022	74086	1.34700	76825	1.30166	79639	1.25567	82531	1.21166
33	63830	1.56666	66314	1.50798	68857	1.45229	71461	1.39936	74131	1.34609	76871	1.30087	79686	1.25492	82579	1.21094
34	63871	1.56566	66356	1.50702	68900	1.45138	71505	1.39850	74176	1.34518	76918	1.30009	79734	1.25417	82629	1.21023
35	63912	1.56466	66398	1.50607	68942	1.45047	71549	1.39764	74221	1.34427	76964	1.29931	79781	1.25343	82678	1.20951
36	63953	1.56366	66440	1.50512	68985	1.44956	71593	1.39679	74267	1.34336	77010	1.29853	79829	1.25268	82727	1.20879
37	63994	1.56266	66482	1.50417	69028	1.44865	71637	1.39593	74312	1.34245	77057	1.29775	79877	1.25193	82776	1.20808
38	64035	1.56166	66524	1.50322	69071	1.44774	71681	1.39507	74357	1.34154	77103	1.29696	79924	1.25118	82825	1.20736
39	64076	1.56066	66566	1.50228	69114	1.44683	71725	1.39421	74402	1.34063	77149	1.29618	79972	1.25044	82874	1.20665
40	64117	1.55966	66608	1.50133	69157	1.44592	71769	1.39336	74447	1.33972	77196	1.29541	80020	1.24969	82923	1.20593
41	64158	1.55866	66650	1.50038	69200	1.44502	71813	1.39250	74492	1.33881	77242	1.29463	80067	1.24895	82972	1.20522
42	64199	1.55766	66692	1.49944	69243	1.44412	71857	1.39165	74538	1.33790	77289	1.29385	80115	1.24820	83021	1.20451
43	64240	1.55666	66734	1.49849	69286	1.44322	71901	1.39079	74583	1.33700	77335	1.29307	80163	1.24746	83071	1.20379
44	64281	1.55567	66776	1.49755	69329	1.44232	71946	1.38994	74628	1.33610	77382	1.29229	80211	1.24672	83120	1.20308
45	64322	1.55467	66818	1.49661	69372	1.44142	71990	1.38909	74674	1.33520	77428	1.29151	80258	1.24597	83169	1.20237
46	64363	1.55368	66860	1.49567	69415	1.44052	72034	1.38824	74719	1.33430	77475	1.29074	80306	1.24523	83218	1.20166
47	64404	1.55269	66902	1.49473	69458	1.43962	72078	1.38738	74764	1.33340	77521	1.28997	80354	1.24449	83268	1.20095
48	64445	1.55170	66944	1.49379	69501	1.43872	72122	1.38653	74810	1.33250	77568	1.28919	80402	1.24375	83317	1.20024
49	64486	1.55071	66986	1.49285	69544	1.43781	72166	1.38568	74855	1.33160	77615	1.28842	80450	1.24301	83366	1.19953
50	64528	1.54972	67028	1.49190	69588	1.43690	72211	1.38484	74900	1.33070	77661	1.28764	80498	1.24227	83415	1.19882
51	64569	1.54873	67071	1.49097	69631	1.43600	72255	1.38399	74946	1.32980	77708	1.28687	80546	1.24153	83465	1.19811
52	64610	1.54774	67115	1.49004	69675	1.43508	72299	1.38314	74991	1.32890	77754	1.28610	80594	1.24079	83514	1.19740
53	64652	1.54675	67158	1.48911	69718	1.43417	72343	1.38229	75037	1.32800	77801	1.28533	80642	1.24005	83564	1.19669
54	64693	1.54576	67197	1.48818	69761	1.43326	72388	1.38145	75082	1.32710	77848	1.28456	80690	1.23931	83613	1.19598
55	64734	1.54478	67239	1.48725	69804	1.43235	72432	1.38060	75128	1.32620	77895	1.28379	80738	1.23858	83662	1.19527
56	64775	1.54379	67281	1.48632	69847	1.43144	72477	1.37976	75173	1.32530	77942	1.28302	80786	1.23784	83712	1.19457
57	64817	1.54281	67324	1.48539	69890	1.43053	72521	1.37891	75219	1.32440	77989	1.28225	80834	1.23710	83761	1.19387
58	64858	1.54183	67366	1.48446	69934	1.42962	72565	1.37807	75264	1.32350	78035	1.28148	80882	1.23637	83811	1.19316
59	64899	1.54085	67409	1.48353	69976	1.42871	72609	1.37722	75310	1.32260	78082	1.28071	80930	1.23563	83860	1.19246
60	64941	1.53986	67451	1.48260	70021	1.42781	72654	1.37638	75355	1.32170	78129	1.27994	80978	1.23490	83910	1.19175

TM684-166

TM684-165

°	63°		61°		49°		44°		44°		45°		45°		
	Tang	Cetang	Tang	Cetang	Tang	Cetang	Tang	Cetang	Tang	Cetang	Tang	Cetang	Tang	Cetang	
0	83910	1.19175	86929	1.15037	90040	1.11061	93252	1.07237	60	96569	1.03553	97700	1.02355	98843	1.01170
1	83960	1.19105	86880	1.14969	90093	1.10996	93306	1.07174	59	96625	1.03493	97756	1.02295	98901	1.01112
2	84009	1.19033	86831	1.14902	90146	1.10931	93360	1.07112	58	96681	1.03433	97813	1.02236	98958	1.01053
3	84059	1.18964	86782	1.14834	90199	1.10867	93415	1.07051	57	96738	1.03372	97870	1.02176	99016	1.00994
4	84108	1.18894	86733	1.14766	90251	1.10802	93469	1.06990	56	96794	1.03312	97927	1.02117	99073	1.00935
5	84158	1.18824	86684	1.14699	90304	1.10737	93524	1.06929	55	96850	1.03252	97984	1.02057	99131	1.00876
6	84208	1.18754	86635	1.14632	90357	1.10672	93578	1.06868	54	96907	1.03192	98041	1.01998	99189	1.00818
7	84258	1.18684	86586	1.14565	90410	1.10607	93633	1.06807	53	96963	1.03132	98098	1.01939	99247	1.00759
8	84307	1.18614	86538	1.14498	90463	1.10543	93688	1.06746	52	97020	1.03072	98155	1.01880	99304	1.00701
9	84357	1.18544	86490	1.14430	90516	1.10478	93742	1.06685	51	97076	1.03012	98213	1.01820	99362	1.00642
10	84407	1.18474	86441	1.14363	90569	1.10414	93797	1.06624	50	97133	1.02952	98270	1.01761	99420	1.00583
11	84457	1.18404	86392	1.14296	90621	1.10349	93852	1.06563	49	97189	1.02892	98327	1.01702	99478	1.00525
12	84507	1.18334	86343	1.14229	90674	1.10285	93906	1.06502	48	97246	1.02832	98384	1.01642	99536	1.00467
13	84556	1.18264	86294	1.14162	90727	1.10220	93961	1.06441	47	97302	1.02772	98441	1.01583	99594	1.00408
14	84606	1.18194	86245	1.14095	90781	1.10156	94016	1.06380	46	97359	1.02713	98499	1.01524	99652	1.00350
15	84656	1.18125	86196	1.14028	90834	1.10091	94071	1.06319	45	97416	1.02653	98556	1.01465	99710	1.00291
16	84706	1.18055	86147	1.13961	90887	1.10027	94125	1.06258	44	97472	1.02593	98613	1.01406	99768	1.00233
17	84756	1.17986	86098	1.13894	90940	1.09963	94180	1.06197	43	97529	1.02533	98671	1.01347	99826	1.00175
18	84806	1.17916	86049	1.13828	90993	1.09899	94235	1.06137	42	97586	1.02474	98728	1.01288	99884	1.00116
19	84856	1.17846	86000	1.13761	91046	1.09834	94290	1.06076	41	97643	1.02414	98786	1.01229	99942	1.00058
20	84906	1.17777	85951	1.13694	91099	1.09770	94345	1.06015	40	97700	1.02355	98843	1.01170	1.00000	1.00000
21	84956	1.17708	85902	1.13627	91153	1.09706	94400	1.05954	39						
22	85006	1.17638	85853	1.13561	91206	1.09642	94455	1.05893	38						
23	85056	1.17569	85804	1.13494	91259	1.09578	94510	1.05832	37						
24	85107	1.17500	85755	1.13427	91313	1.09514	94565	1.05771	36						
25	85157	1.17430	85706	1.13361	91366	1.09450	94620	1.05710	35						
26	85207	1.17361	85657	1.13295	91419	1.09386	94675	1.05649	34						
27	85257	1.17292	85608	1.13228	91473	1.09322	94731	1.05588	33						
28	85308	1.17223	85559	1.13162	91526	1.09258	94786	1.05527	32						
29	85358	1.17154	85510	1.13096	91580	1.09195	94841	1.05466	31						
30	85408	1.17085	85461	1.13029	91633	1.09131	94896	1.05405	30						
31	85458	1.17016	85412	1.12963	91687	1.09067	94952	1.05344	29						
32	85509	1.16947	85363	1.12897	91740	1.09003	95007	1.05283	28						
33	85559	1.16878	85314	1.12831	91794	1.08940	95062	1.05222	27						
34	85609	1.16809	85265	1.12765	91847	1.08876	95118	1.05161	26						
35	85660	1.16741	85216	1.12699	91901	1.08813	95173	1.05100	25						
36	85710	1.16672	85167	1.12633	91955	1.08749	95229	1.05039	24						
37	85761	1.16603	85118	1.12567	92008	1.08686	95284	1.04978	23						
38	85811	1.16535	85069	1.12501	92062	1.08622	95340	1.04917	22						
39	85861	1.16466	85020	1.12435	92116	1.08559	95395	1.04856	21						
40	85912	1.16398	84971	1.12369	92170	1.08496	95451	1.04795	20						
41	85963	1.16329	84922	1.12303	92224	1.08432	95506	1.04734	19						
42	86014	1.16261	84873	1.12238	92277	1.08369	95562	1.04673	18						
43	86064	1.16192	84824	1.12172	92331	1.08306	95618	1.04612	17						
44	86115	1.16124	84775	1.12106	92385	1.08243	95673	1.04551	16						
45	86166	1.16056	84726	1.12041	92439	1.08179	95729	1.04490	15						
46	86216	1.15987	84677	1.11975	92493	1.08116	95785	1.04429	14						
47	86267	1.15919	84628	1.11909	92547	1.08053	95841	1.04368	13						
48	86318	1.15851	84579	1.11844	92601	1.07990	95897	1.04307	12						
49	86368	1.15783	84530	1.11778	92655	1.07927	95952	1.04246	11						
50	86419	1.15715	84481	1.11713	92709	1.07864	96008	1.04185	10						
51	86470	1.15647	84432	1.11648	92763	1.07801	96064	1.04124	9						
52	86521	1.15579	84383	1.11582	92817	1.07738	96120	1.04063	8						
53	86572	1.15511	84334	1.11517	92872	1.07676	96176	1.04002	7						
54	86623	1.15443	84285	1.11452	92926	1.07613	96232	1.03941	6						
55	86674	1.15375	84236	1.11387	92980	1.07551	96288	1.03880	5						
56	86725	1.15308	84187	1.11321	93034	1.07489	96344	1.03819	4						
57	86776	1.15241	84138	1.11256	93088	1.07427	96400	1.03758	3						
58	86827	1.15174	84089	1.11191	93143	1.07365	96457	1.03697	2						
59	86878	1.15107	84040	1.11126	93197	1.07303	96513	1.03636	1						
60	86929	1.15040	83991	1.11061	93252	1.07241	96569	1.03575	0						

TM 684-168

TM 684-167

/	89°		90°		91°		92°		93°		94°		95°		96°		97°	
	Sec.	Cent.	Sec.	Cent.	Sec.	Cent.	Sec.	Cent.	Sec.	Cent.	Sec.	Cent.	Sec.	Cent.	Sec.	Cent.	Sec.	Cent.
0	Infinite	1.0001	57.999	1.0006	28.654	1.0014	18.107	69	1.0024	14.335	1.0038	11.474	1.0055	9.5668	1.0075	8.2055	69	1.0075
1	3437.70	1.0002	56.359	1.0006	28.417	1.0014	18.002	59	1.0025	14.276	1.0038	11.436	1.0055	9.5404	1.0075	8.1861	59	1.0075
2	1718.90	1.0002	55.530	1.0006	28.184	1.0014	17.897	58	1.0025	14.217	1.0039	11.398	1.0056	9.5141	1.0076	8.1646	58	1.0076
3	1145.90	1.0002	54.718	1.0006	27.953	1.0014	17.794	57	1.0025	14.159	1.0039	11.360	1.0056	9.4880	1.0076	8.1476	57	1.0076
4	859.44	1.0002	53.718	1.0006	27.730	1.0014	17.692	56	1.0025	14.101	1.0039	11.323	1.0056	9.4620	1.0076	8.1285	56	1.0076
5	687.55	1.0002	52.891	1.0007	27.508	1.0014	17.591	55	1.0025	14.043	1.0039	11.285	1.0057	9.4362	1.0077	8.1094	55	1.0077
6	572.96	1.0002	52.090	1.0007	27.290	1.0015	17.491	54	1.0026	13.986	1.0040	11.249	1.0057	9.4105	1.0077	8.0903	54	1.0077
7	491.71	1.0002	51.313	1.0007	27.075	1.0015	17.393	53	1.0026	13.929	1.0040	11.213	1.0057	9.3850	1.0078	8.0717	53	1.0078
8	429.72	1.0002	50.558	1.0007	26.864	1.0015	17.295	52	1.0026	13.874	1.0040	11.176	1.0058	9.3596	1.0078	8.0529	52	1.0078
9	381.97	1.0002	49.826	1.0007	26.655	1.0015	17.200	51	1.0026	13.818	1.0040	11.140	1.0058	9.3343	1.0078	8.0342	51	1.0078
10	343.77	1.0002	49.114	1.0007	26.450	1.0015	17.108	50	1.0026	13.763	1.0041	11.104	1.0058	9.3092	1.0079	8.0156	50	1.0079
11	312.52	1.0002	48.422	1.0007	26.249	1.0015	17.018	49	1.0027	13.708	1.0041	11.069	1.0058	9.2842	1.0079	7.9971	49	1.0079
12	286.48	1.0002	47.750	1.0007	26.050	1.0016	17.914	48	1.0027	13.654	1.0041	11.033	1.0059	9.2593	1.0079	7.9787	48	1.0079
13	264.44	1.0002	47.096	1.0007	25.854	1.0016	17.821	47	1.0027	13.600	1.0041	10.998	1.0059	9.2346	1.0080	7.9604	47	1.0080
14	245.55	1.0002	46.460	1.0008	25.661	1.0016	17.730	46	1.0027	13.547	1.0042	10.963	1.0059	9.2100	1.0080	7.9421	46	1.0080
15	229.18	1.0002	45.840	1.0008	25.471	1.0016	17.639	45	1.0027	13.494	1.0042	10.929	1.0060	9.1855	1.0080	7.9240	45	1.0080
16	214.86	1.0002	45.237	1.0008	25.284	1.0016	17.549	44	1.0028	13.441	1.0043	10.894	1.0060	9.1612	1.0081	7.9059	44	1.0081
17	202.22	1.0002	44.650	1.0008	25.100	1.0016	17.460	43	1.0028	13.389	1.0043	10.860	1.0060	9.1370	1.0081	7.8879	43	1.0081
18	190.99	1.0002	44.077	1.0008	24.918	1.0017	17.372	42	1.0028	13.337	1.0043	10.826	1.0061	9.1129	1.0082	7.8700	42	1.0082
19	180.73	1.0003	43.520	1.0008	24.739	1.0017	17.285	41	1.0028	13.286	1.0043	10.792	1.0061	9.0889	1.0082	7.8522	41	1.0082
20	171.89	1.0003	42.976	1.0008	24.562	1.0017	17.198	40	1.0029	13.235	1.0043	10.758	1.0061	9.0651	1.0082	7.8344	40	1.0082
21	163.70	1.0003	42.445	1.0008	24.388	1.0017	17.113	39	1.0029	13.184	1.0044	10.725	1.0062	9.0414	1.0083	7.8168	39	1.0083
22	156.26	1.0003	41.928	1.0008	24.216	1.0017	17.028	38	1.0029	13.134	1.0044	10.692	1.0062	9.0179	1.0083	7.7997	38	1.0083
23	149.47	1.0003	41.423	1.0009	24.047	1.0017	16.944	37	1.0029	13.084	1.0044	10.659	1.0062	8.9944	1.0084	7.7817	37	1.0084
24	143.24	1.0003	40.930	1.0009	23.880	1.0018	16.861	36	1.0029	13.034	1.0044	10.626	1.0063	8.9711	1.0084	7.7649	36	1.0084
25	137.51	1.0003	40.448	1.0009	23.716	1.0018	16.779	35	1.0030	12.985	1.0045	10.593	1.0063	8.9479	1.0084	7.7489	35	1.0084
26	132.22	1.0003	39.978	1.0009	23.553	1.0018	16.698	34	1.0030	12.937	1.0045	10.561	1.0064	8.9248	1.0085	7.7326	34	1.0085
27	127.32	1.0003	39.518	1.0009	23.393	1.0018	16.617	33	1.0030	12.888	1.0045	10.529	1.0064	8.9018	1.0085	7.7174	33	1.0085
28	122.84	1.0003	39.069	1.0009	23.235	1.0018	16.538	32	1.0030	12.840	1.0046	10.497	1.0064	8.8790	1.0085	7.7023	32	1.0085
29	118.54	1.0003	38.631	1.0009	23.079	1.0018	16.459	31	1.0031	12.793	1.0046	10.465	1.0064	8.8563	1.0086	7.6873	31	1.0086
30	114.59	1.0003	38.201	1.0009	22.925	1.0019	16.380	30	1.0031	12.745	1.0046	10.433	1.0065	8.8337	1.0086	7.6613	30	1.0086
31	110.90	1.0003	37.782	1.0010	22.774	1.0019	16.303	29	1.0031	12.698	1.0046	10.402	1.0065	8.8112	1.0087	7.6444	29	1.0087
32	107.43	1.0003	37.371	1.0010	22.624	1.0019	16.226	28	1.0031	12.652	1.0047	10.371	1.0065	8.7888	1.0087	7.6276	28	1.0087
33	104.17	1.0004	36.969	1.0010	22.476	1.0019	16.150	27	1.0032	12.606	1.0047	10.340	1.0066	8.7665	1.0087	7.6108	27	1.0087
34	101.11	1.0004	36.576	1.0010	22.330	1.0019	16.075	26	1.0032	12.561	1.0047	10.309	1.0066	8.7444	1.0088	7.5942	26	1.0088
35	98.223	1.0004	36.191	1.0010	22.186	1.0019	16.000	25	1.0032	12.514	1.0048	10.278	1.0066	8.7223	1.0088	7.5776	25	1.0088
36	95.493	1.0004	35.814	1.0010	22.044	1.0020	15.926	24	1.0032	12.469	1.0048	10.248	1.0067	8.7004	1.0089	7.5611	24	1.0089
37	92.914	1.0004	35.445	1.0010	21.904	1.0020	15.853	23	1.0033	12.424	1.0048	10.217	1.0067	8.6786	1.0089	7.5446	23	1.0089
38	90.489	1.0004	35.084	1.0010	21.765	1.0020	15.780	22	1.0033	12.379	1.0049	10.187	1.0068	8.6569	1.0089	7.5282	22	1.0089
39	88.149	1.0004	34.729	1.0011	21.629	1.0020	15.708	21	1.0033	12.335	1.0049	10.157	1.0068	8.6353	1.0090	7.5119	21	1.0090
40	85.946	1.0004	34.382	1.0011	21.494	1.0020	15.637	20	1.0033	12.291	1.0049	10.127	1.0068	8.6138	1.0090	7.4957	20	1.0090
41	83.849	1.0004	34.042	1.0011	21.360	1.0021	15.566	19	1.0033	12.248	1.0049	10.098	1.0068	8.5924	1.0090	7.4795	19	1.0090
42	81.853	1.0004	33.708	1.0011	21.228	1.0021	15.496	18	1.0034	12.204	1.0050	10.068	1.0069	8.5711	1.0091	7.4634	18	1.0091
43	79.950	1.0004	33.381	1.0011	21.098	1.0021	15.427	17	1.0034	12.161	1.0050	10.039	1.0069	8.5499	1.0091	7.4474	17	1.0091
44	78.133	1.0004	33.060	1.0011	20.970	1.0021	15.358	16	1.0034	12.118	1.0050	10.010	1.0069	8.5285	1.0092	7.4315	16	1.0092
45	76.396	1.0005	32.745	1.0011	20.843	1.0021	15.290	15	1.0034	12.076	1.0050	9.9812	1.0070	8.5079	1.0092	7.4156	15	1.0092
46	74.736	1.0005	32.437	1.0012	20.717	1.0022	15.222	14	1.0035	12.034	1.0051	9.9525	1.0070	8.4871	1.0092	7.3998	14	1.0092
47	73.146	1.0005	32.134	1.0012	20.593	1.0022	15.155	13	1.0035	11.992	1.0051	9.9239	1.0071	8.4663	1.0093	7.3840	13	1.0093
48	71.622	1.0005	31.836	1.0012	20.471	1.0022	15.089	12	1.0035	11.950	1.0051	9.8955	1.0071	8.4457	1.0093	7.3683	12	1.0093
49	70.160	1.0005	31.544	1.0012	20.350	1.0022	15.023	11	1.0035	11.909	1.0052	9.8672	1.0071	8.4251	1.0094	7.3527	11	1.0094
50	68.757	1.0005	31.257	1.0012	20.230	1.0022	14.958	10	1.0036	11.868	1.0052	9.8391	1.0071	8.4046	1.0094	7.3372	10	1.0094
51	67.409	1.0005	30.976	1.0012	20.112	1.0023	14.893	9	1.0036	11.828	1.0052	9.8112	1.0072	8.3843	1.0094	7.3217	9	1.0094
52	66.113	1.0005	30.699	1.0012	19.995	1.0023	14.829	8	1.0036	11.787	1.0053	9.7834	1.0072	8.3640	1.0095	7.3063	8	1.0095
53	64.866	1.0005	30.428	1.0013	19.880	1.0023	14.767	7	1.0036	11.747	1.0053	9.7558	1.0073	8.3439	1.0095	7.2909	7	1.0095
54	63.664	1.0005	30.161	1.0013	19.766	1.0023	14.702	6	1.0037	11.707	1.0053	9.7283	1.0073	8.3239	1.0096	7.2757	6	1.0096
55	62.507	1.0005	29.899	1.0013	19.653	1.0023	14.640	5	1.0037	11.668	1.0053	9.7010	1.0074	8.3039	1.0096	7.2604	5	1.0096
56	61.391	1.0006	29.641	1.0013	19.541	1.0024	14.578	4	1.0037	11.629	1.0054	9.6739	1.0074	8.2840	1.0097	7.2453	4	1.0097
57	60.314	1.0006	29.388	1.0013	19.431	1.0024	14.517	3	1.0037	11.589	1.0054	9.6469	1.0074	8.2642	1.0097	7.2302	3	1.0097
58	59.274	1.0006	29.139	1.0013	19.322	1.0024	14.456	2	1.0038	11.550	1.0054	9.6200	1.0074	8.2446	1.0097	7.2152	2	1.0097
59	58.270	1.0006	28.894	1.0013	19.214	1.0024	14.395	1	1.0038	11.512	1.0055	9.5933	1.0075	8.2250	1.0098	7.2002	1	1.

8°		9°		10°		11°		12°		13°		14°		15°	
Sec.	Cons.	Sec.	Cons.	Sec.	Cons.	Sec.	Cons.	Sec.	Cons.	Sec.	Cons.	Sec.	Cons.	Sec.	Cons.
0	1.0098	7.1853	1.0125	6.3924	1.0154	5.7588	1.0187	5.2408	4.8097	1.0223	4.4454	1.0306	4.1336	1.0353	3.8637
1	1.0099	7.1704	1.0125	6.3807	1.0155	5.7493	1.0188	5.2330	4.8032	1.0224	4.4398	1.0307	4.1287	1.0354	3.8595
2	1.0099	7.1555	1.0125	6.3690	1.0155	5.7398	1.0188	5.2252	4.7966	1.0225	4.4342	1.0308	4.1239	1.0354	3.8553
3	1.0099	7.1406	1.0126	6.3574	1.0156	5.7304	1.0189	5.2174	4.7901	1.0226	4.4287	1.0309	4.1191	1.0355	3.8512
4	1.0100	7.1257	1.0126	6.3458	1.0156	5.7210	1.0189	5.2097	4.7835	1.0226	4.4231	1.0310	4.1144	1.0356	3.8470
5	1.0100	7.1108	1.0127	6.3343	1.0157	5.7117	1.0190	5.2019	4.7770	1.0227	4.4176	1.0311	4.1096	1.0357	3.8428
6	1.0101	7.0959	1.0127	6.3228	1.0157	5.7023	1.0191	5.1942	4.7706	1.0227	4.4121	1.0311	4.1048	1.0358	3.8387
7	1.0101	7.0810	1.0128	6.3113	1.0158	5.6938	1.0191	5.1865	4.7641	1.0228	4.4065	1.0311	4.1001	1.0358	3.8346
8	1.0102	7.0661	1.0128	6.2998	1.0158	5.6843	1.0192	5.1788	4.7576	1.0228	4.4011	1.0312	4.0953	1.0359	3.8304
9	1.0102	7.0512	1.0129	6.2883	1.0159	5.6748	1.0192	5.1712	4.7512	1.0229	4.3956	1.0312	4.0906	1.0360	3.8263
10	1.0102	7.0363	1.0129	6.2768	1.0159	5.6653	1.0193	5.1636	4.7448	1.0230	4.3901	1.0314	4.0859	1.0361	3.8222
11	1.0103	7.0214	1.0130	6.2653	1.0160	5.6558	1.0193	5.1560	4.7384	1.0230	4.3847	1.0314	4.0812	1.0362	3.8181
12	1.0103	7.0065	1.0130	6.2538	1.0160	5.6463	1.0194	5.1484	4.7320	1.0231	4.3792	1.0315	4.0765	1.0362	3.8140
13	1.0104	7.0016	1.0131	6.2423	1.0161	5.6379	1.0195	5.1409	4.7256	1.0232	4.3738	1.0316	4.0718	1.0363	3.8100
14	1.0104	6.9967	1.0131	6.2308	1.0162	5.6294	1.0195	5.1333	4.7193	1.0232	4.3684	1.0317	4.0672	1.0364	3.8059
15	1.0105	6.9918	1.0132	6.2193	1.0162	5.6210	1.0196	5.1258	4.7130	1.0233	4.3630	1.0318	4.0627	1.0365	3.8018
16	1.0105	6.9869	1.0132	6.2078	1.0163	5.6126	1.0196	5.1183	4.7067	1.0234	4.3576	1.0319	4.0582	1.0366	3.7978
17	1.0105	6.9820	1.0133	6.1963	1.0164	5.6042	1.0197	5.1109	4.7004	1.0235	4.3522	1.0320	4.0537	1.0367	3.7937
18	1.0106	6.9771	1.0133	6.1850	1.0164	5.5958	1.0198	5.1034	4.6942	1.0235	4.3469	1.0320	4.0492	1.0367	3.7897
19	1.0106	6.9722	1.0134	6.1737	1.0165	5.5874	1.0198	5.0960	4.6879	1.0236	4.3415	1.0321	4.0446	1.0368	3.7857
20	1.0107	6.9673	1.0134	6.1624	1.0165	5.5790	1.0199	5.0886	4.6817	1.0236	4.3362	1.0321	4.0401	1.0369	3.7816
21	1.0107	6.9524	1.0135	6.1511	1.0165	5.5706	1.0199	5.0812	4.6754	1.0237	4.3309	1.0322	4.0356	1.0370	3.7776
22	1.0107	6.9475	1.0135	6.1398	1.0166	5.5622	1.0200	5.0739	4.6692	1.0237	4.3256	1.0323	4.0311	1.0371	3.7736
23	1.0108	6.9426	1.0136	6.1285	1.0166	5.5538	1.0201	5.0666	4.6631	1.0238	4.3203	1.0324	4.0266	1.0371	3.7696
24	1.0108	6.9377	1.0136	6.1172	1.0167	5.5454	1.0201	5.0593	4.6569	1.0239	4.3150	1.0325	4.0221	1.0372	3.7657
25	1.0109	6.9328	1.0137	6.1059	1.0167	5.5370	1.0202	5.0520	4.6508	1.0240	4.3098	1.0325	4.0176	1.0373	3.7617
26	1.0109	6.9279	1.0137	6.0946	1.0168	5.5286	1.0202	5.0447	4.6446	1.0241	4.3045	1.0326	4.0131	1.0374	3.7577
27	1.0110	6.9230	1.0138	6.0833	1.0169	5.5202	1.0203	5.0374	4.6385	1.0241	4.2992	1.0327	4.0086	1.0375	3.7538
28	1.0110	6.9181	1.0138	6.0720	1.0169	5.5118	1.0204	5.0302	4.6324	1.0242	4.2939	1.0328	4.0041	1.0376	3.7498
29	1.0111	6.9132	1.0139	6.0607	1.0170	5.5034	1.0205	5.0230	4.6263	1.0242	4.2886	1.0328	3.9996	1.0377	3.7459
30	1.0111	6.9083	1.0139	6.0494	1.0170	5.4950	1.0205	5.0158	4.6202	1.0243	4.2833	1.0329	3.9951	1.0378	3.7420
31	1.0111	6.9034	1.0140	6.0381	1.0171	5.4866	1.0205	5.0087	4.6142	1.0243	4.2780	1.0330	3.9906	1.0378	3.7380
32	1.0112	6.8985	1.0140	6.0268	1.0171	5.4782	1.0206	5.0015	4.6081	1.0244	4.2728	1.0331	3.9861	1.0379	3.7341
33	1.0112	6.8936	1.0141	6.0155	1.0172	5.4698	1.0207	4.9944	4.6021	1.0245	4.2676	1.0332	3.9816	1.0380	3.7302
34	1.0113	6.8887	1.0141	6.0042	1.0172	5.4614	1.0208	4.9873	4.5961	1.0246	4.2625	1.0333	3.9771	1.0381	3.7263
35	1.0113	6.8838	1.0142	5.9929	1.0173	5.4530	1.0208	4.9802	4.5901	1.0246	4.2574	1.0334	3.9726	1.0382	3.7224
36	1.0114	6.8789	1.0142	5.9816	1.0174	5.4446	1.0209	4.9732	4.5841	1.0247	4.2523	1.0335	3.9681	1.0383	3.7185
37	1.0114	6.8740	1.0143	5.9703	1.0174	5.4362	1.0210	4.9661	4.5782	1.0248	4.2472	1.0336	3.9637	1.0384	3.7146
38	1.0115	6.8691	1.0143	5.9590	1.0175	5.4278	1.0210	4.9590	4.5722	1.0248	4.2421	1.0337	3.9593	1.0385	3.7107
39	1.0115	6.8642	1.0144	5.9477	1.0175	5.4194	1.0211	4.9519	4.5663	1.0249	4.2370	1.0338	3.9549	1.0386	3.7068
40	1.0115	6.8593	1.0144	5.9364	1.0176	5.4110	1.0211	4.9448	4.5604	1.0249	4.2320	1.0339	3.9505	1.0387	3.7029
41	1.0116	6.8544	1.0145	5.9251	1.0176	5.4026	1.0212	4.9377	4.5545	1.0250	4.2270	1.0340	3.9461	1.0388	3.6990
42	1.0116	6.8495	1.0145	5.9138	1.0177	5.3943	1.0212	4.9306	4.5486	1.0251	4.2220	1.0341	3.9417	1.0389	3.6951
43	1.0117	6.8446	1.0146	5.9025	1.0177	5.3860	1.0213	4.9235	4.5428	1.0252	4.2170	1.0342	3.9373	1.0390	3.6912
44	1.0117	6.8397	1.0146	5.8912	1.0178	5.3777	1.0213	4.9164	4.5369	1.0252	4.2120	1.0343	3.9329	1.0391	3.6873
45	1.0118	6.8348	1.0147	5.8799	1.0178	5.3694	1.0214	4.9093	4.5311	1.0253	4.2070	1.0344	3.9285	1.0392	3.6834
46	1.0118	6.8299	1.0147	5.8686	1.0179	5.3611	1.0214	4.9022	4.5253	1.0254	4.2020	1.0345	3.9241	1.0393	3.6795
47	1.0119	6.8250	1.0148	5.8573	1.0179	5.3528	1.0215	4.8951	4.5195	1.0255	4.1970	1.0346	3.9197	1.0394	3.6756
48	1.0119	6.8201	1.0148	5.8460	1.0180	5.3445	1.0215	4.8880	4.5137	1.0256	4.1920	1.0347	3.9153	1.0395	3.6717
49	1.0120	6.8152	1.0149	5.8347	1.0180	5.3362	1.0216	4.8809	4.5079	1.0257	4.1870	1.0348	3.9109	1.0396	3.6678
50	1.0120	6.8103	1.0149	5.8234	1.0181	5.3279	1.0216	4.8738	4.5021	1.0258	4.1820	1.0349	3.9065	1.0397	3.6639
51	1.0121	6.8054	1.0150	5.8121	1.0182	5.3196	1.0217	4.8667	4.4964	1.0259	4.1770	1.0350	3.9021	1.0398	3.6600
52	1.0121	6.8005	1.0150	5.8008	1.0182	5.3113	1.0218	4.8596	4.4907	1.0259	4.1720	1.0351	3.8977	1.0399	3.6561
53	1.0122	6.7956	1.0151	5.7895	1.0183	5.2994	1.0219	4.8525	4.4850	1.0258	4.1670	1.0352	3.8933	1.0400	3.6522
54	1.0122	6.7907	1.0151	5.7782	1.0184	5.2881	1.0220	4.8454	4.4793	1.0259	4.1620	1.0353	3.8889	1.0401	3.6483
55	1.0123	6.7858	1.0152	5.7669	1.0185	5.2768	1.0221	4.8383	4.4736	1.0260	4.1570	1.0354	3.8845	1.0402	3.6444
56	1.0123	6.7809	1.0152	5.7556	1.0186	5.2655	1.0222	4.8312	4.4679	1.0261	4.1520	1.0355	3.8801	1.0403	3.6405
57	1.0124	6.7760	1.0153	5.7443	1.0187	5.2542	1.0223	4.8241	4.4622	1.0262	4.1470	1.0356	3.8757	1.0404	3.6366
58	1.0124	6.7711	1.0153	5.7330	1.0188	5.2429	1.0224	4.8170	4.4565	1.0263	4.1420	1.0357	3.8713	1.0405	3.6327
59	1.0125	6.7662	1.0154	5.7217	1.0189	5.2316	1.0225	4.8100	4.4508	1.0264	4.1370	1.0358	3.8669	1.0406	3.6288
60	1.0125	6.7613	1.0154	5.7104	1.0190	5.2203	1.0226	4.8030	4.4451	1.0265	4.1320	1.0359	3.8625	1.0407	3.6249

TM004-172

TM004-171

/	16°		17°		18°		19°		20°		21°		22°		23°		/
	Sec.	Consec.	Sec.	Consec.	Sec.	Consec.	Sec.	Consec.	Sec.	Consec.	Sec.	Consec.	Sec.	Consec.	Sec.	Consec.	
0	1.0403	3.5379	1.0457	3.4203	1.0515	3.2361	1.0576	3.0715	1.0642	2.9238	1.0711	2.7904	1.0785	2.6695	1.0864	2.5593	60
1	1.0404	3.5383	1.0458	3.4170	1.0516	3.2333	1.0577	3.0689	1.0643	2.9215	1.0712	2.7883	1.0786	2.6675	1.0865	2.5575	59
2	1.0405	3.5386	1.0459	3.4138	1.0517	3.2305	1.0578	3.0664	1.0644	2.9191	1.0713	2.7862	1.0788	2.6656	1.0866	2.5558	58
3	1.0406	3.5389	1.0460	3.4106	1.0518	3.2274	1.0579	3.0638	1.0645	2.9168	1.0714	2.7841	1.0789	2.6637	1.0867	2.5540	57
4	1.0407	3.5391	1.0461	3.4073	1.0519	3.2245	1.0580	3.0612	1.0646	2.9145	1.0715	2.7820	1.0790	2.6618	1.0868	2.5523	56
5	1.0408	3.5392	1.0462	3.4041	1.0520	3.2216	1.0581	3.0586	1.0647	2.9122	1.0716	2.7799	1.0791	2.6599	1.0869	2.5506	55
6	1.0409	3.5393	1.0463	3.4009	1.0521	3.2188	1.0582	3.0561	1.0648	2.9098	1.0717	2.7778	1.0792	2.6580	1.0870	2.5488	54
7	1.0410	3.5394	1.0464	3.3977	1.0522	3.2159	1.0583	3.0536	1.0649	2.9075	1.0718	2.7757	1.0793	2.6561	1.0871	2.5471	53
8	1.0411	3.5395	1.0465	3.3945	1.0523	3.2131	1.0584	3.0511	1.0650	2.9052	1.0719	2.7736	1.0794	2.6542	1.0872	2.5453	52
9	1.0412	3.5395	1.0466	3.3913	1.0524	3.2102	1.0585	3.0486	1.0651	2.9029	1.0720	2.7715	1.0795	2.6523	1.0873	2.5436	51
10	1.0413	3.5395	1.0466	3.3881	1.0525	3.2074	1.0587	3.0458	1.0652	2.9006	1.0721	2.7694	1.0796	2.6504	1.0874	2.5419	50
11	1.0413	3.5379	1.0467	3.3849	1.0526	3.2045	1.0588	3.0433	1.0653	2.8983	1.0722	2.7674	1.0799	2.6485	1.0877	2.5402	49
12	1.0413	3.5383	1.0468	3.3817	1.0527	3.2017	1.0589	3.0407	1.0654	2.8960	1.0723	2.7653	1.0801	2.6466	1.0880	2.5384	48
13	1.0414	3.5387	1.0469	3.3785	1.0528	3.1989	1.0590	3.0382	1.0655	2.8937	1.0724	2.7632	1.0802	2.6447	1.0881	2.5367	47
14	1.0415	3.5391	1.0470	3.3754	1.0529	3.1960	1.0591	3.0357	1.0656	2.8915	1.0725	2.7611	1.0803	2.6428	1.0882	2.5350	46
15	1.0416	3.5395	1.0471	3.3722	1.0530	3.1932	1.0592	3.0331	1.0657	2.8892	1.0726	2.7591	1.0804	2.6410	1.0883	2.5333	45
16	1.0417	3.5399	1.0472	3.3690	1.0531	3.1904	1.0593	3.0306	1.0658	2.8869	1.0727	2.7570	1.0805	2.6391	1.0884	2.5316	44
17	1.0418	3.5403	1.0473	3.3659	1.0532	3.1876	1.0594	3.0281	1.0659	2.8846	1.0728	2.7550	1.0806	2.6372	1.0885	2.5299	43
18	1.0419	3.5407	1.0474	3.3627	1.0533	3.1848	1.0595	3.0256	1.0660	2.8824	1.0729	2.7529	1.0807	2.6352	1.0886	2.5282	42
19	1.0420	3.5411	1.0475	3.3596	1.0534	3.1820	1.0596	3.0231	1.0661	2.8801	1.0730	2.7509	1.0808	2.6333	1.0887	2.5264	41
20	1.0420	3.5415	1.0476	3.3565	1.0535	3.1792	1.0598	3.0206	1.0662	2.8778	1.0731	2.7488	1.0811	2.6316	1.0889	2.5247	40
21	1.0421	3.5419	1.0477	3.3534	1.0536	3.1764	1.0599	3.0181	1.0663	2.8756	1.0732	2.7468	1.0812	2.6297	1.0892	2.5230	39
22	1.0422	3.5423	1.0478	3.3502	1.0537	3.1736	1.0600	3.0156	1.0664	2.8733	1.0733	2.7447	1.0813	2.6279	1.0893	2.5213	38
23	1.0423	3.5427	1.0479	3.3471	1.0538	3.1708	1.0601	3.0131	1.0665	2.8711	1.0734	2.7427	1.0815	2.6260	1.0895	2.5196	37
24	1.0424	3.5431	1.0479	3.3440	1.0539	3.1681	1.0602	3.0106	1.0666	2.8688	1.0735	2.7406	1.0816	2.6242	1.0896	2.5179	36
25	1.0425	3.5435	1.0480	3.3409	1.0540	3.1653	1.0603	3.0081	1.0667	2.8666	1.0736	2.7386	1.0817	2.6223	1.0897	2.5163	35
26	1.0426	3.5439	1.0481	3.3378	1.0541	3.1625	1.0604	3.0056	1.0668	2.8644	1.0737	2.7366	1.0819	2.6204	1.0899	2.5146	34
27	1.0427	3.5443	1.0482	3.3347	1.0542	3.1597	1.0605	3.0031	1.0669	2.8621	1.0738	2.7346	1.0820	2.6186	1.0900	2.5129	33
28	1.0428	3.5447	1.0483	3.3316	1.0543	3.1570	1.0606	3.0007	1.0670	2.8599	1.0739	2.7325	1.0821	2.6168	1.0901	2.5112	32
29	1.0429	3.5451	1.0484	3.3285	1.0544	3.1543	1.0607	2.9982	1.0671	2.8577	1.0740	2.7305	1.0822	2.6150	1.0902	2.5095	31
30	1.0429	3.5455	1.0485	3.3255	1.0545	3.1515	1.0608	2.9957	1.0672	2.8554	1.0741	2.7285	1.0824	2.6131	1.0904	2.5078	30
31	1.0430	3.5459	1.0486	3.3224	1.0546	3.1488	1.0609	2.9933	1.0673	2.8532	1.0742	2.7265	1.0825	2.6113	1.0906	2.5062	29
32	1.0431	3.5463	1.0487	3.3193	1.0547	3.1461	1.0610	2.9908	1.0674	2.8510	1.0743	2.7245	1.0826	2.6095	1.0907	2.5045	28
33	1.0432	3.5467	1.0488	3.3163	1.0548	3.1433	1.0611	2.9884	1.0675	2.8488	1.0744	2.7225	1.0828	2.6076	1.0908	2.5028	27
34	1.0433	3.5471	1.0489	3.3133	1.0549	3.1406	1.0612	2.9859	1.0676	2.8466	1.0745	2.7205	1.0829	2.6058	1.0910	2.5011	26
35	1.0434	3.5475	1.0490	3.3102	1.0550	3.1379	1.0613	2.9835	1.0677	2.8444	1.0746	2.7185	1.0830	2.6040	1.0911	2.4995	25
36	1.0435	3.5479	1.0491	3.3072	1.0551	3.1352	1.0614	2.9810	1.0678	2.8422	1.0747	2.7165	1.0831	2.6022	1.0913	2.4978	24
37	1.0436	3.5483	1.0492	3.3042	1.0552	3.1325	1.0615	2.9786	1.0679	2.8400	1.0748	2.7145	1.0832	2.6003	1.0914	2.4961	23
38	1.0437	3.5487	1.0493	3.3011	1.0553	3.1298	1.0616	2.9762	1.0680	2.8378	1.0749	2.7125	1.0833	2.5985	1.0915	2.4944	22
39	1.0438	3.5491	1.0494	3.2981	1.0554	3.1271	1.0617	2.9738	1.0681	2.8356	1.0750	2.7105	1.0834	2.5967	1.0917	2.4928	21
40	1.0438	3.5495	1.0495	3.2951	1.0555	3.1244	1.0619	2.9713	1.0682	2.8334	1.0751	2.7085	1.0837	2.5949	1.0918	2.4912	20
41	1.0439	3.5499	1.0496	3.2921	1.0556	3.1217	1.0620	2.9689	1.0683	2.8312	1.0752	2.7065	1.0838	2.5931	1.0920	2.4895	19
42	1.0440	3.5503	1.0497	3.2891	1.0557	3.1190	1.0622	2.9665	1.0684	2.8290	1.0753	2.7045	1.0840	2.5913	1.0921	2.4879	18
43	1.0441	3.5507	1.0498	3.2861	1.0558	3.1163	1.0623	2.9641	1.0685	2.8269	1.0754	2.7025	1.0841	2.5895	1.0922	2.4862	17
44	1.0442	3.5511	1.0499	3.2831	1.0559	3.1137	1.0624	2.9617	1.0686	2.8247	1.0755	2.7006	1.0842	2.5877	1.0924	2.4846	16
45	1.0443	3.5515	1.0500	3.2801	1.0560	3.1110	1.0625	2.9593	1.0687	2.8225	1.0756	2.6986	1.0844	2.5859	1.0925	2.4829	15
46	1.0444	3.5519	1.0501	3.2772	1.0561	3.1083	1.0626	2.9569	1.0688	2.8204	1.0757	2.6967	1.0845	2.5841	1.0927	2.4813	14
47	1.0445	3.5523	1.0502	3.2742	1.0562	3.1057	1.0627	2.9545	1.0689	2.8182	1.0758	2.6947	1.0846	2.5823	1.0928	2.4797	13
48	1.0446	3.5527	1.0503	3.2712	1.0563	3.1030	1.0628	2.9521	1.0690	2.8160	1.0759	2.6927	1.0847	2.5805	1.0929	2.4780	12
49	1.0447	3.5531	1.0504	3.2683	1.0564	3.1004	1.0629	2.9497	1.0691	2.8139	1.0760	2.6908	1.0849	2.5787	1.0931	2.4764	11
50	1.0448	3.5535	1.0505	3.2653	1.0565	3.0977	1.0630	2.9474	1.0692	2.8117	1.0761	2.6888	1.0850	2.5770	1.0932	2.4748	10
51	1.0448	3.5498	1.0506	3.2624	1.0567	3.0951	1.0632	2.9450	1.0701	2.8096	1.0774	2.6869	1.0851	2.5752	1.0934	2.4731	9
52	1.0449	3.5465	1.0507	3.2594	1.0568	3.0925	1.0633	2.9426	1.0702	2.8074	1.0775	2.6849	1.0853	2.5734	1.0935	2.4715	8
53	1.0450	3.5432	1.0508	3.2565	1.0569	3.0898	1.0634	2.9402	1.0703	2.8053	1.0776	2.6830	1.0854	2.5716	1.0936	2.4699	7
54	1.0451	3.5399	1.0509	3.2535	1.0570	3.0872	1.0635	2.9379	1.0704	2.8032	1.0777	2.6810	1.0855	2.5699	1.0938	2.4683	6
55	1.0452	3.5366	1.0510	3.2506	1.0571	3.0846	1.0636	2.9355	1.0705	2.8010	1.0778	2.6791	1.0857	2.5681	1.0939	2.4666	5
56	1.0453	3.5333	1.0511	3.2477	1.0572	3.0820	1.0637	2.9332	1.0706	2.7989	1.0779	2.6772	1.0858	2.5663	1.0941	2.4650	4
57	1.0454	3.5301	1.0512	3.2448	1.0573	3.0793	1.0638	2.9308	1.0707	2.7968	1.0780	2.6752	1.0859	2.5646	1.0942	2.4634	3
58	1.0455	3.5268	1.0513	3.2419	1.0574	3.0767	1.0639	2.9285	1.0708	2.7947	1.0781	2.6733	1.0861	2.5628	1.0943	2.4618	2
59	1.0456	3.5236	1.0514	3.2390	1.0575	3.0741	1.0641	2.9261	1.0709	2.7925	1.0782	2.6714	1.0862	2.5610	1.0944	2.4602	1
60	1.0457	3.5203	1.0515	3.2361	1.0576	3.0715	1.0642	2.9238	1.0710	2.7904	1.0783	2.6695	1.0864	2.5593	1.0946	2.4586	0

/	32°		33°		34°		35°		36°		37°		38°		39°	
	Sec.	Cent.	Sec.	Cent.	Sec.	Cent.	Sec.	Cent.	Sec.	Cent.	Sec.	Cent.	Sec.	Cent.	Sec.	Cent.
0	1.1792	1.8871	1.1924	1.8361	1.2062	1.7883	1.2208	1.7434	1.2361	1.7013	1.2521	1.6616	1.2889	1.6243	1.3097	1.5899
1	1.1794	1.8862	1.1926	1.8352	1.2064	1.7875	1.2210	1.7427	1.2363	1.7006	1.2523	1.6608	1.2881	1.6235	1.3091	1.5894
2	1.1796	1.8854	1.1928	1.8344	1.2067	1.7867	1.2213	1.7420	1.2366	1.6999	1.2527	1.6601	1.2874	1.6227	1.3084	1.5889
3	1.1798	1.8846	1.1930	1.8336	1.2069	1.7860	1.2215	1.7413	1.2369	1.6992	1.2530	1.6594	1.2867	1.6219	1.3077	1.5884
4	1.1800	1.8838	1.1933	1.8328	1.2072	1.7852	1.2218	1.7405	1.2372	1.6986	1.2533	1.6587	1.2860	1.6212	1.3070	1.5879
5	1.1802	1.8830	1.1935	1.8320	1.2074	1.7844	1.2220	1.7398	1.2375	1.6979	1.2535	1.6580	1.2853	1.6205	1.3063	1.5874
6	1.1805	1.8822	1.1937	1.8312	1.2076	1.7837	1.2223	1.7391	1.2378	1.6972	1.2538	1.6573	1.2846	1.6198	1.3056	1.5869
7	1.1807	1.8814	1.1939	1.8304	1.2078	1.7830	1.2225	1.7384	1.2381	1.6965	1.2541	1.6566	1.2839	1.6191	1.3049	1.5864
8	1.1809	1.8806	1.1941	1.8296	1.2081	1.7823	1.2228	1.7377	1.2384	1.6958	1.2544	1.6559	1.2832	1.6184	1.3042	1.5859
9	1.1811	1.8798	1.1944	1.8288	1.2083	1.7816	1.2230	1.7370	1.2387	1.6951	1.2547	1.6552	1.2825	1.6177	1.3035	1.5854
10	1.1813	1.8790	1.1946	1.8280	1.2086	1.7809	1.2233	1.7363	1.2390	1.6944	1.2550	1.6545	1.2818	1.6170	1.3028	1.5849
11	1.1815	1.8782	1.1948	1.8272	1.2088	1.7802	1.2235	1.7355	1.2393	1.6937	1.2553	1.6538	1.2811	1.6163	1.3021	1.5844
12	1.1818	1.8774	1.1951	1.8264	1.2091	1.7795	1.2238	1.7348	1.2396	1.6930	1.2556	1.6531	1.2804	1.6156	1.3014	1.5839
13	1.1820	1.8766	1.1953	1.8256	1.2093	1.7788	1.2240	1.7341	1.2399	1.6923	1.2559	1.6524	1.2797	1.6149	1.3007	1.5834
14	1.1822	1.8758	1.1955	1.8248	1.2095	1.7781	1.2243	1.7334	1.2402	1.6916	1.2562	1.6517	1.2790	1.6142	1.3000	1.5829
15	1.1824	1.8750	1.1957	1.8240	1.2098	1.7774	1.2245	1.7327	1.2405	1.6909	1.2565	1.6510	1.2783	1.6135	1.2993	1.5824
16	1.1826	1.8742	1.1960	1.8232	1.2100	1.7767	1.2248	1.7320	1.2408	1.6902	1.2568	1.6503	1.2776	1.6128	1.2986	1.5819
17	1.1828	1.8734	1.1962	1.8224	1.2103	1.7760	1.2250	1.7313	1.2411	1.6895	1.2571	1.6496	1.2769	1.6121	1.2979	1.5814
18	1.1830	1.8726	1.1964	1.8216	1.2105	1.7753	1.2253	1.7305	1.2414	1.6888	1.2574	1.6489	1.2762	1.6114	1.2972	1.5809
19	1.1833	1.8718	1.1966	1.8208	1.2107	1.7746	1.2255	1.7298	1.2417	1.6881	1.2577	1.6482	1.2755	1.6107	1.2965	1.5804
20	1.1835	1.8697	1.1969	1.8198	1.2110	1.7739	1.2258	1.7291	1.2420	1.6874	1.2580	1.6475	1.2748	1.6100	1.2958	1.5799
21	1.1837	1.8689	1.1971	1.8190	1.2112	1.7732	1.2260	1.7284	1.2423	1.6867	1.2583	1.6468	1.2741	1.6093	1.2951	1.5794
22	1.1839	1.8681	1.1973	1.8182	1.2115	1.7725	1.2263	1.7277	1.2426	1.6860	1.2586	1.6461	1.2734	1.6086	1.2944	1.5789
23	1.1841	1.8673	1.1975	1.8174	1.2117	1.7718	1.2265	1.7270	1.2429	1.6853	1.2589	1.6454	1.2727	1.6079	1.2937	1.5784
24	1.1844	1.8665	1.1978	1.8166	1.2119	1.7711	1.2268	1.7263	1.2432	1.6846	1.2592	1.6447	1.2720	1.6072	1.2930	1.5779
25	1.1846	1.8657	1.1980	1.8158	1.2122	1.7704	1.2270	1.7256	1.2435	1.6839	1.2595	1.6440	1.2713	1.6065	1.2923	1.5774
26	1.1848	1.8649	1.1983	1.8150	1.2124	1.7697	1.2273	1.7249	1.2438	1.6832	1.2598	1.6433	1.2706	1.6058	1.2916	1.5769
27	1.1850	1.8641	1.1985	1.8142	1.2127	1.7690	1.2275	1.7242	1.2441	1.6825	1.2601	1.6426	1.2699	1.6051	1.2909	1.5764
28	1.1852	1.8633	1.1987	1.8134	1.2129	1.7683	1.2278	1.7235	1.2444	1.6818	1.2604	1.6419	1.2692	1.6044	1.2902	1.5759
29	1.1855	1.8625	1.1990	1.8126	1.2132	1.7676	1.2280	1.7228	1.2447	1.6811	1.2607	1.6412	1.2685	1.6037	1.2895	1.5754
30	1.1857	1.8617	1.1992	1.8118	1.2134	1.7669	1.2283	1.7221	1.2450	1.6804	1.2610	1.6405	1.2678	1.6030	1.2888	1.5749
31	1.1859	1.8609	1.1994	1.8110	1.2136	1.7662	1.2285	1.7214	1.2453	1.6797	1.2613	1.6398	1.2671	1.6023	1.2881	1.5744
32	1.1861	1.8601	1.1997	1.8102	1.2139	1.7655	1.2288	1.7207	1.2456	1.6790	1.2616	1.6391	1.2664	1.6016	1.2874	1.5739
33	1.1863	1.8593	1.1999	1.8094	1.2141	1.7648	1.2290	1.7200	1.2459	1.6783	1.2619	1.6384	1.2657	1.6009	1.2867	1.5734
34	1.1866	1.8585	1.2001	1.8086	1.2144	1.7641	1.2293	1.7193	1.2462	1.6776	1.2622	1.6377	1.2650	1.6002	1.2860	1.5729
35	1.1868	1.8577	1.2004	1.8078	1.2146	1.7634	1.2295	1.7186	1.2465	1.6769	1.2625	1.6370	1.2643	1.5995	1.2853	1.5724
36	1.1870	1.8569	1.2006	1.8070	1.2149	1.7627	1.2298	1.7179	1.2468	1.6762	1.2628	1.6363	1.2636	1.5988	1.2846	1.5719
37	1.1872	1.8561	1.2008	1.8062	1.2151	1.7620	1.2300	1.7172	1.2471	1.6755	1.2631	1.6356	1.2629	1.5981	1.2839	1.5714
38	1.1874	1.8553	1.2010	1.8054	1.2153	1.7613	1.2303	1.7165	1.2474	1.6748	1.2634	1.6349	1.2622	1.5974	1.2832	1.5709
39	1.1877	1.8545	1.2013	1.8047	1.2156	1.7606	1.2305	1.7158	1.2477	1.6741	1.2637	1.6342	1.2615	1.5967	1.2825	1.5704
40	1.1879	1.8537	1.2015	1.8039	1.2158	1.7599	1.2308	1.7151	1.2480	1.6734	1.2640	1.6335	1.2608	1.5960	1.2818	1.5700
41	1.1881	1.8529	1.2017	1.8031	1.2161	1.7592	1.2311	1.7144	1.2483	1.6727	1.2643	1.6328	1.2601	1.5953	1.2811	1.5695
42	1.1883	1.8521	1.2020	1.8023	1.2163	1.7585	1.2313	1.7137	1.2486	1.6720	1.2646	1.6321	1.2594	1.5946	1.2804	1.5690
43	1.1886	1.8513	1.2022	1.8015	1.2166	1.7578	1.2316	1.7130	1.2489	1.6713	1.2649	1.6314	1.2587	1.5939	1.2797	1.5685
44	1.1888	1.8505	1.2024	1.8007	1.2168	1.7571	1.2319	1.7123	1.2492	1.6706	1.2652	1.6307	1.2580	1.5932	1.2790	1.5680
45	1.1890	1.8497	1.2027	1.7999	1.2171	1.7564	1.2322	1.7116	1.2495	1.6699	1.2655	1.6300	1.2573	1.5925	1.2783	1.5675
46	1.1892	1.8489	1.2029	1.7991	1.2173	1.7557	1.2324	1.7109	1.2498	1.6692	1.2658	1.6293	1.2566	1.5918	1.2776	1.5670
47	1.1894	1.8481	1.2031	1.7983	1.2175	1.7550	1.2327	1.7102	1.2501	1.6685	1.2661	1.6286	1.2559	1.5911	1.2769	1.5665
48	1.1897	1.8473	1.2034	1.7975	1.2178	1.7543	1.2329	1.7095	1.2504	1.6678	1.2664	1.6279	1.2552	1.5904	1.2762	1.5660
49	1.1899	1.8465	1.2036	1.7967	1.2180	1.7536	1.2332	1.7088	1.2507	1.6671	1.2667	1.6272	1.2545	1.5897	1.2755	1.5655
50	1.1901	1.8457	1.2039	1.7959	1.2183	1.7529	1.2335	1.7081	1.2510	1.6664	1.2670	1.6265	1.2538	1.5890	1.2748	1.5650
51	1.1903	1.8450	1.2041	1.7951	1.2185	1.7522	1.2337	1.7074	1.2513	1.6657	1.2673	1.6258	1.2531	1.5883	1.2741	1.5645
52	1.1906	1.8442	1.2043	1.7943	1.2188	1.7515	1.2340	1.7067	1.2516	1.6650	1.2676	1.6251	1.2524	1.5876	1.2734	1.5640
53	1.1908	1.8434	1.2046	1.7935	1.2190	1.7508	1.2342	1.7060	1.2519	1.6643	1.2679	1.6244	1.2517	1.5869	1.2727	1.5635
54	1.1910	1.8426	1.2048	1.7927	1.2193	1.7501	1.2345	1.7053	1.2522	1.6636	1.2682	1.6237	1.2510	1.5862	1.2720	1.5630
55	1.1912	1.8418	1.2050	1.7919	1.2195	1.7494	1.2348	1.7046	1.2525	1.6629	1.2685	1.6230	1.2503	1.5855	1.2713	1.5625
56	1.1915	1.8410	1.2053	1.7911	1.2198	1.7487	1.2350	1.7039	1.2528	1.6622	1.2688	1.6223	1.2496	1.5848	1.2706	1.5620
57	1.1917	1.8402	1.2055	1.7903	1.2200	1.7480	1.2353	1.7032	1.2531	1.6615	1.2691	1.6216	1.2489	1.5841	1.2699	1.5615
58	1.1919	1.8394	1.2057	1.7895	1.2203	1.7473	1.2355	1.7025	1.2534	1.6608	1.2694	1.6209	1.2482	1.5834	1.2692	1.5610
59	1.1921	1.8386	1.2060	1.7887	1.2205	1.7466	1.2357	1.7018	1.2537	1.6601	1.2697	1.6202	1.2475	1.5827	1.2685	1.5605
60	1.1924	1.8378	1.2062	1.7879	1.2208	1.7459	1.2360	1.7011	1.2540	1.6594	1.2700	1.6195	1.2468	1.5820	1.2678	1.5600

TM604-170

TM604-177

°	40°		41°		42°		43°		44°		44°		45°	
	Sec.	Cent.	Sec.	Cent.	Sec.	Cent.	Sec.	Cent.	Sec.	Cent.	Sec.	Cent.	Sec.	Cent.
0	1.3054	1.5557	1.3250	1.5242	1.3456	1.4945	1.3673	1.4663	60	1.3902	1.4395	1.3984	1.4505	41
1	1.3057	1.5552	1.3237	1.5237	1.3460	1.4940	1.3677	1.4658	59	1.3905	1.4391	1.3988	1.4501	39
2	1.3060	1.5546	1.3223	1.5232	1.3463	1.4935	1.3681	1.4654	58	1.3909	1.4387	1.3992	1.4497	38
3	1.3064	1.5541	1.3210	1.5227	1.3467	1.4930	1.3684	1.4649	57	1.3913	1.4383	1.3996	1.4492	37
4	1.3067	1.5536	1.3197	1.5222	1.3470	1.4925	1.3688	1.4644	56	1.3917	1.4379	1.4000	1.4488	36
5	1.3070	1.5531	1.3184	1.5217	1.3474	1.4920	1.3692	1.4640	55	1.3921	1.4375	1.4004	1.4484	35
6	1.3073	1.5525	1.3171	1.5212	1.3477	1.4915	1.3696	1.4635	54	1.3925	1.4371	1.4008	1.4480	34
7	1.3076	1.5520	1.3158	1.5207	1.3481	1.4910	1.3700	1.4631	53	1.3929	1.4367	1.4012	1.4476	33
8	1.3080	1.5514	1.3145	1.5202	1.3485	1.4905	1.3705	1.4627	52	1.3933	1.4363	1.4016	1.4472	32
9	1.3084	1.5509	1.3132	1.5197	1.3488	1.4900	1.3709	1.4623	51	1.3937	1.4359	1.4020	1.4468	31
10	1.3086	1.5503	1.3124	1.5192	1.3492	1.4897	1.3710	1.4619	50	1.3941	1.4355	1.4024	1.4464	30
11	1.3089	1.5498	1.3117	1.5187	1.3495	1.4892	1.3714	1.4615	49	1.3945	1.4351	1.4028	1.4460	29
12	1.3092	1.5493	1.3110	1.5182	1.3499	1.4887	1.3718	1.4611	48	1.3949	1.4347	1.4032	1.4456	28
13	1.3096	1.5487	1.3103	1.5177	1.3502	1.4882	1.3722	1.4607	47	1.3953	1.4343	1.4036	1.4452	27
14	1.3099	1.5482	1.3096	1.5172	1.3506	1.4877	1.3725	1.4603	46	1.3957	1.4339	1.4040	1.4448	26
15	1.3102	1.5477	1.3089	1.5167	1.3509	1.4873	1.3729	1.4599	45	1.3961	1.4335	1.4044	1.4444	25
16	1.3105	1.5471	1.3082	1.5162	1.3513	1.4868	1.3733	1.4595	44	1.3965	1.4331	1.4048	1.4440	24
17	1.3109	1.5466	1.3075	1.5157	1.3517	1.4863	1.3737	1.4591	43	1.3969	1.4327	1.4052	1.4436	23
18	1.3112	1.5461	1.3068	1.5152	1.3520	1.4858	1.3741	1.4587	42	1.3973	1.4323	1.4056	1.4432	22
19	1.3115	1.5456	1.3061	1.5147	1.3524	1.4854	1.3744	1.4583	41	1.3977	1.4319	1.4060	1.4428	21
20	1.3118	1.5451	1.3054	1.5142	1.3527	1.4849	1.3748	1.4579	40	1.3981	1.4315	1.4064	1.4424	20
21	1.3121	1.5445	1.3047	1.5137	1.3531	1.4844	1.3752	1.4575	39	1.3985	1.4311	1.4068	1.4420	19
22	1.3125	1.5440	1.3040	1.5132	1.3534	1.4839	1.3756	1.4571	38	1.3989	1.4307	1.4072	1.4416	18
23	1.3128	1.5434	1.3033	1.5127	1.3538	1.4835	1.3759	1.4567	37	1.3993	1.4303	1.4076	1.4412	17
24	1.3131	1.5429	1.3026	1.5122	1.3542	1.4830	1.3763	1.4563	36	1.3997	1.4299	1.4080	1.4408	16
25	1.3134	1.5424	1.3019	1.5117	1.3545	1.4825	1.3767	1.4559	35	1.3999	1.4295	1.4084	1.4404	15
26	1.3138	1.5419	1.3012	1.5112	1.3549	1.4821	1.3771	1.4555	34	1.4003	1.4291	1.4088	1.4400	14
27	1.3141	1.5413	1.3005	1.5107	1.3552	1.4816	1.3774	1.4551	33	1.4007	1.4287	1.4092	1.4396	13
28	1.3144	1.5408	1.3000	1.5102	1.3556	1.4811	1.3778	1.4547	32	1.4011	1.4283	1.4096	1.4392	12
29	1.3148	1.5403	1.3000	1.5096	1.3560	1.4806	1.3782	1.4543	31	1.4015	1.4279	1.4100	1.4388	11
30	1.3151	1.5398	1.3000	1.5092	1.3563	1.4802	1.3786	1.4539	30	1.4019	1.4275	1.4104	1.4384	10
31	1.3154	1.5392	1.3000	1.5087	1.3567	1.4797	1.3790	1.4535	29	1.4023	1.4271	1.4108	1.4380	9
32	1.3157	1.5387	1.3000	1.5082	1.3571	1.4792	1.3794	1.4531	28	1.4027	1.4267	1.4112	1.4376	8
33	1.3161	1.5382	1.3000	1.5077	1.3574	1.4788	1.3798	1.4527	27	1.4031	1.4263	1.4116	1.4372	7
34	1.3164	1.5377	1.3000	1.5072	1.3578	1.4783	1.3801	1.4523	26	1.4035	1.4259	1.4120	1.4368	6
35	1.3167	1.5371	1.3000	1.5067	1.3581	1.4778	1.3805	1.4519	25	1.4039	1.4255	1.4124	1.4364	5
36	1.3170	1.5366	1.3000	1.5062	1.3585	1.4774	1.3809	1.4515	24	1.4043	1.4251	1.4128	1.4360	4
37	1.3174	1.5361	1.3000	1.5057	1.3589	1.4770	1.3813	1.4511	23	1.4047	1.4247	1.4132	1.4356	3
38	1.3177	1.5356	1.3000	1.5052	1.3592	1.4766	1.3816	1.4507	22	1.4051	1.4243	1.4136	1.4352	2
39	1.3180	1.5351	1.3000	1.5047	1.3596	1.4762	1.3820	1.4503	21	1.4055	1.4239	1.4140	1.4348	1
40	1.3184	1.5345	1.3000	1.5042	1.3600	1.4758	1.3824	1.4499	20	1.4059	1.4235	1.4144	1.4344	0
41	1.3187	1.5340	1.3000	1.5037	1.3603	1.4754	1.3828	1.4495	19	1.4063	1.4231	1.4148	1.4340	0
42	1.3190	1.5335	1.3000	1.5032	1.3607	1.4750	1.3832	1.4491	18	1.4067	1.4227	1.4152	1.4336	0
43	1.3193	1.5330	1.3000	1.5027	1.3611	1.4746	1.3836	1.4487	17	1.4071	1.4223	1.4156	1.4332	0
44	1.3197	1.5325	1.3000	1.5022	1.3614	1.4741	1.3839	1.4483	16	1.4075	1.4219	1.4160	1.4328	0
45	1.3200	1.5320	1.3000	1.5017	1.3618	1.4737	1.3843	1.4479	15	1.4079	1.4215	1.4164	1.4324	0
46	1.3203	1.5315	1.3000	1.5012	1.3622	1.4732	1.3847	1.4475	14	1.4083	1.4211	1.4168	1.4320	0
47	1.3207	1.5310	1.3000	1.5007	1.3625	1.4728	1.3851	1.4471	13	1.4087	1.4207	1.4172	1.4316	0
48	1.3210	1.5304	1.3000	1.5002	1.3629	1.4723	1.3855	1.4467	12	1.4091	1.4203	1.4176	1.4312	0
49	1.3213	1.5299	1.3000	1.4998	1.3633	1.4718	1.3859	1.4463	11	1.4095	1.4199	1.4180	1.4308	0
50	1.3217	1.5294	1.3000	1.4993	1.3636	1.4714	1.3863	1.4459	10	1.4099	1.4195	1.4184	1.4304	0
51	1.3220	1.5289	1.3000	1.4988	1.3640	1.4710	1.3867	1.4455	9	1.4103	1.4191	1.4188	1.4300	0
52	1.3223	1.5283	1.3000	1.4983	1.3644	1.4706	1.3871	1.4451	8	1.4107	1.4187	1.4192	1.4296	0
53	1.3227	1.5278	1.3000	1.4978	1.3647	1.4702	1.3874	1.4447	7	1.4111	1.4183	1.4196	1.4292	0
54	1.3230	1.5273	1.3000	1.4973	1.3651	1.4698	1.3878	1.4443	6	1.4115	1.4179	1.4200	1.4288	0
55	1.3233	1.5268	1.3000	1.4969	1.3655	1.4694	1.3882	1.4439	5	1.4119	1.4175	1.4204	1.4284	0
56	1.3237	1.5263	1.3000	1.4964	1.3658	1.4690	1.3886	1.4435	4	1.4123	1.4171	1.4208	1.4280	0
57	1.3240	1.5258	1.3000	1.4959	1.3662	1.4686	1.3890	1.4431	3	1.4127	1.4167	1.4212	1.4276	0
58	1.3243	1.5253	1.3000	1.4954	1.3665	1.4682	1.3894	1.4427	2	1.4131	1.4163	1.4216	1.4272	0
59	1.3247	1.5248	1.3000	1.4949	1.3669	1.4678	1.3898	1.4423	1	1.4135	1.4159	1.4220	1.4268	0
60	1.3250	1.5242	1.3000	1.4945	1.3673	1.4674	1.3902	1.4419	0	1.4139	1.4155	1.4224	1.4264	0

TM684-180

TM684-179

4. Frequently Used Angles and Their Functions

Angle	sin A	cos A	tan A	cot A	sec A	csc A
0°	0	1	0	∞	1	∞
30°	$\frac{1}{2}$	$\frac{\sqrt{3}}{2}$	$\frac{\sqrt{3}}{3}$	$\sqrt{3}$	$\frac{2\sqrt{3}}{3}$	2
45°	$\frac{\sqrt{2}}{2}$	$\frac{\sqrt{2}}{2}$	1	1	$\sqrt{2}$	$\sqrt{2}$
60°	$\frac{\sqrt{3}}{2}$	$\frac{1}{2}$	$\sqrt{3}$	$\frac{\sqrt{3}}{3}$	2	$\frac{2\sqrt{3}}{3}$
90°	1	0	∞	0	∞	1
120°	$\frac{\sqrt{3}}{2}$	$-\frac{1}{2}$	$-\sqrt{3}$	$-\frac{\sqrt{3}}{3}$	-2	$\frac{2\sqrt{3}}{3}$
180°	0	-1	0	∞	-1	∞
270°	-1	0	∞	0	∞	-1
360°	0	1	0	∞	1	∞

5. All Functions of an Angle Expressed in Terms of Any One Function

Function	sine	cosine	tangent	cotangent	secant	cosecant
Sin A	sin A	$\pm\sqrt{1 - \cos^2 A}$	$\frac{\tan A}{\pm\sqrt{1 + \tan^2 A}}$	$\frac{1}{\pm\sqrt{1 + \cot^2 A}}$	$\frac{\pm\sqrt{\sec^2 A - 1}}{\sec A}$	$\frac{1}{\csc A}$
Cos A	$\pm\sqrt{1 - \sin^2 A}$	cos A	$\frac{1}{\pm\sqrt{1 + \tan^2 A}}$	$\frac{\cot A}{\pm\sqrt{1 + \cot^2 A}}$	$\frac{1}{\sec A}$	$\frac{\pm\sqrt{\csc^2 A - 1}}{\csc A}$
Tan A	$\frac{\sin A}{\pm\sqrt{1 - \sin^2 A}}$	$\frac{\pm\sqrt{1 - \cos^2 A}}{\cos A}$	tan A	$\frac{1}{\cot A}$	$\pm\sqrt{\sec^2 A - 1}$	$\frac{1}{\pm\sqrt{\csc^2 A - 1}}$
Cot A	$\frac{\pm\sqrt{1 - \sin^2 A}}{\sin A}$	$\frac{\cos A}{\pm\sqrt{1 - \cos^2 A}}$	$\frac{1}{\tan A}$	cot A	$\frac{1}{\pm\sqrt{\sec^2 A - 1}}$	$\pm\sqrt{\csc^2 A - 1}$
Sec A	$\frac{1}{\pm\sqrt{1 - \sin^2 A}}$	$\frac{1}{\cos A}$	$\pm\sqrt{1 + \tan^2 A}$	$\frac{\pm\sqrt{1 + \cot^2 A}}{\cot A}$	sec A	$\frac{\csc A}{\pm\sqrt{\csc^2 A - 1}}$
Csc A	$\frac{1}{\sin A}$	$\frac{1}{\pm\sqrt{1 - \cos^2 A}}$	$\frac{\pm\sqrt{1 + \tan^2 A}}{\tan A}$	$\pm\sqrt{1 + \cot^2 A}$	$\frac{\sec A}{\pm\sqrt{\sec^2 A - 1}}$	csc A

ANSWERS TO PROBLEMS

Paragraph 12.

- $a(1) \frac{3}{5}; .6; 60\%.$ (2) $\frac{1}{2}; .5; 50\%.$ (3) $\frac{3}{8}; .375; 37\frac{1}{2}\%.$ (4) $\frac{1}{4}; .25; 25\%.$
 (5) $\frac{5}{8}; .625; 62\frac{1}{2}\%.$ (6) $\frac{3}{5}; .6; 60\%.$
 (7) $\frac{3}{10}; .3; 30\%.$ (8) $\frac{7}{10}; .7; 70\%.$ (9) $2\frac{1}{4}; 2.25; 225\%.$ (10) $\frac{7}{8}; .875; 87\frac{1}{2}\%.$
 (11) $\frac{2}{25}; .08; 8\%.$ (12) $\frac{3}{50}; .06; 6\%.$
 (13) $\frac{9}{50}; .18; 18\%.$ (14) $\frac{1}{400}; .0025; 25\%.$ (15) $\frac{1}{40}; .025; 2\frac{1}{2}\%.$ (16) $\frac{1}{20}; .05; 5\%.$ (17) $\frac{1}{12}; .08\frac{1}{3}$ (See note below); $8\frac{1}{3}\%.$ (18) $\frac{3}{8}; .375; 37\frac{1}{2}\%.$ (19) $1\frac{1}{20}; 1.05; 105\%.$ (20) $\frac{1}{25}; .04; 4\%.$

Note. This mixed decimal and fractional form is often used when an unending decimal would result.

- $b(1) 150; (2) 50; (3) 4; (4) 900.$
 $c(1) 150\%; (2) 275\%; (3) 150\%; (4) 550\%.$
 $d(1) 1.64; (2) 2,496; (3) .34; (4) 4.42.$
 $e(1) .207\%; (2) .028\%.$
 $f(1) 433\frac{1}{8}; (2) 2,500; (3) 520; (4) 200; (5) 200.$

Paragraph 21.

- a 336.6 pounds. b $3\frac{3}{7}$ days. c \$5.00. d \$1400.00. e .372 ohm. .298 ohm; .459 ohm; .898 ohm. f 2.820 pounds; 3.776 pounds; 4.119 pounds; 2,567 pounds. g 300 rpm. h 157.5 rpm.

Paragraph 25.

- $a(1) 21; (2) 33; (3) 50; (4) 2.90; (5) 50.1; (6) 70.01; (7) 86.5; (8) 75.89.$
 $b(1) 2.236; (2) 2.646; (3) 3.317; (4) 3.606; (5) 3.873; (6) 4.123.$
 $c(1) .158$ ampere; (2) .085 ampere; (3) .283 ampere; (4) 1.118 amperes.

Paragraph 42.

- $a(1) 17; (2) 58; (3) -21; (4) -189^\circ; (5) -252$ volts.
 $b(1) 251$ amperes; (2) -8 volts; (3) $-.6375cy$; (4) $-81.99ax^2$; (5) $1.810x^2y$.
 $c(1) -17.92; (2) -72; (3) \frac{8}{35}; (4) .075852; (5) .0028125; (6) 120.$
 $d(1) 9; (2) -\frac{20}{21}; (3) 700; (4) 250; (5) -\frac{2}{3}$ ampere; (6) $-.0025.$
 $e(1) -4; (2) 14; (3) -25; (4) 19; (5) 11; (6) 16; (7) 44; (8) 66; (9) -46; (10) 18.$

Paragraph 50.

- $a(1) 4a^4 - 4a^2b^2 + 4b^4.$ (2) $E + 3RI + 20ZI.$ (3) $w + x + 9y + 8z.$
 $b(1) 19ax + 17by - 9cz.$ (2) $-25w - 3x + 8y + 2z.$ (3) $4a^2 - 34ab + 6b^2.$
 $c(1) 7.$ (2) 1. (3) 1.
 $d(1) f^{10}.$ (2) $y^{a+b}.$ (3) $v^{2m}.$ (4) $r^5.$ (5) $R^{3m}.$ (6) $r^{m+1}.$
 $e(1) \frac{4}{x^4}.$ (2) $\frac{1}{r^2s^4}.$ (3) $\frac{1}{36^3a^2b^3}.$ (4) $\frac{1}{I^2R}.$ (5) $\frac{a^2}{8b^3}.$ (6) $\frac{3E}{4I^2R}.$
 $f(1) 10a^2b - 15a^2b^2 + 35ab^3.$ (2) $4a^3 + 12a^2 + 4a.$ (3) $i^3 - 27.$ (4) $2x^4 + 5x^2y + 4x^2y^2 + 2xy^3 - y^4.$ (5) $9x^4 - 4x^2y^2 +$

$$20xy^2 - 25y^4. (6) \frac{a-e}{ca}. (7) \frac{3L-R^2}{R}$$

$$(8) 1 - 2a^2b + 3a^4b^3. (9) 2x^2 + z - 1 + \frac{3z+4}{x^2-z+8}. (10) 4b^2 - b.$$

Paragraph 61.

$$a(1) 5(5 + 1 - 6); (2) 4(2 + 1 - 8);$$

$$(3) 3(3 - 6 + 7); (4) 7r(1 - 3 + 5);$$

$$(5) 2(5x + 4y + 3z).$$

$$b(1) 49x^2y^3; (2) 4w^{10}; (3) 64a^4b^3; (4) 729a^3x^3; (5) -27b^3z^{12}.$$

$$c(1) 5; (2) -8; (3) \pm ab^3; (4) \pm 6yz^2;$$

$$(5) -10ab^3; (6) \pm 20a; (7) -3; (8) -x^3; (9) 4; (10) 5x^4y^5z^2.$$

$$d(1) 3(x + 2); (2) 5a(a + 3); (3) 2x(5x^2 - 7x - 1); (4) 3z(2ay + 3bx - 4c); (5) m(m^2 + m - 5x); (6) 3a^3(a^2 - 2ab - b^2); (7) 7ry^3(1 - 2 + 3) \text{ or } 14^3ry; (8) 2xam(6x + 7a + 8m); (9) \pi(r_1^2 + r_2^2); (10) \frac{1}{16}cd(4c^2 - 2cd + d^2).$$

Paragraph 69.

$$a(1) x = 5\frac{2}{5}; (2) x = 4; (3) r = 2; (4) x = -1\frac{1}{12}; (5) t = 1; (6) x = 7\frac{3}{4}; (7) r = 4; (8) x = 1.$$

$$b(1) 8; (2) x; (3) 3(r + s); (4) 3(a - s);$$

$$(5) (I - 6)(I - 9); (6) \frac{8E^2I^2}{2I^2R}; (7)$$

$$\frac{2f}{6\pi f^2c}.$$

$$c(1) \frac{rR}{rR^2}, \frac{r}{rR^2}, \frac{R^2}{rR^2}; (2) \frac{a-1}{a^2-1},$$

$$\frac{x(a+1)}{a^2-1}; (3) \frac{3b}{6x}, \frac{2c}{6x}; (4) \frac{y(y+3)}{2(y+3)},$$

$$\frac{y}{2(y+3)}; (5) \frac{2(c+1)}{c(c+1)}, \frac{3c}{c(c+1)};$$

$$(6) \frac{2i}{2e-10}, \frac{i}{2e-10}; (7) \frac{y}{C^2-d^2}$$

$$\frac{z(c+d)}{C^2-d^2}.$$

$$d(1) \frac{12}{a}; (2) \frac{7s+11}{4t};$$

$$(3) \frac{9y^2a+10xb}{12x^2y^3}; (4) \frac{6(x^2-2)}{x^4-5x^2+14};$$

$$(5) \frac{9c+2cd-12d}{12c^2d^2}; (6) \frac{2r^2+r-13}{r^2+2r-15};$$

$$(7) \frac{12y-1}{4}; (8) \frac{4ab}{a^2-b^2};$$

$$(9) \frac{16(2-5q)}{25q^2}; (10) \frac{3t+4y}{12tv^2}$$

$$e(1) \frac{8y^2}{8}; (2) \frac{a^3}{b^3}; (3) \frac{xz}{21my};$$

$$(4) \frac{(s-r)^2}{s^2}; (5) \frac{3}{5x}; (6) \frac{1}{a^3};$$

$$(7) 15z; (8) \frac{a^3}{6cd}; (9) \frac{4su}{5};$$

$$(10) \frac{e+3}{e+2}.$$

Paragraph 76.

$$a(1) 2; (2) 16; (3) 5\sqrt{2}; (4) \frac{\sqrt[3]{4}}{4};$$

$$(5) 3\sqrt{2x-1}; (6) \frac{x^2\sqrt{6}}{y}; (7) x^2y;$$

$$(8) d^2e^3; (9) \frac{4r^2}{s}; (10) a^3b.$$

$$b(1) \sqrt[3]{4}; (2) \sqrt[3]{a^3b^4}; (3) \sqrt[3]{6^3}; (4) \sqrt[3]{27};$$

$$(5) \sqrt[3]{x}; (6) \sqrt[3]{a^3b^3}; (7) 6\sqrt[3]{r}; (8) 26\sqrt[3]{a^3};$$

$$(9) \sqrt{2r_1+3r_2}; (10) 3y\sqrt[3]{x}.$$

$$c(1) a^4; (2) (5x)^4; (3) 6xd^4; (4) z^4;$$

$$(5) (3a^3b^3)^4; (6) y^3a^4; (7) 8(3e)^4;$$

$$(8) 9g^4; (9) 3bcd^4; (10) (x-y)^4.$$

$$d(1) 2\sqrt{3}; (2) 3\sqrt{7}; (3) 3x\sqrt{7};$$

$$(4) 12ab^2\sqrt{2}; (5) 2bd\sqrt{15}; (6) 2l\sqrt{2R};$$

$$(7) 9pz\sqrt{7p}; (8) 12dr^4s\sqrt{3ds}; (9) 45a^2\sqrt{b}; (10) 112w^4x^2y\sqrt{2xz}.$$

$$e(1) \frac{\sqrt{2}}{10}; (2) \frac{\sqrt{x}}{2x}; (3) \frac{\sqrt[3]{3a}}{3}; (4) \frac{\sqrt[3]{x^3}}{x};$$

$$(5) \frac{\sqrt[3]{27a^3x^3}}{3ax}; (6) \frac{\sqrt[3]{(3-2x)^3}}{3-2x};$$

$$(7) \frac{\sqrt[3]{a(a+b)}}{a}; (8) \frac{\sqrt[3]{ab^2c^2}}{bc};$$

$$(9) \frac{\sqrt[3]{s+1}}{s+1}; (10) \sqrt[3]{(i+3)^3}.$$

$$f(1) 10; (2) 14\sqrt{5}; (3) x - \frac{x\sqrt{3}}{2}; (4)$$

$$\frac{3a\sqrt{2} + a}{2}; (5) (r + 1)\sqrt{rst}; (6)$$

$$\frac{2y\sqrt{x^2 - y^2}}{x^2 - y^2}; (7) \sqrt[3]{5} + 8\sqrt{x}; (8) 7\sqrt{a} -$$

$$6\sqrt{b}; (9) 3\sqrt{x + y} - 4\sqrt{x - y}; (10) 7ab\sqrt{5a}.$$

$$g(1) 12\sqrt{10}; (2) 18; (3) 8ab^2; (4)$$

$$2z^3\sqrt{3z}; (5) 2xy\sqrt[3]{xy}; (6) 24pq^2r\sqrt[3]{qr^2};$$

$$(7) a + b + c + 2(\sqrt{ab} + \sqrt{ac} + \sqrt{bc});$$

$$(8) ax\sqrt{a} (a + x + 1); (9) 8; (10)$$

$$2axy^2\sqrt[3]{2a}.$$

$$h(1) 2; (2) 5; (3) 2\sqrt[3]{x}; (4) 3\sqrt{xy}; (5)$$

$$\sqrt{6} + 2; (6) 12a\sqrt[12]{2^3 \cdot 3^5 \cdot 5^4 \cdot a^2}; (7)$$

$$\frac{c - \sqrt{2c} - 4}{c - 8} (8) \sqrt{15}; (9)$$

$$\frac{e^2 + f^2 + 2f\sqrt{e^2 - f^2}}{e^2}; (10) \frac{4b\sqrt{1 - 4b^2} + 1}{8b^2 - 1}$$

Paragraph 79.

$$a(1) j5\sqrt{3}; (2) j\sqrt{\quad}; (3) -j8x^2\sqrt{ax};$$

$$(4) -j10x^2y^2\sqrt{x}; (5) \frac{\div}{3};$$

$$(6) -4xy\sqrt[3]{2x^2y^2}.$$

$$b(1) 16 + j109; (2) 41 - j22; (3) 61 -$$

$$j251; (4) 4 + j10; (5) 6 + j11; (6)$$

$$-2 - j47.$$

$$c(1) 779 - j371; (2) 59 + j114; (3)$$

$$-22 + j15; (4) 155 - j61; (5) 169 +$$

$$j23; (6) 9 - j8.$$

$$d(1) -55 + j46; (2) 6 - 6\sqrt{6} + j(6\sqrt{2}$$

$$+ 6\sqrt{3}); (3) 13; (4) -5 - j12; (5)$$

$$-j8; (6) 46 - j48; (7) f^2 + jfg - g^2;$$

$$(8) I^2 + E^2; (9) -68 - j239; (10) 71 -$$

$$j17.$$

$$e(1) \frac{3}{13} - j\frac{2}{13}; (2) 1 - j6; (3) -\frac{6}{25}$$

$$+ j\frac{17}{25}; (4) 1 + j2; (5) \frac{x^2 + j^2xy - y^2}{x^2y^2};$$

$$(6) 2(1 - j2); (7) \frac{3(1 + j)}{2}; (8) \frac{1 + j13}{10};$$

$$(9) \frac{38 + j34}{65}; (10) \frac{I^2 + j2IE - E^2}{I^2 E^2}$$

Paragraph 86.

$$a(1) 3; (2) 2; (3) 85; (4) 3; (5) 1;$$

$$(6) x = -5, y = 8; (7) a = 3, b = 1;$$

$$(8) x = 3, y = 4; (9) m = 3, n = 5;$$

$$(10) r = 8, s = 1$$

$$b(1) d = \frac{Wh}{F} \quad (2) g = \frac{v^2 - v_0^2}{2h}.$$

$$(3) a = \frac{Fg}{w}. (4) N = \frac{2.534H}{D^2}. (5) l =$$

$$\frac{10^8F}{22.5BI}.$$

$$c(1) 15; (2) 0; (3) \frac{10}{8}; (4) 4; (5) \frac{28}{9};$$

$$(6) \frac{12}{119}; (7) -2\frac{12}{25}; (8) 8; (9) \frac{40}{109};$$

$$(10) -\frac{1}{19}.$$

$$d(1) x = 4, y = 5; (2) a = 4.95, b = 2.61;$$

$$(3) x = 4, y = 7; (4) x = -2, y = -4;$$

$$(5) x = -3, y = 1; (6) I = 18, Z = 17;$$

$$(7) x = 4, y = \frac{1}{2}; (8) a = 6, b = -4;$$

$$(9) x = 5, y = -1; (10) r = \frac{(a + b)}{2},$$

$$s = \frac{(a - b)}{2}$$

$$e(1) 1 \text{ volt}; (2) R = 20 \text{ ohms}; (3) 110$$

$$\text{volts}; (4) 75 \text{ ohms}; (5) 100 \text{ milliamperes},$$

$$80 \text{ milliamperes}, 60 \text{ milliamperes}; (6) 5.5$$

$$\text{amperes}.$$

Paragraph 94.

$$a(1) 0, -\frac{3}{2}; (2) 0, 4; (3) 0, -3; (4) 0,$$

$$-2; (5) \pm 8; (6) \pm 3; (7) \pm 3; (8) \pm 4;$$

$$(9) 7, -6; (10) 1, 12.$$

$$b(1) \frac{-3 \pm \sqrt{13}}{2}; (2) -3 \pm \sqrt{19}; (3)$$

$$2 \pm \sqrt{3}; (4) -2 \pm \frac{\sqrt{22}}{2}; (5) \frac{1}{2} \pm$$

$$\frac{\sqrt{14}}{4}; (6) -\frac{5}{3} \pm \frac{2\sqrt{10}}{3}; (7) -1, 3;$$

$$(8) -1 \pm \frac{\sqrt{6}}{2}; (9) 1 \pm \sqrt{6}; (10) \frac{1}{2} \pm$$

$$\frac{\sqrt{5}}{2}$$

$c(1) -1; (2) -\frac{3}{4}, \frac{2}{3}; (3) \frac{-5 \pm \sqrt{13}}{6};$
 $(4) \frac{3}{2}, \frac{4}{3}; (5) -3, 1; (6) -\frac{1}{5}, \frac{5}{3};$
 $(7) \pm \sqrt{2}; (8) \pm \sqrt{19}; (9) -1, 2;$
 $(10) \frac{-5 \pm \sqrt{7}}{3}$

Paragraph 111.

$a(1) 1,613 \times 10^3; (2) 500 \times 10^3, \text{ or } 5 \times 10^5; (3) 6,166 \times 10^{-3}.$

$b(1) 3,109 \times 10^3; (2) 19 \times 10^{-6}; (3) 4,492 \times 10^{-6}.$

$c(1) 892 \times 10^3; (2) 2,464 \times 10^{-3}, \text{ or } 24.64; (3) 3,168 \times 10^{-11}; (4) 14,640.$

$d(1) 167; (2) 1,608 \times 10^7; (3) 107; (4) 33 \times 10^{-5}.$

$e(1) 4 \times 10^3, \text{ or } 400; (2) 13 \times 10^{-6}; (3) 27 \times 10^{-9}; (4) 9 \times 10^2, \text{ or } 900.$

Paragraph 127.

$a(1) 2.8949; (2) 0.5527; (3) 8.5378-10;$
 $(4) 6.6776-10; (5) 1.6955; (6) 2.4370;$
 $(7) 2.8809; (8) 0.8593; (9) 7.9946-10;$
 $(10) 5.7205-10.$

$b(1) 70,100; (2) 271; (3) .351; (4) .000676;$
 $(5) 3.99; (6) 370.67; (7) .00002718;$
 $(8) 500,500; (9) 1.5915;$
 $(10) .000003445.$

$c(1) 164.2; (2) 39,982; (3) 1,376; (4) .006764;$
 $(5) 5,710.$

$d(1) .4983; (2) .3874; (3) .3984; (4) .7487;$
 $(5) .2437.$

$e(1) .0000007372; (2) 51.46; (3) 3.47;$
 $(4) 19.43; (5) 783; (6) .2367; (7) 5.343;$
 $(8) 87.74; (9) 1.55; (10) .09456.$

$f(1) 2.298; (2) 11.77; (3) 24.43; (4) 83.28;$
 $(5) .4509; (6) .4725; (7) .04088;$
 $(8) .6153; (9) .0576; (10) .35367.$

Paragraph 142.

a 96 square inches. b 36 square inches.
 c 25 square inches. d 15 square inches.
 e 14.422 square inches. f 5.657 square inches.
 $g(1)$ Parallelogram, $A = bh$, 120 square inches;
 (2) Triangle, $A = \frac{bh}{2}$ 4.025 square inches;
 (3) Circle, $A = \pi r^2$, 314 square centimeters,
 $C = \pi D$, 62.8 centimeters;
 (4) Trapezoid, $A = \frac{B+b}{2} h$, $A = 60$ square inches.
 $h(1)$ 3 inches;
 (2) $4\frac{1}{2}$ inches; (3) 8.8 inches; (4) 5 inches.
 i 78.5 square inches. j 100 feet.
 k 82.5 square feet. l 48.496 inches.

Paragraph 153.

$a(1) c = 8.603. (2) a = 6.08. (3) b = 39.5. (4) c = b\sqrt{10}. (5) b = m^2 - 1.$

$b(1) \sin A = \frac{4}{7}, \cos A = \frac{\sqrt{33}}{7}, \tan A = \frac{4}{\sqrt{33}},$
 $\cot A = \frac{\sqrt{33}}{4}, \sec A = \frac{7}{33}\sqrt{33},$
 $\csc A = \frac{7}{4}$

$(2) \sin A = \frac{2}{13}\sqrt{13}, \cos A = \frac{3}{13}\sqrt{13},$
 $\tan A = \frac{2}{3}, \cot A = \frac{3}{2}, \sec A = \frac{\sqrt{13}}{3},$
 $\csc A = \frac{\sqrt{13}}{2}$

$(3) \sin A = \frac{1}{2}, \cos A = \frac{\sqrt{3}}{2}, \tan A = \frac{\sqrt{3}}{3},$
 $\cot A = \sqrt{3}, \sec A = \frac{2}{3}\sqrt{3}, \csc A = 2.$

$(4) \sin A = \frac{1}{2.4}, \cos A = \frac{1.09}{1.2}, \tan A = \frac{1}{2.18},$
 $\cot A = 2.18, \sec A = \frac{1.2}{1.09}, \csc A = 2.4.$

$(5) \sin A = y \frac{\sqrt{y^2+1}}{y^2+1}, \cos A = \frac{\sqrt{y^2+1}}{y^2+1},$
 $\tan A = y, \cot A = \frac{1}{y}, \sec A = \sqrt{y^2+1},$
 $\csc = \frac{\sqrt{y^2+1}}{y}.$

$$(6) \sin A = \frac{\sqrt{55}}{8}, \cos A = \frac{3}{8}, \tan A = \frac{\sqrt{55}}{3}, \cot A = \frac{3\sqrt{55}}{55}, \sec A = 2\frac{2}{3}, \csc A = \frac{8\sqrt{55}}{55}$$

c(1) $a = 17, b = 29.4, c = 34$. (2) $a = 9, b = 12, c = 15$. (3) $a = 12, b = 16, c = 20$. (4) $a = 17.5, b = 10\sqrt{11}, c = 37.5$. (5) $a = 10, b = 6, c = 2\sqrt{34}$. (6) $a = 37.08, b = 18.4, c = 41.4$.

d(1) $b = 10\sqrt{3}, c = 20$. (2) $a = 7, c = 7\sqrt{2}$. (3) $a = 4\sqrt{3}, b = 4$. (4) $b = 3\sqrt{3}, c = 6\sqrt{3}$. (5) $a = 12.5, b = 12.5\sqrt{3}$.

Paragraph 164.

a(1) .02618, .99966, .02619, 38.1885. (2) .26584, .96402, .27576, 3.62636. (3) .53238, .84650, .62892, 1.59002. (4) .59693, .80230, .74402, 1.34405. (5) .70690, .70731, .99942, 1.00058. (6) .70706, .70716, .99986, 1.00014. (7) .57649, .81710, .70553, 1.41737. (8) .81370, .58129, 1.39982, .71438. (9) .74811, .66357, 1.12740, .88700. (10) .92429, .38169, 2.42158, .41295.

b(1) $14^\circ 54' 51''$; (2) $66^\circ 35' 51''$; (3) $19^\circ 56' 54''$; (4) $25^\circ 17' 5''$; (5) $40^\circ 23' 35''$; (6) $68^\circ 45' 2''$; (7) $22^\circ 11' 47''$; (8) $34^\circ 5' 19''$; (9) $52^\circ 13' 2''$; (10) $51^\circ 29' 49''$

c(1) $44^\circ 43' 29''$; (2) 10.29; (3) 32.9; (4) 19.76; (5) 12.4; (6) $54^\circ 18' 52.5''$; (7) 33.69; (8) 16.5; (9) $36^\circ 28' 9''$; (10) 128.3; (11) 32.9; (12) $29^\circ 3' 15''$

d(1) 43.845 feet; (2) 80.027 feet; (3) 12.226 feet, 8.69 feet high; (4) 3,149 feet; (5) 11.734 feet; (6) 91.77 feet; (7) 206 feet; (8) 3,578 feet; (9) 16,647 feet (3.153 miles); (10) 82.12 feet; (11) 1.414 inches each; (12) side opposite $60^\circ \angle$ 5.196 inches, side opposite $30^\circ \angle$ 3 inches.

Paragraph 173.

a $C = 62^\circ 16' 38''$, $a = 14.59$. b $B = 69^\circ 58'$. c $A = 23^\circ 33' 22''$, $B = 45^\circ 16' 31''$, $C = 111^\circ 10' 7''$. d $A = 81^\circ 31' 41'$ $B = 41^\circ 7' 29''$. e 240 square inches. 97.880 square feet. g 55.424 square inches. h $A = 32^\circ 33' 45''$, $B = 84^\circ 36' 15''$, $c = 15.95$ inches.

Paragraph 176.

a(1) .4 radian; (2) 4 radians; (3) 4 radians; (4) 2.78 radians.

b(1) 35 inches; (2) 17.6 feet; (3) 18.1 miles; (4) .00198 inch.

c(1) .52 radian; (2) 4.6 radians; (3) 2.77 radians; (4) 5.89 radians.

d(1) $45^\circ 50' 11.8''$; (2) $1432^\circ 23' 40.2''$ (3) $197^\circ 40' 18.44''$; (4) 540° .

e(1) $\pi/6$; (2) $\pi/3$; (3) $5\pi/4$; (4) 4π .

Paragraph 192.

a(1) 5.5 amperes; (2) 1.30 amperes.

b(1) 28 to 100 ohms; (2) 7 to 25 ohms.

c 221 volts; 7.514 watts.

d(1) .8 ampere; (2) 24 volts; (3) 80 volts.

e(1) $G_T = .35$ inch; (2) 2.857 ohms; (3) $I_2 = 10$ amperes, $I_3 = 5$ amperes; (4) $I_T = 35$ amperes.

f(1) $G_1 = 1$ mho, $G_2 = .333$ mho, $G_3 = .1$ mho, $G_4 = .05$ mho, $G_5 = .02$ mho; (2) $G_T = 1.503$ mhos; (3) $R_T = .665$ mho.

g(1) 17.08 ohms; (2) 86.4 volts; (3) 100.8 volts; (4) 228.192 volts.

h(1) 4.62 ohms; (2) 5.359 ohms; (3) 4.783 ohms; (4) 15.246 ohms.

i(1) 125 volts; (2) $E_1 = 50$ volts, $E_2 = 75$ volts.

j(1) 10.754 volts; (2) $I_1 = .7028$ ampere, $I_2 = 8.269$ amperes, $I_3 = 1.0237$ amperes;

(8) $I_1 R_1 = 10.753$ volts, $I_2 R_2 = 10.750$ volts, $I_3 R_3 = 10.749$ volts.

k(1) 5,500 amperes; (2) .22729 ampere.

l A, 5 ohms; B, $6\frac{2}{5}$ ohms; C, 8 ohms.

m A, 3 ohms; B, 12 ohms; C, 7 ohms; D, 25 ohms.

n A, $8\frac{8}{9}$ ohms; B, $8\frac{1}{8}$ ohms; C, 10 ohms.

o A, 3 ohms; B, 4 ohms; C, 2 ohms.

p $I_{R1} = 7.519$ amperes; $I_{R2} = 3.214$ amperes; $I_{R3} = 1.176$ amperes; $I_{R4} = I_{R7} = I_{R8} = 0.392$ ampere; $I_{R6} = I_{R9} = 4.782$ amperes; $I_{R5} = I_{R9} = 1.568$ amperes, $I_{R11} = 12.301$ amperes.

q $R = 239.1688$ ohms.

r $I = .457$ ampere.

Paragraph 204.

a(1) 94 ohms; (2) 134 ohms; (3) current leads voltage because capacitive reactance exceeds inductive reactance; (4) 104 ohms; (5) 5 amperes.

b. 9.425 ohms.

c. 63,662 ohms (approx).

d. 80 ohms.

e. 455 kc.

f(1) 30 amperes; (2) 180 volts; (3) 480 volts; (4) 240 volts.

g(1) 3 amperes; (2) 4 amperes; (3) 6 amperes; (4) 83 ohms; (5) 34° ; (6) 896.4 watts; (7) 1080 watts, or 1.08 kw

Paragraph 208.

a. 39.8 to 1.

b. $-.744$ db per mile.

c. $+10.8$ db.

d. 25.1 to 1.

Paragraph 217.

a. 5%.

b. 77.7%

c. 15%.

d. 12,600 ohms.

e. 86.7%.

f. 2,200 watts.

g. 1.58 amperes.

INDEX

	Paragraph	Page		Paragraph	Page
Absolute value of number.....	35	17	Algebra—Continued		
Ac circuits, solving:			Factors—Continued		
Applying vectors and trigonometry.....	194	139	Square root of monomial.....	54	25
With capacitance and resistance.....	200	148	Trinomial.....	59	30
With inductance and resistance.....	199	143	Two cubes.....	60	31
With inductance, capacitance, and resistance.....	201	154	Understanding.....	51	25
Acute angle.....	129b(3)	77	Imaginary numbers.....	77	43
Adding same quantity to both sides of equation.....	81a	28	Polynomials:		
Addition.....	6	4	Division.....	49	23
Algebraic.....	37	18	Multiplication.....	48	23
Expressions.....	43	21	Positive and negative numbers:		
In solution of simultaneous equations.....	84	50	Absolute value.....	35	17
Logarithms.....	20	10	Addition.....	37	18
Monomials.....	43	21	Application.....	34	17
Positive and negative numbers.....	37	18	Division.....	40	19
Vectors, method:			Graphical representation.....	36	18
Parallelogram.....	179	123	Multiplication.....	39	19
Polygon.....	180	124	Need.....	33	17
Rectangular components.....	181	125	Order of signs.....	41	20
With angles.....	152	94	Review problems.....	42	20
Algebra.....	26	16	Signed numbers.....	32	17
Addition.....	28c	16	Subtraction.....	38	19
Coefficients.....	29	16	Quadratic equations:		
Complex numbers.....	78	45	Character of roots.....	93	56
Division.....	28b	16	General.....	91	54
Equations:			Pure.....	88	53
Review problems.....	86	52	Solution:		
Simultaneous.....	84	50	Completing square.....	90	54
Solving formulas.....	85	51	Factoring.....	89	53
More difficult.....	82	48	Quadratic formula.....	92	55
Simple.....	81	48	Signs of operation.....	28	16
Written.....	88	49	Subscripts.....	30	17
Exponents and radicals:			Subtraction.....	28c	16
Addition.....	73	39	Algebraic:		
Division.....	75	41	Addition.....	37	18
Fractional.....	71	38	Expressions:		
Multiplication.....	74	40	Addition.....	43	21
Negative.....	46	22	Division.....	44	21
Review problems.....	78	45	Multiplication.....	44	21
Simplification.....	72	38	Subtraction.....	43	21
Subtraction.....	73	39	Fractions:		
Zero.....	47	22	Addition.....	67	35
Expressions and terms.....	27	16	Changing form.....	64	33
Factors:			Changing signs.....	63	32
Cube root of monomial.....	55	26	Division.....	68	36
Difference of two squares.....	58	29	Finding LCD.....	66	34
Monomial.....	53	25	Multiplication.....	68	36
Polynomial.....	56	26	Reducing to lowest terms.....	65	33
Positive integers.....	52	25	Review problems.....	69	37
Square of binomial.....	57	28	Functions, raising to powers.....	45	22
			Operations, fundamental.....	43-50	21
			Alternating currents and voltages represented by vectors.....	194	139

	Paragraph	Page		Paragraph	Page
Altitude of triangle.....	131c	80	Binary numbers—Continued		
Angles:			Background.....	221	177
Acute.....	129b(3)	77	Conversion:		
Bisecting.....	130f	79	Binary numbers to demical		
Calculations with.....	152	94	numbers:		
Complementary.....	129b(5)	77	Nontabular.....	226	179
Trigonometric functions.....	144	87	Tabular.....	225	179
Expressed in radians.....	175	121	Decimal fractions to binary	233	182
Finding:			fractions.		
Corresponding to a trigono-			Decimal numbers to binary		
metric function:			numbers:		
Function given.....	156a	97	Nontabular.....	224	178
Function not given.....	156b	97	Tabular.....	223	178
Radian system of measure-	174	120	Comparison between decimal and	222	177
ment.			binary system.		
Three sides of triangle given	169	114	Division.....	231	181
Obtuse.....	129b(4)	77	Fractions.....	232	182
Of any triangle, law.....	132	80	Mixed.....	234	183
Of elevation and depression.....	163	105	Multiplication.....	230	181
Reproducing.....	130a	78	Scope.....	221	177
Straight.....	129b(2)	77	Subtraction.....	228	180
Supplementary.....	129b(6)	77	Binomial.....	27c	16
Angular measurement, natural, cir-	174	120	Bisecting:		
cular, or radian system.			Angle.....	130f	79
Antecedent.....	14	8	Straight line segment.....	130b	78
Antilogarithms:			Calculation, mental:		
Interpolation.....	119	70	Finding square root.....	24a	12
Reading.....	118	70	Calculations with angles.....	152	94
Application:			Capacitive reactance.....	197	141
Logarithms.....	112	68	Characteristic, logarithms.....	115	68
In electrical problems.....	205	162	Chord of circle.....	138	83
Mathematics to electrical	182-220	126	Circles.....	138	83
problems.			Arc.....	138	83
Simultaneous equations.....	84	50	Area.....	140	84
Trigonometry.....	143b	87	Circumference.....	139	84
In solving ac circuits.....	194	139	Concentric.....	138	83
Vectors in solving ac circuits.....	194	139	Circular system of angular measure-	174	120
Arc of circle.....	138e	83	ment.		
Area:			Circumference of any circle.....	138b, 139	83, 84
Circle.....	140	84	Coefficient.....	29	16
Parallelogram.....	136	82	Cologarithms.....	125	74
Ring.....	141	84	Common logarithms.....	114a	68
Trapezoid.....	137	82	Complementary angles, functions...	146	89
Triangle.....	131d, 134,	80, 82,	Concentric circles.....	138j	84
	170-172	115	Conductance.....	213	167
Arithmetic:			Consequent.....	14	8
Percentage.....	3-12	4	Constructing:		
Powers and roots.....	22-25	12	Acute angle of right triangle, one	149	91
Proportion.....	16-21	8	trigonometric function known.		
Ratio.....	13-15	8	Perpendicular to straight line:		
Base:			At given point on line...	130c	78
Of triangle.....	131b	80	From point not on line...	130d	78
Percentage.....	3	4	Construction, geometric, basic	130	78
Finding.....	10	6	principles.		
Powers.....	22	12	Contact, point of.....	138i	83
Basic principles of geometric con-	130	78	Conversion:		
struction.			Decimal to percent.....	4	4
Binary numbers:			Factors.....	app. II	188
Addition.....	227	179	Fraction to percent.....	5	4
Complementary.....	229	180	Large unit to smaller unit...	app. II	188

	Paragraph	Page
Conversion—Continued		
Percent:		
To decimal.....	6	4
To fraction.....	7	4
Small unit to larger unit.....	app. II	188
Converting:		
Decibels to power ratio.....	207	162
Fractions to percent.....	5	4
Percent:		
To decimals.....	6	4
To fractions.....	7	4
Power ratio to decibels.....	206	162
Cosines, law of.....	167	110
Decibels.....	205	162
Converting:		
From power ratio.....	206	162
To power ratio.....	207	162
Decimals, units of measurement.....	app. II	188
Definition:		
Acute angle.....	129b(3)	77
Algebra.....	26	16
Altitude, triangle.....	131c	80
Angles.....	129b	77
Arc of circle.....	138	83
Area, triangle.....	131d	80
Base:		
Percentage.....	3c(1)	4
Powers.....	22	12
Triangle.....	131b	80
Binomial.....	27c	16
Characteristic.....	115	68
Chord.....	138c	83
Circle.....	138a	83
Circumference.....	138b	83
Coefficient.....	29	16
Common logarithms.....	113, 114	68
Complementary angle.....	129b(5)	77
Consequent.....	14	8
Diameter.....	138d	84
Equilateral triangle.....	131a(1)	79
Exponent.....	22	12
Extremes.....	16	8
Formula.....	85a	51
Hypotenuse.....	131c	80
Lines.....	129a	77
Logarithms.....	113	68
Mantissa.....	151	68
Means.....	16	8
Monomial.....	27c	16
Natural logarithms.....	114b	68
Oblique triangle.....	131a(3)	79
Obtuse angle.....	129b(4)	77
Parallelogram.....	135a	82
Percentage.....	3a, 3c(3)	4
Plane vectors.....	177	123
Point of contact or tangency.....	138i	83
Quadrilateral.....	135	82
Radian.....	174a	120
Radius.....	138d	83
Rate.....	3c(2)	4
Ratio.....	13	8

Definition—Continued

	Paragraph	Page
Rectangle.....	135c	82
Resultant, vectors.....	177	123
Right triangle.....	131a(2)	79
Sector.....	138k	83
Segment.....	138g	83
Simultaneous equations.....	84a	50
Square.....	135d	82
Straight angle.....	129b(2)	77
Subscripts.....	30	17
Supplementary angle.....	129b(6)	77
Tangent.....	138i	83
Trapezoid.....	135d	82
Triangle.....	161a	103
Trigonometry.....	143a	87
Trinomial.....	27c	16
Vector quantity.....	177	123
Vectors, plane.....	177	123
Degrees:		
Changing to radians.....	175b	121
Relations to radians.....	175	121
Depression, angles.....	163	105
Diameter of circle.....	138b	83
Dividing:		
Both sides of equation by same quantity.....	81d	48
Polynomial:		
By monomial.....	49a	23
By polynomial.....	49b	24
Division:		
Monomials.....	44b	24
Numbers:		
Positive and negative.....	40	19
With like signs.....	40a	19
With powers of ten.....	109	66
With unlike signs.....	40b	19
Polynomials.....	49	23
Positive and negative numbers.....	40	19
Signs of operation, algebra ..	28b	16
With angles.....	152d	95
Efficiency.....	209	164
Electrical quantities combined with metric prefixes.....	app. II	188
Electric circuit:		
Parallel.....	183	127
Series.....	182	126
Series-parallel.....	182	126
Solving:		
Ac:		
Having resistance and capacitance.....	200	148
Having resistance and inductance.....	199	143
Having resistance, inductance, and capacitance.....	201	154
Ohm's law applied to....	195	141
Using vectors and trigonometry.....	194	139

	Paragraph	Page
Electric circuit—Continued		
Solving—Continued		
Dc:		
Ohm's law applied.....	186	128
Parallel.....	188	129
Series.....	187	128
Series-parallel.....	189	130
Using Kirchoff's law....	190	132
Elevation and depression, angles.....	163	105
Equations	80	48
Quadratic	87	53
Character of roots.....	93	56
General equation.....	91	54
Pure equation.....	88	53
Solving:		
By completing square....	90	54
By factoring.....	89	53
By quadratic formula....	92	55
Simultaneous.....	84	50
Solving:		
Formulas.....	85	51
Difficult.....	82	48
Simple.....	81	48
With fractions.....	82b	49
Written.....	83	49
Equilateral triangle.....	131a (1)	79
Equivalent values, conversion factors	app. II	188
Error, percentage:		
Limit.....	11b	6
Relative.....	11a	6
Exponents	22	12
Negative.....	23, 46	12, 22
Zero.....	47	22
Expressing:		
Accuracy of measurement in percent.	11	6
Numbers in scientific notation....	104	65
Ratio.....	14	8
Expressions and terms, algebraic	27	16
Extracting roots of numbers by logarithms.	124	73
Extremes	16	8
Factors, conversion	app. II	188
Finding:		
Angle:		
Corresponding to a trigonometric function:		
Function found in table	156a	97
Function not found in table.	156b	97
Radar system of measurement.	174	120
Three sides given.....	169	114
Area of triangle:		
Three sides given.....	172	118
Two angles and included side given.	171	116
Two sides and included angle given.	170	115
Base, percentage.....	10	6

	Paragraph	Page
Finding—Continued		
Center of circle.....	130e	79
Function of angle, trigonometric:		
Angle given.....	155a	96
Angle not given.....	155b	96
Length of arc, radians.....	174	120
Logarithms.....	116	69
Midpoint of straight line segment	130b	78
Percentage.....	8	5
Power of number by logarithms ..	123	73
Rate, percentage.....	9	5
Root of number by logarithms ..	124	73
Square root:		
Mathematical process	22a	12
Mental calculation.....	22b	12
Formulas.....	85a	51
Solving.....	85b	51
Fractions in equations.....	82b	49
Functions:		
Algebraic, raising to powers ..	45	22
Trigonometric:		
Of angles:		
Complementary.....	146	89
Finding.....	155	96
Solving for:		
One side and one function given.	148	90
Unknown.....	147	89
Geometric construction, basic principles.	130	78
Geometry, plane.....	129	77
Area:		
Circle.....	140	84
Parallelogram.....	136	82
Ring.....	141	84
Trapezoid.....	137	82
Triangle.....	134	82
Circles.....	138	83
Circumference of circle.....	139	84
Construction, basic principles ..	130	78
Law of angles, any triangle.....	132	80
Law of right triangle.....	133	80
Quadrilaterals.....	135	82
Review problems.....	142	85
Triangles.....	131	79
Graphical representation, positive and negative numbers.	39	19
Graphical solution, simultaneous equations.	101	61
Graphs:		
Application to electrical laws ..	219	173
Basic characteristics:		
Coordinates, rectangular	97	58
Number line.....	96	58
Plotting points.....	98	59
Review problems.....	99	59
Engineering, constructing, and reading.	218	172
Of equations:		
Linear.....	100	59
Quadratic.....	102	61

	Paragraph	Page		Paragraph	Page
Hypotenuse of right triangle.....	131e, 133	80	Monomial.....	27c	16
Impedance.....	198	142	Multiplication:		
Inductance, energy stored in.....	214	168	Logarithms.....	121	72
Inductive reactance.....	196	141	Monomials.....	42a	20
Interpolation:			Numbers:		
Antilogarithmic.....	119	70	Positive and negative.....	39	19
Logarithmic.....	117	69	With like signs.....	39a	19
Trigonometric.....	154	96	With powers of ten.....	108	66
Inverse proportion.....	20	10	With unlike signs.....	39b	19
Laws:			Polynomials.....	48	23
Angles of any triangle.....	132	80	Positive and negative numbers... ..	39	19
Area of any triangle.....	134	82	Signs of operation, algebra.....	28a	16
Cosines.....	167	110	With angles.....	152	94
Kirchoff's.....	190	132	Multiplying:		
Ohm's:			Both sides of equation by same	81c	48
Ac circuits.....	195	141	quantity.		
Dc circuits.....	188	129	Polynomial:		
Right triangle.....	133	80	By monomial.....	48a	23
Sines.....	166	107	By polynomial.....	48b	23
Tangents.....	168	112	Natural:		
Trigonometric.....	165-173	107	Logarithms.....	114b	68
Limit of error, percentage.....	11b	6	System of angular measurement	174	120
Lines.....	129a	77	Negative:		
Line, straight:			Exponents.....	46	22
Constructing perpendicular:			Numbers.....	32	17
At given point on line.....	130c	78	Addition.....	37b	18
From point not on line.....	130d	78	Application.....	34	17
Segment, finding midpoint.....	130b	78	Division.....	40	19
Literal algebraic expression.....	27a	16	Multiplication.....	39	19
Logarithms.....	112	68	Need.....	33	17
Addition and subtraction.....	120	71	Numbers:		
Application:			Absolute value.....	35	17
To computation.....	112	68	Division:		
To electrical problems.....	205	162	Positive and negative.....	40	19
Common.....	113, 114a	68	With like signs.....	40a	19
Computation.....	126	75	With powers of ten.....	109	66
Division.....	122	72	With unlike signs.....	40b	19
Extracting roots.....	124	73	Expressing in scientific notation..	106	65
Finding.....	116	69	Extracting roots by logarithms..	124	73
Interpolation.....	117	69	Multiplication:		
Multiplication.....	121	72	Positive and negative.....	39	19
Natural.....	114b	68	With like signs.....	39a	19
Parts.....	115	68	With powers of ten.....	108	66
Raising numbers to powers.....	123	73	With unlike signs.....	39b	19
Mantissa.....	115	68	Raising to powers by logarithms	123	73
Mathematical method, finding square	24b	12	Numerical:		
root.			Algebraic expressions.....	27a	16
Mathematics and electronics.....	2	3	Values of trigonometric func-	150	92
Meaning of percent.....	3c	4	tions.		
Means.....	16	8	Oblique triangle.....	131a(3)	80
Measurement, angular, natural,	174	120	Area:		
circular, or radian system.			Three sides given.....	169	114
Mental calculation, finding square	24a	12	Two angles and included side	171	116
root.			given.		
Methods of solution, simultaneous	84	50	Two sides and included angle	170	115
equations.			given.		
Metric:			Solving.....	165	107
Prefixes.....	app. II	188	For angle, three sides given..	169	114
System.....	app. II	188	Law of:		
			Cosines.....	167	110

	Paragraph	Page		Paragraph	Page
Oblique triangle—Continued			Polynomials—Continued		
Law of—Continued			Multiplying:		
Sines	166	107	By a monomial.....	48a	23
Two angles and one side given.	166a	107	By a polynomial.....	49b	24
Two sides and one angle given.	166b	109	Proportion:		
Tangents	168	112	Definition.....	16	8
Obtaining value of ratio	15	8	Inverse.....	20	10
Ohm's law:			Rules.....	17	8
Ac circuits.....	195	141	Solving for unknown term.....	18	9
Dc circuits.....	186	128	Stating ratios for problems in proportion.	19	9
Order of signs	41	20	Understanding.....	16	8
Overload, percent	210	164	Positive and negative numbers	32	17
Parallel circuits, solving	183	127	Addition.....	87b	18
Ac:			Application.....	84	17
Having resistance and capacitance.	200b	151	Division.....	40	19
Having resistance and inductance.	199b	145	Graphical representation.....	86	18
Having resistance, inductance, and capacitance.	201b	157	Multiplication.....	89	19
Dc	188	129	Subtraction.....	88	19
Using Kirchhoff's law.....	190	132	Positive numbers:		
Using Ohm's law.....	186	128	Addition.....	37a	18
Parallelogram	135a	82	Division.....	40	19
Area.....	136	82	Multiplication.....	39	19
Parentheses, removing	48	23	Subtraction.....	38a	19
Parts of logarithms	115	68	Power:		
Percentage	3a, c(3)	4	Ac.....	203	160
Accuracy.....	11	6	Dc.....	191	134
Conversion:			Power ratio, converting:		
Decimal to percent.....	4	4	From decibels.....	207	162
Fraction to percent.....	5	4	To decibels.....	206	162
Percent to demical.....	6	4	Powers	45	22
Percent to fraction.....	7	4	Negative.....	46	22
Finding	8a	5	Of ten:		
Base.....	10	6	Addition.....	107	65
Over 100 percent.....	8b	5	Division of numbers.....	109	66
Rate.....	9	5	Multiplication of numbers.....	108	66
Under 1 percent.....	8c	5	Power or root.....	110	66
Symbol	8b	4	Scientific notation.....	106	65
Perpendicular	129b(1)	77	Subtraction.....	107	65
Pi	188k	84	Table.....	105	65
Plane geomery (see also, geometry, plane).	128-142	77	Zero.....	47	22
Plane vectors	177	123	Power transfer, maximum	216	170
Addition:			Purpose and scope	1	3
Parallelogram method.....	179	123	Pythagorean theorem	133	80
Polygon method.....	180	124	Quadrants	97	58
Rectangular components method.	181	125	Quadrilaterals	135	82
Application in solving ac circuits	194	139	Radians:		
Notation	178	123	Application.....	174a	120
Point of tangency or contact	138i	83	Finding:		
Polynomials:			Any angle.....	174b	120
Dividing:			Length of arc.....	174c	120
By a monomial.....	49a	23	Relation to degrees.....	175	121
By a polynomial.....	49b	24	Radian system of angular measurement.	174	120
			Radical sign	31	17
			Radius of circle	138d	83
			Raising to powers:		
			Algebraic functions.....	45	22
			Numbers, by logarithms.....	123	73

	Paragraph	Page		Paragraph	Page
Rate, percentage.....	3	4	Right triangle—Continued		
Finding.....	9	5	Hypotenuse.....	131c, 133	80
Ratio.....	13	8	Law.....	133	80
Expressing.....	14	8	Solving:		
Obtaining value.....	15	8	Acute angle and adjacent	158	100
Stating for problems in	19	9	side given.		
proportion.			Acute angle and hypotenuse	157	98
Understanding.....	13	8	given.		
Reactance:			For sides and trigonometric	148	90
Capacitive.....	197	141	function, one side and one		
Inductive.....	196	141	function given.		
Reading antilogarithms.....	112	68	45° -45° -90°, one side given.	162	104
Rectangle.....	135c	82	Hypotenuse and one side	159	101
Relation between degrees and radians	175	121	given.		
Relative error, percentage.....	11a	6	One side and angles given ...	151	93
Removing parentheses.....	48	23	30° -60° -90°, one side given.	161	103
Representing alternating currents	194	139	Two sides given.....	160	102
and voltages with vectors.			Ring, area.....	141	84
Reproducing angles.....	130a	78	Root of equation.....	80	48
Resonance.....	202	159	Roots:		
Resultant, vectors.....	175	121	Of monomial:		
Review problems:			Cube.....	55	26
Ac electricity.....	204	160	Square.....	54	25
Algebra:			Tables.....	app. III	200
Equations.....	86	52	Rules of proportion.....	17	8
Exponents and radicals	76	42	Scientific notation.....	106	65
Factoring.....	61	32	Scope.....	1	3
Fractions.....	69	37	Sector of circle.....	138A	83
Fundamental operations	50	24	Segment of circle.....	138g	83
Positive and negative	42	20	Series circuit.....	182	126
numbers.			Solving:		
Imaginary and complex	79	47	Ac.....	198a,	142,
numbers.			200a, 201a	148, 154	
Quadratic equation.....	94	57	Dc.....	187	123
Dc electricity.....	192	134	Series-parallel circuit.....	184	127
Graphical representation and	220	175	Solving.....	189	130
solution of electrical problems.			Signed numbers.....	32	17
Graphs.....	103	64	Signs:		
Logarithms.....	127	76	Of operation, algebra.....	28	16
Miscellaneous electrical problems	217	171	Order.....	41	20
Percentage.....	12	6	Simple equations, solving.....	81	48
Plane geometry.....	142	85	Simultaneous equations.....	84	50
Powers of ten.....	111	67	Methods of solution:		
Proportion.....	21	11	Addition.....	84b (2)	50
Radians.....	176	122	Substitution.....	84b (1)	50
Square root.....	25	14	Subtraction.....	84b (3)	50
Transmission problems.....	208	163	Sines, law of:		
Trigonometry:			Two angles and one side given ...	166a	107
Basic.....	153	95	Two sides and one angle given ...	166b	109
Laws.....	173	119	Solving:		
Natural functions.....	164	105	Circuits:		
Right triangle.....	131a (2)	79	Ac:		
Constructing acute angle, one	149	91	Using Ohm's law.....	195	141
trigonometric function known.			Using vectors and	194	139
Finding area:			trigonometry.		
Three sides given.....	172	118	Dc:		
Two angles and included side	171	116	Using Kirchhoff's laws	190	132
given.			Using Ohm's law.....	186	123
Two sides and included	170	115	Parallel.....	183	127
angle given.			Series.....	182	126
			Series-parallel.....	184	127

	Paragraph	Page
Solving—Continued		
Equations:		
More difficult.....	82	48
Simultaneous.....	84	50
Simple.....	81	48
With fractions.....	82b	49
Written.....	83	49
Formulas.....	85	51
For unknown:		
Term, proportion.....	18	9
Trigonometric functions.....	147	89
Oblique triangle.....	165	107
For angle, three sides given..	169	114
Law of:		
Cosines.....	167	110
Sines.....	166	107
Tangents.....	168	112
Right triangle:		
Acute angle and adjacent side given.	158	100
Acute angle and hypotenuse given.	157	98
For sides and trigonometric functions, side and one function given.	148	90
45° -45° -90°, one side given.	162	104
Hypotenuse and one side given.	159	101
One side and angles given ...	151	98
30° -60° -90°, one side given	161	103
Two sides given.....	160	102
Simple equations.....	81	48
Square.....	135c	82
Square root:		
Finding:		
By mathematical process ...	24b	12
By mental calculation.....	24a	12
Of a monomial.....	54	25
Stating ratios for problems in proportion.	19	9
Straight line:		
Constructing perpendicular to:		
At given point on line.....	130c	78
From point not on line.....	130d	78
Segment, finding midpoint.....	130b	78
Subscripts.....	30	17
Subtracting same quantity from both sides of equation.	43b	21
Subtraction:		
Algebraic expressions.....	44	21
Logarithms.....	120	71
Monomials.....	43	21
Positive and negative numbers ..	38	19
Signs of operation, algebra.....	28c	16
Solving simultaneous equations ..	84b(3)	50
With angles.....	152b	94
Substitution, solving simultaneous equations.	84b(1)	50
Systems:		
Of angular measurement.....	174	120
Units of measurement.....	app. II	188

	Paragraph	Page
Systems—Continued		
Table, powers of ten.....	105	65
Tables, trigonometric, and their uses.	154, app. III	96, 200
Tangent of circle.....	138i	83
Tangents, law of.....	168	112
Terms, algebraic.....	27	16
Tolerances.....	211	164
Transformations, delta-wye.....	215	168
Transformer turns ratios.....	212	165
Transmission unit.....	205	162
Transposition, solving equations.....	82a	48
Trapezoid.....	135a	82
Area.....	137	82
Triangle:		
Altitude.....	131c	80
Area.....	131d	80
Base.....	131b	80
Equilateral.....	131a(1)	79
Oblique.....	131a(3)	80
Area:		
Three sides given.....	172	118
Two angles and included side given.	171	116
Two sides and included angle given.	170	115
Solving.....	165	107
For angle, three sides given.	169	114
Law of:		
Cosines.....	167	110
Sines.....	166	107
Tangents.....	168	112
Right.....	131a(2)	79
Constructing acute angle, one trigonometric function known.	149	91
Finding areas:		
Three sides given.....	172	118
Two angles and included side given.	171	116
Two sides and included angle given.	170	115
Hypotenuse.....	133	80
Solving:		
Acute angle and adjacent side given.	158	100
Acute angle and hypotenuse given.	157	98
For sides and trigonometric functions, one side and one function given.	148	90
45° -45° -90°, one side given.	162	104
Hypotenuse and one side given.	159	101
One side and angles given	151	93
30° -60° -90°, one side given.	161	103
Two sides given.....	160	102

	Paragraph	Page		Paragraph	Page
Triangles	131	79	Trigonometry:		
Laws:			Application	143b	87
Angles	132	80	In solving ac circuits	194	139
Area	134	82	Definition	143a	87
Right	133	80	Trinomial	27c	16
Trigonometric:			Types of logarithms	114	68
Functions	144	87	Understanding:		
Natural	154-164	96	Proportion	16	8
Numerical values	150	92	Ratio	13	8
Of 45°	151b	93	Units of measurement, systems	app. II	188
Of 30° and 60°	151c	93	Unit, transmission	205	162
Of angles:			Unknown trigonometric functions, solving for.	147	89
Complementary	146	89	Vector:-		
Finding	155	96	Quantity	177b	123
Reciprocal relations	145	89	Representation of alternating currents and voltages.	194	139
Solving for:			Vectors, plane	177	123
One side and one function given.	148	90	Addition methods:		
Unknown	147	89	Parallelogram	179	123
The right triangle	144b	87	Polygon	180	124
Unknown, solving for	147	89	Rectangular components	181	125
Laws:			Application in solving ac circuits	194	139
Of cosines	167	110	Notation	178	123
Of sines	166	107	Written equations	83	49
Of tangents	168	112	Zero exponents	47	22
Tables and their uses	154	96			
Theory, basic	148-153	87			

BY ORDER OF THE SECRETARY OF THE ARMY:

G. H. DECKER,
General, United States Army,
Chief of Staff.

Official:

R. V. LEE,
Major General, United States Army,
The Adjutant General.

Distribution:

Active Army:

DASA (6)
USASA (2)
CNGB (1)
Tech Stf, DA (1)
 except CSigO (15)
Tech Stf Bd (1)
USCONARC (4)
USAARTYBD (1)
USAARMBD (2)
USAIB (1)
USARADB (2)
USAABELCTBD (1)
USAAVNBD (1)
USAATBD (1)
ARADCOM (2)
ARADCOM Rgn (2)
OS Maj Comd (2)
OS Base Comd (2)
LOGCOMD (2)
MDW (1)
Armies (2)
Corps (5)
Div (2)
Ft Monmouth (75)
USATC AD (2)
USATC Armor (2)
USATC Engr (2)
USATC FA (2)
USATC Inf (2)
Svc Colleges (2)
Br Svc Sch (2)
GENDEP (2) except
 Atlanta GENDEP (No. 1e)
Sig Sec, GENDEP (5)
Sig Dep (12)
USASCS (412)

AFIP (1)
WRAMC (1)
AFSSC (1)
USAEPG (2)
APG (5)
EMC (1)
USACA (2)
USASEA (1)
USA Caribbean Sig Agcy (1)
USA Sig_Mal Spt Agcy (12)
USASSA (20)
USASSAMRO (1)
Army Pictorial Cen (2)
USAOMC (3)
USA Trans Tml Comd (1)
Army Tml (1)
POE (1)
OSA (1)
AMS (1)
Sig Fld Maint Shops (2)
JBUSMC (2)
Units org under fol TOE:
 Two copies to each unit unless
 otherwise indicated:
 11-7
 11-16
 11-57
 11-98
 11-117
 11-155
 11-500 (AA-AE) (4)
 11-557
 11-587
 11-592
 11-597

NG: State AG (3); units—same as Active Army except allowance is one copy to each unit.

USAR: None.

For explanation of abbreviations used, see AR 320-50.

UX 002 247 182

028745 - 000